

Class- II Subject- English (Paper-1)

Date - 09-09-2021

Full Marks- 40

* Required

1. Email *

2. Name *

3. Section *

Check all that apply.

A

B

C

D

E

F

G

4. Roll No. *

CHOOSE THE CORRECT ANSWERS:

5. 1. What is the past form of reach ? *

1 point

Mark only one oval.

- a. reaches
- b. riched
- c. reached
- d. reaching

6. 2. My friends Rohit and Rajan _____ a pet dog : *

1 point

Mark only one oval.

- a. has
- b. had
- c. have
- d. was

7. 3. The dog is sleeping in _____ kennel : *

1 point

Mark only one oval.

- a. his
- b. her
- c. my
- d. its

8. 4. Plural of ' daisy' is : *

1 point

Mark only one oval.

a. daisies

b. daisys

c. dasyis

d. daiseis

9. 5. Amit _____ not in school yesterday afternoon. *

1 point

Mark only one oval.

a. were

b. is

c. was

d. are

10. 6. _____ eagle carried away a hen from our house yesterday. *

1 point

Mark only one oval.

a. the

b. an

c. a

d. none of these

11. 7. My mother _____ tasty food for me. *

1 point

Mark only one oval.

- a. played
- b. cooked
- c. danced
- d. none of these

12. 8. There are _____ players in a cricket team : *

1 point

Mark only one oval.

- a. few
- b. more
- c. eleven
- d. much

13. 9. Rima and Rahul are friends. _____ are going to play together. *

1 point

Mark only one oval.

- a. they
- b. we
- c. I
- d. you

14. 10. Choose the correct sentence : *

1 point

Mark only one oval.

- a. Boating some people are
- b. Some people are boating .
- c. Boating are some people
- d. people are boating some.

15. 11. We went to watch _____ animation film : *

1 point

Mark only one oval.

- a. a
- b. an
- c. both
- d. none of these

16. 12. Plural of 'peach' is : *

1 point

Mark only one oval.

- a. peachs
- b. peaches
- c. peachies
- d. All

17. 13. My pet dog Tommy _____ to sleep sometimes. *

1 point

Mark only one oval.

- a. pretense
- b. pretens
- c. pretends
- d. pretend

18. 14. My parrot _____ green feathers. *

1 point

Mark only one oval.

- a. have
- b. has
- c. is
- d. are

19. 15. The dog is _____ it's tail . *

1 point

Mark only one oval.

- a. wagging
- b. playing
- c. running
- d. all of the above

20. 16. The special letters a, e, i, o, u are called : *

1 point

Mark only one oval.

- a. alphabets
- b. letters
- c. consonants
- d. vowels

21. 17. A _____ is a group of words that has complete meaning. *

1 point

Mark only one oval.

- a. noun
- b. pronoun
- c. sentence
- d. vowels

QUESTION 18 – 24 Refers to LR book:

22. 18. There were a lot of _____ in the city . *

1 point

Mark only one oval.

- a. cats
- b. rats
- c. cows
- d. milk

23. 19. Christine F Fletcher is the poet of : *

1 point

Mark only one oval.

- a. The Falling Star
- b. Dear Summer
- c. If You Should Meet a Crocodile
- d. Clever Tenali

24. 20. The speaker loves to wear : *

1 point

Mark only one oval.

- a. shirt
- b. trouser
- c. shorts
- d. frock

25. 21. Opposite of the word 'found' is: *

1 point

Mark only one oval.

- a. find
- b. lost
- c. both
- d. none of these

26. 22. The book looked _____ with an attractive cover : *

1 point

Mark only one oval.

- a. dull
- b. bad
- c. great
- d. ugly

27. 23. Choose the correct word for the jumbled letter GNIK : *

1 point

Mark only one oval.

- a. ink
- b. nik
- c. king
- d. gink

28. 24. Nile is a river in : *

1 point

Mark only one oval.

- a. South Africa
- b. North Africa
- c. East Africa
- d. West Africa

29. 25. Describing words are called _____ . *

1 point

Mark only one oval.

- a. doing words
- b. adjectives
- c. verb
- d. none of these

30. 26. Kashmir is _____ than Mumbai . *

1 point

Mark only one oval.

- a. warmer
- b. cooler
- c. cool
- d. warm

31. 27. A/ AN/ The are called : *

1 point

Mark only one oval.

- a. sentence
- b. letters
- c. articles
- d. alphabets

32. 28. Last week I _____ in Kolkata. *

1 point

Mark only one oval.

- a. am
- b. are
- c. was
- d. were

33. 29. Grandpa's doctor told him to _____ rest. *

1 point

Mark only one oval.

- a. take
- b. save
- c. have
- d. all of the above

34. 30. Another word for ' mistake' is : *

1 point

Mark only one oval.

- a. right
- b. correct
- c. true
- d. error

35. 31. When the crow _____ it is morning. *

1 point

Mark only one oval.

- a. bleats
- b. hiss
- c. bark
- d. caws

36. 32. The meaning of 'dawn' is : *

1 point

Mark only one oval.

- a. evening
- b. afternoon
- c. early morning
- d. night

37. 33. _____ have the best cricket team. *

1 point

Mark only one oval.

- a. he
- b. she
- c. It
- d. we

38. 34. The flower is pretty. It _____ sweet smell. *

1 point

Mark only one oval.

- a. has
- b. have
- c. had
- d. none of these

39. 35. _____ is a great dancer. *

1 point

Mark only one oval.

- a. it
- b. she
- c. they
- d. we

40. 36. I saw a star _____ down the sky. *

1 point

Mark only one oval.

- a. blinding
- b. glide
- c. slide
- d. come

41. 37. The Toad _____ back to the water jar. *

1 point

Mark only one oval.

- a. climbed
- b. hopped
- c. popped
- d. cried

42. 38. The plural of was is : *

1 point

Mark only one oval.

- a. is
- b. are
- c. am
- d. were

43. 39. The word flower will make compound word with : *

1 point

Mark only one oval.

- a. table
- b. pot
- c. room
- d. brow

44. 40. My mother will _____ a delicious cake for me: *

1 point

Mark only one oval.

- a. run
 - b. bake
 - c. eat
 - d. none of these
-

This content is neither created nor endorsed by Google.

Google Forms



DELHI PUBLIC SCHOOL

SAIL Township, Ranchi

First Online Semester

(Session-2021-22)

Class – II Subject- English (Subjective)

FM.- 40

I. Write the meaning of given words:

(1x 6=6)

1. dined - _____

2. good only - _____

3. stroke - _____

4. piping - _____

5. goggles - _____

6. collaboration - _____

II. Give one word answer for the following:

(1x5=5)

Q1. Which poem has been written by Kenn Nesbitt?

Ans. _____

Q2. What is the other name for similar words?

Ans. _____

Q3. Make a sentence with the phrase 'lonely and abandoned'.

Ans. _____

Q4. Who is the poet of 'The Falling Star'?

Ans. _____

Q5. The clever Tenali Raman was minister to which king?

Ans. _____

III. Make sentences :

(1x4=4)

1. promise - 2. neglect - 3. stout - 4. nibbled -

IV. Answer the following questions:

(2x6=12)

1. What would the speaker be not able to do if summers were not there?

2. How did the king try to solve the rat problem?

3. Where can you meet a crocodile?

4. How did the Toad annoy the Grasshopper?

5. How did the story book look?

6. Why, do you think, a star is too quick to hold?

V. Write a paragraph on: (Choose any one)

(4x1=4)

a) Friendship

b) Health is Wealth

c) The Rainy Season

VI. Write a formal letter (application) to the medical officer of your town asking him to implement preventive measures for Covid 19 in your colony.

(4x1=4)

VII. Read the given unseen passage and answer the following questions.
(1x5=5)

Pushing and Pulling

We move things by pushing them or by pulling them. Heavy things are hard to move. Sometimes when we want to move things we push them. When we push things, we move them away from us. Wheels make it easier to push heavy things. Engines help to push big and heavy things. Sometimes when we want to move things we pull them. When we pull things, we move them towards us. Wheels make it easier to pull heavy things. A cart has wheels. The wheels make it easier to pull the cart. Engines help to pull big and heavy things. Trucks have engines and wheels

Answer each questions:

Q1. How we move the things?

Q2. When we push things, we move them away from us.

- a. True b. False**

Q3. What make it easier to push heavy things?

Q4. What does happen when we pull things?

Q5. _____ helps to pull big and heavy things.

- a. Computer b. Engine c. Television**

Class- II Subject- Hindi (Paper-1)

Date - 11-09-2021

Full Marks- 40

*** Required**

1. Email *

2. Name *

3. Section *

Check all that apply. A B C D E F G

4. Roll No. *

I. दिए गए प्रश्नों के उत्तर सही विकल्प चुनकर दें।

5. 1.खिचड़ी किसने बनायी ? *

1 point

Mark only one oval.

- a) तोता
- b) चिड़ा
- c) कोयल
- d) चिड़िया

6. 2. कहानी आओ खिचड़ी खायें में किसे सबसे पहले खिचड़ी खाने के लिए बुलाया गया? *

1 point

Mark only one oval.

- a) कोयल
- b) तोता और मैना
- c) चिड़ा
- d) कौवा

7. 3. संजय की माँ को किस बात का डर था? *

1 point

Mark only one oval.

- a) संजय पढ़ाई में पीछे ना रह जाए
- b) टाइगर कोई सामान ना तोड़ दे
- c) संजय को चोट ना लग जाए
- d) संजय झगड़ा ना करने लगे

II. किसने –किससे कहा ?

8. 4. सामने कोयल रहती है। उसे भी बुला लें ? *

1 point

Mark only one oval.

- a) चिड़े ने कोयल से कहा
- b) चिड़े ने तोते से कहा
- c) चिड़े ने चिड़िया से कहा
- d) काली ने बन्दर से कहा

II. किसने - किससे कहा ?

9. 5. अच्छा कल से तुम घर का काम करोगे, मैं पानी लाऊँगी। *

1 point

Mark only one oval.

- a) गिट्टू ने कौवे से कहा
- b) टिन्नी ने गिट्टू से कहा
- c) चूँ-चूँ ने गिट्टू से कहा
- d) टिन्नी ने चूँ चूँ से कहा

III. निम्न वर्णों से शब्द बनाएँ -

10. 6. म् + अ + क् + आ + न् + अ = ? *

1 point

Mark only one oval.

- a) मेकान
- b) मकान
- c) मकाम
- d) माकान

III. निम्न वर्णों से शब्द बनाएँ -

11. 7. ब्+अ+स्+त्+आ = ? *

1 point

Mark only one oval.

- a) बस्ता
 b) बस्ती
 c) बसता
 d) बस्त

IV. अपठित गद्यांश को पढ़कर प्रश्नों के उत्तर दें :-

कपटी बाज़

एक बाज़ एक पेड़ की डाली पर रहता था । उसी पेड़ की खोह में एक लोमड़ी रहती थी । एक दिन बाज़ उसकी खोह में घुस गया और लोमड़ी के बच्चों को उठा ले गया । लोमड़ी के बहुत बोलने पर भी बाज़ ने बच्चों को लौटाने से मना कर दिया । लोमड़ी पास के मंदिर से एक जलती हुई लकड़ी ले आई और पेड़ के नीचे आग लगा दी । आग की गर्मी और धुँ से बाज़ डर गया । अपने बच्चों की जान बचाने के लिए बाज़ ने लोमड़ी के बच्चों को लौटा दिया ।

प्रश्नों के उत्तर दें :-

12. 8. बाज़ कहाँ रहता था ? *

1 point

Mark only one oval.

- a) पेड़ के नीचे
- b) मकान में
- c) पेड़ की डाली पर
- d) इनमें से कोई नहीं

कपटी बाज़

एक बाज़ एक पेड़ की डाली पर रहता था । उसी पेड़ की खोह में एक लोमड़ी रहती थी । एक दिन बाज़ उसकी खोह में घुस गया और लोमड़ी के बच्चों को उठा ले गया । लोमड़ी के बहुत बोलने पर भी बाज़ ने बच्चों को लौटाने से मना कर दिया । लोमड़ी पास के मंदिर से एक जलती हुई लकड़ी ले आई और पेड़ के नीचे आग लगा दी । आग की गर्मी और धुँएँ से बाज़ डर गया । अपने बच्चों की जान बचाने के लिए बाज़ ने लोमड़ी के बच्चों को लौटा दिया ।

प्रश्नों के उत्तर दें :-

13. 9. लोमड़ी ने पेड़ के नीचे क्या किया ? *

1 point

Mark only one oval.

- a) पानी दाल दिया
- b) दोस्तों को बुला लिया
- c) शोर मचाया
- d) आग लगा दिया

V. निम्न वाक्यों को उपयुक्त गद्यांश के आधार पर पूरा करें :-

कपटी बाज़

एक बाज़ एक पेड़ की डाली पर रहता था । उसी पेड़ की खोह में एक लोमड़ी रहती थी । एक दिन बाज़ उसकी खोह में घुस गया और लोमड़ी के बच्चों को उठा ले गया । लोमड़ी के बहुत बोलने पर भी बाज़ ने बच्चों को लौटाने से मना कर दिया । लोमड़ी पास के मंदिर से एक जलती हुई लकड़ी ले आई और पेड़ के नीचे आग लगा दी । आग की गर्मी और धुएँ से बाज़ डर गया । अपने बच्चों की जान बचाने के लिए बाज़ ने लोमड़ी के बच्चों को लौटा दिया ।

प्रश्नों के उत्तर दें :-

14. 10. आग _____ बाज़ डर गया । *

1 point

Mark only one oval.

- a) लपट से
 b) की गर्मी और धुँ से
 c) के फैलने से
 d) इनमें से कोई नहीं

कपटी बाज़

एक बाज़ एक पेड़ की डाली पर रहता था । उसी पेड़ की खोह में एक लोमड़ी रहती थी । एक दिन बाज़ उसकी खोह में घुस गया और लोमड़ी के बच्चों को उठा ले गया । लोमड़ी के बहुत बोलने पर भी बाज़ ने बच्चों को लौटाने से मना कर दिया । लोमड़ी पास के मंदिर से एक जलती हुई लकड़ी ले आई और पेड़ के नीचे आग लगा दी । आग की गर्मी और धुँ से बाज़ डर गया । अपने बच्चों की जान बचाने के लिए बाज़ ने लोमड़ी के बच्चों को लौटा दिया ।

प्रश्नों के उत्तर दें :-

15. 11. लोमड़ी पास के _____ एक जलती हुई लकड़ी ले आई। *

1 point

Mark only one oval.

- a) मंदिर से
 b) जंगल से
 c) शहर से
 d) गाँव से

कपटी बाज़

एक बाज़ एक पेड़ की डाली पर रहता था। उसी पेड़ की खोह में एक लोमड़ी रहती थी। एक दिन बाज़ उसकी खोह में घुस गया और लोमड़ी के बच्चों को उठा ले गया। लोमड़ी के बहुत बोलने पर भी बाज़ ने बच्चों को लौटाने से मना कर दिया। लोमड़ी पास के मंदिर से एक जलती हुई लकड़ी ले आई और पेड़ के नीचे आग लगा दी। आग की गर्मी और धुएँ से बाज़ डर गया। अपने बच्चों की जान बचाने के लिए बाज़ ने लोमड़ी के बच्चों को लौटा दिया।

प्रश्नों के उत्तर दें :-

16. 12. गद्यांश में से संज्ञा शब्दों के सही समूह को चुनें। *

1 point

Mark only one oval.

- a) डाली, पास, लकड़ी, आग
- b) लकड़ी, उठा, एक, डर
- c) लकड़ी, बाज़, लोमड़ी, आग
- d) आग, लौटाना, बहुत, डाली

17. 13. 'धरती' का पर्यायवाची शब्द चुनें :- *

1 point

Mark only one oval.

- a) बादल
- b) गृह
- c) रवि
- d) भूमि

18. 14. 'विहग' का पर्यायवाची शब्द चुनें :- *

1 point

Mark only one oval.

- a) पुष्प
- b) पक्षी
- c) वारि
- d) वाटिका

19. 15. कौन सा शब्द 'फूल' का पर्यायवाची नहीं है ? *

1 point

Mark only one oval.

- a) बरखा
 b) पुष्प
 c) सुमन
 d) कुसुम

20. 16. कौन सा शब्द 'बादल' का पर्यायवाची नहीं है ? *

1 point

Mark only one oval.

- a) मेघ
 b) जलद
 c) निशाकर
 d) जलधर

21. 17. कौन सा शब्द 'बेटा' का पर्यायवाची नहीं है ? *

1 point

Mark only one oval.

- a) सुत
 b) तनय
 c) पुत्र
 d) रवि

VI. नीचे दिए गए वाक्यों में से क्रिया अलग करें :-

22. 18. रत्ना पढ़ाई कर रही है। *

1 point

Mark only one oval.

- a) रत्ना
- b) कर रही है
- c) रत्ना पढ़ाई
- d) इनमें से कोई नहीं

VI. नीचे दिए गए वाक्यों में से क्रिया अलग करें :-

23. 19. पिताजी दावत में जा रहे हैं। *

1 point

Mark only one oval.

- a) जा रहे हैं
- b) पिताजी
- c) दावत में
- d) इनमें से कोई नहीं

24. 20. नकुल फल खा रहा है। *

1 point

Mark only one oval.

- a) फल
- b) नकुल
- c) खा रहा
- d) इनमें से कोई नहीं

VII. निम्न शब्दों का वचन परिवर्तन करें।

25. 21. माला *

1 point

Mark only one oval.

- a) माली
 b) मालाँ
 c) माले
 d) मालाएँ

26. 22. पत्ता ___? *

1 point

Mark only one oval.

- a) पत्ताएं
 b) पत्ते
 c) पत्ता
 d) पत्तियां

27. 23. कुर्सी *

1 point

Mark only one oval.

- a) कुर्सियाँ
 b) कुर्से
 c) कुर्सीयाँ
 d) कुर्सी

VIII. निम्न वाक्यों को सही सर्वनाम शब्दों से पूरा करें :-

28. 24. _____ खेलने जा रही हूँ। *

1 point

Mark only one oval.

a) हम

b) तुम

c) मैं

d) वह

29. 25. _____ घर कहाँ है ? *

1 point

Mark only one oval.

a) उस

b) मैं

c) तुम

d) तुम्हारा

30. 26. _____ मकान बहुत बड़ा है। *

1 point

Mark only one oval.

a) हम

b) उनका

c) तुम

d) वे

IX. खाली जगहों के लिए सही शब्द चुनें :-

31. 27. _____ को भी सज़ा मिली। *

1 point

Mark only one oval.

- a) सारस
 b) इनाम
 c) किसान
 d) बीज

32. 28. पाठ 'आओ खिचड़ी खाएँ' में तोता _____ लेकर आया। *

1 point

Mark only one oval.

- a) जल
 b) नमक
 c) आम
 d) दही

33. 29. संजय टाइगर को _____ प्यार करता था। *

1 point

Mark only one oval.

- a) कम
 b) बिल्कुल नहीं
 c) थोड़ा बहुत
 d) बहुत

34. 30. टोपीवाला टोपियाँ _____ जा रहा था। *

1 point

Mark only one oval.

- a) फेंकने
 b) बेचने
 c) पहनने
 d) देने

35. 31. बंदरों ने _____ से टोपियाँ निकालीं। *

1 point

Mark only one oval.

- a) थैले
 b) पेड़
 c) मटके
 d) इनमें से कोई नहीं

36. 32. गिट्टू का खाना _____ था। *

1 point

Mark only one oval.

- a) स्वादिष्ट
 b) फीका
 c) जल गया
 d) पक गया

37. 33. _____ ने कहा, ठीक है दोनों आधी आधी रोटी बाँट लेते हैं। *

1 point

Mark only one oval.

- a) लाली
- b) भोली ने
- c) बंदर
- d) काली

38. 34. चिड़िया _____। *

1 point

Mark only one oval.

- a) आया
- b) आई
- c) आये
- d) इनमें से कोई नहीं

39. 35. _____ जाल में फँस गए। *

1 point

Mark only one oval.

- a) पक्षी
- b) किसान
- c) गिलहरी
- d) इनमें से कोई नहीं

सही उत्तर चुनें:

40. 36. शायद का अर्थ है *

1 point

Mark only one oval.

- a) देख रेख
 b) होगा ही
 c) हो सकता है
 d) हुआ था

41. 37. प्रथम का विलोम शब्द है *

1 point

Mark only one oval.

- a) दूसरा
 b) पहला
 c) परचम
 d) अंतिम

42. 38. पुलिस का विलोम शब्द है। *

1 point

Mark only one oval.

- a) सिपाही
 b) चोर
 c) सैनिक
 d) इनमें से कोई नहीं

43. 39. सुगंध का विलोम शब्द है *

1 point

Mark only one oval.

- a) दुर्गंध
- b) निबंध
- c) खुशबू
- d) इनमें से कोई नहीं

44. 40. नाराज़ का विलोम शब्द है *

1 point

Mark only one oval.

- a) दुखी
- b) गुस्सा
- c) खुश
- d) इनमें से कोई नहीं

This content is neither created nor endorsed by Google.

Google Forms



DELHI PUBLIC SCHOOL

SAIL Township, Ranchi

FIRST ONLINE SEMESTER

(SESSION-2021 – 22)

Class- II

Subject- Hindi (Subjective)

F.M.-40

I. निम्नलिखित प्रश्नों के उत्तर दें-

[2X6=12]

क.) बंदरों ने टोपियों का क्या किया ?

उ _____

ख.) दाल और चावल कौन लाया ?

उ _____

ग.) बन्दर तराजू क्यों लाया ?

उ _____

घ.) मेले में सब बच्चे क्या करने लगे ?

उ _____

ड) 'अपना-अपना काम' पाठ से आपने क्या सीखा ?

उ _____

च.) गिट्टू के हाथों में दवा किसने लगाई ?

उ _____

II. निम्न शब्दों से वाक्य बनाएं -

[1X5=5]

1. लाठी - _____

2. सुगंध - _____

3. झगड़ा - _____

4. प्रथम - _____

5. दवा - _____

III. शब्दों के अर्थ लिखें-

[1X6=6]

1. बराबर - _____

4. तराजू _____

2. मालिक - _____

5. तारीफ़ करना - _____

3. धन्यवाद - _____

6. थैला - _____

IV. निम्न वर्णों से शब्द बनाएँ-

[0.5X6=3]

1) ल को म - _____

2) द चा र - _____

3) स् त पु क - _____

4) ल दे ख भा - _____

5) त्र ता मि - _____

6) व क से - _____

V. निम्न प्रश्नों के उत्तर दें:-

[1X2=2]

1. आपके हिन्दी पाठ्य पुस्तक का क्या नाम है ?

2. 'आओ खिचड़ी खायें' पाठ में कुल कितने जानवर और पक्षी हैं ?

VI. दिए गए वाक्यों में से विशेषण शब्दों को अलग करके लिखें -

[0.5X4=2]

1. दस लड़के मैदान में खेल रहे हैं ।

2. रंग -बिरंगी तितलियाँ उड़ रही हैं ।

3. खरगोश तेज़ चलता है ।

4. मोहन ने बाज़ार से पीली कमीज़ खरीदी ।

VII. सही (✓)या गलत(✗) का चिन्ह लगाओ -

[0.5X5=2.5]

1. संजय टाइगर से बहुत प्यार करता था ।
2. संजय परीक्षा में विफल हो गया ।
3. बिल्लियों को भूख नहीं लगी थी ।
4. चिड़ा अकेले खिचड़ी खाने लगा ।
5. गिट्टू का हाथ जल गया ।

VIII. निम्न प्रश्नों के एक शब्दों में उत्तर दें: -

[0.5X5=2.5]

1. वर्णों के सही मेल से क्या बनता है ? _____
2. सबका नाम क्या कहलाता है ? _____
3. संज्ञा के स्थान पर प्रयुक्त होने वाले शब्द क्या कहलाते हैं ? _____
4. संज्ञा या सर्वनाम की विशेषता बताने वाले शब्द क्या कहलाते हैं ? _____
5. जिन शब्दों की विशेषता बताई जाती है, उन्हें क्या कहते हैं ? _____

IX दिए गए विषयों में से किसी भी एक विषय पर पाँच वाक्य लिखें:-

[1X5=5]

1. प्रदूषण

2. परोपकार

3. रक्षाबंधन

Class- II Subject- Maths (Paper-1)

Date - 14-09-2021

Full Marks- 40

* Required

1. Email *

2. Name *

3. Section *

Check all that apply.

A

B

C

D

E

F

G

4. Roll No. *

CHOOSE THE MOST APPROPRIATE ANSWER:

5. 1. The next odd number after 21 is *

1 point

Mark only one oval.

a. 23

b. 24

c. 24

d. 21

6. 2. There are even numbers between 31 and 40 *

1 point

Mark only one oval.

a. 2

b. 4

c. 6

d. 10

7. 3. $600 + \dots = 800$ *

1 point

Mark only one oval.

a. 1

b. 10

c. 200

d. 0

8. 4. $97 + \dots = 97$ *

1 point

Mark only one oval. a. 1 b. 0 c. 67 d. 68

9. 5. $203 + 506 = 506 + \dots$ *

1 point

Mark only one oval. a. 56 b. 203 c. 79 d. 568

10. 6. Write next even number of 66 , *

1 point

Mark only one oval. a. 66 b. 78 c. 68 d. 50

11. 7. In 645 the place of 6 is *

1 point

Mark only one oval.

- a. Tens
- b. Hundreds
- c. 6tens
- d. Ones

12. 8. The face value and the place value of a number is always same at place. *

1 point

Mark only one oval.

- a. Ones
- b. Tens
- c. Hundreds
- d. Thousands

13. 9. In numeral, five hundred sixty is *

1 point

Mark only one oval.

- a. 560
- b. 580
- c. 516
- d. 500

14. 10. 556, in words is *

1 point

Mark only one oval.

- a. Eight hundred seventy eight
- b. Four hundred eighty seven
- c. Five hundred eight
- d. Five hundred fifty six

15. 11. In the word 'TIGER' E is at position. (Write ordinal number) *

1 point

Mark only one oval.

- a. Second
- b. Third
- c. Fourth
- d. Fifth

16. 12. The predecessor (before) of 465 is *

1 point

Mark only one oval.

- a. 464
- b. 469
- c. 590
- d. 466

17. 13. The expanded form of 543 is *

1 point

Mark only one oval.

- a. $500+40+3$
- b. $400+40+7$
- c. $500+30+4$
- d. $300+40+7$

18. 14. The short form of $600 + 40 + 7$ is ... *

1 point

Mark only one oval.

- a. 6407
- b. 456
- c. 764
- d. 647

19. 15. The face value of 8 in 387 is *

1 point

Mark only one oval.

- a. 8
- b. 80
- c. 800
- d. 88

20. 16. The smallest three digit number using the digits 8,0,5 is (without repeating them) * 1 point

Mark only one oval.

- a. 508
 b. 503
 c. 058
 d. 850

21. 17. AA, CC, EE, * 1 point

Mark only one oval.

- a. FF
 b. GG
 c. HH
 d. II

22. 18. \$ ₹ \$ ₹ \$ ₹ * 1 point

Mark only one oval.

- a. ₹
 b. \$
 c. €
 d. £

23. 19. 555, 560, 565, *

1 point

Mark only one oval.

a. 550

b. 565

c. 570

d. 575

24. 20. 404, 408 , 412, *

1 point

Mark only one oval.

a. 420

b. 440

c. 416

d. 449

25. 21. The result of multiplication is called.... *

1 point

Mark only one oval.

a. Sum

b. Difference

c. Product

d. Even

26. 22. There are ones in a hundred. *

1 point

Mark only one oval.

- a. 1
- b. 10
- c. 100
- d. 1000

27. 23. $20 \times 4 = \dots$ *

1 point

Mark only one oval.

- a. 80
- b. 400
- c. 600
- d. 400

28. 24. $7 \times 1 \times 5 \times 0 \times 4 = *$

1 point

Mark only one oval.

- a. 16
- b. 67
- c. 0
- d. 68

29. $25.2 \times 2 \times 4 = \dots$ *

1 point

Mark only one oval. a. 20 b. 12 c. 22 d. 16

30. $5 \text{ tens} + 20 \text{ tens} = \dots$ *

1 point

Mark only one oval. a. 250 b. 700 c. 70 d. 100

31. $8 \text{ taken } 4 \text{ times is equal to } \dots$ *

1 point

Mark only one oval. a. 32 b. 12 c. 445 d. 36

32. 28. Number of 5 in 35 is *

1 point

Mark only one oval.

a. 6

b. 5

c. 7

d. 3

33. 29. $7+7+7+7 = \dots \times 4$ *

1 point

Mark only one oval.

a. 4

b. 28

c. 7

d. 5

34. 30. $432 \times 3 =$ *

1 point

Mark only one oval.

a. 1468

b. 1296

c. 864

d. 1432

35. 31. $645 + 234 = \dots$ *

1 point

Mark only one oval. a. 479 b. 564 c. 879 d. 679

36. 32. $647 + 30 = \dots$ *

1 point

Mark only one oval. a. 597 b. 697 c. 667 d. 677

37. 33. $580 - 40 = \dots$ *

1 point

Mark only one oval. a. 620 b. 540 c. 546 d. 460

38. 34. Cost of one pen is ₹10, then cost of 5 such pens is *

1 point

Mark only one oval.

a. ₹12

b. ₹20

c. ₹40

d. ₹50

39. 35. The greatest number among 654, 342 , 643,213 *

1 point

Mark only one oval.

a. 654

b. 645

c. 213

d. 456

40. 36. 16tens + 4 tens = tens *

1 point

Mark only one oval.

a. 20

b. 45

c. 12

d. 43

41. 37. Rohan has 224 toffees in a packet and he ate 24 toffees from it How many toffees are left now * 1 point

Mark only one oval.

- a. 230
 b. 229
 c. 200
 d. 440

42. 38. The sixth multiple of 5 is * 1 point

Mark only one oval.

- a. 6
 b. 12
 c. 30
 d. 18

43. 39 . Greatest 3 digit number is * 1 point

Mark only one oval.

- a. 9
 b. 990
 c. 100
 d. 999

44. 40. 9 times 9 is *

1 point

Mark only one oval.

a. 8 1

b. 99

c. 95

d. 90

This content is neither created nor endorsed by Google.

Google Forms



DELHI PUBLIC SCHOOL

SAIL Township, Ranchi

FIRST ONLINE SEMESTER (SESSION-2021 – 22)

Class- II

Subject- Maths (Subjective)

F.M.-40

I. Multiply

(0.5 x 8= 4)

a. $2 \times 4 = \dots\dots$

b. $4 \times 4 = \dots\dots$

c. $6 \times 2 = \dots\dots$

d. $3 \times 8 = \dots\dots$

e. $7 \times 8 = \dots\dots$

f. $8 \times 8 = \dots\dots$

g. $5 \times 5 = \dots\dots$

h. $10 \times 2 = \dots\dots$

II. Write the following in numerals:

(1 x 4= 4)

a. Six hundred -

b. Five hundred eighty six -

c. Four hundred fifty seven -

d. Five hundred fifty eight -

III. Arrange in ascending order:

(1x1 = 1)

a. 398, 347, 375, 331

IV. Multiply on number line:

(1 x 1 = 1)

a. $4 \times 3 =$

V. Add:

(1 x 3 = 3)

a. 567

$+ 309$

b. 754

$+ 213$

c. 472

$+ 238$

VI. Subtract:**(1 x 3 = 3)**

a. 576

$$\begin{array}{r} 576 \\ - 234 \\ \hline \end{array}$$

b. 607

$$\begin{array}{r} 607 \\ - 15 \\ \hline \end{array}$$

c. 765

$$\begin{array}{r} 765 \\ - 133 \\ \hline \end{array}$$

VII. Find the product:**(1 x 3 = 3)**

a. 323

$$\begin{array}{r} 323 \\ \times 6 \\ \hline \end{array}$$

b. 625

$$\begin{array}{r} 625 \\ \times 8 \\ \hline \end{array}$$




c. 503

$$\begin{array}{r} 503 \\ \times 9 \\ \hline \end{array}$$

VIII. What next?**(1.5 x 4 = 6)**

a. 334, 338,,,

b. 451, 456,,,

c. , , ,,,d. , , , ,,,**IX. Solve:****(2.5 x 4 = 10)**

a. Find the difference of of place value and face value of 7 in 748?

b. In a stadium there are 38 chairs in each row, how many chairs are there in 8 rows?

c. Manyata bought 514 sweets on her birthday. She distributed 387 sweets among her friends how many sweets are left with her?

d. In a village there are 456 men, 348 women and 175 children. How many people are there in all?

X. Maths Mania**(2.5 x 2 = 5)**

a. There were 60 passengers in a bus, 10 passengers got down and its double entered into the bus. How many passengers are there in the bus now?

b. Find the sum of the predecessor and next even number of 451 and 501.

Class- II Subject- EVS (Paper-1)

Date - 16-09-2021

Full Marks- 40

* Required

1. Email *

2. Name *

3. Section *

Check all that apply.

A

B

C

D

E

F

G

4. Roll No. *

Choose the correct option.

5. 1. Our body is made of a number of _____ . *

1 point

Mark only one oval.

- a. eyes
- b. ears
- c. parts
- d. nose

6. 2. We need _____ to live and grow. *

1 point

Mark only one oval.

- a. food
- b. house
- c. clothes
- d. fibres

7. 3. Indian _____ is famous all over the world . *

1 point

Mark only one oval.

- a. shoes
- b. jacket
- c. jute
- d. belt

8. 4. Rayon is a _____ fibre . *

1 point

Mark only one oval.

- a. natural
- b. synthetic
- c. cotton
- d. silk

9. 5. A _____ stitches clothes to make garments. *

1 point

Mark only one oval.

- a. mason
- b. weaver
- c. plumber
- d. tailor

10. 6. Houses that can be moved easily are called _____ house. *

1 point

Mark only one oval.

- a. hut
- b. bungalow
- c. portable
- d. kutcha

11. 7. An _____ fits electrical wires. *

1 point

Mark only one oval.

- a. painter
- b. electrician
- c. carpenter
- d. mason

12. 8. Keep your back _____ when you sit or stand. *

1 point

Mark only one oval.

- a. bend
- b. stoop
- c. straight
- d. none of these

13. 9. Sleep for _____ hours every night. *

1 point

Mark only one oval.

- a. 2 hrs.
- b. 4 hrs.
- c. 12 hrs.
- d. 8 hrs.

14. 10. _____ include playgroups and kindergartens. *

1 point

Mark only one oval.

- a. Primary school
- b. Secondary school
- c. Preschools
- d. Higher secondary

15. 11. A _____ is a place where we learn many things. *

1 point

Mark only one oval.

- a. school
- b. garden
- c. playground
- d. park

16. 12. _____ are built on high bamboo poles. *

1 point

Mark only one oval.

- a. igloos
- b. stilt houses
- c. pucca houses
- d. portable houses

17. 13. _____ is the surface of a room that you walk on. *

1 point

Mark only one oval.

- a. kitchen
- b. bedroom
- c. roof
- d. floor

18. 14. Our _____ help us to turn our head from side to side. *

1 point

Mark only one oval.

- a. knees
- b. legs
- c. hands
- d. neck

19. 15. A _____ is a meal that we eat late in the morning in place of breakfast or lunch. *

1 point

Mark only one oval.

- a. lunch
- b. brunch
- c. dinner
- d. breakfast

20. 16. A _____ is the food we eat. *

1 point

Mark only one oval.

- a. balanced diet
- b. meal
- c. brunch
- d. spices

21. 17. A _____ dyes the cloth in different colours. *

1 point

Mark only one oval.

- a. weaver
- b. tailor
- c. dyer
- d. all of the above

22. 18. We get silk from _____ . *

1 point

Mark only one oval.

- a. cocoon
- b. silkworm
- c. cotton plant
- d. leather

23. 19. A _____ floats on water. *

1 point

Mark only one oval.

- a. caravan
- b. tent
- c. houseboat
- d. campers

24. 20. A _____ storey house has two floors. *

1 point

Mark only one oval.

- a. double
- b. bungalow
- c. single
- d. none of these

25. 21. A _____ body is a healthy body. *

1 point

Mark only one oval.

- a. dirty
- b. unhygienic
- c. untidy
- d. clean

26. 22. _____ daily to keep your mind and body active and healthy. *

1 point

Mark only one oval.

- a. drink
- b. rest
- c. eat
- d. exercise

27. 23. Be _____ to everyone in school. *

1 point

Mark only one oval.

- a. impolite
- b. polite
- c. rude
- d. none of these

28. 24. We celebrate Children's Day on _____ . *

1 point

Mark only one oval.

- a. 5th September
- b. 26th January
- c. 14th November
- d. 14th September

29. 25. Do not _____ while reading or walking. *

1 point

Mark only one oval.

- a. bend
- b. sing
- c. dance
- d. none of these

30. 26. Our body needs a lot of _____ to digest food. *

1 point

Mark only one oval.

- a. food
- b. water
- c. fruit
- d. diet

31. 27. Food that gives us energy is called _____. *

1 point

Mark only one oval.

- a. protective food
- b. body building food
- c. energy giving food
- d. fast food

32. 28. We are born as _____ . *

1 point

Mark only one oval.

- a. boy
- b. girl
- c. babies
- d. adults

33. 29. Sounds can be _____ . *

1 point

Mark only one oval.

- a. loud
- b. soft
- c. both
- d. none of these

34. 30. Our knees help us to _____ . *

1 point

Mark only one oval.

- a. bend
- b. squat
- c. push
- d. pull

35. 31. _____ is an example of grains. *

1 point

Mark only one oval.

- a. barley
- b. cumin
- c. cashew
- d. turmeric

36. 32. _____ makes our bones and teeth strong. *

1 point

Mark only one oval.

- a. water
- b. orange
- c. milk
- d. banana

37. 33. We wear _____ clothes in summer. *

1 point

Mark only one oval.

- a. woolen
- b. cotton
- c. silk
- d. rayon

38. 34. A house where a family lives is called _____ . *

1 point

Mark only one oval.

- a. caravan
- b. home
- c. tent
- d. campers

39. 35. We wear _____ clothes when it rains . *

1 point

Mark only one oval.

- a. silk
- b. nylon
- c. jute
- d. waterproof

40. 36. Baby plant is known as _____ . *

1 point

Mark only one oval.

- a. seed
- b. sapling
- c. infant
- d. none of these

41. 37. _____ is not an example of food from animals. *

1 point

Mark only one oval.

- a. seafood
- b. honey
- c. oats
- d. eggs

42. 38. An _____ draws a plan of the house. *

1 point

Mark only one oval.

- a. electrician
- b. plumber
- c. architect
- d. mason

43. 39. _____ is an unhealthy habit. *

1 point

Mark only one oval.

- a. Taking bath every day.
- b. Trimming nails weekly.
- c. Brushing teeth twice a day.
- d. Sleeping late at night.

44. 40. _____ is an example of good manners in school . *

1 point

Mark only one oval.

- a. Making noise in the class.
 - b. Throwing waste in the dustbin.
 - c. Bullying others.
 - d. Being impolite.
-

This content is neither created nor endorsed by Google.

Google Forms



DELHI PUBLIC SCHOOL

SAIL Township, Ranchi

FIRST ONLINE SEMESTER (SESSION-2021 – 22)

Class- II

Subject- EVS (Subjective)

F.M.-40

1. Answer the following questions :

(2x7=14)

- What is a meal? Name the three main meals.
- Write any two things you learn in school.
- Why do we need to sleep?
- Write two ways to keep house clean.
- Why do we wear cotton clothes in summer?
- How does our neck help us?
- Name the two types of fibres. With one example each.

2. Write two examples of each :

(1x6=6)

- Protective food : i) _____ ii) _____
- Energy Giving food : i) _____ ii) _____
- Body building food : i) _____ ii) _____

3. Unjumble the letter and write the correct word :

(1x5=5)

- r a n y - _____
- t a l b o r p e - _____
- a n e d c l b a - _____
- s e d i a s e s - _____
- u e g t o n - _____

4. Match the following :

(0.5x10=5)

A	B
1. Kneel	a. Ears
2. Turmeric	b. Baby plant
3. Potato	c. Energy giving food
4. Saplings	d. Spice
5. Listen to music	e. Knee
6. Jute	f. Artificial fibre
7. Shoes	g. Igloo
8. 26 th January	h. Republic Day
9. Made of snow	i. Made of leather
10. Rayon	j. Natural fibre

5. Draw, label and colour :

(2x5=10)

- a. Making of cotton.
- b. One sense organ.
- c. A portable house.
- d. A kutcha house.
- e. A thing used to keep your body clean.

Class- II Subject- Computer

Date : 04-09-2021

Full Marks : 25

* Required

1. Email *

2. Name *

3. Section *

Check all that apply.

A

B

C

D

E

F

G

4. Roll No. *

1) Choose the correct option:- [1x25=25]

5. 1) A computer is a _____ machine. *

1 point

Mark only one oval.

- a. Multitasking
- b. Small
- c. Large
- d. Round

6. 2) Choose the correct example of toggle key. *

1 point

Mark only one oval.

- a. Spacebar
- b. Capslock
- c. Alphabet
- d. Backspace

7. 3) Keyboard buttons are also known as _____. *

1 point

Mark only one oval.

- a. Shift
- b. Board
- c. Keys
- d. Keypad

8. 4) _____ means to press the mouse button twice in quick repetition. * 1 point

Mark only one oval.

- a. Click
- b. Single click
- c. Click clock
- d. Double click

9. 5) What is the full form of CD.? * 1 point

Mark only one oval.

- a. Compare disk
- b. Common disk
- c. Compact disk
- d. Compact dice

10. 6) _____ means to produce information. * 1 point

Mark only one oval.

- a. Output
- b. Input
- c. Process
- d. None of these

11. 7) Computer can _____ huge information. *

1 point

Mark only one oval.

- a. Never
- b. Tired
- c. Bored
- d. Store

12. 8) _____ slows down the working process of computer. *

1 point

Mark only one oval.

- a. Pollutes
- b. Virus
- c. Antivirus
- d. Wastes

13. 9) Which part of a computer produces sound? *

1 point

Mark only one oval.

- a. Monitor
- b. Scanner
- c. UPS
- d. Speaker

14. 10) Which key is also known as return key? *

1 point

Mark only one oval.

- a. Number
- b. Enter
- c. Spacebar
- d. Backspace

15. 11) The device which is used for giving instructions to the computer is known as: *

1 point

Mark only one oval.

- a. Output
- b. Process
- c. Input
- d. Storage

16. 12) Which key is the longest key on a keyboard? *

1 point

Mark only one oval.

- a. Spacebar
- b. Delete
- c. Number
- d. Backspace

17. 13) Choose any one disadvantage of the computer. *

1 point

Mark only one oval.

- a. Do large calculations
- b. Never gets tired
- c. Cannot think on its own
- d. Never gets bored

18. 14) How many buttons are there in a mouse? *

1 point

Mark only one oval.

- a. 1
- b. 4
- c. 5
- d. 2

19. 15) How many function keys present on a keyboard? *

1 point

Mark only one oval.

- a. 12
- b. 11
- c. 10
- d. 13

20. 16) The arrow you see on the monitor screen is called _____. * 1 point

Mark only one oval.

- a. Key pointer
 b. Hand pointer
 c. Mouse pointer
 d. Leg pointer

21. 17) Choose the correct sequence of working process of computer. * 1 point

Mark only one oval.

- a. Input – Process – Output
 b. Process – Output – Input
 c. Output – Process – Input
 d. Input – Output – Process

22. 18) Which key is used to erase the character from left to the cursor? * 1 point

Mark only one oval.

- a. Delete
 b. Caps lock
 c. Backspace
 d. Enter key

23. 19) Which device looks like a television? *

1 point

Mark only one oval.

- a. Speaker
- b. Monitor
- c. Mouse
- d. Keyboard

24. 20) Which keys are used to move the cursor in four different directions? *

1 point

Mark only one oval.

- a. Enter
- b. Alphabet
- c. Number
- d. Arrow

25. 21) Amit wants to write his name on the computer. Which part of computer helps him to write his name? *

1 point

Mark only one oval.

- a. Monitor
- b. CPU
- c. Keyboard
- d. Printer

26. 22) The Alphabet, Number or symbol keys together are called _____. * 1 point

Mark only one oval.

- a. Alphanumeric keys
- b. Numeric keys
- c. Alphabet keys
- d. Alphascale keys

27. 23) The _____ of the mouse is used to move pages up and down. * 1 point

Mark only one oval.

- a. Right button
- b. Left button
- c. Scroll wheel
- d. Round wheel

28. 24) "Mixer Grinder" is an example of _____. * 1 point

Mark only one oval.

- a. Process
- b. Input
- c. Output
- d. Storage

29. 25) Computer can be _____ for eyes if we use it for long hours. *

1 point

Mark only one oval.

- a. Good
 - b. Attractive
 - c. Useful
 - d. Harmful
-

This content is neither created nor endorsed by Google.

Google Forms

Class- II Subject- General Knowledge

Date - 20-09-2021

Full Marks- 25

* Required

1. Email *

2. Name *

3. Section *

Check all that apply.

A

B

C

D

E

F

G

4. Roll No. *

Choose the correct option.

5. Q 1: Which fish can glide through the air for long distances with the help of its wing like fins. * 1 point

Mark only one oval.

- (a) Flat fish
- (b) Angular fish
- (c) Saw fish
- (d) Flying fish

6. Q 2: ----- of a fish help them in breathing. * 1 point

Mark only one oval.

- (a) Scales
- (b) Gills
- (c) Fins
- (d) Tail

7. Q 3 : I fly an aircraft. I am ----- . * 1 point

Mark only one oval.

- (a) Doctor
- (b) Baker
- (c) Pilot
- (d) Lyricist

8. Q 4: Which bird can fly backwards. *

1 point

Mark only one oval.

- (a) sparrow
- (b) crow
- (c) humming bird
- (d) dove

9. Q 5: Which of these documents is always necessary if you have to travel abroad ? *

1 point

Mark only one oval.

- (a) Passport
- (b) Birth Certificate
- (c) Credit Card
- (d) Aadhar Card

10. Q 6: Which bird lays the largest eggs ? *

1 point

Mark only one oval.

- (a) Parrot
- (b) Ostrich
- (c) Eagle
- (d) Woodpecker

11. Q 7: Our National Emblem is ----- . *

1 point

Mark only one oval.

- (a) The Ashok Chakra
- (b) Charkha
- (c) Peacock
- (d) The Lion Capital

12. Q 8: It is very hot today as the Sun is shining brightly. It is ----- today. *

1 point

Mark only one oval.

- (a) Windy
- (b) Sunny
- (c) Rainy
- (d) Cold

13. Q 9: -----have eight legs and their bodies are divided into two parts. *

1 point

Mark only one oval.

- (a) Mosquitoes
- (b) Lice
- (c) Spiders
- (d) Lady bugs

14. Q 10: Termites are also called -----.*

1 point

Mark only one oval.

- (a) White ants
- (b) Black ants
- (c) Caterpillars
- (d) Flies

15. Q 11: -----is a sweet liquid that flowers produce to attract insects.*

1 point

Mark only one oval.

- (a) sugar
- (b) nectar
- (c) honey
- (d) jaggery

16. Q 12: Which river gave India its name.*

1 point

Mark only one oval.

- (a) Ganges
- (b) Yamuna
- (c) Indus
- (d) Kaveri

17. Q 13: India is the ----- most populated country in the world. * 1 point

Mark only one oval.

- (a) First
 (b) Third
 (c) Second
 (d) Sixth

18. Q 14: The smallest city in the world is ----- . * 1 point

Mark only one oval.

- (a) Washington
 (b) Vatican City
 (c) Paris
 (d) Italy

19. Q 15: -----will be the next Chief Minister of Uttarakhand . * 1 point

Mark only one oval.

- (a) Nitish Kumar
 (b) Mamta Banerjee
 (c) Pushkar Singh Dhami
 (d) Hemant Soren

20. Q 16: Television was introduced in India in the year -----*. * 1 point

Mark only one oval.

- (a) 13th July 1952
- (b) 15th September 1959
- (c) 4th August 1953
- (d) 9th March 1950

21. Q 17: -----invented the mobile phone. * 1 point

Mark only one oval.

- (a) Martin Cooper
- (b) Newton
- (c) Ralph Baer
- (d) Karl Benz

22. Q 18: Ministry of Ayush launches “Namaste Yoga App” on -----*. * 1 point

Mark only one oval.

- (a) 3rd May 2019
- (b) 17th August 2020
- (c) 14th June 2021
- (d) 6th November 2020

23. Q 19: Which sport does Saina Nehwal play ? *

1 point

Mark only one oval.

- (a) Badminton
- (b) Cricket
- (c) Hockey
- (d) Tennis

24. Q 20: How many goose feathers are attached to a piece of Cork? *

1 point

Mark only one oval.

- (a) 34
- (b) 20
- (c) 16
- (d) 38

25. Q 21: The words of a song are called ----- . *

1 point

Mark only one oval.

- (a) Speech
- (b) Notes
- (c) Club
- (d) Lyrics

26. Q 22: Indian Sprinter Milkha Singh received ----- Gold Medals for India in the Asian Games . *

1 point

Mark only one oval.

- (a) 1
- (b) 5
- (c) 4
- (d) 9

27. Q 23: Which of the following Govt. launched Yuva Shakti Corona Mukti Abhiyan ? *

1 point

Mark only one oval.

- (a) Uttar Pradesh
- (b) Jharkhand
- (c) Madhya Pradesh
- (d) Himachal Pradesh

28. Q 24: -----is one of the oldest inhabited place in the world. *

1 point

Mark only one oval.

- (a) Kolkata
- (b) Hyderabad
- (c) Mumbai
- (d) Varanasi

29. Q 25: A song sung by two singers is a -----.*

1 point

Mark only one oval.

- (a) Solo
 - (b) Duet
 - (c) Choir
 - (d) Group
-

This content is neither created nor endorsed by Google.

Google Forms