



# DELHI PUBLIC SCHOOL

SAIL Township, Ranchi

## FIRST ONLINE SEMESTER

( SESSION-2021 – 22 )


Class- I

Subject- Maths

F.M.-40

**I. Choose the correct options: (Write option no. only, no need to write full answer) (1x25=25)**

1. Count the number of objects and choose how many?



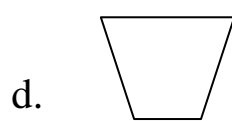
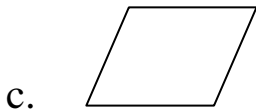
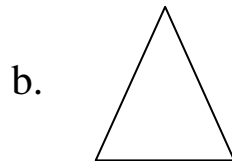
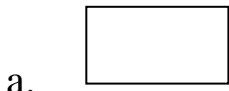
a. 4

b. 6

c. 5

d. 7


2. Choose the odd one out.



3. Choose the odd one out.



4. Which of the options shows three objects?



5. 4 ones = .....

- a. 4                      b. 40                      c. 0                      d. All of the above

6. Which of the following is not true?

- a.  $20+40=40+20$                       b.  $30+20=10+50$   
c.  $50+20=40+30$                       d.  $20+40=30+30$

7. Which of the following is not in correct ascending order?

- a. 13,31,35,53                      b. 46,47,64,75  
c. 19,83,63,42                      d. 23,54,66,82

8. Which of the following is not in correct descending order?

- a. 64,56,33,22                      b. 67,56,43,22  
c. 89,67,43,18                      d. 12,23,34,45

9.  $10 > 7$

- a.  $>$                       b.  $<$                       c.  $=$                       d. all of the above

10. 1 tens less than 77 is .....

- a. 47                      b. 67                      c. 57                      d. 77

11. Which is the greatest number?

- a. 61                      b. 34                      c. 82                      d. 73



22. A fruit seller bought 8 apples and 12 bananas. None of the bananas was sold. How many bananas are left with him?
- a. 8                      b. 12                      c. 0                      d. none of these
23. One boy was sitting alone on a bench. Two friends came to meet him and left. How many are still sitting on the bench ?
- a. 3                      b. 2                      c. 1                      d. 0
24. There are 3 apples on the plate. Mummy put 2 more oranges on the plate. How many apples are there on the plate now?
- a. 5                      b. 1                      c. 2                      d. 3
25.  $50 = 5\text{tens} + \dots\dots\dots\text{ones}$
- a. 0                      b. 1                      c. 2                      d. 3

**II. Solve:** **(0.5x8=4)**

a.  $16 - 8 = \dots\dots\dots$                       b.  $8 + 5 = \dots\dots\dots$

c.  $7 - 4 = \dots\dots\dots$                       d.  $5 + 4 = \dots\dots\dots$

e.                       $\square$

4	4
<hr/>	
+	3 6
<hr/>	

f.                       $\square$

4	3
<hr/>	
+	2 8
<hr/>	

**III. Write in expanded form:** **(0.5x8=4)**

a.  $35 = \bigcirc \text{ tens} + \bigcirc \text{ ones} = \bigcirc + \bigcirc$

b.  $70 = \bigcirc \text{ tens} + \bigcirc \text{ ones} = \bigcirc + \bigcirc$

**IV. Write in short form: (Write only answer)** **(0.5x4=2)**

a.  $5 \text{ tens} + 8 \text{ ones} = \dots\dots\dots$

b.  $2 \text{ tens} + 1 \text{ one} = \dots\dots\dots$

c.  $4 \text{ tens} + 3 \text{ ones} = \dots\dots\dots$

d.  $6 \text{ tens} + 6 \text{ ones} = \dots\dots\dots$

**V. Fill in : (Write only answer)**

**(0.5x4=2)**

a.  $4 \times 6 = \dots\dots\dots$

b.  $5 \times 7 = \dots\dots\dots$

c.  $3 \times 3 = \dots\dots\dots$

d.  $2 \times 6 = \dots\dots\dots$

**VI. Write the number names of :**

**(1X2=2)**

a. 267 :.....

b. 300 :.....

**VII. Word problem :**

**(1)**

Renu has 6 dolls. Her sister Meenu has 7 dolls. How many more dolls does Meenu have than Renu?



# DELHI PUBLIC SCHOOL

SAIL Township, Ranchi

## FIRST ONLINE SEMESTER

( SESSION-2021 – 22 )

**Class- I**

**Subject- EVS**

**F.M.-40**

**(I) Fill in the blanks by choosing the correct option only from the help box:**

**(Write answer only)**

**[0.5X 7= 3.5]**

healthy ,raincoat , junk ,bath ,eight , cotton, clean ,dirty ,ten

- a) We must take ..... everyday.
- b) We should eat ..... food.
- c) A good house is neat and .....
- d) When it rains we wear a.....
- e) We must sleep at least ..... hours every day.
- f) We get .....from cotton plant.
- g) Avoid eating .....food regularly.

**(II) Write True (T) or False (F) :**

**[1 X 5= 5]**

- a) Pucca houses are made of straw .....
- b) A sailor wears a uniform.....
- c) Hot places have houses with flat roofs .....
- d) Toe nails grow faster than finger nails.. .....
- e) Cotton clothes are waterproof.....

**(III) Match the following:**

**[0.5 X 10= 5]**

**Column A**

**Column B**

- |                |                |
|----------------|----------------|
| (a) Lunch      | night          |
| (b) Cold       | plants         |
| (c) Fruits     | winter         |
| (d) Sheep      | afternoon      |
| (e) Dinner     | wool           |
| (f) House      | zebra crossing |
| (g) Cross road | uniform        |
| (h) School     | ill            |
| (i) Jewellery  | shelter        |
| (j) Hospital   | bank           |

**(IV) Choose the odd one out :**

**[0.5 X 5= 2.5]**

- |                    |               |               |                   |
|--------------------|---------------|---------------|-------------------|
| (a) (i) eyes       | (ii) ears     | (iii) nose    | (iv) hair         |
| (b) (i) toothbrush | (ii) towel    | (iii) pillow  | (iv) shampoo      |
| (c) (i) t-shirt    | (ii) sweater  | (iii) muffler | (iv) woollen pant |
| (d) (i) mud        | (ii) bamboo   | (iii) cement  | (iv) dry leaves   |
| (e) (i) scissors   | (ii) soft toy | (iii) ball    | (iv) Ludo         |

**(V) Unscramble the following by using the hints:**

**[ 1 X 5 = 5]**

- OCAPSTRD- We buy it from post office.
- SULPSE- We get it from plants.
- OMKION–Robe worn by Japanese women.
- URUDARAGW- Place of worship.

e) OATBUSEHO –Name of a special house.

**(VI) Name two :**

**[0.5 X 12 = 6]**

a) Things we use to make a pucca house

.....

b) Places in your neighbourhood

.....

c) Things we get from plants as food

.....

d) Things you use to wash your hands

.....

e) Clothes worn in summer season

.....

f) Two things made up of leather

.....

**(VII) Answer these questions :**

**[1.5 X 5 = 7.5]**

A. Why do we need food? What is brunch?

B. What is first aid? Why should we wear a helmet when we are travelling on a two wheeler?

C. Why should we follow good habits? Give one example of good habit?

D. List three ways in which neighbours could be helpful to you.

E. “Humans are cutting down the trees” Do you think it is affecting the shelter of animals. ( Write in two lines).

**(VIII) Complete the name of these houses :**

**[0.5 X 8= 4]**

(a)



\_ P \_ R T M \_ N \_

(b)



B \_ N G \_ L \_ \_



**(IX) Draw, colour and label any one TYPE of kutcha house. [0.5 X 3= 1.5]**

**OR**

**Draw, colour and label a Traffic light and write what each colour stands for.**



# DELHI PUBLIC SCHOOL

SAIL Township, Ranchi

## FIRST ONLINE SEMESTER

( SESSION-2021 – 22 )

**Class- I**

**Subject- Hindi**

**F.M.-40**

I. सही (✓) उत्तर चुनकर लिखें :

[ 1 x 11 = 11 ]

1. 'डोर' का क्या अर्थ है ?

(क) पतंग  (ख) कागज़  (ग) धागा

2. मेले में लगी दुकानों में इनमें से क्या नहीं मिलता ?

(क) खिलौने  (ख) मिठाइयाँ  (ग) चीनी

3. राखी और मिठाई लेने कौन बाज़ार गया था ?

(क) गीता  (ख) मीनू  (ग) मीना

4. मीनू और कबीर रेल से कहाँ गए थे ?

(क) बनारस  (ख) बिहार  (ग) बरेली

5. लोग पानी में क्या फेंक रहे थे ?

(क) आटे की गोलियाँ  (ख) टॉफियाँ  (ग) चावल के दाने

6. 'सैर करना' का क्या अर्थ होता है ?

(क) घूमना  (ख) मना करना  (ग) हँसना

7. 'खीर' का क्या अर्थ होता है ?

(क) पायसम्  (ख) भेंट  (ग) उत्सव

8. रतन बाज़ार से क्या लाना चाहता था ?

(क) पतंग  (ख) खिलौने  (ग) किताबें

9. इनमें से कौन सी सब्जी को फल भी कहा जाता है ?

(क) भिंडी  (ख) सीताफल  (ग) करेला

10. 'घीया' किस सब्जी को कहते हैं ?

(क) मटर  (ख) लौकी  (ग) गाजर

11. 'खुबानी' को क्या कहते हैं ?

(क) सब्जी  (ख) फल  (ग) पशु

II. सही शब्द चुनकर सही (✓) का चिह्न लगाओ और लिखो :

[ 0.5 x 5 = 2.5 ]

(क) नदी— ( नदीयाँ / नदियाँ ) (ख) फूल— ( पाँच फूल / पांच फूलें )

(ग) किनारा— ( किनारे / किनारी ) (घ) छुट्टी— ( छुट्टीयाँ / छुट्टियाँ )

(ङ) लड़की— ( लड़कीयाँ / लड़कियाँ )

III. वाक्यों को पढ़कर सही (✓) और गलत (X) का निशान लगाओ :

[ 1 x 4 = 4 ]

(क) मीनू और कबीर बनारस रेल से गए थे।

(ख) माता जी ने मामा जी को उपहार दिया

(ग) मीना ने रतन को राखी बाँधी।

(घ) मेले में बड़े-बड़े विद्यालय होते हैं।

IV. मिलान करें :

[ 0.5 x 4 = 2 ]

1. मज़ा आना मत करो ऐसा कहना

2. खुश त्योहार

3. उत्सव प्रसन्न

4. मना कराना अच्छा लगना

V. इन शब्दों के विलोम शब्द लिखो :

[ 0.5 x 4 = 2 ]

1. नया - .....

2. पढ़ना - .....

3. इधर - .....

4. सुख - .....

VI. विशेषण शब्दों को चुनकर लिखें :

[ 0.5 x 4 = 2 ]

1. मोहन मीठा आम खाता है।

2. वह लाल रंग का फूल है।

3. यह गाँव पुराना है।

4. मेरा विद्यालय सुंदर है।

VII. क्रिया शब्दों को चुनकर लिखें :

[ 0.5 x 2 = 1 ]

1. रिया नाच रही है।

2. आंशु क्रिकेट खेलता है।

VIII. वाक्य बनाओ :

[ 1 x 2 = 2 ]

1. राखी- .....

2. रेलगाड़ी- .....

IX. प्रश्नों के उत्तर लिखें :

[ 1.5 x 4 = 6 ]

1. हम राखी कैसे मनाते हैं ?

उत्तर-.....

.....

2. नाववाले ने क्या बताया ?

उत्तर-.....

.....

3. मेले में क्या-क्या मिलता है ?

उत्तर—.....  
.....

4. मीनू क्यों डर गई ?


उत्तर— .....  
.....

X. 'गाय' अथवा 'मेरे दादाजी' पर चार वाक्य लिखें :

[ 1 x 4 = 4 ]

1. ....
2. ....
3. ....
4. ....

XI. चित्र देखकर प्रश्नों के उत्तर दो :



1. चित्र देखकर दो विशेषण शब्द लिखो :

[ 0.5 x 2 = 1 ]

(क) .....

(ख) .....

2. चित्र देखकर एक शब्द में उत्तर दो :-

[ 0.5 x 2 = 1 ]

(क) पेड़ पर कितनी चिड़ियाँ हैं ?

उत्तर- .....

(ख) घोंसले में कितने अंडे हैं ?

उत्तर-.....

XII. दिए गए गद्यांश को पढ़कर प्रश्नों के उत्तर एक शब्द में दें :

एक बार पिताजी बाज़ार से आ रहे थे। उनके हाथ में थैला था। उनके साथ उनका पालतू कुत्ता शेरू भी था। शेरू एक बदमाश पर झपटा जो पिताजी का थैला छीन रहा था।

1. पिताजी कहाँ से आ रहे थे ?

[ 0.5 ]

उत्तर- .....

2. पालतू कुत्ते का क्या नाम था ?

[ 0.5 ]

उत्तर- .....

3. शेरू किसके ऊपर झपटा ?

[ 0.5 ]

उत्तर- .....



# DELHI PUBLIC SCHOOL

SAIL Township, Ranchi

## FIRST ONLINE SEMESTER

( SESSION-2021 – 22 )

**Class- I**

**Subject- English**

**F.M.-40**

---

**I. Choose the correct answer:**

**(1x10= 10)**

1) With clothes that have no \_\_\_\_\_ or rent,

- (a) clean                      (b) spot                      (c) polish

2)“I wish I could climb like that ” says

- (a) Grandma                      (b) Jenny                      (c) Karan

3) The bus went very \_\_\_\_\_.

- (a) fast                      (b) big                      (c) long

4) The \_\_\_\_\_ stopped to rest a bit.

- (a) animals                      (b) Hare                      (c) Tortoise

5) The female of ‘heir’ is

- (a) priestess                      (b) princess                      (c) heiress

6) Plural of ‘sheep’ is

- (a) sheep                      (b) sheeps                      (c) none of these

7) A describing word for My Little Brother is

- (a) often                      (b) fat                      (c) think

8) You \_\_\_\_\_ my best friend.

- (a) is                      (b) am                      (c) are

9) The word pair of ‘black’ is

- (a) write                      (b) water                      (c) white

10) \_\_\_\_\_ am playing cricket now.

- (a) I                      (b) We                      (c) You

**II. Rewrite the sentences by changing male to female:**

**(1x2=2)**

1. The three boys in the park are brothers.

---

2. The host welcomed the guests with a smile.

---

**III. State whether True or False :**

**(1x4 = 4)**

1) The hare stopped on the way to eat cherries. \_\_\_\_\_

2) The horse looks tired. \_\_\_\_\_

3) The baby brother is thin. \_\_\_\_\_

4) Broccoli makes me look so cute. \_\_\_\_\_

**IV. Match the columns:**

**(0.5x8 = 4)**

1. courtesy

a) very enjoyable

2. thee

b) sweet

3. meadow

c) wicked

4. overtook

d) angry

5. furious

e) passed

6. cruel

f) a grassland

7. cute

g) you

8. treat

h) polite behaviour

**V. Rearrange the letters to make words**

**(0.5x4=2)**

1. RFMA ---

2. LOSRWEF ---

3. LECEAETRB --

4. UICMS ---

**VI. Make sentences:**

**(1x4=4)**

1. farmer – \_\_\_\_\_

2. busy – \_\_\_\_\_

3. happy – \_\_\_\_\_

4. often – \_\_\_\_\_



**VII. Answer the questions in complete sentences:**

**(1x6=6)**

1. What were the colours of the goats in Grandma's farm?
2. Which red colour vegetable makes you healthy?
3. What lesson do we learn from tortoise?
4. What sound does the baby make?
5. How was the horse feeling after being tied with the rope?
6. What do you say when you meet someone?

**VIII. Unseen Passage**

**(0.5 x4=2)**


Liza is eight years old. She is a sweet girl. Sam is two years younger than her. They have a big cupboard full of toys. Only two toys are new, others are old. Most of them are birthday presents.

**Choose the correct option:**

1. Sam is \_\_\_\_\_ years old.  
a) four                      b) five                      c) six
2. They have a big \_\_\_\_\_ full of toys.(Fill in the blank)
3. A describing word used for Liza.
4. Choose a word from the passage and write its opposite.

**IX. Picture Composition:**

**(0.5x4 = 2)**



**Answer in one word only:**

- 1) How many children are there in the picture?
- 2) What is Grandma holding?
- 3) Which place is the picture showing?
- 4) Name the animal that is seen in the picture.

**X. Write four lines on “My Grandfather” OR “My Best Friend”.**

**(1x4=4)**

# Class- I Subject- Computer

Date : 04-09-2021

Full Marks : 25

\* Required

1. Email \*

---

2. Name \*

---

3. Section \*

*Check all that apply.*

A

B

C

D

E

F

G

4. Roll No. \*

---

I) Choose the correct option:- [ 1 X 25 = 25 ]

5. Q1) \_\_\_\_\_ is an example of a multi-purpose human - made objects. \* 1 point

*Mark only one oval.*

- a) Pencil
- b) Computer
- c) Oven
- d) Books

6. Q2) Computer cannot \_\_\_\_\_ on its own. \* 1 point

*Mark only one oval.*

- a) Think
- b) Eat
- c) Walk
- d) Run

7. Q3) Natural objects are created by \_\_\_\_\_. \* 1 point

*Mark only one oval.*

- a) Birds
- b) Animal
- c) God
- d) Human

8. Q4) Choose the correct spelling :- \*

1 point

*Mark only one oval.*

- a) NELERCOITC
- b) CLEROTINEC
- c) ELECTRONIC
- d) TRONCIELEC

9. Q5) \_\_\_\_\_ computers are smaller than laptops but bigger than smart phones. \*

1 point

*Mark only one oval.*

- a) Desktop
- b) Laptop
- c) Tablet
- d) Pen Drive

10. Q6) E-mail stands for \_\_\_\_\_.\*

1 point

*Mark only one oval.*

- a) Electric mail
- b) Express mail
- c) Easy mail
- d) Electronic mail

11. Q7) Computers are used at \_\_\_\_\_ for booking and printing of tickets. 1 point

\*

*Mark only one oval.*

- a) Airport
- b) Railway Station
- c) Both (a) and (b)
- d) None of these

12. Q8) The computer was developed to \_\_\_\_\_ problems. \* 1 point

*Mark only one oval.*

- a) Solve
- b) Maintain
- c) Create
- d) Increase

13. Q9) Aarav wants to write his name on the computer. Which part of the computer helps him to write his name ? \* 1 point

*Mark only one oval.*

- a) Monitor
- b) CPU
- c) Keyboard
- d) Printer

14. Q10) CPU stands for \_\_\_\_\_.\*

1 point

*Mark only one oval.*

- a) Control Process Unit
- b) Central Processing Unit
- c) Cross Program Unit
- d) Control Program Unit

15. Q11) Computer can \_\_\_\_\_ a large amount of information.\*

1 point

*Mark only one oval.*

- a) Play
- b) Store
- c) Run
- d) Write

16. Q12) Keyboard buttons are also known as \_\_\_\_\_.\*

1 point

*Mark only one oval.*

- a) Pointer
- b) Keys
- c) Cursor
- d) None of these

17. Q13) Always cover your computer with \_\_\_\_\_.\*

1 point

*Mark only one oval.*

- a) Dust covers
- b) Paper
- c) Plastic
- d) Box

18. Q14) Keyboard is used to type \_\_\_\_\_ and numbers on screen.\*

1 point

*Mark only one oval.*

- a) Words
- b) Song
- c) Video
- d) All of these

19. Q15) Computer can \_\_\_\_\_ the internet.\*

1 point

*Mark only one oval.*

- a) Translate
- b) Browse
- c) Draw
- d) None of these



20. Q16) \_\_\_\_\_ helps you to display results. \*

1 point

*Mark only one oval.*

- a) Speaker
- b) Monitor
- c) CPU
- d) Scanner

21. Q17) Which part of a computer produces sound ? \*

1 point

*Mark only one oval.*

- a) UPS
- b) Mouse
- c) Printer
- d) Speaker

22. Q18) Dust carried by shoes is \_\_\_\_\_ for the computer. \*

1 point

*Mark only one oval.*

- a) Good
- b) Harmful
- c) Clean
- d) Best

23. Q19) Which device helps you to scan the contents of a paper ? \*

1 point

*Mark only one oval.*

- a) Printer
- b) Scanner
- c) Speaker
- d) Both (b) and (c)

24. Q20) Press the keys of keyboard \_\_\_\_\_ . \*

1 point

*Mark only one oval.*

- a) Gently
- b) Hardly
- c) Roughly
- d) None

25. Q21) Which type of computer is placed on the table top of a typical desk. \*

1 point

*Mark only one oval.*

- a) Laptop
- b) Tablet
- c) Desktop
- d) Smart phones

26. Q22) \_\_\_\_\_ is called the brain of a computer. \*

1 point

*Mark only one oval.*

- a) CPU
- b) Mouse
- c) Keyboard
- d) Printer

27. Q23) Don't play with the \_\_\_\_\_ inside the computer lab. \*

1 point

*Mark only one oval.*

- a) Switches
- b) Wires
- c) Table
- d) Both (a) and (b)

28. Q24) Writing on the computer using a keyboard is called \_\_\_\_\_. \*

1 point

*Mark only one oval.*

- a) Dancing
- b) Playing
- c) Typing
- d) Catching

29. Q25) UPS stands for \_\_\_\_\_.\*

1 point

*Mark only one oval.*

- a) Unit Process Supply
- b) Uninterrupted Power Supply
- c) Unlimited Power Supply
- d) Unstable Process Supply

---

This content is neither created nor endorsed by Google.

Google Forms

# Class- I Subject- General Knowledge

Date - 20-09-2021

Full Marks- 25

\* Required

1. Email \*

---

2. Name \*

---

3. Section \*

*Check all that apply.*

A

B

C

D

E

F

G

4. Roll No. \*

---

Choose the correct option.

5. 1) I make and repair wooden objects. Who am I? \*

1 point

*Mark only one oval.*

- a) Woodcutter
- b) Doctor
- c) Driver
- d) Carpenter

6. 2) The opposite of heavy is \_\_\_\_\_. \*

1 point

*Mark only one oval.*

- a) dark
- b) low
- c) light
- d) strong

7. 3) Identify the story from the picture given below. \*

1 point



Mark only one oval.

- a) The Blue Jackal
- b) The Hare and the Tortoise
- c) The Boy Who Cried Wolf
- d) The Ant and the Grasshopper

8. 4) The name of the character from the famous film Monsters University is \_\_\_\_\_.\* 1 point

*Mark only one oval.*

- a) Gru  
 b) Po  
 c) Nemo  
 d) Sulley

9. 5) The national anthem of India is \_\_\_\_\_.\* 1 point

*Mark only one oval.*

- a) Vande Mataram  
 b) Jana Gana Mana  
 c) Maa Tujhe Salam  
 d) Mere Desh Ki Dharti

10. 6) The word pumpkin comes from the Greek word '\_\_\_\_'.\* 1 point

*Mark only one oval.*

- a) Popin  
 b) Peppon  
 c) Pepun  
 d) Pepon



11. 7) A tram is also known as a \_\_\_\_\_. \*

1 point

*Mark only one oval.*

- a) car
- b) streetbus
- c) streetcar
- d) train

12. 8) How many legs do most insects have? \*

1 point

*Mark only one oval.*

- a) 4
- b) 5
- c) 6
- d) 7

13. 9) Honeybees collect \_\_\_\_\_ from the flowers to make honey. \*

1 point

*Mark only one oval.*

- a) meter
- b) Sector
- c) Factor
- d) Nectar

14. 10) \_\_\_\_ and his stepbrother Ferb invent new things each day of their summer vacation. \* 1 point

*Mark only one oval.*

- a) Tintin  
 b) Noddy  
 c) Tom  
 d) Phineas

15. 11) Who was the creator of the cartoon characters Mickey Mouse, Pluto and Goofy? \* 1 point

*Mark only one oval.*

- a) Malt Disney  
 b) Watt Disney  
 c) Walt Disney  
 d) Halt Disney

16. 12) Which sport is played by this famous personality? \*

1 point



*Mark only one oval.*

- a) cricket
- b) badminton
- c) football
- d) hockey

17. 13) What is the name of the Jewish festival that is observed for eight days and eight nights? \*

1 point

*Mark only one oval.*

- a) Christmas
- b) Pongal
- c) Hanukkah
- d) Onam

18. 14) According to a famous poem, what was Little Jack Horner eating? \* 1 point

*Mark only one oval.*

- a) a Christmas cake
- b) a Christmas pie
- c) a Christmas pastry
- d) a Christmas muffin

19. 15) Which spice do we get from the Crocus flower? \* 1 point



*Mark only one oval.*

- a) coriander
- b) turmeric
- c) saffron
- d) cumin

20. 16) According to a famous poem, what did Jack jump over? \*

1 point

*Mark only one oval.*

- a) a lamp
- b) a candlestick
- c) a flower pot
- d) a bush

21. 17) When do we celebrate International Yoga Day? \*

1 point

*Mark only one oval.*

- a) 30th June
- b) 21st June
- c) 5th September
- d) 18th January

22. 18) \_\_\_\_\_ is a harvest festival celebrated to thank the Sun God. \*

1 point

*Mark only one oval.*

- a) Id
- b) Diwali
- c) Holi
- d) Pongal

23. 19) Which is the smallest state in India? \*

1 point

*Mark only one oval.*

- a) Rajasthan
- b) Jharkhand
- c) Orissa
- d) Goa

24. 20) An \_\_\_\_ is a small motor vehicle with three wheels. \*

1 point

*Mark only one oval.*

- a) tram
- b) bus
- c) auto rickshaw
- d) aeroplane

25. 21) We use our tongue \_\_\_\_\_. \*

1 point

*Mark only one oval.*

- a) to taste lemons
- b) to see lemons
- c) to smell lemons
- d) to touch lemons

26. 22) A place where important things from the past are kept is called a \_\_\_\_\_. \* 1 point

*Mark only one oval.*

- a) zoo  
 b) forest  
 c) museum  
 d) school

27. 23) Which was the first full length animated film to be released? \* 1 point

*Mark only one oval.*

- a) Cinderella  
 b) Snow White and the Seven Dwarfs  
 c) Frozen  
 d) Madagascar

28. 24) Which of the following games was invented in India? \* 1 point

*Mark only one oval.*

- a) ludo  
 b) football  
 c) chess  
 d) judo

29. 25) Identify the flower given below. \*

1 point



*Mark only one oval.*

- a) Sunflower
- b) Rose
- c) Tulip
- d) Daisy

---

This content is neither created nor endorsed by Google.

Google Forms