

# Class- V Subject- English ( Paper-1)

Date - 22-02-2021

Full Marks- 20

\* Required

1. Email address \*

---

2. Name \*

---

3. Section \*

*Check all that apply.*

- A
- B
- C
- D
- E
- F
- G
- H

4. Roll No. \*

---

Choose the correct Simple Past or Past Continuous form of the verb:

5. Q1. I think I lost my money while I \_\_\_\_\_ in the park. \*

1 point

*Mark only one oval.*

- a. ran
- b. were running
- c. was running
- d. run

6. Q2. He came into the room and \_\_\_\_\_ at his desk. \*

1 point

*Mark only one oval.*

- a. sat
- b. sitting
- c. was sitting
- d. were sitting

7. Q3. The light went out while Renu \_\_\_\_\_ . \*

1 point

*Mark only one oval.*

- a. read
- b. was reading
- c. were reading
- d. is reading

8. Q4. Everyday Gandhiji \_\_\_\_\_ for a morning walk. \*

1 point

*Mark only one oval.*

- a. went
- b. is going
- c. was going
- d. gone

Choose the correct Simple Present or Present Continuous form of the verb:

9. Q5. What are you \_\_\_\_\_ now? \*

1 point

*Mark only one oval.*

- a. doing
- b. did
- c. do
- d. done

10. Q6. This book \_\_\_\_\_ pictures. \*

1 point

*Mark only one oval.*

- a. is containing
- b. contains
- c. are containing
- d. contained

11. Q7. This cycle \_\_\_\_\_ three thousand rupees. \*

1 point

*Mark only one oval.*

- a. is costing
- b. are costing
- c. costs
- d. cost

12. Q8. He \_\_\_\_\_ at me. \*

1 point

*Mark only one oval.*

- a. is looking
- b. are looking
- c. look
- d. looks

Identify the correct kind of Adverbs used in the following sentences:

13. Q9. \*

1 point

**We are standing outside his house.**

*Mark only one oval.*

- a. Adverb of Time
- b. Adverb of Place
- c. Adverb of Degree
- d. Adverb of Frequency

14. Q10. \*

1 point

I often play badminton with my sister.

Mark only one oval.

- a. Adverb of Time
- b. Adverb of Place
- c. Adverb of Degree
- d. Adverb of Frequency

15. Q11. \*

1 point

They are arriving today.

Mark only one oval.

- a. Adverb of Time
- b. Adverb of Place
- c. Adverb of Degree
- d. Adverb of Frequency

16. Q12. \*

1 point

He answered the questions wisely.

Mark only one oval.

- a. Adverb of Time
- b. Adverb of Place
- c. Adverb of Manner
- d. Adverb of Frequency

Fill in the blanks with appropriate Prepositions:

17. Q13. Gandhi Jayanti is celebrated \_\_\_\_ 2nd October. \*

1 point

*Mark only one oval.*

- a. on
- b. at
- c. in
- d. by

18. Q14. India got independence \_\_\_\_ midnight. \*

1 point

*Mark only one oval.*

- a. on
- b. about
- c. in
- d. at

19. Q15. Meena always travels \_\_\_\_ train. \*

1 point

*Mark only one oval.*

- a. in
- b. by
- c. of
- d. with

20. Q16. The old man divided the money \_\_\_\_\_ his two sons. \*

1 point

*Mark only one oval.*

- a. among
- b. in
- c. between
- d. with

Fill in the blanks with the most suitable Conjunction:

21. Q17. Dennis \_\_\_\_\_ his friends were playing cricket. \*

1 point

*Mark only one oval.*

- a. but
- b. and
- c. therefore
- d. as

22. Q18. Sonu became very happy \_\_\_\_\_ he saw his uncle with lots of chocolates. \*

1 point

*Mark only one oval.*

- a. and
- b. but
- c. since
- d. when

23. Q19. \_\_\_\_\_ the LCD is new, its sound is jarring. \*

1 point

*Mark only one oval.*

a. Although

b. Since

c. Or

d. As

24. Q20. The bird picked up the bread \_\_\_\_\_ it wanted to feed its little ones. \* 1 point

*Mark only one oval.*

a. so

b. and

c. because

d. but

---

This content is neither created nor endorsed by Google.

Google Forms



# Class- V Subject- English ( Paper-2)

Date - 22-02-2021

Full Marks- 60

\* Required

1. Email address \*

---

2. Name \*

---

3. Section \*

*Check all that apply.*

A

B

C

D

E

F

G

H

4. Roll No. \*

---

**SECTION A: READING**

**Q1. Read the passage given below and answer the questions that follow: (1x5=5)**

**HAND-MADE PAPER**

Do you know that around 270 eucalyptus trees or 460 bamboo plants are saved when we produce one ton of hand-made paper? It is eco friendly. Hand-made paper also checks pollution of water, land and air because large quantities of polluting chemicals are used by paper mills.

Hand-made paper is the best form of recycled paper. It has a fine surface for writing. It is also strong enough for making drawings.

Paper manufacturing is a very old tradition. It was invented in China nearly two thousand years ago. Indians used the leaves of palm trees for writing. Papyrus is a kind of paper made from a reed of the same name. It grew on the banks of the River Nile, and was used in Egypt.

The hand-made paper industry flourished in India during the Mughal period. But it died with the setting up of paper mills in the 18th and 19th centuries. Mahatma Gandhi revived it during the freedom movement. Today it is a fast growing industry.

- (a) Mention two features of hand-made paper.
- (b) What did Indians use for writing when there was no paper?
- (c) Why did the hand-made paper industry die in the 18th and 19th century?
- (d) What is papyrus?
- (e) Find the word from the above passage that means the same as : 'bring back to life'.

**Q2. Read the following poem carefully and answer the questions that follow: (1x5=5)**

**CHILDHOOD**

When did my childhood go?

Was it the day I ceased to be eleven

Was it the time I realize Hell and Heaven

Could not be found in Geography

And therefore could not be,

Was that the day! ( stanza-I)

When did my childhood go?

Was it the time I realized that adults were not

All they seemed to be,

They talked of love and preached of love,

But did not act so lovingly,

Was that the day! ( stanza-II)

When did my childhood go?

Was it when I found my mind was really mine,

To choose whichever way I choose,

Producing thoughts that were not those of other people

But my own and mine alone

Was that the day! ( stanza-III)

Where did my childhood go?  
It went to some forgotten place,  
That's hidden in an infant's face  
That's all I know. ( stanza-IV)

- a) What is the poet trying to search in the poem?
- b) Why did the poet feel that the adults were not what they seemed to be? (Stanza-II)
- c) Where could the poet see his childhood now? (Stanza-IV)
- d) Find the words from the poem which mean the following:
  - (i) come to an end- (stanza –I)
  - (ii) new born baby- (stanza –IV)

**SECTION B: WRITING**

**Q3. You are Aakash/Mansi of class VD studying at Saraswati Vidya Mandir, Ranchi. You belong to a family with low income. Your father cannot pay your school fee as he has to pay for your brother's school fee also. Write an application to your Principal for fee concession. (5)**

**OR**

**You are Aakash/Mansi residing at H.N.74, Shiv Colony, Ranchi. Write a letter to the Editor of 'Times of India', expressing your strong feelings about DJ sound system being played till late in the night in your locality.**

**Q4. You paid a visit to an orphanage with your classmates. Make a diary entry of what you saw and experienced there using the hints given below together with your own ideas. (5)**

[Hints: mostly young children below fifteen years, few classrooms, peaceful surroundings, clean rooms, dining mess and regular medical check-ups]

**OR**

**Yesterday it was your first day in your new school. Write about your experiences and feelings about the new school in your diary.**

[Hints: friendly students, good teachers, good infrastructure.]

**SECTION C: GRAMMAR****Q5. Do as directed:****(1x10=10)**

(i) Write a synonym of : deceive-

(ii) Write an antonym of : misery-

(iii) I hope the \_\_\_\_\_ is fine. (Fill in the blank with weather/whether.)

(iv) The building \_\_\_\_\_ is huge. (Fill in the blank with site/sight.)

(v) He usually \_\_\_\_ faster than my sister. (run/runs)

(vi) These children disturb us. (Change the verb into Present Continuous Tense)

(vii) She speaks English fluently. (Change the verb into Simple Past Tense)

(viii) It \_\_\_\_ heavily yesterday.

**(Fill in the blank with the Past Continuous Tense of the verb 'rain')**

(ix) He \_\_\_\_ to school tomorrow. (Fill in the blank with the Future Tense of the verb 'go')

(x) Make the antonym of the word: responsible (by adding suitable prefix)

**SECTION D: LITERATURE****Q6. Answer the following questions in one word or sentence:****(1x4=4)**

(i) Name the poet of the poem 'From a Railway Carriage'.

(ii) Where did Bone Crunching Giants gallop off to have their food? (BFG)

(iii) What ailment did Tom consider to fake? (Tom Loses a Tooth)

(iv) Where did the child go with his mother and father? (The Lost child)

**Q7. Answer the following questions in short:****(2X5=10)**

(i) Why was the child lagging behind? (The Lost Child)

(ii) Why did Tom find Monday mornings miserable? (Tom Loses a Tooth)

(iii) Why did the king decide to consult the hermit? (Three Questions)

(iv) What is 'it' compared to in the poem 'The Railway Train'?

(v) Who are cannibals? (BFG)

**Q8. Answer the following questions with reference to context: (2X5=10)**

(a) 'Faster than fairies, faster than witches....' (**From a Railway Carriage**)

(i) What is faster than fairies and witches?

(ii) What is it going past?

(b) "Please don't eat me". (**The BFG**)

(i) Who said these words and to whom?

(ii) Why was the speaker afraid?

(c) "You have already been answered!" (**Three Questions**)

(i) Who had already been answered?

(ii) What answer is referred to here?

(d) "Oh! Aunt Polly come! Tom's dying!" (**Tom Loses a Tooth**)

(i) Who said these words?

(ii) Was Tom really dying?

(e) "Look, child, what is before you?" (**The Lost Child**)

(i) Who said these words and to whom?

(ii) Where were they?

**Q9. Give meaning of the following words: (1x6=6)**

(i) lumping

(ii) freaky

(iii) quarry

(iv) proclaimed

(v) colicky

(vi) abreast

5. \*

Files submitted:

---

This content is neither created nor endorsed by Google.

Google Forms



# Class- V Subject- Hindi ( Paper-1)

Date - 01-03-2021

Full Marks- 20

\* Required

1. Email address \*

---

2. Name \*

---

3. Section \*

*Check all that apply.*

- A  
 B  
 C  
 D  
 E  
 F  
 G  
 H

4. Roll No. \*

---

प्र.1 दिए गए प्रश्नों के सही विकल्प चुने:- (1×6=6)

5. क) क्रिया के होने के समय को क्या कहते हैं? \*

1 point

*Mark only one oval.*

- (i) धातु  
 (ii) विशेष्य  
 (iii) काल

6. ख) 'आज भोजन स्वादिष्ट होगा' यह वाक्य किस काल के अंतर्गत आता है? \*

1 point

*Mark only one oval.*

- (i) भविष्यत् काल  
 (ii) भूतकाल  
 (iii) वर्तमान काल

7. ग) क्रिया के जिस रूप से यह ज्ञात हो कि कार्य हो रहा है, वह कौन - सा काल होगा? \*

1 point

*Mark only one oval.*

- (i) भूतकाल  
 (ii) वर्तमान काल  
 (iii) भविष्यत् काल

8. घ) (०) कोष्ठक में दिया गया चिह्न कौन - से विराम चिह्न को दर्शाता है? \*

1 point

*Mark only one oval.*

- (i) त्रुटि चिह्न  
 (ii) योजक चिह्न  
 (iii) लाघव चिह्न

9. ड) 'शाबाश ऐसे ही आगे बढ़ते रहो' दिए गए वाक्य में कौन - सा विराम चिह्न का विकल्प सही होगा? \* 1 point

Mark only one oval.

(i) ! - ।

(ii) ! ।

(iii) ! ?

10. च) वाक्य लिखते समय कोई शब्द छूट जाए तो, उसे लिखने के लिए कौन - सा विराम चिह्न का प्रयोग किया जाता है? \* 1 point

Mark only one oval.

(i) प्रश्नवाचक चिह्न

(ii) पूर्ण विराम

(iii) त्रुटि चिह्न

प्र.2 सही विकल्प चुनकर रिक्त स्थानों को पूरा करें:- (1×6=6)

11. क) ' जो गिना न जा सके ' उसे ----- कहा जाता है। \* 1 point

Mark only one oval.

(i) अगणित

(ii) अगणनीय

(iii) अगनीत

12. ख) रचना करने वाले को ----- कहा जाता है। \*

1 point

Mark only one oval.

- (i) कवि  
 (ii) लेखक  
 (iii) रचयिता

13. ग) अनेक शब्दों के लिए एक शब्द को ----- भी कहा जाता है। \*

1 point

Mark only one oval.

- (i) वाक्यांश  
 (ii) शब्दांश  
 (iii) काव्यांश

14. घ) राजा का ----- बहुत सुंदर है। \*

1 point

Mark only one oval.

- (i) प्रसाद  
 (ii) प्रासाद  
 (iii) परसाद

15. ङ) नैनीताल के ----- में बहुत सारे कमल के फूल खिले हैं। \*

1 point

Mark only one oval.

- (i) सर  
 (ii) शर  
 (iii) षर

16. च) मेरे जीवन का ----- डॉक्टर बनना है। \*

1 point

Mark only one oval.

- (i) लक्ष  
 (ii) लक्ष्य  
 (iii) लक्ष्य

प्र.3 नीचे दिए गए शब्दों के सही अर्थों का चयन करें:- (1×2=2)

17. क) 'शौर्य' का सही अर्थ क्या होगा? \*

1 point

Mark only one oval.

- (i) हिम्मत  
 (ii) वीरता  
 (iii) ताकत

18. ख) 'अंजाम' का सही अर्थ क्या होगा? \*

1 point

Mark only one oval.

- (i) परिमाण  
 (ii) परीनाम  
 (iii) परिणाम

प्र.4 उचित मुहावरों का चुनाव कर अधूरे वाक्यों को पूरा करें:- (1×2=2)

19. क) पड़ोसन जब देखो तब ----- आ जाती है। \*

1 point

Mark only one oval.

- (i) जले पर नमक छिड़कने
- (ii) खून पसीना एक करने
- (iii) आकाश से तारे तोड़ने

20. ख) युद्ध से पूर्व सीमा पर सैनिकों ने ----- शुरू कर दिया। \*

1 point

Mark only one oval.

- (i) अंगारे बरसाने
- (ii) खरी खोटी सुनाने
- (iii) कमर कसना

प्र.5 स्वविवेक से सही उत्तर का चयन करें:- (1×4=4)

21. क) 'क्रिकेट' का शुद्ध हिंदी अर्थ क्या होगा? \*

1 point

Mark only one oval.

- (i) लंब दंड गोल पिंड धड़ पकड़ प्रतियोगिता
- (ii) गोल पिंड लंब दंड धड़ पकड़ प्रतियोगिता
- (iii) धड़ पकड़ गोल पिंड लंब दंड प्रतियोगिता

22. ख) प्रधानमंत्री द्वारा गंगा को स्वच्छ बनाने वाली परियोजना को क्या नाम दिया गया? \*

1 point

Mark only one oval.

- (i) स्वच्छ गंगे
- (ii) नमामि गंगे
- (iii) निर्मल गंगे

23. ग) किस राज्य से अलग होकर झारखंड राज्य का निर्माण हुआ? \*

1 point

*Mark only one oval.*

- (i) उड़ीसा
- (ii) बंगाल
- (iii) बिहार

24. घ) 'वंदे मातरम्' राष्ट्रीय गीत के रचयिता कौन थे? \*

1 point

*Mark only one oval.*

- (i) बंकिमचंद्र चट्टोपाध्याय
- (ii) रविंद्रनाथ टैगोर
- (iii) मोहम्मद इकबाल

---

This content is neither created nor endorsed by Google.

Google Forms

# Class- V Subject- Hindi ( Paper-2)

Date - 01-03-2021

Full Marks- 60

\* Required

1. Email address \*

---

2. Name \*

---

3. Section \*

*Check all that apply.*

A

B

C

D

E

F

G

H

4. Roll No. \*

---



**प्र.1 दिए गए प्रश्नों के उत्तर एक शब्द में लिखें:- (1×8=8)**

- क) क्रिया का मूल रूप क्या कहलाता है?
- ख) क्रिया का सामान्य रूप कौन - सा प्रत्यय लगाने से बनता है?
- ग) कर्म के आधार पर क्रिया के कितने रूप होते हैं?
- घ) 'महेश पतंग उड़ा रहा है' यह वाक्य अकर्मक क्रिया है या सकर्मक क्रिया?
- ङ) विपरीत शब्द का ज्ञान कराने वाले शब्द क्या कहलाते हैं?
- च) 'दिल का धड़कना' करने वाली क्रिया है या अपने आप होने वाली क्रिया है?
- छ) पास-पास प्रयुक्त होने वाले शब्दों में कौन-से चिह्न का प्रयोग किया जाता है?
- ज) पत्र के कितने प्रकार होते हैं?

**प्र.2 दिए गए अशुद्ध शब्दों का शुद्ध रूप लिखें:- (1×4=4)**

(क) प्रकृती (ख) बिमारि (ग) भासन (घ) दिवार

**प्र.3 नीचे दिए गए शब्दों के विलोम शब्द लिखें:- (1×4=4)**

(क) यश (ख) राजा (ग) शुभ (घ) सपूत

**प्र.4 दिए गए संज्ञा शब्दों से विशेषण शब्द बनाएँ:- (1×4= 4)**

(क) मानव (ख) चमक (ग) भारत (घ) दया

**प्र.5 दिए गए अपठित गद्यांश को पढ़कर प्रश्नों के उत्तर लिखें:- (5)**

बसंत ऋतु का सुहावना दिन था। एक लड़का जिसकी उम्र लगभग १६ - १७ वर्ष की होगी, हिमाचल की घाटी के ढलान पर अपनी भेड़ - बकरियाँ चरा रहा था। भेड़ - बकरियाँ चर रही थीं और वह अपनी मधुर आवाज में एक गीत गुनगुना रहा था। तभी वहाँ का राजा शिकार की तलाश में भटकते हुए उस घाटी में जा पहुँचा।

लड़के को खुश देखकर राजा ने उससे पूछा, तुम इतने प्रसन्न क्यों हो? लड़का राजा को पहचान नहीं पाया और बोला, मैं इसलिए प्रसन्न हूँ क्योंकि मैं अपने - आप को इस राज्य के राजा से अधिक धनी मानता हूँ। राजा हैरान होकर लड़के से पूछा, यह बताओ कि तुम राजा से ज्यादा धनी कैसे हो? लड़का बोला मेरे पास प्रकृति का भंडार है। यह मुझे सूरज की रोशनी देता है, यह नीला आकाश मुझे बाहें पसारे दुलारता है, यह घाटी अपनी पीठ पर मुझे बैठाकर यात्रा का सुख देती है। मैं मस्त होकर इन घने जंगलों की सुरसुराती हवा की बाँसुरी सुनता रहता हूँ। मुझे रोज पेट भर खाना मिल जाता है। साल भर में मैं अपनी जरूरत भर का काम कर लेता हूँ। न चोरों का डर, न घीना - झपटी की चिंता। अब तुम ही बताओ आत्मसंतोष का जो खज़ाना मेरे पास है वह राजा के पास होगा क्या? नहीं न! जानते हो इस संसार में आत्मसंतोष से बड़ा कोई धन नहीं है। मेरे पास आत्म संतोष रूपी धन है और यही मेरी प्रसन्नता का कारण है।

**प्रश्न:- (एक वाक्य में उत्तर लिखना अनिवार्य है)**

प्र.क) लड़का घाटी में क्या कर रहा था?

प्र.ख) राजा उस घाटी में कैसे पहुँच गया?

प्र.ग) लड़के के पास किस चीज का भंडार था?

प्र.घ) लड़के को घने जंगलों की सुरसुराती हवा में किसकी आवाज सुनाई देती है?

प्र.ङ) इस गद्यांश का उचित शीर्षक क्या होगा?

**प्र.6 दिए गए प्रश्नों के उत्तर एक वाक्य में लिखें :- (1×6=6)**

(वाक्य में उत्तर लिखना अनिवार्य है)

क) पृथ्वीराज को किसकी वजह से हार का मुँह देखना पड़ा था?

ख) नदियों की यात्रा कहाँ से आरंभ होती है?

ग) अंतरिक्ष की यात्रा करने वाले विश्व के पहले व्यक्ति कौन थे?

घ) अवकाश प्राप्ति के बाद वर्तमान में राकेश शर्मा अपना जीवन कहाँ व्यतीत कर रहे हैं?

ङ) चाँद जमीन का क्या कहलाता है?

च) रघुकुल सहाय के जीवन का क्या सपना था?

**प्र.7 दीर्घ उत्तरीय प्रश्नों के उत्तर लिखें:-**

**(2×2=4)**

( उत्तर विस्तार से लिखें।)

क) सूरज को पृथ्वी और दूसरे ग्रहों का बाबा क्यों कहते हैं?

ख) दीपक के किन गुणों के कारण उसे चुना गया?

**प्र.8 किसने - किससे कहा ? लिखें:-**

**(1×4=4)**

क) "घंटा बजने से पहले मैं आपकी प्रशंसा में एक दोहा सुनाना चाहता हूँ।"

ख) "तुम्हारी इस अंतरिक्ष यात्रा से प्राप्त सूचनाओं एवं अनुभवों का उपयोग मानव जाति के कल्याण के लिए किया जाएगा।"

ग) "इस पत्थर से रोज किसी न किसी को चोट लग जाती है।"

घ) "कह दो अपने सुल्तान से, हम किसी के गुलाम नहीं हैं।"

**प्र.9 निम्नलिखित किसी एक दोहे का अर्थ स्पष्ट करें:- (3)**

करत-करत अभ्यास के, जड़मति होत सुजान ।

रसरी आवत जात ते, सिल पर परत निसान ॥

अथवा

बड़े बड़ाई ना करें, बड़े ना बोलैं बोल ।

रहिमन हीरा कब कहे, लाख टका मेरो मोल।।

**प्र.10 संख्यावाचक विशेषण और परिमाणवाचक विशेषण में**

**उदाहरण सहित अंतर स्पष्ट करें। (3)**

**प्र.11 नीचे दिए गए शब्दों से वाक्य बनाएँ:- (1×3=3)**

(क) वरदान (ख) पत्र (ग) परंपरा

**प्र.12 मूल्यपरक प्रश्न:- (2)**

आप अपने मित्र के साथ मैदान में साइकिल चला रहे हैं । अचानक आपका मित्र साइकिल से गिर जाता है, उसे काफी चोट लग जाती है, खून बहने लगता है । इस स्थिति में आप अपने मित्र के लिए क्या करेंगे ? दो वाक्य में अपना विचार व्यक्त करते हुए उत्तर लिखें।

**प्र.13 किसी एक विषय पर पत्र लिखें:- (5)**

कक्षा में होने वाली चोरी की सूचना देते हुए प्रधानाचार्य महोदय को पत्र लिखें ।

अथवा

हिंदी भाषा के महत्व को बताते हुए अपने मित्र को पत्र लिखें।

**प्र.14 किसी एक विषय पर अनुच्छेद लिखें:- (5)**

- (क) स्वस्थ जीवन शैली
- (ख) बसंत ऋतु
- (ग) स्वावलंबन

5. \*

Files submitted:

---

This content is neither created nor endorsed by Google.

Google Forms

# Class- V Subject- Maths ( Paper-1)

Date - 03-03-2021

Full Marks- 20

\* Required

1. Email address \*

---

2. Name \*

---

3. Section \*

*Check all that apply.*

- A
- B
- C
- D
- E
- F
- G
- H

4. Roll No. \*

---

Choose the correct option.

5. (1) Volume of a cube of edge 9 cm is \*

1 point

*Mark only one oval.*

- (a) 81 [cu.cm](#)
- (b) 18 [cu.cm](#)
- (c) 21 [cu.cm](#)
- (d) 729 [cu.cm](#)

6. (2) Area of a square park is 225 sq.m.The length of the park is \*

1 point

*Mark only one oval.*

- (a) 10 m
- (b) 15 m
- (c) 20 m
- (d) 25 m

7. (3)The perimeter of a square is 204m.The length of its side is \*

1 point

*Mark only one oval.*

- (a) 50 m
- (b) 51m
- (c) 52 m
- (d) 53 m



8. (4) The side opposite to the right angle of a right angled triangle is called its \_\_\_\_ . \* 1 point

*Mark only one oval.*

- (a) base
- (b) angle
- (c) hypotenuse
- (d) chord

9. (5) The sum of all the angles of a triangle is \_\_\_\_ . \* 1 point

*Mark only one oval.*

- (a)  $180^\circ$
- (b)  $270^\circ$
- (c)  $90^\circ$
- (d)  $360^\circ$

10. (6) Average of 5,0.5,0.05,0.005 and 0.0005 is \* 1 point

*Mark only one oval.*

- (a) 0.5555
- (b) 1.1111
- (c) 0.1111
- (d) 5.5555

11. (7) 30% of 12 kg is \*

1 point

*Mark only one oval.*

- (a) 3.6 kg
- (b) 4.8 kg
- (c) 2.4 kg
- (d) 5.2 kg

12. (8) In a bar graph ,the numerical data is represented by rectangles of equal width with equal space between them. These rectangles are called \_\_\_\_.

1 point

*Mark only one oval.*

- (a) tally marks
- (b) bars
- (c) pictograph
- (d) pie chart

13. (9) The average of two numbers is 8,and the average of 4 numbers is 5.Hence the average of all the 6 numbers is \_\_\_\_.

1 point

*Mark only one oval.*

- (a) 4
- (b) 5
- (c) 6
- (d) 8

14. (10) Which of the following has a definite length? \*

1 point

*Mark only one oval.*

- (a) line
- (b) line segment
- (c) ray
- (d) plane

15. (11) The supplement of an angle of  $133^\circ$  is \_\_\_\_\_. \*

1 point

*Mark only one oval.*

- (a)  $47^\circ$
- (b)  $57^\circ$
- (c)  $67^\circ$
- (d)  $77^\circ$

16. (12) A shopkeeper purchased a bat for Rs.174.75 and sold it for Rs.245.50. How much money did he earn? \*

1 point

*Mark only one oval.*

- (a) Rs.70.25
- (b) Rs.70.75
- (c) Rs.71.75
- (d) Rs.71.25

17. (13)The angle between two perpendicular lines is \* 1 point

*Mark only one oval.*

- (a)  $30^\circ$   
 (b)  $60^\circ$   
 (c)  $90^\circ$   
 (d)  $180^\circ$

18. (14) If the diameter of a circle is 4.6 cm, its radius is \* 1 point

*Mark only one oval.*

- (a) 9.2 cm  
 (b) 9.4 cm  
 (c) 2.3 cm  
 (d) 2.4 cm

19. (15) A cuboid measures 36m X 24m X 18m.How many cubes of edge 6m can be cut from the cuboid? \* 1 point

*Mark only one oval.*

- (a) 36  
 (b) 72  
 (c) 144  
 (d) 288

20. (16) Which of the following is a polygon with least number of line segments? 1 point

\*

*Mark only one oval.*

- (a) square
- (b) hexagon
- (c) triangle
- (d) pentagon

21. (17) A man gets a salary of Rs.2400.He spends 60% for food. The amount spent on food is \_\_\_\_\_. \*

*Mark only one oval.*

- (a) Rs.1440
- (b) Rs.1420
- (c) Rs.1240
- (d) Rs.1204

22. (18) A courtyard 20m long and 15 m broad is to be paved with bricks of length 25 cm and breadth 12cm.The number of bricks required is\_\_\_\_. \*

*Mark only one oval.*

- (a) 10
- (b) 100
- (c) 1000
- (d) 10000

23. (19) Tina runs 3 times around a square field having each side 95 m long. How much distance does she run? \* 1 point

*Mark only one oval.*

- (a) 1040 m
- (b) 1140 m
- (c) 1410m
- (d) 1014 m

24. (20) One of the base angles of an isosceles triangle is  $70^\circ$ . The vertical angle of the triangle is \_\_\_\_.\* 1 point

*Mark only one oval.*

- (a)  $70^\circ$
- (b)  $60^\circ$
- (c)  $40^\circ$
- (d)  $20^\circ$

---

This content is neither created nor endorsed by Google.

Google Forms

# Class- V Subject- Maths ( Paper-2)

Date - 03-03-2021

Full Marks- 60

\* Required

1. Email address \*

---

2. Name \*

---

3. Section \*

*Check all that apply.*

- A
- B
- C
- D
- E
- F
- G
- H

4. Roll No. \*

---

**(I) Fill in the blanks:****(1x5=5)**

- (1) A \_\_\_\_\_ has no end points.
- (2) The complement of an angle of  $73^\circ$  is \_\_\_\_\_.
- (3) Perimeter of a square with side 9.5cm is \_\_\_\_\_.
- (4) Volume of a box of dimensions 8m X 6m X 4m = \_\_\_\_\_ cubic metre.
- (5) In an equilateral triangle, the three angles are of \_\_\_\_\_ each.

**(II) Write true or false for the following statements:****(1x5=5)**

- (a) A ray has only one end point.
- (b) 16% of 125 is 25.
- (c) The average of first four multiples of 3 is 8.
- (d) When two lines intersect and make an angle of  $90^\circ$ , they are said to be parallel to each other.
- (e) The diameter is the longest chord in a circle.



**(III) Answer in one word.****(1x5=5)**

- (1) The line segment having its end points on the circle and passing through the centre is called its\_\_\_\_\_.
- (2) The sum of the lengths of all sides of a rectilinear figure is called its\_\_\_\_\_.
- (3) The measure of the amount of surface enclosed by a closed bounded figure is called its\_\_\_\_\_.
- (4) The measure of the amount of space occupied by a solid is called its\_\_\_\_\_.
- (5) Pictorial representation of data is called\_\_\_\_\_.

**(IV) Match the column:****(1x5=5)****A**

- (a) Isosceles triangle
- (b) Perimeter of a circle
- (c) Area of a square
- (d) Straight angle
- (e) 65%.

**B**

- (1) side x side
- (2)  $180^\circ$
- (3) 65/100
- (4) circumference
- (5) two sides are equal

**(V) Solve the following :( Show working in each case).**

**(2x7=14)**

(1) What percent of 72 is 18?

(2) Classify each of the following angles as acute, obtuse or right angle.

(a)  $56^\circ$  (b)  $106^\circ$  (c)  $90^\circ$  (d)  $88^\circ$

(3) Find the circumference of a circle whose radius is 21 cm.

(4) The perimeter of a rectangle is 66 metres and its length is 18 metres. Find its breadth.

(5) Find the area of a rectangle of length 2.5 metre and breadth 1.5m.

(6) Find the supplementary angle of the following angles:

(a)  $150^\circ$  (b)  $88^\circ$

(7) Divide Rs.63.50 by 5.

**(VI) Do as directed:****(3x6= 18)**

- (1) Pramod has got a beautiful garden which is rectangular in shape. The length of the garden is 20 m and breadth is 12 m. Find the perimeter of the garden and the cost of fencing the garden if it costs Rs.300 per metre.
- (2) Two angles are complementary angles. One of the angles is 4 times of the other. Find the magnitude of the angles.
- (3) Find the diameter of the circle whose circumference is 66 cm.
- (4) What is the area of a square whose perimeter is 48 cm.
- (5) In a school with 1200 children, 55% are girls. What percent of children are boys? How many boys are there?
- (6) How many boxes, each of size 10 cm x 8 cm x 5 cm can be packed in a carton of size 1mX 72 cm X 50 cm ?

**(VII) Do as directed:****(4x2 =8)**

(1) The following data is about the number of students in class I to V in a school:--

Class	I	II	III	IV	V
Number of students	225	250	200	300	325

Draw a bar graph to represent the above data.

(2) Draw a circle of radius 3 cm using compass. Draw the following on it.

(a) Centre O

(b) Radius OA

(c) Chord PQ

(d) Points X, Y and Z on the exterior of the circle.

5. \*

Files submitted:

---

This content is neither created nor endorsed by Google.

Google Forms

# Class- V Subject- Social Science ( Paper-1)

Date - 24-02-2021

Full Marks- 20

\* Required

1. Email address \*

---

2. Name \*

---

3. Section \*

*Check all that apply.*

A

B

C

D

E

F

G

H

4. Roll No. \*

---

Choose the correct option.

5. 1. How much time does a paper waste take to decompose? \*

1 point

*Mark only one oval.*

- a) 2-5 weeks
- b) 2-6 weeks
- c) 2-6 days
- d) 2-3 years

6. 2. Who is the 'Father of Plastic Surgery'? \*

1 point

*Mark only one oval.*

- a) Sushruta
- b) Marie Curie
- c) Sarvepalli Radhakrishnan
- d) Rabindranath Tagore

7. 3. Who among the following was not a Radical? \*

1 point

*Mark only one oval.*

- a) Lala Lajpat Rai
- b) Bipin Chandra Pal
- c) Gopal Krishna Gokhale
- d) Bal Gangadhar Tilak

8. 4. The Airbus A380 can carry over \_\_\_\_\_ passengers. \*

1 point

*Mark only one oval.*

a) 825

b) 870

c) 850

d) 580

9. 5. Which two seas does the Suez Canal join? \*

1 point

*Mark only one oval.*

a) Baltic Sea, Arabian Sea

b) Mediterranean Sea, Red Sea

c) Aral Sea, Java Sea

d) South China Sea, Caspian Sea

10. 6. \_\_\_\_\_ are storms characterized by strong cold winds and lots of snow. \*

1 point

*Mark only one oval.*

a) Tornadoes

b) Blizzards

c) Tsunami

d) Avalanche

11. 7. Which is the longest river in North America? \*

1 point

*Mark only one oval.*

- a) Missouri
- b) Rio Grande
- c) Colorado
- d) Mississippi

12. 8. Which of the following is not the reason of soil pollution? \*

1 point

*Mark only one oval.*

- a) Solid wastes
- b) chemical fertilizers and pesticides
- c) Refuse from mines
- d) pollens from flowers

13. 9. Which is the oldest method of waste disposal? \*

1 point

*Mark only one oval.*

- a) Landfills
- b) Burning
- c) Open Dumping
- d) Composting



14. 10. Who formed the Indian National Congress? \*

1 point

*Mark only one oval.*

- a) Womesh Chandra Bonnerjee
- b) Allan Octavian Hume
- c) Tantia Tope
- d) Rani Lakshmi Bai

15. 11. Gastroenteritis is caused by drinking \*

1 point

*Mark only one oval.*

- a) Salty water
- b) Fresh water
- c) Polluted water
- d) Underground water

16. 12. Who invented Radio? \*

1 point

*Mark only one oval.*

- a) John Logie Baird
- b) Wright Brothers
- c) Alexander Graham Bell
- d) Guglielmo Marconi

17. 13. When did the First War of Independence broke out? \*

1 point

*Mark only one oval.*

a) 1885

b) 1857

c) 1875

d) 1862

18. 14. Who gave the slogan 'Jai Hind'? \*

1 point

*Mark only one oval.*

a) Jawaharlal Nehru

b) Mahatma Gandhi

c) Subhas Chandra Bose

d) Sardar Vallabhbhai Patel

19. 15. Which of the following novel is not written by Jane Austen? \*

1 point

*Mark only one oval.*

a) Emma

b) Pride and Prejudice

c) Gora

d) Persuasion

20. 16. \_\_\_\_\_ are made for the farmer's families and for the workers. \* 1 point

*Mark only one oval.*

- a) homesteads  
 b) silos  
 c) ranches  
 d) houses

21. 17. Cyclones are always accompanied by \* 1 point

*Mark only one oval.*

- a) Earthquakes  
 b) Forest Fires  
 c) Landslides  
 d) Heavy Showers

22. 18. The First President of Independent India was \* 1 point

*Mark only one oval.*

- a) Mahatma Gandhi  
 b) Subhas Chandra Bose  
 c) Dr. Rajendra Prasad  
 d) Jawaharlal Nehru

23. 19. The rule of the English East India Company ended in \*

1 point

*Mark only one oval.*

a) 1858

b) 1857

c) 1877

d) 1885

24. 20. When is National Sports Day celebrated? \*

1 point

*Mark only one oval.*

a) 29 July

b) 29 August

c) 23 November

d) 24 September

---

This content is neither created nor endorsed by Google.

Google Forms

# Class- V Subject- Social Science ( Paper-2)

Date - 24-02-2021

Full Marks- 60

\* Required

1. Email address \*

---

2. Name \*

---

3. Section \*

*Check all that apply.*

A

B

C

D

E

F

G

H

4. Roll No. \*

---

**1. Define:****[1×9=9]**

- a) silos                      b) vog                      c) organic                      d) revolutionary  
e) tablet                      f) philosopher                      g) sepoy                      h) racist policy  
i) rain water harvesting

**2. Give answer in detail:****[3×7=21]**

- a) In the Prairies, machines have almost replaced manual labour. Explain  
b) What causes air pollution? How is air pollution harmful?  
c) What should we do to protect our environment?  
d) What are the main causes of floods? Write two ways in which floods can be controlled.  
e) How did modern education led to the rise of nationalism in India?  
f) How were the Moderates different from the Radicals?  
g) Why do we need an efficient system of transport?

**3. Short answer questions:****[2×5=10]**

- a) How have humans emerged as the greatest threat to the environment?  
b) What is Compost? How is it produced?  
c) Why does an earthquake occur? How is it harmful to the nature?  
d) Write two sentences on Savitribai Phule.  
e) What was the contribution of Subhas Chandra Bose to our national movement?

**4. Fill in the blanks:****[1×6=6]**

- a) \_\_\_\_\_ was the last mughal emperor.
- b) \_\_\_\_\_ is our national song.
- c) \_\_\_\_\_ of Germany developed the printing press.
- d) \_\_\_\_\_ method of waste disposal is a breeding ground for rats and mosquitoes.
- e) \_\_\_\_\_ presided over the first meeting of Indian National Congress held in Bombay.
- f) \_\_\_\_\_ was the first Asian to win Noble Prize for Literature.

**5. Name the following:****[1×6=6]**

- a) This incident led to the start of Civil Disobedience Movement:
- b) Highest airport of India:
- c) He proved that plants and animals also respond to heat, light and cold:
- d) He annexed the territory of Jhansi under the Doctrine of Lapse:
- e) In this natural disaster a mass of snow, ice and rocks slides down a mountain slope very fast:
- f) Shri Narendra Modi launched this campaign as a tribute to Mahatma Gandhi's mission of 'Clean India' in 2014.

**6. Name the famous personalities who gave the following statements:** **[1×4=4]**

- a) "There is no God higher than truth."
- b) "Give me blood and I will give you freedom."
- c) "The true teachers are those who help us think for ourselves."
- d) "He scores goals like runs in cricket."

**7. Write the years in which the following events occurred.** **[1×4=4]**

- a) Formation of Indian National Congress.
- b) Jallianwala Bagh massacre.
- c) Start of Non-Cooperation Movement.
- d) The Congress demanded for 'Purna Swaraj'.

5. \*

Files submitted:

---

This content is neither created nor endorsed by Google.

Google Forms



# Class- V Subject- General Science ( Paper-1)

Date - 26-02-2021

Full Marks- 20

\* Required

1. Email address \*

---

2. Name \*

---

3. Section \*

*Check all that apply.*

A

B

C

D

E

F

G

H

4. Roll No. \*

---

Choose the correct option.

5. 1) Needed to cast a shadow \*

1 point

*Mark only one oval.*

- a) translucent or opaque object
- b) source of light
- c) screen
- d) all of these

6. 2) The moving parts of machines can wear out due to \*

1 point

*Mark only one oval.*

- a) electrostatic force
- b) lubrication
- c) friction
- d) gravity

7. 3) Which of the following is a non-luminous object \*

1 point

*Mark only one oval.*

- a) sun
- b) moon
- c) glow worm
- d) candle flame

8. 4) Pick the odd one out \*

1 point

*Mark only one oval.*

- a) coal
- b) petroleum
- c) solar energy
- d) natural gas

9. 5) Which of the following is true for gases: \*

1 point

*Mark only one oval.*

- a) they have fixed volume
- b) they have fixed shape
- c) they cannot move freely
- d) they can move around freely

10. 6) Burning of garbage leads to (i)\_\_\_\_\_. (i) can cause deadly disease such as (ii)\_\_\_\_\_ and asthma. Which of the following options correctly fills the blanks (i) and (ii) . \*

1 point

*Mark only one oval.*

- a) (i) air pollution; (ii) lung cancer
- b) (i) water pollution; (ii) lung cancer
- c) (i) air pollution; (ii) cholera
- d) (i) water pollution; (ii) typhoid

11. 7) Which of the following is an example of kinetic energy? \*

1 point

*Mark only one oval.*

- a) a sleeping person
- b) a moving car
- c) a person watching television
- d) stagnant water

12. 8) Which of the following is a complex machine? \*

1 point

*Mark only one oval.*

- a) pulley
- b) sewing machine
- c) wheel and axle
- d) see-saw

13. 9) Which of the following precaution you should take if diarrhoea spreads rapidly through your town? \*

1 point

*Mark only one oval.*

- a) avoid listening to harsh sound
- b) drink only clean boiled water
- c) cover your nose while you sneeze
- d) use band aids

14. 10) The process by which liquid changes into solid on cooling: \*

1 point

*Mark only one oval.*

- a) freezing
- b) evaporation
- c) condensation
- d) melting

15. 11) Which of the following is a non-metallic mineral and also used as fertilizer? \*

1 point

*Mark only one oval.*

- a) phosphate
- b) nitrate
- c) sulphate
- d) all of these

16. 12) Nuts and bolts are example of \*

1 point

*Mark only one oval.*

- a) lever
- b) wedge
- c) screw
- d) pulley

17. 13) Which of the following are artificial satellites used for? \*

1 point

*Mark only one oval.*

- a) communication
- b) navigation
- c) scientific research
- d) all of these

18. 14) When we see a thin portion of the moon from the Earth, it is called \*

1 point

*Mark only one oval.*

- a) gibbous
- b) half
- c) crescent
- d) full

19. 15) Which of the following determines the state of matter? \*

1 point

*Mark only one oval.*

- a) size
- b) shape
- c) arrangement of molecules
- d) structure

20. 16) Which of the following can be compressed? \*

1 point

**P: Steam**

**Q: Oxygen**

**R: Carbon Dioxide**

*Mark only one oval.*

- a) P and Q only
- b) P and R only
- c) Q and R only
- d) all P,Q and R

21. 17) What do most of the rocks have in common? \*

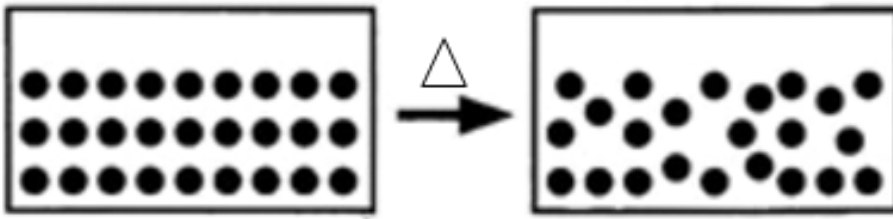
1 point

*Mark only one oval.*

- a) same size
- b) same colour
- c) they have minerals
- d) same shape

22. 18) Which process is shown in the figure below: \*

1 point



Mark only one oval.

- a) melting
- b) boiling
- c) condensing
- d) subliming

23. 19) India's first unmanned mission to the moon \*

1 point

Mark only one oval.

- a) Chandrayaan-I
- b) Apollo 11
- c) Aryabhata
- d) Sputnik-1

24. 20) Which of the following is not a greenhouse gas? \*

1 point

Mark only one oval.

- a) Methane
- b) Ozone
- c) Carbon dioxide
- d) Nitrogen



This content is neither created nor endorsed by Google.

Google Forms

# Class- V Subject- General Science ( Paper-2)

Date - 26-02-2021

Full Marks- 60

\* Required

1. Email address \*

---

2. Name \*

---

3. Section \*

*Check all that apply.*

A

B

C

D

E

F

G

H

4. Roll No. \*

---

**I. Define:** [2X3=6]

1. Tides
2. Expansion
3. Igneous Rock

**II. Answer the following in one sentence:** [1X5=5]

1. What is magma?
2. State any one factor on which the size of a shadow depends.
3. What is density?
4. What are pollutants?
5. What is the core of the Earth?

**III. Answer these questions briefly:** [2X4=8]

1. What is matter? Give example.
2. What happens when a solid is heated?
3. State the energy conversion in the following cases:
  - (i) Wind mill
  - (ii) Photosynthesis
4. State the effects of force in the following cases:
  - (i) Hitting a moving ball with a cricket bat
  - (ii) Squeezing a sponge

**IV. Answer the questions in detail: [3X3=9]**

1. What are the causes of air pollution?(*any three points*)
2. State the advantages of friction. (*any three points*)
3. Write one prominent feature of the following planets:  
(i) Venus      (ii) Jupiter      (iii) Saturn

**V. Give reason: [2X2=4]**

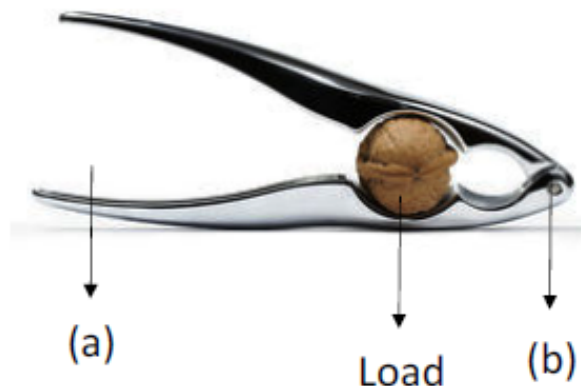
1. A screw is preferred over a nail for joining two objects.
2. Earth is known as a unique planet. (*any two points*)

**VI. Differentiate between the following terms: [2X2=4]**

1. Metallic and Non-Metallic minerals
2. Physical change and Chemical change

**VII. A) Draw and label a Solar Eclipse [3]**

**B) Label the guidelines (a) and (b) in the following simple machine: [1]**



**VIII. Name the following: [1X4=4]**

1. The object that has to be moved around or lifted:  
\_\_\_\_\_
2. Materials that do not allow any light to pass through them: \_\_\_\_\_
3. The rock used in making kitchen slab: \_\_\_\_\_
4. The force which acts on objects in downward direction:  
\_\_\_\_\_

**IX. Rewrite the sentences by changing the underlined words: [1X4=4]**

1. Phases are of two types: solar and lunar.
2. Pulley is a long-inclined plane wrapped around a nail.
3. The human hand acts as a second-class lever while attempting to lift a load.
4. The attractive or repulsive force that acts due to presence of charges is frictional force.

**X. Complete the series: [1X4=4]**

1. human body : sweat :: vehicle : \_\_\_\_\_
2. \_\_\_\_\_ : natural gas :: metallic mineral : gold
3. rocks from outer space : \_\_\_\_\_ :: rocky bodies present between Mars and Jupiter : asteroids
4. fog : \_\_\_\_\_ :: drying of clothes : evaporation

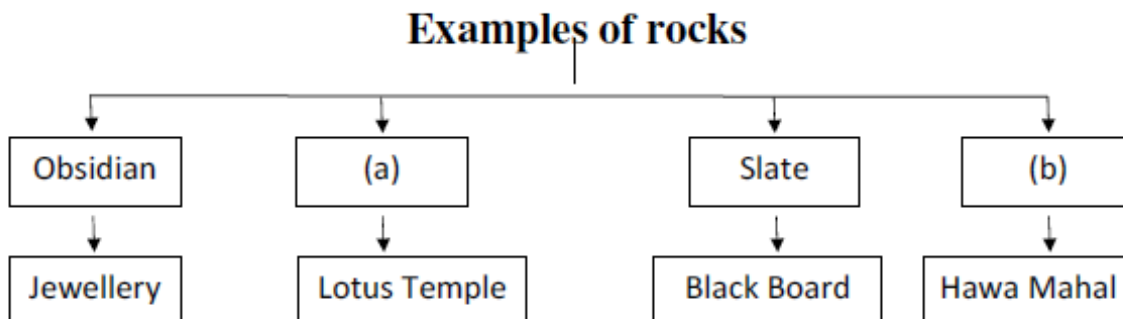
**XI. Give one example for each of the following:**

**[1X2=2]**

1. Translucent object : \_\_\_\_\_
2. Metamorphic rock : \_\_\_\_\_

**XII. Given below is a flowchart related to the examples of rocks. Study the same and label the guidelines (a) and (b): [1X2=2]**

*(Do not copy the flowchart, write only the answers)*



**XIII. Fill the blanks: [1X2=2]**

1. Molten rock that flows out on the surface of the Earth is called \_\_\_\_\_.
2. Spectacles are made of \_\_\_\_\_ object.

**XIV. Identify the following from the given description:****[1X2=2]**

1. Rock formed from sandstone; hard in nature and used in ceramic industry: \_\_\_\_\_
2. The phase of moon when three-fourth of it is visible from the Earth: \_\_\_\_\_

5. \*

Files submitted:

---

This content is neither created nor endorsed by Google.

Google Forms

# Class- V Subject- Sanskrit ( Paper-2)

Date - 20-02-2021

Full Marks- 30

\* Required

1. Email address \*

---

2. Name \*

---

3. Section \*

*Check all that apply.*

- A  
 B  
 C  
 D  
 E  
 F  
 G  
 H

4. Roll No. \*

---



1) हिन्दी भाषा में अनुवाद करें –

[2 +2 +1= 5 ]

क) किम् यूयम् खेलथ?

आम्, वयम् खेलामः ।

ख) किम् त्वम् छात्रः असि?

आम्, अहम् छात्रः अस्मि ।

ग) के खादन्ति?

वानराः खादन्ति ।

2) निर्देशानुसार वचन बदलकर वाक्य पुनः लिखिए –

[1 x 2 = 2 ]

क) त्वम् खादसि । (बहुवचने) – .....

ख) अहम् पठामि । (द्विवचने) – .....

3) कोष्ठक में दिए गए उचित क्रियापद से वाक्य पूरा करें –

[0.5 x 4 = 2]

क) वयम् ..... । ( लिखाम, लिखामः, लिखन्ति )

ख) त्वम् ..... । ( नमति, नमथ, नमसि )

ग) अश्वः ..... । ( धावति, नमति, लिखति )

घ) शुकः ..... । ( चरति, वदति, खेलति )

4) उदाहरण के अनुसार वाक्य बहुवचन में बदलकर लिखें –

[1x 2 = 2 ]

उदाहरण– बालकः खेलति । , बालकाः खेलन्ति ।

क) शुकः वदति । .....

ख) गजः चलति । .....

5) मंजूषा से उचित पद चुनकर प्रश्न-निर्माण कीजिए – [0.5 x 4 = 2 ]  
( मंजूषा – कः, कौ, के )

- क) बालकाः खेलन्ति । ..... खेलन्ति ?  
ख) वानरः खादति । ..... खादति ?  
ग) छात्रौ पठतः । ..... पठतः ?  
घ) छात्रः लिखति । ..... लिखति ?

6) परस्पर मेल कीजिए – [0.5 x 4 = 2 ]

(क)	(ख)
हंसः	धावति
हरिणः	नृत्यति
शशकः	तरति
मयूरः	चरति

7) मंजूषा से उचित क्रियापद चुनकर वाक्य पूरा कीजिए – [0.5x 2 = 1]  
( असि, अस्मि )

- क) अहम् शुकः ..... ।  
ख) त्वम् कपोतः ..... ।

8) निम्नलिखित शब्दों के संस्कृत शब्द लिखें – [0.5 x 4 = 2 ]

- बेला – ..... गुलाबी – .....  
बरगद – ..... नेवला – .....

9) कोष्ठक में दिए गए अंकों के संस्कृत शब्द से रिक्त स्थानों को भरें –

[0.5 x 4 = 2 ]

- क) ..... वानरः कूर्दति । ( 1 )  
 ख) ..... पुस्तकानि सन्ति । ( 3 )  
 ग) ..... पत्राणि पतन्ति । ( 9 )  
 घ) तत्र ..... वृक्षाः सन्ति । ( 7 )

10) शब्दरूप लिखें –

[ 2 x 2 = 4 ]

- क) बालक – पंचमी, षष्ठी  
 ख) लता – षष्ठी, सप्तमी

11) धातुरूप लिखें –

[ 3 x 2 = 6 ]

- क) नम् – लङ् लकार (Past)  
 ख) पा – लृट् लकार (Future)

5. \*

Files submitted:

---

This content is neither created nor endorsed by Google.

Google Forms

# Class- V Subject- Sanskrit ( Paper-1)

Date - 20-02-2021

Full Marks- 10

\* Required

1. Email address \*

---

2. Name \*

---

3. Section \*

*Check all that apply.*

- A  
 B  
 C  
 D  
 E  
 F  
 G  
 H

4. Roll No. \*

---

नीचे दिए गए विकल्पों में से सही उत्तर चुनिए -

5. 1. अहम् \_\_\_\_\_ । \*

1 point

*Mark only one oval.*

क) पठसि

ख) पठामि

ग) पठति

घ) पठतः

6. 2. त्वम् \_\_\_\_\_ । \*

1 point

*Mark only one oval.*

क) नमसि

ख) नमतः

ग) नमति

घ) नमामि

7. 3. \_\_\_\_\_ पठावः । \*

1 point

*Mark only one oval.*

क) वयम्

ख) अहम्

ग) आवाम्

घ) लम्

8. 4. \_\_\_\_\_ हसथ । \*

1 point

*Mark only one oval.*

क) त्वम्

ख) अहम्

ग) युवाम्

घ) यूयम्

9. 5. 'कुत्र' शब्द का अर्थ है - \*

1 point

*Mark only one oval.*

क) कहाँ

ख) क्या

ग) वहाँ

घ) कौन

10. 6. \_\_\_\_\_ खेलन्ति । \*

1 point

*Mark only one oval.*

क) बालकः

ख) बालकाः

ग) बालकौ

घ) बालक

11. 7. \_\_\_\_\_ पठतः। \*

1 point

*Mark only one oval.*

क) छात्रः

ख) छात्राः

ग) छात्रौ

घ) छात्रा

12. 8. अहम् शुकः \_\_\_\_\_। \*

1 point

*Mark only one oval.*

क) अस्मि

ख) असि

ग) अस्ति

घ) स्तः

13. 9. सः हरिणः \_\_\_\_\_। \*

1 point

*Mark only one oval.*

क) असि

ख) अस्ति

ग) स्तः

घ) अस्मि

14. 10. ते गजाः \_\_\_\_\_ । \*

1 point

*Mark only one oval.*

क) अस्ति

ख) स्मः

ग) सन्ति

घ) असि

---

This content is neither created nor endorsed by Google.

Google Forms



# Class- V Subject- French ( Paper-1)

Date - 20-02-2021

Full Marks- 10

\* Required

1. Email address \*

---

2. Name \*

---

3. Section \*

*Check all that apply.*

- A
- B
- C
- D
- E
- F
- G
- H

4. Roll No. \*

---

Choose the correct option.

5. 1. \_\_\_\_\_ est le 3ième mois de l'année. \*

1 point

*Mark only one oval.*

- A. Janvier
- B. Mars
- C. Avril
- D. Juin

6. 2. Comment ça va ? \*

1 point

*Mark only one oval.*

- A. Je m'appelle rahul
- B. Ça va bien ,merci
- C. Gateau
- D. Avril

7. 3. Il ya combien de jours dans une semaine? \*

1 point

*Mark only one oval.*

- A. 3
- B. 12
- C. 7
- D. 10

8. 4. \_\_\_\_\_ est le dernier jour de la semaine. \*

1 point

*Mark only one oval.*

- A. Dimanche
- B. Juillet
- C. Lundi
- D. Mardi

9. 5. Holi est en \_\_\_\_\_ \*

1 point

*Mark only one oval.*

- A. Mars
- B. Mai
- C. Novembre
- D. Décembre

10. 6. Comment s'appelle " Aller " en anglais. \*

1 point

*Mark only one oval.*

- A. To come
- B. To speak
- C. To dance
- D. To go

11. 7. Comment s'appelle "to speak" in french. \*

1 point

*Mark only one oval.*

- A. Parler
- B. Chanter
- C. Danser
- D. Écouter

12. 8. Comment s'appelle "pink" en français. \*

1 point

*Mark only one oval.*

- A. Rouge
- B. Rose
- C. Ruge
- D. Roug

13. 9. Quelle est votre nationalité? \*

1 point

*Mark only one oval.*

- A. Indien/ indienne
- B. Français/ française
- C. Pakistanais/ pakistanaise
- D. Italien/ italienne

14. 10. Comment s'appelle "uncle " en français. \*

1 point

*Mark only one oval.*

- A. Tante
  - B. Oncle
  - C. Oncl
  - D. None of the above
- 

This content is neither created nor endorsed by Google.

Google Forms

# Class- V Subject- French ( Paper-2)

Date - 20-02-2021

Full Marks- 30

\* Required

1. Email address \*

---

2. Name \*

---

3. Section \*

*Check all that apply.*

A

B

C

D

E

F

G

H

4. Roll No. \*

---

**I. Mettez la forme de article défini qui convient. 3M**

- 1) \_\_\_\_\_ horloges
- 2) \_\_\_\_\_ écoles
- 3) \_\_\_\_\_ glace
- 4) \_\_\_\_\_ garçon
- 5) \_\_\_\_\_ oiseau
- 6) \_\_\_\_\_ filles.

**II. Changez les nationalite en form feminin et pluriel: 5M**

Masculine	feminine	plural
1) Indien	_____	_____
2) Chinois	_____	_____
3) Italien	_____	_____
4) Français	_____	_____
5) Anglais	_____	_____

**III. Écrivez conjugaison le verbe "Aller" 4M**

- 1) \_\_\_\_\_
- 2) \_\_\_\_\_
- 3) \_\_\_\_\_
- 4) \_\_\_\_\_
- 5) \_\_\_\_\_
- 6) \_\_\_\_\_

7) \_\_\_\_\_

8) \_\_\_\_\_

**IV. Écrivez en français : 3M**

1) Sunday

2) Monday

3) Friday

4) Saturday

5) Wednesday

6) Thursday

**V. Associez les éléments de deux colonnes : 2.5M**

1) Les cousins

a) les enfants du fils ou de la fille

2) La grand – mère

b) La mère du père ou de la mère

3) L'oncle

c) le frère du père ou de la mère

4) Le neveu

d) le fils de l'oncle ou de la tante

5) Les petits- enfants

e) le fils du frère ou de la soeur

**VI. Conjuguez ces verbes: 2.5M**

1) Je \_\_\_\_\_ ( Regarder) télé.

2) TU \_\_\_\_\_ ( parler ) français.

3) Il \_\_\_\_\_ ( aimer) chocolat.

4) Nous \_\_\_\_\_ ( étudier) français

5) Vous \_\_\_\_\_ ( chanter) chansons.

**VII. Écrivez les mois de l'année en français. 6M**

1) January-

2) February –

3) March –

4) April –

5) May-

6) June –



7) July –

8) August –

9) September –

10) October –

11) November –

12) December –

**VIII. Écrivez 8 colours nom en français. 4 M**

5. \*

Files submitted:

---

This content is neither created nor endorsed by Google.

Google Forms

# Class- V Subject- German ( Paper-1)

Date - 20-02-2021

Full Marks- 10

\* Required

1. Email address \*

---

2. Name \*

---

3. Section \*

*Check all that apply.*

A

B

C

D

E

F

G

H

4. Roll No. \*

---

Finden sie die richtigen verbformen:

5. 1. Ich \_\_\_\_\_ aus Frankreich. \*

1 point

*Mark only one oval.*

a. kommt

b. wohnt

c. komme

d. wohne

6. 2. Er \_\_\_\_\_ zehn Jahre alt. \*

1 point

*Mark only one oval.*

a. ist

b. bist

c. sind

d. bin

7. 3. \_\_\_\_\_ du eine Schwester? \*

1 point

*Mark only one oval.*

a. habe

b. hast

c. hat

d. habt

8. 4. Wo \_\_\_\_\_ Paula? \*

1 point

*Mark only one oval.*

- a. bin
- b. bist
- c. ist
- d. seid

9. 5. \_\_\_\_\_ du Andreas? \*

1 point

*Mark only one oval.*

- a. Heiße
- b. Heißt
- c. Heißen
- d. ist

Ergänze: Artikel

10. 6. Ist das \_\_\_\_\_ Hund? \*

1 point

*Mark only one oval.*

- a. dein
- b. deine
- c. meine
- d. keine

11. 7. Sie hat \_\_\_\_\_ Tante. \*

1 point

*Mark only one oval.*

- a. einen
- b. ein
- c. eine
- d. kein

12. 8. Er hat \_\_\_\_\_ Onkel. \*

1 point

*Mark only one oval.*

- a. eine
- b. einen
- c. dein
- d. ein

13. 9. \_\_\_\_\_ Opa heißt Hannes. \*

1 point

*Mark only one oval.*

- a. Mein
- b. meine
- c. meinen
- d. seinen

14. 10. Das ist \_\_\_\_\_ Familien. \*

1 point

*Mark only one oval.*

- a. mein
  - b. meinen
  - c. miene
  - d. meine
- 

This content is neither created nor endorsed by Google.

Google Forms

# Class- V Subject- German ( Paper-2)

Date - 20-02-2021

Full Marks- 30

\* Required

1. Email address \*

---

2. Name \*

---

3. Section \*

*Check all that apply.*

A

B

C

D

E

F

G

H

4. Roll No. \*

---

**1. Lies den Text und antwort die fragen: (1x5=5)**

Hallo Stefan,  
 Ich heie Lisa und bin elf Jahre alt. Ich komme aus Deutschland. Ich wohne in Augsburg und spricht Deutsch. Hier in meine Familien habe ich meine Mama sie heit Marisa, und mein Papa heit Florian er ist vierunddreiig Jahre alt. Er kommt aus Frankreich und spricht perfekt Franzsisch. Ich habe eine Schwester auch, sie heit Tina. Ich habe ein Bruder auch aber er wohnt in Berlin mit meine Groeltern. Er heit Pierre. Wir haben ein Hund auch er heit Gandalf. Ich freue mich schon auf dein antwort.  
 Viele Gre  
 Lisa

- Wie alt ist Lisa?
- Wie viele Bruder hat Lisa?
- Woher kommt Florian?
- Welche Sprache spricht Lisa?
- Wo wohnt Pierre?

**2. Ergnze die richtigen verbform: (2x3=6)**

	Sein	Wohnen	Kommen
Ich			
Du			
Er/sie/es			
Wir			
Ihr			
Sie/sie			

**3. Welche Sprache spricht man in: (.5x8=4)**

- |                |       |                 |       |
|----------------|-------|-----------------|-------|
| a. Deutschland | _____ | e. Itanien      | _____ |
| b. Spanien     | _____ | f. Greichenland | _____ |
| c. England     | _____ | g. Schweiz      | _____ |
| d. Trkei      | _____ | h. Frankreich   | _____ |



- 4. Wie viel ist das:** **(1x5=5)**
- a. Fünf plus neun ist \_\_\_\_\_
  - b. Acht minus sieben ist \_\_\_\_\_
  - c. Drei mal sechs ist \_\_\_\_\_
  - d. Zwei minus sieben plus vier ist \_\_\_\_\_
  - e. Elf minus null plus acht ist \_\_\_\_\_
- 5. Richtig schreiben:** **(1x5=5)**
- a. Wohnt - Brigitte - Wo - ?
  - b. Toby - hat - Bruder - einen - ?
  - c. Sprache - Oma - Welche - die - spricht - ?
  - d. Mutter - die - wie - heißt - ?
  - e. Alt - sie - Wie - ist - ?
- 6. Schreib in Englisch** **(1x5=5)**
- a. Monika spricht Englisch.
  - b. Der Papa von Sophie kommt aus Spanien.
  - c. Ich kenne das Deutsche Alphabet.
  - d. Anna hat keinen Hund.
  - e. Max spielt Gitarre.

5. \*

Files submitted:

---

This content is neither created nor endorsed by Google.

Google Forms

# Class- V Subject- Spanish ( Paper-1)

Date - 20-02-2021

Full Marks- 10

\* Required

1. Email address \*

---

2. Name \*

---

3. Section \*

*Check all that apply.*

- A
- B
- C
- D
- E
- F
- G
- H

4. Roll No. \*

---

Completa con el verbo correcto:-

5. 1. Yo ..... en casa. \*

1 point

*Mark only one oval.*

- a) esta
- b) estas
- c) estoy
- d) estan

6. 2. Nosotros ..... contentos. \*

1 point

*Mark only one oval.*

- a) estamos
- b) esta
- c) estan
- d) estais

7. 3. ¿Donde ..... sus amigos? \*

1 point

*Mark only one oval.*

- a) esta
- b) estan
- c) estoy
- d) estais

8. 4. Monika..... en Barcelona. \*

1 point

*Mark only one oval.*

- a) esta
- b) estas
- c) estan
- d) estais

9. 5. Avinash ..... con su amigo. \*

1 point

*Mark only one oval.*

- a) habla
- b) hablas
- c) hablais
- d) hablan

10. 6. Nosotros ..... español. \*

1 point

*Mark only one oval.*

- a) estudiamos
- b) estudia
- c) estudian
- d) estudiais

11. 7. Ella ..... una canción de película. \*

1 point

*Mark only one oval.*

- a) cantas
- b) canta
- c) canto
- d) cantais

12. 8. Mi padre ..... en un hospital. \*

1 point

*Mark only one oval.*

- a) trabajas
- b) trabajan
- c) trabaja
- d) trabajo

13. 9. Mi perro es ..... \*

1 point

*Mark only one oval.*

- a) traviesa
- b) travieso
- c) traviesos
- d) travies

14. 10. Tu ..... es alto. \*

1 point

*Mark only one oval.*

- a) abuela
  - b) madre
  - c) hermana
  - d) padre
- 

This content is neither created nor endorsed by Google.

Google Forms

# Class- V Subject- Spanish ( Paper-2)

Date - 20-02-2021

Full Marks- 30

\* Required

1. Email address \*

---

2. Name \*

---

3. Section \*

*Check all that apply.*

A

B

C

D

E

F

G

H

4. Roll No. \*

---

**I. Respond to the following questions in brief :- FM- 15**

1. Es un monumento muy grande y bello –
2. Cómo esta Maria? (if scared-feminine)
3. Quién es Lola?
4. Quién se llama Manolo?
5. Quién trabaja en hospital?
6. Quién tiene solo 2 años, pero ya habla -
7. Quién toca la guitarra y lee el periodico -
8. La abuela de quién cocina un gazpacho delicioso -
9. El plural de 'mi perro' -
10. El plural de 'tu mesa' -
11. La hija de mi madre es mi .....
12. Los padres de mi padre son mis .....
13. Qué día es hoy?
14. Qué día es mañana?
15. Cuándo es el día nacional de la India?



**II. Answer these questions in Spanish :-**

FM- 15

- |  |   |
|--|---|
| 1. Escribe numeros desde 1 - 40  | 2 |
| 2. Escribe conjugación de los verbos estar, ser, hablar, estudiar, cantar. | 5 |
| 3. Cuántos días hay en una semana?   | 1 |
| 4. Cuántos meses hay en un año?  | 1 |
| 5. Cuáles son las estaciones del año?                                      | 2 |
| 6. Qué tiempo hace en verano?  | 1 |
| 7. Qué tiempo hace en primavera?   | 1 |
| 8. Qué tiempo hace en otoño?   | 1 |
| 9. Qué tiempo hace en invierno?  | 1 |

5. \*

Files submitted:

---

This content is neither created nor endorsed by Google.

Google Forms

# Class- V Subject- Japanese ( Paper-1)

Date - 20-02-2021

Full Marks- 10

\* Required

1. Email address \*

---

2. Name \*

---

3. Section \*

*Check all that apply.*

A

B

C

D

E

F

G

H

4. Roll No. \*

---

Choose the correct answer from following options.

5. 1. Find the correct translation for “I do not like apple.” \*

1 point

*Mark only one oval.*

- A. Watashi wa ringo desu.
- B. Watashi wa ringo wo suki dewa arimasen.
- C. Watashi wa ringo ga suki dewa arimasen.
- D. Watashi wa ringo wo tabemasu.

6. 2. Find the correct meaning of “gogoku ji desu.” \*

1 point

*Mark only one oval.*

- A. 9 o`clock
- B. Gozen 9 o`clock
- C. 7 o`clock
- D. 9 PM

7. 3. Find the correct meaning of “tomodachi.” \*

1 point

*Mark only one oval.*

- A. Father
- B. Brother
- C. Younger brother
- D. Friend

8. 4. Find the correct meaning of “ninjin.” \*

1 point

*Mark only one oval.*

- A. Potato
- B. Tomato
- C. Carrot
- D. None of these

9. 5. Find the correct translation of “I want to become a doctor.” \*

1 point

*Mark only one oval.*

- A. Watashi wa isha desu.
- B. Anata wa isha desu ka.
- C. Watashi wa ishaga suki desu.
- D. Watashi wa isha ni naritai desu.

10. 6. Find the correct meaning of “matsuri.” \*

1 point

*Mark only one oval.*

- A. Temple
- B. River
- C. Road
- D. Festival

11. 7. Find the correct particle of “Rahul wa banana .....suki desu” \*

1 point

*Mark only one oval.*

- A. Wo
- B. Ga
- C. Ka
- D. Ni

12. 8. Find the correct meaning of “otousan.” \*

1 point

*Mark only one oval.*

- A. Father
- B. Mother
- C. Brother
- D. Sister

13. 9. Find the correct translation of “do you like Japanese language.” \*

1 point

*Mark only one oval.*

- A. Anatawa nihongo ga suki desu ka?
- B. Anatawa eigo ga suki desu ka?
- C. Anatawa nani wo suki desu ka?
- D. Anata no nihongo ga suki desu ka?

14. 10. Find the correct meaning of “satou.” \*

1 point

*Mark only one oval.*

- A. Salt
  - B. Sugar
  - C. Water
  - D. Bread
- 

This content is neither created nor endorsed by Google.

Google Forms

# Class- V Subject- Japanese ( Paper-2)

Date - 20-02-2021

Full Marks- 30

\* Required

1. Email address \*

---

2. Name \*

---

3. Section \*

*Check all that apply.*

A

B

C

D

E

F

G

H

4. Roll No. \*

---

**I. Write the answer of following objective questions. 15 marks**

1. What is the meaning of "gakusei?"
2. What particle do we use before suki?
3. Watashi wa nihon ..... ikimasu.
4. Anata no otousan ..... namae wa .....desu.
5. What is the meaning of "naraimasu?"
6. What is the meaning of "byouin?"
7. Watashi no tomodachi ..... uta..... utaimasu.
8. What is the meaning of "doitsugo?"
9. What is the meaning of "satou?"
10. What is the meaning of "kekkon suru?"
11. Watashi no otouto wa suiei..... naraimasu.
12. What is the meaning of "matsuri?"
13. Anata wa kaigan .....mi ni ikimassu ka?
14. Rahul san wa go.....kazoku desu.
15. Hirabee wa sakana ..... suki desu.

**II. Write the answer of following subjective questions. 15 marks**

1. Translate "I go to school at 9 o'clock."
2. Translate "my friend can read HIRAGANA."
3. Translate "what is your name?"
4. Translate "do you like apple?"
5. Translate "how many family members in your family?"
6. Translate "I can write English."
7. Translate "please give me salt."
8. Translate "I will place the order."
9. Translate "watashi no gakkou wa 8ji kara hajimarimasu."
10. Translate "anata no imouto wa nani ni naritai desu ka? "
11. Translate "ashita gozen 7ji ni hanabi wo mi ni ikimasu."
12. Translate "anata wa nihongo wo yomemasu ka?"
13. Translate "kono kutsushita wa ikura desu ka?"
14. Translate "watashi no yousan wa 3 man yen desu"
15. Translate "irasshaimase."

5. \*

Files submitted:



This content is neither created nor endorsed by Google.

Google Forms

# Class- V Subject- Computer ( Paper-1)

Date - 05-03-2021

Full Marks- 25

\* Required

1. Email address \*

---

2. Name \*

---

3. Section \*

*Check all that apply.*

- A
- B
- C
- D
- E
- F
- G
- H

4. Roll No. \*

---

Choose the correct option.

5. 1. An algorithm is \_\_\_\_\_.\*

1 point

*Mark only one oval.*

- a) The output of the instruction to computer
- b) Problem definition
- c) A finite sequence(or series) of precise instructions for solving a problem
- d) None of these

6. 2.\*

1 point

**The expression  $(a+b)^3$  can be written in Qbasic as follows:-**

*Mark only one oval.*

- a)  $(a+b)^3$
- b)  $(a+b)*3$
- c)  $(a+b)x3 (a+b)x3 (a+b)x3$
- d) All of these

7. 3. Wi-Fi network can establish connection in a range of \_\_\_\_\_.\*

1 point

*Mark only one oval.*

- a) 50 km
- b) 500 m
- c) 100-300 ft
- d) 100 km

8. 4. In QBasic Color 2 stands for \_\_\_\_\_.\*

1 point

*Mark only one oval.*

- a) Cyan
- b) Green
- c) Golden
- d) Black

9. 5. E-commerce means \_\_\_\_\_.\*

1 point

*Mark only one oval.*

- a) Playing games
- b) Video conferencing
- c) Sending messages
- d) Selling and buying products

10. 6. What does the Q in QBasic stands for\*

1 point

*Mark only one oval.*

- a) Quit
- b) Quote
- c) Quick
- d) Quite

11. 7. \_\_\_\_\_ statement is used to indicate the completion of a program. \* 1 point

*Mark only one oval.*

- a) END
- b) STOP
- c) QUIT
- d) ENDPROGRAM

12. 8. What is the full form of DSL? \* 1 point

*Mark only one oval.*

- a) Dial up supplier line
- b) Digital subscriber line
- c) Digital supply line
- d) Data sanchar limited

13. 9. Which command is used to draw a diagonal line in the upward direction towards the left side? \* 1 point

*Mark only one oval.*

- a) H command
- b) U command
- c) F command
- d) Z command

14. 10. While chatting publically, what should we not do? \*

1 point

*Mark only one oval.*

- a) Talk to strangers.
- b) Give your personal information.
- c) Reveal your identities.
- d) All of these

15. 11. \_\_\_\_\_ are the special words which have specific meaning in program. 1 point  
\*

*Mark only one oval.*

- a) Syntax
- b) Codes
- c) Keywords
- d) Logic

16. 12. \_\_\_\_\_ is also referred to as a web address. \*

1 point

*Mark only one oval.*

- a) Web browser
- b) URL
- c) DNS
- d) Hyperlink

17. 13. In QBasic ,commands are also termed as \_\_\_\_\_.\*

1 point

*Mark only one oval.*

- a) Statements
- b) Codes
- c) Program
- d) Keywords

18. 14. \_\_\_\_\_ button is used to reload the opened webpage.\*

1 point

*Mark only one oval.*

- a) Search
- b) Home
- c) Favorite
- d) Refresh

19. 15. In the given QBasic statement, which is the variable name?LET Q = 4.\*

1 point

*Mark only one oval.*

- a) Q
- b) 4
- c) LET
- d) Print

20. 16. Which command is used to make figures in QBasic ? \*

1 point

*Mark only one oval.*

- a) LET
- b) PRINT
- c) DRAW
- d) PSET

21. 17. \_\_\_\_\_ is a type of connectivity that uses modem and the telephone lines to connect to the internet. \*

1 point

*Mark only one oval.*

- a) Broadband connection
- b) Wi-Fi
- c) WiMAX
- d) Dial-up Connection

22. 18. priyanka@123 is an example of \_\_\_\_\_. \*

1 point

*Mark only one oval.*

- a) Numeric data
- b) Non numeric data
- c) Keywords
- d) Syntax



23. 19. What is the output of the following program? \*

1 point

```
A=4  
B=30  
Print "A*B", A*b  
End
```

*Mark only one oval.*

- a) 34, A\*B
- b) A\*B, 120
- c) B\*A, 34
- d) A\*B, 34

24. 20. Which option helps to change the colour of the screen? \*

1 point

*Mark only one oval.*

- a) Restart
- b) Run
- c) Display
- d) Foreground

25. 21. From the given option which is not a characteristics of an algorithm. \*

1 point

*Mark only one oval.*

- a) Output
- b) Effectiveness
- c) Application of formula
- d) Input

26. 22. A 400x240 pixel screen is capable of displaying \_\_\_\_\_ pixels to complete the figures. \* 1 point

*Mark only one oval.*

- a) 300,000  
 b) 96,000  
 c) 2,50,00  
 d) 10,000

27. 23. To send and receive e-mails, you have to first \_\_\_\_\_ your email account. \* 1 point

*Mark only one oval.*

- a) Sign out from  
 b) Log-off  
 c) Login-in to  
 d) Delete

28. 24. \_\_\_\_\_ statement is used to assign a value to a variable name in the form of text. \* 1 point

*Mark only one oval.*

- a) REM  
 b) LET  
 c) PRINT  
 d) CLS

29. 25. Obtaining unauthorized access to other systems in a network is called \_\_\_\_\_.\* 1 point

\_\_\_\_\_.\*

*Mark only one oval.*

a) Access

b) Stealing

c) Forging

d) Hacking

---

This content is neither created nor endorsed by Google.

Google Forms

# Class- V Subject- Computer ( Paper-2)

Date - 05-03-2021

Full Marks- 25

\* Required

1. Email address \*

---

2. Name \*

---

3. Section \*

*Check all that apply.*

- A
- B
- C
- D
- E
- F
- G
- H

4. Roll No. \*

---

**Q1) Fill in the blanks (1x4=4)**

- a) Algorithm is named after the Arabian inventor\_\_\_\_\_.
- b) WWW was developed by \_\_\_\_\_.
- c) Screen 2 consists of \_\_\_\_\_columns and \_\_\_\_\_rows.
- d) \_\_\_\_refers to the sharpness and quality of a picture on the screen.



**Q2) Write any two examples of these: (2x2=4)**

- a) ISP
- b) Search engines

**Q3) Write full form of these: (1x3=3)**

- a) HTTP
- b) MODEM
- c) URL

**Q4) Match the following: (1x4=4)**

- a) Favorite (i) 
- b) MOD (ii) Mozilla Firefox
- c) Web browser (iii) Remainder
- d) Refresh (iv) 

**Q5) Answer the following questions:-**

**(2x5=10)**

- a) What is netiquette?
- b) Write the names of the founder of Google.
- c) Write any two differences between Low Resolution Screen and High Resolution Screen.
- d) Write a program in QBasic to draw this figure:



- e) What is an Algorithm?

5. \*

Files submitted:

---

This content is neither created nor endorsed by Google.

Google Forms

# Class- V Subject- General Knowledge

Date - 15-02-2021

Full Marks- 50

\* Required

1. Email address \*

---

2. Name \*

---

3. Section \*

*Check all that apply.*

- A
- B
- C
- D
- E
- F
- G
- H

4. Roll No. \*

---

Choose the correct option.

5. 1. Which cities hosted the 2018 Asian games ? \*

1 point

*Mark only one oval.*

- a) Sapporo and Obihiro
- b) Jakarta and Palembang
- c) Guwahati and Shillong
- d) France

6. 2. What is the capital of Goa ? \*

1 point

*Mark only one oval.*

- a) Puducherry
- b) Chennai
- c) Panaji
- d) Jaipur

7. 3. Which is the longest river on earth ? \*

1 point

*Mark only one oval.*

- a) Amazon
- b) Mississippi
- c) Ganges
- d) Nile



8. 4. Who wrote the novel “The God of Small Things” ? \*

1 point

*Mark only one oval.*

- a) Arundhati Roy
- b) Agatha Christie
- c) Bankim Chandra
- d) Ruskin Bond

9. 5. What is the name of the popular series written by JRR Tolkien ? \*

1 point

*Mark only one oval.*

- a) The adventures of Tom Swayer
- b) Harry Potter
- c) Lost Horizon
- d) The Lord of the Rings

10. 6. Tower Bridge is located in \_\_\_\_\_ . \*

1 point

*Mark only one oval.*

- a) London
- b) New York
- c) Los Angeles
- d) Mexico city

11. 7. "Golden Gate Bridge" is located on the river \_\_\_\_\_.\*

1 point

*Mark only one oval.*

- a) Yamuna
- b) River Tarn
- c) Golden Gate Strait
- d) Nile

12. 8. If New York has Wall street , what does Mumbai have ? \*

1 point

*Mark only one oval.*

- a) Abbey Road
- b) Dalal Street
- c) Orchard Road
- d) Royal Mile

13. 9. Which bank serves as the central bank in India ? \*

1 point

*Mark only one oval.*

- a) State Bank of India
- b) Reserve Bank of India
- c) Bank of India
- d) Union Bank

14. 10. Who is the author of the book " The Palace of Illusions" ? \*

1 point

*Mark only one oval.*

- a) R.K Narayan
- b) Chitra Banerjee
- c) Amitav Ghosh
- d) Kiran Desai

15. 11. Khuswant Singh wrote the book \_\_\_\_\_ . \*

1 point

*Mark only one oval.*

- a) Journey to the west
- b) Train to Pakistan
- c) Coolie
- d) Treasure Island

16. 12. Rabindranath Tagore was awarded the nobel prize in the year – \*

1 point

*Mark only one oval.*

- a) 1913
- b) 1897
- c) 1901
- d) 1910

17. 13. It is the centre of Arab kingdom , an ancient city located in Jordan – \* 1 point

*Mark only one oval.*

- a) Machu Picchu  
 b) Honolulu  
 c) Mohenjo daro  
 d) Petra

18. 14. Taj Mahal was built in memory of \_\_\_\_\_. \* 1 point

*Mark only one oval.*

- a) Aurangzeb  
 b) Akbar  
 c) Mumtaz Mahal  
 d) Nawab Bai

19. 15. It is also known as El Castillo , located in Mexico – \* 1 point

*Mark only one oval.*

- a) Roman Colosseum  
 b) Taj Mahal  
 c) Chichén Itzá  
 d) Christ , the Redeemer

20. 16. "You have to dream before your dreams can come true", who said these famous words ? \*

1 point

*Mark only one oval.*

- a) Albert Einstein
- b) Newton
- c) APJ Abdul Kalam
- d) Mahatma Gandhi

21. 17. Labour Day is celebrated on \_\_\_\_ \*

1 point

*Mark only one oval.*

- a) 15 October
- b) 1 May
- c) 30 March
- d) 12 October

22. 18. " Float like a butterfly , sting like a bee ." Who said these words ? \*

1 point

*Mark only one oval.*

- a) Mother Teresa
- b) Steffi Graf
- c) Muhammad Ali
- d) Mark Twain

23. 19. " Be the change that you wish to see in the world", who said these words ? 1 point

\*

*Mark only one oval.*

- a) Mahatma Gandhi
- b) Bhagat Singh
- c) Barak Obama
- d) Dalai Lama

24. 20. What is the height of Peronas Twin Tower ? \*

1 point

*Mark only one oval.*

- a) 828 m
- b) 452 m
- c) 632 m
- d) 451.9 m

25. 21. Which twin towers were attacked by terrorist in 2001 ? \*

1 point

*Mark only one oval.*

- a) World Trade Center
- b) Eiffel Tower
- c) Petronas Twin Tower
- d) Shanghai Tower

26. 22. What is the scientific study of language called? \*

1 point

*Mark only one oval.*

- a) Geography
- b) Linguistic
- c) Psycholinguistics
- d) Anthropology

27. 23. Persian is a language which does not attach gender to its objects . \*

1 point

*Mark only one oval.*

- a) True
- b) False
- c) Can't say
- d) None of these

28. 24. Which language stands for no spoken words , but hand movements which represent words and sentences ? \*

1 point

*Mark only one oval.*

- a) Prakrit
- b) Ongota
- c) Sign Language
- d) Sanskrit

29. 25. Who discovered Penicillin ? \*

1 point

*Mark only one oval.*

- a) George De Mestral
- b) Alexander Fleming
- c) Louis Pasteur
- d) Edward Jenner

30. 26. Which of the following was the city in which Mumtaz Mahal died ? \*

1 point

*Mark only one oval.*

- a) Burhanpur
- b) Ratlam
- c) Agra
- d) Delhi

31. 27. Which state has the highest tribal population in India ? \*

1 point

*Mark only one oval.*

- a) Jharkhand
- b) Assam
- c) Madhya Pradesh
- d) Uttar Pradesh



32. 28. Lata Mangeshkar was born in which of the following cities ? \*

1 point

*Mark only one oval.*

- a) Agra
- b) Mumbai
- c) Kota
- d) Indore

33. 29. Which type of doctor is specialized for the disease blood cancer ? \*

1 point

*Mark only one oval.*

- a) Haematologist
- b) Neurologist
- c) Nephrologist
- d) Cardiologist

34. 30. The Jabalpur area in Madhya Pradesh is famous for which rock ? \*

1 point

*Mark only one oval.*

- a) limestone
- b) marble
- c) sandstone
- d) quartz

35. 31. MMXV = \_\_\_\_\_ . \*

1 point

*Mark only one oval.*

- a) 1040
- b) 2015
- c) 240
- d) 540

36. 32. In which modern day country was Prophet Muhammad born ? \*

1 point

*Mark only one oval.*

- a) India
- b) Pakistan
- c) Saudi Arabia
- d) Afghanistan

37. 33. Rama's father has heart problems . He should consult a \_\_\_\_\_ . \*

1 point

*Mark only one oval.*

- a) Oncologist
- b) Cardiologist
- c) Dermatologist
- d) Neurologists

38. 34. The world's first artificial sweetener is also called \_\_\_\_\_ . \* 1 point

*Mark only one oval.*

- a) Saccharin
- b) Sucralose
- c) Sodium Benzoate
- d) Acetic acid

39. 35. What was the profession of Harry Brearley ? \* 1 point

*Mark only one oval.*

- a) Scientist
- b) Geologist
- c) Archaeologist
- d) Metallurgist

40. 36. What was Harry Coover making when he invented super glue ? \* 1 point

*Mark only one oval.*

- a) Gunpowder
- b) Plastic
- c) Transparent gunsights
- d) Rifles

41. 37. She is known to establish nursing as a career , she started the first nursing school .Who is she ? \*

*Mark only one oval.*

- a) Marie Curie  
 b) Florence Nightingale  
 c) Indira Gandhi  
 d) Anne Bancroft

42. 38. Who invented Coca – Cola ? \*

1 point

*Mark only one oval.*

- a) Richard McDonald  
 b) Roy Plunkett  
 c) Wilhelm Roentgen  
 d) John Pemberton

43. 39. Who played the character of Veera Tripathi ? \*

1 point

*Mark only one oval.*

- a) Salman Khan  
 b) Alia Bhatt  
 c) Marilyn Monroe  
 d) Deepika Padukone

44. 40. Name the movie to which these characters belong – Dory , Marlin , Hank , Nemo . \*

*Mark only one oval.*

- a) The Jungle Book
- b) Incredibles – 2
- c) Avengers
- d) Finding Dory / Finding Nemo

45. 41. This historical tower is also the world's tallest brick minaret, situated in Delhi . \*

*Mark only one oval.*

- a) Potala Palace
- b) Uzgen Minaret
- c) Qutub Minar
- d) Ghazni Minarets

46. 42. Star Trek and Klingon are language of \_\_\_\_\_ in television series . \*

*Mark only one oval.*

- a) tribals
- b) aliens
- c) animals
- d) birds

47. 43. Leo Baekeland invented \_\_\_\_\_ . \* 1 point

*Mark only one oval.*

- a) teflon
- b) x- ray
- c) microwave oven
- d) plastic

48. 44. This statue was a gift to the United States from the people of France . 1 point

\_\_\_\_\_ \*

*Mark only one oval.*

- a) Statue of Liberty
- b) Christ the Redeemer
- c) Tian Tan Buddha
- d) The Motherland calls

49. 45. This building resembles a stalk of bamboo or an elongated pagoda ,it is Chinese in appearance. \* 1 point

*Mark only one oval.*

- a) Shanghai Tower
- b) Burj khalifa
- c) Taipei 101
- d) Burj Al Arab

50. 46. The birth anniversary of which freedom fighter is to be celebrated as “Parakram Diwas” every year? \* 1 point

*Mark only one oval.*

- a) Sardar VallabhBhai Patel  
 b) Subash Chandra Bose  
 c) V D Savarkar  
 d) Bal Gangadhar Tilak

51. 47. This is an indigenous vaccine developed by Bharat Biotech in collaboration with the Indian Council of Medical Research (ICMR). \* 1 point

*Mark only one oval.*

- a) Covaxin  
 b) AstraZeneca  
 c) Covishield  
 d) All of the above

52. 48. Who became the first women fighter pilot of India to participate in Republic Day parade ? \* 1 point

*Mark only one oval.*

- a) Bhawana Kant  
 b) Mohana Singh  
 c) Avani Chaturvedi  
 d) Shivangi

53. 49. Which Indian batsman has become the first player in the world to hit 100 sixes in all formats against Australia? \* 1 point

*Mark only one oval.*

- a) Virat Kohli  
 b) Rohit Sharma  
 c) Shikhar Dhawan  
 d) Ajinkya Rahane

54. 50. In which country military rule has been established recently? \* 1 point

*Mark only one oval.*

- a) England  
 b) Myanmar  
 c) China  
 d) Nepal

---

This content is neither created nor endorsed by Google.

Google Forms