



DELHI PUBLIC SCHOOL

SAIL Township, Ranchi

SECOND SEMESTER (SESSION-2019-20)

SUBJECT: EVS

CLASS: – II Sec:- _____

Roll no.:- _____

DATE :- 27.02.2020

M.O. :- _____

F. M. :- 80

NAME:- _____

1. Fill in the missing letters. [0.5 x 6 = 3]

a. M O _____ N T A I N S

b. H _____ R N S

c. S P A _____ R O W

d. T R U N _____

e. R A _____ N Y

f. P _____ N G A L

2. Circle the odd one out: [0.5 x 4 = 2]

a) curd cheese wool butter

b) Moon Venus Earth Mars

c) elephant zebra jackal deer

d) flower branch water roots

3. Define them with examples. [2 x 3 = 6]

a. climbers- _____

b. scavengers- _____

c. shrub - _____

4. Fill in the blanks with the help of the words given in help box:

[0.5 x 10 = 5]

<i>Tibetan,</i>	<i>trees,</i>	<i>loo,</i>	<i>burrow,</i>	<i>silk,</i>
<i>Bihu,</i>	<i>python,</i>	<i>Diwali,</i>	<i>plains,</i>	<i>feathers,</i>

- a) A rabbit's hole is called a _____.
- b) _____ is a fine and soft cloth.
- c) _____ Plateau is the biggest plateau in the world.
- d) Very big, tall and strong plants are called _____.
- e) Hot winds that blow in summer are called _____.
- f) _____ is the festival of lights.
- g) A _____ can swallow an animal larger than itself.
- h) Fallen _____ of some birds are used to make pillow.
- i) _____ are flat areas of land.
- j) _____ is celebrated in Assam.

5. Name them:

[1 x 9 = 9]

- a) Low lands between hills and mountains – _____
- b) It is a bird that stitches together leaves to make its nests – _____
- c) Rangoli made up of rice powder – _____
- d) Kitchen of the green plants – _____
- e) Areas with little rainfall – _____
- f) Biggest water animal – _____
- g) Ship of the desert – _____
- h) Free meal served in a Gurudwara – _____
- i) Write the name of the virus spread in China in recent time – _____

6. Answer the following questions in a full sentence:

[1 x 2 = 2]

- a) Which type of plastic has been discouraged by our Prime Minister?

Ans.- _____

- b) Which plant is used as a medicine?

Ans.- _____

7. Answer the following questions:

[2.5 x 6 = 15]

- a) When do we celebrate harvest festivals?

Ans.- _____

b) How do fishes swim in water?

Ans.- _____

c) What are wild animals?

Ans.- _____

d) What is solar energy?

Ans.- _____

e) How do animals help us in growing crops?

Ans.- _____

f) What do plants need to make their own food?

Ans.- _____

8. Match the following:

[0.5 x 10 = 5]

Column – A

Column – B

- | | | |
|---------------------|---|--------------------------|
| a) herbs | i) manure | <input type="checkbox"/> |
| b) plateau | ii) thin, soft, green | <input type="checkbox"/> |
| c) dried dung | iii) autumn | <input type="checkbox"/> |
| d) dry and windy | iv) flat on top like a table | <input type="checkbox"/> |
| e) snake | v) national festival | <input type="checkbox"/> |
| f) Independence Day | vi) crawls | <input type="checkbox"/> |
| g) valleys | vii) longest night | <input type="checkbox"/> |
| h) crab | viii) are lowlands with very fertile soil | <input type="checkbox"/> |
| i) 21st December | ix) Gandhi jayanti | <input type="checkbox"/> |
| j) 2nd October | x) sea food | <input type="checkbox"/> |

9. Unscramble these words and write correctly:

[1 x 6 = 6]

a) U T E A P L A - _____

b) L O N W A T M E E R - _____

c) T O Q U I M O S - _____

d) L E D S C R A B M - _____

e) S A N T P L E A - _____

f) N A M O - _____

10. Write 'True' or 'False':

[0.5 x 10 = 5]

a) Fish have neither legs nor wings. _____

b) Dogs were not the first animals to be tamed by man. _____

c) Australia is the smallest island in the world. _____

d) Leaves make food for the plant. _____

e) Creepers do not bear big fruits. _____

f) A model of Earth is called a globe. _____

g) Neil Armstrong was not the first man to step on the moon in 1969. _____

h) Camel is called beast of burden. _____

i) There are nine planets in our solar system. _____

j) We should put animals in cages. _____

11. Think and answer the following questions:

[1 x 2 = 2]

a) What is the motto of our school?

Ans.- _____

b) When do we celebrate World Yoga Day?

Ans.- _____

12. Write 2 examples for each:

[1 x 10 = 10]

a) planets – i) _____

ii) _____

b) omnivores– i) _____

ii) _____

c) load carrying animals– i) _____

ii) _____

d) religious festivals – i) _____

ii) _____

e) landforms– i) _____

ii) _____

13. Draw, colour and label:

[2 x 5 = 10]

a) One creeper

b) One food item which we get from animals

c) One thing which we use in rainy season

d) One herbivore

e) One national festival



DELHI PUBLIC SCHOOL

SAIL Township, Ranchi

SECOND SEMESTER (SESSION-2019- 20)

SUBJECT: ENGLISH

DATE :- 24.02.2020

CLASS: – II **Sec:-** _____

M.O. :- _____

Roll no.:- _____

F. M. :- 80

NAME:- _____

1. Underline the adjectives. [0.5 x 8 = 4]

Seema is three years old. Her mother dressed her up in a red dress and black shoes. She slipped on the muddy road. Her red dress caught in a thorny bush. She saw a little boy sitting under a shady tree.

2. Circle the correct word. [0.5 x 6 = 3]

- i. Come and sit (beside / over) me.
- ii. Rahul scored a goal (and / but) his team lost.
- iii. (Where / Who) are you going?
- iv. Mala is climbing the tree (careful / carefully) .
- v. (Is this / Is these) Sunita's pen?
- vi. Please give me some salt and (saucer / pepper).

3. Tick the correct answer. [0.5 x 6 = 3]

- i. Imran is tall.....
a) and his brother is short. b) but his brother is short.
- ii. Brownny is jumping.....
a) above the gate. b) over the gate.
- iii. The carpenter is working.....
a) brightly. b) quietly.
- iv. The opposite of sleep.....
a) awake b) asleep
- v. Is that Roshan?
a) Yes, this is Roshan. b) Yes, that is Roshan.
- vi. Tick the correct spelling.
a) Competition b) Compettition

4. Write true or false.

[0.5 x 10 = 5]

- a) The indigo jackal assigned responsibilities to every animal. (_____)
- b) Mother says, like little birdie, "Let me rise and fly away. (_____)
- c) The mighty ocean is formed with little 'drops of water'. (_____)
- d) Ma Liang was rich and kind person. (_____)
- e) The merry brown thrush was singing away in the tree. (_____)
- f) Santa looked fondly at all the eager faces around the children. (_____)
- g) The animals caught the jackal and beat him. (_____)
- h) The merry brown thrush is sitting up in a tree. (_____)
- i) Mr. Santa was not sick. (_____)
- j) Little Brown thrush is singing an unhappy song. (_____)

5. Fill in the blanks by choosing the correct words:-

[0.5 x 8 = 4]

- i. My mother asked the _____ (fair / fare) from the cab driver.
- ii. I can _____ (here / hear) the birds chirping in the garden.
- iii. We have been waiting here for _____. (hours / ours)
- iv. My brother bought me a _____ (new / knew) pair of shoes.
- v. Many students _____ absent yesterday. (was / were)
- vi. My sister _____ in Mohali last week. (were / was)
- vii. Udit _____ tired after school. (were / was)
- viii. He _____ very excited. (was / were)

6. Fill in the correct preposition:-

[0.5 x 6 = 3]

- i. There were few vehicles _____ the bridge. (on / inside)
- ii. She is _____ the restaurant. (over / inside)
- iii. The women is sitting _____ the rug. (under / on)
- iv. Jeena sat _____ Michael. (with / within)
- v. Bring a grocery bag _____ you. (to / with)
- vi. Let's meet _____ 12:30 pm. (in / at)

7. Write the correct spellings:-

[0.5 x 6 = 3]

- a) neighborhood - _____
- b) skiping - _____
- c) behaveour - _____
- d) princpal - _____
- e) librery - _____
- f) comparision - _____

8. Write a question for each answer:

[1 x 2 = 2]

- a. I am Aditi. I am your new classmate.

- b. My parents are going to their relative's house.

9. Answer these questions in a full sentence: [1 x 2 = 2]

i. Which poem is written by Lucy Larcom in your Literature Reader book?

ii. What do you mean by ' Paths of Virtue' in the poem "Little drops of water"?

10. Write the meaning of each word:- [1 x 7 = 7]

- a) terrified - _____ e) meddle - _____
b) humble - _____ f) peep of the day - _____
c) grateful - _____ g) heathen - _____
d) beamed - _____

11. Write the synonyms of each:- [1 x 5 = 5]

- a) scream - _____ d) supper - _____
b) jump - _____ e) burglar - _____
c) tiptoed - _____

12. Make sentences: [1 x 7 = 7]

- a) search - _____
b) stray - _____
c) jealous - _____
d) curious - _____
e) knitted - _____
f) interfere - _____
g) protect - _____

13. Fill in the blanks:- (Refer to the chapters of Literature Reader) [1 x 5 = 5]

- a. It was a beautiful December day, with clear blue skies and snow-covered _____.
b. Jackal _____ into a nearby village in search of food.
c. There was a big _____ of indigo dye inside.
d. Little deeds of kindness and words of love make our earth an _____.
e. The young man drew a _____ mountain.

14. Answer the following questions:-

[2 x 6= 12]

a) What request did the birdie make to her mother?

Ans.- _____

b) What did village dogs do?

Ans.- _____

c) Is it possible to make our earth a heaven? How?

Ans.- _____

d) Who was jealous of Ma-Liang? What did he plan to do?

Ans.- _____

e) What had touched Santa's heart?

Ans.- _____

f) Who is sitting in a tree and what is he doing?

Ans.- _____

15. Read the passage carefully and answer the following questions:-

[1 x 5 = 5]

Shiny was a tiny star. She lived in the sky with her parents. She wanted to travel around to see what was there in other places. Her parents told her that she was too little to go out on her own and that she would have to wait. One day, Shiny saw a lovely green patch with colourful dots on it, deep down from the sky. She forgot what her parents had said and flew down to look at it. But she flew so fast, that she soon got lost. She didn't know where her home was. So, as a result she had to stay on earth forever.

A. Answer these questions:-

i) Why did Shiny want to travel around?

ii) What did Shiny see one day?

iii) Who got lost in the story?

B. Fill in the blanks:-

i) She forgot what her _____ had said and flew down to look at it.

ii) Shiny was a _____ star.

C. Write the opposites from the passage only :-

i) huge x _____ ii) shallow x _____

16. Write a paragraph (5 - 6 lines) on any one of the given topic: [1 x 5 = 5]

a) Time is precious b) Discipline c) My country



DELHI PUBLIC SCHOOL

SAIL Township, Ranchi

SECOND SEMESTER (SESSION-2019-20)

SUBJECT: HINDI

CLASS: – II Sec:- _____

Roll no.:- _____

DATE :- 02.03.2020

M.O. :- _____

F. M. :- 80

NAME:- _____

1. दिए गए प्रश्नों के उत्तर लिखें – [2 x 6 = 12]
क) टी. टी. क्या करता है ?

उत्तर –

.....

.....

- ख) रामचंद्रन ने गुठली क्यों नहीं फेंकी ?

उत्तर –

.....

.....

- ग) "कौन जीता" कहानी से हमें क्या शिक्षा मिलती है ?

उत्तर –

.....

.....

- घ) डाकघर में काम करनेवाला आदमी चिट्ठियों का क्या करेगा ?

उत्तर –

.....

.....

- ङ) दादाजी ने पानी का बाल्टी बाहर क्यों रखा ?

उत्तर –

.....

.....

च) सिर पर घड़ा रखकर शेखचिल्ली क्या सोचने लगा ?

उत्तर —.....
.....
.....

2. दिए गए शब्दों के अर्थ लिखें : [1 x 5 = 5]

क) यात्री —..... ख) पुताई —.....

ग) शर्म —..... घ) समझदार —.....

ड) डाकिया —.....

3. दिए गए शब्दों से वाक्य बनाइए — [1 x 5 = 5]

क) घमंड —.....

ख) चिट्ठी —.....

ग) समझदार —.....

घ) डिब्बा —.....

ड) रफ्तार —.....

4. किसने कहा ? किससे कहा ? [0.5 x 4 = 2]

क) "मुझे दौड़ में कोई नहीं हरा सकता।"

.....

ख) "शेखचिल्ली मत बनो।"

.....

5. नीचे दिए गए गद्यांश को पढ़कर प्रश्नों के उत्तर दें।

यात्रा शिक्षा का साधन है। शिक्षा हमारे चरित्र का निर्माण करता है। जब हम यात्रा करते हैं तो हमें चीज़ें संभालनी पड़ती हैं, अपना टिकट रखना पड़ता है और ठीक समय पर गाड़ी पकड़नी होती है। यात्रा में हमें अपनी मदद खुद करनी पड़ती है। जो हमें आत्मनिर्भर होने में मदद करता है। भिन्न-भिन्न स्थानों को देखने और हर तरह के लोगों से बात करने में हम कई नई-चीज़ें सीखते हैं। यूरोप में यात्रा के बिना शिक्षा अधूरी समझी जाती है। प्राचीन भारत में तीर्थयात्रा को बड़ा महत्त्व दिया जाता था।

पूरे एक वाक्य में उत्तर दें: — [4.5]

क) किस देश में शिक्षा यात्रा के बिना अधूरी है? (1)

उत्तर —.....

ख) प्राचीन भारत में किसे महत्त्व दिया जाता था? (1)

उत्तर —.....

ग) यात्रा हमें किस चीज़ में मदद करता है ? (1)

उत्तर -

घ) विलोम शब्द लिखो : - (गद्यांश से चुनकर) (1)

i) छोटा - ii) पुरानी -

ङ) वाक्य पूरा करो :- (0.5)

i) शिक्षा हमारे करता है।

6. किसी एक विषय पर अनुच्छेद लिखें।

[1 x 5 = 5]

क) कर भला तो हो भला

ख) जहाँ चाह वहाँ राह

ग) गणतंत्र दिवस

.....

.....

.....

.....

.....

.....

.....

.....

.....

.....

.....

.....

.....

.....

.....

.....

.....

7. सही शब्द चुनकर रिक्त स्थानों को भरें -

[0.5 x 10 = 5]

टिकट, पटाखे, नदी, मुर्गी, डाकघर, पत्रपेटी, कल्पना, घमंड, त्योहार, रफ्तार

क) रेलगाड़ी तेज़ से चल रही थी।

ख) का रंग लाल होता है।

ग) शेखचिल्ली अमीर होने की करने लगा।

घ) दीवाली खुशी का है।

ङ) हमे कभी भी नहीं करना चाहिए।

च) टी. टी. बिना यात्री पर जुर्माना लगाता है।

छ) सब शहरों में होते हैं।

ज) कछुआ शर्म के कारण में जाकर छुप गया।

झ) कोई बड़ा आदमी पास हो तभी चलाने चाहिए।

ञ) शेखचिल्ली ने उन पैसों से एक खरीदने की सोची।

8. दिए गए शब्द के समान अर्थ वाले शब्द पर सही (✓) का चिह्न लगाओ – [0.5 x 6 = 3]
- i) अमीर – आम आना धनवान
- ii) तंग – परेशान तन ढीला
- iii) धरती – जमना जाना ज़मीन
- iv) मुलायम – नरम कठोर कड़ा
- v) जंगल – बाग पौधे वन
- vi) बगीचा – पौधे बाग गमला

9. सही वर्तनी (Spelling) पर (✓) का चिह्न लगाओ – [0.5 x 5 = 2.5]
- i) गाडी गाढ़ी गाड़ी गाडी
- ii) फुटवाल फुटबॉल फुटबॉल फूटबॉल
- iii) धिरे धीरे धीरे धीरेए
- iv) परीवार परिवार परीबार परिवार
- v) स्टेशन स्टेशन स्टेशन सटेशन

10. दिए गए वर्णों को जोड़ कर शब्द बनाएँ – [1 x 2 = 2]
- क) श् + र + म् + इ + क् + अ =.....
- ख) क् + ऐ + ल् + आ + श् + अ =.....

11. निम्नलिखित हिन्दी अंको के सामने उनके हिन्दी शब्दों को लिखें – [1 x 5 = 5]
- क) ११ –..... ख) ५ –..... ग) ३ –.....
- घ) १३ –..... ङ) १५ –.....

12. निम्नलिखित शब्दों के विलोम शब्द लिखें – [1 x 5 = 5]
- क) गीला x ख) आगे x ग) तेज़ x
- घ) दूर x ङ) साफ x

13. अनेक शब्दों के लिए एक शब्द लिखें – [1 x 5 = 5]
- क) लकड़ी का काम करने वाला –..... ख) मिट्टी के बरतन बनाने वाला –.....
- ग) जूते बनाने वाला –..... घ) जो पढ़ा लिखा नहीं है –.....
- ङ) कपड़े धोने वाला –.....

14. बहुवचन लिखें: – [1 x 6 = 6]
- क) तितली –..... घ) फूल –.....
- ख) किताब –..... ङ) सड़क –.....
- ग) वस्तु –..... च) बकरी –.....

15. दिए गए कोष्ठक से शब्द चुनकर भरें : – [0.5 x 8 = 4]

मार्च,	सोमवार,	इतवार,	शनिवार,	जनवरी,	दिसम्बर,	बृहस्पतिवार,	अगस्त
--------	---------	--------	---------	--------	----------	--------------	-------

- क) गणतंत्र दिवस २६ को मनाया जाता है।
- ख) नया सप्ताह से शुरू होता है।
- ग) शुक्रवार और रविवार के बीच आता है।
- घ) महीने में अत्यधिक ठंड पड़ती है।
- ङ) रविवार को भी कहते हैं।
- च) को वीरवार व गुरुवार भी कहते हैं।
- छ) वर्षा ऋतु का महीना का होता है।
- ज) हमारी वार्षिक परीक्षा महीने में होती है।

16. निम्न शब्दों के एक-एक पर्यायवाची शब्द लिखें – [1 x 5 = 5]

- क) सूर्य –..... ख) पक्षी –.....
- ग) घर –..... घ) फूल –.....
- ङ) पुत्र –.....

17. सही उत्तर दें :- [1 x 4 = 4]

क) जिस ध्वनी को न तो स्वर माना जाता है और न ही व्यंजन, उसे क्या कहते हैं ?

उत्तर –.....

ख) "यह कौन है ? हाथ में कागज़-कलम लेकर आया है। उसने काला कोट भी पहन रखा है।" इन पंक्तियों को किस पाठ से लिया गया है ? पाठ का नाम लिखें।

उत्तर –.....

ग) अंग्रेजी भाषा की ध्वनि से एक शब्द लिखें।

उत्तर –.....

घ) जिन शब्दों का पहला व्यंजन स्वर रहित और दूसरा स्वर सहित होता है, उसे क्या कहते हैं ?

उत्तर –.....



DELHI PUBLIC SCHOOL

SAIL Township, Ranchi

SECOND SEMESTER (SESSION-2019- 20)

SUBJECT: Maths

DATE :- 04.03.2020

CLASS: – II **Sec:-** _____

M.O. :- _____

Roll no.:- _____

F. M. :- 80

NAME:- _____

1. Fill in the blanks: [0.5 x 12 = 6]

- a) _____ is a small fixed length.
- b) Division is repeated _____.
- c) _____ are measured in litre and millilitre.
- d) 1 kg = _____ g.
- e) Liquid like oil and juice are measured in _____,
- f) 200 g + 50 g + 50 g = _____ g.
- g) 500 g + 500 g = _____ kg.
- h) Mass is also called _____.
- i) Short form of millilitre is _____ and litre is _____.
- j) Bigger unit of weight is _____.
- k) _____ tells us how heavy is the thing.

2. Write 'True' or 'False': [0.5 x 6 = 3]

- a) 12 divided by 2 gives quotient 7. _____
- b) Your ruler has kg marks on it. _____
- c) Length of saree is measured in kg. _____
- d) Liquids are measured in kg. _____
- e) Six hundred seventy six is written as 60076. _____
- f) Ten times fifteen are 150. _____

3. Match the following: [0.5 x 8 = 4]

A	B	
a) $10 \div 10$	1000 ml	<input type="checkbox"/>
b) 2 kg	27	<input type="checkbox"/>
c) 1 m	0	<input type="checkbox"/>
d) 3 L 470 ml	8	<input type="checkbox"/>
e) $72 \div 9$	3470 ml	<input type="checkbox"/>
f) $0 \div 8$	100 cm	<input type="checkbox"/>
g) $27 \div 1$	2000 g	<input type="checkbox"/>
h) 1 L	1	<input type="checkbox"/>

4. Write the number names of the following: [1 x 6 = 6]

a) 409 - _____

b) 519 - _____

c) 628 - _____

d) 788 - _____

e) 800 - _____

f) 1000 - _____

5. Divide the following by long division method and write quotient and remainder. [2 x 5 = 10]

a) $9 \div 9 =$ _____

b) $28 \div 7 =$ _____

c) $36 \div 6 =$ _____

Q -

Q -

Q -

R -

R -

R -

d) $60 \div 10 =$ _____

e) $40 \div 10 =$ _____

Q -

Q -

R -

R -

6. Divide the following by repeated subtraction. [2.5 x 4 = 10]

a) $20 \div 5 =$ _____

b) $32 \div 8 =$ _____

c) $16 \div 4 =$ _____

d) $40 \div 10 =$ _____

7. Write the division facts:

[2 x 4 = 8]

a) $4 \times 9 = 36$

b) $3 \times 8 = 24$

c) $10 \times 5 = 50$

d) $7 \times 5 = 35$

8. Fill in the blanks:

[0.5 x 10 = 5]

a) $9 \times 5 =$ _____

b) $9 \times 9 =$ _____

c) $11 \times 6 =$ _____

d) $14 \times 5 =$ _____

e) $12 \times 6 =$ _____

f) $12 \times 4 =$ _____

g) $13 \times 5 =$ _____

h) $14 \times 3 =$ _____

i) $15 \times 6 =$ _____

j) $8 \times 8 =$ _____

9. Add:

[1 x 7 = 7]

a) $\begin{array}{r} 357 \text{ cm} \\ + 148 \text{ cm} \\ \hline \end{array}$

b) $\begin{array}{r} 724 \text{ m} \\ + 142 \text{ m} \\ \hline \end{array}$

c) $\begin{array}{r} 907 \text{ kg} \\ + 192 \text{ kg} \\ \hline \end{array}$

d) $\begin{array}{r} 732 \text{ L} \\ + 248 \text{ L} \\ \hline \end{array}$

e) $\begin{array}{r} 346 \text{ g} \\ + 349 \text{ g} \\ \hline \end{array}$

f) $\begin{array}{r} 424 \text{ ml} \\ + 242 \text{ ml} \\ \hline \end{array}$

g) $\begin{array}{r} 805 \text{ L} \\ + 25 \text{ L} \\ \hline \end{array}$

10. Subtract:

[1 x 7 = 7]

a) $\begin{array}{r} 749 \text{ m} \\ - 528 \text{ m} \\ \hline \end{array}$

b) $\begin{array}{r} 702 \text{ g} \\ - 128 \text{ g} \\ \hline \end{array}$

c) $\begin{array}{r} 900 \text{ kg} \\ - 462 \text{ kg} \\ \hline \end{array}$

$$\begin{array}{r} \text{d) } 193 \text{ ml} \\ - 57 \text{ ml} \\ \hline \\ \hline \end{array}$$

$$\begin{array}{r} \text{e) } 235 \text{ L} \\ - 83 \text{ L} \\ \hline \\ \hline \end{array}$$

$$\begin{array}{r} \text{f) } 50 \text{ cm} \\ - 25 \text{ cm} \\ \hline \\ \hline \end{array}$$

$$\begin{array}{r} \text{g) } 388 \text{ L} \\ - 25 \text{ L} \\ \hline \\ \hline \end{array}$$

11. Solve:

[2 x 4 = 8]

a) A ribbon is 180 cm long. Sita cuts away 135 cm from it. What length of ribbon is left?

b) A box weighs 215 kg and a bag weighs 19 kg, what is their total weight?


c) A fish tank has 18 L of water. It should have 32 L of water. How much more water should be put in?

d) 40 laddoos are packed equally in 8 boxes. How many laddoos are there in each box?

12. Tick the correct measurement for given items:

[1 x 2 = 2]

a)



about 100 g / about 100 kg

b)



about 5 ml / about 100 l (liquid)

13. Find:

[2 x 2 = 4]

- a) 316 children are on a ride. Seven more get on the ride and five get off the same ride.
How many children are now on the ride?

Ans- Number of children on the ride now = _____.

- b) I study Mathematics, English and EVS everyday. Each subject lasts for 2 hours everyday. But I study Hindi for 2 hours only on Sunday. What is the total number of hours I spend studying in a week?


Ans- Number of hours I study in a week = _____.

Page 5 of 5

12. Tick the correct measurement for given items:

[1 x 2 = 2]

a)



about 100 g / about 100 kg

b)



about 5 ml / about 100 l (liquid)

13. Find:

[2 x 2 = 4]

- a) 316 children are on a ride. Seven more get on the ride and five get off the same ride.
How many children are now on the ride?

Ans- Number of children on the ride now = _____.

- c) I study Mathematics, English and EVS everyday. Each subject lasts for 2 hours everyday. But I study Hindi for 2 hours only on Sunday. What is the total number of hours I spend studying in a week?

Ans- Number of hours I study in a week = _____.

Page 5 of 5



DELHI PUBLIC SCHOOL

SAIL Township, Ranchi

SECOND SEMESTER (SESSION-2019-20)

SUBJECT: General Knowledge

DATE :- 17.02.2020

CLASS: – II Sec:- _____

M.O. :- _____

Roll no.:- _____

F. M. :- 25

NAME:- _____

I. Fill in the blanks using the help box : [0.5 x 10 = 5]

racket, 32, Femur, field, Tandem, Charles Babbage, Helen keller,
riverbed, 22nd April, shuttlecock

- a. _____ is the longest bone found in our thighs.
- b. An adult human has _____ teeth.
- c. _____ was the first deaf blind person to get a college degree.
- d. Badminton is played with a _____ and _____.
- e. The farmer grows grain in the _____ .
- f. _____ is a bicycle built for two riders.
- g. Computer was invented by _____.
- h. The soil along a _____ is very fertile.
- i. We celebrate Earth Day on _____.

II. Write true or false : [0.5 x 10 = 5]

- a. Olympic games are held after every two years. _____
- b. Russia is the world's largest country. _____
- c. Weeds harm other plants in a garden. _____
- d. Bones help us to move every part of our body. _____
- e. The water on Earth cannot be recycled. _____
- f. A dice has six faces. _____
- g. The capital of Egypt is Cairo. _____
- h. Ludwig Van Beethoven, was a famous dancer. _____
- i. Mars is also called 'Red Planet' _____
- j. 10 candies make a dozen. _____

III. Match the following :

[0.5 x 10 = 5]

- a. Pyramid of Giza
- b. Hollywood actress
- c. Princess with long hair
- d. To check location
- e. An Olympic sport
- f. Chopping board
- g. A spice
- h. Jwala Gutta
- i. Manchester United
- j. Hottest planet

- Cardamom
- To chop vegetables
- Football
- Egypt
- Venus
- Angelina Jolie
- Rapunzel
- GPS
- Swimming
- Badminton

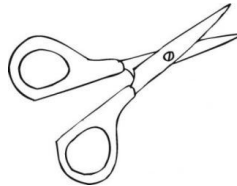
IV. Name them :

[1 x 5 = 5]

- a. A tool with a long handle used to move soil, sand and dirt :- _____
- b. Which part of our body controls all our muscles? :- _____
- c. Which country awards Nobel Prize? :- _____
- d. Write the name of the smallest river of India? :- _____
- e. Who won the title of Miss Universe 2019? :- _____

V. Identify the pictures and write their names.

[1 x 5 = 5]







DELHI PUBLIC SCHOOL

SAIL Township, Ranchi

SECOND SEMESTER (SESSION-2019-20)

SUBJECT: Computer

DATE :- 19.02.2020

CLASS: – II

Sec:- _____

M.O. :- _____


Roll no.:- _____

F. M. :- 20

NAME:- _____

Q.1 Choose the correct option:-

[0.5 X 5 = 2.5]

- a) We can choose colour from the
 - i. Shapes Tool
 - ii. Brush Tool
 - iii. Color box
- b)  Tool is used to draw
 - i. Lines
 - ii. Squares
 - iii. Circles
- c) Which part of a computer is used to draw pictures?
 - i. Monitor
 - ii. Keyboard
 - iii. Mouse
- d) Which of the following tool is used to erase any part of drawing?
 - i. Pencil
 - ii. Eraser
 - iii. Line
- e) Which key is used to move the cursor to the next line?
 - i. Enter key
 - ii. Delete key
 - iii. Shift key

Q.2 Guess the following

[0.5 X 5 = 2.5]

- a) A group that contains various colours _____
- b) A place where you can make a drawing _____
- c) Tool used to type text _____
- d) The blinking vertical line which looks like 'I' _____
- e) Tool used to erase the drawing _____

Q.3 Fill in the blanks:-

[0.5 X 5 = 2.5]

- a) A _____ is similar to a school bag.
- b) _____ tool is used for drawing an ellipse or a circle.
- c) The _____ box contains different colours to fill into shapes and drawings.
- d) _____ is an input device.
- e) _____ tool helps to draw a straight line on the drawing board.

Q.4 Guess the correct word from the given jumbled words:-

[0.5 X 5 = 2.5]

- a) EFIL- _____
- b) SORCUR- _____
- c) EILLPES- _____
- d) LNIE- _____
- e) RAGD- _____

Q.5 Write True/False

[0.5 X 5 = 2.5]

- a) A folder can also contain other folders. _____
- b) One should never save one's work in a computer. _____
- c) There are four buttons in a mouse. _____
- d) Right click helps to open shortcut or content menu. _____
- e) We cannot increase the size of the eraser. _____

Q.6 Match the columns with their correct option:-

[0.5 X 5 = 2.5]






a) Close button

b) Oval tool

c) Fill with color tool

d) Curve tool

e) Maximize button

- i. 
- ii. 
- iii. 
- iv. 
- v. 

Q.7 Answer the following questions in one word:-

[1 X 3 = 3]

a) Which finger must be placed on the left mouse button?

b) Which tool is used for drawing a rectangle or square?

c) What is the function of scroll wheel in a mouse?

Q.8 Write the name of the indicated parts & colour the mouse:

[1 X 2 = 2]

