



DELHI PUBLIC SCHOOL

SAIL Township, Ranchi

SECOND SEMESTER (SESSION-2019-20)

SUBJECT: ENGLISH

DATE :- 24.02.2020

CLASS: - PREP Sec:- _____

M.O. :- _____

Roll no.:- _____

F. M. :- 40

NAME:- _____

I. Write two words each for the given sounds: [0.5 x 10 = 5]

1. th - _____ , _____

2. g - _____ , _____

3. ch - _____ , _____

4. ea - _____ , _____

5. ck - _____ , _____

II. Fill in the missing letters. [0.5 x 8 = 4]

1. FL ___ WER

4. LU ___ CH

2. BRE ___ KF ___ ST

5. KI ___ E

3. T ___ AIN

6. D ___ RTY

7. BE ___ NS

III. Name them:

[0.5 x 8 = 4]

1.




- _____

2.



- _____

3.



- _____

4.



- _____

5.



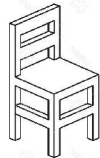
- _____

6.



- _____

7.



- _____

8.



- _____

IV. Name two fruits:

[1 x 2 = 2]

1. _____

2. _____






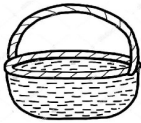


V. Choose and write :

[0.5 x 6 = 3]

1. A _____ of bread. (slice/glass)
2. A _____ of tea. (grain/cup)
3. A _____ of ink. (bottle/ bar)
4. A _____ of soup. (bowl/sack)
5. A _____ of grass. (blade/ bottle)
6. A _____ of paper. (string/ piece)

VI. Match the following :

[0.5 x 8 = 4]

- | | | |
|----|---|--------|
| 1. |  | spoon |
| 2. |  | shirt |
| 3. |  | stick |
| 4. |  | cycle |
| 5. |  | bread |
| 6. |  | paper |
| 7. |  | basket |
| 8. |  | shoe |

VII. Fill in with 'behind', 'in front of' or 'near'.

[0.5 x 4 = 2]

1.



- The ball is _____ the door.

2.




- The tree is _____ the house.

3.



- The sun is _____ the cloud.

4.

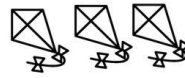


- The cat is _____ the chair.

VIII. Answer the following in sentences:

[1 x 4 = 4]

1. How many kites are there?



Ans:

2. What is the boy doing?



Ans:

3. How many trees are there ?



Ans:

4. Where is the glass?



Ans:

IX. Picture Composition:

[1 x 5 = 5]



**girl kite two
apple cat**

1. A _____ is standing near the house.
2. There is an _____ tree.
3. A boy is flying a _____ .
4. There are _____ ducks in the pond.
5. A _____ is sitting under the tree.

X. Write five lines on 'My Mother':

[1 x 5 = 5]

1. _____

2. _____

3. _____

4. _____

5. _____

XI. Riddle Time:

[1 x 2 = 2]

1. I am black in colour and your teacher writes on me . Tell me who am I?

2. I am orange in colour. I live under the ground and a rabbit loves to eat me. Tell me who am I?



DELHI PUBLIC SCHOOL

SAIL Township, Ranchi
SECOND SEMESTER (SESSION-2019-20)

SUBJECT: EVS

DATE :- 27.02.2020

CLASS: - PREP

Sec:- _____

M.O. :- _____

Roll no.:- _____

F. M. :- 40

NAME:- _____

I. Match the following:

[0.5 x 8 = 4]

- | | |
|-----------------|-----------------------|
| 1. stars | blue planet |
| 2. drawing room | feel |
| 3. earth | twinkle |
| 4. eyes | source of water |
| 5. igloo | meet our guests |
| 6. air | stop |
| 7. well | sense organ |
| 8. red light | house made up of snow |

II. Fill in the missing letters.

[0.5 x 10 = 5]

- | | |
|---------------------|---------------------|
| 1. H O ____ E Y | 6. H Y G ____ E N E |
| 2. B ____ E A T H E | 7. S A ____ E T Y |
| 3. W A ____ T E | 8. ____ N E R G Y |
| 4. O R ____ A N | 9. H O ____ S E |
| 5. W E ____ T H E R | 10. B R I G ____ T |

III. Name them:

[1 x 4 = 4]

1. one use of water - _____
2. a hot ball of fire - _____

3. a type of house - _____

4. a summer cloth - _____

IV. Unscramble the letters.

[1 x 5 = 5]

1. R F O C K - _____

2. I L G O O - _____

3. U P L S E S - _____

4. R C I E - _____

5. R B U S H - _____

V. Write (T) for true or (F) for false.

[1 x 4 = 4]

1. It is safe to play on the road.

2. We should not tease animals.

3. We cook food in the bathroom.

4. We should avoid junk food.

VI. Choose and write

[0.5 x 10 = 5]

1. _____ gives us wool. (Sheep / Cat)

2. Moving air is called _____ (breathe / wind)

3. We should not _____ water. (waste / use)

4. _____ helps us to taste. (Leg / Tongue)

5. The shape of the earth is _____. (round / oval)

6. _____ twinkles in the sky. (Moon/ Star)

7. We need food to _____ . (grow/ help)

8. Use the _____ crossing to cross the road.
(zebra/ giraffe)

9. We have _____ sense organs. (ten/ five)

10. Water is used for _____. (mopping/ standing)

VII. Name two animal products.


[1 x 2 = 2]

1. _____ 2. _____

VIII. Name them:

[1 x 5 = 5]

1.



- _____

2.




- _____

3.




- _____

4.



- _____

5.



- _____

IX. Draw, name and colour

[2 x 2 = 4]

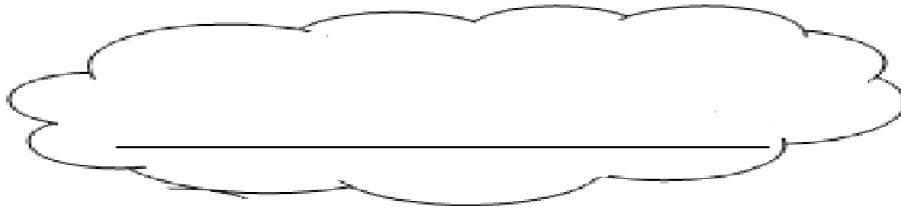
1. a type of house

2. a winter cloth

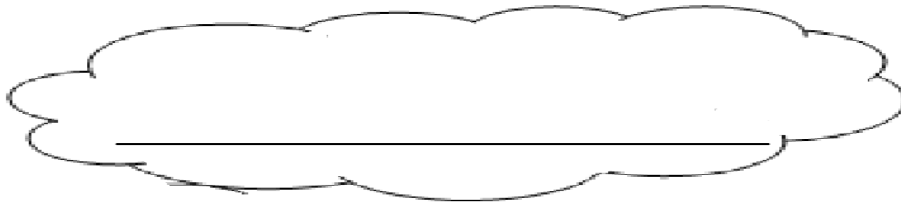
X. Riddle

[1 x 2 = 2]

1. I am round in shape and I shine at night. I am cool and bright. Tell me who am I?



2. I am white in colour. You drink me for healthy bones and teeth. Tell me who am I?





DELHI PUBLIC SCHOOL

SAIL Township, Ranchi
SECOND SEMESTER (SESSION-2019-20)

SUBJECT: HINDI

DATE :- 02.03.2020

CLASS: - PREP

Sec:- _____

M.O. :- _____

Roll no.:- _____

F. M. :- 40

NAME:- _____

I. चित्र देखकर नाम लिखो।

[0.5 x 8 = 4]

1.



.....
.....

2.



.....
.....

3.



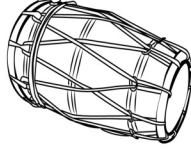
.....
.....

4.



.....
.....

5.



.....
.....

6.



.....
.....

7.



.....
.....

8.



.....
.....

II. सही मात्रा चुनकर शब्द पूरा करो।

[0.5 x 6 = 3]

1. ज ल बी (ॐ / ॐ)

2. क म रा (ॐ / ॐ)

3. क ट री (ै / े)

4. त लि या (ै / े)

5. ब त ल (ै / े)

6. स नि क (ॐ / ॐ)

III. दी गई मात्राओं से दो-दो शब्द बनाओ।

[0.5 x 8 = 4]

1) ए - _____

2) ओ - _____

3) ऐ - _____

4) अः - _____

IV. ओ (ो) की मात्रा से दो पक्षियों के नाम लिखो।

[1 x 2 = 2]

V. एक जैसे शब्द लिखो ।

[0.5 x 8 = 4]

1) केला - _____

2) तैर - _____

3) कौन - _____

4) वहाँ - _____

VI. खाली स्थानों में सही शब्द चुनकर भरें –

[1 x 5 = 5]

- 1) मोहन किसान का _____ था। (बेटा/बाटा)
- 2) शैलेश _____ जानता है। (तरना/तैरना)
- 3) कौशल _____ के साथ आया है। (नौकर/नोकर)
- 4) _____ में एक तोता है। (पंजरे/पिंजरे)
- 5) चंचल अपने _____ गया है। (गाँव/गाँवा)

VII. वर्णों को सही क्रम में लगाकर शब्द बनाओ ।

[0.5 x 5 = 2.5]

- 1) ठे ठ रा – _____
- 2) रा तै क – _____
- 3) र ख गो श – _____
- 4) लौ खि ना – _____
- 5) ता सि रे – _____

VIII. ए (ॐ) की मात्रा से दो पशुओं के नाम लिखो।

[1 x 2 = 2]

IX. समूह से अलग शब्द पर गोला लगाएँ –

[0.5 x 8 = 4]

- | | | | | | |
|----|------|------|------|------|--------|
| 1) | अंडा | डंडा | कौन | गंदा | ठंडा |
| 2) | मूँग | गूँज | पूँछ | भेड़ | बूँद |
| 3) | रोता | सोता | पोता | कोना | सेना |
| 4) | नमः | बेर | नेक | पेट | देर |
| 5) | पैसा | लौट | जैसा | मैला | थैला |
| 6) | बौना | फौज | पाँच | मौसी | मौका |
| 7) | गंगा | लंका | चंगा | तारे | दंगा |
| 8) | सोहन | भोजन | सरोज | मोटर | प्रायः |

X. 'तोता' पर पाँच शब्द लिखो ।

[0.5 x 5 = 2.5]

1.

2.

3.

4.

5.

XI. मेल करो ।

[0.5 x 10 = 5]

1.



केले

2.



ढेला

3.



नैया

4.



पैर

5.



बाँसुरी

6.



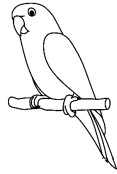
कोयल

7.



प्रातः

8.



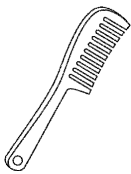
पौधा

9.



कंघी


10.



तोता

XII. दिए गए चित्र में से किन्हीं चार चीजों के नाम लिखो ।

[0.5 x 4 = 2]



1)

3)

2)

4)



DELHI PUBLIC SCHOOL

SAIL Township, Ranchi
SECOND SEMESTER (SESSION-2019-20)

SUBJECT: MATHS

DATE :- 04.03.2020

CLASS: - PREP Sec:- _____

M.O. :- _____

Roll no.:- _____

F. M. :- 40

NAME:- _____

I. Write number names for the following : [1 x 4 = 4]

a) 42 - _____

b) 85 - _____

c) 100 - _____

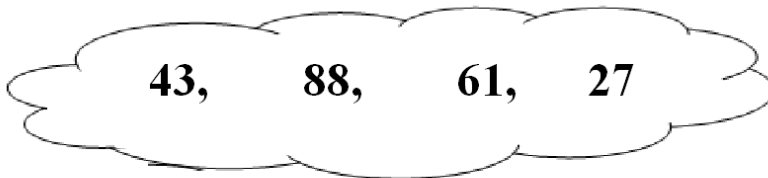
d) 69 - _____

II. What comes before ? [0.5 x 2 = 1]

a) 20

b) 33

III. Arrange in ascending order. [1 x 1 = 1]



IV. What comes after ? [0.5 x 2 = 1]

a) 45

b) 89

V. Fill in the missing letters.

[0.5 x 6 = 3]

a) S U ___ D A Y

b) J A N ___ A R ___

c) F R ___ D A Y

d) O ___ T O ___ E R

VI. Add:

[0.5 x 8 = 4]

a) 4
+ 5

b) 3
+ 3

c) 5
+ 0

d) 6
+ 2

e) 3
+ 4

f) 8
+ 1

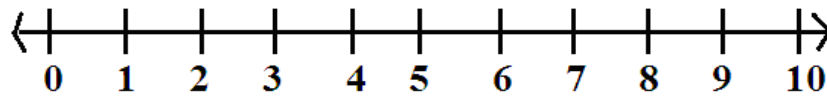
g) 4
+ 0

h) 7
+ 3

VII. Subtract using number line.

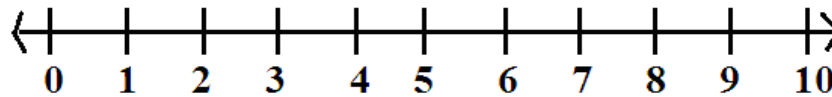
[1 x 2 = 2]

b) Show $7 - 2$



Ans.: - $7 - 2 =$

b) Show $5 - 3$



Ans.: - $5 - 3 =$

VIII. Fill in the blanks:

[1 x 5 = 5]

a) 2 more than 6 =

d) 1 more than 4 =

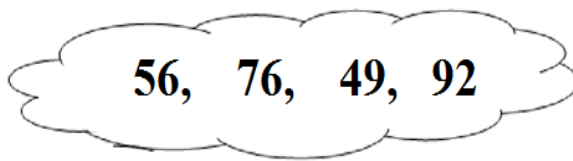
b) 1 less than 7 =

e) 2 less than 3 =

c) 2 more than 8 =

IX. Arrange in descending order.

[1 x 1 = 1]

 **X. Subtract:**

[0.5 x 8 = 4]

a) 7

- 4

b) 4

- 2

c) 6

- 6

d) 5

- 3

e) 3

- 2

f) 2

- 2

g) 9

- 1

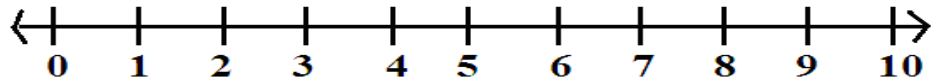
h) 8

- 5

XI. Add using number line.

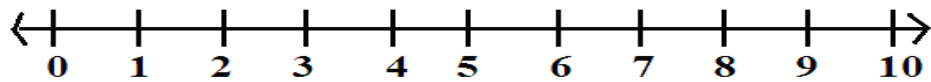
[1 x 2 = 2]

a) Show $6 + 3$



Ans.:- $6 + 3 = \square$

b) Show $4 + 4$



Ans.:- $4 + 4 = \square$

XII. Fill in the blanks.

[0.5 x 6 = 3]





a) 9, _____, 7, _____

b) 8, _____, _____, 5

c) _____, 5, _____, 3

XIII. Read the clock and write the time:

[0.5 x 4 = 2]

a)	 _____ o'clock	c)	 _____ o'clock
b)	 _____ o'clock	d)	 _____ o'clock

XIV. Solve it:

[1 x 2 = 2]

a) There are 8 ducks in a pond. 2 more ducks join them. How many ducks are there in pond?






Ans-

b) There are 9 birds sitting on a tree. 4 birds flew away. How many birds are left on the tree?

Ans-

XV. Fill in the blanks.

[1 x 2 = 2]

				
deer	tortoise	bear	mouse	snake





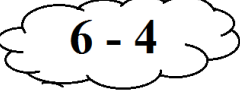







If the deer is at the 1st position, then

a) Which animal is at the 5th position? _____

b) Write the position of the bear. _____

XVI. Match the following.

[0.5 x 6 = 3]

a.		
b.		
c.		
d.		
e.		
f.		



DELHI PUBLIC SCHOOL

SAIL Township, Ranchi

SECOND SEMESTER (SESSION-2019-20)

SUBJECT: General Knowledge

DATE :- 19.02.2020

CLASS: – PREP Sec:- _____

M.O. :- _____

Roll no.:- _____

F. M. :- 10

NAME:- _____

- 1) When do we celebrate Children's Day?
- 2) Who bakes cakes for you?
a) baker or b) electrician
- 3) Name one badminton player from India.
- 4) Who is the chief minister of Jharkhand?
- 5) Who flies an aeroplane?
- 6) Where would you find the following:
a. Statue of Liberty
b. Eiffel Tower
c. Big Ben
d. Pyramids
- 7) When do we celebrate Christmas?



DELHI PUBLIC SCHOOL

SAIL Township, Ranchi

SECOND SEMESTER (SESSION-2019-20)

SUBJECT: General Knowledge

DATE :- 19.02.2020

CLASS: – PREP Sec:- _____

M.O. :- _____


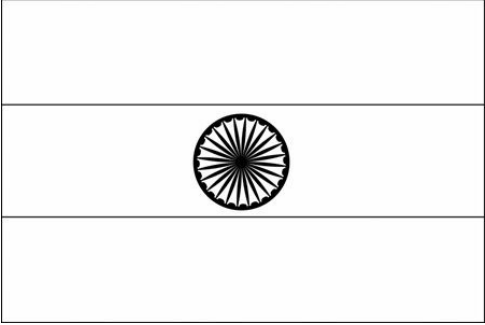
Roll no.:- _____

F. M. :- 15

NAME:- _____

I. Colour the given pictures using correct shades :

[3 x 2 = 6]

<p>1. Traffic light</p> 	<p>2. Indian flag</p> 
---	--

II. Draw and colour three things that you use in rainy season.

[1 x 3 = 3]

1.	2.	3.
----	----	----

P.T.O.

III. Match the following :

[1 x 6 = 6]

1.



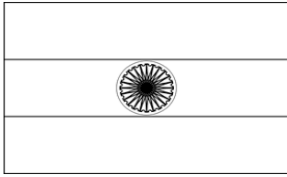
BIG BEN

2.




FARMER

3.




PILOT

4.



JERRY

5.



INDIAN FLAG

6.



ASTRONAUT