



# DELHI PUBLIC SCHOOL

Sail Township, Ranchi

FINAL SEMESTER (SESSION-2015-16)

**SUBJECT:** ENGLISH

**CLASS:** – PREP      **Sec:-** \_\_\_\_\_

**Roll no.:-** \_\_\_\_\_

**NAME:-** \_\_\_\_\_

**DATE :-** 22/02/2016

**TIME:-** 2 Hrs

**M. M. :-** 30

**M.O. :-** \_\_\_\_\_

**1. WRITE TWO 'CH', 'OA', 'EE' SOUND WORDS:** [0.5 x 6 = 3]

a) c h :- \_\_\_\_\_, \_\_\_\_\_

b) o a :- \_\_\_\_\_, \_\_\_\_\_

c) e e :- \_\_\_\_\_, \_\_\_\_\_

**2. WRITE TWO RHYMING WORDS FOR THE FOLLOWING:** [0.5 x 6 = 3]

a) Book :- \_\_\_\_\_, \_\_\_\_\_

b) Soil :- \_\_\_\_\_, \_\_\_\_\_

c) Fish :- \_\_\_\_\_, \_\_\_\_\_

**3. CHOOSE AND WRITE:** [1 x 5 = 5]

park, cat, bird, ducks, frogs



a) We are in a \_\_\_\_\_.

b) A \_\_\_\_\_ is behind the tree.

c) There is a \_\_\_\_\_ in the nest

d) There are \_\_\_\_\_ in the pond.

e) \_\_\_\_\_ are hopping nearby.

**P.T.O.**

**4. NAME THEM:**

[1 x 6 = 6]

- a) A person who bring letters. \_\_\_\_\_
- b) A person who catches fish. \_\_\_\_\_
- c) A person who flies an aeroplane. \_\_\_\_\_
- d) A person who bakes biscuits and breads. \_\_\_\_\_
- e) A person who reads the news. \_\_\_\_\_
- f) A person who ploughs the field. \_\_\_\_\_

**5. WRITE THE NAME OF FOOD ITEMS WHICH YOU HAVE IN:**

[1 x 3 = 3]

- a) BREAKFAST \_\_\_\_\_
- b) LUNCH \_\_\_\_\_
- c) DINNER \_\_\_\_\_

**6. FILL IN THE MISSING LETTERS:**

[0.5 x 10 = 5]

- a) P O T \_\_\_\_\_ E R
- b) D E N T \_\_\_\_\_ S T
- c) G \_\_\_\_\_ R D E N \_\_\_\_\_ R
- d) T E A C \_\_\_\_\_ E \_\_\_\_\_
- e) C O B B \_\_\_\_\_ E R
- f) F I \_\_\_\_\_ E M A N
- g) T A I L \_\_\_\_\_ R
- h) S I \_\_\_\_\_ G E R

**7. WRITE FIVE LINES ON 'MY FAVOURITE FRUIT':**

[1 x 5 = 5]

---

---

---

---

---

---



# DELHI PUBLIC SCHOOL

Sail Township, Ranchi

FINAL SEMESTER (SESSION-2015-16)

**SUBJECT:** EVS

**CLASS:** – PREP

**Roll no.:-** \_\_\_\_\_

**NAME:-** \_\_\_\_\_

**Sec:-** \_\_\_\_\_

**DATE :-** 27/02/2016

**TIME:-** 2 Hrs

**M. M. :-** 30

**M.O. :-** \_\_\_\_\_

**1. Write the names of two religious and two national festivals:** [1 x 4 = 4]

a) \_\_\_\_\_

b) \_\_\_\_\_

c) \_\_\_\_\_

d) \_\_\_\_\_

**2. Unjumble the words:** [1 x 4 = 4]

a) RACTERPEN - \_\_\_\_\_

b) PEEJ - \_\_\_\_\_

c) RUGUARADW - \_\_\_\_\_

d) ERTWA - \_\_\_\_\_

**3. Fill in the blanks:** [0.5 x 8 = 4]

a) \_\_\_\_\_ comes out in the day.

b) \_\_\_\_\_ is a national festival.

c) \_\_\_\_\_ shines brightly in the night sky.

d) Muslims go to the \_\_\_\_\_

e) \_\_\_\_\_ put off fire.

f) A car has \_\_\_\_\_ wheels.

g) \_\_\_\_\_ twinkle at night.

h) \_\_\_\_\_ is a festival of Hindus.

**4. Fill in the missing letters:** [1 x 4 = 4]

a) \_\_\_\_ O S Q \_\_\_\_ E

c) C \_\_\_\_ R I S \_\_\_\_ M A S

b) B \_\_\_\_ R B E \_\_\_\_

d) H E L \_\_\_\_ C O P \_\_\_\_ E R

**5. Answer the following questions:** [1 x 2 = 2]

a) Give two examples of Waterways.

i) \_\_\_\_\_ ii) \_\_\_\_\_

b) Whom does a policeman catch?

\_\_\_\_\_

P.T.O.

**6. Who am I ?**

[ 1 x 2 = 2]

a) I am circle in shape. Everyday I rise in the morning. Tell me who am I ?

\_\_\_\_\_

b) I bring lots of gifts for you. Every child welcomes me. Tell me who am I ?

\_\_\_\_\_

**7. Write 'T' for true and 'F' for false :**

[ 0.5 x 6 = 3]

a) Fireman puts off fire. \_\_\_\_\_

b) Hindus worship in Mosque. \_\_\_\_\_

c) Carpenter makes furniture for us. \_\_\_\_\_

d) Diwali is festival of colours. \_\_\_\_\_

e) Republic day is celebrated on 26<sup>th</sup> January. \_\_\_\_\_

f) Train moves on road. \_\_\_\_\_

**8. Match the following :**

[ 0.5 x 8 = 4]

- |                  |                                 |
|------------------|---------------------------------|
| a) Auto-rickshaw | gives us light and heat         |
| b) Sun           | three wheels                    |
| c) Holi          | Christians                      |
| d) Church        | festival of colours             |
| e) Farmer        | moves on road                   |
| f) Scooter       | grows rice, wheat and sugarcane |
| g) Aeroplane     | festival of light               |
| h) Diwali        | airways                         |

**9. Draw, label and colour any festival of your choice:**

[ 1 x 3 = 3]



# DELHI PUBLIC SCHOOL

Sail Township, Ranchi

FINAL SEMESTER (SESSION-2015-16)

**SUBJECT:** HINDI

**CLASS:** – PREP

**Sec:-** \_\_\_\_\_

**Roll no.:-** \_\_\_\_\_

**NAME:-** \_\_\_\_\_

**DATE :-** 25/02/2016



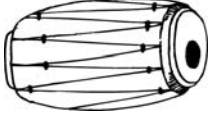





**TIME:-** 2 Hrs

**M. M. :-** 30

**M.O. :-** \_\_\_\_\_

1. चित्र देखकर नाम लिखो –

[0.5 x 8 = 4]

- i)  \_\_\_\_\_
- ii)  \_\_\_\_\_
- iii)  \_\_\_\_\_
- iv)  \_\_\_\_\_
- v)  \_\_\_\_\_
- vi)  \_\_\_\_\_
- vii)  \_\_\_\_\_
- viii)  \_\_\_\_\_

2. लयात्मक / एक जैसे शब्द लिखो –

[0.5 x 8 = 4]

- क) अंडा – \_\_\_\_\_
- ख) कौन – \_\_\_\_\_
- ग) तोल – \_\_\_\_\_
- घ) आलू – \_\_\_\_\_

3. सही मात्रा चुनकर शब्द पूरे करो –

[0.5 x 6 = 3]

- क) भ    ख ( ० / ७ )                      घ) स    म सा ( १ / १ )
- ख) आ    ल ( ७ / ० )                      ङ) द    ल त ( १ / १ )
- ग) ट    क री ( १ / १ )                      च) झ    डा ( १ / ७ )

P.T.O.

4. अपनी पसंद के दो फलों और दो सब्जियों के नाम लिखो –

[1 x 4 = 4]

फल

सब्जी

i) \_\_\_\_\_

i) \_\_\_\_\_

ii) \_\_\_\_\_

ii) \_\_\_\_\_

5. मिलान करो –

[1 x 5 = 5]

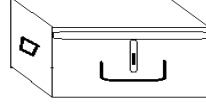
क) कंघी



ख) खिलौना



ग) तोता



घ) मूली



ङ) संदूक



6. खाली स्थानों में सही शब्द चुनकर लिखो –

[0.5 x 4 = 2]

क) ..... में एक तोता है। ( पिंजरे / पंजरे )

ख) नौकर ..... पर बैठा है। ( चौका / चौकी )

ग) ..... मत करो । ( शरो / शोर )

घ) वह बहुत ..... था। ( बुढ़ा / बूढ़ा )

7. 'मेरा विद्यालय' पर पाँच वाक्य लिखो –

[1 x 5 = 5]

i) \_\_\_\_\_

ii) \_\_\_\_\_

iii) \_\_\_\_\_

iv) \_\_\_\_\_

v) \_\_\_\_\_

8. ॰, ॱ एवं ॲ की मात्रा वाले शब्द लिखो –

[1 x 3 = 3]

॰ → \_\_\_\_\_

ॱ → \_\_\_\_\_

ॲ → \_\_\_\_\_



# DELHI PUBLIC SCHOOL

Sail Township, Ranchi

FINAL SEMESTER (SESSION-2015-16)

**SUBJECT:** MATHS

**DATE :-** 01/03/2016

**CLASS:** – PREP      **Sec:-** \_\_\_\_\_

**TIME:-** 2 Hrs

**Roll no.:-** \_\_\_\_\_

**M. M. :-** 30

**NAME:-** \_\_\_\_\_ **M.O. :-** \_\_\_\_\_

**1. Write the numerals of the number names:**

[0.5x4 = 2]

a) zero →

c) ninety-nine →

b) thirty-seven →

d) eighty-two →

**2. Addition:**

[1x4=4]

$$\begin{array}{r} 30 \\ +10 \\ \hline \end{array}$$

$$\begin{array}{r} 40 \\ +20 \\ \hline \end{array}$$

$$\begin{array}{r} 60 \\ +10 \\ \hline \end{array}$$

$$\begin{array}{r} 50 \\ +30 \\ \hline \end{array}$$

**3. Write the number names of the following:**

[1x5=5]

a) 100 → \_\_\_\_\_

b) 34 → \_\_\_\_\_

c) 49 → \_\_\_\_\_

d) 77 → \_\_\_\_\_

e) 50 → \_\_\_\_\_

**4. Subtraction:**

[1x4=4]

$$\begin{array}{r} 37 \\ -4 \\ \hline \end{array}$$

$$\begin{array}{r} 94 \\ -22 \\ \hline \end{array}$$

$$\begin{array}{r} 15 \\ -0 \\ \hline \end{array}$$

$$\begin{array}{r} 46 \\ -13 \\ \hline \end{array}$$

**5. Match the following:**

[1x6=6]

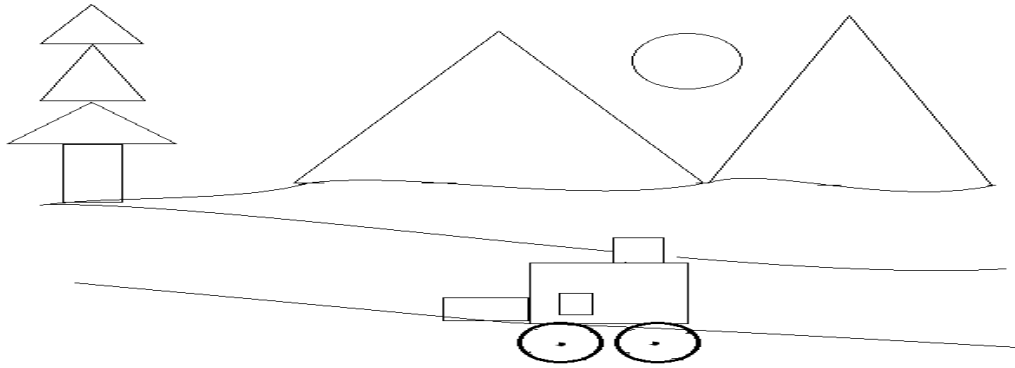
- $10 + 10$
- $80 + 10$
- $40 + 10$
- $30 + 10$
- $50 + 20$
- $10 + 0$

- 90
- 20
- 40
- 50
- 10
- 70

P.T.O.

6. Count the number of shapes in the given picture:

[ 1 x 4 = 4]



a) Circles - \_\_\_\_\_

b) Triangles - \_\_\_\_\_

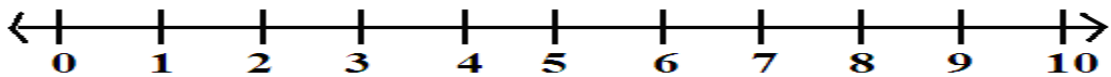
c) Squares- \_\_\_\_\_

d) Rectangles- \_\_\_\_\_

7. Subtract using Number Line:

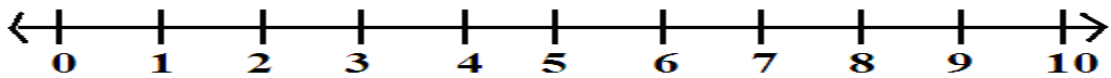
[ 1 x 3 = 3]

a) Show  $7 - 3$



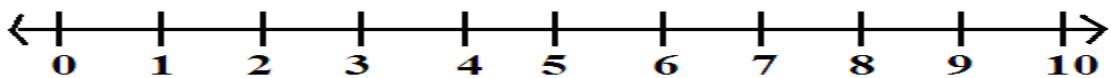
Ans.- \_\_\_\_\_

b) Show  $5 - 2$



Ans.- \_\_\_\_\_

c) Show  $9 - 6$



Ans.- \_\_\_\_\_

8. Draw and label any TWO shapes:

[ 1 x 2 = 2]





# DELHI PUBLIC SCHOOL

Sail Township, Ranchi

FINAL SEMESTER (SESSION-2015-16)

**SUBJECT:** GEN. KNOWLEDGE

**DATE :-** 17/02/2016

**CLASS:** – PREP      **Sec:-** \_\_\_\_\_

**TIME:-** 1 Hr

**Roll no.:-** \_\_\_\_\_

**M. M. :-** 10

**NAME:-** \_\_\_\_\_ **M.O. :-** \_\_\_\_\_

**Answer the following questions:**

**[ 1x 10 = 10]**

Q. (1) The Taj Mahal is located in which country?

Q. (2) Which festival is known as the 'Festival of colours'?

Q. (3) Who sat on the wall and had a great fall ?

Q. (4) Name the boy who had a magic lamp.

Q. (5) Which festival is known as the 'Festival of Lights'?

Q. (6) Name a means of land transport.

Q. (7) 'The Statue of Liberty' is located in which country?

Q. (8) Name a means of water transport.

Q. (9) Name a part of a plant.

Q. (10) Which article is used to cool our house during summer?