



DELHI PUBLIC SCHOOL

Sail Township, Ranchi

FINAL SEMESTER (SESSION-2015-16)

SUBJECT: ENGLISH (Subjective)

DATE :- 22/02/2016

CLASS: - I **Sec:-** _____

M. M. :- 25 **M.O. :-** _____

Roll no.:- _____

Time :- 1 Hr

NAME:- _____

1. Answer these questions:

[1.5 x 4 = 6]

a) Where did Henrik go?

b) How does the hare jump?

c) Who is working like a busy bee?

d) Where did the ball fall?

2. Write whether True or False:

[0.5 x 6 = 3]

a) The hare stopped on the way to eat berries.

b) Sundays are not fun.

c) The soup tasted very bad.

d) Amar washed and cleaned the ball.

e) The hare walked very slowly.

f) Mother is sitting and reading the paper.

3. Make sentences with:

[1 x 5 = 5]

a) holiday - _____

b) new - _____

c) magic - _____

P.T.O.

5 Look at the table and make **four** sentences:

[½ x 4 = 2]

I They He	have has	a doll. two pens. three cats.
-----------------	-------------	-------------------------------------

- a) _____
- b) _____
- c) _____
- d) _____

6 **Underline the describing words. Circle the naming words they describe:** [½x8= 4]

- a) The girl bought a pretty dress.
- b) We saw white lilies.
- c) He has three pencils.
- d) I ate a juicy mango.



7 **Complete the sentences by using the ‘ing’ form of the action words:** [½ x 6 = 3]



- a) The birds are _____ in the sky. (fly)
- b) The girl is _____. (sing)
- c) Ram is _____ a book. (read)
- d) Tina is _____ at the blackboard. (look)
- e) The baby is _____. (cry)
- f) The children are _____ in a row. (stand)





8 **Complete this story using the words in the box in place of the picture clues:**

[½ x 8 = 4]

dog, kennel, bone, hut

A  _____ lay in his  _____.

He suddenly got the smell of a  _____ coming outside the  _____.

He came out of his  _____ and grabbed the  _____ into the  _____. He ate the  _____ and was satisfied.



DELHI PUBLIC SCHOOL

Sail Township, Ranchi

FINAL SEMESTER (SESSION-2015-16)

SUBJECT: HINDI (Subjective)

CLASS: - I Sec:- _____

Roll no.:- _____

NAME:- _____

DATE :- 25/02/2016

M. M. :- 25 M.O. :- _____

Time :- 1 Hr

1. निम्नलिखित प्रश्नों के उत्तर दें –

[2 x 5 = 10]

प्रश्न. क)– मदारी ने गाँव में क्या बजाई ?

उत्तर –

प्रश्न. ख)– कौए के गाना गाने पर क्या हुआ ?

उत्तर –

प्रश्न. ग)– वर्षा में कौन भीग रहा था ?

उत्तर –

प्रश्न. घ)– चूहा किससे डरता था ?

उत्तर –

प्रश्न. ङ)– चिड़िया का नाम क्या था ?

उत्तर –

2. वाक्य बनाएँ –

[1 x 4 = 4]

क) प्रशंसा –

ख) चिड़िया –

ग) जंगल –

घ) भूखा –

P.T.O.

3. किसने किससे कहा –

[1 x 2 = 2]

क) “तुम भी अपना घर बनाते तो बारिश में न भीगते।”

..... ने

..... से

ख) “मेरे अच्छे भाई, मुझे अपना गाना सुना दो”।

..... ने

..... से

4. जंगल में पाए जाने वाले पाँच जानवरों के नाम लिखें –

[1 x 5 = 5]

.....

.....

.....

.....

.....

5. “राष्ट्रीय पक्षी” पर चार वाक्य लिखें –

[1 x 4 = 4]

.....

.....

.....

.....

.....

.....

.....

.....

.....

.....

.....

.....

.....

.....

.....

.....

.....



DELHI PUBLIC SCHOOL

Sail Township, Ranchi

FINAL SEMESTER (SESSION-2015-16)

SUBJECT: HINDI (Objective)

CLASS: - I Sec:- _____

Roll no.:- _____

NAME:- _____

DATE :- 25/02/2016

M. M. :- 35 M.O. :- _____

Time :- 1 Hr

1. निम्नलिखित शब्दों में अँ की मात्रा सही अक्षर पर लगाएँ – [1 x 5 = 5]

क) अगूठी ख) बासुरी ग) हसना घ) काच ङ) चाद

2. पशुओं को उनकी बोली से मिलाएँ – [1 x 6 = 6]

i) गाय	भाँ-भाँ	<input type="checkbox"/>
ii) ऊँट	हिन-हिन	<input type="checkbox"/>
iii) बकरी	बाँ-बाँ	<input type="checkbox"/>
iv) कुत्ता	में – में	<input type="checkbox"/>
v) घोड़ा	म्याऊँ-म्याऊँ	<input type="checkbox"/>
vi) बिल्ली	घूँ-घूँ	<input type="checkbox"/>

3. अंको को पहचान कर सही शब्द पर गोला करें – [1 x 4 = 4]

i) 3	छः/तीन
ii) 9	एक/नौ
iii) 5	पाँच/आठ
iv) 11	दस/ग्यारह

4. रिक्त स्थानों को सही शब्द चुनकर भरें – [1 x 6 = 6]



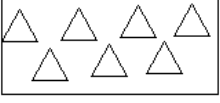

बारह,	चिंघाड़,	चाँद,	शहद,	बाँसुरी,
दहाड़,	ग्यारह,	कपड़ा,	ऊन	

- वस्तुओं का एक दर्जन होता है।
- मधुमक्खी हमें देती है।
- हाथी लगाता है।
- भेड़ हमें देती है।
- रोती तो दिखाती माँ।
- मदारी ने गाँव में बजाई।

P.T.O.

5. चित्रों की गिनती करें व शब्दों और अंको में लिखें –

[1 x 4 = 4]

शब्द	अंक
	_____
	_____
	_____
	_____

6. सही शब्द चुनकर वाक्य पूरा करें –

[1 x 4 = 4]

- कौए को एक का टुकड़ा मिला। (माँस / मास / मस)
- चिड़िया मुनमुन जाति की थी। (बाया / बया / बाय)
- पेड़ पर रहता था। (बनदर / बनादर / बन्दर)
- लोमड़ी का जी गया। (ललचा / लालचा / ललाचा)

7. सही वाक्य पर (✓) चिन्ह लगाएँ व गलत वाक्य पर (✗) चिन्ह लगाएँ –

[1 x 3 = 3]

- मूर्ख अच्छी बात कभी नहीं सुनता है।
- पक्षियों में मोर चालाक होता है।
- लोमड़ी चतुर होती है।

8. अँ की मात्रा वाले तीन पशुओं के नाम लिखें –

[1 x 3 = 3]

-
-
-



DELHI PUBLIC SCHOOL

Sail Township, Ranchi

FINAL SEMESTER (SESSION-2015-16)

SUBJECT: EVS (Subjective)

DATE :- 27/02/2016

CLASS: - I Sec:- _____

M. M. :- 25 M.O. :- ____

Roll no.:- _____

Time :- 1 Hr

NAME:- _____

1. Name these:

[0.5 x 10 =5]

a) Two types of weather-

b) Two climbers-

c) Two flightless birds -

d) Two harmful insects-

e) Two heavenly bodies -

2. Define the terms:

[1 x 4 = 4]

a) Trees: - _____

b) Herbs: - _____

c) New Moon: - _____

d) Sun: - _____

3. Short type answers:

[2 x 4 = 8]

a) What are wild animals?

b) What does a seed need to grow?

P.T.O.

c) Why do we wear woollen clothes on a cold day?

d) What are climbers?

4. Long type answers:

[1 x 3 = 3]

a) How can we take care of our Mother Earth? Write three ways.

i) _____

ii) _____

iii) _____

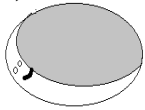
5. a) Which type of day is it?

[0.5 x 2 = 1]



b) Name the Shape of this Moon :

[0.5]




c) Name this wonder of nature:

[0.5]



6. Label the parts of the plant:

[0.5x4 = 2]



7. Draw any one water animal and label and colour it:

[1]



DELHI PUBLIC SCHOOL

Sail Township, Ranchi

FINAL SEMESTER (SESSION-2015-16)

SUBJECT: EVS (Objective)

DATE :- 27/02/2016

CLASS: - I Sec:- _____

M. M. :- 35 M.O. :- _____

Roll no.:- _____

Time :- 1 Hr

NAME:- _____

1. Fill in the blanks by choosing the correct option from the help box: [1 x 5 = 5]

Trees, grass, paper, two, wind

- a) Moving air is called _____
- b) _____ live for many years.
- c) Zebra is a _____ eating animal.
- d) Birds have _____ legs.
- e) Do not waste plant products like food and _____

2. Fill in the missing letters: [0.25x20= 5]

- a) I ___ S ___ C ___ ___
- b) ___ E ___ E ___ L ___
- c) U ___ B ___ E ___ ___ A
- d) O ___ ___ O ___ ___ S
- e) ___ A ___ N B ___ ___

3. Circle the correct option and fill in the blanks: [1 x 5 = 5]

- a) Dog is a _____ animal. (wild / domestic)
- b) _____ is a useful insect. (Mosquito / Honeybee)
- c) We cannot see the Sun on a _____ day.(cloudy/ sunny)
- d) Number of rings tell us the _____ of the tree. (length / age)
- e) The Sun rises in the _____. (East / West)

P.T.O.

4. Write True or False:

[1 x 5 = 5]

- a) Herbs have soft green stems. _____
- b) We must pluck flowers. _____
- c) Insects have six legs. _____
- d) Winds cannot uproot trees. _____
- e) We should throw garbage in rivers. _____

5. Match the following:

[1 x 5 = 5]

- | | | |
|--|------------|--------------------------|
| a) Hilly areas | i) Mango | <input type="checkbox"/> |
| b) One seed | ii) Tiger | <input type="checkbox"/> |
| c) Mint | iii) North | <input type="checkbox"/> |
| d) India's National animal | iv) Herb | <input type="checkbox"/> |
| e) If we face the rising sun our left arm points | v) Snow | <input type="checkbox"/> |

6. Use the correct word from the help box and answer the questions:

[1x 5 = 5]

Pumpkin, Oxen, Grass, Heater, Cooler, Horse, 5 th June, 5 th July, Grapevine, Rose

- a) Name an animal used for Ploughing the field - _____
- b) Name any one creeper - _____
- c) Name any one thing used in cold day - _____
- d) Name any one herb - _____
- e) When do we celebrate Environment day? - _____

7. Circle ten things we get from plants:

[0.5 x 10=5]

Egg Rubber Paper Milk food Pulses Meat Honey
Oil Spices Cement Medicines Fish Pulp Coffee Tea



DELHI PUBLIC SCHOOL

Sail Township, Ranchi

FINAL SEMESTER (SESSION-2015-16)

SUBJECT: Maths

DATE :- 01/03/2016

CLASS: - I Sec:- _____

M. M. :- 60 M.O. :- _____

Roll no.:- _____

Time :- 2 Hrs

NAME:- _____

1. Fill in the blanks:

[1 x 10 = 10]

- a) The number name of 417 is _____
- b) July comes just after _____
- c) Three hundred Sixty two in numeral is _____
- d) December has _____ days.
- e) Saturday is the last day of a _____.
- f) _____ comes before Tuesday.
- g) If today, it is Monday. Tomorrow shall be _____.
- h) 70 rupees = 50 rupees + _____ rupees.
- i) In the spelling of names of months of a year there are:
 - i) _____ letters in August.
 - ii) _____ has three letters in its name.

2. Tick (✓) the correct value of each Paise or Rupees:

[1 x 2 = 2]



a)

100 paise <input type="checkbox"/>		500 paise <input type="checkbox"/>
------------------------------------	--	------------------------------------



b)

Rs. 10 <input type="checkbox"/>		200 paise <input type="checkbox"/>
---------------------------------	--	------------------------------------

3. Match the figures in column A with figures of Column B :

[1 x 5 = 5]

Column - A

- i)
- ii)
- iii)
- iv)
- v)

Column - B

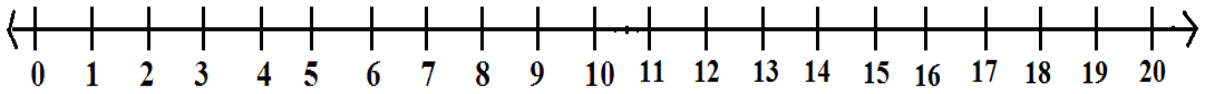
- a) _____
- b) _____
- c) _____
- d) _____
- e) _____

P.T.O.

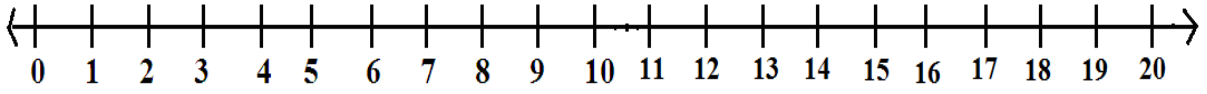
4. Add three numbers on number line:

[2 x 2 = 4]

a) $3 + 4 + 5 = \underline{\hspace{2cm}}$



b) $5 + 6 + 3 = \underline{\hspace{2cm}}$



5. Fill in the blanks:

[0.5 x 8 = 4]



Number of Cherries $\underline{\hspace{2cm}} + \underline{\hspace{2cm}} = \underline{\hspace{2cm}}$

2 $\underline{\hspace{2cm}}$ are $\underline{\hspace{2cm}}$

$\underline{\hspace{2cm}} \times \underline{\hspace{2cm}} = \underline{\hspace{2cm}}$

6. Fill in the blanks:

[1 x 4 = 4]

a) $4 \times 5 = \underline{\hspace{2cm}}$

b) $3 \times 8 = \underline{\hspace{2cm}}$

c) $5 \times 7 = \underline{\hspace{2cm}}$

d) $2 \times 9 = \underline{\hspace{2cm}}$

7. Continue the pattern:

[0.5 x 8 = 4]

a) 189, 188, 187, $\underline{\hspace{1cm}}$, $\underline{\hspace{1cm}}$, $\underline{\hspace{1cm}}$, $\underline{\hspace{1cm}}$

b) 155, 160, 165, $\underline{\hspace{1cm}}$, $\underline{\hspace{1cm}}$, $\underline{\hspace{1cm}}$, $\underline{\hspace{1cm}}$

8. Subtract with borrowing:

[0.5 x 4 = 2]

a)
$$\begin{array}{r} \text{T} \quad \text{O} \\ \square \quad \square \\ 9 \quad 5 \\ - 5 \quad 6 \\ \hline \end{array}$$

b)
$$\begin{array}{r} \text{T} \quad \text{O} \\ \square \quad \square \\ 8 \quad 0 \\ - 7 \quad 7 \\ \hline \end{array}$$

9. Write the time:

[1 x 2 = 2]



a) You wakes up at $\underline{\hspace{1cm}}$ O'clock.



b) You go to play at $\underline{\hspace{1cm}}$ O'clock.

10. Fill in the blanks:

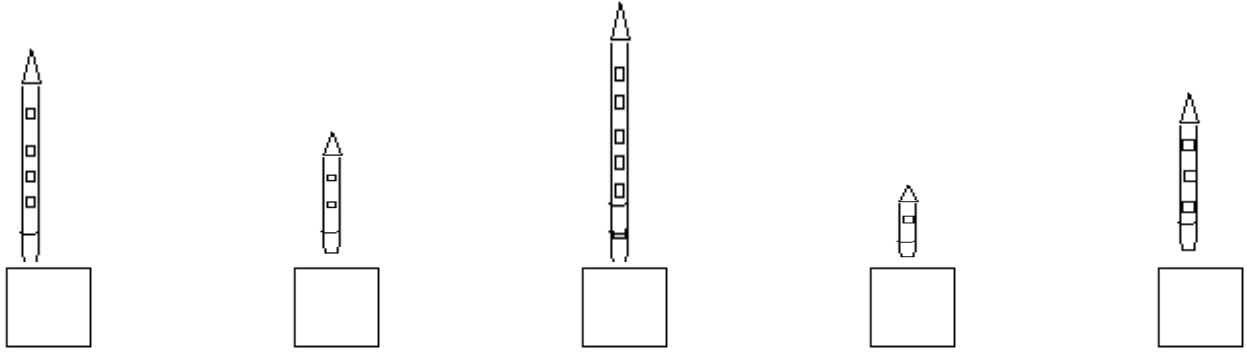
[1 x 3 = 3]

a) What is the shape of Compact Disc? $\underline{\hspace{2cm}}$


b) Name two four sided objects. i) $\underline{\hspace{2cm}}$ ii) $\underline{\hspace{2cm}}$

P.T.O.

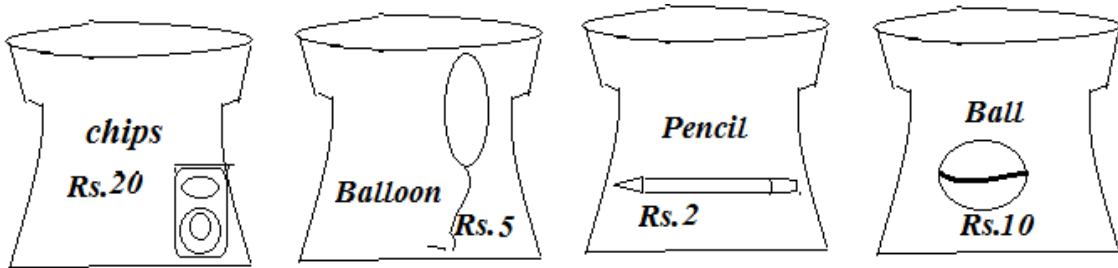
11. a) Tick (✓) the longest pencil and cross (✗) the shortest pencil : [1 x 2 = 2]



b) Encircle the thicker tree: [1 x 1 = 1]



12. Look the shopping basket and answer these questions: [1 x 3 = 3]



- a) What is the price of a ball? Rs. _____
- b) Which is the costliest thing? _____
- c) Add the price of Pencil and Balloon both. _____

13. Solve the story sums: [2 x 2 = 4]

a) A man buys 40 pink roses and 26 white roses. How many roses does he buy?

b) Bina has 95 dolls. Out of these 40 dolls are old. How many dolls are new?

P.T.O.

14. Tick the correct answer:

[1 x 10 = 10]

a) One hundred rupee note is equal to –

- i) one fifty rupees note ii) Two fifty rupees notes iii) Ten fifty rupees notes

b) Two hundred ninety in numeral is -

- i) 209 ii) 219 iii) 290

c) The hand span is used to measure -

- i) weight ii) capacity iii) length

d) 9 multiplied by 0 is -

- i) 90 ii) 0 iii) 9

e) The short hand of the clock shows -

- i) hours ii) minutes iii) weight

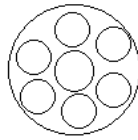
f) Which is the ninth month of the year.

- i) March ii) September iii) June

g) 2 tens + 8 ones is equal to -

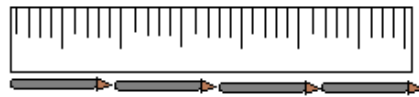
- i) 38 ii) 48 iii) 28

h) How many circles are there in all in the given picture?



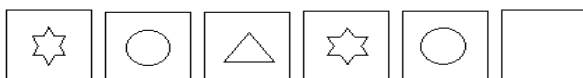
- i) 7 ii) 6 iii) 8




i) How long this scale is -



- i) 5 pencils ii) 4 pencils iii) 2 pencils

j) Complete the pattern -



- i)  ii)  iii) 



DELHI PUBLIC SCHOOL

Sail Township, Ranchi

FINAL SEMESTER (SESSION-2015-16)

SUBJECT: G.K.

DATE :- 17/02/2016

CLASS: - I **Sec:-** _____

M. M. :- 25 **M.O. :-** ____

Roll no.:- _____

Time :- 1 Hr.

NAME:- _____

1. Tick (✓) the correct answer:

[1 x 5 = 5]

a) Who was the first woman President of India?

- i) Vijay Lakshmi Pandit ii) Pratibha Patil iii) Indira Gandhi

b) Who is known as the 'Father of the Nation'?

- i) Jawaharlal Nehru ii) Rabindranath Tagore iii) Mahatma Gandhi

c) What kind of cloth is used to make the National flag of India?

- i) Khadi ii) Silk iii) Wool

d) Which colour of the Indian flag stands for 'Purity and Truth'?

- i) Orange ii) Green iii) White

e) How many states does India have ?

- i) 20 ii) 23 iii) 29

2. Read and write 'True' or 'False' for the following statements:

[1 x 5 = 5]

a) Every year on Independence day, Prime Minister hoists the National flag at the Red fort.

b) The President of the USA lives in the Pink city.

c) A piece of land between two mountains is known as desert.

d) Russia is the largest country in the world.

e) The Goliath frog is the largest frog found in the world.

3. Unjumble the following words:

[1 x 5 = 5]

a) G T A R U I - _____

d) F O S R T E - _____

b) I L S A N D - _____

e) V I L I O N - _____

c) D T R E S E - _____

P.T.O.

4. Match the names of these famous people with their pictures:

[1 x 5 = 5]



a) Rabindranath Tagore

b) Mother Teresa

c) Mahatma Gandhi

d) Jawaharlal Nehru

e) Dr. Manmohan Singh



5. Identify the following pictures and tick the correct option:

[1 x 5 = 5]



a) Horn please

No Horn



c) Mountain

Plain




e) Recycle

No Recycle



b) Taj Mahal

Lotus Temple



d) Flag of Japan

Flag of USA