



DELHI PUBLIC SCHOOL

SAIL TOWNSHIP, RANCHI

HALF YEARLY EXAMINATION (2024-25)

Class - VII
Time - 3 Hours

Subject - Mathematics
Maximum Marks- 80

General Instructions

- This question paper has 5 sections A, B, C, D and E.
- Section A has 20 multiple choice questions (MCQ) carrying 1 mark each.
- Section B has 5 short Answer type questions carrying 2 marks each.
- Section C has 6 short Answer type questions carrying 3 marks each.
- Section D has 4 long Answer type questions carrying 5 marks each.
- Section E has 3 case based integrated units of assessment questions (4 marks each).
- All questions are compulsory. However, an internal choice in 2 questions of 2 marks, 2 questions of 3 marks and 2 questions of 5 marks has been provided. An internal choice has been provided in 2 marks question of Section E.
- Draw neat figure whenever required.

Section – A (1 x 20=20)

1. The greatest negative integer among the following is -
(a) -7 (b) -1 (c) -2 (d) -100
2. If a, b, c are integers, then $a \times (b + c)$ is equal to -
(a) $a \times b + c$ (b) $a \times b \times c$ (c) $a \times b - a \times c$ (d) $a \times b + a \times c$
3. If the cost of $\frac{3}{4}$ litre of milk is Rs. 21, then the cost of 1 litre of milk is -
(a) Rs. 21 (b) Rs. 28 (c) Rs. $\frac{63}{4}$ (d) Rs. 84
4. $0.42 \div 0.6$ is equal to -
(a) 0.7 (b) 7 (c) 0.07 (d) 0.007
5. The mean of observation x, y, z is -
(a) $\frac{x+y+z}{3}$ (b) $\frac{xyz}{3}$ (c) $\frac{x-y-z}{3}$ (d) $\frac{x \times y + z}{3}$
6. The mode of the data 23, 26, 22, 29, 23, 29, 26, 29, 22, 23 is -
(a) 23 and 29 (b) 23 only (c) 26 only (d) 29 only
7. The median of first eight natural number is -
(a) 4 (b) 5 (c) 4.5 (d) 5.5
8. The number of days in y weeks and y days is -
(a) $7y^2$ (b) $8y$ (c) 7 (d) $14y$
9. The perimeter of a rectangle is 48 units. If the length is twice the breadth, then the length (in units) is -
(a) 16 (b) 8 (c) 12 (d) 24
10. If two supplementary angles differ by 44, then one of the angles is -
(a) 102 (b) 65 (c) 112 (d) 72

11. The angle which makes a linear pair with an angle of 61° is of -
 (a) 29 (b) 11 (c) 119 (d) 122
12. Vertically opposite angles are always -
 (a) Supplementary (b) Complementary (c) Adjacent (d) Equal
13. In an isosceles triangle, each of the base angle is twice of the vertex angle. The measure of each base angle is -
 (a) 36 (b) 45 (c) 60 (d) 72
14. Which of the following is a 3D figure ?
 (a) Cone (b) Rectangle (c) Circle (d) Trapezium
15. A solid that has only one vertex is -
 (a) Pyramid (b) Cube (c) Cone (d) Cylinder
16. The number of rectangular faces vertices and edges of a cuboid respectively is -
 (a) (6, 8, 12) (b) (12, 8, 6) (c) (6, 12, 8) (d) (8, 6, 12)
17. $x - x^2 - 3x + 4x^2$ is equal to -
 (a) $5x^2 - 4x$ (b) $3x^2 - 5x$ (c) $3x^2 - 2x$ (d) $5x^2 - 2x$
18. The value of $5x^2 - 7y^3$ when $x = 2$ and $y = -1$ is -
 (a) 27 (b) 13 (c) 17 (d) 3

DIRECTION : In the question 19 and 20, a statement of assertion (A) is followed by a statement of reason (R). Choose the correct option.

19. Assertion (A) : If a, b, c are respectively the coefficients of x^2 in $-x^2$, $2x^2 + x$, $2x - x^2$ respectively then $a + b + c = -1$

Reasoning (R) : Coefficient is the numerical factor in the term.

- (a) Assertion (A) and Reason (R) are true and Reason (R) is the correct explanation of Assertion (A)
 - (b) Both Assertion (A) and Reason (R) are true and Reason (R) is not the correct explanation of Assertion Both (A)
 - (c) Assertion (A) is true but Reason (R) is false
 - (d) Assertion (A) is false but Reason (R) is true.
20. Assertion (A) : Side of a square is $3x$ cm and its area is $(3x)^2 = 9x^2$.
 Reasoning (R) : Area of a square is $4 \times \text{side}$.
 (a) Assertion (A) and Reason (R) are true and Reason (R) is the correct explanation of Assertion (A)
 (b) Both Assertion (A) and Reason (R) are true and Reason (R) is not the correct explanation of Assertion Both (A)
 (c) Assertion (A) is true but Reason (R) is false
 (d) Assertion (A) is false but Reason (R) is true.

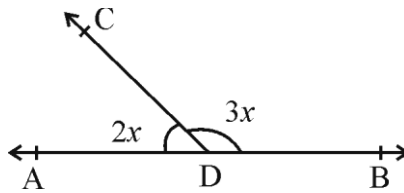
Section – B (2 x 5=10)

21. The price of a Mathematics book is Rs. $37\frac{2}{5}$ and that of a Science book is Rs. $37\frac{3}{5}$ which book costs more and by how much ?

or

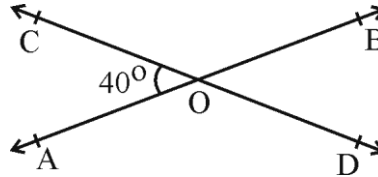
21. Find the cost of 7.25 m of cloth at Rs. 175.5 per meter.

22. Solve the equation $\frac{3a}{10} + \frac{2a}{5} = \frac{7a}{25} + \frac{29}{25}$
23. A number is such that it is as much greater than 84 as it is less than 108. Find the number.
24. In the adjoining figure, find the value of x and hence the angles.



or

24. Two lines AB and CD intersect at a point O. If $\angle AOC = 40^\circ$, find the measure of each of the angles $\angle AOD$, $\angle BOD$ and $\angle BOC$.



25. What cross section do you get when you give a (i) vertical cut and (ii) horizontal cut to the following solids ?
- (i) ice cream brick (ii) ice cream cone.

Section – C (3 x 6 = 18)

26. The temperature of a city on Monday was 31°C . The temperature rose by 2°C everyday upto Friday and fell by 7°C on Saturday. What was the temperature of the city on Saturday?
27. Sharmila bought $2\frac{1}{2}$ kg of apples at Rs. 120 per kg. She gave a Rs. 500 note to the vendor. Find the amount she will get back from the vendor.

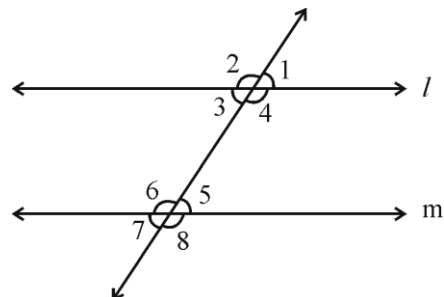
or

27. A motorbike covers a distance of 78.5 km in one litre of petrol.
- (a) How much distance will it cover in 4.5 litres of petrol,
- (b) What quantity of petrol is required to cover 588.75 km?
28. The cost of a pen is eight times the cost of a pencil. If the cost of 4 pens and 3 pencils is Rs. 210, find the cost of a pencil and a pen separately.

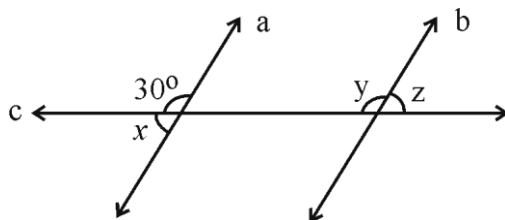
or

28. Lata's father is 57 years old. He is 5 years older than four times Lata's age. Find how old is Lata
29. State the property that is used in the following statements according to the figure given :

- (i) If $l \parallel m$, then $\angle 3 = \angle 5$
- (ii) If $\angle 1 = \angle 5$, then $l \parallel m$.
- (iii) If $l \parallel m$, then $\angle 3 + \angle 6 = 180^\circ$.



30. In the figure if $a \parallel b$, then find the value of x, y, z .



31. Draw the net of a cuboid, triangular prism and triangular pyramid.

Section – D (5 x 4 = 20)

32. In a class test containing 10 questions, 5 marks are awarded for every correct answer and (-2) marks are awarded for every incorrect answer and 0 for each question not attempted.

- (i) Ravi gets 4 correct and 6 incorrect answers. What is his score ?
- (ii) Reena gets 5 correct and 5 incorrect answers. What is her score ?
- (iii) Heena gets 2 correct and 5 incorrect answers. What is her score ?

33. The maximum and minimum temperature in $^{\circ}\text{C}$ of the cities on a particular day are given as follows :-

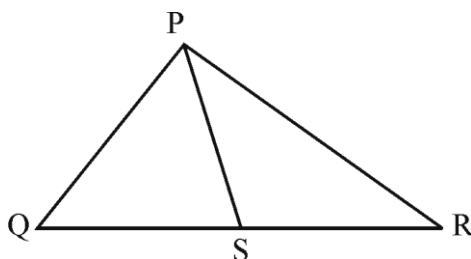
| City | Bangalore | Chennai | Delhi | Mumbai | Srinagar |
|---------------------|-----------|---------|-------|--------|----------|
| Maximum Temperature | 25 | 34 | 40 | 30 | 15 |
| Minimum Temperature | 19 | 27 | 28 | 26 | 10 |

Plot the double bar graph to represent the data.

34. Two poles of height 9m and 14m stand upright on a plane ground. If the distance between their feet is 12m, find the distance between their tops.

or

34. S is any point on the side QR of ΔPQR , show that $PQ + QR + PR > 2PS$.



35. Subtract the sum of $(8m - 7n + 6p^2)$ and $(-3m - 4n - p^2)$ from the sum of $(2m + 4n - 3p^2)$ and $(-m - n - p^2)$.

or

35. For $x = -3$, $y = -2$ and $z = 5$, find the value of

- (a) $3x - 4y + 2z$
- (b) $x^3 + y^3 + z^3 - 3xyz$

Section – E (4 x 3 = 12)

Case Study

36. Rajinder donated $\frac{3}{5}$ th of his monthly income to a trust working for the education of poor girls, $\frac{1}{5}$ th of his income on purchasing food and other household items for his family. He spends $\frac{4}{15}$ th part of his income on other expenses. He is left with Rs. 5000.

Based on the above answer the following questions :-

[1+1+2]

- (i) What was Rajinder's monthly income ?
- (ii) How much money per month is spent on other expenses ?
- (iii) How much amount he donates per month to the trust for the education of poor girls ?

or

- (iii) How much amount he spends on food and other house hold items ?

37. Rita has been given a summer holiday assignment to collect data of students in her class according to their ages. Given below are the ages of 15 students in her class.

10, 11, 11, 15, 15, 15, 13, 13, 13, 13, 16, 16, 18, 19, 20

Help Rita to find the following :

[1+1+2]

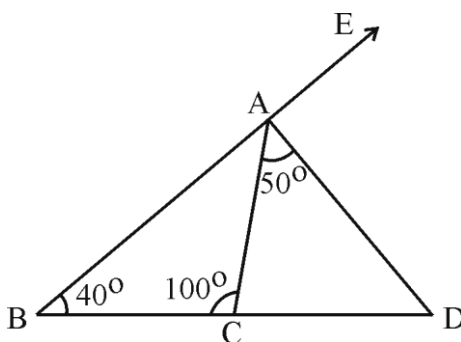
- (i) Range of the data
- (ii) Mode of the data
- (iii) Mean of the above data

or

- (iii) Median of the above data

38. In the figure given alongside, find

[1+1+2]



- (i) $\angle ACD$
 - (ii) $\angle ADC$
 - (iii) $\angle DAE$
- or
- (iii) $\angle BAC$



DELHI PUBLIC SCHOOL

SAIL TOWNSHIP, RANCHI

HALF YEARLY EXAMINATION (2024-25)

Class - VII
Time - 90 Minutes

Subject - German
Maximum Marks - 40

| | | |
|----|---|---|
| 1. | <p>Lies den E- mail und schreib die Antwort an Ben. Schreib ca. 40 Wörter.</p> <p>Hallo Brian, Ich bin in der siebten Klasse. Meine Schule heißt Mt. Teresa Gymnasium und liegt in München. Mein Stundenplan ist cool! Mathe und Deutsch haben wir jeden Tag. Am Dienstag und am Donnerstag habe ich Biologie, Erdkunde und Sport. Erdkunde mag ich nicht, aber ich mag Deutsch und Sport. Mein Lieblingsfach ist Kunst. Unsere Schule ist eine künstliche Schule, d.h. wir haben drei Mal in der Woche Kunstunterricht. Unsere Kunstlehrerin, Frau Weber, ist Fantastisch! Sie ist eigentlich meine Lieblingslehrerin. Am Samstag spiele ich Fußball auf dem Fußballplatz, denn am Samstag und am Sonntag habe ich keine Schule. Hast du am Samstag Unterricht? Was sind deine Lieblingsfächer? Schreib mir bald! Ciao Peter</p> <ul style="list-style-type: none">• Wie heißt deine Schule?• Wie ist dein Stundenplan?• Wie heißen deine Lieblingsfächer?• Welche Fächer findest du langweilig?• Hast du am Samstag frei? Oder gehst du auch am Samstag in die Schule? | 5 |
| | <p>In der Schule</p> <p>Mein Name ist Stefan. Ich gehe gerne in die Schule. In der Klasse sind 30 Schüler. Es sind Mädchen und Jungen. Die meisten Lehrer sind nett und der Schuldirektor auch. Neben mir in der Schulbank sitzt mein bester Freund Klaus. Florian ist ein Klassenkamerad. Er ist auch ein Freund. Im Rucksack habe ich ein Buch, Papier zum Schreiben, zwei Kugelschreiber, Buntstifte, Bleistifte und einen Radiergummi. Das Lineal brauche ich für Mathematik. Da bin ich nicht gut. Ich verstehe die Aufgaben nicht richtig. In der Pause ist es immer lustig. Wir essen und trinken etwas. In einer großen Pause gehen wir in den Hof und spielen Fußball. Diese Pause ist immer zu kurz. Ich mag nicht alle Schulfächer gleich gerne. Sport ist mein Lieblingsfach. Sport könnte jeden Tag sein. Deutsch ist eine schwere Sprache. Ich muss viele Übungen machen. Dann kann ich</p> | |

| | | |
|----|--|---------------------------|
| | <p>es bald besser. Englisch spreche ich gut. Ich mache nur wenige Fehler. Auch Biologie und Kunst habe ich gerne. Biologie ist interessant. Ich mag Tiere. Auch Geschichte interessiert mich sehr. Vor den Ferien schreiben wir noch zwei Schularbeiten. Eine in Deutsch und eine in Englisch. Ich hoffe, ich bekomme eine gute Note.</p> <p>A. Antwort die folgenden Fragen:</p> <ol style="list-style-type: none"> Wieviele Schüler sind in der Klasse? Wie heißt der Klassenkamerad? Was ist das Lieblingsfach? Wieviele Schularbeiten werden noch geschrieben? Was ist im Rucksack? <p>B. Richtig oder Falsch:</p> <ol style="list-style-type: none"> Der Schuldirektor ist nett. Florian ist der beste Freund von Stefan. Er braucht ein Lineal für Mathematik. Er spricht gut Englisch. Biologie ist langweilig. | <p>1x5=5</p> <p>1x5=5</p> |
| 3. | <p>Schreib die Pluralformen:</p> <ol style="list-style-type: none"> Der Bleistift Das Lineal Der Film Die Spielkarte Der Kanarienvogel Das Tier Die Katze Die Schere Die Nachricht Das Programm | 0.5x10=5 |
| 4. | <p>Schreib die richtigen Verbkonjugation:</p> <ol style="list-style-type: none"> Hier ist jemand. _____ du es nicht? [<i>hören</i>] Es _____ schon den ganzen Tag. [<i>regnen</i>] Ich _____ ein Wasser. [<i>trinken</i>] Meine Eltern _____ morgen zu mir und _____ meinen Hund mit. [<i>kommen / bringen</i>] Ihr _____ Musik und _____ einen Brief. [<i>hören / schreiben</i>] Du _____ mit deinem Hund und _____ danach. [<i>spielen / arbeiten</i>] Meine Schwester _____ ihre Hausaufgaben. [<i>machen</i>] | 0.5x10=5 |
| 5. | <p>Bau Sätze:</p> <ol style="list-style-type: none"> Findet. ihr. Im . Internet. Information. Über. Uns. Sind. Alle. dreizehn. Alt. Jahre. Haben. Wir. Schon. Jahre. Zwei. Lang. Gelernt. Deutsch. Sportschau. Meine. Lieblingssendung. Ist. Die Finden. Wie. Nachrichten. Sie.? | 1x5=5 |
| 6. | Stell Fragen: | 1x5=5 |

| | | | | | | | | | | | | | | |
|---------------------------------------|--|---------------------------------------|------------------------------------|--------------------------------|--------------------------|--------------------------------|-------------------------------|------------------------|------------------------|---------------------------------|-------------------------------|--|--|-------|
| | <div>a. Ja, ich suche das Mäppchen. b. Ich suche den Kugelschreiber. c. Nein, ich habe keinen Hunger. d. Ein Mineralwasser, bitte. e. Er unterrichtet Geschichte.</div> | | | | | | | | | | | | | |
| 7. | <div>Was passt zusammen?</div> <table><tr><td>1. Siehst du gern das Kulturprogramm?</td><td>a) nein, ich finde ihn langweilig.</td></tr><tr><td>2. Wie findest du Virat Kohli?</td><td>b) ja, um halb fünf Uhr.</td></tr><tr><td>3. Wie findest du die Sendung?</td><td>c) Ich finde ihn sehr hübsch.</td></tr><tr><td>4. Sehen wir den Film?</td><td>d) Ich finde sie toll.</td></tr><tr><td>5. Gibt es heute eine Talkshow?</td><td>e) Ja, ich sehe es sehr gern.</td></tr><tr><td></td><td></td></tr></table> | 1. Siehst du gern das Kulturprogramm? | a) nein, ich finde ihn langweilig. | 2. Wie findest du Virat Kohli? | b) ja, um halb fünf Uhr. | 3. Wie findest du die Sendung? | c) Ich finde ihn sehr hübsch. | 4. Sehen wir den Film? | d) Ich finde sie toll. | 5. Gibt es heute eine Talkshow? | e) Ja, ich sehe es sehr gern. | | | 1x5=5 |
| 1. Siehst du gern das Kulturprogramm? | a) nein, ich finde ihn langweilig. | | | | | | | | | | | | | |
| 2. Wie findest du Virat Kohli? | b) ja, um halb fünf Uhr. | | | | | | | | | | | | | |
| 3. Wie findest du die Sendung? | c) Ich finde ihn sehr hübsch. | | | | | | | | | | | | | |
| 4. Sehen wir den Film? | d) Ich finde sie toll. | | | | | | | | | | | | | |
| 5. Gibt es heute eine Talkshow? | e) Ja, ich sehe es sehr gern. | | | | | | | | | | | | | |
| | | | | | | | | | | | | | | |
| | | | | | | | | | | | | | | |



DELHI PUBLIC SCHOOL

SAIL TOWNSHIP, RANCHI

HALF YEARLY EXAMINATION (2024-25)

Class - VII
Time - 90 Minutes

Subject - Computer Science
Maximum Marks- 25

General Instruction:

All questions are compulsory

1. Mention the data type (Text, Number, Date and Time, Yes/No) of the fields and also indicate the primary key. [5]

- a) Index No b) Total c) Date of Birth d) Appeared for Exam e) Name

2. Choose the correct option: [5]

- a) Which of the following field appears by default when Ms Access is opened?
i) ID ii) Index iii) IP iv) RN
- b) Which of the following fields can be selected as a primary key in MS Access database file?
i) Name ii) Date of birth iii) registration no. iv) marks
- c) Which of the following is not a Version of Windows Operating System?
i) Windows 95 ii) Windows 2000 iii) Windows 6 iv) Windows Vista
- d) Which of the following are not a part of System Software?
i) Operating System ii) Compiler iii) Ms Access iv) Interpreter
- e) Full form ChatGPT is
i) Generative Post - Trained Transformer iii) Generative Pre - Trained Transformer
ii) Generative Post - Training Transformer iv) Generative Pre - Training Transformer

3. Fill in the blanks (Copy the sentence): [5]

- a) _____ system was an AI machine designed to play chess.
- b) _____ software controls the functioning of computer.
- c) _____ AI based machine, can also be referred as Self-Aware machine.
- d) The branch of computer science that deals with extraction, cleaning and analysis of data is termed as _____
- e) _____ is a link between two tables on the basis of a common field.

4. Answer in one word: [5]

- a) It is an effective way to organize and summarize data for viewing or printing.
- b) This software is used to store data in additional storage device or space.
- c) Name the chatbot released by Google.
- d) This operating system can be freely downloaded and used.
- e) This software is used to free up the disk space on a computer hard drive.

5. Name any two:

[5]

- a) Distribution of Linux OS
 - b) Utility Software
 - c) Compression Software
 - d) Views of a table
 - e) Categories of Narrow AI machines.
-



DELHI PUBLIC SCHOOL

SAIL TOWNSHIP, RANCHI

HALF YEARLY EXAMINATION (2024-25)

Class - VII
Time - 3 Hours

Subject - English
Maximum Marks- 80

General Instructions:

1. The question paper is divided into 3 sections. You can attempt any section first, but complete all the answers of that section and then go to the next section.
2. Don't copy the questions. Only write the answers beside the correct question numbers.
3. Presentation carries marks.

SECTION A (READING)

(20 MARKS)

1. Read the given passage carefully

- (1) The word ' Chikungunya ' doesn't need any introduction these days. Every third person that one meets seems to have been affected by this debilitating but not fatal disease. My grandmother unfortunately became a victim of it and it's been almost two months and she still hasn't recovered from it. Her illness made me gather all the information about chikungunya which I would like to share with all the readers today.
- (2) It's a viral disease transmitted to humans by infected mosquitoes. The African word, chikungunya means " that which bends up ". In Swahili, this means " the illness of the bended walker ". That explains, the patients afflicted with chikungunya suffer joint pains and walking becomes almost a torture. The infection is caused by the virus and the other symptoms include headache, joint swelling, muscle pain and rashes.
- (3) I jokingly consoled my grandmother that she is never going to be infected with the virus again as it is believed that once infected, you become immune to it for life. The virus is spread among people by mosquitoes which mainly bite during the day.
- (4) The doctors say that no specific vaccine or treatment has been found so far so they just recommend plenty of rest, fluids and required medicines to keep the fever down and also the joint pains. You all may have seen large hoardings by the government advising people to always use mosquito nets and mosquito repellents. Also, water should not be allowed to stagnate at one place to discourage breeding of mosquitoes.
- (5) I would like to appeal to all my friends that as responsible students and future citizens of the country to spread awareness about this disease and educate the illiterate people about it.

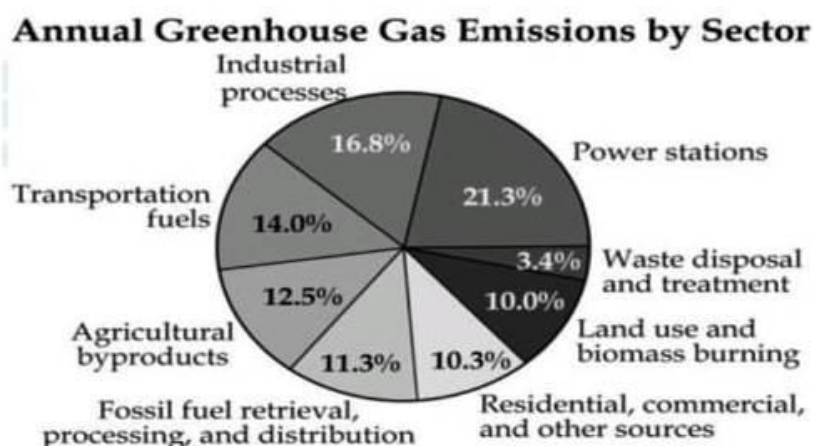
On the basis of the above passage, answer the following questions briefly

- (i) Why doesn't the word Chikungunya need any introduction ? (1)
- (ii) Chikungunya is a viral disease transmitted to humans by _____ (Fill in the blank) (1)
- (iii) What do doctors recommend to the patients for relief ? (1)
- (iv) Will the grandmother be infected with Chikungunya again as per the common belief ? (1)

- (v) The word from passage which means – ‘to make somebody’s body and mind weaker’ (1)
 (a) debilitating
 (b) healthy
 (c) unfortunate
 (d) afflicted
- (vi) The synonym of the word ‘Fatal’ is – (1)
 (a) deadly
 (b) harmless
 (c) benign
 (d) mild
- (vii) Name the symptoms caused by the painful disease. (in about 30-40 words) (2)
- (viii) How can we as responsible citizens spread awareness about the disease? (in about 30-40 words) (2)

2. **Read the given passage carefully.** (10)

Global weather is causing the Arctic Circle to melt. This is primarily a result of the greenhouse effect caused by too much carbon dioxide in the atmosphere which acts as a blanket, trapping heat and warming the planet. Burning of fossil fuels like coal, oil and natural gas for energy cutting down and burning forests to create pastures and plantations leads to carbon accumulation. Refrigeration and air conditioning and certain agricultural practices also worsen the problem by releasing additional potent global warming gases such as methane and nitrous oxide. Over the last century, global average temperature has increased by more than 1.0° F. A warming world would also have the potential to change rainfall and snow patterns, increase droughts and severe storms, reduce lake ice cover, melt glaciers, increase sea levels and change plant and animal behaviour. The impact of global warming on our planet is extremely serious and if this problem is not tackled on an urgent basis it will lead to melting of polar ice caps leading to an increase in sea level, drowning coastlines and slowly submerging continents. Our generation needs to give a healing touch to the earth which we have ourselves made sick.



On the basis of your understanding of the passage, answer the following questions.

- (i) How does the green house effect make our planet warmer? (1)

- (ii) What is the impact of global warming on our planet? (1)
- (iii) Carbon accumulation is caused by: (1)
- (a) burning of fossil fuel.
 - (b) burning forests.
 - (c) burning natural gas.
 - (d) all the above
- (iv) According to the pie chart which sector has the highest annual greenhouse gas emission? (1)
- (a) power stations.
 - (b) industries.
 - (c) transportation fuel.
 - (d) land use.
- (v) The gases emitted by agricultural by - products is more than that by fossil fuels. is the given statement **True/False** (1)
- (vi) Gases like methane and nitrous oxide are released by _____. (FIB from the passage) (1)
- (vii) If global warming is not tackled on an urgent basis it will lead to: (1)
- (a) melting of polar ice caps.
 - (b) submergence of continents.
 - (c) drowning coastlines.
 - (d) all the above
- (viii) The word 'submerging' in the passage DOES NOT mean the same as: (1)
- (a) sinking
 - (b) drowning
 - (c) floating
 - (d) immersing
- (ix) The word 'tackled' in the passage means the same as: (1)
- (a) avoided
 - (b) dealt with
 - (c) ignored
 - (d) promoted
- (x) Which of the following does not contribute to the green house effect, making the planet warmer? (1)
- (a) using refrigerator
 - (b) using air conditioner
 - (c) afforestation
 - (d) burning coals

SECTION-B : Grammar & Writing

(20 MARKS)

3. Do as directed : Attempt ANY TEN

(1x10=10)

- (i) A pair of branded shoes _____ (is/are) quite expensive these days. (Choose the verb form that agrees with the subject)

- (ii) The Three Musketeers _____ (is /are) a very good book. (Choose the verb form that agrees with the subject)
- (iii) She advised that I _____ curtail expenditure. (FIB with correct modal)
- (iv) It's very hot today. Do you think it _____ rain later ? (will/must) (Choose the correct modal)
- (v) I was exhausted at the end of the exam, I _____ for over two hours. (Choose the correct option)
- had been writing
 - had written
 - was writing
 - have written
- (vi) You _____ me crazy. Turn off the TV ! I think you _____ a walk in the garden.(Choose the correct option):
- drove, need
 - drive, needed
 - are driving, are needing
 - are driving, need
- (vii) He was cleaning the house. (Change the sentence into passive voice)
- (viii) A choreographer arranges the dance movements. (Change the sentence into passive voice)
- (ix) We allowed them _____. (to go/going/go) (FIB with either an infinitive or a gerund)
- (x) He finished _____ the book in the morning. (reading/to read/read) (Choose the correct option)
- (xi) He was smoking a pipe. (Identify whether the verb is used transitively or intransitively)
- (xii) She was singing a song for me. (Underline the direct object and circle the indirect object.)

4. (A) You have got admitted to a Residential School for the first time. Your mother is very worried for your well-being. Write a letter to your mother telling her that your stay at hostel is very comfortable and joyous. (in about 100-120 words) **(1x5=5)**

OR

- (B) Write your thoughts on the proverb '**The pen is mightier than the sword**' in 80 - 100 words

5. (A) You are Priyanka/ Priyanshu, the Cultural Secretary of your School. You have been asked to inform students of class VI-VIII about the Inter School Drama Competition. Draft a notice in about 80 words to be put up on the school notice board, with all necessary details. **(1x5=5)**

OR

- (B) Write a paragraph on the Foundation Day Celebration of your school in not more than 80 to 100 words.

SECTION-C : Literature (40 Marks)

6. **Answer these questions with reference to the context :** (5)

(A) *"I am a symbol, I am like you.
Both good and evil dwell in me too"*

(i) Who is being referred to as 'I' ? (1)

(ii) The name of the poet is (1)

- (a) Keki P Daruwala
- (b) Keki N Daruwalla
- (c) Keki P Daruwalla
- (d) Keki N Daruwala

(iii) The poet's collection of poems, _____, received the Sahitya Academy in 1984. (1)

(iv) Write the meaning of the word 'a symbol' in the above mentioned line. In what way is the tiger a symbol like us ? (in about 30-40 words) (2)

OR

(B) *But off yonder where it's rocky,
Where you get a better view,
You will find the ranks are thinning
And the travellers are few.*

(i) What does the poet mean by ' a better view' ? (1)

(ii) Write the meaning of the expression '**ranks are thinning**' ? (1)

(iii) Edgar Albert Guest was also known as the _____ (1)

- (a) poet of the people
- (b) poet of the poems
- (c) poet of the critics
- (d) poet of the sonnet

(iv) What does the rocky path symbolize ? Why is the reader urged to travel the rocky path ? (in about 30-40 words) (2)

7. **Answer these questions with reference to the context :**

(A) " Spring has forgotten this garden, so we will live here all the year round." (5)

(i) The author of the chapter is (1)

- (a) Oscar Wilde
- (b) Leo Tolstoy
- (c) Jerome K Jerome
- (d) William Cowpar

(ii) Why did the speaker say these words ? (1)

(iii) Why the names of the seasons have been capitalized ? (1)

(iv) Who said these words ? Whose garden is being referred to as 'this garden'? (in about 30-40 words) (2)

OR

(B) ----- he would summon me with raucous barks and vigorous bangs of his bill on the woodwork of the kitchen window,

(i) Who is being referred to as 'he' in these lines ? (1)

(ii) What is the meaning of 'raucous barks' ? (1)

(iii) The figure of speech used in 'bangs of his bill' is (1)

(a) Personification

(b) Imagery

(c) Alliteration

(d) Simile

(iv) Whom did he 'summon' with raucous barks ? What was the reason for this urgent summons? (2)

8. **Answer ANY FOUR of the following FIVE questions, in about 40-50 words. (4x3=12)**

(i) What was the project that Ms Bharthi wanted the class to do? Why and for what occasion ?

(ii) Why did Harold fall out of his nest ?

(iii) What does the tiger do when he is not worried about his meals ?

(iv) Describe the Selfish Giant's garden.

(v) How did Harold improve his appearance periodically?

9. **Answer ANY TWO of the following THREE questions, in about 40-50 words. (3x2=6)**

(i) Why was Ben Gunn marooned on the Treasure Island ?

(ii) Describe the appearance of the old seaman when he enters Admiral Benbow Inn.

(iii) What do you know about Mr. Trelawney?

10. **Answer ANY ONE Of the following Questions of TWO in about 100-120 words. (1x6=6)**

(a) Describe the contribution of Teejan Bai, Mahasweta Devi, Begum Hazrat Mahal and Kasturba Gandhi in their respective fields. How did their work impact the lives of women and society in India?

OR

(b) What evidence do you find in the story about the Giant's selfishness and wicked nature? Did he stick to this? How do you get to know about it?

11. **Answer ANY ONE Of the following Questions of TWO in about 100-120 words. (1x6=6)**

(a) Write any two incidents which describe Jim as a brave boy.

OR

(b) Why is the stockade important in Treasure Island.



DELHI PUBLIC SCHOOL

SAIL TOWNSHIP, RANCHI

HALF YEARLY EXAMINATION (2024-25)

Class - VII
Time - 90 Minutes

Subject - French
Maximum Marks- 40

1. Lis le texte et réponds aux questions suivantes.

[5]

Robert est étudiant. Il est très actif et très sportif. Il aime beaucoup les sports, surtout le foot. Il est le champion de foot. Il joue aussi au basket et au tennis. A l'école, il pratique le basket avec ses camarades. Pour être en bonne forme, il fait de la gymnastique. L'année prochaine, il va en Australie pour un match de foot. Il pratique beaucoup le foot pour gagner le match. Il attend le match.

a. Dis vrai ou faux.

1. Robert est le champion de foot.
2. Il n'aime pas beaucoup le sports.
3. Il y a un match de foot en australie.
4. Robert pratique le basket avec ses pere.

b. Complète avec un mot du texte.

1. J'ai beaucoup de .(match / camarades / sports)
2. Le sport donne la bonne . (actif / gagner / forme)

2. Répondez aux questions.

[3]

- a. Qui a construit la tour Eiffel ?
- b. Combien mesure la tour Eiffel ?
- c. Où est située la cathédrale de Notre Dame ?
- d. Quelle est la hauteur de l'Arc de Triomphe ?
- e. Pourquoi la basilique du Sacré-Coeur a été construite ?
- f. Nommez quelques oeuvres du musée du Louvre.

3. Dites vrai ou faux .

[2]

- a. Paris mesure exactement 325 mètres
- b. L'hôtel des Invalides abrite aujourd'hui le musée des armées.
- c. Notre Dame se trouve en plein coeur de l'île de la Cité.
- d. Le Sacré - Coeur n'est pas un monument religieux.

4. Choisissez la bonne réponse.

[2]

- a. Je vois un (bel homme. / homme bel.)
- b. Aujourd'hui c'est le..... de l'année. (dernier mois / mois dernier)
- c. Je donne (plusieurs cours / cours plusieurs)
- d. Je visite un (temple hindou / hindou temple)

5. Complétez avec la forme de l'adjectif entre parenthèses.

[2]

- a. Des robes (blanc)
- b. Unmonsieur (gentille)
- c. Ungarçon (grosse)
- d. Unhomme (vieux)

6. Mettez les phrases au négatif.

[5]

- a. Je parle l'anglais avec mon professeur.
- b. Ce sont des étudiants.
- c. Elle boit du jus de fruits.
- d. Il a des stylos rouges.
- e. Les parents arrivent à l'aéroport.

7. Mettez les phrases à l'interrogatif en trois formes.

[5]

- a. Tu parles à ton ami.
- b. Louis va à Paris.
- c. Il aime faire ses devoirs.
- d. Vous aimez la musique jazz.
- e. Les enfants jouent dans le parc.

8. Écrivez dix ligne en MA MAISON.

[5]

9. Remplacez l'adverbe de quantité souligné avec un adverbe contraire.

[2]

- a. J'adore les épinards. Je mange moins d'épinards que mon frère.
- b. Le professeur est fatigué. Il a peu de copies à corriger.
- c. Je vais me coucher tard. Il y a moins de choses à faire.
- d. Il a plus de travail que moi. Il va au cinéma ce soir mais je ne peux pas y aller.

10. Traduisez en anglais :

[4]

- a. Je parle anglais et français.
- b. Tu es une intelligente fille.
- c. J'ai 10 stylos.
- d. Nous allons en France

11. Quelle heure est-il ?

[3]





12. Écrivez en français .

[2]

- a. At left
 - b. Against
 - c. Towards
 - d. In back of
-



DELHI PUBLIC SCHOOL
SAIL TOWNSHIP, RANCHI
HALF YEARLY EXAMINATION (2024-25)

Class - VII
Time - 3 Hours

Subject - Hindi
Maximum Marks- 80

- निर्देश – (i) सभी प्रश्नों के उत्तर देना अनिवार्य है।
(ii) प्रश्न पत्र तीन खण्डों में विभक्त है—क, ख, ग
(iii) क्रम से प्रश्नों के उत्तर लिखिए।

खण्ड – 'क'

प्रश्न 1. अपठित गद्यांश को ध्यानपूर्वक पढ़कर प्रश्नों के उत्तर लिखिए— (5)

(क) एक व्यापारी अत्यंत अमीर था। उसे नींद न आने की बीमारी थी। उसका नौकर मालिक की बीमारी से दुखी रहता था। एक दिन व्यापारी अपनी संपत्ति अपने नौकर को देकर चल बसा। संपत्ति का मालिक बनने के बाद नौकर रात को सोने की कोशिश कर रहा था, किन्तु उसे नींद आ रही थी। जब नौकर सोने के लिए अपने बिस्तर पर लेटा था, तो उसने कुछ आहट सुनी। देखा, एक चोर घर का सारा सामान समेटकर उसे बाँध रहा था, परंतु चादर छोटी होने के कारण गठरी बाँध नहीं रही थी। नौकर ने अपनी ओढ़ी चादर चोर को दे दी और बोला, इसमें बाँध लो। चोर भागने लगा। नौकर ने चोर को रोककर हाथ जोड़कर कहा, “भागो मत, इस सामान को ले जाओ, ताकि मैं चैन से सो सकूँ।” उसकी बातें सुनकर चोर की भी आँखें खुल गई और उसने चोरी करना छोड़ दिया।

(क) व्यापारी को क्या बीमारी थी? (1)

(i) नींद में चलने की (ii) नींद में हँसने की (iii) नींद न आने की (iv) नींद में खाने की

(ख) व्यापारी कैसा था? उसकी बीमारी से कौन दुखी था? (2)

(ग) चोर की गठरी क्यों नहीं बाँध रही थी? (2)

(ख) हिंदी सजीव भाषा है। इसी कारण इसने अरबी, फ़ारसी आदि के संपर्क में आकर उनके शब्द ग्रहण कर लिए। अब अंग्रेजी के शब्दों को भी ग्रहण कर रही है। इसे भाषा—दोष नहीं, गुण समझना चाहिए। अपनी इस ग्रहण—शक्ति से हिंदी का विकास हो रहा है, ह्रास नहीं। जैसे—जैसे इसका प्रचार बढ़ेगा, वैसे—वैसे इसमें नये शब्द आते जाएँगे। हमें तो केवल इस बात का ध्यान रखना चाहिए कि इस सम्मिश्रण के कारण हमारी भाषा अपने स्वरूप को तो नष्ट नहीं कर रही है— कहीं अन्य भाषाओं के बेमेल शब्दों के मिश्रण से अपना रूप तो नहीं बिगाड़ रही है। (5)

1. हिंदी कैसी भाषा है? (1)

(क) मातृभाषा (ख) राष्ट्रभाषा (ग) सजीव भाषा (घ) निर्जीव भाषा

2. हिंदी में नये शब्दों का आगमन क्यों उचित है? (2)

3. दूसरी भाषाओं से शब्द लेते समय किस बात का ध्यान रखना चाहिए? (2)

प्रश्न 2. निर्देशानुसार प्रश्नों के उत्तर लिखिए – (20)

(क) स्वर के कितने भेद होते हैं? (संख्या) (1)

(ख) रेखांकित शब्द विशेषण के किस भेद के अन्तर्गत आता है? (1)
मोहन के पास चार खिलौने हैं?

- (ग) विलोम शब्द लिखें। (1)
- (i) आरोह (ii) आकाश
- (घ) अशुद्ध शब्दों को शुद्ध करें। (1)
- (i) इतिहासिक (ii) परिक्षण
- (ङ) अनुस्वार को उदाहरण के साथ परिभाषित कीजिए। (2)
- (च) लिपि की परिभाषा लिखिए। (उदाहरण सहित) (2)
- (छ) किन्हीं दो शब्दों के दो-दो अनेकार्थक शब्द लिखिए। (2)
- (i) तात (ii) क्षेत्र (iii) अशोक
- (ज) निम्नलिखित अनेक शब्दों के लिए एक शब्द लिखिए। (2)
- (i) जिसकी उपमा न हो (ii) ईश्वर में विश्वास रखने वाला
- (झ) सार्वनामिक विशेषण की परिभाषा उदाहरण के साथ लिखिए। (2)
- (ञ) निर्देशानुसार क्रियाओं का काल परिवर्तन करके लिखिए। (2)
- (i) तुम क्या पढ़ रहे हो? (भूतकाल)
- (ii) विमल गीत गा रहा था। (भविष्यत काल)
- (ट) दो-दो पर्यायवाची शब्द लिखें। (2)
- (i) अंधकार (ii) असुर
- (ठ) निम्नलिखित शब्दों में से सदैव बहुवचन के शब्द छाँटिए – (1)
- (i) पंखे (ii) दर्शन (iii) दया (iv) आँसू
- (ड) वचन लिखिए। (1)
- (i) कविगण (ii) काँटे

खण्ड – 'ख'

प्रश्न 3. पठित पद्यांश को ध्यानपूर्वक पढ़कर प्रश्नों के उत्तर लिखिए – (1×4=4)

नीड़ न दो, चाहे टहनी का
आश्रय छिन्न – भिन्न कर डालो,
लेकिन पंख दिए हैं तो
आकुल उड़ान में विधन न डालो।

- (i) उपरोक्त पंक्तियाँ किस पाठ से ली गई हैं?
(क) वह चिड़िया जो (ख) हम पंछी उन्मुक्त गगन के
(ग) चाँद (घ) शाम, एक किसान
- (ii) 'नीड़' का अर्थ है –
(क) नीर (ख) निर्मल (ग) घोंसला (घ) निर्माण
- (iii) पक्षी मनुष्य से क्या प्रार्थना कर रहे हैं—
(क) नीड़ न नष्ट करने की (ख) उड़ान में बाधा नहीं डालने की
(ग) टहनी काट देने की (घ) कोई नहीं
- (iv) पंख में लगा बिन्दु चिह्न (—) का नाम है –
(क) अनुस्वार (ख) अनुनासिक (ग) नुक्ता (घ) कोई नहीं

प्रश्न 4. पठित गद्यांश को ध्यानपूर्वक पढ़कर प्रश्नों के उत्तर छाँटिए –

(1X4=4)

विजय बाबू एक समाचार पत्र पढ़ रहे थे। उसी तरह उसे लिए हुए दरवाजे पर आकर मुरलीवाले से बोले –
“क्यों भाई, किस तरह देते हो मुरली?”

(i) यह गद्यांश किस पाठ का है –

(क) हिमालय की बेटियाँ (ख) मिठाईवाला (ग) खिलौनेवाला (घ) मुरलीवाला

(ii) गद्यांश के लेखक हैं –

(क) प्रेमचंद (ख) भगवती प्रसाद वाजपेयी (ग) जैनंद्र कुमार (घ) नागार्जुन

(iii) विजयबाबू क्या पढ़ रहे थे?

(क) किताब (ख) समाचार-पत्र (ग) पत्र (घ) कविता

(iv) विजयबाबू दरवाजे पर क्यों आए?

(क) मुरली खरीदने (ख) समाचार सुनाने (ग) बात-चीत करने (घ) मुरलीवाले को ना कहने

प्रश्न 5. निम्नलिखित अति लघुउत्तरीय प्रश्नों के उत्तर लिखिए –

(1X5=5)

- (क) मुरलीवाले की एक मुरली की कीमत क्या थी?
- (ख) मैदानी भागों में नदियाँ कैसे दिखाई देती हैं?
- (ग) यासुकी-चान का अपना कोई पेड़ क्यों नहीं था?
- (घ) 'शाम एक किसान' कविता के कवि का नाम लिखिए।
- (ङ) 'अपूर्व अनुभव' पाठ साहित्य की कौन-सी विधा है?

प्रश्न 6. लघुउत्तरीय प्रश्नों के उत्तर लिखिए –

(2X4=8)

- (क) मिठाईवाले में वे कौन-से गुण थे, जिनकी वजह से बच्चे तो बच्चे, बड़े भी उसकी ओर खिंचे चले आते थे?
- (ख) यासुकी चान को अपने पेड़ पर चढ़ाने के लिए तोतो-चान ने अथक प्रयास क्यों किया?
- (ग) 'शाम एक किसान' कविता में पहाड़ और नदी को किसके समान चित्रित किया गया है?
- (घ) काका कालेलकर ने नदियों को लोकमाता की संज्ञा क्यों दी है?

प्रश्न 7. निम्नलिखित दीर्घ उत्तरीय प्रश्नों के उत्तर विस्तार से लिखिए –

(3X2=6)

- (क) पाठ के आधार पर बताइए कि कब सूरज का ताप यासुकी-चान और तोतो-चान पर पड़ रहा था और कब बादल का एक टुकड़ा उन्हें छाया देकर कड़कती धूप से बचाने लगा था?
- (ख) 'हिमालय की बेटियाँ' पाठ में कालिदास की किस रचना का उल्लेख किया गया है? इस पाठ में नदियों के संरक्षण की प्रेरणा दी गई है। आप नदियों को प्रदूषित होने से बचाने के लिए क्या-क्या कर सकते हैं? लिखिए। (दो प्रयास)

प्रश्न 8. बाल महाभारत आधारित प्रश्न (किन्हीं पाँच प्रश्नों के उत्तर लिखिए) –

(2X5=10)

- (क) द्रोण द्रुपद से क्यों नाराज़ थे?
- (ख) भीम ने क्या कहकर कर्ण का उपहास किया?
- (ग) देवव्रत के शिक्षक कौन थे? देवव्रत की माता का नाम लिखिए।
- (घ) धृतराष्ट्र और पांडु की माताओं का क्या नाम था?
- (ङ) विदुर ने द्यूतक्रीड़ा के परिणाम को बताते हुए धृतराष्ट्र से क्या कहा?
- (च) द्रोण परशुराम के पास क्यों गए थे?
- (छ) अर्जुन की प्रशंसा सुनकर दुर्योधन क्यों कुढ़ रहा था?

प्रश्न 9. किसी एक विषय पर अनुच्छेद लिखें –

(5)

- (क) श्रम का महत्त्व
रूपरेखा – भूमिका, लाभ, उपहंसहार
- (ख) 15 अगस्त
भूमिका, महत्त्व, निष्कर्ष
- (ग) वनों का महत्त्व
रूपरेखा – मानव से संबंध, लाभ, निष्कर्ष

प्रश्न 10. शुल्क माफी हेतु प्राचार्य को पत्र लिखिए।

(5)

या

नगर– निगम के स्वास्थ्य अधिकारी को क्षेत्र की सफाई के लिए पत्र लिखिए।

प्रश्न 11. निम्नलिखित चित्र को देखकर उसका वर्णन अपने शब्दों में कीजिए।

(3)





DELHI PUBLIC SCHOOL

SAIL TOWNSHIP, RANCHI

HALF YEARLY EXAMINATION (2024-25)

Class - VII
Time - 90 Minutes

Subject - Japanese
Maximum Marks - 40

1. Write the following Katakana words in English.

[4]

- 1) ニューヨーク
- 2) ネパール
- 3) フランス
- 4) イギリス
- 5) インド
- 6) ブラジル
- 7) ドイツ
- 8) アメリカ

2. Make a sentence with the following words in Japanese (Hiragana).

[3]

- 1) ここ
- 2) そこ
- 3) おおい
- 4) ひろい
- 5) おおきい
- 6) しゅと

3. Complete the following sentences in Japanese with appropriate verb forms from the given options.

[2]

- 1) おんがくを _____ います。
- 2) ごはんを _____ います。
- 3) ともだちと _____ います。
- 4) にほんごのべんきょうを _____ います。

| | | | |
|----|-----|------|-----|
| して | きいて | あそんで | たべて |
|----|-----|------|-----|

4. Change the following verbs to “～ています” form.

[5]

| | | |
|----|-------|--|
| 1 | かきます | |
| 2 | ねます | |
| 3 | あそびます | |
| 4 | のみます | |
| 6 | はこびます | |
| 7 | たべます | |
| 8 | みます | |
| 9 | します | |
| 10 | いきます | |

5. Read the following conversation and write the meaning in English.

[2]

せいと： せんせい。いまなんじですか？

せんせい： 8じだね。ありがとうございます。

せいと： あ、9じからテストだよ。

せんせい： がんばってください。

せいと： はい、がんばります。

6. Change the following i-adjectives in the form given.

[5]

- 1) いたい Plain-Present-Negative
- 2) ちいさい Plain-Past-Positive
- 3) くろい Plain-Past-Positive
- 4) わるい Polite-Present-Positive
- 5) すずしい Polite-Past-Positive

7. Rearrange the given jumbled words and make meaningful sentences.

[5]

- 1) きょう／が／でした／がっこう／は／やすみ／。
- 2) クリケット／します／を／いっしょに／で／みんな／。
- 3) に／いえ／いきます／しんせき／かぞく／の／で／。
- 4) か／します／を／なに／は／やすみのひ／？
- 5) あした／おきます／は／に／ろくじ／。

8. Choose and write the correct form of the “Verbs” from the [] in each.

[4]

- 1) のった [Plain or Polite] [Present/Future or Past] [Positive or Negative]
- 2) いきました [Plain or Polite] [Present/Future or Past] [Positive or Negative]
- 3) おきます [Plain or Polite] [Present/Future or Past] [Positive or Negative]
- 4) かえります [Plain or Polite] [Present/Future or Past] [Positive or Negative]
- 5) する [Plain or Polite] [Present/Future or Past] [Positive or Negative]
- 6) くる [Plain or Polite] [Present/Future or Past] [Positive or Negative]
- 7) よみました [Plain or Polite] [Present/Future or Past] [Positive or Negative]
- 8) ついた [Plain or Polite] [Present/Future or Past] [Positive or Negative]

9. Make a sentence with the following Katakana words in Japanese.

[3]

- 1) チョコレート
- 2) スマートフォン
- 3) キャラクター

10. Change the following sentences in「～たことがあります」form.

[3]

- 1) わたしはにほんのアニメをみました。
- 2) にほんのたべものをいっかい食べました。
- 3) ともだちはイギリスにいきました。
- 4) わたしはまんがをかきました。
- 5) にほんごのほんをよみました。
- 6) ぞうにのりました。

11. Match the sentences of A column with the appropriate option from B column.

[2]

| | A | B |
|---|-----------|--------------|
| 1 | わたしはふじさんに | あったことがあります。 |
| 2 | アミールカーンに | のったことがあります。 |
| 3 | しんかんせんに | したことがあります。 |
| 4 | クリケットを | のぼったことがあります。 |

12. Read the following conversation and answer the following question.

[2]

リンさん： ハワーマハル(Hawa Mahal) にいったことがありますか？

クマール： はい、にかいいったことがあります。

リンさん： どんなところですか？

クマール： すてきなところですよ。ジャイプールというまちにあります。インドでとてもゆうめいなばしょです。わたしは5がつにいったので、とてもあつかったです。

リンさん： そうなんですね。わたしは、またハワーマハルにいったことがあります。いちど行ってみたいです。

クマール： はい、ぜひいっしょにいきましょう。

リンさん： らいしゅうのかようびはどうですか？

クマール： かようびはハワーマハルはしまっていますから、ほかのひにしましょう。

1) リンさんはハワーマハルにいったことがありますか？

2) ハワーマハルはなんようびがおやすみですか？



DELHI PUBLIC SCHOOL

SAIL TOWNSHIP, RANCHI

HALF YEARLY EXAMINATION (2024-25)

Class - VII
Time - 90 Minutes

Subject - HPE
Maximum Marks- 25

General Instructions:-

1. This question paper consists of 25 objective questions.
 2. All questions are compulsory.
 3. All questions carrying one mark each ($1 \times 25 = 25$)
-

1. In which year Volleyball was invented?

- A. 2004
- B. 1912
- C. 1895
- D. 1951

2. Who invented Volleyball?

- A. Elijah
- B. Campwood
- C. William G. Morgan
- D. John A. Belstrad

3. What is the rank of India in Olympic 2024?

- A. 51
- B. 61
- C. 71
- D. 81

4. Which one of these player who specialize in defence in Volleyball

- A. Libero
- B. Freestyle
- C. Blocker
- D. Booster

5. How many sets are in a Volleyball Game at International Matches?

- A. 5
- B. 3
- C. 10
- D. 6

6. In which way do the teams rotate ?

- A. Colck wise
- B. Counter - clockwise
- C. They do not rotate
- D. Above all

7. Who won the most gold medals in the Paris Olympic 2024?
 - A. China
 - B. Japan
 - C. United State
 - D. Australia
8. What is the server zone in Volleyball ?
 - A. Middle back
 - B. Right Front
 - C. Right back
 - D. Center
9. How many substitution are allowed for each team in one set ?
 - A. 12
 - B. 6
 - C. 10
 - D. 5
10. Which City will host the Olympic 2028?
 - A. Paris
 - B. Rome
 - C. Geneva
 - D. Los Angeles
11. What is the length of a Volleyball court ?
 - A. 12mt
 - B. 18mt
 - C. 9mt
 - D. 10mt
12. What is the width of a Volleyball court ?
 - A. 6mt
 - B. 8mt
 - C. 9mt
 - D. 10mt
13. Weight of the Volleyball is
 - A. 250gm-260gm
 - B. 250gm-280gm
 - C. 260gm-280gm
 - D. 280gm-290gm
14. Where is the head quarter of International Olympic Committee ?
 - A. Italy
 - B. France
 - C. Belgium
 - D. Switzerland
15. What is the height of net from the ground for men's Volleyball court ?
 - A. 2.44mt
 - B. 2.24mt
 - C. 2.43mt
 - D. 2.45mt

16. What is the length of the antenna in Volleyball?
A. 1.50mt
B. 1.80mt
C. 1.85mt
D. 1.90mt
17. The player who is not allowed to smash is called as
A. Booster
B. Libero
C. Blocker
D. Smasher
18. Who was the player of tournament in T-20 world cup 2024?
A. Virat Kohli
B. Jasprit Bumrah
C. Rohit Sharma
D. Quenton De Kock
19. What the width of Volleyball net?
A. 1 m
B. 2 m
C. 3 m
D. 4 m
20. What is the length of attack line to end line in Volleyball?
A. 4 m
B. 5 m
C. 6 m
D. 7 m
21. Which country has won the "Bronze Medal" in Men's Hockey at Paris Olympics 2024?
A. India
B. Argentina
C. South Africa
D. Japan
22. Who was the champion of UEFA Euro Cup Football Tournament 2024
A. France
B. England
C. Spain
D. Netherland
23. How many medals have won by India at Paris Olympics 2024?
A. 5
B. 6
C. 7
D. 10

24. Five rings of the Olympic Flag represents
- A. The Five Continents
 - B. The Five Olympic Sports
 - C. The Five founding Countries
 - D. The Five Olympic Values of the Olympics Games
25. Who will host the FIFA World Cup in 2026.....
- A. China, Japan, South Korea
 - B. Russia,Belarus,Finland
 - C. U.S.,Canada, Mexico
 - D. U.A.E, Qatar, Saudi Arabia
-



DELHI PUBLIC SCHOOL

SAIL TOWNSHIP, RANCHI

HALF YEARLY EXAMINATION (2024-25)

Class - VII

Time - 90 Minutes

Subject - Sanskrit

Maximum Marks - 40

‘खण्ड क’

प्रश्न 1 अधोलिखितम् गद्यांशं पठित्वा निर्देशानुसारं प्रश्नानाम् उत्तराणि लिखत –

कस्मिंश्चित् कानने एकः विशालः वटपादपः आसीत् । तस्मिन् बहवः विहगाः प्रतिवसन्ति स्म । तान् विटपवासिनः खगान् ग्रहीतुं आगतं दुरात्मानं लुब्धकं चतुरः पक्षिनेता वायसः लघुपतनकः नाम दूराद् अपश्यत् सर्वान् खगान् तण्डुलभक्षणात् न्यवारयत् च । सः लुब्धकः वटतलं आगत्य जालं प्रसार्य तण्डुलान् प्रक्षिप्य नातिदूरं गत्वा निभृतः स्थितः ।

1 एकपदेन उत्तरत—

{1/2x2=1}

क. पक्षिनेता कः आसीत्?

ख. लुब्धकः कान् ग्रहीतुं आगतः?

2 एकवाक्येन उत्तरत—

{1x2=2}

क. वटपादपः कुत्र आसीत्?

ख. तस्मिन् के प्रतिवसन्ति स्म?

3 विकल्पेभ्यः उचितं उत्तरं चित्वा लिखत –

{1/2x4=2}

क. ‘आसीत्’ इति पदे कः लकारः अस्ति?

{अ} लट्

{ब} लृट्

{स} लङ्

{द} लोट्

ख. ‘विशालः वटपादपः’ अनयोः विशेषणपदं किम्?

{अ} वटपादपः

{ब} विशालः

{स} कानने

{द} वटः

ग. ‘वने’ इति पदस्य किं पर्यायपदं अत्र प्रयुक्तम्?

{अ} कानने

{ब} चतुरः

{स} खगान्

{द} वायसः

घ. ‘खगान्’ इति पदे का विभक्तिः प्रयुक्ता?

{अ} प्रथमा

{ब} द्वितीया

{स} तृतीया

{द} पंचमी

प्रश्न 2 अधोलिखितम् पद्यांशं पठित्वा निर्देशानुसारं प्रश्नानाम् उत्तराणि लिखत –

विद्या नाम नरस्य रूपमधिकं प्रच्छन्नगुप्तम् धनम्,
विद्या भोगकरी यशः सुखकरी विद्या गुरुणां गुरुः ।
विद्या बन्धुजनो विदेशगमने विद्या परादेवता,
विद्या राजसु पूज्यते न हि धनं विद्याविहीनः पशुः ॥

1 एकपदेन उत्तरत—

{1/2x2=1}

क. का परादेवता अस्ति?

ख. कः पशुः अस्ति?

2 एकवाक्येन उत्तरत—

{1x2=2}

क. का गुरुणां गुरुः?

ख. विद्या कुत्र पूज्यते?

3 विकल्पेभ्यः उचितं उत्तरं चित्वा लिखत —

{1/2x4=2}

क. 'नरस्य' इति पदे का विभक्तिः प्रयुक्ता?

{अ} तृतीया

{ब} पंचमी

{स} षष्ठी

{द} सप्तमी

ख. 'धनम्' इति पदस्य लिंगं किम्?

{अ} पुल्लिङ्गं

{ब} स्त्रीलिङ्गं

{स} नपुंसकलिङ्गं

{द} न कोऽपि

ग. 'विद्या राजसु पूज्यते' — इति वाक्ये क्रियापदं किम्?

{अ} राजसु

{ब} पूज्यते

{स} विद्या

{द} नाम

घ. 'विद्या परादेवता' अनयोः विशेषणपदं किम्?

{अ} परादेवता

{ब} विद्या

{स} धनं

{द} गुरुः

'खण्ड ख'

प्रश्न 3 संधिं / विच्छेदं कृत्वा लिखत —

{1/2x4=2}

क. परम + आनन्दः = ———

ख. ——— + ——— = रमेशः

ग. भानु + उदयः = ———

प्रश्न 4 अधोलिखितपदानां विभक्तिवचनं च लिखत —

{1/2x6=3}

| | <u>पदानि</u> | <u>विभक्तिः</u> | <u>वचनं</u> |
|----|--------------|-----------------|-------------|
| क. | नरकस्य | ———— | ———— |
| ख. | फलेषु | ———— | ———— |
| ग. | प्राप्तिः | ———— | ———— |

प्रश्न 5 रेखांकितपदानि आधृत्य प्रश्ननिर्माण कुरुत –

{1x3=3}

- क. विद्या विनयं ददाति ।
ख. विहगाः वटवटपे प्रतिवसन्ति स्म ।
ग. जातस्य हि ध्रुवो मृत्युः ।

प्रश्न 6 निम्नलिखितपदानां धातुं उपसर्गं च लिखत –

{1/2x6=3}

| पदानि | उपसर्गः | धातुः |
|-------------|---------|-------|
| क. अवगच्छति | ----- | ----- |
| ख. उपवसति | ----- | ----- |
| ग. आनयति | ----- | ----- |

प्रश्न 7 श्लोकांशान् योजयत –

{1/2x4=2}

| क. | ख. |
|--------------------------|-------------------------|
| अभ्यासेन तु कौन्तेय | मोक्षयिष्यामि मा शुचः । |
| जातस्य हि ध्रुवो मृत्युः | वैराग्येण च गृह्यते । |
| स्वधर्मे निधनं श्रेयः | ध्रुवं जन्म मृतस्य च । |
| अहं त्वां सर्वपापेभ्यः | परधर्मो भयावहः । |

प्रश्न 8 उपयुक्त कथनानां समक्षम् ‘आम्’ अनुपयुक्तकथनानां समक्षं ‘न’ लिखत –

{1/2x4=2}

| | |
|--------------------------------|-------|
| क. मनः दुर्निग्रहम् अस्ति । | ----- |
| ख. लोभः नरकस्य द्वारं नास्ति । | ----- |
| ग. मृतस्य जन्म ध्रुवं नास्ति । | ----- |
| घ. स्वधर्मे निधनं श्रेयः । | ----- |

प्रश्न 9 मंजूषातः उचितं पदं चित्वा रिक्तस्थानानि पूरयत –

{1/2x6=3}

(प्रहरति, निर्गच्छन्ति, वितरति, प्रणमन्ति, विहसतः, उपविशाम)

- क. प्रधानाचार्या छात्रासु मिष्टान्नं ----- ।
ख. शिशू मातरं दृष्ट्वा ----- ।
ग. रजकः गर्दभं लगुडेन ----- ।
घ. शिष्याः गुरुं ----- ।
ङ पिपीलिकाः बिलात् ----- ।
च. वयं आसने ----- ।

प्रश्न 10 मंजूषातः समानार्थकपदानि चित्वा लिखत –

{1/2x4=2}

(लुब्धकः, सत्वरं, काकः, बिलात)

क. वायसः – -----

ख. विवरात् – -----

ग. आखेटकः – -----

घ. शीघ्रम् – -----

प्रश्न 11 अधोलिखितपदानां विलोमपदानि लिखत –

{1/2x4=2}

क. मृतः – -----

ख. पुण्यम् – -----

ग. अधिकारः – -----

घ. अस्ति – -----

प्रश्न 12 उचितैः शब्दरूपैः रिक्तस्थानानि पूरयत –

{1/2x8=4}

क. लतायाम्, -----, -----

ख. -----, -----, नदीभिः

ग. अहम्, -----, -----

घ. -----, -----, यूयम्

प्रश्न 13 उचितैः धातुरूपैः रिक्तस्थानानि पूरयत –

{1/2x8=4}

क. गमिष्यसि, -----, -----

ख. -----, -----, अपश्यन्

ग. अस्ति, -----, -----

घ. -----, -----, पिबेयुः



DELHI PUBLIC SCHOOL

SAIL TOWNSHIP, RANCHI

HALF YEARLY EXAMINATION (2024-25)

Class - VII

Time - 3 Hours

Subject - Science

Maximum Marks - 80

General Instruction:-

All questions are compulsory.

Marks are indicated against each question

PHYSICS

I. Multiple choice questions:

[1x6]

1. The mode of transfer of heat which do not require a medium
 - A. Conduction
 - B. Convection
 - C. Radiation
 - D. Both A and B
2. The range of laboratory thermometer is from
 - A. -10°C to 110°C
 - B. 35°C to 42°C
 - C. 32°C to 45°C
 - D. 10°C to 110°C
3. Land breeze and sea breeze occurs due to
 - A. Conduction
 - B. Convection
 - C. Radiation
 - D. None of these
4. A virtual image larger than the object can be produced by a
 - A. Concave lens
 - B. Concave mirror
 - C. Convex mirror
 - D. Plane mirror
5. The mirror used as side view mirror in vehicles is
 - A. Concave mirror
 - B. Convex lens
 - C. Concave lens
 - D. Convex mirror
6. Assertion and reason type question

Assertion (A): A concave mirror is used by dentists to see the teeth

Reason (R): A concave mirror can give a virtual, erect and enlarged image of an object

 - A. Both Assertion and Reason are true and Reason is the correct explanation of the Assertion
 - B. Both Assertion and Reason are true and Reason is not the correct explanation of the Assertion
 - C. Assertion is true but Reason is false
 - D. Assertion is false but Reason is true

II. Very short answer type question:

[2x2]

7. Why do we wear woolen clothes in winter?
8. Write two uses of concave mirror.

III. Short answer type question:

[3x2]

9. Write three characteristics of image formed by a plane mirror.
10. Which type of thermometer has a kink? What is the use of a kink?

IV. Case based question

11. Rahul studied about good conductors and bad conductors of heat in the school. After coming home, he tried to find things in which they are used.
- A. Write down two household items each for good and bad conductors, which Rahul would have discovered. [2]
 - B. What is the mode of transfer of heat in a solar cooker? [1]
 - C. Which thermometer should be used to measure the temperature of boiling water in the kitchen? [1]

V. Long answer type question:

12. (A) Describe an experiment to show that white light is made up of seven colours. Also draw the necessary diagram. [3]
(B) Name the natural phenomenon caused by dispersion of sunlight. [1]
(C) What is Newton's disc? [1]
- OR**
- (A) Describe an activity to show that light travels along a straight path [3]
(B) Write two properties of light [2]

CHEMISTRY

SECTION A

1. Select the correct answer

Assertion: Forest 'A' has less number of trees so more raindrops can hit the ground directly

Reason: As Forest 'A' has less number of trees more rainwater will seep directly into the ground.

- A. Both assertion and reason are correct and reason is the correct explanation of assertion.
 - B. Both assertion and reason are correct but reason is not the correct explanation of assertion.
 - C. Assertion is true but reason is false.
 - D. Assertion is false but reason is true. [1]
2. Even after heavy rains forest are not flooded because
- A. Forest act as Natural absorbers of rainwater
 - B. Raindrops do not hit the forest floor directly
 - C. Trees carry out the process of photosynthesis
 - D. Both (A) and (B) [1]
3. Galvanization is the process of
- A. Applying a layer of iron on zinc
 - B. Coating iron with paint
 - C. Applying a layer of Zinc on iron
 - D. Greasing the surface of iron [1]
4. The chemical name of baking soda is
- A. Sodium Hydroxide
 - B. Sodium Chloride
 - C. Sodium bicarbonate
 - D. Calcium Carbonate [1]
5. Name the two main processes which help to balance the amount of carbon dioxide and oxygen in air. [1]

6. Give an example of each of the following

- A. Physical reversible change
- B. Physical Irreversible change

[1]

SECTION B

7. A. When iron nail is dipped in copper sulphate solution then after sometime the colour of the solution changes to green.

- i. Name the new green compound which is formed.
- ii. Which metal is deposited at the end of this reaction?

B. Define alloy.

[1+1]

8. When vinegar and baking soda react together gas A is evolved. This gas is passed through lime water which turns milky due to formation of a compound B.

- i. Write the name of gas A .
- ii. Write the name of compound B.
- iii. Which acid is present in vinegar?
- iv. Write the chemical formula of lime water.

[1/2 +1/2+ 1/2+1/2]


SECTION C

9. With the help of an activity prove that both water and oxygen are required for rusting .A well labelled diagram should be drawn along with the explanation.

[3]

10. A. Recycling of nutrients is one of the major role of forest. Explain

B. The image shows different horizontal layers of a forest.



Name the layer A and layer B and name the layer which makes a forest so dense that no land can be seen in an aerial view.

[1.5 +1.5]

SECTION D

11. Forest can be defined as an area having many trees, shrubs, herbs ,grasses, creepers and climbers .Due to the presence of vegetation of different heights ,several horizontal layers are created in a forest. A Nation wide celebration of an annual tree planting is done every year between 1st July to 7 July to make people aware of the importance of planting. It is called Vanmahotsava. It is very important to make people aware about the importance of afforestation and the ill effects of deforestation.

- A. State two environmental importance of forest.
- B. Mention two disadvantages of deforestation.
- C. Define food chain
- D. Why sun is called the ultimate source of energy in a food chain?

[1+1+1+1]

SECTION E

12. A. State two differences between physical change and chemical change.
B. When a candle burns, both physical and chemical changes take place. Explain
C. Mention two advantages of galvanization. [2+2+1]

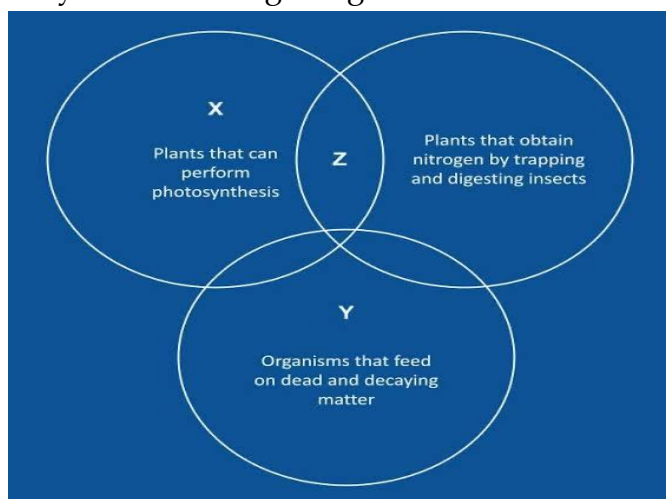
OR

12. When magnesium burns in air 'A' is produced which is dissolved in water to form a solution 'B'.
A. What is the chemical name of 'A'?
B. Write the chemical formula of the solution B.
C. What is the nature of solution B?
D. Write the word equations for the formation of both 'A' and 'B'. [1+1+1+2]

BIOLOGY

SECTION A

1. Choose the correct set of statements about nutrition in plants- [1]
i. Green plants can convert organic matter into inorganic compounds by photosynthesis.
ii. Plants store food as starch.
iii. Some plants show heterotrophic mode of nutrition.
iv. Green algae and fungi are parasitic.
A. i,iii,iv B. ii,iii,iv
C. ii,iii D. i,iv
2. The part of alimentary canal where cellulose is digested in horses is- [1]
A. caecum B. rumen
C. large intestine D. duodenum
3. Which part of the human respiratory system is supported by cartilage - [1]
A. lungs B. trachea
C. alveoli D. bronchioles
4. Study the Venn diagram given below and choose the option which describes X,Y and Z- [1]



- A. X-tomato, Y-fungi, Z- pitcher plant
B. X-tomato, Y- lichen, Z-mushroom
C. X- lichen, Y- fungi, Z- yeast
D. X- pitcher plant, Y- tomato, Z- mushroom

5. Choose the option with the correctly matched pairs from the given column-

[1]

| Column I | Column II |
|---|----------------------|
| A. Starch is converted into sugar | i. Buccal cavity |
| B. Absorption of excess water occurs here | ii. Stomach |
| C. Fat molecules are digested here | iii. Large intestine |
| D. Broadest part of the alimentary canal | iv. Small intestine |

- A. A-iii, B-iv, C-ii, D- i
B. A- i, B-iii, C-iv, D- ii
C. A-i, B-ii, C-iv, D- iii
D. A-i, B- iv, C- ii , D- iii

6. The respiratory system of insects comprises of -

[1]

- A. spiracles and lungs
B. tracheae and lenticels
C. spiracles and tracheae
D. spiracles and lenticels

7. Which of the following activities does not occur during inhalation in humans -

[1]

- A. The ribs move outwards and upwards.
B. Blood absorbs CO₂ from inhaled air.
C. The alveoli fill up with air and lungs expand.
D. The diaphragm contracts and moves down.

Question number 8 and 9 consist of an Assertion (A) and a Reason (R). Select the correct answer to these questions from the given codes.

- A. Both, Assertion and Reason are correct and R is the correct explanation for A.
B. Both, Assertion and Reason are correct but R is not the correct option for A.
C. Assertion is correct but Reason is incorrect.
D. Assertion wrong but Reason is true.

8. **Assertion (A)**- Photosynthesis can occur in all the green parts of a plant.

Reason (R)- All green parts of a plant have chlorophyll.

[1]

9. **Assertion (A)**- Fishes cannot survive outside water for a long time.

[1]

Reason (R) - All aquatic animals breathe through gills.

SECTION B

10. Farmers grow leguminous plants in their field to make the soil rich in nutrients. Give an example of how leguminous plants help to make the soil fertile.

[2]

OR

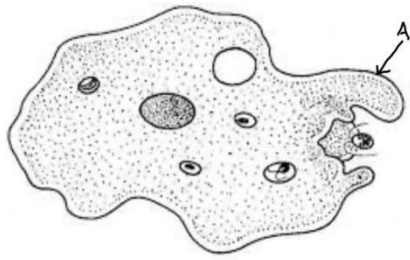
Saprotrophs grow on organic matter. Mention one way in which this is helpful and one way in which this is harmful for us.

11. A. How does bile juice help to digest fats?

[2]

B. What is the role of villi in the small intestine?

12. A. Identify the given diagram and label the part marked A. [2]
B. What is the function of the part marked as A?



SECTION C

13. A. What is the function of guard cells of stomata? [3]
B. Why is cuscuta a parasite but green algae an autotroph?
C. How do plants with colourful leaves perform photosynthesis?
14. Write 3 points of difference between aerobic and anaerobic respiration. [3]

SECTION D

Answer any one -

[2+2+1=5]

15. A. Draw a diagram of the human respiratory system and label the following parts:-
(i) Where the inhaled air is filtered.
(ii) Where exchange of O_2 and CO_2 occurs.
B. Write the equation for aerobic respiration.
C. What is artificial respiration?

OR

- A. Draw a labeled diagram to show how roots of plants absorb oxygen from soil.
B. Why is smoking cigarette dangerous for health?
C. Why are yeast used to make wine and beer?

SECTION E

The following question is a source based/case based question. Read the case carefully and answer the questions that follow.

16. Rohan was eating his breakfast in a hurry when suddenly he started coughing and had a choking sensation. His mother immediately started patting his back in the upward direction and asked him to hold his breath. After a few minutes Rohan felt a little comfortable.

- A. Why did Rohan get coughs and choking sensation? [1]
B. What precaution should be taken while eating and swallowing food? [1]
C. How is food prevented from going into the windpipe in our body? [2]

OR

- C. Why did Rohan's mother pat his back in the upward direction?



DELHI PUBLIC SCHOOL

SAIL TOWNSHIP, RANCHI

HALF YEARLY EXAMINATION (2024-25)

Class - VII
Time - 3 Hours

Subject - Social Science
Maximum Marks - 80

General Instructions:

All questions are compulsory.

Marks are indicated against each question

HISTORY

I. Choose the correct option:

(1x7=7)

1. In the medieval period, a foreigner was
 - a) an American
 - b) a European
 - c) a Japanese
 - d) any stranger who appeared in a given village.
2. Archive is
 - a) a place where documents and manuscripts are stored.
 - b) a place where ornaments are stored.
 - c) a museum.
 - d) a police station.
3. Nagaram means
 - a) a city
 - b) a palace
 - c) an association of traders
 - d) an association of farmers
4. Who built the town of Thanjavur?
 - a) Rajaraja I
 - b) Vijayalaya
 - c) Rajendra I
 - d) Muttariyars
5. Samanta was
 - a) a subordinate of the king
 - b) a neighbour
 - c) a king
 - d) a farmer

6. Primogeniture means

- a) division of inheritance amongst all the sons
- b) eldest son inherits his father's estate
- c) youngest son inherits his father's estate
- d) younger brother of the ruler inherits the throne

7. Sawar denoted

- a) salary of the mansabdar.
- b) mansabdar 's military responsibilities of keeping cavalrymen
- c) mansabdar's rank
- d) zat

II. Answer in a very short way:

(2X3=6)

1. What do you mean by the term bhakti ?

2. What was iqta?

3. Write any two reasons why the Delhi Sultans were interested in cutting down forests?

III. Answer in short:

1. How were the affairs of jatis regulated ?

(3)

2. According to the 'circle of justice', why was it important for the military commanders to keep the interests of the peasantry in mind?

(3)

IV. Read the following passage carefully:

In Akbar's reign, these jagirs were carefully assessed so that their revenues were roughly equal to the salary of the mansabdar. By Aurangzeb's reign, this was no longer the case and the actual revenue collected was often less than the granted sum. There was also a huge increase in the number of mansabdars, which meant a long wait before they received a jagir. These and other factors created a shortage in the number of jagirs. As a result, many jagirdars tried to extract as much revenue as possible while they had a jagir. Aurangzeb was unable to control these developments in the last years of his reign and the peasantry therefore suffered tremendously.

Answer the following:

1. What was Zat?

(1)

2. Why did the peasantry suffer in the last year of Aurangzeb's reign?

(2)

3. What was the system of zabt?

(1)

V. Write the following answer in detail:

What was Sabha? Mention any four qualifications necessary to become a member of a committee of the sabha in the Chola empire?

(1+4=5)

OR

What were the activities associated with the Chola temples? Mention any two reasons why the kings used to build temples.

(3+2=5)

CIVICS

I. Choose the correct option:

(1×5=5)

1. Civil Rights movement
 - a) demanded equal rights and an end to racial discrimination
 - b) took place in USA
 - c) began in 1950s
 - d) All the above are correct.
2. Which one is not true about the Indian Constitution ?
 - a) It is a document laying down the basic rules and regulations.
 - b) It recognises every person as equal.
 - c) It does not mention anything about equality.
 - d) It mentions Right to equality in Article 15 .
3. Who is the Chief Minister of Jharkhand?
 - a) Champai Soren
 - b) Hemant Soren
 - c) Sibu Soren
 - d) Arjun Munda
4. An anganbadi is
 - a) a child - care centre set up by the government
 - b) a home of a foreigner set up by the NRIs
 - c) an exam centre
 - d) an orphanage set up by NGOs
5. Double – burden means
 - a) Work of a Prime Minister who works for home affairs and foreign affairs both .
 - b) Women's work situation when they work both outside and inside their homes.
 - c) Work of a councillor.
 - d) Work of a grandmother who looks after her children and her grand children both.

II. Write the following answers in a very short way:

1. Write any two differences between the private and the public hospitals. (2)
2. What is a press conference? Mention any one purpose of a press conference . (1+1=2)

III. Answer in short

1. What is the midday meal programme? List any two benefits of the programme. (1+2=3)
2. How do some MLAs become Minister ? Explain. (3)

IV. Read the following passage carefully:

Harmeet's family did not think that the work Jaspreet did within the house was real work. This feeling is not unique to their families. Across the world, the main responsibility for housework and care-giving tasks, like looking after the family, especially children, the elderly and sick members, lies with women. Yet, as we have seen, the work that women do within the home is not recognised as work. It is also assumed that this is something that comes naturally to women. It, therefore, does not have to be paid for. And society devalues this work.

Answer the following

1. Why is the house work called 'invisible' ? (1)
2. Why does the society devalue the work of women? (2)
3. Why are the girls and the boys given different kinds of toys to play? (1)

V. Answer in detail:

What do you mean by the term 'health'? List any three steps that the government can take to provide health care for all. (1+2+2=5)

OR

Explain the terms 'living standard' and 'public health'. What steps does the government take to provide health care for all? (2+3=5)

GEOGRAPHY

I. Choose the correct option:

(1×5=5)

1. Which is not a component of the human environment?
 - a) Land
 - b) Religion
 - c) Community
 - d) Society
2. Match the column I with column II and choose the correct option

| Column I | Column II |
|-----------------------|---|
| a) Biotic | i) The world of non-living elements |
| b) Abiotic organisms. | ii) People , things & nature that surround any living organisms |
| c) Environment | iii) The world of living organisms |
| d) Ecosystem | iv) The relationship between the organisms & their surroundings |

Options:

- a) a-i,b- ii, c- iii , d-iv
 - b) a-iii,b-i, c-ii , d- iv
 - c) a-iv, b- iii, c- i , d- ii
 - d) a-ii ,b-iv, c- i, d-iii
3. What is the correct percentage of the volume of the Earth?
 - a) Crust- 1%, Mantle - 84%, Core - 15%
 - b) Crust - 15%, Mantle - 1%, Core -84%
 - c) Crust - 84% , Mantle - 15%, Core - 1%
 - d) Crust - 2% , Mantle - 83%, Core - 15%
 4. Which is the highest water fall in the world?
 - a) Niagara falls
 - b) Angel Falls
 - c) Jog Falls
 - d) Victoria Falls

5. Hemis in the Ladakh is a famous -

- a) Temple
- b) Church
- c) Monastery
- d) None of the above

II. Answer the following question in very short: (2x1=2)

Differentiate between "Sial and Sima ".Write two points of each.

OR

How are metamorphic rocks formed? Give an example. (1+1=2)

III. Answer the following questions in short: (3x2=6)

- a) Explain the process of the Rock Cycle.
- b) "The cultural landscape of the Sahara is undergoing change". Justify the statement.
[Any 3 points].

IV. Answer the following question in detail: (5x1=5)

What are the two types of movements produced by the Endogenic forces? Which movement causes mass destruction over the surface of the Earth? How can the impact of an Earthquake be minimised if we are prepared before - hand.

(1+1+3=5)

OR

Explain any five features made by a river.

V. Draw, label and colour the diagram of the "Feature made by Sea waves". (3)

VI. Read the given passage and answer the following questions: (4)

The domain of water is referred to as hydrosphere. It comprises various sources of water and different types of water bodies like rivers, lakes, seas, oceans, etc. It is essential for all living organisms. The atmosphere is the thin layer of air that surrounds the earth. The gravitational force of the earth holds the atmosphere around it. It protect us from the harmful rays and scorching heat of the sun. It consists of a number of gases, dust and water vapour. The changes in the atmosphere produce changes in the weather and climate. Plant and animal kingdoms together make the biosphere or the living world. It is a narrow zone of the earth where land, water and air interact with each other to support life.

- 1. What does the hydrosphere comprise of? (1)
- 2. Where does the biosphere exist? (1)
- 3. Name 3 elements that the atmosphere consists of. What brings a change in the atmosphere? (1+1=2)

VII. Locate and label the following on the given political map of Africa (1x3=3)

- a) Mediterranean Sea
- b) Libya
- c) Western Sahara





DELHI PUBLIC SCHOOL

SAIL TOWNSHIP, RANCHI

HALF YEARLY EXAMINATION (2024-25)

Class - VII
Time - 90 Minutes

Subject - Spanish
Maximum Marks- 40

-
1. **Contesta a las preguntas siguientes:** [5]
 - a. ¿Qué quiere ser César?
 - b. ¿Ha viajado Sol alguna vez?
 - c. ¿Dónde está hecha la foto?
 - d. ¿Qué ropa va a llevar Sol en la maleta?
 - e. ¿Qué te duele? (head)
 2. **Escribe ocho partes del cuerpo humano** [4]
 3. **Escribe las relaciones en tu familia:** [3]
 - a. El padre de tu padre es tu
 - b. La madre de tu padre es tu
 - c. Los hermanos de tu padre son tus
 - d. La hermana de tu madre es tu
 - e. La hija de tus tíos es tu
 - f. Las hijas de tus padres son tus
 4. **Corrige las frases y escribe correctamente:** [3]
 - a. Miguel tiene que vacunarse.
 - b. Sol está nervioso.
 - c. A Miguel le duele la cabeza.
 - d. El médico tiene miedo a las vacunas.
 - e. Ana tiene que abrir la boca.
 - f. Daniel vacuna a Ana.
 5. **Usa "por qué" y "porque" en la forma correcta:** [2]
 - a. ¿..... estás cansado? trabajo mucho.
 - b. ¿..... vas al colegio? estudio.
 - c. ¿Qué pasa aquí? ¿..... hablas mucho?
 - d. Ana está llorando tiene miedo a las vacunas.
 6. **Usa el imperativo (command) en la forma de usted.** [2]
 - a. A una persona desconocida, que tiene que hablar con el profesor.
 - b. A un enfermo que tiene que beber mucha agua.
 - c. A un abuelo que tiene que cuidar su salud.
 - d. A unos señores mayores, que no tienen que comer demasiados dulces.

7. **Elige mucho o poco :** [2]
- a. Las vacas dan leche.
 - b. Los árboles de la granja tienen manzanas.
 - c. Él está enfermo porque tiene fiebre.
 - d. Es muy aburrida y tiene amigas.
8. **Completa con dentro, debajo, encima y fuera:** [2]
- a. Las toallas están del armario.
 - b. El gato está durmiendo de la mesa.
 - c. Tu libro está de la mesa.
 - d. Mi hermano juega de la casa.
9. **Completa las frases con más...que, menos...que, tan...como** [2]
- a. El elefante es (big) que ratón.
 - b. Julia es (inteligente) como sol.
 - c. La gallina es (Strong) que águila.
 - d. Julia es (alto) como Patricia.
10. **Completa las frases con el más, la más :** [2]
- a. Ana es (Smallest) de la casa.
 - b. Nuestro colegio es (biggest) de la ciudad.
 - c. Sol es (intelligent) de la clase.
 - d. Paloma es (strongest) de las chicas.
11. **Escribe diez frases para presentarte** [5]
12. **Completa las frases con el verbo en pretérito perfecto:** [5]
- a. ¿Qué (leer,tú) hoy?
 - b. Hoy (comer, nosotros) muchas frutas.
 - c. Susana y tú(escribir) mucho en cuaderno de ingles.
 - d. Ellos (repasar) las preguntas de geografía.
 - e. El médico (decir) a mi padre que no coma dulces.
13. **Conjuga los verbos en pretérito perfecto** [3]
(conjugate the verbs in present perfect tense)
Hablar, escribir, decir
-