



DELHI PUBLIC SCHOOL

SAIL Township, Ranchi

SECOND SEMESTER (SESSION-2017-18)

SUBJECT: ENGLISH

DATE :- 07.03.2018

CLASS: – PREP **Sec:-** _____

M.O. :- _____

Roll no.:- _____


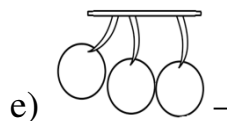


F. M. :- 40

NAME:- _____

I. Write two words each for the given sounds: [0.5 x 10 = 5]

- a) sh – _____
- b) ch – _____
- c) ng – _____
- d) ut – _____
- e) et – _____

II. Name them: [1 x 5 = 5]



III. Choose and write: [1 x 5 = 5]

- a) Cars are means of _____ transport. (land / water)
- b) Lion is a _____ animal. (wild / pet)
- c) _____ is a water sport. (swimming / dancing)
- d) Whale is a _____ animal. (land / water)
- e) Aeroplanes are means of _____ transport. (water / air)

IV. Fill in the missing letters: [0.5 x 14 = 7]

- a) W H _____ L E
- b) D _____ L P H I _____
- c) R O _____ I N _____
- d) S _____ R F _____ N G
- e) S _____ I M M I _____ G
- f) F I _____ H I N _____
- g) O C _____ O P U _____
- h) S T A _____ F I S H

P.T.O.

V. Write two means of :

[1 x 4 = 4]

- a) Water transport – _____
- b) Land transport – _____

VI. Riddle time:

[1 x 2 = 2]

- a) You need me when you write something wrong. Tell me who am I? - _____
- b) The word that you must say when someone gives you something. - _____

VII. Name them:

[0.5 x 4 = 2]

- a) Two pet animals – _____
- b) Two wild animals – _____


VIII. Write five lines about 'My School'.

[1 x 5 = 5]

- 1. _____
- 2. _____
- 3. _____
- 4. _____
- 5. _____

IX. Picture Composition:

[1 x 5 = 5]



- a) This is a picture of a _____.
- b) The _____ is shining brightly.
- c) _____ are flying in the sky.
- d) There are many _____ trees in the park.
- e) A boy is playing with a _____.



DELHI PUBLIC SCHOOL

SAIL Township, Ranchi

SECOND SEMESTER (SESSION-2017-18)

SUBJECT: Hindi

CLASS: – PREP

Sec:- _____

DATE :- 05.03.2018

M.O. :- _____

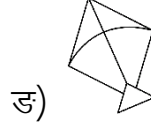
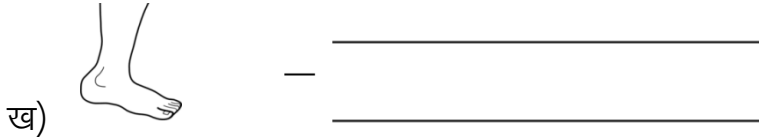

Roll no.:- _____

F. M. :- 40

NAME:- _____

1. चित्र देखकर नाम लिखें –

[1 x 6 = 6]



2. समूह से अलग शब्द पर गोला लगाएँ –

[0.5 x 8 = 4]

- | | | | |
|-----------|-------|--------|--------|
| क) मेवा, | रेखा, | कठोर, | सेना |
| ख) बैर, | लौट, | थैला, | मैदा |
| ग) ओर, | रोक, | मंगल, | मोर |
| घ) चौड़ा, | सौदा, | मौका, | गाँव |
| ड) नमः, | छाँव, | कहाँ, | आँगन |
| च) पंख, | खेल, | चंदन, | अंदर |
| छ) रौनक, | फौज, | मैदान, | चौक |
| ज) चंपक, | कंगन, | टाँग | सुंदर, |

3. एक जैसे शब्द लिखें –

[1 x 6 = 6]

- क) पैसा – _____

- ख) वहाँ – _____

- ग) अंग – _____

4. सही मात्रा चुनकर शब्द पूरा करें –

[0.5 x 8 = 4]

क) न.....कर (ौ / े)

ड) स...त रा

(े / े)

ख) दा त (ो / उ)

च) ट..... क री (उ / ो)

ग) ता र (ँ / ऌ)

छ) ब द र (ऌ / ँ)

घ) प्रात..... (: / ं)

ज) सा प (उ / ँ)

P.T.O.

5. दी गई मात्राओं से दो-दो शब्द बनाएँ –

[1 x 6 = 6]

क) ऌ

ख) उ

ग) ो

6. अं (ं) की मात्रा से दो फलों के नाम लिखें –

[1 x 2 = 2]

क)

ख)

7. खाली स्थानों में सही शब्द चुनकर भरें –

[1 x 5 = 5]

क) पेड़ पर _____ रहती है।

(मैन, मैना, मेना)

ख) मोर को मत _____।

(पकड़ो, पकड़ा, पकोड़ा)

ग) _____ में एक तोता है।

(पिंजरे, पंजरे, पिंजर)

घ) नौकर _____ पर बैठा है।

(चौके, चौका, चौकी)

ङ) चंचल अपने _____ गया।

(गाँव, गँव, गाँवा)

8. ओ (ो) की मात्रा से दो पक्षियों के नाम लिखें –

[1 x 2 = 2]

क)

ख)

9. मेल करें –

[0.5 x 8 = 4]

क)



पैसा

ख)



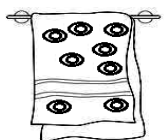
शेर

ग)



तौलिया

घ)



ढोलक

ङ)



आँख

च)



तिरंगा

छ)



चौदह

10. बूझो तो जानें –

[1 x 1 = 1]

सुबह-सुबह ही आता हूँ दुनिया की खबर सुनाता हूँ। कौन हूँ मैं ?



DELHI PUBLIC SCHOOL

SAIL Township, Ranchi

SECOND SEMESTER (SESSION-2017-18)

SUBJECT: Mathematics

DATE :- 09.03.2018

CLASS: – PREP Sec:- _____

M.O. :- _____

Roll no.:- _____

F. M. :- 40

NAME:- _____

I. Match the following:

[0.5 x 4 = 2]

a) triangle

b) cube

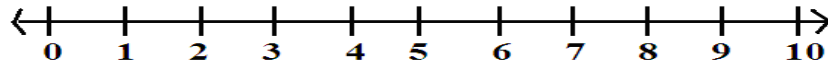
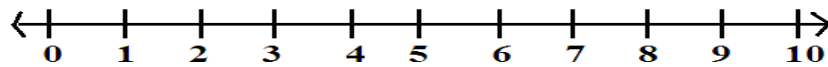
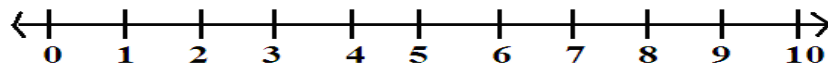
c) circle

d) square



II. Subtract using number line:

[2 x 3 = 6]

a) Show $6 - 4$ Ans. $6 - 4 =$ _____b) Show $5 - 2$ Ans. $5 - 2 =$ _____c) Show $7 - 2$ Ans. $7 - 2 =$ _____

III. Write number names for the following:

[1 x 6 = 6]

a) 55 - _____

b) 28 - _____

c) 0 - _____

d) 100 - _____

e) 45 - _____

f) 79 - _____

P.T.O.

IV. Fill in the blanks:

[1 x 6 = 6]

a) $50 + 30 =$ _____

d) $70 + 20 =$ _____

b) $80 + 10 =$ _____

e) $10 + 60 =$ _____

c) $10 + 10 =$ _____

f) $40 + 30 =$ _____

V. Which number comes in between:

[0.5 x 8 = 4]

a) 8 _____ 10

e) 87 _____ 89

b) 91 _____ 93

f) 78 _____ 80

c) 45 _____ 47

g) 41 _____ 43

d) 13 _____ 15

h) 37 _____ 39

VI. Subtract:

[1 x 4 = 4]

$$\begin{array}{r} 7 \\ -2 \\ \hline \end{array}$$

$$\begin{array}{r} 29 \\ -15 \\ \hline \end{array}$$

$$\begin{array}{r} 46 \\ -24 \\ \hline \end{array}$$

$$\begin{array}{r} 15 \\ -12 \\ \hline \end{array}$$

VII. Write the numbers for the following:

[1 x 6 = 6]

a) seventy four - _____

d) forty one - _____

b) twenty seven - _____

e) sixty five - _____

c) ninety - _____

f) thirty nine - _____

VIII. Addition of tens:

[0.5 x 4 = 2]

a) 5 tens + 4 tens = _____ tens

b) 3 tens + 3 tens = _____ tens

c) 6 tens + 2 tens = _____ tens

d) 2 tens + 1 tens = _____ tens

IX. Fill in the missing letters:

[0.5 x 4 = 2]

a) E I _____ H T _____

c) H U _____ D R _____ D

b) S I X _____ Y S _____ V E N

d) N I N _____ T Y F _____ U R

X. Draw, and label any one shape of your choice:

[2 x 1 = 2]



DELHI PUBLIC SCHOOL

SAIL Township, Ranchi

SECOND SEMESTER (SESSION-2017-18)

SUBJECT: Environmental Science

DATE :- 27.02.2018

CLASS: – PREP **Sec:-** _____

M.O. :- _____

Roll no.:- _____

F. M. :- 40

NAME:- _____

1. Choose and write: **[1 x 10 = 10]**

- a) _____ loves to eat flesh. (cow / lion)
- b) Water is used for _____. (cooking / flying)
- c) _____ helps us to smell. (eye / nose)
- d) Brush your _____ daily. (teeth / hands)
- e) Always walk on the _____. (road / footpath)
- f) Food gives us _____. (energy / strong)
- g) We cook food in the _____. (bathroom / kitchen)
- h) We wear _____ clothes in summer. (cotton / woollen)
- i) The _____ is a ball of fire. (earth / sun)
- j) A house made up of snow is called an _____. (igloo / hut)

2. Name them: **[2 x 4 = 8]**

a) Two summer clothes:

_____, _____

b) Two food items that we get from plants:

_____, _____

c) Two animals that eat plants:

_____, _____

d) Two things we use to keep our body clean:

_____, _____

3. Fill in the missing letters: **[0.5 x 8 = 4]**

a) M _____ L K

e) L U _____ C H

b) S A _____ E T Y

f) G _____ O V E S

c) W _____ T E R

g) F I _____ E

d) T E N _____

h) C _____ O W

P.T.O.

4. Match the following :

[1 x 6 = 6]

a) skin

morning

b) breakfast

feel

c) giraffe

twinkle

d) stars

plants

e) umbrella

eat food

f) dining room

rainy season

5. Write (T) for True and (F) for False:

[1 x 6 = 6]

a) Tiger eats flesh.

b) We should waste water.

c) Tongue help us to taste.

d) We should play with sharp objects.

e) We sleep in a bedroom.

f) It is safe to play on the road.


6. Riddle time :

[1 x 2 = 2]

a) I am the blue planet and life is possible on me. Who am I ?



b) I am a room with T.V. and sofa set where you meet your guests. Who am I ?



7. Draw, name and colour :

[2 x 2 = 4]

a) A traffic light

b) One type of house



DELHI PUBLIC SCHOOL

SAIL Township, Ranchi

SECOND SEMESTER (SESSION-2017-18)

SUBJECT: General Knowledge

DATE :- 16.02.2018

CLASS: – PREP Sec:- _____

M.O. :- _____

Roll no.:- _____

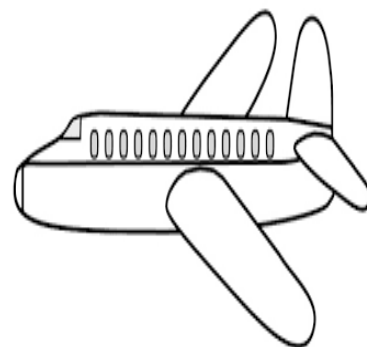
F. M. :- 10

NAME:- _____

Identify and colour:

[1 x 5 = 5]

1. a) The means of land transport is



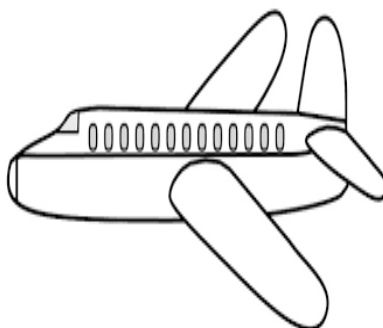
b) A water sport is



c) The President of India is





d) The means of air transport is




P.T.O.

e) It tells us time -




2. There are five differences between the two pictures.
Find out the difference and circle in Picture A.

[1 x 5 = 5]



Picture -A



Picture -B



DELHI PUBLIC SCHOOL

SAIL Township, Ranchi

SECOND SEMESTER (SESSION-2017-18)

SUBJECT: General Knowledge

DATE :- 16.02.2018

CLASS: – PREP Sec:- _____

M.O. :- _____

Roll no.:- _____

F. M. :- 15

NAME:- _____

Answer the following questions:

- 1) Which vehicle can take us to the moon?
- 2) Name the capital of Jharkhand?
- 3) What does a pilot fly ?
- 4) It has seven bright colours. Its name rhymes with the word glow.
- 5) Which machine washes our clothes?
- 6) Name a device used for calculations.
- 7) 'Chowmein' is the famous food of which country?
- 8) Name the person who serves food for us in hotel.
- 9) Name the famous monument of Egypt.
- 10) Who is the governor of Jharkhand?
- 11) Which is the biggest country in the world?
- 12) Which is the famous dish of Tibet?
- 13) Which is the tallest building in the world?
- 14) Who grows crops?
- 15) How many states are there in our country?



DELHI PUBLIC SCHOOL

SAIL Township, Ranchi

SECOND SEMESTER (SESSION-2018-19)

SUBJECT: ENGLISH

DATE :- 02.03.2019

CLASS: - PREP Sec:- _____

M.O. :- _____

Roll no.:- _____

F. M. :- 40

NAME:- _____

I. Write two words each for the given sounds: [1 x 10 = 10]

1) ng - _____

2) th - _____

3) wh - _____

4) ch - _____

5) sh - _____


II. Name them: [1 x 5 = 5]

1)  - _____

4)  - _____

2)  - _____

5)  - _____

3)  - _____

III. Fill in with 'has' or 'have': [1 x 3 = 3]


1) I _____ two eyes.


2) An ant _____ six legs.


3) We _____ ten fingers.

IV. Choose and write :

[1 x 3 = 3]

1)  - The tea is _____ (hot/cold)

2)  - The boy is _____ (fat / thin)

3)  - The ice is _____ (cold / hot)

V. Match the following:

[0.5 x 10 = 5]

1)  chain

2)  whistle

3)  whip

4)  chair

5)  coin

6)  boat

7)  thread


8)  spoon

9) **3** whale

10)  three

VI. Fill in with 'in', 'on', or 'under':

[1 x 3 = 3]



1) The fish is _____ the net.



2) The boy is _____ the tree.



3) The ball is _____ the chair.

VII. Write five lines on 'My School':

[1 x 5 = 5]

1.

2.

3.

4.

5.

VIII. Picture composition:

[1 x 5 = 5]



sun, football, boy, garden, birds

1) This is a picture of a _____.

2) The _____ is shining in the sky.

3) _____ are flying.

4) A _____ is playing near a tree.

5) The boy is playing with a _____.

IX. Riddle Time:

[1 x 1 = 1]

Which word do you use when you make a mistake ?



DELHI PUBLIC SCHOOL

SAIL Township, Ranchi

SECOND SEMESTER (SESSION-2018-19)

SUBJECT: HINDI

DATE :- 26.02.2019

CLASS: – PREP

Sec:- _____

M.O. :- _____

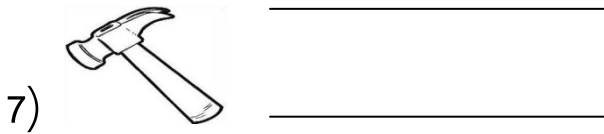

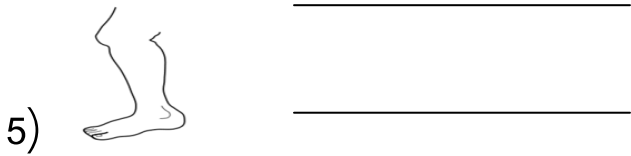
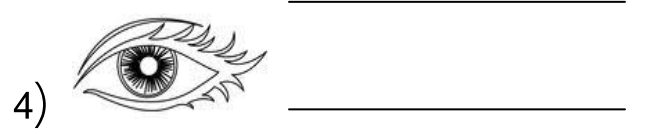

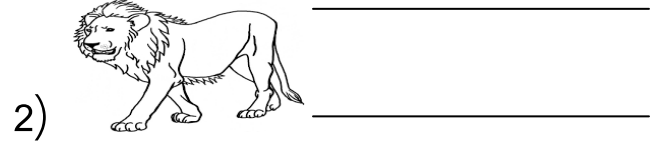
Roll no.:- _____

F. M. :- 40

NAME:- _____

I. चित्र देखकर नाम लिखें –

[1 x 7 = 7]



II. समूह से अलग शब्द पर गोला लगाएँ –

[0.5 x 12=6]

- | | | | |
|-----------|--------|-------|--------|
| 1) अतः | प्रातः | पुनः | साँप |
| 2) दाँत | आँख | मौसी | आँसू |
| 3) संदूक | पेड़ | बंदूक | कंघी |
| 4) देखा | पौधा | नौका | कौआ |
| 5) चोर | चोट | शोर | नैया |
| 6) केला | मेला | थैला | चेला |
| 7) सुंदर | मनोज | अंदर | मंदिर |
| 8) चंदन | हैरान | तैयार | मैदान |
| 9) तारे | सारे | हारे | सैर |
| 10) ठोकर | मोटर | बंदर | ओर |
| 11) स्वतः | हंस | नमः | प्रायः |
| 12) सौदा | कहाँ | जहाँ | वहाँ |

III. दी गई मात्राओं से एक-एक शब्द लिखें -

[1 x 6 = 6]

1) १ - _____2) ११ - _____3) ो - _____4) ौ - _____5) • - _____6) ं - _____

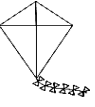
IV. सही मात्रा चुनकर लगाओ -

[1 x 3 = 3]

1) म ना (१ / ११)2) ह थ ली (१ / ११)3) स नि क (१ / ११)

V. सही मेल करें -

[0.5 x 10 = 5]

1) 

सेब

2) 

पतंग

3) 


चाँद

4) 


पौधा

5) 

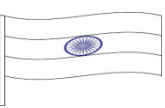
रेल

6) 

कचौड़ी

7) 

तिरंगा

8) 

बोतल

9) 

ऊँट

10)



पैसा

Page 2 of 3

VI. एक जैसे शब्द लिखें ।

[0.5 x 6 = 3]

1) रेल - _____

2) बैर - _____

3) यंत्र - _____

VII. अं (•) की मात्रा से दो फलों के नाम लिखें।

[1 x 2 = 2]

1) _____

2) _____

VIII. ओ (े) की मात्रा से दो पक्षियों के नाम लिखें।

[1 x 2 = 2]

1) _____

2) _____

IX. खाली स्थानों में सही शब्द भरें -

[1 x 4 = 4]

1) पेड़ पर _____

रहती है। (मैन, मैना, मेना)

2) पानी _____

से बरसने लगा। (जोर, जरो, जरा)

3) रमेश किसान का _____

था। (बुटा, बेटा, बाटा)

4) पंडित जी _____

बजाते हैं। (शंख, शंका, शख)

X. बूझो तो जाने

[1 x 2 = 2]

1) सुबह सवेरे आता हूँ दुनिया की खबर सुनाता हूँ। - _____

2) रोज सवेरे आता हूँ नई रोशनी लाता हूँ। बताओ कौन हूँ मैं। - _____



DELHI PUBLIC SCHOOL

SAIL Township, Ranchi

SECOND SEMESTER (SESSION-2018-19)

SUBJECT: EVS

DATE :- 28.02.2019

CLASS: – PREP

Sec:- _____

M.O. :- _____

Roll no.:- _____

F. M. :- 40

NAME:- _____

I. Fill in the missing letters:

[0.5 x 12= 6]

1) E ____ G L E

5) S T ____ M A C H

9) T R A ____ F I C

2) W ____ E A T

6) S ____ N

10) F R O ____ K

3) P ____ Z Z A

7) T ____ N T

11) E A ____ T H

4) G L O ____ E S

8) S ____ A P

12) B A ____ H I N G

II. Match the following:

[0.5 x 10 = 5]

1) lion

water

2) tube well

flesh

3) skin

stop

4) red light

feel

5) bedroom

umbrella

6) rainy season

sleep

7) burger

night

8) moon

junk food

9) comb

breakfast

III. Unscramble the letters:

[1 x 5 = 5]

1) R C W O → _____

4) I R C E → _____

2) T S R A → _____

5) O N S E → _____

3) I M L K → _____

IV. Write 'T' for true or 'F' for false:

[1 x 4 = 4]

1) We should waste water.

2) We cook in the kitchen.

3) We see with our ears.

4) Brush your teeth daily.

V. Choose and write:

[1 x 6 = 6]

1) We _____ in a bedroom. (*sleep / bath*)

2) Food gives us _____. (*light / energy*)

3) We should wear _____ clothes. (*clean / dirty*)

4) We smell with our _____. (*eyes / nose*)

5) _____ is a source of water. (*rain / dog*)

6) _____ eats flesh. (*goat / lion*)

VI. Name them:

[1 x 8 = 8]

1) Water is used for- _____

2) One plant eating animal- _____

3) One healthy food - _____

4) One body part - _____

5) One type of room - _____

6) One summer cloth - _____

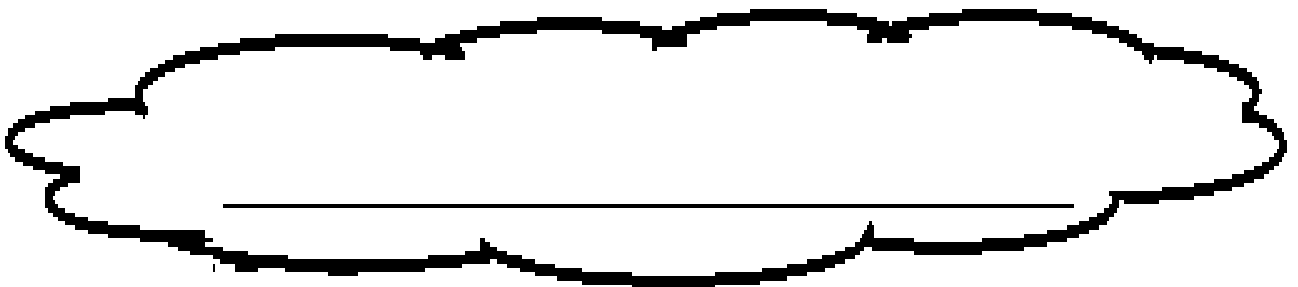
7) A hot ball of fire - _____

8) One junk food - _____

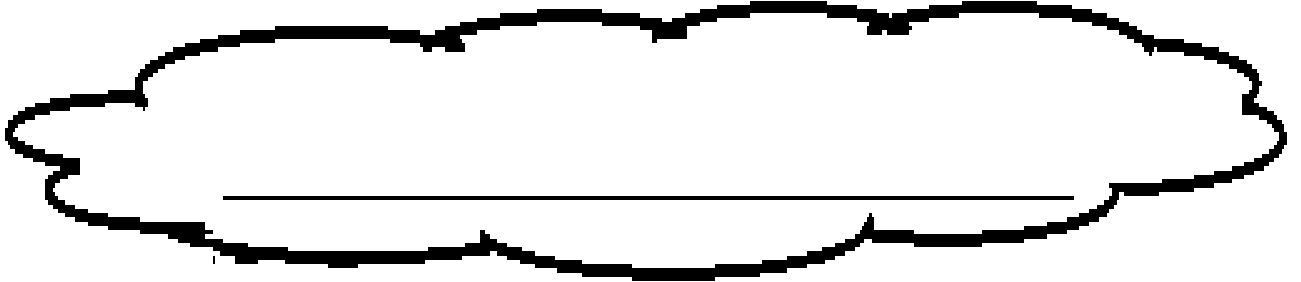
VII. Riddle time:

[1 x 2 = 2]

a) I am round in shape and life is possible only on me. Tell me who am I ?



b) I am a room where your mother cooks tasty food for you. Tell me who am I ?



Page 3 of 4
[2 x 2 = 4]

VIII. Draw, name and colour:

1) a type of house

2) one sense organ



DELHI PUBLIC SCHOOL

SAIL Township, Ranchi

SECOND SEMESTER (SESSION-2018-19)

SUBJECT: Mathematics

DATE :- 06.03.2019

CLASS: – PREP **Sec:-** _____

M.O. :- _____

Roll no.:- _____

F. M. :- 40

NAME:- _____

I. Write number names for the following: [1 x 7 = 7]

a) 48 - _____

b) 100 - _____

c) 88 - _____

d) 70 - _____

e) 63 - _____

f) 54 - _____

g) 96 - _____

II. Match the following: [0.5 x 4 = 2]

a) $2 + 2$ 5

b) $7 - 2$ 4

c) $7 - 4$ 9

d) $9 + 0$ 3

III. What comes after? [0.5 x 6 = 3]

a) 89 _____ b) 74 _____ c) 93 _____

d) 80 _____ e) 55 _____ f) 42 _____

IV. Add the following:

[1 x 5 = 5]

a) 7
 $+ 2$

b) 5
 $+ 4$

c) 9
 $+ 2$

d) 8
 $+ 0$

e) 4
 $+ 3$

Page 1 of 3

V. What comes before:

[0.5 x 6 = 3]

a) _____ 100

b) _____ 83

c) _____ 96

d) _____ 87

e) _____ 61

f) _____ 47

VI. Subtract the following:

[1 x 5 = 5]

a) 8
 $- 3$

b) 9
 $- 5$

c) 3
 $- 2$

d) 4
 $- 1$

e) 6
 $- 0$

VII. Fill in the blanks:

[1 x 3 = 3]

a) February, _____, April

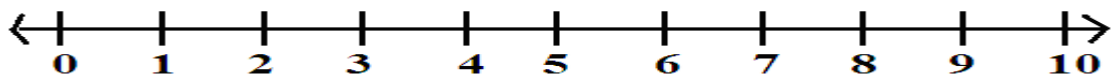
b) May, _____, July

c) October, November, _____

VIII. Add the following numbers using number line:

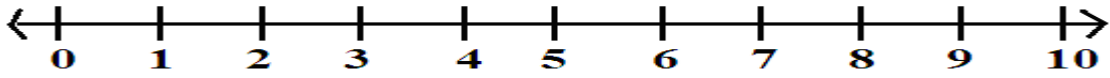
[2 x 2 = 4]

a) Show $5 + 3$



Ans.:- $5 + 3 =$

b) Show $4 + 1$



Ans.:- $4 + 1 =$

IX. Fill in the blanks:

[1 x 4 = 4]

a) 2 less than 4 =

c) 1 less than 8 =


b) 1 more than 6 =

d) 1 more than 7 =

X. Read the clock and write the time:

[1 x 4 = 4]

a)



b)



c)



d)





DELHI PUBLIC SCHOOL

SAIL Township, Ranchi

SECOND SEMESTER (SESSION-2018-19)

SUBJECT: General Knowledge

DATE :- 18.02.2019

CLASS: – PREP Sec:- _____

M.O. :- _____

Roll no.:- _____

F. M. :- 10

NAME:- _____

- 1) Name one famous cartoon character that has a wooden nose.
- 2) Momo is a delicacy of which country?
- 3) Name a cartoon character that loves eating spinach.
- 4) Which famous monument will you find in U.S.A.?
- 5) When do we celebrate Republic Day?
- 6) I bake cakes for you. tell me who am I ?
- 7) Name one instrument that has fixes nails.
- 8) We celebrate the 'Foundation Day of Jharkhand' on _____.
- 9) Which vehicle that can take us to the Moon ?
- 10) I have seven bright colours. My name rhymes with glow. I am a _____.



DELHI PUBLIC SCHOOL

SAIL Township, Ranchi

SECOND SEMESTER (SESSION-2018-19)

SUBJECT: General Knowledge

DATE :- 18.02.2019

CLASS: – PREP Sec:- _____

M.O. :- _____

Roll no.:- _____

F. M. :- 15

NAME:- _____


I. Tick and colour the correct option:

[2 x 5 = 10]


1. State flower :



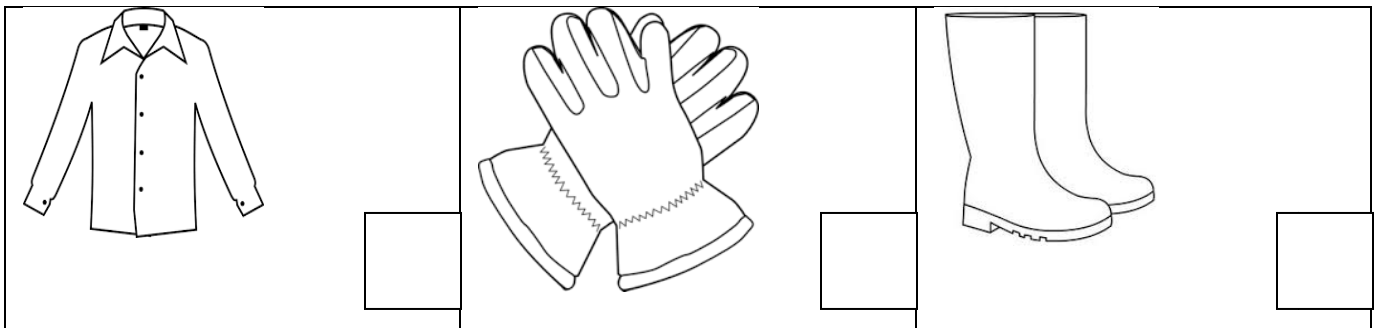
2. National animal :




3. State Bird:



4. Woollen Clothes:




5. State Animal:



II. Match the following:

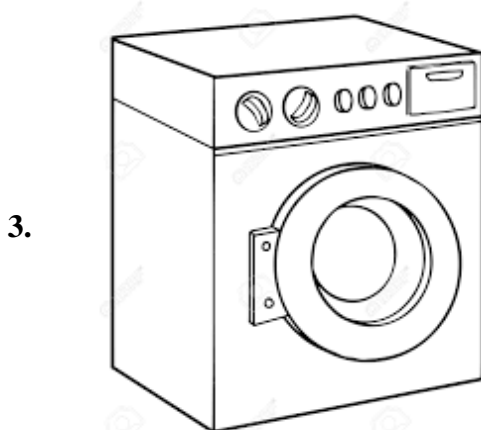
[1 x 5 = 5]



INDIA



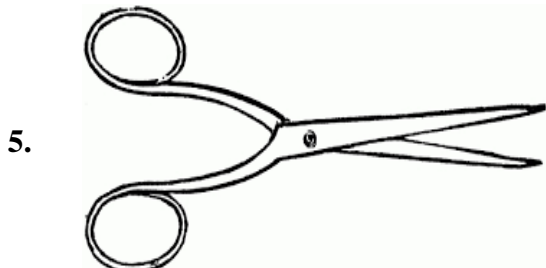
TIME



CHINA



CUTTING



WASHING



DELHI PUBLIC SCHOOL

SAIL Township, Ranchi

SECOND SEMESTER (SESSION-2019-20)

SUBJECT: ENGLISH

DATE :- 24.02.2020

CLASS: - PREP Sec:- _____

M.O. :- _____

Roll no.:- _____

F. M. :- 40

NAME:- _____

I. Write two words each for the given sounds: [0.5 x 10 = 5]

1. th - _____ , _____

2. g - _____ , _____

3. ch - _____ , _____

4. ea - _____ , _____

5. ck - _____ , _____

II. Fill in the missing letters. [0.5 x 8 = 4]

1. FL ___ WER

4. LU ___ CH

2. BRE ___ KF ___ ST

5. KI ___ E

3. T ___ AIN

6. D ___ RTY

7. BE ___ NS

III. Name them:

[0.5 x 8 = 4]

1.




- _____

2.



- _____

3.



- _____

4.



- _____

5.



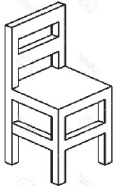
- _____

6.



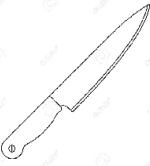
- _____

7.



- _____

8.



- _____

IV. Name two fruits:

[1 x 2 = 2]

1. _____

2. _____









V. Choose and write :

[0.5 x 6 = 3]

1. A _____ of bread. (slice/glass)
2. A _____ of tea. (grain/cup)
3. A _____ of ink. (bottle/ bar)
4. A _____ of soup. (bowl/sack)
5. A _____ of grass. (blade/ bottle)
6. A _____ of paper. (string/ piece)

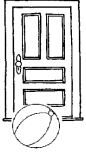
VI. Match the following :


[0.5 x 8 = 4]


1.  spoon
2.  shirt
3.  stick
4.  cycle
5.  bread
6.  paper
7.  basket
8.  shoe


VII. Fill in with 'behind' , 'in front of' or 'near'.

[0.5 x 4 = 2]

1.  - The ball is _____ the door.

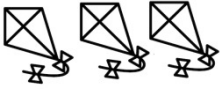
2.  - The tree is _____ the house.

3.  - The sun is _____ the cloud.


4.  - The cat is _____ the chair.

VIII. Answer the following in sentences:


[1 x 4 = 4]

1. How many kites are there? 


Ans: _____

2. What is the boy doing? 

Ans: _____

3. How many trees are there ? 

Ans: _____

4. Where is the glass? 

Ans: _____

IX. Picture Composition:

[1 x 5 = 5]



**girl kite two
apple cat**

1. A _____ is standing near the house.
2. There is an _____ tree.
3. A boy is flying a _____ .
4. There are _____ ducks in the pond.
5. A _____ is sitting under the tree.

X. Write five lines on 'My Mother':

[1 x 5 = 5]

1. _____

2. _____

3. _____

4. _____

5. _____

XI. Riddle Time:

[1 x 2 = 2]

1. I am black in colour and your teacher writes on me . Tell me who am I?

2. I am orange in colour. I live under the ground and a rabbit loves to eat me. Tell me who am I?



DELHI PUBLIC SCHOOL

SAIL Township, Ranchi

SECOND SEMESTER (SESSION-2019-20)

SUBJECT: EVS

DATE :- 27.02.2020

CLASS: - PREP

Sec:- _____

M.O. :- _____

Roll no.:- _____

F. M. :- 40

NAME:- _____

I. Match the following:

[0.5 x 8 = 4]

- | | |
|-----------------|-----------------------|
| 1. stars | blue planet |
| 2. drawing room | feel |
| 3. earth | twinkle |
| 4. eyes | source of water |
| 5. igloo | meet our guests |
| 6. air | stop |
| 7. well | sense organ |
| 8. red light | house made up of snow |

II. Fill in the missing letters.

[0.5 x 10 = 5]

1. H O ____ E Y

6. H Y G ____ E N E

2. B ____ E A T H E

7. S A ____ E T Y

3. W A ____ T E

8. ____ N E R G Y

4. O R ____ A N

9. H O ____ S E

5. W E ____ T H E R

10. B R I G ____ T

III. Name them:

[1 x 4 = 4]

1. one use of water - _____

2. a hot ball of fire - _____

3. a type of house - _____

4. a summer cloth - _____

IV. Unscramble the letters.

[1 x 5 = 5]

1. R F O C K - _____

2. I L G O O - _____

3. U P L S E S - _____

4. R C I E - _____

5. R B U S H - _____

V. Write (T) for true or (F) for false.

[1 x 4 = 4]

1. It is safe to play on the road.

2. We should not tease animals.

3. We cook food in the bathroom.

4. We should avoid junk food.

VI. Choose and write

[0.5 x 10 = 5]

1. _____ gives us wool. (Sheep / Cat)

2. Moving air is called _____ (breathe / wind)

3. We should not _____ water. (waste / use)

4. _____ helps us to taste. (Leg / Tongue)

5. The shape of the earth is _____. (round / oval)

6. _____ twinkles in the sky. (Moon/ Star)

7. We need food to _____ . (grow/ help)
8. Use the _____ crossing to cross the road.
(zebra/ giraffe)
9. We have _____ sense organs. (ten/ five)
10. Water is used for _____. (mopping/ standing)

VII. Name two animal products.


[1 x 2 = 2]

1. _____
2. _____

VIII. Name them:


[1 x 5 = 5]

1.




- _____

2.




- _____

3.




- _____

4.



- _____

5.



- _____

IX. Draw, name and colour

[2 x 2 = 4]

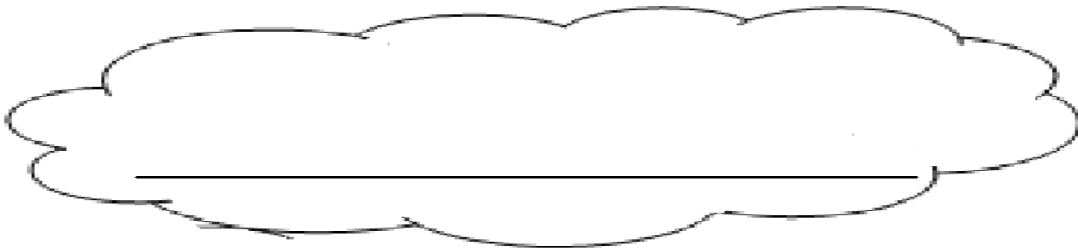
1. a type of house

2. a winter cloth

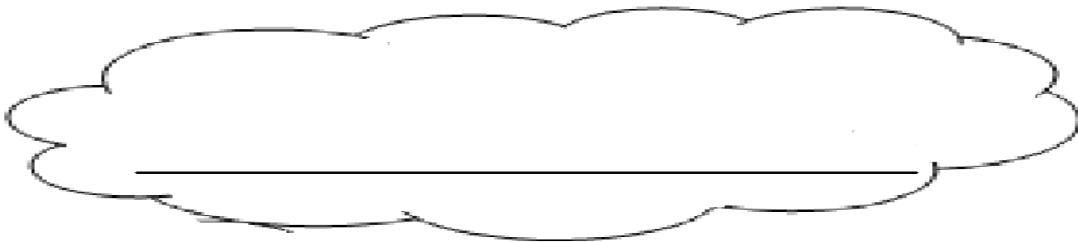
X. Riddle

[1 x 2 = 2]

1. I am round in shape and I shine at night. I am cool and bright. Tell me who am I?



2. I am white in colour. You drink me for healthy bones and teeth. Tell me who am I?





DELHI PUBLIC SCHOOL

SAIL Township, Ranchi

SECOND SEMESTER (SESSION-2019-20)

SUBJECT: HINDI

DATE :- 02.03.2020

CLASS: - PREP

Sec:- _____

M.O. :- _____

Roll no.:- _____

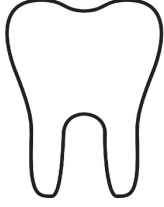
F. M. :- 40

NAME:- _____

I. चित्र देखकर नाम लिखो।

[0.5 x 8 = 4]

1.




.....
.....

2.




.....
.....

3.



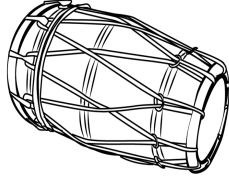
.....
.....

4.



.....
.....

5.



.....
.....

6.




.....
.....

7.



.....
.....

8.



.....
.....

II. सही मात्रा चुनकर शब्द पूरा करो।

[0.5 x 6 = 3]

1. ज ल बी (२ / ३)

2. क म रा (२ / ३)

3. क ट री (१ / १)

4. त लि या (१ / १)

5. ब त ल (१ / १)

6. स नि क (२ / ३)

III. दी गई मात्राओं से दो-दो शब्द बनाओ।

[0.5 x 8 = 4]

1) ए - _____

2) ओ - _____

3) ऐ - _____

4) अः - _____

IV. ओ (े) की मात्रा से दो पक्षियों के नाम लिखो।

[1 x 2 = 2]

V. एक जैसे शब्द लिखो।

[0.5 x 8 = 4]

1) केला - _____

2) तैर - _____

3) कौन - _____

4) वहाँ - _____

VI. खाली स्थानों में सही शब्द चुनकर भरें –

[1 x 5 = 5]

- 1) मोहन किसान का _____ था। (बेटा/बाटा)
- 2) शैलेश _____ जानता है। (तरना/तैरना)
- 3) कौशल _____ के साथ आया है। (नौकर/नोकर)
- 4) _____ में एक तोता है। (पंजरे/पिंजरे)
- 5) चंचल अपने _____ गया है। (गाँव/गाँवा)

VII. वर्णों को सही क्रम में लगाकर शब्द बनाओ ।

[0.5 x 5 = 2.5]

- 1) टे ठ रा – _____
- 2) रा तै क – _____
- 3) र ख गो श – _____
- 4) लौ खि ना – _____
- 5) ता सि रे – _____

VIII. ए (२) की मात्रा से दो पशुओं के नाम लिखो।

[1 x 2 = 2]

IX. समूह से अलग शब्द पर गोला लगाएँ –

[0.5 x 8 = 4]

- | | | | | | |
|----|------|------|------|------|--------|
| 1) | अंडा | डंडा | कौन | गंदा | टंडा |
| 2) | मूँग | गूँज | पूँछ | भेड़ | बूँद |
| 3) | रोता | सोता | पोता | कोना | सेना |
| 4) | नमः | बेर | नेक | पेट | देर |
| 5) | पैसा | लौट | जैसा | मैला | थैला |
| 6) | बौना | फौज | पाँच | मौसी | मौका |
| 7) | गंगा | लंका | चंगा | तारे | दंगा |
| 8) | सोहन | भोजन | सरोज | मोटर | प्रायः |

X. 'तोता' पर पाँच शब्द लिखो ।

[0.5 x 5 = 2.5]

1. _____

2. _____

3. _____

4. _____


5. _____

XI. मेल करो ।

[0.5 x 10 = 5]



केले



ढेला



नैया



पैर




बाँसुरी



कोयल




प्रातः



पौधा



कंघी



तोता

XII. दिए गए चित्र में से किन्हीं चार चीजों के नाम लिखो ।

[0.5 x 4 = 2]



1)

2)

3)

4)



DELHI PUBLIC SCHOOL

SAIL Township, Ranchi

SECOND SEMESTER (SESSION-2019-20)

SUBJECT: MATHS

DATE :- 04.03.2020

CLASS: - PREP Sec:- _____

M.O. :- _____

Roll no.:- _____

F. M. :- 40

NAME:- _____

I. Write number names for the following : [1 x 4 = 4]

a) 42 - _____

b) 85 - _____

c) 100 - _____

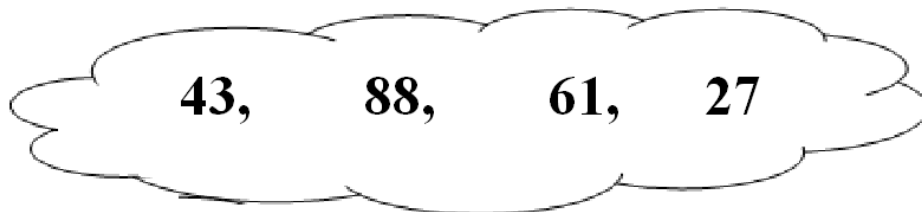
d) 69 - _____

II. What comes before ? [0.5 x 2 = 1]

a) 20

b) 33

III. Arrange in ascending order. [1 x 1 = 1]



IV. What comes after ? [0.5 x 2 = 1]

a) 45

b) 89

V. Fill in the missing letters.

[0.5 x 6 = 3]

a) S U ___ D A Y

b) J A N ___ A R ___

c) F R ___ D A Y

d) O ___ T O ___ E R

VI. Add:

[0.5 x 8 = 4]

a) 4
 + 5

b) 3
 + 3

c) 5
 + 0

d) 6
 + 2

e) 3
 + 4

f) 8
 + 1

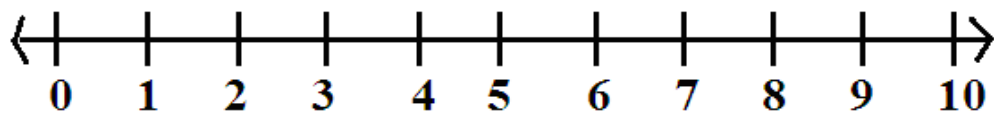
g) 4
 + 0

h) 7
 + 3

VII. Subtract using number line.

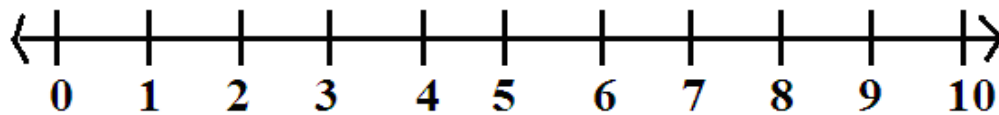
[1 x 2 = 2]

b) Show $7 - 2$



Ans.: - $7 - 2 =$

b) Show $5 - 3$



Ans.: - $5 - 3 =$

VIII. Fill in the blanks:

[1 x 5 = 5]

a) 2 more than 6 =

d) 1 more than 4 =

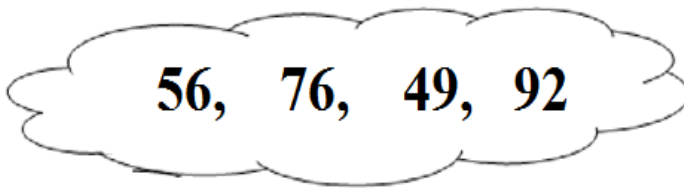
b) 1 less than 7 =

e) 2 less than 3 =

c) 2 more than 8 =

IX. Arrange in descending order.

[1 x 1 = 1]

 **X. Subtract:**

[0.5 x 8 = 4]

a)
$$\begin{array}{r} 7 \\ - 4 \\ \hline \end{array}$$

b)
$$\begin{array}{r} 4 \\ - 2 \\ \hline \end{array}$$

c)
$$\begin{array}{r} 6 \\ - 6 \\ \hline \end{array}$$

d)
$$\begin{array}{r} 5 \\ - 3 \\ \hline \end{array}$$

e)
$$\begin{array}{r} 3 \\ - 2 \\ \hline \end{array}$$

f)
$$\begin{array}{r} 2 \\ - 2 \\ \hline \end{array}$$

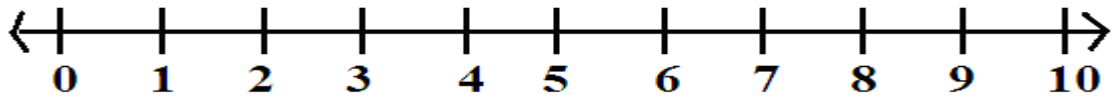
g)
$$\begin{array}{r} 9 \\ - 1 \\ \hline \end{array}$$

h)
$$\begin{array}{r} 8 \\ - 5 \\ \hline \end{array}$$

XI. Add using number line.

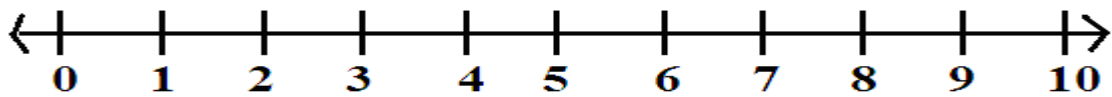
[1 x 2 = 2]

a) Show $6 + 3$



Ans.:- $6 + 3 =$

b) Show $4 + 4$



Ans.:- $4 + 4 =$

XII. Fill in the blanks.

[0.5 x 6 = 3]





a) 9, _____, 7, _____

b) 8, _____, _____, 5

c) _____, 5, _____, 3

XIII. Read the clock and write the time:

[0.5 x 4 = 2]

a)	 <p>_____ o'clock</p>	c)	 <p>_____ o'clock</p>
b)	 <p>_____ o'clock</p>	d)	 <p>_____ o'clock</p>

XIV. Solve it:

[1 x 2 = 2]

a) There are 8 ducks in a pond. 2 more ducks join them. How many ducks are there in pond?






Ans-

b) There are 9 birds sitting on a tree. 4 birds flew away. How many birds are left on the tree?

Ans-

XV. Fill in the blanks.

[1 x 2 = 2]

				
deer	tortoise	bear	mouse	snake







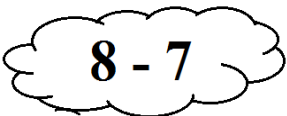





If the deer is at the 1st position, then

a) Which animal is at the 5th position? _____

b) Write the position of the bear. _____

XVI. Match the following.

[0.5 x 6 = 3]

a.		
b.		
c.		
d.		
e.		
f.		



DELHI PUBLIC SCHOOL

SAIL Township, Ranchi

SECOND SEMESTER (SESSION-2019-20)

SUBJECT: General Knowledge

DATE :- 19.02.2020

CLASS: – PREP Sec:- _____

M.O. :- _____

Roll no.:- _____

F. M. :- 10

NAME:- _____

- 1) When do we celebrate Children's Day?
- 2) Who bakes cakes for you?
a) baker or b) electrician
- 3) Name one badminton player from India.
- 4) Who is the chief minister of Jharkhand?
- 5) Who flies an aeroplane?
- 6) Where would you find the following:
a. Statue of Liberty
b. Eiffel Tower
c. Big Ben
d. Pyramids
- 7) When do we celebrate Christmas?



DELHI PUBLIC SCHOOL

SAIL Township, Ranchi

SECOND SEMESTER (SESSION-2019-20)

SUBJECT: General Knowledge

DATE :- 19.02.2020

CLASS: – PREP Sec:- _____

M.O. :- _____

Roll no.:- _____


F. M. :- 15

NAME:- _____

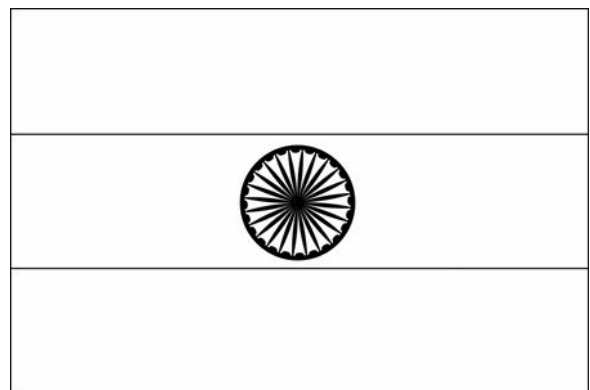
I. Colour the given pictures using correct shades :

[3 x 2 = 6]

1. Traffic light



2. Indian flag



II. Draw and colour three things that you use in rainy season.

[1 x 3 = 3]

1.	2.	3.
----	----	----

P.T.O.

III. Match the following :


[1 x 6 = 6]

1.



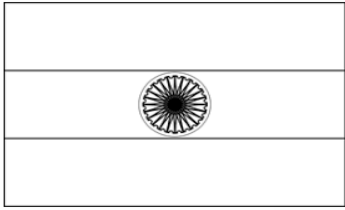
BIG BEN

2.




FARMER

3.




PILOT

4.



JERRY

5.



INDIAN FLAG

6.



ASTRONAUT