



DELHI PUBLIC SCHOOL

SAIL Township, Ranchi

SECOND SEMESTER (SESSION-2017-18)

CLASS: – III

DATE :- 06.03.2018

SUBJECT:- Social Science

M.M. :- 80

-
1. **Define:** [1 x 8 = 8]
a) Raft b) Observatory c) Traditional d) Metro
e) Fertilizers f) Port g) Monument h) Gopuram
2. **Fill in the blanks:** [0.5 x 10 = 5]
a) _____ a popular beach in Chennai .
b) _____ a famous bridge in Kolkata.
c) The Red Fort was built by _____
d) Mumbai was earlier known as _____
e) Our National Flower is _____
f) Early man first made tools of _____
g) Meat cooked on fire was _____ and _____
h) _____ and _____ came and settled in India.
3. **Name the following:** [1 x 8 = 8]
a) These caves are in an island near Mumbai _____.
b) The biggest Mosque in India _____.
c) Kolkata is the capital of _____.
d) The harvest festival celebrated in Chennai _____.
e) The chakra stand for _____.
f) The classical dance of Chennai _____.
g) To find out something new _____.
h) Printed money of a country _____.
4. **Write True or False:** [0.5 x 10 = 5]
a) Iron was the first metal to be discovered by early man.
b) Sandesh is the sweet of Mumbai.
c) Chennai is in the North.
d) Mumbai is the capital of Uttar Pradesh.
e) Hand pulled rickshaws are still in use in Kolkata.
f) Chennai has a big and busy port.
g) National Anthem was composed by Rabindra Nath Tagore.
h) New Delhi was designed by Edwin Lutyens.
i) The Gateway of India is an important land mark of Mumbai.
j) Delhi is a Union Territory.
5. **Give answer in one sentence:** [1 x 12 = 12]
a) Which city was first to have Metro in India?
b) Name the capital of Maharashtra.
c) Which language do people of Chennai speak?
d) How did early man cover his body?
e) What was Chennai earlier known as?
f) Which place looks like a diamond necklace in Mumbai.
g) What is located to the east of Rajpath?
- P.T.O.**

- h) Who built Jama Masjid?
- i) What is the most popular festival of Mumbai?
- j) Which city is known as 'Cultural Capital of South India'?
- k) Which city is known as Mini India?
- l) Where did early human live?

6. Answer in short:

[1.5 x 6 = 9]

- a) What does the national anthem tell us?
- b) Why is early man called a food gatherer?
- c) Where is Chennai located?
- d) How do people travel in Kolkata?
- e) What product do we get from crude oil?
- f) What are High Commission and Embassies?

7. Answer in detail:

[3 x 7 = 21]

- a) Name any four places of worship in New Delhi.
- b) What are the rules to be followed when we hoist our National Flag?
- c) Name the animals tamed by early man. How were they useful to him?
- d) Name the things made in factories in Chennai.
- e) Write a few lines about the people of Kolkata.
- f) Name four tourist centres in Mumbai.
- g) How is the climate in Kolkata?

8. Match the following:

[0.5 x 10=5]

Column A

Column B

- | | |
|--------------------------|--|
| a) Till 1911 | Kolkata remained capital under British |
| b) Belur Math | Mumbai |
| c) Commercial capital | Ramkrishna Mission |
| d) Flesh | food |
| e) Dance | Nehru Park |
| f) Temple | Bharatanatyam |
| g) A famous park | National Song |
| h) Vande Mataram | Kapaleswarar |
| i) President's residence | samadhi |
| j) Raj Ghat | Rashtrapati Bhawan |

9. Unscramble the letters to find answer:

[0.5 x 10=5]

- a) The climate of New Delhi- XETEREM
- b) The hot winds that blow in summer – O O L
- c) Crude oil is taken is taken from the sea bed. – MMUAIB GHIH
- d) Tourist interest in Chennai- RAW MMERIOLA
- e) To create something new – T N E V N I
- f) The Indian film industry – OBLLYOOWD
- g) Vehicle running on rails – A R T M S
- h) I am a sea. The city of Mumbai faces me – AARIBNA EAS
- i) I am named a garden but I am a cricket stadium - DEEN RAGEND
- j) _____ Prime minister of India. – ANREDNRA DOMI

10. List the things connected to modern life:

[0.5 x 4 = 2]

- a) flesh house cave clothes leaves cooking gas animal skin city jungle



DELHI PUBLIC SCHOOL

SAIL Township, Ranchi

SECOND SEMESTER (SESSION-2017-18)

CLASS: – III

SUBJECT:- Hindi

DATE :- 26.02.2018

M.M. :- 80

खण्ड –क

1. दिए गए गद्यांश को पढ़कर प्रश्नों के उत्तर लिखिए –

[1 x 5 = 5]

उज्जैन बहुत प्राचीन नगर है। यह शिप्रा नदी के तट पर बसा है। यहाँ महाकाल नाम से शिवजी का बहुत प्राचीन मंदिर है। लोग दूर-दूर से उज्जैन आते हैं, शिप्रा नदी में स्नान करते हैं और महाकाल का दर्शन पूजन करते हैं। प्राचीन काल की बात है। शिवदास नाम का एक यात्री अकेला ही उज्जैन आया। वह शिप्रा में स्नान करने नदी-तट पर गया। कपड़े उतारने लगा तो उसे ध्यान आया कि उसके पास तो बहुत से रुपए हैं। स्नान करते समय कोई इन्हें चुरा सकता है। तभी शिवदास को एक उपाय सूझा। उसने नदी तट पर रेत खोद कर गड़ढा बनाया और उसमें अपना धन रख दिया। वह पूजा करने चला गया और जब लौटा तो उसे विश्वास था कि उसका धन सुरक्षित होगा। तट पर हजारों शिवलिंग देखकर उसने अपना माथा पकड़ लिया। इन शिवलिंगों में किसके नीचे मेरा धन है। –यह कैसे तय होगा ? उसे लगा कि अंधविश्वास ने उससे उसका धन छीन लिया। लोग लकीर के फकीर न होते तो शिवदास की योजना सफल रही होती।

क) उज्जैन किस नदी के तट पर बसा है ?

ख) यहाँ मंदिर किस (देवता) का है ?

ग) शिवदास ने क्या उपाय किया ?

घ) लोग दूर-दूर से उज्जैन क्यों आते हैं ?

ङ) निम्नलिखित के विलोम शब्द लिखें –

i) विश्वास

ii) नीचे

खण्ड –ख

2. निर्देशानुसार प्रश्नों के उत्तर दें –

क) क्रिया की परिभाषा उदाहरण सहित लिखिए। दो करने वाली तथा दो अपने-आप होनेवाली क्रियाएँ लिखिए। (4)

ख) दिए गए विशेषणों के विशेष्य लिखिए – (4)

i) ईमानदार

ii) लम्बी

iii) कपटी

iv) सुन्दर

ग) दिए गए शब्दों के दो-दो पर्यायवाची शब्द लिखिए – (4)

i) चन्द्रमा

ii) पुत्र

iii) फूल

iv) मित्र

घ) इन शब्दों के विलोम शब्द लिखें – (4)

i) ईमानदार

ii) हार

iii) दुर्बल

iv) धरती

ङ) इन मुहावरों के अर्थ लिखिए – (3)

i) आँखे दिखाना

ii) उल्लू बनाना

iii) अंधे की लकड़ी

च) i) विराम चिह्न किसे कहते हैं ? उदाहरण लिखकर बताइए। (3)

ii) विराम चिह्न लगाइए – क्या राम श्याम और भावना भी जाएगी

छ) दिए गए शब्दों के शुद्ध रूप लिखें – (3)

i) परनाम

ii) अविष्कार

iii) पड़ाई

खण्ड –ग

3. निम्नलिखित दीर्घ उत्तरीय प्रश्नों के उत्तर लिखें –

[2 x 3 = 6]

क) मधुमक्खियों की कारीगरी का पता कैसे चलता है ?

ख) हवेंग तूड ने क्या कहकर बीज नहीं बोया ?

ग) विद्यासागर जी ने लड़के को एक रुपया क्यों दिया ?

4. दिए गए अति-लघु प्रश्नों के उत्तर एक वाक्य में लिखिए –

[1 x 6 = 6]

क) मधुमक्खी के किस अंग से डर लगता है ?

ख) फूल धरती को कैसा बना देते हैं ?

ग) लोग सनसेट पॉइन्ट क्यों जाते हैं ?

घ) संगमरमर की कारीगरी कहाँ की गई है ?

ङ) ईश्वरचन्द्र विद्यासागर कौन थे ?

च) हवेंग तूड ने नाशपाती क्यों चुराई ?

P.T.O.

5. निम्नलिखित कविता की पंक्तियाँ पूरी करें –

[1 x 5 = 5]

- क) थी डाली खाली,
ख) आज भरी ?
ग) बता दे माली,
घ) यह सब है कैसे ?
ङ) भीतर से भैया,

6. रिक्त स्थानों की पूर्ति करें –

[1 x 4 = 4]

- क) पीस पार्क में बाँस और घास की बनी थी।
ख) माऊंट आबू राज्य का हिल स्टेशन है।
ग) नेहरू जी हमारे देश के थे।
घ) हमें से प्रेम करना चाहिए।

7. दिए गए शब्दों से वाक्य बनाएँ –

[1 x 4 = 4]

- क) आश्चर्य ख) संगमरमर ग) उद्यमी घ) योग्य

8. दिए गए शब्दों के अर्थ लिखिए –

[1 x 4 = 4]

- क) अपराध ख) सुवास ग) दृश्य घ) मूल्यवान

9. दिए गए शब्दों के समान अर्थ (समानार्थी) लिखिए –

[1 x 3 = 3]

- क) प्यार ख) शक्ति ग) तरीका

10. नीचे दिए गए शब्दों का सही मिलान करें –

[0.5 x 6 = 3]

- क) आकर्षक सूरज
ख) नन्हा दृश्य
ग) मनोहारी पार्थ
घ) डूबता हुआ उपवन
ङ) कई तरह के झोपड़ियाँ
च) सुन्दर हरा-भरा गुलाब

11. दिए गए वाक्यों को हाँ या ना में उत्तर दीजिए –

[0.5 x 6 = 3]

- क) गिलहरी के बच्चों की माँ जीवित थी।
ख) बच्चा शरीर की गरमी पाकर हिलने-डुलने लगा।
ग) नेहरू जी के पास जाते ही गिलहरी के बच्चे भाग गए।
घ) मधुमक्खी का भोजन फलों का रस होता है।
ङ) लड़के ने चावल का व्यापार शुरू किया।
च) टोड रॉक मेढ़क जैसी लगती थी।

12. मूल्यपरक प्रश्न –

[2x 1 = 2]

यदि आपके पिताजी आपको दस रूपए देंगे तो आप उन्हें किस प्रकार से खर्च (व्यय) करेंगे। अपने शब्दों में लिखिए।

खण्ड-घ

13. किसी एक विषय पर पत्र लिखें–

[5 x 1 = 5]

- क) दो दिनों के अवकाश के लिए प्रधानाचार्य को पत्र लिखिए।

या

- ख) अपने जन्मदिन पर मित्र को निमन्त्रण हेतु पत्र लिखिए।

14. किसी एक विषय पर अनुच्छेद लिखिए –

[5 x 1 = 5]

- क) पेड़ पौधे हमारा जीवन ख) परोपकार ग) सबसे सुन्दर हमारा विद्यालय



DELHI PUBLIC SCHOOL

SAIL Township, Ranchi

SECOND SEMESTER (SESSION-2017-18)

CLASS: – III

DATE :- 28.02.2018

SUBJECT:- Mathematics

M.M. :- 80

Section – A

1. Fill in the blanks:

[1 x 10 = 10]

- There are _____ metres in 1 km.
- $\frac{1}{5} + \frac{3}{5} =$ _____
- $\frac{3}{4} = \frac{[]}{8}$
- 16kg = _____ grams.
- 5 min. = _____ seconds
- 2 weeks = _____ days
- A circle has _____ sides and _____ vertices.
- 5027g = _____ kg _____ g.
- _____ halves make a whole.
- 72, 78, _____, _____

2. Write True or False:

[0.5 x 10 = 5]

- The standard unit of capacity is Litre.
- In a leap year, February has 28 days.
- three eighths is written as $\frac{3}{18}$
- 17 L is same as 1000 mL
- To convert days into hours, we multiply the number of days by 7.
- The ninth month of the year is September.
- A book has curved surface.
- The number of even numbers between 111 and 115 is 2.
- Number of vertices in a triangle is 5.
- Number of years in one decade is 10.

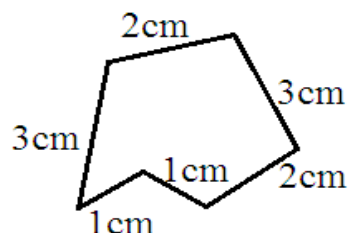
3. Do as directed:

[2 x 12 = 24]


- Convert 40m 23cm to cm.
- State whether the following fractions are equivalent or not?

$$\frac{8}{20} \text{ and } \frac{10}{25}$$

- Add 24km 350m and 113km 840m.
- Subtract 28kg 46g from 59kg 95g.
- Find the perimeter of the following figure:



- In the figure given below, name the points and the line segments.



g) Convert 12 hours 38 min. into minutes.

h) Solve:

i) $\frac{19}{21} + \frac{13}{21}$

ii) $\frac{21}{27} + \frac{16}{27}$

i) Convert:

i) $\frac{1}{4}$ of a kg into grams.

ii) $\frac{1}{5}$ of a litre into mL.

j) Write the time in the following cases:

i) quarter to 10

ii) quarter past 3

k) Add 14L 540mL and 17L 350mL

l) Compare 4L 325mL with 4135 mL and write which is greater and by how much?

Section – B

4. Solve:

[3 x 7 = 21]


- Rita is 1m 18cm tall and her father is 1m 76cm tall. Who is taller and by how much?
- A tin of vegetable oil is 15kg 800g in weight. If empty tin weight is 1kg 350g, find the weight of oil in the tin.
- Two rolls of electric wires contain 80m 20cm and 86m 56cm of wire respectively. What is the total length of electric wire of both the rolls?
- The tank of a truck is filled with 90L of diesel. If 48L 500mL is consumed during the day, how much diesel is left in the tank?
- John covered a distance of 180km 550m by train and 28km 250m by bus. How much distance did he cover altogether?
- A boy weighed 42kg 500g. He lost 2kg 350g due to illness. What is his weight now?
- On Diwali festival, Meena bought 8L 500mL of milk from one dairy and 3L 250 mL of milk from other dairy. How much of total milk did she buy?





Section – C

5. Find the answer:

[4 x 5 = 20]

- During an examination you have taken 2 hours 15 minutes to finish your paper. Convert it into
i) seconds and ii) minutes.
- The length of a bedroom is 5m 46cm and the length of a kitchen room is 3m 85cm. Find the total length?
- Sita bought 8L 350mL of ghee. She consumed 5L 450mL of ghee in cooking. How much ghee is left with her?
- Mohan was travelling to another town 180 km away from his town. But his car broke down after a distance of 96 km 800 m. How much distance does Mohan still have to travel to reach the town from the place where the car broke down?
- The following pictograph shows the number of toffees of each child

 = 1 toffee

Karan	
Aditya	
Neetu	
Menu	

Read the pictograph carefully and answer the following questions:

- Which child has least number of toffees?
- Which child has highest number of toffees?
- What is the difference between the number of toffees of 3rd child and 1st child.
- What is the total number of toffees of the first two children?



DELHI PUBLIC SCHOOL

SAIL Township, Ranchi

SECOND SEMESTER (SESSION-2017-18)

CLASS: – III

DATE :- 08.03.2018

SUBJECT:- English

M.M. :- 80

Section – A (Reading – 10 marks)

1. Read this passage carefully and answer the questions that follow:

(Para – 1) Paper is a very useful material. It is all around us. We use it daily for a variety of things in many different ways. We use it to make newspapers, tissues, writing paper, cards, paper bags, glossy magazines and lots of other things. Paper comes from wood, which we get from trees.

(Para – 2) Trees are cut and the wood is taken to factories. This wood then goes through a process in the factories. It is heated and mixed with water and chemicals. This makes a thick paste called wood pulp that is poured out in flat layers. All the water is taken out and the wood pulp is dried in the form of sheets. Chemicals are added to change the colour and appearance of the sheets as needed.

A) Write four uses of paper (Para – 1) [2]

B) Complete the sentences: [0.5 x 4 = 2]

a) Paper comes from _____ which we get from _____. (Para – 1)

b) Chemicals are added to change the _____ and _____ of the sheets. (Para – 2)

C) Write the antonyms of : [0.5 x 2 = 1]

a) useful - _____

b) thick - _____

2. Read the poem given below and answer the questions that follow:

(Stanza-1) Once there was a little boy,
With curly hair and pleasant eye –
A boy who always told the truth,
And never, never told a lie.

(Stanza-2) And when he moved quickly to school,
The children all about would cry,
“There goes the curly-headed boy-
The boy that never tells a lie.”

(Stanza-3) And everybody loved him so,
Because he always told the truth,
That everyday, as he grew up,
‘Twas said, “There goes an honest youth.”

(Stanza-4) And when the people that stood near
Would turn to ask the reason why,
The answer would be always this:
“Because he never tells a lie.”

a) Why everybody loved the little boy? (stanza-3) [2]

b) Write two pairs of rhyming words from the poem. [2]

c) Fill in the blanks:

i) The little boy had _____ hair and _____ eye. (stanza -1) [1]

Section – B (Writing – 10 marks)

3. Notice writing: [5]

a) You are Ajay / Sneha of class III-A. You have lost your wrist watch in the corridor of the school.
Draft a notice for the same.

OR

b) You are Ajay /Sneha of class III-B. You have found a school bag on the school play ground.
Write a notice for the same.

4. Paragraph writing (write any one): [5]

a) My favourite subject OR b) Daily Routine OR c) My first friend

Section – C (Grammar – 30 marks)

5. Do as directed: [1 x 8 = 8]

a) Anjali _____ in her diary every night. (write – use Simple Present Tense)

b) My sister _____ us next week. (visit – use Future Tense)

c) The boy _____ the box in his hand. (hold – use Present Continuous Tense)

d) The birds _____ in the sky. (fly – use Present Tense)

P.T.O.

- e) The boys _____ to school yesterday. (**go** - use *Past Tense*)
 f) You _____ a pretty design. (**make** - use *Present Continuous Tense*)
 g) We _____ in that house when I was a baby. (**live** – use *Past Tense*)
 h) He plays hockey. (*Change the sentence into Future Tense*)

6. Fill in the blanks with a, an or the: [1 x 6 = 6]

- a) _____ umbrella protects from rain.
 b) She is _____ prettiest girl of our class.
 c) _____ little bird sat on the window.
 d) The cow is _____ domestic animal.
 e) _____ Ramayana is a holy book of the Hindus.
 f) This is _____ girl whom everyone likes.

7. Underline the prepositions in these sentences: [1 x 6 = 6]

- a) Let us go out for a pizza.
 b) The teacher is angry with me.
 c) My mother likes travelling by train.
 d) The truck is parked near the house.
 e) There is a clock on the wall.
 f) The thief is hiding behind the wall.

8. Join the sentences using suitable conjunctions and rewrite them: [1 x 5 = 5]

- a) She is carrying an umbrella. It is raining.
 b) She bought a shirt. She bought a blouse.
 c) Ria is intelligent. Ria is lazy.
 d) You can have sandwiches. You can have pastries.
 e) He failed. He did not work hard.

9. Fill in the blanks with can, cannot, should, should not: [1 x 5 = 5]

- a) You _____ go to work early.
 b) A dog _____ talk.
 c) A rabbit _____ climb a tree.
 d) You _____ smoke.
 e) Rahul is very weak. He _____ walk fast.

Section – D (Literature – 30 marks)

10. Answer in detail: [3 x 4 = 12]

- a) When he became a sweeper, did the merchant's son work hard? Give a reason for your answer.
 b) Why does the guest run away from the farmer's house?
 c) Why do you think the storm is described as a creature?
 d) Why was the old king unhappy?

11. Answer the following questions with reference to the context: [2 x 5 = 10]

- a) Who says this? To whom?
 i) You came here because of a dream?
 ii) I would like babies to play with and teach.
 b) Of course I shall try.
 i) Who says this? To whom?
 ii) What is the speaker going to try?
 c) What shall we give him?
 i) Who says this ? To whom?
 ii) What happens next?
 d) Can I have one?
 i) Who says this ? To whom?
 ii) What is he asking for?
 e) Use this
 i) Who says this? To whom?
 ii) What happens next?

12. Give the meanings of the following words: [1 x 3 = 3]

- a) ungrateful b) swooping c) warrior

13. Make sentences with the following words: [1 x 3 = 3]

- a) guest b) monster c) careful

14. Fill in the blanks: [1 x 2 = 2]

- a) The name of the poet of the poem 'The Bat' is _____.
 b) In the story 'The Guest Who Ran Away' the farmer told his wife to prepare _____ for their guest.



DELHI PUBLIC SCHOOL

SAIL Township, Ranchi

SECOND SEMESTER (SESSION-2017-18)

CLASS: – III

DATE :- 10.03.2018

SUBJECT:- General Science

M.M. :- 80

1. Define these terms:

[2 x 4 = 8]

- a) Satellite b) Soil c) Condensation d) Constellation

2. Answer the following questions in short:

[2 x 4 = 8]

- a) What is water cycle?
b) How is rainwater collected in puddles harmful?
c) What makes up the Solar system?
d) Write a short note on Geoid.

3. Answer the following questions in detail:

[3 x 4 = 12]

- a) How does changing weather affect us?
b) Why is loamy soil best for growing crops?
c) How does light help us to see?
d) How is the atmosphere important to us?

4. Give reasons:

[1.5 +2.5 = 4]

- a) The earth is round but it appears flat.
b) Noon is the hottest part of the day while morning and evening are cooler.

5. Differentiate:

[2 + 3 = 5]

- a) Air and Water
b) Rotation and Revolution.

6. Write one complete sentence for the following questions:

[1 x 5 = 5]

- a) Who was the first man to land on the Moon?
b) Which are the hottest months in India?
c) Which planet has life on it?
d) Write any one use of soil.
e) What is the basic determiner of weather at a place?

7. Name them:

[1 x 8 = 8]

- a) The bouncing off , of light : _____
b) Slow moving air : _____
c) The medium in which sound travels the fastest: _____
d) The protection of top soil from erosion : _____
e) The gas we breathe out : _____
f) The elliptical path on which planets move around the sun : _____
g) Big pits on the moon's surface : _____
h) The star nearest to the Earth : _____

P.T.O.

8. Fill in the blanks:**[1 x 8 = 8]**

- a) Sound is produced by _____ of objects.
- b) Full moon is also known as _____.
- c) Air with smoke and harmful gases is called _____ air.
- d) Large collection of very tiny droplets of water, up in the sky are called _____.
- e) An imaginary central line which passes through an object is called _____.
- f) Water has fixed _____.
- g) Three main layers of soil on the earth are _____, _____ and bedrock.

9. Write 'True' or 'False' for the following sentences:**[0.5 x 8 = 4]**

- a) We can see an object in the absence of light. _____
- b) Another name of autumn is fall. _____
- c) Clayey soil can not hold much water. _____
- d) The process in which liquid changes to its vapour, on heating is called condensation. _____
- e) In winter we wear cotton clothes. _____
- f) Jupiter is the biggest planet. _____
- g) The Sun with its family of eight planets together is called solar system. _____
- h) Water changes to ice on heating. _____

10. Complete the series:**[1 x 6 = 6]**

- a) Natural light : _____ :: Artificial light : lamp
- b) Ringed planet : _____ :: Smallest planet : Mercury
- c) Unpleasant sound : noise :: Pleasant sound : _____
- d) _____ : Kulfis :: Winter : tea
- e) Sandy soil : cactus :: _____ : rice
- f) Artificial satellite : Aryabhata :: Natural satellite : _____

11. Match the following:**[0.5 x 8 = 4]****Column – A**

- a) Translucent
- b) Gaseous state of water
- c) Makes the top soil fertile
- d) Heavenly body
- e) Winter sleep
- f) Opaque
- g) Bihu

Column – B

- i) Shadow
- ii) Hibernation
- iii) Steam
- iv) Wax paper
- v) Planet
- vi) Spring
- vii) Humus

12. Draw and label the given diagrams:**[4 x 2 = 8]**

- a) Phases of the Moon.
- b) Any two artificial sources of light



DELHI PUBLIC SCHOOL

SAIL Township, Ranchi

SECOND SEMESTER (SESSION-2017-18)

SUBJECT: General Knowledge

DATE :- 16.02.2018

CLASS: – III **Sec:-** _____

M.O. :- _____

Roll no.:- _____

F. M. :- 50

NAME:- _____

1. Choose the words given in the box to fill in the blanks:

[1 x 10 = 10]

Rakesh Sharma, lime stone, Varanasi, nebula, Sir Tim Berners – Lee,
Jungle Book, Andy Murray, Mineralogy, copper, seven.

- a) A heptagon has _____ sides.
- b) _____ was the first Indian to go into space.
- c) The development of the World Wide Web (WWW) was started by _____ and his colleague.
- d) Chalk is a type of _____.
- e) Electrical wires are commonly made of this metal - _____
- f) In 2016, _____ won the Wimbledon Men’s Singles title.
- g) _____ is known for its many ghats.
- h) The study of minerals is called _____
- i) A _____ is a huge cloud of gas and dust in space.
- j) ‘The jungle boy who defeats Shere Khan with the help of Bagheera and Baloo’ - is the theme of the famous movie _____.

2. Name them:

[1 x 9 = 9]

- a) A drawing scribbled or scratched on a wall is: _____
- b) The hottest planet of the Solar system: _____
- c) The Earth and the Sun belong to this galaxy: _____
- d) The hardest natural substance found on the Earth: _____
- e) The first human being to walk on the Moon: _____
- f) FIFA World Cup is associated with this game: _____
- g) The number written in Roman numerals as X is: _____
- h) The cute symbols showing various emotions: _____
- i) The state which was a part of Andhra Pradesh before 2014 : _____

3. Write ‘True’ or ‘False’:

[1 x 5 = 5]

- a) Shanti stupa is located in Leh. _____
- b) The remains of Nalanda is in Punjab. _____
- c) Maqbool Fida Hussain was also known as the ‘Picasso of India’. _____

P.T.O.

- d) The purpose of the shortcut **Ctrl + s** is to save a document. _____
- e) Gold is the most commonly found metal used to make steel. _____

4. Write the full form of these short terms: [2 x 3 = 6]

- a) UN :- _____
- b) p.m. :- _____
- c) IST :- _____

5. Match the following: [1 x 10 = 10]

- | | |
|-------------------------|----------------------|
| i) Mural | a) Leonardo da Vinci |
| ii) Mona Lisa | b) Silver |
| iii) Davis Cup | c) USA |
| iv) Subhas Chandra Bose | d) a wall painting |
| v) As wise as | e) Saptarishi |
| vi) Guernica | f) 'Dilli Chalo' |
| vii) Michael Phelps | g) Cricket |
| viii) Coins | h) Pablo Picasso |
| ix) The Ranji Trophy | i) Lawn tennis |
| x) Ursa Major | j) an owl |

6. Answer the following questions in one word: [1 x 5 = 5]

a) Who has won the title of 'Miss World 2017'? **Ans.-** _____

b) Who is appointed as 'Chef de Mission' for 23rd Winter Olympic Games?

Ans.- _____

c) Who has been appointed as the chairperson of SBI ? **Ans.-** _____

d) Name India's first satellite dedicated for astronomy research.

Ans.- _____

e) Who is the Chief Minister of Gujrat? **Ans.-** _____

7. Tick the correct answer: [1 x 3 = 3]

a) A football team usually has _____ playing players.

- i) seven ii) eleven iii) sixteen iv) five

b) Hockey is the National Game of which country?

- i) Srilanka ii) Japan iii) India iv) Nepal

c) Who is known as 'Udan Pari' in India?

- i) Kamaljit Singh ii) P.T. Usha iii) K. Malleshwari iv) P.V.Sindhu

8. Match the following: [1 x 2 = 2]

- | | |
|--------------|---------------------|
| a) Football | i) Milkha Singh |
| b) Athletics | ii) Messi |
| c) Badminton | iii) Deepika Kumari |
| d) Archery | iv) P.V. Sindhu |



DELHI PUBLIC SCHOOL

SAIL Township, Ranchi

SECOND SEMESTER (SESSION-2017-18)

SUBJECT: Computer

DATE :- 21.02.2018

CLASS: – III Sec:- _____

M.O. :- _____

Roll no.:- _____

F. M. :- 30

NAME:- _____

1. Choose the correct option: **[0.5 x 5 = 2.5]**

- i) Which command is used to erase all the commands from the output / command – Recall list Box?
 - a) ST
 - b) CS
 - c) CT
 - d) HT
- ii) Which tool contains a set of pre designed stickers ?
 - a) Shape
 - b) Magic
 - c) Text
 - d) Stamp
- iii) The primitive which do not need number of steps?
 - a) FD
 - b) CT
 - c) BK
 - d) RT
- iv) By typing which sign, you can move the turtle back (without using BK command)
 - a) +
 - b) -
 - c) *
 - d) /
- v) Which bar is located on the upper side of the Tux Paint Screen.
 - a) Menu Bar
 - b) Tool Bar
 - c) Selector
 - d) Title Bar

2. Fill in the blanks: **[0.5 x 5 = 2.5]**

- a) Text can be erased from the screen by using _____ primitive.
- b) In Tux Paint, thickness of the line can be selected from _____.
- c) The blank area of Tux Paint which acts like a paper is said as _____.
- d) The _____ primitive is used to call the turtle to its beginning place.
- e) Image can be inserted in the canvas with the help of _____ tool.

3. Write the commands for the following: **[0.5 x 5 = 2.5]**

- a) To move the turtle 50 steps Back _____
- b) To clear the graphic screen _____
- c) To move the turtle 60 steps ahead _____
- d) To turn the turtle by 25 turns towards left _____
- e) To turn the turtle towards right by 180 turns _____

4. Differentiate between :

[2 x 2 = 4]

a) HT and ST

<u>HT</u>	<u>ST</u>

b) Line tool and Text tool

<u>Line tool</u>	<u>Text tool</u>

5. Use repeat command to draw the following:

[2 x 1 = 2]

a) Square [four sides]

b) Circle [circular]

6. Write down the names of the tools:

[0.5 x 5 = 2.5]

a) To type any text

- _____

b) A box that contains various colours

- _____

c) To undo the last drawing action

- _____

d) To draw a circle

- _____

e) A box that contains various tools for drawing

- _____

7. Write down the purpose of the following LOGO primitive:

[2 x 2 = 4]

a) PU - _____

b) PE - _____

8. Answer the following questions:

[2 x 3 = 6]

a) What is Tux Paint?

Ans.- _____

b) Which two things should be mentioned to execute repeat?

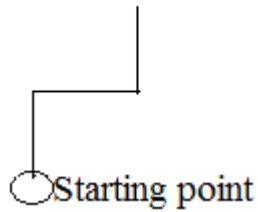
Ans.- _____

c) What is turtle ?

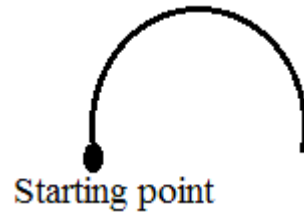
Ans.- _____

9. Write down the LOGO command to draw the following figures: [1.5 x 2 = 3]

a)



b)



10. Arrange the correct order of primitive, in (i) to (iv) that will draw alphabet ' L ': [1]

i) FD 100

ii) PU FD 200

iii) RT 90

iv) PU BK 200



DELHI PUBLIC SCHOOL

SAIL Township, Ranchi

SECOND SEMESTER (SESSION-2018-19)

CLASS: – III

DATE :- 25.02.2019

SUBJECT:- HINDI

M.M. :- 80

खण्ड –क

1. निम्नलिखित गद्यांश को पढ़कर दिए गए प्रश्नों के उत्तर लिखिए – [1 x 5 = 5]
 पशु दो तरह के होते हैं— जंगली पशु और पालतू पशु। जो पशु जंगल में रहते हैं, उन्हें जंगली पशु कहते हैं। जिन पशुओं को हम घर में पालते हैं, उन्हें पालतू पशु कहते हैं। शेर, बाघ, चीता, लोमड़ी, हिरण, सियार, गीदड़ आदि जंगली पशु हैं। कुत्ता, बिल्ली, बकरी, गाय, भैंस आदि पालतू पशु हैं। हाथी भी एक जंगली पशु है पर इसे पालतू भी बनाया जा सकता है। हम घरों में पशु इसलिए पालते हैं, क्योंकि पालतू पशु हमारे कई काम आते हैं। बिल्ली चूहों को पकड़ती है। कुत्ता घर की रखवाली करता है। गाय, भैंस और बकरी दूध देती है। बैल खेतों को जोतता है। गधे और घोड़े सवारी तथा बोझा ढोने के काम आते हैं। भेड़ों से हमें ऊन मिलती है। अतः पालतू पशु हमारे लिए उपयोगी होने के साथ-साथ हमारे मित्र भी होते हैं।

प्रश्न:

- क) पालतू पशु किसे कहते हैं ?
 ख) चार जंगली पशुओं के नाम लिखें।
 ग) कुत्ता क्या काम करता है ?
 घ) गधे और घोड़े का उपयोग किस काम में किया जाता है ?
 ङ) गाय, भैंस और बकरी से हमें क्या मिलता है ?

खण्ड –ख

2. नीचे दिए वाक्यों में सही शब्द भर कर वाक्य पूरा करें – [1 x 4 = 4]
 क) जिस शब्द की विशेषता बताई जाए उसे कहते हैं।
 ख) एक या का बोध कराने वाले शब्द वचन कहलाते हैं।
 ग) जो शब्द संज्ञा या की विशेषता बताते हैं, उन्हें विशेषण कहते हैं।
 घ) पत्र के प्रकार होते हैं।

3. क्रिया किसे कहते हैं ? उदाहरण सहित लिखें। [2 x 1 = 2]
 4. वचन के कितने भेद हैं ? उनके नाम लिखें। [2 x 1 = 2]
 5. अपने आप होने वाली दो क्रियाएँ लिखें। [2 x 1 = 2]
 6. निर्देशानुसार प्रश्नों के उत्तर लिखें – [2 x 5 = 10]

- i) दिए गए शब्दों के दो-दो पर्यायवाची शब्द लिखिए –
 क) अग्नि ख) मित्र
 ii) वचन बदल कर लिखें –
 क) दवाई ख) संतरा
 iii) मुहावरों के अर्थ लिखें –
 क) आँखे दिखाना ख) खरी-खोटी सुनाना
 iv) दिए गए वाक्यों में सही स्थान पर विराम चिह्न का प्रयोग वाक्यों को लिखकर करें –
 क) बगीचे में सुंदर-सुंदर फूल खिले हैं
 ख) पिताजी बाज़ार से सब्जियाँ फल मिठाई और दूध खरीद कर लाए हैं
 v) निम्न शब्दों के लिए उचित विशेषण शब्द लगाएँ –
 क) सड़क ख) वृक्ष

खण्ड –ग

7. दिए गए प्रश्नों के उत्तर लिखिए – [2 x 4 = 8]
 i) खरगोश ने शेर से क्या कहा था ?
 ii) सूरज न निकले तो क्या होगा ?
 iii) स्वर्णलता घमंडी क्यों हो गई ?
 iv) सब जानवर शेर के दरबार में क्यों गए थे ?
 8. दिए गए प्रश्नों के एक शब्द में उत्तर लिखिए – [1 x 6 = 6]
 i) दुनिया के कुल कितने आश्चर्य हैं ?
 ii) स्वर्णलता के सपने में कौन आई ?
 iii) प्रताप किस नाम से प्रसिद्ध हुए ?
 iv) आदमी ने क्या लपेट रखा था ?
 v) सभा के सभापति किसे बनाया गया ?
 vi) जंगल का राजा कौन था ?

P.T.O.

9. एक वाक्य में उत्तर लिखिए – (उत्तर पूरे वाक्य में लिखें) [1 x 6 = 6]

- i) खरगोश और शेर में कौन बलवान था ?
- ii) तालाब के आस-पास कौन-कौन रहते थे ?
- iii) कौन बहस कर रहे थे ?
- iv) मेवाड़ के राजा कौन थे ?
- v) स्वर्णलता किसकी बेटी थी ?
- vi) ताजमहल किसने बनवाया ?

10. रिक्त स्थान भरें –

[1 x 6 = 6]

- i) प्रताप का प्रिय साथी था।
- ii) ताजमहल की याद में बनवाया गया।
- iii) स्वर्णलता को चीजें इकट्ठी करने का शौक था।
- iv) अंत में जीत की हुई।
- v) जंगल से कुछ दूर थे।
- vi) खरगोश शेर को के पास ले गया था।

11. दिए गए शब्दों के अर्थ लिखें –

[1 x 4 = 4]

- क) सभापति ख) आँधी ग) प्रसिद्ध घ) इकलौती

12. दिए गए शब्दों से वाक्य बनाइए –

[1 x 4 = 4]

- क) पत्र ख) प्रतिज्ञा ग) अस्तबल घ) दुनिया

13. लिखिए, किसने – किससे कहा ?

[1 x 4 = 4]

- i) हम आज यहाँ किसलिए जमा हुए हैं, ये आप सब जानते हैं।
- ii) नहीं, ऐसी बात नहीं है। हम दोनों अपना-अपना काम करते हैं।
- iii) मैं समझ गई। अब मैं कभी पेड़-पौधों और पशु-पक्षियों को तंग नहीं करूँगी।
- iv) न जाने आदमी को हमसे क्या दुश्मनी है।

14. नीचे दिए गए वाक्यों को पढ़कर हाँ या नहीं में उत्तर लिखिए –

[0.5 x 6 = 3]

- i) दरबार नदी के किनारे लगा था।
- ii) उदय सिंह के चार बेटे थे।
- iii) चेतक खुले मैदानों में दौड़ लगाता था।
- iv) खरगोश जल्दी ही शेर के पास पहुँच गया।
- v) अपनी जान पर खेलकर चेतक ने अपने स्वामी की रक्षा की।
- vi) प्रताप के ननिहाल जाने पर चेतक बहुत खुश था।

15. सही मिलान करें – (वाक्य के साथ उत्तर लिखें)

[0.5 x 4 = 2]

- i) हाथ-मुँह धोकर हमने : बहुत प्यार करते थे।
- ii) दुनिया भर से लोग इसे : बेगम की कब्रें हैं।
- iii) बादशाह अपनी बेगम से : देखने भारत आते हैं।
- iv) यहाँ बादशाह और उनकी : जलपान किया।

16. मूल्यपरक प्रश्न–

[2 x 1 = 2]

आप अपने आस-पास किसी भी व्यक्ति को पेड़ काटते हुए देखेंगे, तो आप उन्हें क्या सलाह देंगे ?

खण्ड –घ

17. किसी एक विषय पर पत्र लिखें –

[5 x 1 = 5]

चित्रकला प्रतियोगिता में प्रथम आने पर अपने मित्र को बधाई पत्र लिखें।
अथवा
जन्मदिन के उपहार के लिए दादाजी को धन्यवाद पत्र लिखें।

18. किसी एक विषय पर अनुच्छेद लिखें –

[5 x 1 = 5]

वसंत ऋतु, पेड़-पौधों का महत्व, मेरा प्रिय मित्र



DELHI PUBLIC SCHOOL

SAIL Township, Ranchi

SECOND SEMESTER (SESSION-2018-19)

CLASS: – III

SUBJECT:-MATHS

DATE :- 27.02.2019

M.M. :- 80

Section – A

1. Fill in the blanks:

[1 x 10 = 10]

- When the numerator of a fraction is smaller than its denominator, it is called a _____ fraction.
- There are _____ seconds in an hour.
- There are _____ days in 17 weeks.
- Six ₹100 notes and one ₹ 50 note is equal to ₹ _____.
- To make ₹ 2, we need _____ 50 paise coins.
- Double of 50 cm is _____.
- 5 hours = _____ minutes.
- If ☆ represent 6 students, ☆ ☆ ☆ represent _____ students.
- The numerator in the fraction $\frac{9}{12}$ is _____.
- There are _____ one third in a whole.

2. Write True or False:

[0.5 x 10 = 5]

- The people who collect and study about currency are called Numismatist.
- 2 halves make one whole.
- Pictorial representation of data is called bar graph.
- 1600 is a leap year.
- When the numerator is 'zero' the fraction is equal to zero.
- ₹ 1 is equal to 1000 paise.
- Bigger lengths are measured in litre.
- A leap year has 366 days.
- Timings from 12 midnight to 12 noon are noted as P.M.
- 100 centimetres makes 1 metre.

3. Match the following:

[1 x 7 = 7]

- | | |
|---------------------|---------------|
| a) 7 weeks | i) 31 days |
| b) 5 kilogram | ii) 1000 gram |
| c) August | iii) 49 days |
| d) 1 kilogram | iv) litre |
| e) September | v) metre |
| f) Unit of length | vi) 5000 gram |
| g) Unit of capacity | vii) 30 days |

Section – B

4. Solve the following questions as per the given instruction :

[2 x 12 = 24]

- Subtract ₹ 39.80 from ₹ 98.
- Divide ₹ 64.80 by 8 .
- Find the sum of 47kg 590g and 26 kg 748 g.
- Convert 7364ml into litre and millilitre.
- Convert 3 years 9 months into months.
- Convert ₹ 98.05 into paise.
- Draw Tally marks to represent the following numbers:
 - 16
 - 9
- Complete the following sequence :
 - 81, 72, 63, 54, _____
 - A9Z, B8Y, C7X, _____
- Arrange the following in descending order:
 $\frac{1}{15}$, $\frac{9}{15}$, $\frac{7}{15}$, $\frac{6}{15}$, $\frac{15}{15}$

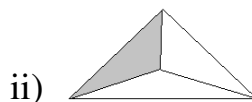
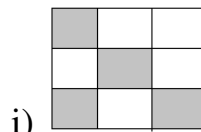
P.T.O.

j) Find $i) \frac{1}{9}$ of 81

$ii)$ one-fifth of 20 balls

k) I am at the eighty-seventh position in the sequence of number 4,8,12,16, Who am I?

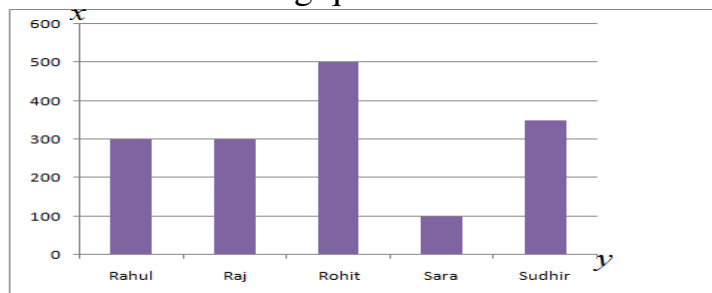
l) What fraction of each figure is shaded below?



5. Solve the following:

[3 x 6 = 18]

- a) A flute costs ₹ 9.25. Find the cost of 21 flutes.
- b) I bought 15kg 500g of mangoes and 7kg 80g of oranges. What is the total weight of the fruits I bought?
- c) How much longer is the rope of length 20m 65cm than one of length 13m 15cm?
- d) Sharmila has a juice can of 2 litre. She wants to divide it equally among her 4 friends. How much juice will each friend get?
- e) Sonu gets ₹ 500 every month. He saves them in his piggy bank. After 5 months how much money will he save?
- f) The bar graph given below shows monthly pocket money of different children. according to the given data answer the following questions :



- i) Who gets the maximum pocket money?
- ii) Which two children are getting the same amount as their pocket money?
- iii) Who is getting the least pocket money?

6. Solve:

[4 x 4 = 16]

- a) Draw a pictograph to represent the number of books issued by the school library during a week.
Monday- 90, Tuesday –40, Wednesday –50, Thursday –30, Friday –50, Saturday –20
- b) A airline allows a maximum weight of 45kg that a traveller can carry. A passenger has 3 suitcases weighing 12kg, 19kg 750 g and 8 kg. How much extra weight is the passenger carrying?
- c) Zafar bought sugar for ₹ 185.50, tea for ₹ 25 and a packet of biscuits for ₹ 18.50. He gave the shopkeeper a ₹ 500 note. How much balance did the shopkeeper return?
- d) Some animals are taking part in a competition. Each animal has been given a bowl of fish to eat. The competition started at 10:00 a.m. Observe the time when each animal finishes its bowl of fish and answer the following questions:

Name of animal	Time when each animal finishes its bowl of fish
Fox	2:00 P.M.
Jackal	1:00 P.M.
Bear	12:30 P.M.
Crane	4:00 P.M.

- i) Who won the competition?
- ii) Who came last?
- iii) Who was slower : Jackal or Fox?
- iv) At what time crane has finished?



DELHI PUBLIC SCHOOL

SAIL Township, Ranchi

SECOND SEMESTER (SESSION-2018-19)

CLASS: – III

DATE :- 01.03.2019

SUBJECT:-Social Science

M.M. :- 80

1. **Define:** [1 x 8 = 8]
- | | | | |
|----------|----------------|----------------|------------|
| a) raft | b) currency | c) traditional | d) gopuram |
| e) trams | f) fertilizers | g) customs | h) metro |
2. **Give answer in one sentence:** [1 x 12 = 12]
- Name the Samadhi of Mahatma Gandhi.
 - Name the most famous snacks of Mumbai.
 - Which is the main railway station of Kolkata?
 - When does it rain in Chennai?
 - Who has composed our National Anthem?
 - Name the earliest weapon used by early man.
 - With which states does New Delhi share its borders?
 - What is a port?
 - Name the main food of Bengalis.
 - Name the harvest festival of Tamil Nadu.
 - What does the saffron colour in the Indian flag stands for?
 - Name the animals tamed by early man for carrying goods.
3. **Short answer questions:** [1.5 x 6 = 9]
- Why did early man make sharp tools?
 - Where do you find National Emblem?
 - Name the wildlife parks in Chennai.
 - Name three tourist places of Kolkata.
 - Where is Mumbai located?
 - Where is the Republic Day parade held in New Delhi and who hoists the flag?
4. **Give answer in detail:** [3 x 7 = 21]
- Describe the climate of New Delhi.
 - What are the things produced in the factories of Mumbai and which is the most famous festival of Mumbai?
 - Write a few lines about the people of Kolkata.
 - Name the famous tourist places of Chennai.
 - Write any three rules to be followed when we hoist our National Flag.
 - How did early man make the first wheel?
 - What is the importance of India Gate?
5. **Name them:** [1 x 10 = 10]
- The biggest mosque in India: _____
 - Headquarter of Central Railways : _____
 - Caves in an island near Mumbai : _____
 - Earlier Kolkata was known as : _____
 - This place is known for its Banyan Tree in Kolkata : _____
 - The main food of the people of Chennai : _____
 - Famous music of Tamil Nadu : _____
 - The number of spokes in the Chakra : _____
 - Our National Anthem is the symbol of : _____
 - To find out something new : _____

P.T.O.

- 6. Fill in the blanks:** [0.5 x 10 = 5]
- The first metal to be discovered was _____.
 - Meat cooked on fire was _____ and _____.
 - Early man made _____ to carry loads by river.
 - The words _____ are written at the bottom of the wheel on the National Emblem.
 - _____ is the longest beach in India.
 - _____ is the first city in India to have metro train.
 - The government of Maharashtra functions from _____.
 - _____ is located to the west of Rajpath and _____ to the east of Rajpath.
- 7. True or False:** [0.5 x 10 = 5]
- New Delhi lies on the bank of river Ganga.
 - Mumbai lies on the coast of Arabian Sea.
 - Srikhand is a famous sweet of Kolkata.
 - Chennai's climate is moderate.
 - Earlier Chennai was called Madras.
 - “Saare Jahan Se Achha” is our National Song.
 - Our National Bird is known for its beauty and grace.
 - Early man invented farming.
 - Early man painted picture of hunting scenes on the walls.
 - Tools and weapons made up of metals were stronger.
- 8. Match the column: (Write the answers in front of Column – A)** [0.5 x 10 = 5]
- | <u>Column – A</u> | <u>Column – B</u> |
|-------------------------|-------------------------|
| a) dogs | Mughal Garden |
| b) plough | Missionaries of Charity |
| c) green | Shah Jahan |
| d) Bharatnatyam | Chennai |
| e) Mother Teresa | Bollywood |
| f) Durga Puja | Prosperity |
| g) Crude oil | kerosene |
| h) Indian film industry | to turn over soil |
| i) Red Fort | Kolkata |
| j) Rashtrapathi Bhawan | hunting |
- 9. Guess who am I?** [0.5 x 6 = 3]
- The busiest airport of India.
 - India's biggest mosque is built by me.
 - Looks like queen's necklace from Malabar Hills.
 - Crude oil is taken out from here near Mumbai.
 - City of Joy.
 - The National Flower of India
- 10. Why should we respect our soldiers?** [1]
- 11. Draw a spear.** [1]



DELHI PUBLIC SCHOOL

SAIL Township, Ranchi

SECOND SEMESTER (SESSION-2018-19)

CLASS: – III

DATE :- 05.03.2019

SUBJECT:- ENGLISH

M.M. :- 80

Section – A (Reading -10 marks)

1. Read the passage carefully and answer the questions that follow: [5]

Para – 1 A poor farmer used to take his cart to a neighbouring town everyday. When the farmer was driving his cart one day, it got stuck in the mud. Its wheels sank deep, but he pushed the oxen to go on. They tried their best to free the cart, but in vain. The farmer himself would not leave his seat. He went on asking the people to help him, but nobody helped him.

Para – 2 At last, ‘Hercules’, ‘the god of strength appeared’. The farmer requested him to help him. God said, “How can you expect others to help you when you yourself do not come down from your cart and try?”

A. Answer the following questions:

[1 x 2 = 2]

- a) Where did the farmer go everyday?
- b) What happened one day?

B. Complete the sentences:

[0.5 x 4 = 2]

- a) The _____ himself would not leave his _____. (Para – 1)
- b) At last, _____ the god of _____ appeared. (Para – 2)

C. Write the antonyms of:

[0.5 x 2 = 1]

- a) best - _____
- b) poor - _____

2. Read the poem given below and answer the questions that follow: [5]

(Stanza -1) *I love the earth
And all there is to do.
I love the highest mountains,
And the pretty sky of blue.*

(Stanza – 2) *I love the grassy fields,
Where I like to run and play.
I love the big, fat raindrops
And every sunny day.*

(Stanza – 3) *I love the beautiful daisies
And the tallest redwood trees.
I love watching clouds float b,
And waves bouncing on the seas.*

(Stanza – 4) *Our Earth is so beautiful,
I hope the beauty never goes away
Everyone needs to take care of the earth.
Each and every single day.*

- a) Where does the poet like to run and play? (Stanza – 2) [1]
- b) Write two pairs of rhyming words from the poem. [2]
- c) Fill in the blanks: [2]
 - i) Our Earth is so _____. (Stanza – 4)
 - ii) Everyone needs to take care of the _____. (Stanza – 4)

Section – B (Writing – 10 marks)

3. Paragraph Writing (Write any one): [5]

- a) My Favourite Festival OR b) Picnic OR c) My Country India

4. Notice writing (Write any one): [5]

- a) You are Reena / Raj of class III-D. you have lost your story book in the school corridor. Draft a notice for the same. OR
- b) You are Reena / Raj of class III – B. You have found a tiffin box in the school playground. Write a notice for the same.

Section – C (Grammar – 30 marks)

5. Do as directed: [1 x 8 = 8]

- a) Mother _____ food for us. (cook – use Simple Present Tense)
- b) I _____ the glass bowl by mistake. (drop – use Simple Past Tense)
- c) Anita read well. (Change the sentence into Future Tense)
- d) The artist _____ a picture. (paint – use Present Continuous Tense)
- e)The man _____ off to sleep. (go – use Past Tense)
- f) The dog _____ loudly. (bark – use Simple Present Tense)
- g) I _____ after granny. (look – use Future Tense)
- h) Stars _____ in the sky. (twinkle – use Present Continuous Tense)

P.T.O.

6. **Fill in the blanks with a, an or the:** [1 x 6 = 6]
- a) He has _____ glass of milk and _____ egg for the breakfast.
 - b) The gardener found _____ nest in the tree.
 - c) This is _____ dirtiest road in this city.
 - d) Rajdhani Express is late by _____ hour.
 - e) _____ Ganga is a river in India.

7. **Fill in the blanks with can, cannot, should, should not :** [1 x 5 = 5]
- a) We _____ reach the school on time.
 - b) You _____ lie to your parents.
 - c) You _____ count the money.
 - d) He _____ jump. His legs hurt so much.
 - e) Penguins _____ fly.

8. **Fill in the blanks with suitable prepositions:** [1 x 6 = 6]
- a) Don't stand _____ the chair. (on / in)
 - b) She lives _____ this apartment. (in / at)
 - c) The cat crawled _____ the tiny tent. (into / by)
 - d) The child is standing _____ the gate. (on / near)
 - e) The sun was shining _____ the hills. (behind / on)
 - f) The meeting starts _____ three. (at / into)

9. **Join the sentences using suitable conjunctions and rewrite them:** [1 x 5 = 5]
- a) I can sing. I cannot dance.
 - b) I was absent. I was unwell.
 - c) I saw a beautiful dress. I bought it.
 - d) He is clever. He is very naughty.
 - e) I like English. I like science also.

Section – D (Literature – 30 marks)

10. **Answer in detail:** [2.5 x 4 = 10]
- a) How does the speaker feel about the bat? [*'The Bat'*]
 - b) Was the policeman right to say "This is not the city for you". Explain. [*'The Dream'*]
 - c) Why was the old king unhappy? [*'The Battle with the Monster'*]
 - d) Why does the farmer leave his house after giving his wife the chickens? [*'The Guest who Ran Away'*]

11. **Answer the following question with reference to the context:** [2 x 5 = 10]
- a) "This is a dangerous task." [*'The Battle with the Monster'*]
 - i) Who says this? To whom?
 - ii) What question has just been asked?
 - b) "Can I have one.?" [*'The Guest who Ran Away'*]
 - i) Who says this? To whom?
 - ii) What is he asking for?
 - c) i) Who says, "what's that creature that rattles the roof ?" [*'It's Only The Storm'*]
ii) Who says, "Hush, its only the storm"? [*'It's Only The Storm'*]
 - d) "Of course I shall try." [*'The Battle with the Monster'*]
 - i) Who says this? To whom?
 - ii) What is the speaker going to try?
 - e) Who said this ? To whom ?
 - i) "There is nothing to keep me here." [*'The Dream'*]
 - ii) "This would make me very happy." [*'Mr. Tortoise's Big Idea'*]

12. **Give the meanings of the following words:** [1 x 5 = 5]
- a) flashing b) merchant c) terrifying d) fortune e) warrior

13. **Make sentences with the following words:** [1 x 3 = 3]
- a) arrow b) dream c) forest

14. **Fill in the blanks:** [1 x 2 = 2]
- a) The name of the Poet of the poem 'It's only the storm' is _____.
 - b) In the story 'The Guest Who Ran Away' the farmer gave his wife _____ chickens to cook.



DELHI PUBLIC SCHOOL

SAIL Township, Ranchi

SECOND SEMESTER (SESSION-2018-19)

CLASS: – III

DATE :- 07.03.2019

SUBJECT:- Science

M.M. :- 80

1. **Define these terms:** [2 x 4 = 8]
a) Shadow b) Weather c) Planet d) Axis
2. **Answer the following questions (in short):** [2 x 5 = 10]
a) Why is the sun important to us?
b) What features make loamy soil good for plant growth?
c) What are the elements that cause weather changes?
d) What is space?
e) What is air made up of?
3. **Answer the following questions (in detail):** [3 x 5 = 15]
a) How does rain affect our lives?
b) How is the atmosphere important to us?
c) Why is noon the hottest part of the day while morning and evening cooler?
d) List three uses of soil.
e) How is air different from water?
4. **Give reasons:** [2 x 2 = 4]
a) Earth appears flat.
b) Sandy soil not good for plant growth.
5. **Distinguish between:** [3 + 2 = 5]
a) Rotation and revolution
b) Stars and constellation
6. **Fill in the blanks:** [1 x 8 = 8]
a) _____ is the natural satellite of the Earth.
b) Planets revolve around the sun in a fixed _____.
c) The change of water into ice on cooling is called _____.
d) A thick layer of gases surrounding the earth is called _____.
e) Some animals go into long winter sleep called _____.
f) Protecting the soil from soil erosion is called _____.
g) The huge, organised collection of stars is called _____.
h) A shadow is always formed on the _____ side of the light source.
7. **Name them:** [1 x 8 = 8]
a) The biggest planet: _____
b) Rainy season is also called : _____
c) Holes on the surface of the Moon : _____
d) The first man who stepped on the surface of Moon: _____
e) Two unpleasant sounds : _____ and _____
f) Two layers of atmosphere : _____ and _____

P.T.O.

8. Write 'True' or 'False': (Do not copy the questions)

[0.5 x 8 = 4]

- a) Earth spins from east to west.
- b) Days are short and nights are long in summer.
- c) Sound travels slowest through gases.
- d) Water vapour changes into water on cooling.
- e) Plants take in oxygen during photosynthesis.
- f) Loamy soil is very smooth to touch.
- g) The surface of the Moon is made of rocks and dust.
- h) June to August is the autumn season.

9. Match the column:

[0.5 x 8 = 4]

(Copy down column A and choose the correct answer from Column B and write in front of it)

Column – A

- a) Spacecraft
- b) Sandy soil
- c) Abundant gas
- d) Wood
- e) Holi
- f) Whirring
- g) Geoids
- h) Stars

Column – B

- * nitrogen
- * fan
- * spring season
- * shape of the earth
- * opaque object
- * Apollo -11
- * seashore
- * celestial body

10. Complete the series:

[1 x 6 = 6]

- | | | | |
|----------------|--------------------------|-----------------------|------------------------|
| a) Home planet | : earth | :: ringed planet | : _____ |
| b) _____ | : buzzing | :: chirping | : bird |
| c) New moon | : _____ | :: full moon | : Purnima |
| d) _____ | : wax paper | :: transparent object | : clear water |
| e) summer | : April to June | :: Autumn | : _____ |
| f) _____ | : gaseous state of water | :: ice | : solid state of water |

11. Draw and label the given diagrams:

[3 + 5 = 8]

- a) Two artificial sources of light
- b) soil profile



DELHI PUBLIC SCHOOL

SAIL Township, Ranchi

SECOND SEMESTER (SESSION-2018-19)

SUBJECT: General Knowledge

DATE :- 18.02.2019

CLASS: – III

Sec:- _____

M.O. :- _____

Roll no.:- _____

F. M. :- 50

NAME:- _____

I. Answer the following questions: [1 x 10 = 10]

1) The organ through which food passes from mouth to stomach:

Ans: _____

2) Which Indian Artist is known as 'Picasso of India'?

Ans: _____

3) Who is the author of the book 'The Adventures of Sherlock Holmes'?

Ans: _____

4) In which city is the Wimbledon Games held?

Ans: _____

5) Which is the National Game of Bangladesh?

Ans: _____

6) Who was the first Female President of India?

Ans: _____

7) Which is the closest star to the Sun?

Ans: _____

8) Which is the hottest planet of the solar system?

Ans: _____

9) Which is the hardest natural substance found on earth?

Ans: _____

10) Which is the smallest and closest planet to the Sun?

Ans: _____

II. Fill in the blanks: [1 x 10 = 10]

1) Who was the first man to walk on the Moon : _____

2) Who was the first woman to travel in space: _____

3) 'Davis Cup' is related to which game? : _____

4) In which state 'Jim Corbett National Park' is situated: _____

5) The first ever newspaper published in India: _____

6) In which year Mark Zuckerberg founded Facebook: _____

7) The planet between Mars and Saturn : _____

8) 'Shanti Stupa' is situated in this city : _____

9) 'FIFA World Cup' is associated with this game: _____

10) Vasco da Gama died in this Indian city : _____

III. Write 'True' or 'False': [1 x 5 = 5]

1) Pumice stones are the bubbles of Volcanic lava. _____

2) Sir Tim Berners Lee has founded Facebook. _____

3) Ctrl + n is the shortcut key to create a new document. _____

4) Whats app launched in 2012. _____

5) The Taj Mahal is made of marble. _____

P.T.O.

IV. Match the following: [1 x 5 = 5]

- | | |
|-----------------------|----------------------|
| 1) Nalanda University | a) Leonardo da Vinci |
| 2) Yuri Gagarin | b) Rembrandt |
| 3) Dying Star | c) Russia |
| 4) the Night Watch | d) Bihar |
| 5) Mona Lisa | e) Supernova |

V. Unscramble the letters to name the following: [1 x 5 = 5]

- 1) Which Indian freedom fighter said the slogan 'Dilli Chalo'?
_____ (BHASHSU ARDNACH ESOB)
- 2) A book of maps is called : _____ (SALTA)
- 3) What is the name given to the blanket of air covering the Earth ?
_____ (EREHPSOMTA)
- 4) This is one of the oldest city of India and is known for its many ghats.
_____ (VAARASNI)
- 5) This town in Himachal Pradesh is the capital of the state. _____ (ALMSHI)

VI. Write the full form of these: [1 x 5 = 5]

- 1) ATM - _____
- 2) UNICEF- _____
- 3) IST - _____
- 4) WWF - _____
- 5) ASAP - _____

VII. Current Affairs: [1 x 5 = 5]

- 1) In which state the 'Statue of Unity' is situated? - _____
- 2) Who is the first female boxer of the world to win six Gold Medals in World Boxing Championship?
- _____
- 3) Which country has banned mobile phones in schools from September 2018?
- _____
- 4) What is India's first locomotive less train named as - _____
- 5) Who is the Chief Minister of Rajasthan? - _____

VIII. Choose the correct answer: [1 x 3 = 3]

- 1) How many players are there in a match of Kabaddi?
a) 12 b) 11 c) 16 d) 20
- 2) 'Duleep Trophy' is associated with which game?
a) Football b) Badminton c) Cricket d) Kho-Kho
- 3) What is the duration of a football match?
a) 45 min. b) 90 min c) 60 min d) 120 min

IX. Match the following: [0.5 x 4 = 2]

- | <u>Column – A</u> | <u>Column – B</u> |
|-------------------|-------------------------|
| 1) 100 mts. | a) Throwing event _____ |
| 2) Long Jump | b) Combine event _____ |
| 3) Shot Put | c) Track event _____ |
| 4) Heptathlon | d) Jumping event _____ |



DELHI PUBLIC SCHOOL

SAIL Township, Ranchi

SECOND SEMESTER (SESSION-2018-19)

SUBJECT: Computer

DATE :- 20.02.2019

CLASS: – III Sec:- _____

M.O. :- _____

Roll no.:- _____

F. M. :- 30

NAME:- _____

Q1) Choose the correct option :

[0.5 x 5 = 2.5]

- a) In MSW Logo ,commands are also known as _____.
 i) Primitives ii) Statement iii) Valued iv) Record
- b) Magic effects can be applied by:
 i) Magic Tool ii) Line Tool iii) Stamp Tool iv) Shape Tool
- c) The short form of Right primitive in LOGO is
 i) RT ii) RTP iii) RPT iv) RTS
- d) Which bar is located towards the right side of the Tux Paint Screen?
 i) Menu bar ii) Selector iii) Toolbar iv) Title bar
- e) Which command is used to close MSWLogo screen?
 i) Goodbye ii) Exit iii) Bye iv) Quit

Q2) Fill in the blanks:

[0.5 x 5 = 2.5]

- a) To draw a line, after PU you have to give the _____ command.
- b) Thickness of the line can be selected from _____.
- c) _____ is used to minimize or shrink the active screen into a small button of size.
- d) The drawing is made in the _____ in Tux Paint.
- e) The _____ primitive is used to call the turtle to its beginning place.

Q3) Write down the names of the following tools which is used :

[0.5 x 5 = 2.5]

- a) To insert an image or sticker _____
- b) To type the text _____
- c) A box that contains various colours _____
- d) To draw a circle _____
- e) To undo the last action _____

Q4) Write the commands for the following:

[0.5 x 5 = 2.5]

- a) To move the turtle 120 steps back _____
- b) To move the turtle 50 steps ahead _____
- c) To turn the turtle right by 90 turns _____
- d) To turn the turtle 15 turns left _____
- e) To clear the graphics screen _____

Q5) Answer in one word:

[1 x 6 = 6]

- a) Work area of LOGO _____
- b) Command that pushes the turtle up to move without making line. _____
- c) To move the turtle in anti-clockwise turning. _____
- d) Work area of Tux Paint _____
- e) Cursor of LOGO _____
- f) Uppermost bar of an application _____

Q6) Differentiate between :

[2 x 2 = 4]

- a) CS and CT


CS	CT


- b) Paint Tool and Line Tool


Paint Tool	Line Tool


Q7) Use Repeat command to draw the following figures:

[1 x 4 = 4]

a)  _____

b)  _____

c)  _____

d)  _____

Q8) Answer the following questions:

[2 x 3 = 6]

a) What do you mean by Drawing Canvas in Tux Paint ?

b) What is the format of REPEAT Primitive ?

c) What is Title bar?



DELHI PUBLIC SCHOOL

SAIL Township, Ranchi

SECOND SEMESTER (SESSION-2019 – 20)

CLASS: – III

DATE :- 28.02.2020

SUBJECT:- Social Science

M.M. :- 80

1. **Define:** [1.5 x 6 = 9]
- a) Port b) Museum c) Kolam
d) Zoological Park e) Spices f) Tableau
2. **Answer in detail:** [2.5 x 8 = 20]
- a) Write the names of important industries of Kolkata.
b) Write the names of tourist places in Visakhapatnam.
c) Write the names of famous waterfalls near Ranchi.
d) How is Republic Day celebrated in the capital of India?
e) How has life in villages improved now? Write any two points.
f) Write three road safety rules.
g) Who founded Jaipur? Why is it known as the pink city?
h) Why do we use spices? Write the name of three spices used by your mother in the kitchen.
3. **Answer in short:** [1.5 x 6 = 9]
- a) Why do people wear different types of clothes?
b) Name three great personalities whose birth anniversaries are celebrated as festivals.
c) Which city is situated on the banks of two lakes? Write the names of the lakes.
d) Who elects the member of the Gram Panchayat?
e) How do we choose a particular vehicle to travel?
f) Why do farmers in our country grow different types of crops?
4. **Answer in one sentence:** [1 x 10 = 10]
- a) When and where is the hornbill festival celebrated?
b) Name the twin cities of India.
c) Name the person whose statue has been built at Ranchi lake?
d) Name two popular handicrafts of Jaipur.
e) What is a phiran? In which state is it worn?
f) What should we do to reach the other side of the road safely?
g) Name the most common means of transport used in villages.
h) Write the earlier name of Vizag and Thiruvananthapuram.
i) Why do we celebrate national festivals?
j) Where is Chennai located?
5. **Name the following:** [1 x 10 = 10]
- a) Silicon valley of India _____.
b) City of temples _____.
c) Traditional music of Chennai _____.
d) A popular dance of Karnataka _____.
e) Pride of Hyderabad _____.
f) Popular festival of Maharashtra _____.
g) The busiest railway station in India _____.
h) A famous cricket ground of Kolkata _____.
i) We should avoid them in weddings and festivals. _____.
j) This river flows through your city _____.
6. **Fill in the blanks:** [1 x 5 = 5]

- a) The _____ hoists the national flag at the Red Fort in Delhi.
- b) Women in Assam wear _____.
- c) _____ is the free food given in gurudwaras.
- d) _____ is worn by girls during festivals in Chennai.
- e) _____ is a model or design used as a guide in needlework and other crafts.

7. Write 'True' or 'False' :

[0.5 x 10 = 5]

- a) Kolkata is situated on the banks of Hugli.
- b) Most people in Bengaluru speak Odia.
- c) In TamilNadu, the lungi is called Mundu..
- d) Houses build of mud and straw are Kuchha houses.
- e) Rice, Wheat and Bajra are foodgrains.
- f) Onam is the main festival celebrated in Guwahati.
- g) Another bridge built on the river Hugli is Mahatma Gandhi Setu.
- h) People wear cotton clothes when it is cold.
- i) An aeroplane can cover long distances in a short time.
- j) Dr. S. Radhakrishnan was fondly called Chacha Nehru by children.

8. Match the following:

[0.5 x 10 = 5]

Column A

Column B

- | | |
|----------------|------------------------|
| a) Ahmedabad | i) Andhra Pradesh |
| b) Jaipur | ii) Ram lila |
| c) Train | iii) Victoria Memorial |
| d) Mumbai | iv) Ranchi |
| e) Navroze | v) spice |
| f) cardamom | vi) Parsi New year |
| g) Tagore Hill | vii) Gandhi Ashram |
| h) Kolkata | viii) Hawa Mahal |
| i) Dussehra | ix) railway track |
| j) Vizag | x) Essel World |

9. Write the dates for the following :-

[0.5 x 6 = 3]

- a) Children's Day.
- b) Teacher's Day.
- c) Gandhi Jayanti.
- d) Republic Day.
- e) Independence Day.
- f) Foundation Day of DPS, Ranchi

10. Diagram:

[2 x 1 = 2]

Draw the means of transport (any one) which you can avail to travel long distances.

11. Identify the cities on the basis of the clues given below

[0.5 x 4 = 2]

- a) Green –tech city _____.
- b) City of pearls _____.
- c) Bollywood _____.
- d) Howrah bridge _____.



DELHI PUBLIC SCHOOL

SAIL Township, Ranchi

SECOND SEMESTER (SESSION-2019 – 20)

CLASS: – III

DATE :- 03.03.2020

SUBJECT:- Science

M.M. :- 80

1. **Define these terms:** [2 x 4 = 8]
a) shadow b) cloud c) water cycle d) satellite
2. **Short answer questions:** [2 x 4 = 8]
a) What are stars and constellations?
b) How is rainwater collected in puddles harmful?
c) Write any two ways of soil conservation?
d) Why is the Sun important to us?
3. **Answer in one sentence:** [1 x 4 = 4]
a) Why does the Earth appear flat?
b) Write any one property of sound?
c) Who is the basic determiner of weather?
d) In which season days are shorter and nights are longer?
4. **Answer in detail:** [3 x 5 = 15]
a) Explain how light helps us to see.
b) How does changing weather affect us?
c) How is the atmosphere important to us? (any 3 points)
d) List the three uses of soil.
e) How is air different from water?
5. **Give reasons:** [2 x 2 = 4]
a) Life is possible on Earth.
b) Loamy soil is good for plant growth.
6. **Distinguish between:** [2 + 3 = 5]
a) Transparent and Translucent.
b) Rotation and Revolution.
7. **Name the following:** [1 x 8 = 8]
a) A huge, organized collection of stars. - _____
b) The imaginary line on which the Earth spins. - _____
c) A desert plant. - _____
d) Ice changes to water by this process. - _____
e) The vast expanse of empty place. - _____
f) Plants take in this gas during photosynthesis. - _____
g) The strong wind which cause damage to houses and trees.- _____
h) The biggest planet. - _____
8. **Fill in the blanks:** [1 x 8 = 8]
a) Too much of rain causes _____.
b) Removal of top soil by either wind or water. _____.
c) The _____ is made up of rocks, metals and gases.
d) The thick layer of gases surrounding the Earth is called _____.
e) Long winter sleep is called _____.
f) Rainy season is also known as _____.
g) The bouncing off, of light is called _____.
h) The shape of the Earth is called _____.
9. **Write 'True' or 'False':** [0.5 x 8 = 4]
a) Sound travels in straight line.
b) Nitrogen is the most abundant gas in the atmosphere.
c) Three states of water are interchangeable.
d) Earth rotates from east to west.
e) Loamy soil is very smooth to touch.
f) The moon is our nearest neighbour in space.
g) Autumn season spans the month of June to August.
h) Water vapour changes into water on cooling.
10. **Complete the series:** [1 x 6 = 6]

- a) cool breeze : spring :: _____ : summer
 b) red planet : mars :: ringed planet : _____
 c) ringing : telephone :: _____ : fan
 d) new moon : _____ :: full moon : purnima
 e) Apollo-11 : _____ :: Sputnik-I : artificial satellite
 f) _____ : honking horns :: pleasant sound : chirping of birds

11. Match the column:

[0.5 x 8 = 4]

(Copy down the words from column A. Write down the correct match beside them.)

Column - A


- a) sandy soil
 b) buzzing
 c) astronaut
 d) sea water
 e) craters
 f) ice
 g) Bihu
 h) vibration

Column - B

- * Neil Armstrong
 * moon
 * salty
 * honey bee
 * spring
 * sound
 * freezing
 * big particles

12. Name the given diagram and label the arrows:

[0.5 x 4 = 2]



D

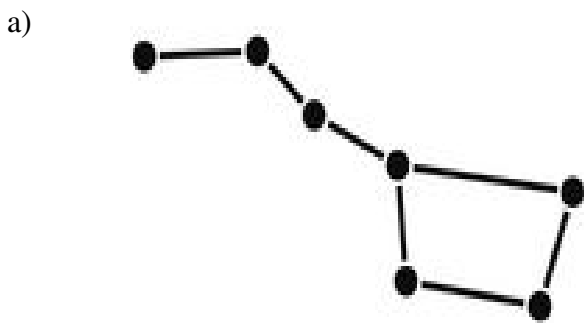
13. Draw and label

[2]

Any two artificial sources of light

14. Name the given constellations.

[2]





DELHI PUBLIC SCHOOL

SAIL Township, Ranchi

SECOND SEMESTER (SESSION-2019 – 20)

CLASS: – III

SUBJECT:- Maths

DATE :- 07.03.2020

M.M. :- 80

Section – A

1. Fill in the blanks:

[1 x 12 = 12]

- There are _____ one-third in a whole.
- The denominator in the fraction $\frac{8}{10}$ is _____.
- Two, ₹ 50 notes and one ₹ 100 note is equal to _____.
- ₹ 50.14 = _____ paise.
- 1 kilometre = _____ metres
- 1 litre = _____ x 250 ml.
- There are _____ minutes in two hours.
- There are _____ months in 6 years.
- A line segment that can be extended endlessly in one direction only is called a _____.
- A cone has _____ vertex.
- 0, 50, 100, 150, _____ , _____.
- Seventh number in the sequence of numbers 10, 20, 30, 40 will be _____.

2. Write 'True' or 'False':

[0.5 x 10 = 5]

- Fraction for four-sixths is $\frac{3}{4}$.
- Four one-fourth make one whole.
- Five ₹ 8 notes make ₹ 40.
- Litre is a measure of weight.
- The longer hand of a clock is the minute hand.
- In a non-leap year February has 28 days.
- Three line segments form a rectangle.
- Four faces are there in a cube.
- Litre is the standard unit of capacity.
- 100 grams make 1 kilogram.

3. Match the column:

[1 x 5 = 5]

Column – A

- 7m
- 1 hour
- 5 minutes to 4
- Face of a dice
- August

Column – B

- 3: 55
- square
- 31 days
- 700 cm
- 60 minutes

4. Do as directed:

[2 x 12 = 24]

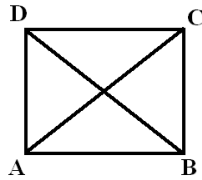
- Find one-seventh of 49.
- Write the fraction for three-sevenths .
- Convert 2 rupees 5 paise into paise.
- Subtract $\begin{array}{r} ₹ 83.05 \\ - ₹ 72.85 \\ \hline \end{array}$
- Convert 3 km 7m into metre.

f) Add

$$\begin{array}{r} \text{kg} \quad \text{g} \\ 7 \quad 400 \\ + 5 \quad 250 \\ \hline \end{array}$$

g) Find out the time duration between 6:40 a.m. and 11:30 a.m.

h) Name the line segments in the given figure



i) Write the number of faces, edges and vertices in a cuboid.

j) Draw all the lines of symmetry in a square.

k) Complete the sequence

1, 3, 6, 10, _____, _____.

l) Find the eighth number in the sequence of numbers:

9, 18, 27, 36, _____

Section – B

5. Solve the following:

[3 x 6 = 18]

- Out of 10 total birds sitting on the tree, 4 birds flew away. What fraction of birds remain sitting on the tree?
- Cost of one Hindi book is ₹13.20. Find the cost of 5 such Hindi books.
- A line is 1m 65 cm long. How long will it be if another 80 cm is added to it?
- The flag is 4m 30 cm long and 2m 80 cm broad. How much is the breadth less than the length?
- Shyam starts writing an exam paper at 10:30 a.m. and finishes at 2:40 p.m. What is the duration of the exam?
- Draw lines of symmetry for the following alphabets.

a) **M**

b) **D**

c) **H**

6. Solve:

[4 x 4 = 16]

- I purchased a doll for ₹ 25.30, a tennis racket for ₹ 12.25 and a ball for ₹ 4.25 from the toy store. How much did I spend in all? If I gave a fifty-rupee note to the shopkeeper, what amount was returned to me?
- The distance between two towns is 580 km 600 m. A bus has covered 395 km 175 m. How much distance is left?
- In the adjoining figure :-

i) How many vertices are there in square ABCD? _____

ii) How many sides form a square? _____

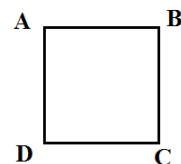
iii) Measure the sides of square ABCD

AB= _____

BC= _____

CD= _____

DA= _____



d) Write the next two terms in each.

i) 100, 87, 74, 61, _____, _____

ii) 4, 12, 36, 108, _____, _____



DELHI PUBLIC SCHOOL

SAIL Township, Ranchi

SECOND SEMESTER (SESSION-2019 – 20)

CLASS: – III

DATE :- 05.03.2020

SUBJECT:- English

M.M. :- 80

Section – A (Reading)

1. Read the passage carefully and answer the questions that follow: [5]

The moon is our nearest neighbour in space. It is a large ball of dusty rocks. There is no air on the moon although traces of water have been found. That is why no plants or animals can live there. During the day, it is freezing cold. The moon looks **bright** in the sky because it reflects the light of the Sun. As the Sun lights up different parts of the moon, its shape seems to change. The moon goes around the earth once every month. The path along which the moon revolves is called its orbit. [para – 1]

The moon is covered with deep holes called craters. Neil Armstrong was the first man to step on the moon. People who travel into space are called cosmonauts. [para – 2]

- a) What is an orbit? {para- 1} (1)
- b) What are craters? {para- 2} (1)
- c) Complete the following. {para- 2}
 - i) _____ was the first man to step on the moon. (1)
 - ii) People who travel into space are called _____ (1)
- d) Write the antonym of:
 - i) bright X _____ (1)

2. Read the poem given below and answer the questions that follow:

Ferry Me Across the Water.

(Stanza – 1) “Ferry me across the water,
Do boatman, do.”
“If you’ve a penny in your purse
I’ll ferry you.”

(Stanza – 2) “I’ve a penny in my purse,
And my eyes are blue,
So ferry me across the water,
Do boatman, do.”

(Stanza – 3) “Step into my ferry-boat,
Be they black or blue,
And for the penny in your purse
I’ll ferry you.” — **Christina Rossetti**

Note:- meaning of ferry:- to carry by boat across a lake, river etc.

Answer these questions:

[5]

- a) What was the request made to the boatman? (Stanza – 1) [1]
- b) Fill in the blanks: [2]
 - i) _____ was the colour of the eyes of the person who made the request. (Stanza – 2)
 - ii) Step into my _____ boat, Be they black or blue. (Stanza – 3)
- c) Write a rhyming word for: (not from the poem) [2]
 - i) ferry- _____
 - ii) blue- _____

Section – B (Writing)

3. a) You are Aarav/Aditi of class III/A. You have lost your pencil box in the Art room of your school. Write a notice for the same. [5]
OR
b) You are Aarav/Aditi of class III/A. You have found a water bottle in the school football ground. Write a notice for the same.
4. Paragraph writing (Write any one): [5]
a) Winter Season or b) My School Picnic

Section – C (Grammar – 30 marks)

5. Do as directed: [1 x 5 = 5]
a) We _____ basketball everyday.(play) (*Use Simple Present Tense form of the verb*)
b) She _____ beautiful poems in Hindi. (write) (*Use Simple Present Tense form of the verb*)
c) Sonam _____ a new dress for her birthday. (buy) (*Use Simple Past Tense form of the verb*)
d) I _____ a book. (read) (*Use Present Continuous Tense form of the verb*)
e) He _____ outside the gate. (wait) (*Use Present Continuous Tense form of the verb*)
6. Fill in the blanks by choosing the right verb from the brackets: [1 x 5 = 5]
a) Nobody _____ when he will arrive. (know/knows)
b) He _____ to office early everyday. (go/goes)
c) His mother _____ delicious food. (cook/cooks)
d) The kittens _____ with the ball of wool. (are playing/ is playing)
e) The teacher _____ a lot of books. (read/ reads)
7. Fill in the blanks with **is, am, are, was, or were** : [1 x 5 = 5]
a) We _____ the last ones to reach the assembly hall yesterday.
b) I _____ very happy today.
c) Ashu and Sahil _____ in class III this year.
d) I _____ absent for the meeting yesterday.
e) He _____ very hungry at this moment.
8. Fill in the blanks with **has, have, had** : [1 x 5 = 5]
a) I _____ no time to talk with him last night.
b) You _____ to wait in the queue.
c) She _____ a beautiful kitchen garden.
d) Pankaj _____ a cricket kit but he lost it.
e) Maya _____ golden hair.
9. Fill in the blanks with suitable prepositions from the brackets : [1 x 4 = 4]
a) There is a picture _____ the wall. (on / in)
b) The cow is hiding _____ the tree. (behind / before)
c) Rajni stood _____ Angad and Seema. (at / between)
d) The children are playing _____ the park. (in / into)
10. Identify the adverbs in the following sentences and write their kinds : [1 x 3 = 3]
a) His parents will come soon.
b) The sun was shining brightly.
c) The boys are waiting outside.
11. Join these sentences with suitable conjunctions and **rewrite them**. [1 x 3 = 3]
a) I can offer you tea. I can offer you coffee.
b) I tripped over a stone. I fell down.
c) Mohit was happy. Mohit got first position.

Section – D (Literature – 30 marks)

12. Answer in detail:

[2.5 x 4 = 10]

- a) From where do the snowflakes come? What other shape do the snowflakes take? [**'Snowflakes'**]
- b) What would be better to do instead of dusting? [**'Dust if you must'**]
- c) How would Aunt Ruby taunt the parakeet? [**'The Parrot who wouldn't Talk'**]
- d) Why was Yuuki's grandmother considered a wise woman? [**'Yuuki and the Tsunami'**]

13. Answer the following questions with reference to the context:

[2 x 4 = 8]

- a) 'The man fell at Akbar's feet and admitted that he had stolen the ring. The emperor was surprised.'
[**'Birbal Catches a Thief'**]
 - i) Why was the emperor surprised?
 - ii) How was the man caught?
- b) "This day will not come around again". [**'Dust If You Must'**]
 - i) Why will this day not come around again?
 - ii) What can we do to make the most of 'this day'?
- c) "But goldfish don't talk!" [**'The Parrot Who Wouldn't Talk'**]
 - i) Who said these words and to whom?
 - ii) Who wanted to get a goldfish?
- d) "It was. But it has stopped and we are safe." [**'Yuuki and the Tsunami'**]
 - i) Who said these words and to whom?
 - ii) What is 'it'?

14. Give the meanings: (in reference to the book)

[1 x 6 = 6]

- a) bosom
- b) hesitatingly
- c) prospect
- d) fond of
- e) dude
- e) frequent

15. Make sentences with the following words:

[1 x 4 = 4]

- a) upset
- b) surprised
- c) strange
- d) greedy

16. Fill in the blanks:

[1 x 2 = 2]

- a) Yuuki's grandmother was considered as a _____ woman.
- b) _____ was one of the nine gems in the court of Emperor Akbar.



DELHI PUBLIC SCHOOL

SAIL Township, Ranchi

SECOND SEMESTER (SESSION-2019 – 20)

CLASS: – III
SUBJECT:- Hindi

DATE :- 26.02.2020
M.M. :- 80

(खण्ड- क)

1. दिए गए गद्यांश को पढ़कर प्रश्नों के उत्तर दें – [1 x 5 = 5]
दो सहेलियाँ थीं रीमा और सीमा। दोनों एक ही साथ पढ़ती थीं और खेलती थीं। एक दिन दोनों सहेलियाँ घर जा रही थीं। तभी आपस में लड़ते हुए दो कुत्ते वहाँ आ गए। उन कुत्तों को देखकर रीमा जोर से भागने लगी और पत्थर से ठोकर खाकर गिर पड़ी। ठोकर लगने के कारण रीमा के पैर से खून बहने लगा। सीमा दौड़कर उसके पास पहुँची और तुरंत अपना रुमाल रीमा के घाव पर बाँध दिया। सीमा ने एक अच्छी सहेली का फर्ज निभाते हुए रीमा को सहारा देकर उसके घर तक ले गई।
प्रश्न –(पूरे वाक्य में उत्तर लिखें)
क) दोनों सहेलियों का नाम क्या था ?
ख) रीमा क्यों भागने लगी ?
ग) रीमा को किस चीज़ से ठोकर लगी ?
घ) रीमा के पैर से खून बहता देख सीमा ने क्या किया?
ङ) दिए गए शब्दों का बहुवचन रूप लिखें –
i) सहेली –..... ii) कुत्ता –.....

(खण्ड- ख)

2. एक वाक्य में प्रश्नों के उत्तर दें – (वाक्य में उत्तर लिखना अनिवार्य है।) [1 x 5 = 5]
क) वचन के कितने भेद हैं ?
ख) एक अपने आप होने वाली क्रिया लिखें ?
ग) जिन शब्दों की विशेषता बताई जाए, वे क्या कहलाते हैं ?
घ) प्रश्न पूछने के लिए किस चिह्न का प्रयोग किया जाता है ?
ङ) हल-बैल लेकर खेतों की ओर कौन चल पड़ता है ?
3. दिए गए रिक्त स्थानों को सही शब्द भरकर पूरा करें– [1 x 4 = 4]
क) संज्ञा या सर्वनाम शब्दों की विशेषता बताने वाले शब्द कहलाते हैं।
ख) एक या अनेक का बोध कराने वाले शब्द कहलाते हैं।
ग) जिस शब्द से किसी कार्य के करने या होने का बोध हो उसे कहते हैं।
घ) वाक्य में विराम देने के लिए जिन चिह्नों का प्रयोग किया जाता है, उन्हें कहते हैं।
4. निर्देश के अनुसार उत्तर दें – [3 x 7 = 21]

i) दिए गए शब्दों में से विशेषण और विशेष्य शब्द छाँट कर लिखें –

क) परिश्रमी किसान ख) फलदार वृक्ष ग) चमकीले तारे

ii) दिए गए वाक्यों में उचित क्रिया शब्द भरकर वाक्य पूरा करें : –

क) मैदान में बच्चे रहे हैं।

ख) माँ खाना रही है।

ग) सूरज दूध रहा है।

iii) दिए गए शब्दों के बहुवचन रूप लिखें –

क) साड़ी ख) चूहा ग) बहू

iv) दिए गए शब्दों के दो-दो पर्यायवाची शब्द लिखें –

क) जंगल ख) बादल ग) कपड़ा

v) दिए गए वाक्यों में उपयुक्त विराम चिह्न लगाएँ –

क) मैं प्रतिदिन विद्यालय जाता हूँ

ख) माँ ने रसगुल्ले जलेबी और हलवा बनाया।

ग) तुम्हारा घर कहाँ है

vi) दिए गए मुहावरे के अर्थ लिखें : –

क) हाथ मलना ख) घी के दीये जलाना ग) राह देखना

vii) दिए गए प्रश्नों के उत्तर संकेतों की सहायता से पूरा करें : –

क) मैदानों में इससे हरियाली छा जाती है। – स

ख) वर्षा के दिनों में खूब टरटराते हैं। – ढ

ग) इसमें सात रंग होते हैं। – इन्द्र

5. रिक्त स्थानों की पूर्ति करें : - [1 x 3 = 3]
 क) पत्र के प्रकार होते हैं।
 ख) क्रिया के भेद होते हैं।
 ग) सप्ताह में दिन होते हैं।
6. दिए गए गलत शब्दों को सही वर्णों के अनुसार लिखें :- [1 x 2 = 2]
 क) जगुरात ख)शालापाठ

(खण्ड- ग)
साहित्य

7. एक शब्द में उत्तर दें - [1 x 6 = 6]
 क) ताजमहल कहाँ स्थित है ?
 ख) स्वर्णलता ने सपने में किसको देखा ?
 ग) प्रताप के घोड़े का क्या नाम था ?
 घ) हवा और सूरज में किसकी जीत हुई ?
 ङ) हाथियों को बूढ़े हो जाने पर क्या मिलता है ?
 च) सभा की शुरुआत किसने की ?
8. रिक्त स्थानों की पूर्ति करें : - [1 x 5 = 5]
 क) शाहजहाँ की बेगम का नाम था।
 ख) बातें करते-करते हवा और सूरज में हो गई।
 ग) आदमी हमारे बालों और हमारी से कुछ चीजें बनाता है।
 घ) हाथी के इतने बड़े मुँह में केवल दाँत होते हैं।
 ङ) प्रताप बाद में के राजा बने।
9. एक वाक्य में उत्तर दें - [1 x 4 = 4]
 क) स्वर्णलता को क्या शौक था ?
 ख) प्रताप कुछ दिनों के लिए कहाँ चले गए थे ?
 ग) हाथी खानपान में किस तरह का जीव होता है ?
 घ) शेर और भेड़िया जानवरों का माँस क्यों खाते हैं ?
10. दीर्घ उत्तरीय प्रश्नों के उत्तर लिखें - [2 x 2 = 4]
 क) राजा बनते ही प्रताप ने क्या प्रतिज्ञा ली ?
 ख) हाथी क्या-क्या काम कर सकता है ?
11. किसने किससे कहा ? [1 x 4 = 4]
 क) मेरा चेतक इतने दिन कैसे रहा ?
 ख) अगर मैं न रहूँ, तो यह दुनिया खत्म हो जाएगी।
 ग) माँ, मुझे बताओ, खरगोश ने जानवरों को शेर से कैसे बचाया था ?
 घ) तुम मेरे बच्चों को प्यार करो, मैं तुम्हें प्यार करूँगी।
12. शब्दार्थ लिखें - [1 x 3 = 3]
 क) शौक - ख) इमारत - ग) साबित करना -
13. वाक्य बनाएँ - [1 x 2 = 2]
 क) घमंडी ख) परिवार
14. मूल्यपरक प्रश्न - [2]
 आपके घर के बगीचे में लगे पेड़-पौधे सूख रहे हैं। उन्हें सूखने से बचाने के लिए आप क्या उपाय करेंगे। दो वाक्यों में उत्तर लिखें।

(खण्ड- घ)

15. किसी एक विषय पर पत्र लिखें - [5]
 गृहप्रवेश पर आगमन हेतु मित्र को निमंत्रण पत्र लिखें।
 अथवा,
 छोटे भाई को शतरंज प्रतियोगिता में प्रथम आने पर बधाई पत्र लिखें।
16. किसी एक विषय पर अनुच्छेद लिखें - [5]
 क) किसान हमारे अन्नदाता या ख) रंग-बिरंगी तितली या ग) मेरी प्रिय अध्यापिका



DELHI PUBLIC SCHOOL

SAIL Township, Ranchi

SECOND SEMESTER (SESSION-2019-20)

SUBJECT: General Knowledge

DATE :- 17.02.2020

CLASS: – III **Sec:-** _____

M.O. :- _____

Roll no.:- _____

F. M. :- 50

NAME:- _____

I. Answer in one word.

[1 x 10 = 10]

1) Who was the first human being to walk on the Moon?

Ans:- _____

2) Which was the first newspaper published in India?

Ans:- _____

3) Who invented the first online shopping or e-commerce ?

Ans:- _____

4) Who was the first woman to travel in space ?

Ans:- _____

5) Which is the most famous painting of Leonardo da Vinci?

Ans:- _____

6) Which is the closest star to the sun?

Ans:- _____

7) In which city are the Wimbledon Games held?

Ans:- _____

8) Who is the author of the book “The Adventures of Sherlock Homes” ?

Ans:- _____

9) Which country Rembrandt (a famous painter) belongs to?

Ans:- _____

10) The study of minerals is called.

Ans:- _____

II. Write 'True' or 'false' .

[1 x 10 = 10]

- 1) February 29 is also known as leap year day. - _____
- 2) France has won 2014 FIFA World Cup. - _____
- 3) The study of rocks is called geology. - _____
- 4) In 1492 Vasco da Gama reached the coast of Calicut in India. - _____
- 5) Bangkok is also known as 'City of Anger'. - _____
- 6) Mercury is the hottest planet of the solar system. - _____
- 7) F11 key is used to enter and exit the full screen mode. - _____
- 8) Alexander Graham Bell invented the world's first television. - _____
- 9) Mark Zuckerberg has studied in Harvard University. - _____
- 10) Graphite is an igneous rock used to make buildings. - _____

III. Fill in the blanks :

[1 x 5 = 5]

- 1) _____ is the hardest natural substance found on earth.
- 2) _____ stones are the bubbles of volcanic lava.
- 3) _____ is a huge cloud of gas and dust in space.
- 4) Millions of stars together form a _____
- 5) Guernica is a painting by _____

IV. Unscramble the words.

[1 x 5 = 5]

- 1) This is one of the oldest city of India and is known for its many ghats. (ISANARAV) _____
- 2) Vasco da Gama died in this city. (NOCHIC) _____
- 3) This famous cave painting is found in India. (AAJTAN) _____
- 4) This bird found in Antarctica can swim but not fly. (NIGUPEN) _____
- 5) The state which was part of Andhra Pradesh, before 2014. (LATENGANA) _____

V. Write the full form of the following -

[1 x 5 = 5]

- 1) WWW - _____
- 2) UNICEF - _____
- 3) ASAP - _____
- 4) ATM - _____
- 5) TTYL - _____

VI. Match the following

[1 x 5 = 5]

- | | | |
|-----------------------|-------------|--------------------------|
| 1) Ferdinand Magellan | a) USA | <input type="checkbox"/> |
| 2) Yuri Gagarin | b) Holland | <input type="checkbox"/> |
| 3) Michelangelo | c) Italy | <input type="checkbox"/> |
| 4) Vincent van Gogh | d) Russia | <input type="checkbox"/> |
| 5) Neil Armstrong | e) Portugal | <input type="checkbox"/> |

VII. Current Affairs :

[1 x 5 = 5]

- 1) Which city will host 2022 Commonwealth Games?
a) London b) New Delhi c) Birmingham d) Gold Coast
- 2) From which city of China, Corona Virus has spread?
a) Beijing b) Shanghai c) Wuhan d) Nanjing
- 3) Which state of India has won 1st prize in 71st Republic Day parade 2020 ?
a) Assam b) Odisha c) Uttar Pradesh d) Manipur
- 4) Who became the new Chief Minister of Jharkhand ?
a) Sibusoren b) Arjun Munda c) Hemant Soren d) Raghubar Das
- 5) In which city of Jharkhand, Central Government has approved setting up of a new All India Institute of Medical Sciences (AIIMS)?
a) Ranchi b) Deoghar c) Dhanbad d) Jamshedpur

VIII. Choose the correct option

[1 x 5 = 5]

- 1) Who won the 1st T-20 World Cup?
a) Sri Lanka b) USA c) India d) Canada
- 2) Who is known as the Flying Sikh of India?
a) Usain Bolt b) Milkha Singh c) Sandeep Singh d) Navjot Singh
- 3) At the Beijing Olympic Games in 2008 _____ became the first Indian to win an individual gold medal.
a) Gagan Narang b) Leander Paes c) Vijender Singh d) Abhinav Bindra
- 4) What colour cards do the referees carry in a football match?
a) Red & yellow b) black & white c) red & green d) blue & green
- 5) Commonwealth games are held after every _____ years.
a) 3 b) 4 c) 5 d) 6



DELHI PUBLIC SCHOOL

SAIL Township, Ranchi

SECOND SEMESTER (SESSION-2019-20)

SUBJECT: Computer

DATE :- 19.02.2020

CLASS: – III **Sec:-** _____

M.O. :- _____

Roll no.:- _____

F. M. :- 30

NAME:- _____

Q1. Choose the correct option :- **[0.5 X 5 = 2.5]**

- a) Which tool helps to cancel the last action?
 i. Redo ii. Eraser iii. Undo iv. Pencil
- b) Which primitive is used to move the turtle in forward direction?
 i. BK ii. FD iii. LT iv. RT
- c) Which command is used to exit from LOGO ?
 i. CS ii. BYE iii. CT iv. FD
- d) Which of the following option is used to apply magical effects?
 i. Line Tool ii. Print Tool iii. Stamp Tool iv. Magic Tool
- e) Which primitive is used to move the turtle without drawing any line?
 i. PE ii. PU iii. BK iv. RT

Q2. Fill in the blanks :- **[0.5 X 5 = 2.5]**

- a) _____ can be said as “Expressway of information”.
- b) Email stands for _____
- c) The _____ primitive is used to call the turtle to it’s beginning place.
- d) _____ tool is used to draw lines of different thickness and style.
- e) The drawing is made in the _____ canvas.

Q3. Write the commands for the following :- **[0.5 X 4 = 2]**

- a) To move the turtle 40 steps back _____
- b) To turn the turtle towards right by 120 turns _____
- c) To move the turtle 100 steps ahead _____
- d) To turn the turtle by 20 turns towards left _____

Q4. Write the name of the tools :- **[1 X 5 = 5]**

- a) To quit the tux paint _____
- b) To draw a circle _____
- c) To type any text _____
- d) To insert an image or a sticker _____
- e) To take the print of the drawn picture _____

Q5. Write Repeat Command to draw the following :- **[1 X 2 = 2]**

- a) Square _____
- b) Circle _____

Q6. Differentiate between :- **[2 X 2 = 4]**

a) PU and PD

--	--

b) CS and CT

--	--

Q7. Write short notes on :-

[2 X 2 = 4]

a) Social Media - _____

b) e-commerce - _____

Q8. Answer the following questions :-

[2 X 4 = 8]

a) What is the full form of LOGO?

b) What is turtle ?

c) Write any two advantages of internet.

d) Write any two uses of internet?

