



DELHI PUBLIC SCHOOL

SAIL Township, Ranchi

SECOND SEMESTER (SESSION-2017-18)

SUBJECT: ENVIRONMENTAL SCIENCE

DATE :- 27.02.2018

CLASS: – II **Sec:-** _____

M.O. :- _____

Roll no.:- _____

F. M. :- 80

NAME:- _____

1. Fill in the blanks with the help of words given in the box: [1 x 8 = 8]

air, compost, wells, harvest, courier, wind, peacock, seeds

- a) Onam is the _____ festival of Kerala.
- b) Moving air is called _____.
- c) We dig _____ to get underground water.
- d) Dry leaves are used to make _____.
- e) Urgent letters can be sent through a _____.
- f) _____ is National Bird of India.
- g) A fruit has _____ inside it.
- h) The Earth is surrounded by a layer of _____.

2. Write True or False: [0.5 x 10 = 5]

- a) Letter is the fastest means of communication. _____
- b) The Sun is the closest star to the Earth. _____
- c) A bud blooms into a flower. _____
- d) Drinking unclean water causes warmth. _____
- e) Radio is a written form of communication. _____
- f) Guru Nanak is the first Guru of Sikhs. _____
- g) The main function of the Republic Day is held at the Vijay Chowk. _____
- h) The weather is humid and hot during rainy season. _____
- i) Plants that creep along the ground are called climbers. _____
- j) Autumn season is the festive season in India. _____

3. Encircle the correct words: [1 x 6 = 6]

- a) Pongal is main festival of *Tamilnadu / Kerala*.
- b) Thing that we get from the plants is *onion / egg*.
- c) *Trees / Stars* are heavenly bodies.
- d) *Watermelon / Grapevine* is a creeper.
- e) When the air moves gently, it is called a *storm / breeze*.
- f) *India / China* has the maximum numbers of post offices in the world.

4. Write full forms of the following: [1 x 4 = 4]

- a) FAX :- _____
- b) SMS :- _____
- c) ISD :- _____
- d) E-mail :- _____

5. Match the following:

[1 x 10 = 10]

- a) The Moon
- b) Non green plants
- c) Days are long and nights are short
- d) PIN code in India
- e) The Raj Ghat
- f) Mahavir Jayanti
- g) TV
- h) Aerogramme
- i) Tea or Coffee
- j) Plants

- * make the air fresh and clean
- * during summer season
- * hot beverages
- * invented by J.L. Baird
- * the Samadhi of Mahatma Gandhi
- * Comprises six digits
- * writing to your friend abroad
- * celebrated by Jains
- * cannot make their own food
- * takes 29 days to complete one round of the Earth

6. Write answer in one sentence:

[1 x 6 = 6]

a) What does Sun give us?

Ans.- _____

b) Which part of the plant absorbs water and minerals from the soil?

Ans.- _____

c) What is the purest form of water on the Earth?

Ans.- _____

d) Who is the composer of Vande-Matram?

Ans.- _____

e) Why is there no life on the Moon?

Ans.- _____

f) When do we celebrate Independence Day every year ?

Ans.- _____

7. Name them:

[1 x 7 = 7]

a) Birthday of ten Gurus celebrated by the Sikhs : _____

b) The condition of air at a particular time at a given place is called : _____

c) The Holy book of the Christians : _____

d) The first human to land on the surface of the Moon : _____

e) The date for 'World Earth day' : _____

f) The world's tallest tree is : _____ called 'Mendocino Tree' in USA.

g) Our National Tree : _____

8. Who am I ?

[1 x 6 = 6]

a) I am a cellular phone. I am also called a _____

b) I am silver in colour. I move around the Earth. I am _____

c) I am a book that has the rules and regulations required for the smooth running of a country.

I am _____

d) I am unique because I exist in all three forms – solid, liquid and gas. I am _____

e) I am like skin of tree which keeps the wood inside safe. I am _____ of a tree.

f) You can see me in the sky after rain. I am a band of seven colours. I am _____

9. Define these:

[2 x 4 = 8]

a) Mass communication - _____

b) Environment - _____

c) Festival - _____

d) Heavenly bodies - _____

10. Answer the following questions:

[2 x 6 = 12]

a) What do you mean by ground water ? Name any two sources of ground water.

Ans.- _____

b) Which planet is called as 'Blue planet' ? Why ?

Ans.- _____

c) Why is leaf called 'Kitchen of the plant' ?

Ans.- _____

d) What is communication? Why do we need to communicate?

Ans.- _____

e) What are National festivals?

Ans.- _____

f) What is Ramzan?

Ans.- _____

11. Draw, colour and label :

[2.5 + 1.5 + 3 +1 = 8]

a) Different shapes of the Moon

b) Mobile Phone

c) A plant showing its different parts

d) Any one surface water source



DELHI PUBLIC SCHOOL

SAIL Township, Ranchi

SECOND SEMESTER (SESSION-2017-18)

SUBJECT: Hindi

CLASS: – II **Sec:-** _____

Roll no.:- _____

NAME:- _____

DATE :- 05.03.2018

M.O. :- _____

F. M. :- 80

1. अनेक शब्दों के लिए एक शब्द लिखें –

[1 x 6 = 6]

क) मिट्टी के बरतन बनाने वाला –

ख) सात दिनों का समूह –

ग) जूते बनाने वाला –

घ) पत्र बाँटने वाला –

ङ) मिठाई बनाने वाला –

च) लकड़ी का सामान बनाने वाला –

2. विलोम शब्द भरें –

[0.5 x 4 = 2]

क) बाएँ x

ख) गीला x

ग) गर्म x

घ) शक्तिशाली x

3. रिक्त स्थानों में सही महीने या दिन का नाम भरें –

[0.5 x 6 = 3]

क) क्रिसमस महीने में मनाया जाता है। (दिसम्बर / नवम्बर)

ख) में अधिक वर्षा होती है। (जुलाई / नवम्बर)

ग) महीने में बाल-दिवस मनाया जाता है। (नवम्बर / मई)

घ) महीने में हमारी वार्षिक परीक्षा होती है। (जून / मार्च)

ङ) बृहस्पतिवार को भी कहते हैं। (शनिवार / वीरवार)

च) को सभी कार्यालयों में अवकाश होता है। (रविवार / सोमवार)

4. हिन्दी अंकों में लिखें –

[0.5 x 6 = 3]

क) सात –

ख) पाँच –

ग) चौदह –

घ) तेरह –

ङ) ग्यारह –

च) बीस –

5. वर्णों को जोड़कर शब्द बनाएँ -

[0.5 x 6 = 3]

क) ब्+अ+ग्+उ+ल्+आ -.....

ख) व्+इ+श्+व्+आ+स्+अ -.....

ग) क्+उ+त्+त्+आ -.....

घ) आ + म् + अ -.....

ङ) क्+इ+त्+आ+ब्+अ -.....

च) ब्+अ+स्+अ -.....

6. एक पर्यायवाची शब्द भरें -

[1 x 4 = 4]

क) सूर्य -.....

ख) फूल -.....

ग) पुत्र -.....

घ) धरती -.....

7. दिए गए गिनती को हिन्दी शब्दों में लिखें -

[1 x 5 = 5]

क) ९ -.....

ख) ६ -.....

ग) ४ -.....

घ) १६ -.....

ङ) १९ -.....

8. मुहावरों के अर्थ लिखें -

[1 x 2 = 2]

क) हाथ नहीं लगना -.....

ख) मुँह में पानी भर आना -.....

9. सड़क यातायात के दो साधनों के नाम लिखें जो इंजन द्वारा नहीं चलते हैं -

[2 x 1 = 2]

i)

ii)

10. सही (✓) या गलत (✗) का निशान लगाएँ -

[0.5 x 6 = 3]

क) जिन्न बोतल में दो सौ वर्षों तक बंद था।

ख) किसान अपने पूर्वजों के लगाए वृक्षों के फल खाता था।

ग) जिन्न ने भय और आश्चर्य से मछुआरे को देखा।

घ) प्रज्ञा, सुभाष, शशांक और चित्रा सहपाठी हैं।

ङ) एक स्वर में सभी विद्यार्थियों ने कहा - हाँ दीदी जी।

च) गुब्बारे के नीचे आग जल रही थी।

11. शब्दों के अर्थ लिखें -

[1 x 6 = 6]

क) प्रसिद्ध -.....

ख) स्वर -.....

ग) उपदेश -.....

घ) पात्र -.....

ङ) प्रयोग -.....

च) विश्राम -.....

12. दिए गए गद्यांश को पढ़े और प्रश्नों के उत्तर लिखें –

महाराणा प्रताप, ये एक ऐसा नाम है, जिसके लेने भर से मुगल सेना के पसीने छूट जाते थे। एक ऐसा राजा जो किसी के आगे नहीं झुका। महाराणा प्रताप को बचपन में कीका के नाम से पुकारा जाता था। प्रताप के पिता राणा उदय सिंह थे। प्रताप का वनज 110 किलो था। उनका भाला 81 किलो और छाती का कवच 72 किलो का था। महाराणा प्रताप मेवाड़ के महान हिंदू शासक थे। इनके साहस और वीरता की बहुत सारी गाथाएँ प्रसिद्ध हैं।

i) एक वाक्य में उत्तर दें –

[2 x 3 = 6]

क) महाराणा प्रताप के पिता का क्या नाम था ?

उत्तर –

ख) महाराणा प्रताप के बचपन का नाम क्या था ?

उत्तर –

ग) महाराणा प्रताप कहाँ के शासक थे ?

उत्तर –

ii) रिक्त स्थान भरें –

[1 x 3 = 3]

क) प्रताप का भाला किलो और छाती का कवच किलो का था।

ख) प्रताप की वीरता और साहस की कहानियाँ हैं।

13. किसी एक शीर्षक पर पाँच पंक्तियाँ लिखें –

[1 x 5 = 5]

क) "अनेकता में एकता"

या

ख) समय का महत्व

.....

.....

.....

.....

.....

.....

.....

.....

.....

.....

14. प्रश्नों के उत्तर लिखें –

[2 x 7 = 14]

क) छात्र-छात्राएँ क्यों खुश हैं ?

उत्तर –

.....

ख) राजा को क्या देखकर आश्चर्य हुआ ?

उत्तर –

.....

ग) राजा को किसान की कौन सी बात अच्छी लगी ?

उत्तर -.....

घ) गुब्बारा कितना ऊँचा उड़ा और कितनी दूर गया ?

उत्तर -.....

ङ) 'बगुला भगत' कहानी से हमें क्या शिक्षा मिलती है ?

उत्तर -.....

च) बगुले ने मछलियों को क्या कहकर डराया ?

उत्तर -.....

छ) जिन्न के पास कैसी शक्तियाँ थीं ?

उत्तर -.....

15. वाक्य बनाएँ -

[1 x 6 = 6]

क) विश्वास -.....

ख) विशाल -.....

ग) वृक्ष -.....

घ) कीटाणु -.....

ङ) छुट्टी -.....

च) पुस्तकालय -.....

16. किसने कहा, किससे कहा ?

[2 x 2 = 4]

क) ऐसा क्यों, नानी जी ?

ख) मेरे तालाब की मछलियाँ कहाँ गईं ?

17. निम्नलिखित शब्दों के शुद्ध रूप लिखें -

[0.5 x 6 = 3]

क) आज्ञया -.....

ख) गरिब -.....

ग) होसियार -.....

घ) पौघे -.....

ङ) आकास -.....

च) धूआ -.....



DELHI PUBLIC SCHOOL

SAIL Township, Ranchi

SECOND SEMESTER (SESSION-2017-18)

SUBJECT: ENGLISH

DATE :- 07.03.2018

CLASS: – II **Sec:-** _____

M.O. :- _____

Roll no.:- _____

F. M. :- 80

NAME:- _____

1. Fill in the blanks with is, are, am and the – ing forms of a suitable doing words.

Take the words from the help box:

[1 x 5 = 5]

sit, swim, sleep, make, knock

- a) Some colourful fishes _____ in the pond.
- b) Why Sohan _____ at this time?
- c) Somebody _____ at the door.
- d) I _____ a birthday card for my friend.
- e) The children _____ quietly in the classroom.

2. Put a full stop (.) or a question mark (?) at the end of these sentences:

[0.5 x 6 =3]

- a) We will visit this place again in winter _____
- b) When will the winter holidays begin _____
- c) Will you go alone _____
- d) We should be thankful to god always _____
- e) Have you ever seen a snowfall _____
- f) Honesty is the best policy _____

3. Fill in the blanks with who, which, what, when or where:

[1 x 5 = 5]

- a) _____ pen is yours?
- b) _____ do you play in the evening?
- c) _____ teaches you dance?
- d) _____ is in your pocket?
- e) _____ do you live?

4. Fill in the blanks with and, but, or :

[1 x 5 = 5]

- a) It was dark outside _____ she was not afraid.
- b) You can come to school by a school bus _____ by your own car.
- c) She sat at the table _____ wrote the letter.
- d) We can stay at a hotel _____ at a friend's place.
- e) Tigers _____ wolves are wild animals.

5. Fill in the blanks with in, on, into, under, above, behind, near, between :

[1 x 8 = 8]

- a) Reena quietly walked _____ the room.
- b) There is a window _____ the two walls.
- c) Mother forgot that she had kept her purse _____ the pillow.
- d) There is a bottle _____ the table.

- e) There is no park _____ our house.
 f) The boy was hiding _____ the door.
 g) The aeroplane flew _____ the clouds.
 h) A young boy is swimming _____ the river.

6. Complete the following sentences with suitable doing words (Verb): [1 x 4 = 4]

- a) We _____ woollen clothes in winters.
 b) Birds _____ in nests.
 c) Aeroplanes _____ in the sky.
 d) The sun _____ in the sky.

7. Give the meaning of the following words: [1 x 5 = 5]

- a) protect - _____ b) heal - _____
 c) equipment- _____ d) droplets - _____
 e) dangerous - _____

8. Match with the correct opposites: [1 x 5 = 5]

- | | | |
|-------------|---------------|-------|
| a) problem | i) strange | _____ |
| b) ordinary | ii) wonderful | _____ |
| c) horrible | iii) solution | _____ |
| d) catching | iv) dark | _____ |
| e) light | v) releasing | _____ |

9. Complete the following sets of words with correct homophones: [1 x 6 = 6]

- | | | |
|-----------------|-----------------|-----------------|
| a) male - _____ | b) one - _____ | c) blue - _____ |
| d) meet - _____ | e) hair - _____ | f) road - _____ |

10. Make sentences: [1 x 5 = 5]

- a) protect- _____
 b) different- _____
 c) breathe- _____
 d) several- _____
 e) worried- _____

11. Read the passage carefully, then answer the questions given below:

Rajan asked his mom if he could ride his bike to the park. "As long as you wear your helmet when you are riding," she said. When Rajan reached the park, it was filled with people holding garbage bags. He saw that everyone was cleaning the park. His friend Anand also was there. Anand asked Rajan if he would help. Rajan said, "Yes! Sure, and asked for a garbage bag.

A) Answer in one sentence: [1 x 3 = 3]

- a) What did Rajan's mother ask him to wear before riding?

Ans.- _____

- b) What did he see when he reached the park?

Ans.- _____

- c) Who was Rajan's friend?

Ans.- _____

B) Give rhyming word for each from the passage: [0.5 x 4 = 2]

- | | |
|-------------------|------------------|
| i) tear - _____ | ii) bark - _____ |
| iii) tide - _____ | iv) pure - _____ |

14. Answer the following questions:

[2 x 7 = 14]

a) When does the sky fill with beautiful colours?

Ans.- _____

b) Why do we call something “rubbish”?

Ans.- _____

c) What is a hospital for animals called?

Ans.- _____

d) Who introduced Jewel to Wemberly?

Ans.- _____

e) What kind of pictures did Vincent Van Gogh like to draw?

Ans.- _____

f) What do you mean by ‘recycling’?

Ans.- _____

g) Which animal can change colours?

Ans.- _____



DELHI PUBLIC SCHOOL

SAIL Township, Ranchi

SECOND SEMESTER (SESSION-2017-18)

SUBJECT: MATHEMATICS

DATE :- 09.03.2018

CLASS: – II **Sec:-** _____

M.O. :- _____

Roll no.:- _____

F. M. :- 80

NAME:- _____

1. Fill in the blanks:

[1 x 10=10]

a) $400g + 200g + 200g + 200g =$ _____ g

b) $25cm +$ _____ $cm = 61cm$

c) $1kg =$ _____ g

d) The short form of Litre is _____.

e) $307g + 417g =$ _____ $kg + 724g$

f) $1\ell =$ _____ ml

g) The _____ of a thing tells us how heavy it is .

h) $8\text{ kg} +$ _____ $\text{kg} = 12\text{ kg}.$

i) Centimetre is written as _____ in short.

j) $18\text{ cm} + 14\text{ cm} =$ _____ $\text{cm}.$

2. Write True or False:

[1 x 10 = 10]

a) 1 kilogram is much heavier than 1 gram. _____

b) There are 1000 centimetres in a metre. _____

c) $12 \times 3 = 36$ _____

d) $35 \div 7 = 8$ _____

e) $15m + 141m = 166m$ _____

f) If divisor = 8, quotient = 5, then dividend = 43. _____

g) $7 \div 7 = 1$ _____

h) 8 stars divided into 2 equal groups gives 4 stars in each group. _____

i) $15 \times 8 = 75$ _____

j) The metre is a measure of length. _____

3. Fill in the blanks:

[0.5 x 10 = 5]

a) $10 \times$ _____ $= 100$

b) _____ $\times 7 = 77$

c) $13 \times 4 =$ _____

d) $15 \times 6 =$ _____

e) $6 \times$ _____ $= 36$

f) $9 \times 7 =$ _____

g) $0 \times 15 =$ _____

h) $7 \times 6 =$ _____

i) $8 \times$ _____ $= 64$

j) $12 \times 2 =$ _____

Page 1 of 3

4. Match the following:**[0.5 x 5 = 2.5]**

- | | |
|---------------------------|------|
| a) Nine hundred fifty six | 705g |
| b) 500g + 205g | 956 |
| c) millilitre | 16kg |
| d) 5kg + 2kg + 9kg | 200l |
| e) 300l - 100 l | ml |

5. Divide by repeated subtraction:**[2.5 x 3 = 7.5]**

a) $20 \div 5 =$ _____

b) $16 \div 4 =$ _____

c) $12 \div 3 =$ _____

6. Add :**[1.5 x 5 = 7.5]**

a)
$$\begin{array}{r} 732 \text{ m} \\ +248 \text{ m} \\ \hline \end{array}$$

b)
$$\begin{array}{r} 638 \text{ cm} \\ +249 \text{ cm} \\ \hline \end{array}$$

c)
$$\begin{array}{r} 496 \text{ g} \\ +385 \text{ g} \\ \hline \end{array}$$

d)
$$\begin{array}{r} 538 \text{ l} \\ +268 \text{ l} \\ \hline \end{array}$$

e)
$$\begin{array}{r} 528 \text{ ml} \\ +385 \text{ ml} \\ \hline \end{array}$$

7. Divide the following and write the quotient and remainder below:**[2 x 5 = 10]**

a)
$$\begin{array}{r} 10 \overline{) 60} \\ \hline \end{array}$$

Q = _____
R = _____

b)
$$\begin{array}{r} 8 \overline{) 72} \\ \hline \end{array}$$

Q = _____
R = _____

c)
$$\begin{array}{r} 7 \overline{) 49} \\ \hline \end{array}$$

Q = _____
R = _____

d)
$$\begin{array}{r} 9 \overline{) 9} \\ \hline \end{array}$$

Q = _____
R = _____

e)
$$\begin{array}{r} 6 \overline{) 54} \\ \hline \end{array}$$

Q = _____
R = _____

8. Subtract:**[1.5 x 5 = 7.5]**

a)
$$\begin{array}{r} 747 \text{ L} \\ -549 \text{ L} \\ \hline \end{array}$$

b)
$$\begin{array}{r} 415 \text{ ml} \\ -307 \text{ ml} \\ \hline \end{array}$$

c)
$$\begin{array}{r} 702 \text{ kg} \\ -694 \text{ kg} \\ \hline \end{array}$$

d)
$$\begin{array}{r} 907 \text{ m} \\ -579 \text{ m} \\ \hline \end{array}$$

e)
$$\begin{array}{r} 351 \text{ cm} \\ -75 \text{ cm} \\ \hline \end{array}$$

9. Write the number names:**[1 x 6 = 6]**

a) 1000- _____

b) 734 - _____

c) 843 - _____

d) 992 - _____

e) 759 - _____

f) 899 - _____

10. Write division facts:

[2 x 2 = 4]

a) $7 \times 3 = 21$

b) $4 \times 7 = 28$

i) _____

i) _____

ii) _____

ii) _____

11. Word Problem:

[2.5 x 4 = 10]

a) Rita had 515 ml of milk in the morning and 327 ml of milk in the evening.
How much milk did she have in all?

Ans.- _____

b) A box holds 81 bottles of soft drink. The bottles are kept in 9 equal rows.
How many bottles are kept in each row?

Ans.- _____

c) Reena is making friendship bands. Each band will have 14 beads.
How many bands can she make with 56 beads?

Ans.- _____

d) Mrs. Sharma gave a tailor 54 metres of cloth. The tailor used 38 metres of cloth.
How much cloth did he return?

Ans.- _____



DELHI PUBLIC SCHOOL

SAIL Township, Ranchi

SECOND SEMESTER (SESSION-2017-18)

SUBJECT: General Knowledge

DATE :- 16.02.2018

CLASS: – II **Sec:-** _____

M.O. :- _____

Roll no.:- _____

F. M. :- 25

NAME:- _____

1. Answer the following questions in one sentence:

[1 x 4 = 4]

a) Who is the inventor of Television?

Ans.- _____

b) Which country has the largest army?

Ans.- _____

c) Name the Indian who was awarded Nobel Prize in 2016.

Ans.- _____

d) Name the currency of Europe?

Ans.- _____

2. Answer the following questions in one word:

[1 x 5 = 5]

a) Which city in Vidarbha region is also known as the orange city?

Ans.- _____

b) What is the form of embroidery from Punjab that literally means floral craft?

Ans.- _____

c) Who was the first deaf-blind American author to get a college degree?

Ans.- _____

d) What is the capital of France?

Ans.- _____

e) How many babies make a triplet?

Ans.- _____

3. Fill in the blanks :

[1 x 8 = 8]

a) The largest river in India is the _____

b) On _____, we celebrate Dr. S. Radhakrishnan's birthday.

c) The framework of bones that gives shape to our body _____.

d) When you show off the muscles of your upper arm, you are flexing your _____

e) A tool with a long handle used to move soil, sand and dirt _____.

P.T.O.

- f) _____ was once considered the smallest and coldest planet in the solar system.
- g) Sania Nehwal is the famous Indian _____ player.
- h) Badminton is played with a racket and a special feathered _____.

4. Match the following:


[0.5 x 6 = 3]

- | | |
|------------------|---|
| a) Kuchipudi | America <input type="checkbox"/> |
| b) Bicycle | longest bone <input type="checkbox"/> |
| c) White house | Thomas Alva Edision <input type="checkbox"/> |
| d) Femur | 22 nd April <input type="checkbox"/> |
| e) Electric bulb | Andhra Pradesh <input type="checkbox"/> |
| f) Earth Day | Eco-friendly Transport <input type="checkbox"/> |

**5. Here are some famous people. Can you name them?
Use the help box given below:**

[0.5 x 6 = 3]

a)



b)



c)



d)



e)



f)



P.V. Sindhu,

A.R. Rahman,

Charles Babbage

B.R. Ambedkar

Virat Kohli

Subhash Chandra Bose

6. Circle the odd one out:

[0.5 x 4 = 2]

- a) pedal, handle, Taj Mahal, tyre
- b) badminton, racket, hockey, shuttle
- c) saffron, turmeric, cardamom, crockery
- d) Hawa Mahal, Taj Mahal, Qutub Minar, Mumbai



DELHI PUBLIC SCHOOL

SAIL Township, Ranchi

SECOND SEMESTER (SESSION-2017-18)

SUBJECT: Computer

DATE :- 21.02.2018

CLASS: – II Sec:- _____

M.O. :- _____

Roll no.:- _____

F. M. :- 20

NAME:- _____

1) Choose the correct option: **[0.5 x 5 = 2.5]**

a) Pressing the mouse button once is called –

- i) Pointing ii) Single Click iii) Double Click

b) Which one is used to remove our mistakes –

- i) Eraser ii) Pencil iii) Polygon

c) Which one is used to spray colours –

- i) Air brush ii) Fill colour iii) Brush tool

d) Which one is used to close TUX Paint –

- i) New ii) Quit iii) Undo

e) Which one is used to open saved file in TUX Paint –

- i) Redo ii) Open iii) Undo

2. Fill in the blanks: **[0.5 x 5 = 2.5]**

TUX, pointing, Paint, Polygon, rectangle

a) A mouse is also known as _____ device.

b) The _____ tool helps to draw square.

c) We use _____ program to draw on computer.

d) We use _____ tool to make enclosed figure in Paint.

e) Magic tool is present in _____ Paint.

3. Write True or False: **[0.5 x 5=2.5]**

a) We can change the size of the eraser in paint program.

b) Triangle tool is used to make a circle.

c) Line tool is used to draw straight line.

d) We can change the size of the brush.

e) Mechanical mouse is a kind of mouse.

P.T.O.

4. Match the following : **[0.5 x 5 =2.5]**

a) Polygon TUX Paint

b) Wireless Mouse

Double Click

c) Press left button twice

Type of mouse

d) Left button

to draw a ship

e) Selector is related to

Index finger

5. Answer the following questions :

[1 x 4 = 4]

a) What do you mean by single click?

Ans.- _____

b) What do you mean by Fill colour tool?

Ans.- _____

c) Define Pencil tool?

Ans.- _____

d) How do you save a file in TUX Paint?

Ans.- _____

6. Unscramble it :

[0.5 x 5=2.5]

a) ENRCSE - _____

d) REPINTR- _____

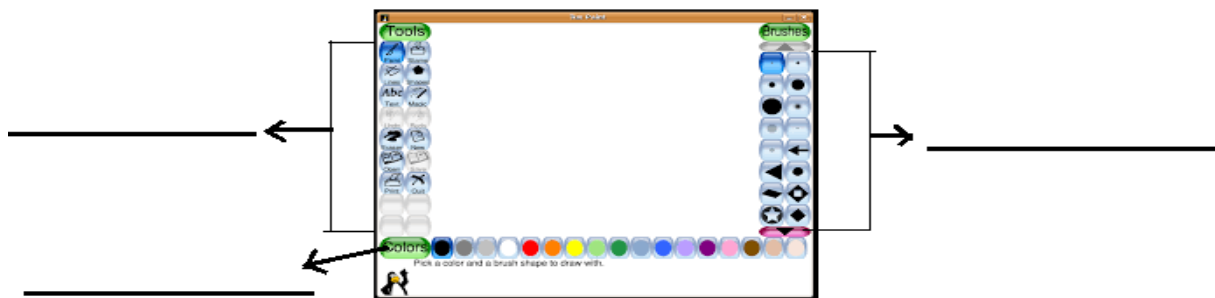
b) ROSURC - _____

e) PTCOILA- _____

c) YROEMM - _____

7. Lable it :

[0.5 x 3 = 1.5]



8. Write the appropriate name for the following:

[0.5 x 4 = 2]





DELHI PUBLIC SCHOOL

SAIL Township, Ranchi

SECOND SEMESTER (SESSION-2018-19)

SUBJECT: HINDI

CLASS: – II Sec:- _____

Roll no.:- _____

NAME:- _____

DATE :- 26.02.2019

M.O. :- _____

F. M. :- 80

1. निम्नलिखित वर्णों को जोड़कर शब्द बनाएँ – [1 x 2 = 2]
- क) क् + आ + ल् + आ – ख) क् + अ + म् + अ + ल् + अ –
2. सही मात्रा लगाएँ – [0.5 x 5 = 2.5]
- क) क त ब ख) क आ ग) त त ल
3. सही शब्द चुनकर रिक्त स्थान भरें – [0.5 x 10 = 5]
- | | | | | |
|---------|----------|-------|--------|-------|
| आएँगी, | बकरियाँ, | टिकट, | डाकघर, | आएगी, |
| स्टेशन, | आएँगे, | डर, | नदी, | आऊँगी |
- i) टी.टी. बिना यात्री पर जुर्माना लगाता है।
- ii) भेड़िए को देखकर गोरा गया।
- iii) सब चिट्ठियाँ पहले में जाती हैं।
- iv) सुबह एक छात्रा।
- v) सब लड़के शाम को।
- vi) रेलगाड़ी पर रुकती है।
- vii) कल दो औरतें।
- viii) भोलू के पास कई थीं।
- ix) कछुआ शर्म के कारण में जाकर छिप गया।
- x) मैं शाम को खेलने।
4. निम्नलिखित हिन्दी अंको के सामने उनके हिन्दी शब्दों को लिखें – [1 x 5 = 5]
- क) १८ – ख) ६ – ग) १४ –
- घ) १७ – ङ) ९ –
5. नीचे लिखे वाक्यों में जो सही है उनपर (✓) का और जो गलत है उनपर (✗) का निशान लगाएँ– [0.5 x 6 = 3]
- क) भोलू गोरा को बहुत प्यार करता था।
- ख) रमन के चाचाजी मुंबई में रहते थे।
- ग) घरों में चिट्ठियाँ खुद लानी पड़ती है।
- घ) गोरा एक बकरी का बच्चा था।
- ङ) शेखचिल्ली बड़े होने के सपने देखता था।
- च) टी.टी. हरे रंग का कोट पहनता है।

6. सही शब्द चुनकर रिक्त स्थानों को भरें -

[0.5 x 8 = 4]

जनवरी, सात, मंगलवार, रविवार, दिसम्बर, चौबीस, बारह, अगस्त

- क) को सभी कार्यालयों में अवकाश होता है।
ख) एक दिन-रात घंटों का होता है।
ग) एक सप्ताह में दिन होते हैं।
घ) महीने में अत्यधिक ठंड पड़ती है।
ङ) स्वतंत्रता दिवस पंद्रह और गणतंत्र दिवस छब्बीस.....
को मनाया जाता है।
च) सोमवार और बुधवार के बीच आता है।
छ) एक वर्ष में महीने होते हैं।

7. निम्नलिखित शब्दों के विलोम शब्द लिखें -

[1 x 5 = 5]

- क) अंदर x ख) पीछे x ग) धीरे x
घ) बुरा x ङ) थोड़ा x

8. अनेक शब्दों के लिए एक शब्द लिखें -

[1 x 5 = 5]

- क) कपड़े सिलने वाला -..... ख) सेना में काम करने वाला -.....
ग) शिक्षा देने वाला -..... घ) जूते बनाने वाला -.....
ङ) जो पढ़ा लिखा नहीं है -.....

9. निम्नलिखित शब्दों के एक-एक पर्यायवाची शब्द लिखें -

[1 x 5 = 5]

- क) वृक्ष -..... ख) सूर्य -..... ग) पुत्र -.....
घ) चाँद -..... ङ) पक्षी -.....

10. HOTS

रिक्त स्थानों में सही उत्तर लिखें -

[1 x 4 = 4]

- i) संयुक्ताक्षर का एक उदाहरण है।
ii) क् + ष =
iii) हिन्दी भाषा में स्वर हैं।
iv) द्वित्व व्यंजन का एक उदाहरण है।

11. निम्नलिखित प्रश्नों के उत्तर लिखें -

[2 x 6 = 12]

क) रमन के पिताजी ने किसको चिट्ठी लिखी ?

उत्तर -.....

.....

.....

ख) गोरा कौन था और वह कैसा दिखता था ?

उत्तर -.....

.....

.....

.....

ग) अंत में दादाजी ने क्या कहा ?

उत्तर -.....
.....
.....

घ) पहली बार खरगोश क्यों हार गया ?

उत्तर -.....
.....
.....

ङ) स्टेशन पर क्या बेचने वाले घूम रहे थे ?

उत्तर -.....
.....
.....

च) अंत में सब जानवरों ने क्या कहा ?

उत्तर -.....
.....
.....

12. शब्दों के अर्थ लिखें -

[1 x 5 = 5]

क) यात्री -.....

ख) शैतान -.....

ग) शर्म -.....

घ) कल्पना करना -.....

ङ) डाकपाल -.....

13. वाक्य बनाएँ -

[1 x 5 = 5]

क) डाकिया -.....

ख) दौड़ -.....

ग) मुलायम -.....

घ) गार्ड -.....

ङ) अकड़ -.....

14. किसने कहा? किससे कहा ?

[1 x 4 = 4]

क) शेखचिल्ली मत बनो।

उत्तर - ने से कहा।

ख) इतना अकड़ना नहीं चाहिए।

उत्तर - ने से कहा।

ग) तुम कहाँ चले गए थे ?

उत्तर – ने से कहा।

घ) यह घड़ा मेरे घर ले चलो।

उत्तर – ने से कहा।

15. निम्नलिखित शब्दों के बहुवचन लिखें – [1 x 6 = 6]

क) एक भेड़िया – बहुत ख) एक बकरी – बहुत

ग) एक आदमी – बहुत घ) एक चरवाहा – बहुत

ङ) एक पेड़ – बहुत च) एक पत्ती – बहुत

16. नीचे लिखे गद्यांश को ध्यान से पढ़कर निम्नलिखित प्रश्नों उत्तर दें– [0.5 + 0.5 + 1.5 = 2.5]

एक घने जंगल में एक शक्तिशाली हाथी रहता था। वह बहुत जिद्दी और घमंडी था। जंगल के सभी जानवर हाथी से डरते थे। गीदड़ तो उससे बहुत परेशान थे क्योंकि उनके बच्चे हाथी के पाँव के नीचे कुचले जाते थे।

क) एक घने जंगल में रहता था।

ख) हाथी से जंगल के सभी डरते थे।

ग) गीदड़ हाथियों से क्यों परेशान थे?

.....
.....

17. “अनुशासन” अथवा “ईमानदारी” पर पाँच पंक्तियाँ लिखें – [1 x 5 = 5]

.....
.....
.....
.....
.....
.....
.....
.....
.....
.....
.....
.....
.....
.....
.....
.....
.....
.....
.....



DELHI PUBLIC SCHOOL

SAIL Township, Ranchi

SECOND SEMESTER (SESSION-2018-19)

SUBJECT: EVS

DATE :- 28.02.2019

CLASS: – II **Sec:-** _____

M.O. :- _____

Roll no.:- _____

F. M. :- 80

NAME:- _____

1. Answer the following questions: [2 x 7 = 14]

a) When do we celebrate harvest festivals?

Ans.- _____

b) What is season?

Ans.- _____

c) Why can climbers not stand straight?

Ans.- _____

d) Where do wild animals live?

Ans.- _____

e) How do animals help us in growing crops?

Ans.- _____

f) Why is there no life on the Moon?

Ans.- _____

g) What is solar energy?

Ans.- _____

2. Define the following with 2 examples:

[3 x 3 = 9]

a) Religious festival - _____

b) Scavengers - _____

c) Creepers - _____

3. Fill in the blanks with the help of given clues:

[0.5 x 12 = 6]

Ramzan, burrow, omnivores, shrubs, loo, fins, trunk, leaves, tailorbird, tails, pillows, valleys

- a) _____ are known as 'Kitchen of the plant'.
- b) Rabbit lives in a _____.
- c) Hot wind that blows in summer is called _____.
- d) Fishes swims with the help of their _____ and _____.
- e) Low lands with fertile soil are called _____.
- f) _____ is the holy month in which Muslims keep fast.
- g) _____ stitches together leaves to make its nests.
- h) Feathers are used to fill _____ also.
- i) Animals that eat plants as well as animals also are called _____.
- j) Rose plant is an example of _____.
- k) Trees have thick, woody stem called as _____.

4. Name them:

[1 x 10 = 10]

- a) This season is also known as Basant in Hindi - _____
- b) It has the longest day and shortest night in a year in India- _____

- c) A country where leaders are chosen by the people through their votes_____
- d) These plants have weak stems and they grow along the ground-_____
- e) This animal live both on land and in water - _____
- f) These animals live in natural shelter - _____
- g) The largest desert in the world - _____
- h) The low lands between hills and mountains - _____
- i) It is called the ship of the desert - _____
- j) These animals eat only grass, fruit and leaves - _____

5. Match:

[0.5 x 8 = 4]

- | | | |
|---------------------------|----------------------|--------------------------|
| a) Honey and wax | i) island | <input type="checkbox"/> |
| b) beasts of burden | ii) crab | <input type="checkbox"/> |
| c) large water bodies | iii) jackal | <input type="checkbox"/> |
| d) eight planets | iv) plateau | <input type="checkbox"/> |
| e) flat on top like table | v) camels and horses | <input type="checkbox"/> |
| f) surrounded by water | vi) beehives | <input type="checkbox"/> |
| g) sea food | vii) oceans | <input type="checkbox"/> |
| h) scavengers | viii) solar system | <input type="checkbox"/> |

6. Write 'True' or 'False':

[1 x 8 = 8]

- a) 21st December has the shortest day and longest night. _____
- b) Monsoon brings rainfall. _____
- c) We have 4 different seasons. _____
- d) Planets revolve around the moon. _____
- e) Pets and farm animals live in man-made shelters. _____
- f) Roots grow above the ground. _____
- g) Season changes day to day. _____
- h) Pongal is celebrated in Tamil Nadu. _____

7. Write the name of 2 animals from which we get these things: [2 x 3 = 6]

a) Leather - _____

b) Eggs - _____

c) Manure - _____

8. Unscramble the words and complete the sentences given below: [1 x 6 = 6]

a) E S H E P - _____ b) L S K I - _____

c) P N A T L E S - _____ d) N O L I - _____

e) S D E S E - _____ f) R I N G S P - _____

i) The weather in _____ is pleasant.

ii) _____ gives us wool.

iii) There are eight _____ in solar system.

iv) _____ lives in den.

v) A fruit has _____ inside it.

vi) We get _____ from silkworm.

9. Name the part of the plant that does the following things: [1 x 4 = 4]

a) bears leaves - _____

b) fixes the plant to the soil - _____

c) has seeds inside it - _____

d) makes food for the plants - _____

10. HOTS [1 x 3 = 3]

a) Write the name of oceans/ seas which surrounds India?

i) _____ ii) _____

b) Which country is the biggest island in the world?

Ans.- _____

11. Draw, label and colour:

[2+ 2 + 4 + 2 = 10]

| | |
|---|---|
| <p><u>a) A carnivore</u></p> <hr/> | <p><u>b) One climber</u></p> <hr/> |
|---|---|

c) Plant with all parts :

d) A harvest festival



DELHI PUBLIC SCHOOL

SAIL Township, Ranchi

SECOND SEMESTER (SESSION-2018-19)

SUBJECT: ENGLISH

DATE :- 02.03.2019

CLASS: – II **Sec:-** _____

M.O. :- _____

Roll no.:- _____

F. M. :- 80

NAME:- _____

1. Fill in the blanks with suitable words from the box:

[0.5 x 10 = 5]

*lay, fly, wear, sail, live,
fight, climb, speak, sings, sweeps*

- a) Hens _____ eggs.
- b) Soldiers _____ for their country.
- c) Aeroplanes _____ in the sky.
- d) Birds _____ in nests.
- e) Boats _____ on water.
- f) We _____ woollen clothes in winter.
- g) Monkeys _____ the tree.
- h) We should always _____ the truth.
- i) Sita _____ beautifully.
- j) The sweeper _____ the floor.

2. Put a full stop or a question mark at the end of the sentences:

[0.5 x 10 = 5]

- a) Can you see some ducks in the lake
- b) I will go to Kolkata this year in December
- c) I live in Gandhi Nagar
- d) Can I borrow a pencil
- e) Where do you live
- f) Have you ever seen a snowfall
- g) Will you go alone
- h) When will the winter holidays begin
- i) The lion was angry
- j) The cranes come here from Siberia

3. Fill in the blanks with *is, are, or am* and the *-ing* form of suitable doing words given in the help box: [1 x 5 = 5]

watch, walk, wash, twinkle, fly

- a) The people _____ on the street.
b) I _____ my lunch box.
c) Sanjay _____ a kite.
d) Stars _____ in the sky.
e) The boys _____ television.

4. Underline the prepositions: [0.5 x 8 = 4]

- a) The apples are in the basket.
b) The basket is on the table.
c) The boat is under the bridge.
d) Ritu is standing between Rahul and Aman.
e) The boy jumped into the pool.
f) His head is above the water.
g) The dog jumped over the fence.
h) The man hid behind a house.

5. Tick the correct words in the brackets: [0.5 x 6 = 3]

- a) Sita has one brother (and , but) one sister.
b) Rina is fat (and , but) Ritu is slim.
c) Is Tom in class I (and , or) class II ?
d) Mita sat at the table (and, or) wrote the letter.
e) We have bought apples (but , and) mangoes.
f) Do you want to buy a small car (but, or) a big car ?

6. Answer the following questions: [2 x 6 = 12]

- a) What did the Queen Bee ask Bipul ?

Ans.- _____

b) What are the four things that little girl did?

Ans.- _____

c) Why did General Tang leave the army ?

Ans.- _____

d) Is Rezia really sick? Explain your answer.

Ans.- _____

e) How did Pied Piper get rid of the rats?

Ans.- _____

f) Who is Bipul ?

Ans.- _____

7. Write the meaning of given words:

[1 x 7 = 7]

a) twitched - _____

b) dull - _____

c) stunned - _____

d) gigantic - _____

e) sore - _____

f) brawny - _____

g) shrieking - _____

8. Make sentences: [1 x 6 = 6]

- a) weak - _____
- b) soldier- _____
- c) noise - _____
- d) weather- _____
- e) stripes - _____
- f) smooth - _____

9. Say whether each of the following is true or false: [1 x 5 = 5]

- a) The emperor ordered Mulan to return home. _____
- b) Bipul spoke to the zebra, then the tiger, then the snake. _____
- c) Mulan was older than her brother. _____
- d) The rats are very quiet. _____
- e) The mayor thinks that the Pied Piper is asking for too much money. _____

10. Write opposite of the following: [1 x 5 = 5]

- a) problem x _____
- b) catching x _____
- c) opened x _____
- d) strange x _____
- e) difficult x _____

11. Read the passage carefully and answer the questions: [1+1+2+1+1 = 6]

Aarti is Mina's best friend. She is getting ready to go in Mina's birthday party in the evening. Aarti bought a big book of stories as a birthday gift for Mina. Aarti wants to wrap it in red colour paper. She knows that red is Mina's favourite colour. She can't find any red paper. Aarti is sad. Looking at Aarti's sad face her mother told her to wrap the gift in her red scarf. Aarti was delighted.

a) Who is Mina's best friend?
Ans.- _____

b) What is Mina's favourite colour?
Ans.- _____

c) Where is Aarti going in the evening?

Ans.- _____

d) Complete the following:

i) Aarti bought a big book of stories as a - _____

ii) Aarti wants to wrap it in _____

12. Circle the correct words in the brackets: **[0.5 x 6 = 3]**

a) (What, When) do you get up in the morning?

b) (Who, When) is your class teacher ?

c) (What , Which) is lying under the bed?

d) (Where , Who) is your school bag?

e) (Who, When) is your birthday ?

f) (Where, Which) dress do you like?

13. Write a composition on any one of the given topic: **[5 x 1 = 5]**

a) Truthfulness

b) Time is precious

14. You had gone for a picnic trip from school to “Fun Castle”.
Write a letter to your elder brother to share your experience:

[5 x 1 = 5]

15. HOTS

a) Who is the poet of the poem “That little Grey-Haired lady”?

[1]

Ans.- _____

b) Divide the list of words below into two groups and write each word in the correct box:

[3]

[smile, throat, eye, cough, speak, leg]

| <u>Verb</u> | <u>Noun</u> |
|----------------------|----------------------|
| | |



DELHI PUBLIC SCHOOL

SAIL Township, Ranchi

SECOND SEMESTER (SESSION-2018-19)

SUBJECT: MATHS

DATE :- 06.03.2019

CLASS: – II **Sec:-** _____

M.O. :- _____

Roll no.:- _____

F. M. :- 80

NAME:- _____

1. Fill in the blanks with the given help box: [0.5 x 14 = 7]

| | | | | | | |
|----------------|-------------------|------------------|---------------|----------------|-------------|-------------|
| <i>Tables,</i> | <i>0,</i> | <i>Division,</i> | <i>ruler,</i> | <i>m,</i> | <i>100,</i> | <i>cm,</i> |
| <i>grams,</i> | <i>Kilograms,</i> | <i>1000,</i> | <i>ml,</i> | <i>weight,</i> | <i>2,</i> | <i>mass</i> |

- a) _____ is repeated subtraction.
- b) We use multiplication _____ to do division sums.
- c) $9 \div \text{_____} = 0$
- d) Our _____ has centimetre marks on one side.
- e) Centimetre is written as _____ in short.
- f) Metre is written as _____ in short.
- g) $1 \text{ m} = \text{_____ cm.}$
- h) The _____ of a thing tells us how heavy it is.
- i) Fixed weights comes in _____ and _____.
- j) $1 \text{ kg} = \text{_____ g.}$
- k) $1 \text{ l} = 1000 \text{ _____.}$
- l) Mass is commonly called _____.
- m) Dividing by _____ gives half the number.

2. Write True or False: [0.5 x 10 = 5]

- a) Kg is short form of grams. - _____
- b) Cm tells us how heavy it is. - _____
- c) 3 is half of 9. - _____
- d) $0 \div \text{counting number} = 0$ - _____
- e) Centimetre is a small fixed length. - _____
- f) Bigger lengths are measured in metres. - _____
- g) 1 kilogram is lighter than 1 gram. - _____
- h) Short form of millilitres is g. - _____
- i) Sign of divide is [x] - _____
- j) Liquids are measured in *l* and *ml*. - _____

3. Match: [1 x 7 = 7]

Column – A

Column – B

a) clothes

i) 2 l

b) grams and kilograms

ii) 300 cm

c) liquids

iii) litres and millilitres

d) 3m

iv) fixed weights

e) 2000ml

v) metres

f) $100 + 25$

vi) 0

g) 15×0

vii) 125

| |
|--|
| |
| |
| |
| |
| |
| |
| |

4. Write number name: [1 x 8 = 8]

a) 1000 - _____

b) 499 - _____

c) 766 - _____

d) 842 - _____

e) 671 - _____

f) 909 - _____

g) 816 - _____

h) 512 - _____

5. Divide by long form: [1 x 5 = 5]

a) $7 \overline{) 28}$

b) $5 \overline{) 15}$

c) $8 \overline{) 40}$

Quotient = _____
Remainder = _____

Quotient = _____
Remainder = _____

Quotient = _____
Remainder = _____

d) $6 \overline{) 36}$

e) $9 \overline{) 81}$

Quotient = _____
Remainder = _____

Quotient = _____
Remainder = _____

6. Fill in the blanks:

[0.5 x 10 = 5]

a) $9 \times 3 =$ _____

f) $9 \times$ _____ $= 81$

b) $15 \times 4 =$ _____

g) _____ $\times 6 = 30$

c) $14 \times 5 =$ _____

h) _____ $\times 2 = 26$

d) $13 \times 2 =$ _____

i) $15 \times$ _____ $= 30$

e) $12 \times 9 =$ _____

j) $12 \times$ _____ $= 0$

7. Add and subtract:

[1 x 10 = 10]

a)
$$\begin{array}{r} 309 \text{ m} \\ + 406 \text{ m} \\ \hline \end{array}$$

b)
$$\begin{array}{r} 906 \text{ cm} \\ - 379 \text{ cm} \\ \hline \end{array}$$

c)
$$\begin{array}{r} 227 \text{ kg} \\ + 38 \text{ kg} \\ \hline \end{array}$$

d)
$$\begin{array}{r} 133 \text{ g} \\ - 47 \text{ g} \\ \hline \end{array}$$

e)
$$\begin{array}{r} 362 \text{ ml} \\ - 65 \text{ ml} \\ \hline \end{array}$$

f)
$$\begin{array}{r} 404 \text{ ml} \\ + 401 \text{ ml} \\ \hline \end{array}$$

g)
$$\begin{array}{r} 9 \text{ l} \\ + 25 \text{ l} \\ \hline \end{array}$$

h)
$$\begin{array}{r} 355 \text{ ml} \\ + 52 \text{ ml} \\ \hline \end{array}$$

i)
$$\begin{array}{r} 270 \text{ kg} \\ - 54 \text{ kg} \\ \hline \end{array}$$

j)
$$\begin{array}{r} 88 \text{ g} \\ - 49 \text{ g} \\ \hline \end{array}$$

8. Divide by repeated subtraction:

[2.5 x 4 = 10]

a) $20 \div 5$

b) $16 \div 4$

c) $32 \div 8$

d) $36 \div 9$

$\therefore 20 \div 5 =$ _____

$\therefore 16 \div 4 =$ _____

$\therefore 32 \div 8 =$ _____

$\therefore 36 \div 9 =$ _____

9. Write division facts:

[2 x 5 = 10]

a) $10 \times 6 = 60$

b) $8 \times 4 = 32$

c) $7 \times 3 = 21$

d) $9 \times 7 = 63$

e) $6 \times 9 = 54$

10. Solve these story sums:

[2.5 x 4 = 10]

a) 50 laddoos are packed equally in 10 boxes. How many laddoos are there in each box?

b) Adi's toy train is 48cm long. Varun's train is 52 cm longer. How long is Varun's train?

c) Mrs. Murthy gave a tailor 105 metres of cloth. The tailor used 32 metres of cloth. How much cloth did he return?

d) Usha had 214 ml of milk in the morning and 200 ml of milk in the evening. How much milk did she have in all?

11. HOTS

Based on the division given below fill in the blanks :

[0.5 x 6 = 3]

a) $6 \div 2 = 3$

We divide _____ beads equally between _____ toothpicks. Each toothpick got _____ beads.

b) $12 \div 3 = 4$

_____ pencils divided into _____ equal groups gives _____ pencils in each.



DELHI PUBLIC SCHOOL

SAIL Township, Ranchi

SECOND SEMESTER (SESSION-2018-19)

SUBJECT: General Knowledge

DATE :- 18.02.2019

CLASS: – II Sec:- _____

M.O. :- _____

Roll no.:- _____

F. M. :- 25

NAME:- _____

I. Fill in the blanks: [0.5 x 10 = 5]
(choose the correct answer from the options given below)

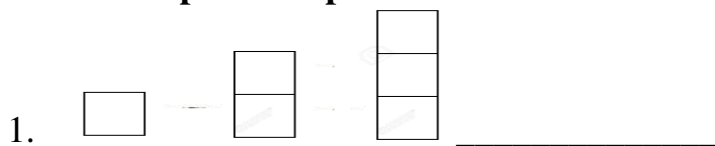
Andhra Pradesh, Thames, Thomas A. Edison, Ganga,
Rapunzel, recycled, fracture, spring, Dhaka, Australia

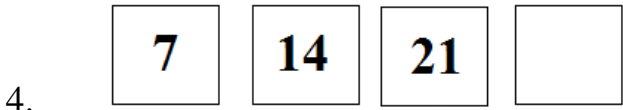
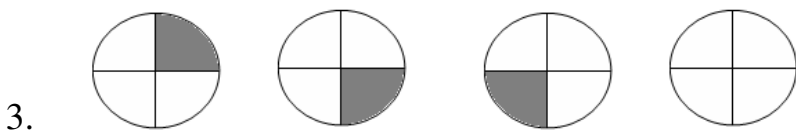
- 1) _____ is the largest river of India.
- 2) The water on the Earth is constantly _____.
- 3) _____ is a story of a Princess with long hair who is locked in a tower.
- 4) Kuchipudi is a dance form of _____.
- 5) Electric bulb was invented by _____.
- 6) The 2018 Commonwealth Games was hosted by _____.
- 7) London is situated on the bank of river _____.
- 8) When bones crack or break it is called _____.
- 9) During _____ season lots of flowers bloom.
- 10) _____ is the capital of Bangladesh.

II. Name the following: [1 x 10 = 10]

- 1) World's longest river : _____
- 2) In this city the Wimbledon tournament is held every year: _____
- 3) Governor of RBI : _____
- 4) A healthy dish made of many raw vegetables: _____
- 5) Largest planet : _____
- 6) The strongest muscle of our body is present here: _____
- 7) On 22nd April, we show thankfulness to our planet and we celebrate this day as: _____
- 8) When a river overflows it causes: _____
- 9) Classical dance of Uttar Pradesh : _____
- 10) Capital of Egypt, the famous Pyramid of Giza is located here: _____

III. Complete the pattern: [0.5 x 4 = 2]





IV. Match the following:

[0.5 x 10 = 5]

Column – A

Column – B

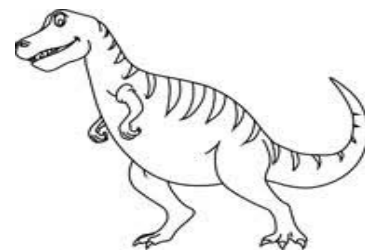
- 1) J. L. Baird
- 2) dodo
- 3) sea water
- 4) Paris
- 5) for reading books
- 6) heart muscles
- 7) wild plants
- 8) highest waterfall
- 9) Olympic sport
- 10) India’s longest rail road

- Kindle _____
- Cardiac _____
- weeds _____
- Angel Fall _____
- Assam _____
- Seine _____
- swimming _____
- television _____
- salty _____
- extinct _____

V. Identify the following from the options:

[0.5 x 6=3]

| | | |
|--------------------------|----------------------|--------------------|
| Saina Nehwal, chilly, | A R Rahman, pail, | gauze, dinosaur |
|--------------------------|----------------------|--------------------|





DELHI PUBLIC SCHOOL

SAIL Township, Ranchi

SECOND SEMESTER (SESSION-2018-19)

SUBJECT: Computer

DATE :- 20.02.2019

CLASS: – II Sec:- _____

M.O. :- _____

Roll no.:- _____

F. M. :- 20

NAME:- _____

Q1) Fill in the blanks.

[0.5 x 6=3]

Cursor , CS , Fill Color , Toggle , LOGO , Enter

- To move to a new line in a paragraph press the _____ key.
- _____ tool is used to fill colours in enclosed figure.
- _____ keys change their state(ON/OFF).
- Blinking vertical line that looks like 'I' is _____.
- _____ is computer language.
- In LOGO, _____ command clears the screen.

Q2) Write the full forms of these :-

[1 x 4=4]

- FD - _____.
- CT - _____.
- RT - _____.
- CS - _____.

Q3) Write the missing letters :-

[0.5 x 4=2]

- G ___ A P H I ___ S.
- E ___ ___ I P ___ E.
- B ___ I ___ K I N ___.
- L ___ G ___.

Q4) Write the numbers of keys present on the standard keyboard :-







[0.5 x 4=2]

- Function keys- _____
- Caps lock key- _____
- Number keys- _____
- Arrow keys- _____

P.T.O.

Q5) Identify these pictures :-

[0.5 x 6=3]

- a)  _____
- b)  _____
- c)  _____
- d)  _____
- e)  _____
- f)  _____

Q6) Write the command for :-

[0.5 x 4=2]

- a) To move turtle 40 steps forward- _____.
- b) To move turtle 100 steps backward - _____.
- c) To turn the turtle in right direction - _____.
- d) To turn the turtle 90 steps toward left - _____.

Q7) Answer the following:-

[1 x 4=4]

- a) What is color box?

- b) What is turtle?

- c) What do you mean by click?

- d) Write names of any three keys present on the standard keyboard?



DELHI PUBLIC SCHOOL

SAIL Township, Ranchi

SECOND SEMESTER (SESSION-2019-20)

SUBJECT: EVS

DATE :- 27.02.2020

CLASS: – II Sec:- _____

M.O. :- _____

Roll no.:- _____

F. M. :- 80

NAME:- _____

1. Fill in the missing letters. [0.5 x 6 = 3]

a. M O _____ N T A I N S

b. H _____ R N S

c. S P A _____ R O W

d. T R U N _____

e. R A _____ N Y

f. P _____ N G A L

2. Circle the odd one out: [0.5 x 4 = 2]

a) curd cheese wool butter

b) Moon Venus Earth Mars

c) elephant zebra jackal deer

d) flower branch water roots

3. Define them with examples. [2 x 3 = 6]

a. climbers- _____

b. scavengers- _____

c. shrub - _____

4. Fill in the blanks with the help of the words given in help box:

[0.5 x 10 = 5]

| |
|---|
| <i>Tibetan, trees, loo, burrow, silk,</i> <i>Bihu, python, Diwali, plains, feathers,</i> |
|---|

- a) A rabbit's hole is called a _____.
- b) _____ is a fine and soft cloth.
- c) _____ Plateau is the biggest plateau in the world.
- d) Very big, tall and strong plants are called _____.
- e) Hot winds that blow in summer are called _____.
- f) _____ is the festival of lights.
- g) A _____ can swallow an animal larger than itself.
- h) Fallen _____ of some birds are used to make pillow.
- i) _____ are flat areas of land.
- j) _____ is celebrated in Assam.

5. Name them:

[1 x 9 = 9]

- a) Low lands between hills and mountains – _____
- b) It is a bird that stitches together leaves to make its nests – _____
- c) Rangoli made up of rice powder – _____
- d) Kitchen of the green plants – _____
- e) Areas with little rainfall – _____
- f) Biggest water animal – _____
- g) Ship of the desert – _____
- h) Free meal served in a Gurudwara – _____
- i) Write the name of the virus spread in China in recent time – _____

6. Answer the following questions in a full sentence:

[1 x 2 = 2]

- a) Which type of plastic has been discouraged by our Prime Minister?

Ans.- _____

- b) Which plant is used as a medicine?

Ans.- _____

7. Answer the following questions:

[2.5 x 6 = 15]

- a) When do we celebrate harvest festivals?

Ans.- _____

b) How do fishes swim in water?

Ans.- _____

c) What are wild animals?

Ans.- _____

d) What is solar energy?

Ans.- _____

e) How do animals help us in growing crops?

Ans.- _____

f) What do plants need to make their own food?

Ans.- _____

8. Match the following:

[0.5 x 10 = 5]

Column – A

Column – B

- | | | |
|---------------------|---|--------------------------|
| a) herbs | i) manure | <input type="checkbox"/> |
| b) plateau | ii) thin, soft, green | <input type="checkbox"/> |
| c) dried dung | iii) autumn | <input type="checkbox"/> |
| d) dry and windy | iv) flat on top like a table | <input type="checkbox"/> |
| e) snake | v) national festival | <input type="checkbox"/> |
| f) Independence Day | vi) crawls | <input type="checkbox"/> |
| g) valleys | vii) longest night | <input type="checkbox"/> |
| h) crab | viii) are lowlands with very fertile soil | <input type="checkbox"/> |
| i) 21st December | ix) Gandhi jayanti | <input type="checkbox"/> |
| j) 2nd October | x) sea food | <input type="checkbox"/> |

9. Unscramble these words and write correctly:

[1 x 6 = 6]

a) U T E A P L A - _____

b) L O N W A T M E E R - _____

c) T O Q U I M O S - _____

d) L E D S C R A B M - _____

e) S A N T P L E A - _____

f) N A M O - _____

10. Write 'True' or 'False':

[0.5 x 10 = 5]

a) Fish have neither legs nor wings. _____

b) Dogs were not the first animals to be tamed by man. _____

c) Australia is the smallest island in the world. _____

d) Leaves make food for the plant. _____

e) Creepers do not bear big fruits. _____

f) A model of Earth is called a globe. _____

g) Neil Armstrong was not the first man to step on the moon in 1969. _____

h) Camel is called beast of burden. _____

i) There are nine planets in our solar system. _____

j) We should put animals in cages. _____

11. Think and answer the following questions:

[1 x 2 = 2]

a) What is the motto of our school?

Ans.- _____

b) When do we celebrate World Yoga Day?

Ans.- _____

12. Write 2 examples for each:

[1 x 10 = 10]

a) planets – i) _____

ii) _____

b) omnivores– i) _____

ii) _____

c) load carrying animals– i) _____

ii) _____

d) religious festivals – i) _____

ii) _____

e) landforms– i) _____

ii) _____

13. Draw, colour and label:

[2 x 5 = 10]

a) One creeper

b) One food item which we get from animals

c) One thing which we use in rainy season

d) One herbivore

e) One national festival



DELHI PUBLIC SCHOOL

SAIL Township, Ranchi

SECOND SEMESTER (SESSION-2019-20)

SUBJECT: ENGLISH

DATE :- 24.02.2020

CLASS: – II **Sec:-** _____

M.O. :- _____

Roll no.:- _____

F. M. :- 80

NAME:- _____

1. Underline the adjectives. [0.5 x 8 = 4]

Seema is three years old. Her mother dressed her up in a red dress and black shoes. She slipped on the muddy road. Her red dress caught in a thorny bush. She saw a little boy sitting under a shady tree.

2. Circle the correct word. [0.5 x 6 = 3]

- i. Come and sit (beside / over) me.
- ii. Rahul scored a goal (and / but) his team lost.
- iii. (Where / Who) are you going?
- iv. Mala is climbing the tree (careful / carefully) .
- v. (Is this / Is these) Sunita's pen?
- vi. Please give me some salt and (saucer / pepper).

3. Tick the correct answer. [0.5 x 6 = 3]

- i. Imran is tall.....
 - a) and his brother is short.
 - b) but his brother is short.
- ii. Brownny is jumping.....
 - a) above the gate.
 - b) over the gate.
- iii. The carpenter is working.....
 - a) brightly.
 - b) quietly.
- iv. The opposite of sleep.....
 - a) awake
 - b) asleep
- v. Is that Roshan?
 - a) Yes, this is Roshan.
 - b) Yes, that is Roshan.
- vi. Tick the correct spelling.
 - a) Competition
 - b) Compettition

4. Write true or false.

[0.5 x 10 = 5]

- a) The indigo jackal assigned responsibilities to every animal. (_____)
- b) Mother says, like little birdie, "Let me rise and fly away. (_____)
- c) The mighty ocean is formed with little 'drops of water'. (_____)
- d) Ma Liang was rich and kind person. (_____)
- e) The merry brown thrush was singing away in the tree. (_____)
- f) Santa looked fondly at all the eager faces around the children. (_____)
- g) The animals caught the jackal and beat him. (_____)
- h) The merry brown thrush is sitting up in a tree. (_____)
- i) Mr. Santa was not sick. (_____)
- j) Little Brown thrush is singing an unhappy song. (_____)

5. Fill in the blanks by choosing the correct words:-

[0.5 x 8 = 4]

- i. My mother asked the _____ (fair / fare) from the cab driver.
- ii. I can _____ (here / hear) the birds chirping in the garden.
- iii. We have been waiting here for _____. (hours / ours)
- iv. My brother bought me a _____ (new / knew) pair of shoes.
- v. Many students _____ absent yesterday. (was / were)
- vi. My sister _____ in Mohali last week. (were / was)
- vii. Udit _____ tired after school. (were / was)
- viii. He _____ very excited. (was / were)

6. Fill in the correct preposition:-

[0.5 x 6 = 3]

- i. There were few vehicles _____ the bridge. (on / inside)
- ii. She is _____ the restaurant. (over / inside)
- iii. The women is sitting _____ the rug. (under / on)
- iv. Jeena sat _____ Michael. (with / within)
- v. Bring a grocery bag _____ you. (to / with)
- vi. Let's meet _____ 12:30 pm. (in / at)

7. Write the correct spellings:-

[0.5 x 6 = 3]

- a) neighborhood - _____
- b) skiping - _____
- c) behaveour - _____
- d) princpal - _____
- e) librery - _____
- f) comparision - _____

8. Write a question for each answer:

[1 x 2 = 2]

- a. I am Aditi. I am your new classmate.

- b. My parents are going to their relative's house.

_____ Page 2 of 6

9. Answer these questions in a full sentence: [1 x 2 = 2]

i. Which poem is written by Lucy Larcom in your Literature Reader book?

ii. What do you mean by ' Paths of Virtue' in the poem "Little drops of water"?

10. Write the meaning of each word:- [1 x 7 = 7]

a) terrified - _____

e) meddle - _____

b) humble - _____

f) peep of the day - _____

c) grateful - _____

g) heathen - _____

d) beamed - _____

11. Write the synonyms of each:- [1 x 5 = 5]

a) scream - _____

d) supper - _____

b) jump - _____

e) burglar - _____

c) tiptoed - _____

12. Make sentences: [1 x 7 = 7]

a) search - _____

b) stray - _____

c) jealous - _____

d) curious - _____

e) knitted - _____

f) interfere - _____

g) protect - _____

13. Fill in the blanks:- (Refer to the chapters of Literature Reader) [1 x 5 = 5]

a. It was a beautiful December day, with clear blue skies and snow-covered _____.

b. Jackal _____ into a nearby village in search of food.

c. There was a big _____ of indigo dye inside.

d. Little deeds of kindness and words of love make our earth an _____.

e. The young man drew a _____ mountain.

14. Answer the following questions:-

[2 x 6= 12]

a) What request did the birdie make to her mother?

Ans.- _____

b) What did village dogs do?

Ans.- _____

c) Is it possible to make our earth a heaven? How?

Ans.- _____

d) Who was jealous of Ma-Liang? What did he plan to do?

Ans.- _____

e) What had touched Santa's heart?

Ans.- _____

f) Who is sitting in a tree and what is he doing?

Ans.- _____

15. Read the passage carefully and answer the following questions:-

[1 x 5 = 5]

Shiny was a tiny star. She lived in the sky with her parents. She wanted to travel around to see what was there in other places. Her parents told her that she was too little to go out on her own and that she would have to wait. One day, Shiny saw a lovely green patch with colourful dots on it, deep down from the sky. She forgot what her parents had said and flew down to look at it. But she flew so fast, that she soon got lost. She didn't know where her home was. So, as a result she had to stay on earth forever.

A. Answer these questions:-

i) Why did Shiny want to travel around?

ii) What did Shiny see one day?

iii) Who got lost in the story?

B. Fill in the blanks:-

i) She forgot what her _____ had said and flew down to look at it.

ii) Shiney was a _____ star.

C. Write the opposites from the passage only :-

i) huge x _____ ii) shallow x _____

16. Write a paragraph (5 - 6 lines) on any one of the given topic: [1 x 5 = 5]

a) Time is precious b) Discipline c) My country



DELHI PUBLIC SCHOOL

SAIL Township, Ranchi

SECOND SEMESTER (SESSION-2019-20)

SUBJECT: HINDI

DATE :- 02.03.2020

CLASS: – II Sec:- _____

M.O. :- _____

Roll no.:- _____

F. M. :- 80

NAME:- _____

1. दिए गए प्रश्नों के उत्तर लिखें – [2 x 6 = 12]
क) टी. टी. क्या करता है ?

उत्तर –

.....

.....

- ख) रामचंद्रन ने गुठली क्यों नहीं फेंकी ?

उत्तर –

.....

.....

- ग) "कौन जीता" कहानी से हमें क्या शिक्षा मिलती है ?

उत्तर –

.....

.....

- घ) डाकघर में काम करनेवाला आदमी चिट्ठियों का क्या करेगा ?

उत्तर –

.....

.....

- ड) दादाजी ने पानी का बाल्टी बाहर क्यों रखा ?

उत्तर –

.....

.....

च) सिर पर घड़ा रखकर शेखचिल्ली क्या सोचने लगा ?

उत्तर -.....
.....
.....

2. दिए गए शब्दों के अर्थ लिखें : [1 x 5 = 5]

क) यात्री -..... ख) पुताई -.....

ग) शर्म -..... घ) समझदार -.....

ङ) डाकिया -.....

3. दिए गए शब्दों से वाक्य बनाइए - [1 x 5 = 5]

क) घमंड -.....

ख) चिट्ठी -.....

ग) समझदार -.....

घ) डिब्बा -.....

ङ) रफ्तार -.....

4. किसने कहा ? किससे कहा ? [0.5 x 4 = 2]

क) "मुझे दौड़ में कोई नहीं हरा सकता।"

.....

ख) "शेखचिल्ली मत बनो।"

.....

5. नीचे दिए गए गद्यांश को पढ़कर प्रश्नों के उत्तर दें।

यात्रा शिक्षा का साधन है। शिक्षा हमारे चरित्र का निर्माण करता है। जब हम यात्रा करते हैं तो हमें चीज़ें संभालनी पड़ती हैं, अपना टिकट रखना पड़ता है और ठीक समय पर गाड़ी पकड़नी होती है। यात्रा में हमें अपनी मदद खुद करनी पड़ती है। जो हमें आत्मनिर्भर होने में मदद करता है। भिन्न-भिन्न स्थानों को देखने और हर तरह के लोगों से बात करने में हम कई नई-चीज़ें सीखते हैं। यूरोप में यात्रा के बिना शिक्षा अधूरी समझी जाती है। प्राचीन भारत में तीर्थयात्रा को बड़ा महत्त्व दिया जाता था।

पूरे एक वाक्य में उत्तर दें: - [4.5]

क) किस देश में शिक्षा यात्रा के बिना अधूरी है? (1)

उत्तर -.....

ख) प्राचीन भारत में किसे महत्त्व दिया जाता था? (1)

उत्तर -.....

ग) यात्रा हमें किस चीज़ में मदद करता है ? (1)

उत्तर –

घ) विलोम शब्द लिखो : – (गद्यांश से चुनकर) (1)

i) छोटा – ii) पुरानी –

ङ) वाक्य पूरा करो :- (0.5)

i) शिक्षा हमारे करता है।

6. किसी एक विषय पर अनुच्छेद लिखें।

[1 x 5 = 5]

क) कर भला तो हो भला ख) जहाँ चाह वहाँ राह ग) गणतंत्र दिवस

.....

.....

.....

.....

.....

.....

.....

.....

.....

.....

.....

.....

.....

.....

.....

.....

.....

.....

.....

.....

.....

.....

.....

7. सही शब्द चुनकर रिक्त स्थानों को भरें –

[0.5 x 10 = 5]

| | | | | | | | | | |
|-------|--------|------|---------|--------|-----------|---------|-------|----------|---------|
| टिकट, | पटाखे, | नदी, | मुर्गी, | डाकघर, | पत्रपेटी, | कल्पना, | घमंड, | त्योहार, | रफ़्तार |
|-------|--------|------|---------|--------|-----------|---------|-------|----------|---------|

क) रेलगाड़ी तेज़ से चल रही थी।

ख) का रंग लाल होता है।

ग) शेखचिल्ली अमीर होने की करने लगा।

घ) दीवाली खुशी का है।

ङ) हमे कभी भी नहीं करना चाहिए।

च) टी. टी. बिना यात्री पर जुर्माना लगाता है।

छ) सब शहरों में होते हैं।

ज) कछुआ शर्म के कारण में जाकर छुप गया।

झ) कोई बड़ा आदमी पास हो तभी चलाने चाहिए।

ञ) शेखचिल्ली ने उन पैसों से एक खरीदने की सोची।

8. दिए गए शब्द के समान अर्थ वाले शब्द पर सही (✓) का चिह्न लगाओ – [0.5 x 6 = 3]
- i) अमीर – आम आना धनवान
- ii) तंग – परेशान तन ढीला
- iii) धरती – जमना जाना ज़मीन
- iv) मुलायम – नरम कठोर कड़ा
- v) जंगल – बाग पौधे वन
- vi) बगीचा – पौधे बाग गमला

9. सही वर्तनी (Spelling) पर (✓) का चिह्न लगाओ – [0.5 x 5 = 2.5]
- i) गाडी गाढ़ी गाड़ी गाडी
- ii) फुटवाल फुटबॉल फुटबॉल फूटबॉल
- iii) धिरे धीरे धीरे धीरेए
- iv) परीवार परिवार परीबार परिवार
- v) स्टेशन स्टेशन स्टैशन सटेशन

10. दिए गए वर्णों को जोड़ कर शब्द बनाएँ – [1 x 2 = 2]
- क) श् + र + म् + इ + क् + अ =.....
- ख) क् + ऐ + ल् + आ + श् + अ =.....

11. निम्नलिखित हिन्दी अंको के सामने उनके हिन्दी शब्दों को लिखें – [1 x 5 = 5]
- क) 99 –..... ख) ५ –..... ग) ३ –.....
- घ) 9३ –..... ङ) 9५ –.....

12. निम्नलिखित शब्दों के विलोम शब्द लिखें – [1 x 5 = 5]
- क) गीला x ख) आगे x ग) तेज़ x
- घ) दूर x ङ) साफ x

13. अनेक शब्दों के लिए एक शब्द लिखें – [1 x 5 = 5]
- क) लकड़ी का काम करने वाला –..... ख) मिट्टी के बरतन बनाने वाला –.....
- ग) जूते बनाने वाला –..... घ) जो पढ़ा लिखा नहीं है –.....
- ङ) कपड़े धोने वाला –.....

14. बहुवचन लिखें: — [1 x 6 = 6]
- क) तितली —..... घ) फूल—.....
- ख) किताब —..... ङ) सड़क —.....
- ग) वस्तु—..... च) बकरी —.....

15. दिए गए कोष्ठक से शब्द चुनकर भरें : — [0.5 x 8 = 4]

| | | | | | | | |
|--------|---------|--------|---------|--------|----------|--------------|-------|
| मार्च, | सोमवार, | इतवार, | शनिवार, | जनवरी, | दिसम्बर, | बृहस्पतिवार, | अगस्त |
|--------|---------|--------|---------|--------|----------|--------------|-------|

- क) गणतंत्र दिवस २६ को मनाया जाता है।
- ख) नया सप्ताह से शुरू होता है।
- ग) शुक्रवार और रविवार के बीच आता है।
- घ) महीने में अत्यधिक ठंड पड़ती है।
- ङ) रविवार को भी कहते हैं।
- च) को वीरवार व गुरुवार भी कहते हैं।
- छ) वर्षा ऋतु का महीना का होता है।
- ज) हमारी वार्षिक परीक्षा महीने में होती है।

16. निम्न शब्दों के एक-एक पर्यायवाची शब्द लिखें — [1 x 5 = 5]

- क) सूर्य —..... ख) पक्षी —.....
- ग) घर —..... घ) फूल —.....
- ङ) पुत्र —.....

17. सही उत्तर दें :- [1 x 4 = 4]

क) जिस ध्वनी को न तो स्वर माना जाता है और न ही व्यंजन, उसे क्या कहते हैं ?

उत्तर —.....

ख) "यह कौन है ? हाथ में कागज़-कलम लेकर आया है। उसने काला कोट भी पहन रखा है।" इन पंक्तियों को किस पाठ से लिया गया है ? पाठ का नाम लिखें।

उत्तर —.....

ग) अंग्रेजी भाषा की ध्वनि से एक शब्द लिखें।

उत्तर —.....

घ) जिन शब्दों का पहला व्यंजन स्वर रहित और दूसरा स्वर सहित होता है, उसे क्या कहते हैं ?

उत्तर —.....



DELHI PUBLIC SCHOOL

SAIL Township, Ranchi

SECOND SEMESTER (SESSION-2019- 20)

SUBJECT: Maths

DATE :- 04.03.2020

CLASS: – II Sec:- _____

M.O. :- _____

Roll no.:- _____

F. M. :- 80

NAME:- _____

1. Fill in the blanks: [0.5 x 12 = 6]

- a) _____ is a small fixed length.
- b) Division is repeated _____.
- c) _____ are measured in litre and millilitre.
- d) 1 kg = _____ g.
- e) Liquid like oil and juice are measured in _____.
- f) 200 g + 50 g + 50 g = _____ g.
- g) 500 g + 500 g = _____ kg.
- h) Mass is also called _____.
- i) Short form of millilitre is _____ and litre is _____.
- j) Bigger unit of weight is _____.
- k) _____ tells us how heavy is the thing.

2. Write 'True' or 'False': [0.5 x 6 = 3]

- a) 12 divided by 2 gives quotient 7. _____
- b) Your ruler has kg marks on it. _____
- c) Length of saree is measured in kg. _____
- d) Liquids are measured in kg. _____
- e) Six hundred seventy six is written as 60076. _____
- f) Ten times fifteen are 150. _____

3. Match the following: [0.5 x 8 = 4]

| A | B | |
|-----------------|---------|--------------------------|
| a) $10 \div 10$ | 1000 ml | <input type="checkbox"/> |
| b) 2 kg | 27 | <input type="checkbox"/> |
| c) 1 m | 0 | <input type="checkbox"/> |
| d) 3 L 470 ml | 8 | <input type="checkbox"/> |
| e) $72 \div 9$ | 3470 ml | <input type="checkbox"/> |
| f) $0 \div 8$ | 100 cm | <input type="checkbox"/> |
| g) $27 \div 1$ | 2000 g | <input type="checkbox"/> |
| h) 1 L | 1 | <input type="checkbox"/> |

4. Write the number names of the following:

[1 x 6 = 6]

- a) 409 - _____
- b) 519 - _____
- c) 628 - _____
- d) 788 - _____
- e) 800 - _____
- f) 1000 - _____

5. Divide the following by long division method and write quotient and remainder.

[2 x 5 = 10]

- a) $9 \div 9 =$ _____
- b) $28 \div 7 =$ _____
- c) $36 \div 6 =$ _____

Q -

Q -

Q -

R -

R -

R -

d) $60 \div 10 =$ _____

e) $40 \div 10 =$ _____

Q -

Q -

R -

R -

6. Divide the following by repeated subtraction.

[2.5 x 4 = 10]

- a) $20 \div 5 =$ _____
- b) $32 \div 8 =$ _____

c) $16 \div 4 =$ _____

d) $40 \div 10 =$ _____

7. Write the division facts:

[2 x 4 = 8]

a) $4 \times 9 = 36$

b) $3 \times 8 = 24$

c) $10 \times 5 = 50$

d) $7 \times 5 = 35$

8. Fill in the blanks:

[0.5 x 10 = 5]

a) $9 \times 5 =$ _____

b) $9 \times 9 =$ _____

c) $11 \times 6 =$ _____

d) $14 \times 5 =$ _____

e) $12 \times 6 =$ _____

f) $12 \times 4 =$ _____

g) $13 \times 5 =$ _____

h) $14 \times 3 =$ _____

i) $15 \times 6 =$ _____

j) $8 \times 8 =$ _____

9. Add:

[1 x 7 = 7]

a)
$$\begin{array}{r} 357 \text{ cm} \\ + 148 \text{ cm} \\ \hline \end{array}$$

b)
$$\begin{array}{r} 724 \text{ m} \\ + 142 \text{ m} \\ \hline \end{array}$$

c)
$$\begin{array}{r} 907 \text{ kg} \\ + 192 \text{ kg} \\ \hline \end{array}$$

d)
$$\begin{array}{r} 732 \text{ L} \\ + 248 \text{ L} \\ \hline \end{array}$$

e)
$$\begin{array}{r} 346 \text{ g} \\ + 349 \text{ g} \\ \hline \end{array}$$

f)
$$\begin{array}{r} 424 \text{ ml} \\ + 242 \text{ ml} \\ \hline \end{array}$$

g)
$$\begin{array}{r} 805 \text{ L} \\ + 25 \text{ L} \\ \hline \end{array}$$

10. Subtract:

[1 x 7 = 7]

a)
$$\begin{array}{r} 749 \text{ m} \\ - 528 \text{ m} \\ \hline \end{array}$$

b)
$$\begin{array}{r} 702 \text{ g} \\ - 128 \text{ g} \\ \hline \end{array}$$

c)
$$\begin{array}{r} 900 \text{ kg} \\ - 462 \text{ kg} \\ \hline \end{array}$$

$$\begin{array}{r} \text{d) } 193 \text{ ml} \\ - 57 \text{ ml} \\ \hline \\ \hline \end{array}$$

$$\begin{array}{r} \text{e) } 235 \text{ L} \\ - 83 \text{ L} \\ \hline \\ \hline \end{array}$$

$$\begin{array}{r} \text{f) } 50 \text{ cm} \\ - 25 \text{ cm} \\ \hline \\ \hline \end{array}$$

$$\begin{array}{r} \text{g) } 388 \text{ L} \\ - 25 \text{ L} \\ \hline \\ \hline \end{array}$$

11. Solve:

[2 x 4 = 8]

a) A ribbon is 180 cm long. Sita cuts away 135 cm from it. What length of ribbon is left?

b) A box weighs 215 kg and a bag weighs 19 kg, what is their total weight?


c) A fish tank has 18 L of water. It should have 32 L of water. How much more water should be put in?

d) 40 laddoos are packed equally in 8 boxes. How many laddoos are there in each box?

12. Tick the correct measurement for given items:

[1 x 2 = 2]

a)



about 100 g / about 100 kg

b)



about 5 ml / about 100 l (liquid)

13. Find:

[2 x 2 = 4]

- a) 316 children are on a ride. Seven more get on the ride and five get off the same ride.
How many children are now on the ride?

Ans- Number of children on the ride now = _____.

- b) I study Mathematics, English and EVS everyday. Each subject lasts for 2 hours everyday. But I study Hindi for 2 hours only on Sunday. What is the total number of hours I spend studying in a week?


Ans- Number of hours I study in a week = _____.

Page 5 of 5

12. Tick the correct measurement for given items:

[1 x 2 = 2]

a)



about 100 g / about 100 kg

b)



about 5 ml / about 100 l (liquid)

13. Find:

[2 x 2 = 4]

- a) 316 children are on a ride. Seven more get on the ride and five get off the same ride.
How many children are now on the ride?

Ans- Number of children on the ride now = _____.

- c) I study Mathematics, English and EVS everyday. Each subject lasts for 2 hours everyday. But I study Hindi for 2 hours only on Sunday. What is the total number of hours I spend studying in a week?

Ans- Number of hours I study in a week = _____.

Page 5 of 5



DELHI PUBLIC SCHOOL

SAIL Township, Ranchi

SECOND SEMESTER (SESSION-2019-20)

SUBJECT: General Knowledge

DATE :- 17.02.2020

CLASS: – II Sec:- _____

M.O. :- _____

Roll no.:- _____

F. M. :- 25

NAME:- _____

I. Fill in the blanks using the help box : [0.5 x 10 = 5]

racket, 32, Femur, field, Tandem, Charles Babbage, Helen keller, riverbed, 22nd April, shuttlecock

- a. _____ is the longest bone found in our thighs.
- b. An adult human has _____ teeth.
- c. _____ was the first deaf blind person to get a college degree.
- d. Badminton is played with a _____ and _____.
- e. The farmer grows grain in the _____ .
- f. _____ is a bicycle built for two riders.
- g. Computer was invented by _____.
- h. The soil along a _____ is very fertile.
- i. We celebrate Earth Day on _____.

II. Write true or false : [0.5 x 10 = 5]

- a. Olympic games are held after every two years. _____
- b. Russia is the world’s largest country. _____
- c. Weeds harm other plants in a garden. _____
- d. Bones help us to move every part of our body. _____
- e. The water on Earth cannot be recycled. _____
- f. A dice has six faces. _____
- g. The capital of Egypt is Cairo. _____
- h. Ludwig Van Beethoven, was a famous dancer. _____
- i. Mars is also called ‘Red Planet’ _____
- j. 10 candies make a dozen. _____

III. Match the following :

[0.5 x 10 = 5]

- a. Pyramid of Giza
- b. Hollywood actress
- c. Princess with long hair
- d. To check location
- e. An Olympic sport
- f. Chopping board
- g. A spice
- h. Jwala Gutta
- i. Manchester United
- j. Hottest planet

- Cardamom
- To chop vegetables
- Football
- Egypt
- Venus
- Angelina Jolie
- Rapunzel
- GPS
- Swimming
- Badminton

IV. Name them :

[1 x 5 = 5]

- a. A tool with a long handle used to move soil, sand and dirt :- _____
- b. Which part of our body controls all our muscles? :- _____
- c. Which country awards Nobel Prize? :- _____
- d. Write the name of the smallest river of India? :- _____
- e. Who won the title of Miss Universe 2019? :- _____

V. Identify the pictures and write their names.

[1 x 5 = 5]







DELHI PUBLIC SCHOOL

SAIL Township, Ranchi

SECOND SEMESTER (SESSION-2019-20)

SUBJECT: Computer

DATE :- 19.02.2020

CLASS: – II **Sec:-** _____

M.O. :- _____

Roll no.:- _____

F. M. :- 20

NAME:- _____

Q.1 Choose the correct option:-


[0.5 X 5 = 2.5]

a) We can choose colour from the

i. Shapes Tool

ii. Brush Tool

iii. Color box

b)  Tool is used to draw

i. Lines

ii. Squares

iii. Circles

c) Which part of a computer is used to draw pictures?

i. Monitor

ii. Keyboard

iii. Mouse

d) Which of the following tool is used to erase any part of drawing?

i. Pencil

ii. Eraser

iii. Line

e) Which key is used to move the cursor to the next line?

i. Enter key

ii. Delete key

iii. Shift key

Q.2 Guess the following

[0.5 X 5 = 2.5]

a) A group that contains various colours

b) A place where you can make a drawing

c) Tool used to type text

d) The blinking vertical line which looks like 'I'

e) Tool used to erase the drawing

Q.3 Fill in the blanks:-

[0.5 X 5 = 2.5]

a) A _____ is similar to a school bag.

b) _____ tool is used for drawing an ellipse or a circle.

c) The _____ box contains different colours to fill into shapes and drawings.

d) _____ is an input device.

e) _____ tool helps to draw a straight line on the drawing board.

Q.4 Guess the correct word from the given jumbled words:-

[0.5 X 5 = 2.5]

a) EFIL- _____

b) SORCUR- _____

c) EILLPES- _____

d) LNIE- _____

e) RAGD- _____

Q.5 Write True/False

[0.5 X 5 = 2.5]

a) A folder can also contain other folders.

b) One should never save one's work in a computer.

c) There are four buttons in a mouse.

d) Right click helps to open shortcut or content menu.

e) We cannot increase the size of the eraser.

Q.6 Match the columns with their correct option:-

[0.5 X 5 = 2.5]

a) Close button

i. 

b) Oval tool

ii. 

c) Fill with color tool

iii. 

d) Curve tool

iv. 

e) Maximize button

v. 

Q.7 Answer the following questions in one word:-

[1 X 3 = 3]

a) Which finger must be placed on the left mouse button?

b) Which tool is used for drawing a rectangle or square?

c) What is the function of scroll wheel in a mouse?

Q.8 Write the name of the indicated parts & colour the mouse:

[1 X 2 = 2]

