



DELHI PUBLIC SCHOOL

SAIL Township, Ranchi

SECOND SEMESTER (SESSION-2017-18)

SUBJECT: ENGLISH

DATE :- 07.03.2018

CLASS: - I Sec:- _____

M.O. :- _____

Roll no.:- _____

F. M. :- 40

NAME:- _____

SECTION – A (READING)

1. Sara has to go to school. She is very happy. She will be going to class two now. Sara looks for her uniform in the cupboard. She takes it out. She tries on.

A. Choose the best option to complete these sentences:

[1 x 2 = 2]

a) Sara has to go to _____

i) the market

ii) school

iii) a picnic

b) Sara will go to class _____

i) one

ii) two

iii) three

B. Write the opposite of :

[0.5x 4 = 2]

a) happy x _____

c) out x _____

b) go x _____

d) take x _____

SECTION – B (WRITING AND GRAMMAR)

2. Look at the picture and complete the sentences by circling the correct words: [0.5x6 = 3]



In the evening, Suraj went to the *park / school* near his house. It had a small lotus *pond / sea*. Suraj sat near the pond with a glum *hand / face*. Something moved in the damp *grass / tree*. It was a plump green *frog / lotus* staring at Suraj with its big eyes. Suraj picked up the frog gently and ran *home / school*.

3. Fill in the blanks with suitable describing words from the box:

[1 x 2 = 2]

big, old, hot, long

a) Giraffes have _____ neck.

b) An elephant is a _____ animal.

4. Fill in the blanks with *a, an* or *the*:

[0.5 x 4 = 2]

- a) Here is _____ cookie for you. _____ cookie is sweet.
b) I had _____ egg and _____ cup of milk for breakfast.

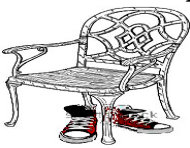
5. Circle the correct option for each sentence:

[0.5 x 6 = 3]

- a) Taran (bake / bakes) nice cookies.
b) I (is / are / am) not good at playing chess.
c) That man (is / are / am) a friend of my father.
d) All rooms (have / has) beds in them.
e) The birds are (chirp / chirping).
f) Rita (has / have) a red dollhouse.


6. Look at the pictures and fill in the blanks with *in, on, near* or *under*:

[0.5 x 3 =1.5]

- a)  The shoes are _____ the chair.

- b) The swans are _____ the pond.



- c)  The vase is _____ the table.

SECTION – C (COURSE BOOK)

7. Answer the questions:

[1.5 x 7 =10.5]

- a) Why each sense is important to us?

Ans.- _____

b) Frog uses a clever trick to wake Toad up. What is the trick?

Ans.- _____

c) Which places in outer space is the boy going to visit?

Ans.- _____

d) Who all go to see Lisandra dance?

Ans.- _____

e) Who was scraped from the flour box?

Ans.- _____

f) What is snow like when winter is going?

Ans.- _____

g) What game did the children play after the clouds went away?

Ans.- _____

8. Make Sentences:

[1 x 5 = 5]

a) season- _____

b) round - _____

c) excited- _____

d) trip - _____

e) knocked - _____

9. Write the meanings of :

[0.5x 4 = 2]

a) lonely - _____

b) aware - _____

c) gobbled- _____

d) fluttery- _____

10. Who said to whom:

[1 x 2 = 2]

a) "Do bake us a bun, dear !"

b) "Run! It's going to rain cats and dogs!"

11. Write five lines on "National Bird" OR "My school Garden"

[1 x 5 = 5]



DELHI PUBLIC SCHOOL

SAIL Township, Ranchi

SECOND SEMESTER (SESSION-2017-18)

SUBJECT: ENVIRONMENTAL SCIENCE

DATE :- 27.02.2018

CLASS: - I **Sec:-** _____

M.O. :- _____

Roll no.:- _____

F. M. :- 40

NAME:- _____

1. Choose the correct option and fill in the blanks: [0.5 x 5 = 2.5]

- a) Moving air is called _____. (wind / snow)
- b) _____ are bushy in look. (Shrubs / Trees)
- c) Birds have _____ legs. (four / two)
- d) A _____ rings the bell. (cobbler / peon)
- e) We get milk from _____. (cow / hen)

2. Name these: [0.5 x11 = 5.5]

- a) Who uses this :
 - i) Sewing machine:- _____ ii) Stethoscope:- _____
- b) Two national festivals:
 - i) _____ ii) _____
- c) Two means of air transport:
 - i) _____ ii) _____
- d) Two things we use in a rainy day:
 - i) _____ ii) _____
- e) Two birds:
 - i) _____ ii) _____
- f) Fruit with one seed : _____

3. Define these: [1 x 3 = 3]

- a) Climbers:- _____

- b) Herbs:- _____

- c) Trees:- _____

4. Classify these animals into following groups:

[0.5 x 6 = 3]

Goat, Octopus, Turtle, Crocodile, Fish, Lion


Water Animal	Animals living on both land and water	Land Animal
1.	1.	1.
2.	2.	2.

5. Match the columns:

[0.5 x 5 = 2.5]



i) Crescent Moon



ii) Gibbous Moon



iii) Half Moon



iv) Full Moon



v) New Moon

6. List two things we get from plants:

[0.5 x 2 = 1]

i) _____ ii) _____

7. List two things we get from animals:

[0.5 x 2 = 1]

i) _____ ii) _____

8. Read the clues and guess the name of the helpers shown.

[0.5 x 5 = 2.5]

a) I treat ill.
I am a _____

b) I teach children.
I am a _____

c) I bring letters for you.
I am a _____

d) I am your home. You call me your mother.
I am the _____

e) We are plenty in number.
We twinkle at night.
We are the _____

9. Choose the correct option and fill in the blanks:

[0.5 x 5 = 2.5]

- a) A _____ sweeps the road. (sweeper / cobbler)
- b) Pumpkin is a _____. (climber / creeper)
- c) _____ is hot ball of fire. (Moon / Sun)
- d) Honey bee is a _____ insect. (harmful/ useful)
- e) Tiger is a _____ animal. (domestic / wild)

10. Answer these questions:

[2 x 7 = 14]

- a) How can we take care of “Mother Earth”?

Ans.- _____

- b) What are wild animals?

Ans.- _____

- c) What does a seed need to grow?

Ans.- _____

- d) What type of clothes do we wear on a hot day?

Ans.- _____

e) What does an aeroplane need to land on and to take off ?

Ans.- _____

f) How do we refresh ourselves?

Ans.- i) _____
ii) _____

g) Name two helpers around us.

Ans.- i) _____
ii) _____

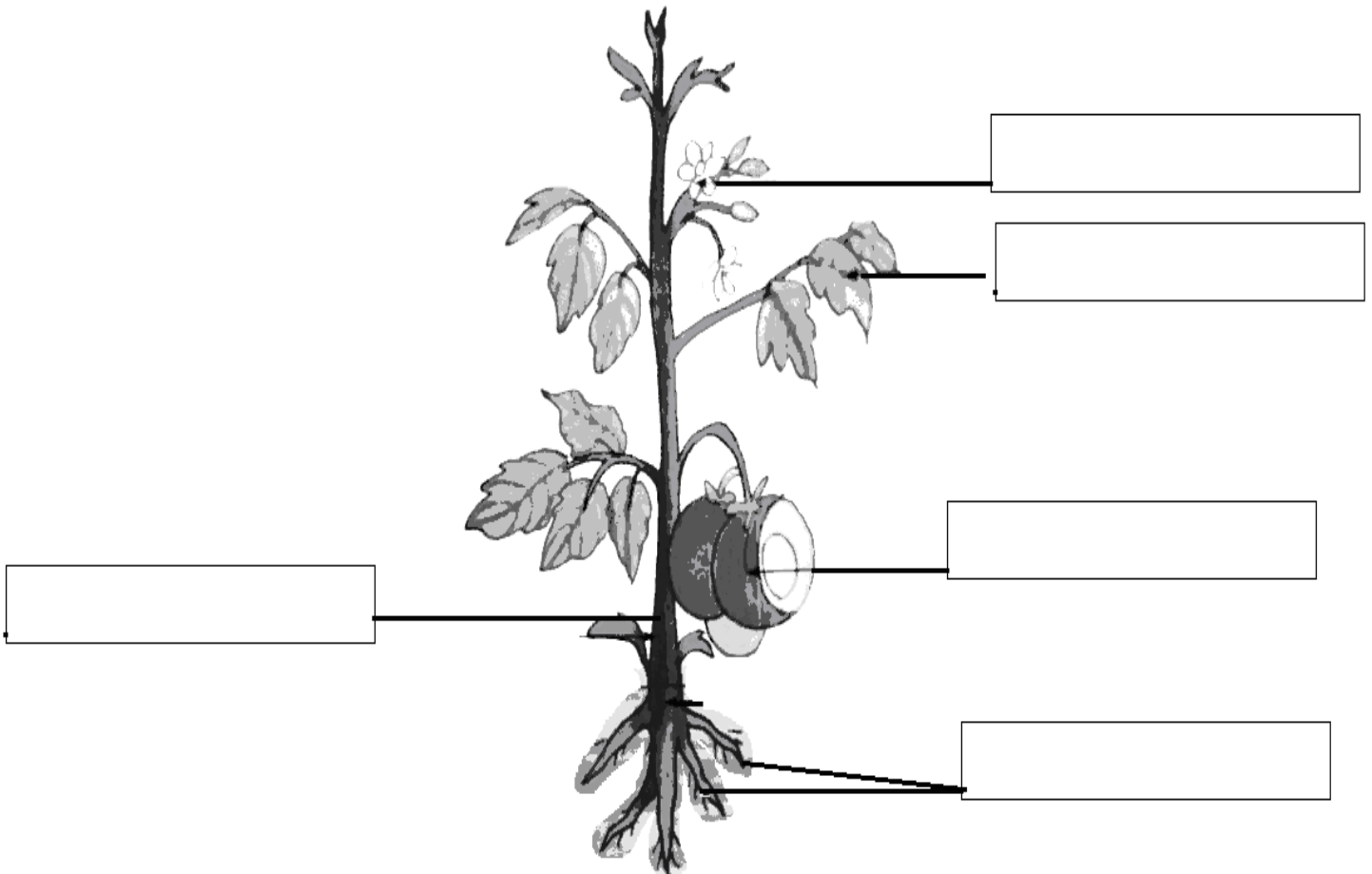
h) Name two water transport.

Ans.- i) _____
ii) _____

11. Label and colour:

[0.5 x 5 = 2.5]

Parts of a plant





DELHI PUBLIC SCHOOL

SAIL Township, Ranchi

SECOND SEMESTER (SESSION-2017-18)

SUBJECT: Hindi

CLASS: - I **Sec:-** _____

Roll no.:- _____

NAME:- _____

DATE :- 05.03.2018

M.O. :- _____

F. M. :- 40

1. सही शब्द चुनकर खाली स्थान को भरें –

[0.5 x 6 = 3]

क) अपना घोंसला नहीं बनाता। (चिड़िया / कौआ)

ख) पानी की से फलवाला पूरी तरह भीग गया। (बौछार / तालाब)

ग) मेरे घर का दरवाजा की ओर है। (पूरब / दक्षिण)

घ) में लो इनकी डोर, इन्हें घुमाओ चारो ओर। (पैर / मुट्ठी)

ङ) चिड़ियाघर में उन्होंने तरह-तरह के देखे। (जानवर / खिलौने)

च) फूल-फूल पर, झूल-झूलकर गाते हैं गाना। (भौरे / चींटी)

2. शब्दों को उनके अर्थ से मिलाएँ –

[0.5 x 4 = 2]

क) ओझल

राह देखना

ख) स्वर

पानी का बरसना

ग) इंतजार करना

गायब होना

घ) रिमझिम

आवाज़

3. शब्दों को सही क्रम में लिखकर वाक्य बनाएँ –

[1 x 2 = 2]

क) है नाचता मोर वन में –

ख) यश पढ़ है किताब रहा –

4. एक शब्द में उत्तर दें –

[1 x 3 = 3]

क) गुब्बारों को ढेर लेकर कौन आया ?

उत्तर –

ख) बादल कैसा जल बरसाएँगे ?

उत्तर –

ग) कोयल का स्वर कैसा है ?

उत्तर –

5. शब्द एक नाम अनेक –

[1 x 2 = 2]

क) बाग –

ख) पानी –

6. सही शब्द चुनकर लिंग बदलें –

[0.5 x 4 = 2]

क) आदमी –

ख) दादा –

ग) बैल –

घ) शेर –

रानी,	औरत
दादी,	नानी,
शेरनी,	गाय

7. सही शब्द चुनकर वचन बदलें –

[0.5 x 4 = 2]

क) आँख –

ख) लड़की –

ग) टोपी –

घ) केला –

चूहे,	केले
चिड़ियाँ,	लड़कियाँ,
टोपियाँ,	आँखें

8. किसने कहा –

[1 x 2 = 2]

क) आज रविवार है, आज हम घूमने चलेंगे।

–

ख) 'पिताजी' समुद्र के किनारे चलिए।

–

9. सही उत्तर पर (✓) का चिह्न लगाएँ –

[0.5 x 6 = 3]

क) घोंसले में चिड़िया क्या देती है ?

बच्चे

अण्डे

दाना

ख) गुब्बारे किससे बंधे हैं ?

डोर से

पत्थर से

अगुली से

ग) फल की दुकान में क्या नहीं थे –

सेब

आम

केले

घ) रेलगाड़ी में कितने डिब्बे थे ?

पाँच

सात

दस

ड) तुषार और शीला क्या लेकर घर लौटे ?

मछलियाँ

सीपियाँ

घोंघे

च) हवा में फूलों की क्या रहती है ?

महक

चाह

चहक

10. प्रश्न / उत्तर :

[1.5 x 4 = 6]

क) क्या पक्षियों को पिंजरे में रखना अच्छी बात है ?

उत्तर—.....

ख) गोविंद ने फलवाले के ऊपर पानी की बौछार क्यों की ?

उत्तर—.....

ग) रेलगाड़ी किस पर आई ?

उत्तर—.....

घ) तुषार और शीला कहाँ घूमने गए ?

उत्तर—.....

11. 'चिड़ियाघर' / 'राष्ट्रीय पशु' पर पाँच वाक्य लिखें -

[1 x 5 = 5]

.....

.....

.....

.....

.....

.....

.....

.....

.....

12. चित्र को देखते हुए कहानी पूरी करें –

[0.5 x 8 = 4]

सही शब्द चुनकर खाली स्थान भरें



भाग, मुँह, मधुर, छीनना, भूखी, लोमड़ी, कौआ, रोटी

एक मुँह में लेकर पेड़ पर बैठा था। उसी समय वहाँ
एक आई। वह बहुत थी। वह कौए से रोटी
..... चाहती थी। उसने कहा कौए भैया तुम बहुत गाते हो,
एक गाना तो सुनाओ। गाना गाने के लिए जैसे ही कौए ने अपना खोला तो रोटी
गिर गया। लोमड़ी रोटी उठाकर गया।

13. वाक्य बनाएँ –

[1 x 4 = 4]

क) घोंसला–.....

ख) चित्र –.....

ग) वसन्त –.....

घ) धरती –.....



DELHI PUBLIC SCHOOL

SAIL Township, Ranchi

SECOND SEMESTER (SESSION-2017-18)

SUBJECT: Mathematics

DATE :- 09.03.2018

CLASS: - I Sec:- _____

M.O. :- _____

Roll no.:- _____

F. M. :- 40

NAME:- _____

1. Tick (✓) the correct answer:

[0.5 x 8 = 4]

i) The short form of $20 + 9$

a) 39

b) 20

c) 29

d) 92

ii) This tree has



a) 3 triangles, 1 rectangle

b) 3 circles, 1 rectangle

c) 2 triangles, 2 rectangles

d) 1 triangle, 0 rectangle

iii) _____ is the sixth month of the year.

a) March

b) April

c) May

d) June

iv) $7 \times 7 =$ _____

a) 69

b) 56

c) 0

d) 49

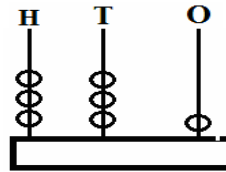
v) The number shown on the abacus -

a) 232

b) 331

d) 436

d) 321



vi) 6 tens and 3 ones is equal to -

a) 53

b) 63

c) 36

d) 73

vii) How many circles are there in the given picture?

a) 7

b) 4

c) 5

d) 2



viii) How many paise make together 2 rupees ?

a) 50 paise

b) 100 paise

c) 500 paise

d) 200 paise

2. Fill in the blanks:

[0.5 x 4=2]

i) $3 \times 8 =$ _____

ii) $2 \times 7 =$ _____

iii) $4 \times 5 =$ _____


iv) $8 \times 2 =$ _____

3. Write the name of following shapes:

[1 x 3 = 3]

i)  - _____

ii)  - _____

iii)  - _____

4. Fill in :

[0.5 x 6 = 3]

a) Number of leaves

4 + 4 = _____

2 fours are _____

2 x _____ = _____



b) 3 plants. Each has 5 flowers –

3 x _____ = _____ flowers in all.



5. Subtraction with borrowing :

[2 x 2 = 4]

a) T O

5	0
- 3	5

b) T O

7	2
- 2	6

6. Find the total value of coins in each coins:

[1 x 2 = 2]

a) = Rupees

b) = Rupees

7. Story sums:

[2 x 2 = 4]

i) Neena has 16 balloons and Reena has 13 balloons. How many balloons do they have in all?

Ans.- _____

ii) There are 27 parrots on a tree. 3 of them flew away. How many parrots were left on the tree?

Ans.- _____

8. Continue the pattern:

[0.5 x 6 = 3]

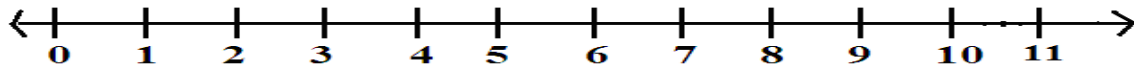
i) 190, 192, 194,

ii) 45, 44, 43,

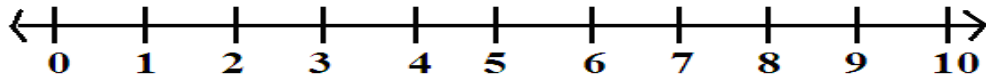
9. Addition of 3 numbers in a number line:

[2 x 2 = 4]

a) $2 + 3 + 5 =$ _____



b) $4 + 2 + 2 =$ _____



10. Read the price tag and fill in –

[1 x 4 = 4]



Rs. 10



Rs. 20



Rs. 15

a) What is the price of a ball?

Ans.- _____

b) What is the total cost of a kite and a toffee ?

Ans.- _____

c) Which is the costliest thing?

Ans.- _____

11. Solve the following sums:

[2 x 2 = 4]

a) Add 45 and 53

b) Subtract 21 from 55

12. Fill in the blanks:

[0.5 x 6 = 3]

a) The numeral for the number name sixty seven is _____.

b) Two more than 38 is _____ tens.

c) 78 _____ 87 (put $>$, $<$ or $=$)

d) $90 \text{ p.} - 20 \text{ p.} =$ _____ p.

e) The number which comes just before 60 is _____.

f) Six more than 70 is _____.



DELHI PUBLIC SCHOOL

SAIL Township, Ranchi

SECOND SEMESTER (SESSION-2017-18)

SUBJECT: General Knowledge

DATE :- 16.02.2018

CLASS: – I **Sec:-** _____

M.O. :- _____

Roll no.:- _____

F. M. :- 25

NAME:- _____

1. Identify and name the following personalities using the help box: [1 x 5 = 5]

Mary Kom, Aung San Suu Kyi,	Lata Mangeshkar, Dr. BR Ambedkar	Mother Teresa,
--------------------------------	-------------------------------------	----------------



a)



b)



d)



e)




c)

2. Match the following pictures:

[0.5 x 8 = 4]

a) No horn please!



b) Charminar



c) Sydney Opera House



d) Tabla



e) Flag of U.K.



f) Pattern of tiger



g) Flag of U.S.A.



h) Recycle



3. Read the following statement and tick (✓) the correct answer:

[0.5 x 8 = 4]

i) To which family do lions belong?

a) dog

b) cat

c) bear

ii) Our Prime Minister hoists the national flag at the Red Fort on :

a) Republic Day

b) Christmas

c) Independence Day

iii) In a year, how many months have 30 days?

a) 7

b) 4

c) 6

iv) Who was the first President of U.S.A. ?

a) George Washington

b) Abraham Lincoln

c) Winston Churchill

v) Which of the following is the favourite food of a giant panda?

a) apples

b) banana

c) bamboo

vi) Who is the master of 'Po' in the film Kung Fu Panda?

a) Mr. Ping

b) Shifu

c) Oogway

vii) You are standing on a raised flat land. You are on a _____

a) forest

b) hill

c) plateau

viii) Doom, doom, doom as you bang; I come alive and make you dance -

a) flute

b) drum

c) guitar

4. Answer the following questions from the help box:

[1 x 5 = 5]

elephant, Maharashtra, khadi, refrigerator, 100 years

a) To which state does Vada Pav, a popular snack belong? _____

b) How many years make a century? _____

c) Which appliance helps in keeping food and drinks cold? _____

d) Which animal has a long trunk? _____

e) What kind of cloth is mostly used to make the national flag of India? _____

5. Make True (T) or False (F) :

[0.5 x 6 = 3]

- a) Camels are known as wonders of the desert. _____
- b) Valley is a flat land which is between two hills or mountains. _____
- c) There are 32 weeks in a year. _____
- d) Assam is famous for Dhokla. _____
- e) Geyser provides for hot water. _____
- f) Blue wheel stands for progress. _____

6. Current Affairs:

[1 x 4 = 4]

a) Who won Miss World Beauty Pageant 2017?

- i) Priyanka Chopra ii) Manushi Chhillar iii) Sushmita Sen

b) Who was the first Indian to win the Nobel Prize?

- i) Mahatma Gandhi ii) Rabindra Nath Tagore iii) Kailash Satyarthi

c) Who is the current president of India?

- i) Sri Ram Nath Kovind ii) Mr. Pranav Mukherjee iii) Mr. Narendra Modi

d) Which city is known as Spice Garden of India?

- i) Mumbai ii) Kerala iii) Bangalore



DELHI PUBLIC SCHOOL

SAIL Township, Ranchi

SECOND SEMESTER (SESSION-2017-18)

SUBJECT: Computer

DATE :- 21.02.2018

CLASS: – I Sec:- _____

M.O. :- _____

Roll no.:- _____

F. M. :- 20

NAME:- _____

1. Choose the correct option: [0.5 x 4 = 2]

i) Pressing left button of mouse twice quickly is called as –

- a) Right Click b) Double Click c) Single Click

ii) Which among the following is not the mouse –

- a) Scroll Mouse b) Double Mouse c) Optical Mouse

iii) Paint program is used for –

- a) Typing b) Drawing c) Playing

iv) Which is a storage device?


- a) Mouse b) CD c) keyboard

2. Fill in the blanks: [0.5 x 4 = 2]

[*Scroll, Pointing, Close, Air Brush*]

- a) Mouse is also known as _____ device.
- b) The _____ tool is used to spray colour.
- c) To close paint, click on _____ button.
- d) We use _____ button of mouse, to move up and down.

3. Identify the tools: [0.5 x 4 = 2]



4. Unscramble words: [0.5 x 6 = 3]

- a) APTIN - _____ e) RUHBS - _____
- b) NEP-DIVRE - _____ f) CUP - _____
- c) PIONETR - _____
- d) MCOPTURE - _____

P.T.O.

5. Write 'T' for True and 'F' for False: [0.5 x 4 = 2]

a) We can store information using Pen-drive.

b) We cannot make triangle in paint.

c) Line tool help to draw straight line in paint.

d) We cannot choose any colour in paint.

6. Find the missing letters - [0.5 x 6 = 3]

a) _____ E _____ T A _____ G _____

b) S _____ R _____ L _____ c) S _____ P _____ S

e) _____ O _____ Y _____ O N e) A _____ O W

f) P _____ N C _____

7. Write the use of - [1 x 4 = 4]

a) Line Tool - _____

b) Brush Tool - _____

c) Eraser Tool - _____

d) Oval Tool - _____

8. Write any two parts of Mouse? [1 x 1 = 1]

9. Draw a figure using oval tool. [1 x 1 = 1]



DELHI PUBLIC SCHOOL

SAIL Township, Ranchi

SECOND SEMESTER (SESSION-2018-19)

SUBJECT: HINDI

DATE :- 26.02.2019

CLASS: – I **Sec:-** _____

M.O. :- _____

Roll no.:- _____

F. M. :- 40

NAME:- _____

1. सही शब्द चुनकर खाली स्थान भरें –

[0.5 x 5 = 2.5]

मेहनती,	भूख,	चिड़ियाघर,	थकती,	बढ़ती
---------	------	------------	-------	-------

- i) देखो कभी न रेल।
- ii) एक दिन लोमड़ी को बहुत लगी थी।
- iii) टिन्नी बहुत थी।
- iv) रुकावट आती, ठोकर लगती फिर भी जाती है।
- v) की सैर निराली, बच्चों, बजाओ मिलकर ताली।

2. नीचे दिए गए शब्दों को उनके नाम से मिलाएँ –

[0.5 x 3 =1.5]

i) धरती	उपवन	<input type="text"/>
ii) बगीचा	चंद्रमा	<input type="text"/>
iii) चाँद	भूमि	<input type="text"/>

3. सही शब्द चुनकर (✓) का चिह्न लगाएँ –

[0.5 x 3 = 1.5]

- i) नाच कौन दिखाता है ?
 क) हिरन ख) मोर ग) बगुला
- ii) रेलगाड़ी कहाँ चढ़ जाती है ?
 क) पेड़ों पर ख) पहाड़ों पर ग) छतों पर
- iii) पेड़ों पर क्या लटका हुआ था ?
 क) झूला ख) एक लड़का ग) खिचड़ी

4. शब्दों को उनके अर्थ से मिलाएँ –

[0.5 x 5 = 2.5]

i) संदेश	ताकत लगाकर	<input type="text"/>
ii) साथी	बहुत सोचना	<input type="text"/>
iii) जोर से	सबक	<input type="text"/>
iv) सैर करना	साथ रहने वाला	<input type="text"/>
v) चिंता	घुमाना	<input type="text"/>

5. वाक्य बनाएँ –

[1 x 3 = 3]

- i) सरदी –.....
- ii) बारिश –.....
- iii) ज़्यादा –.....

6. एक शब्द में उत्तर दें –

[0.5 x 4 = 2]

- i) रेलगाड़ी कैसे चलती है ? —.....
- ii) एक पैर पर कौन खड़ा था ? —.....
- iii) चींटी कैसी प्राणी है ? —.....
- iv) बीज किसने बोए ? —.....

7. शब्दों को सही क्रम में लिखकर वाक्य बनाएँ –

[1 x 2 = 2]

- i) नाव में नदी रही है चल —.....
- ii) पेड़ बन्दर पर उछल रहा है —.....

8. लिंग बदलें –

[0.5 x 4 = 2]

- i) चूहा —..... iii) बैल —.....
- ii) आदमी —..... iv) मोर —.....

9. निम्न प्रश्नों के उत्तर लिखें –

[1 x 6 = 6]

प्र0 1 – किसकी टाँग टूट गई और क्यों ?

उत्तर —.....

.....

.....

प्र0 2 – अंत में दीनू ने क्या कहा ?

उत्तर —.....

.....

.....

प्र0 3 – लोमड़ी ने बाग में क्या देखा ?

उत्तर —.....

.....

.....

प्र0 4 – चूँ-चूँ और गिट्टू को खाना क्यों नहीं मिला ?

उत्तर —.....

.....

.....

प्र0 5 – रेलगाड़ी हमें क्या संदेश देती है ?

उत्तर —.....

.....

.....

प्र0 6 – चींटी किससे नहीं घबराती है ?

उत्तर —.....

.....

10. नीचे दी गई संख्याओं को अंकों में लिखें – (हिन्दी में)

[0.5 x 3 = 1.5]

i) पंद्रह –

ii) बारह –

iii) अठारह –

11. वचन बदलें –

[0.5 x 3 = 1.5]

i) टोपी –

ii) आँख –

iii) अपना –

12. किसने किससे कहा –

[0.5 x 4 = 2]

i) "चलो बीज बोएँ।" –

ii) "मैं तो मज़ाक कर रहा था।" –

13. चित्र देखकर सही शब्दों की मदद से खाली स्थान भरें –

[0.5 x 5 = 2.5]



(बरसात, घाँसले, बादल, काँप, बंदर)

आकाश में छा गए। चिड़िया अपने बच्चों के साथ

में बैठी थी। इतने में एक आया। वह ठंड से

रहा था। चिड़िया बोली तुम अपना घर क्यों नहीं बनाते ? बंदर बोला – ठीक है, पर अभी मुझे

..... से बचाओ। चिड़िया बोली – आओ, इस पत्तोंवाली डाल के नीचे बैठ जाओ।

14. 'तोता' अथवा 'होली' पर पाँच वाक्य लिखें –

[1 x 5 = 5]

.....

.....

.....

.....

.....

.....

.....

.....

.....

.....

.....

15. सही वाक्य पर (✓) और गलत पर (✗) का चिह्न लगाएँ –

[0.5 x 3 = 1.5]

i) रेलगाड़ी सड़क पर चलती है।

ii) चिड़ा उठा और सारी खिचड़ी खा गया।


iii) बंदर मामा पेड़ पर चढ़े हुए हैं।

HOTS

16. नीचे दिए गए वाक्यों को पढ़ें और दिए गए चित्र में सही शब्द चुनकर लिखें –

[0.5 x 6 = 3]

यह एक बगीचे का चित्र है। यहाँ बहुत सारे वृक्ष हैं। रवि चमक रहा है। तालाब के नीर में जलज खिले हुए हैं। दो सखा बगीचे में खेल रहे हैं। बगीचे में विहग भी उड़ रहे हैं।





DELHI PUBLIC SCHOOL

SAIL Township, Ranchi

SECOND SEMESTER (SESSION-2018-19)

SUBJECT: EVS

DATE :- 28.02.2019

CLASS: – I **Sec:-** _____

M.O. :- _____

Roll no.:- _____

F. M. :- 40

NAME:- _____

A. Tick the correct option: [0.5 x 8 = 4]

- 1) Which of the statement is correct about the Sun?

a) It looks like a ball of cotton. <input type="checkbox"/>	b) It is not hot and big. <input type="checkbox"/>
c) It twinkles at night . <input type="checkbox"/>	d) It is a big ball of fire. <input type="checkbox"/>

- 2) Which order tell us about climbers?

a) sunflower, hibiscus, rose <input type="checkbox"/>	b) neem, mango, banyan <input type="checkbox"/>
c) grass, mint, banana <input type="checkbox"/>	d) pea plant, grapevine, money plant <input type="checkbox"/>

- 3) Which among these we do not get from plants ?

a) egg <input type="checkbox"/>	b) tea <input type="checkbox"/>	c) wood <input type="checkbox"/>	d) cotton <input type="checkbox"/>
---------------------------------	---------------------------------	----------------------------------	------------------------------------

- 4) Which one is a National Festival ?

a) Christmas <input type="checkbox"/>	b) Gurupurab <input type="checkbox"/>	c) Gandhi Jayanti <input type="checkbox"/>	d) Diwali <input type="checkbox"/>
---------------------------------------	---------------------------------------	--	------------------------------------

- 5) They are higher than plains but not high as mountains.

a) forests <input type="checkbox"/>	b) hills <input type="checkbox"/>	c) island <input type="checkbox"/>	d) valley <input type="checkbox"/>
-------------------------------------	-----------------------------------	------------------------------------	------------------------------------

- 6) On Independence Day our Prime Minister hoists the national flag at –

a) Raj Ghat <input type="checkbox"/>	b) India Gate <input type="checkbox"/>	c) Red Fort <input type="checkbox"/>	d) Diwali <input type="checkbox"/>
--------------------------------------	--	--------------------------------------	------------------------------------

- 7) Why does your mother use water in the Kitchen?

a) for bathing <input type="checkbox"/>	b) for washing clothes <input type="checkbox"/>
c) for cooking <input type="checkbox"/>	d) All of these <input type="checkbox"/>

- 8) On a rainy day we use –

a) Sweater <input type="checkbox"/>	b) Cold drink <input type="checkbox"/>	c) Fan <input type="checkbox"/>	d) Gumboots <input type="checkbox"/>
-------------------------------------	--	---------------------------------	--------------------------------------

B. Match the column: [0.5 x 6 = 3]

- | | | |
|------------|-----------------|--------------------------|
| 1) Sewain | free meal | <input type="checkbox"/> |
| 2) Langar | Eid | <input type="checkbox"/> |
| 3) Lion | cannot fly | <input type="checkbox"/> |
| 4) Penguin | lives in den | <input type="checkbox"/> |
| 5) Rainbow | source of water | <input type="checkbox"/> |
| 6) Rain | after rain | <input type="checkbox"/> |

C. Fill in blanks using the words from the help box: [0.5 x 8 = 4]

orange, shade, wings, two, Weather, Rockets, culture, flightless

- 1) Festivals help us to understand _____.
- 2) Trees give us _____.
- 3) The shape of earth is like an _____.
- 4) _____ changes everyday.
- 5) Insects have _____ and can fly.
- 6) Ostrich is a _____ bird.
- 7) A crow has _____ legs.
- 8) _____ can take spaceship to the Moon.

D. Circle the correct option: [0.5 x 8 = 4]

- 1) Gandhiji was born on **26th January / 2nd October**.
- 2) **Leaves / Roots** prepare food for the plant.
- 3) We should plant more **soil / trees**.
- 4) A **Zebra / housefly** lives in forest.
- 5) Clean water has no **colour / shape**.
- 6) **Light / Dark** clouds bring rain.
- 7) **Creepers / Climbers** creep along the ground.
- 8) **Coffee / Cold drink** is used in winter season.

E. Answer in one word only: [0.5 x 8 = 4]

- 1) The holy book of the Sikhs – _____
- 2) One religious festival – _____
- 3) One example of shrub – _____
- 4) One useful thing that plants give us – _____
- 5) Largest animal on earth – _____
- 6) A pet animal – _____
- 7) One use of water – _____
- 8) When the shape of moon is like a ball – _____

F. Define these:

[1 x 6 = 6]

1) Desert - _____

2) Herbs - _____

3) Forest - _____

4) Valley - _____

5) Shrubs - _____

6) Plains - _____

G. Answer these questions:

[1.5 x 4 = 6]

1) Why do stars appear small ?

Ans.:- _____

2) How do plants make their food?

Ans.:- _____

3) What are wild animals?

Ans.:- _____

4) When do we see rainbow?

Ans.:- _____


H. Draw, Colour and label:

[2 x 3 = 6]

1) We twinkle every night.
You cannot count us.

2) I have seven colours.
You can see me after rain.

3) Parts of a plant:



HOTS

I. Tick the correct option and fill in the blanks:

[1 x 3 = 3]

1) Rabbit lives in a _____

- a) zoo b) house c) stable d) burrow

2) The most beautiful part of a plant is _____

- a) leaf b) root c) flower d) bud

3) Creepers can't climb on the wall or on a stick because _____

- a) they are light b) they are heavy
c) they need food to grow d) none of these



DELHI PUBLIC SCHOOL

SAIL Township, Ranchi

SECOND SEMESTER (SESSION-2018-19)

SUBJECT: ENGLISH

DATE :- 02.03.2019

CLASS: – I Sec:- _____

M.O. :- _____

Roll no.:- _____

F. M. :- 40

NAME:- _____

I. Read the poem and tick the correct option:

[0.5 x 4 = 2]

*What does the bee do?
Bring home honey.
And what does father do?
Bring home money.
And what does mother do?
Lay out the money.
And what does baby do?
Eat up the honey.*

1) Who brings home honey?

a) Father b) Mother c) Baby d) Bee

2) Who brings home money?

a) Father b) Mother c) Baby d) Bee

3) Who lays out the money?

a) Father b) Mother c) Baby d) Bee

4) Who eats up the honey?

a) Father b) Mother c) Baby d) Bee

II. Tick the correct option:

[0.5 x 8 = 4]

1) I like to drink _____ milk.

a) hot b) big c) old d) long

2) The stars _____ at night.

a) live b) shine c) sing d) read

3) That man _____ a friend of my father.

a) am b) has c) is d) have

4) I _____ one pencil.

a) am b) has c) are d) have

5) The water is _____ the glass.

a) in b) on c) under d) am

6) Rita _____ a red doll house.

- a) have b) has c) am d) are

7) What is the opposite of nephew?

- a) sister b) brother c) niece d) father

8) What is the meaning of billy goat ?

- a) female goat b) female sheep c) male goat d) male sheep

III. Tick the correct spelling:

[0.5 x 5 = 2.5]

1) a) friends b) freinds c) frieds d) freins

2) a) crciket b) cricket c) criket d) creiket

3) a) caght b) caught c) caught d) cught

4) a) unverse b) unyverse c) univers d) universe

5) a) quiet b) queit c) quet d) quiete

IV. Tick the odd one :

[0.5 x 4 = 2]

1) a) old b) wood c) hood d) good

2) a) main b) goat c) rain d) gain

3) a) wish b) dish c) miss d) fish

4) a) sand b) hand c) band d) pant

V. Tick the correct missing letters:

[0.5 x3 = 1.5]

1) M e t ____ l a) a b) e c) i d) o

2) W ____ ____ ld a) u o b) o u c) o o d) u u

3) C a t ____ ____ a) s h b) g h c) c h d) n g

VI. Make Sentences:

[1 x 5 = 5]

1) middle - _____

2) ferry - _____

3) moon - _____

4) right - _____

5) dirty - _____

VII. Answer the following questions :

[1.5 x 6 = 9]

1) What colours are mentioned in the poem 'Boats'?

Ans.- _____

2) Why did Manesh ask Sanjay to play?

Ans.- _____

3) What has the little girl's teacher taught her ?

Ans.- _____

4) Why was Kumar unhappy?

Ans.- _____

5) What is a ferry ?

Ans.- _____

6) Where did the troll live ?

Ans.- _____

VIII. Who said to Whom?

[0.5 x 4 = 2]

1) "You are no good!"

2) " These pots are the very best."

Page 2 of 3

IX. Match the words with its opposites:

[0.5 x 4 = 2]

1) in

noisy

2) inside

unhappy

3) happy

outside

4) quiet

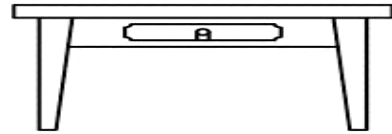
out

Page 3 of 4

X. As per the given sentence, draw the ball in its correct place: [0.5 x 4 = 2]

1) The ball is under the table.

1)




2) The ball is on the chair.

2)



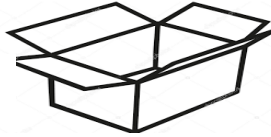
3) The ball is near the door.

3)



4) The ball is in the box.

4)



XI. Write five lines about: [1 x 5 = 5]
National Bird – Peacock or My School Garden

1) _____

2) _____


3) _____

4) _____

5) _____

HOTS

XII. Observe the picture carefully and fill in the blanks using the clues in the bracket: [0.5 x 6 = 3]



1) There is a huge tree _____ the traffic light. (in / on / under / near)

2) There are _____ windows in the building nearby. (use describing words)

3) The birds are _____ in the sky. (use doing word)

4) The traffic police is _____ near the road. (use doing word)

5) The zebra crossing has _____ and _____ stripes.(use describing words)



DELHI PUBLIC SCHOOL

SAIL Township, Ranchi

SECOND SEMESTER (SESSION-2018-19)

SUBJECT: MATHS

DATE :- 06.03.2019

CLASS: - I Sec:- _____

M.O. :- _____

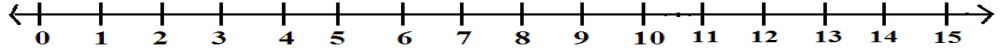
Roll no.:- _____

F. M. :- 40

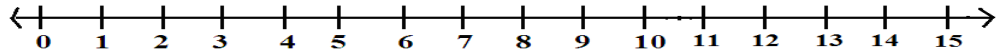
NAME:- _____

1. Add on number line and write the answer: [0.5 x 4 = 2]





a) $1 + 3 + 4 =$



b) $3 + 4 + 6 =$



2. Look at the shopping mall [0.5 x 6 = 3]

SHOPPING MALL			
			
ERASER	JAM	SCISSORS	TEDDY
<i>Rs. 5</i>	<i>Rs. 15</i>	<i>Rs. 10</i>	<i>Rs. 20</i>

How much they cost together?

a) Teddy and eraser

b) Scissors and Jam

3. Add: [0.5 x 4 = 2]

a) $3 + 4 + 6 =$

b) $6 + 6 + 6 =$

c)
$$\begin{array}{r} 8 \\ + 3 \\ + 2 \\ \hline \end{array}$$

d)
$$\begin{array}{r} 30 \\ + 20 \\ + 25 \\ \hline \end{array}$$

4. Add the things in groups and write the answer [0.5 x 8 = 4]








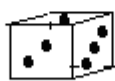




a)  = _____ + _____ + _____ =

b)  = _____ + _____ + _____ =

5. Match shapes to the correct object and write their names with the help of box:

Square, triangle, cylinder, circle

[0.5 x 8 = 4]

i)  - _____	a)  
ii)  - _____	b)  
iii)  - _____	c)  
iv)  - _____	d)  

6. Story Sums:

[1.5 x 2 = 3]

a) A plant had 38 leaves. Insects ate away 23 leaves. How many leaves were left?

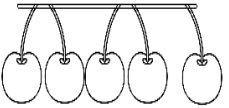
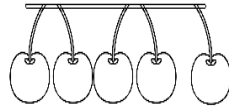
Ans.- _____

b) Hema had 56 stickers. She gets 43 new stickers. How many stickers does she have now?



Ans.- _____

7. Fill in :

[0.5 x 2 = 1]

a)  

Number of cherries
 $5 + 5 = 10$

b)  

Number of leaves
 $3 + 3 = 6$

2 _____ are 10.

2 x _____ = 6

8. Write as multiplication: [0.5 x 4 = 2]

a) $2 + 2 + 2 + 2 =$ _____ b) $10 + 10 + 10 =$ _____

9. Fill in the blanks and write the correct answer: [0.5 x 8 = 4]

a) _____ is the last day of the week.

b) 1 rupee = _____ paise.

c) November has _____ days.

d) $5 \times 9 =$ _____


e) $8 \times 6 =$ _____

f) 8 tens + 7 ones = _____

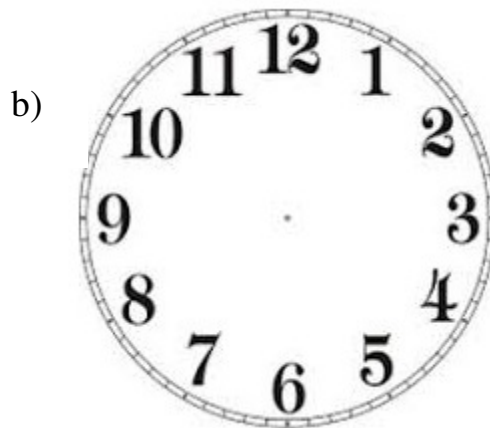
g) A year has _____ months.

h) August comes just before _____.

10. Draw the hands to show the time: [0.5 x 4 = 2]



2:00



4 O'clock

11. [0.5 x 4 = 2]

a) Add

T	O
6	2
+ 1	9

b) Subtract

T	O
4	7
- 3	9

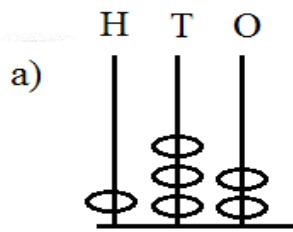
12. Write the short form of : [0.5 x 2 = 1]

a) $100 + 80 + 8 =$ _____

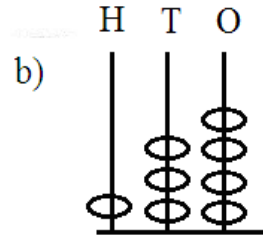
b) $100 + 70 + 2 =$ _____

13. Fill in :

[0.5 x 6 = 3]



___ hundred + ___ tens + ___ ones



___ hundred + ___ tens + ___ ones

14. Write as addition:

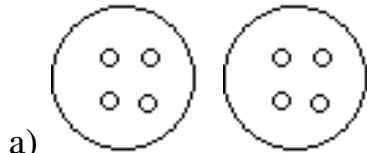
[0.5 x 6 = 3]

a) $4 \times 7 = \underline{\quad} + \underline{\quad} + \underline{\quad} + \underline{\quad}$

b) $2 \times 5 = \underline{\quad} + \underline{\quad}$


15. Fill in the blanks and write how many in all?

[0.5 x 4 = 2]



2 buttons. Each has 4 holes.

$2 \times \underline{\quad} = \underline{\quad}$ holes in all.



3 plants. Each has 3 flowers.

$3 \times \underline{\quad} = \underline{\quad}$ flowers in all.

16. HOTS

[0.5 x 4 = 2]

a) Complete the series:

12, 15, 18, 21, _____

i) 25

ii) 42

iii) 24

iv) 28

b) If two days earlier it was Saturday, then today it is _____

i) Tuesday

ii) Saturday

iii) Monday

iv) Sunday

c) Today is 26th January. It is Monday, If Bhoovi's birthday fell on 23rd January, then she celebrated her birthday on _____



i) Tuesday

ii) Saturday

iii) Friday

iv) Sunday

d) How many more birds are there in **figure A** as compared to **figure B**?



i) 5

ii) 4

iii) 6

iv) 8



DELHI PUBLIC SCHOOL

SAIL Township, Ranchi

SECOND SEMESTER (SESSION-2018-19)

SUBJECT: General Knowledge

DATE :- 18.02.2019

CLASS: – I Sec:- _____

M.O. :- _____

Roll no.:- _____

F. M. :- 25

NAME:- _____

I. Identify the famous personalities and write their names from the help box given below:

[1 x 5 = 5]


APJ Abdul Kalam,

Saina Nehwal,

Mary Kom,

Jawaharlal Nehru,

Rabindranath Tagore,





II. Read the clue and answer the following:

[0.5 x 10 = 5]


a) It is a place where there are large numbers of trees, animals and birds -



F _____ R _____ S _____

b) This appliance provides hot water: _____ E Y _____ E R

c) Doom, doom, doom as you bang, I come alive and make you dance:



_____ R _____ M

d) This state is famous for Dhokla: G _____ J _____ R _____ T

III. Mark 'T' or 'F' stating whether the statements are true or false:

[0.5 x 6 = 3]

a) The Sun sets in the east.

b) The saffron colour of the Indian flag stands for purity and truth.

c) In a leap year, there are 29 days in February.

d) Mixer-grinder helps in heating the food.

e) Camels are also known as ships of the desert.

f) Lions belong to dog family.

IV. Match the following pictures with their names:


[1 x 5 = 5]

a)



i) Red fort

b)




ii) Vacuum cleaner

c)



iii) Use dustbin

d)



iv) Hill

e)



v) Lotus temple

V. Tick the correct answer:

[0.5 x 6 = 3]

1) The first woman President of India is –

- a) Mother Teresa b) Pratibha Patil c) Lata Mangeshkar

2) How many days make a fortnight?

- a) 12 b) 13 c) 14

3) Which of the following is the favourite food of a giant panda?

- a) apples b) banana c) bamboo

4) Who is the master of the **Po** in the film Kung Fu Panda?

- a) Mr. Ping b) Shifu c) Oogway

5) M.S. Dhoni is famous for –

- a) Cricket b) Lawn Tennis c) Football

6) On which part of the body will you find knuckles ?

- a) hands b) legs c) face

VI. Answer the following questions: (Help box is given below)

[0.5 x 4 = 2]

desert, Tamil Nadu, four, washing machine

- 1) How many colours can we see on the flag of India? - _____
- 2) Which state is famous for Idli Sambhar? - _____
- 3) Which appliance helps in cleaning clothes? - _____
- 4) Which place is very hot and dry and we can hardly see any plants around. - _____

VII. Tick the correct answer:

[0.5 x 4 = 2]

1) The old name of Chennai is –

- a) Madras b) Bangalore c) Tamil Nadu

2) The largest flower in the world is -

- a) Lotus b) Rafflesia c) Lily

3) Which is the hottest continent on Earth?

- a) Asia b) Europe c) Africa

4) Japan is also known as -

- a) Land of Thousand lakes
- b) Land of Rising Sun
- c) City of seven hills



DELHI PUBLIC SCHOOL

SAIL Township, Ranchi

SECOND SEMESTER (SESSION-2018-19)

SUBJECT: Computer

DATE :- 20.02.2019

CLASS: – I Sec:- _____

M.O. :- _____

Roll no.:- _____


F. M. :- 20

NAME:- _____

Q1) Fill in the blanks :-


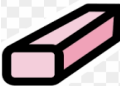


[0.5 x 6=3]

Pointer, Color Box, Dust, Double click, Pencil, Delete

- a) _____ is harmful for computer.
- b) _____ looks like  on the screen of computer.
- c) _____ key erases letters from forward direction.
- d) Pressing the left mouse button twice is called as _____.
- e) We can select colours from _____
- f) _____ tool is used to draw free hand drawing.

Q2) Identify these tools :-

[1 x4=4]

- a)  - _____
- b)  - _____
- c)  - _____
- d)  - _____

Q3) Write the missing letters :-

[1x4=4]

- a) C ___ R V ___ T ___ L
- b) ___ I R ___ S
- c) D ___ T C O V ___
- d) S ___ A C E B ___ R

Q4) State 'T' for True or ' F ' for False :-

[0.5 x 6 = 3]

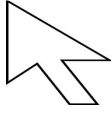
- a) Open your shoes inside the lab. []
- b) Turn OFF the computer when not in use. []
- c) Ellipse tool is used to draw straight line. []
- d) Caps lock key helps to write in capital letters. []
- e) Hit the keys of the keyboard hard. []
- f) Mouse is a hand-held pointing device. []

P.T.O.

Q5) Match the following:-

[0.5 x 4=2]

i)



a) Curve Tool

ii)




b) pointer

iii)



c) Arrow Key

iv)



d) Enter Key


Q6) Answer the following :-

[1 x 3=3]

a) Name two Text Editors.

b) Write the function of Enter key.

c) What is Drawing Board?

Q7) Draw and colour a figure using  Rectangle tool.

[1]



DELHI PUBLIC SCHOOL

SAIL Township, Ranchi

SECOND SEMESTER (SESSION-2019- 20)

SUBJECT: ENGLISH

DATE :- 24.02.2020

CLASS: – I **Sec:-** _____

M.O. :- _____

Roll no.:- _____

F. M. :- 40

NAME:- _____

I. Write the sound made by each animal using help box: [0.5 x 2 = 1]

1. A horse _____.

chatters, neighs,

2. An elephant _____.

trumpets, moos.

II. Choose and write the babies of animals. [0.5 x 2 = 1]

1. The baby kangaroo is called _____.

a) piglet b) lamb c) chick d) joey

2. The baby horse is called _____.

a) foal b) kid c) calf d) kitten

III. Rewrite the sentences using capital letters and full stops:- [1 x 2 = 2]

a) bought / I / dress / a / for / party / new / the

b) reading / mystery / to / enjoy / I / books / like

IV. Write the collective nouns using help box: [0.5 x 2 = 1]

1. camels _____.

troop, caravan,

2. monkeys _____.

army, pride.

V. Complete the word pairs with the help box: [0.5 x 2 = 1]

1. singers and _____.

needle, paper,

2. shoes and _____.

socks, musicians.

VI. Fill in the blanks with in or on.

[0.5 x 2 = 1]

1. The book is _____ the table.
2. I saw many wild animals _____ the jungle.

VII. Make sentences.

[1 x 5 = 5]

- a) castles - _____
- b) pity - _____
- c) chirping - _____
- d) different - _____
- e) power - _____

VIII. Match the words with their meaning.

[0.5 x 4 = 2]

- | | | |
|-------------|---------------------------|--------------------------|
| a) extinct | 1. valuable | <input type="checkbox"/> |
| b) massive | 2. no longer in existence | <input type="checkbox"/> |
| c) precious | 3. very cold | <input type="checkbox"/> |
| d) icy | 4. large | <input type="checkbox"/> |

IX. Underline the describing words in these sentences :

[0.5 x 2 = 1]

1. My parents bought a silver car.
2. My father is tall.

X. Join the two sentences using and :

[1 x 2 = 2]

1. The sisters dance well. The sisters sing well.
- _____

2. I love to swim. I love to play basket ball.
- _____

XI. Answer in one sentence :

[1 x 3 = 3]

- Q1. What leads inside in the poem "On My Blackboard" ?

Ans.- _____

Q2. Where did the three Billy goats live?

Ans.- _____

Q3. What is the speaker building on the floor?

Ans.- _____

XII. Write five lines on any one : Sports Day / My School Garden

[1 x 5 = 5]

XIII. Think and write the answer:

[2 x 3 = 6]

Q1. Why is time so precious?

Ans.- _____

Q2. Why were the ants happy in winter?

Ans.- _____

Q3. Why did the last duckling look different from its brothers and sisters?

Ans.- _____

XIV. Solve the riddles to find the name of these animals :

[1 x 2 = 2]

a) Animal with antlers _____.

b) Animal with quills _____.

XV. Write the opposite for the words given below:

[0.5 x 4 = 2]

a) bottom X _____ b) sharp X _____

c) absent X _____ d) clean X _____

XVI. Read the passage carefully and answer the questions.

[0.5 x 10 = 5]

Raj is Ravi's best friend. He is getting ready to go to Ravi's birthday party in the evening. Raj's cousin, Ria has also come to visit Raj. So he asked Ria to come along with him for the birthday party. Raj bought a toy car as a birthday gift for Ravi. He wants to wrap it in blue colour paper. He knows that blue is Ravi's favourite colour. But he can't find any blue paper. Raj is sad. Ria gave her blue scarf to wrap the gift. Raj is delighted. Raj says bye to his mother and goes to the party with Ria.



I. Answer in one word.

a. Write two describing words from the passage.

1) _____ 2) _____

b. Where is Raj going in the evening?

c. What gift Raj has for Ravi?

d. Which is Ravi's favourite colour?

II. Write the opposite gender of :

father X _____

III. Write the opposite of :

a. best X _____ b. bought X _____

IV. Write the meaning of :

a. delighted: _____ b. wrap : _____



DELHI PUBLIC SCHOOL

SAIL Township, Ranchi

SECOND SEMESTER (SESSION-2019- 20)

SUBJECT: EVS

DATE :- 27.02.2020

CLASS: – I **Sec:-** _____

M.O. :- _____

Roll no.:- _____

F. M. :- 40

NAME:- _____

I. Name them: [0.5 x 10 = 5]

1. The holy book of the Sikhs.

→ _____

2. Which animal pulls the sledge of Santa Claus?

→ _____

3. A harvest festival.

→ _____

4. An insect with eight legs.

→ _____

5. National Song of India.

→ _____

6. One insect

→ _____

7. Two wild animals

→ _____

8. They twinkle in the sky at night.

→ _____

9. When the shape of the moon is like a ball.

→ _____

II. Match the following :

[0.5 x 6 = 3]

- | | | |
|----------------------|------------------------------|--------------------------|
| 1. Christmas | a) sheep | <input type="checkbox"/> |
| 2. India became free | b) ostrich | <input type="checkbox"/> |
| 3. Sewain | c) blue whale | <input type="checkbox"/> |
| 4. largest animal | d) Eid | <input type="checkbox"/> |
| 5. flightless bird | e) Independence Day | <input type="checkbox"/> |
| 6. wool | f) 25 th December | <input type="checkbox"/> |

III. Fill in the blanks using the help box.

[0.5 x 10 = 5]

tree, Rocket, early, soft, old, twice,
needy, Langar, Eid Mubarak, India

1. _____ is a free meal served in a Gurudwara.
2. People wish each other _____ on Eid.
3. _____ became a Republic on 26th January 1950.
4. Help the _____ and _____ people.
5. Brush your teeth _____ a day.
6. Get up _____ in the morning.
7. Plants that have _____ stems are called herbs.
8. A monkey lives on a _____.
9. _____ can take the spaceship to the moon.

IV. Unscramble the following words.

[0.5 x 6 = 3]

1. E F I S L A V S T - _____
2. U E Q O M S - _____
3. L P A E S E - _____
4. R O S R Y - _____
5. O F R E T S - _____
6. I N A R O B W - _____

V. Write 'True' or 'False' .

[0.5 x 8 = 4]

1. We should not tease animals. → _____
2. We should always quarrel with others. → _____
3. We should wake up early in the morning. → _____
4. Mint is a shrub. → _____
5. Lord Jesus returned home on Diwali. → _____
6. 'Shrubs' are also called 'bushes'. → _____
7. Animals make their own food. → _____
8. Rabbit is a wild animal. → _____

VI. Define:

[1 x 3 = 3]

1. trees - _____

2. creepers - _____

3. herbs - _____

VII. Write the examples of these in the given boxes.

[0.5 x 4 = 2]

Religious festival
1. _____
2. _____

National festival
1. _____
2. _____

VIII. Circle the correct answer:

[0.5 x 4 = 2]

1. Children's Day is celebrated on **14th November** / **2nd October** in India.
2. Rabbit and fish are **wild** / **pet** animals.
3. A **crow** / **cockroach** has six legs.
4. A **zebra** / **housefly** lives in a forest.

IX. Answer these questions:

Q1. Write two good manners and habits.

[2]

Ans. _____

Q2. How do plants make their food?

[2]

Ans. _____

Q3. Why do stars appear small?

[1]

Ans. _____

Q4.How will you stop people from cutting down the trees and why ? [1.5]

Ans. _____

Q5. Name two stray animals and how will you take care of them ? [1.5]

Ans. _____

X. Name these: [0.5 x 4 =2]

- a) Plant with medicinal properties, found in homes and often worshipped → _____
- b) National tree of India → _____
- c) Plant which gives oil for cooking → _____
- d) I come out in season of rain. I live both on land and water. I am found near ponds.
Who am I ? → _____.

XI. Draw, colour and label any four parts of a plant. [0.5 + 0.5 + 2 = 3]



DELHI PUBLIC SCHOOL

SAIL Township, Ranchi

SECOND SEMESTER (SESSION-2019-20)

SUBJECT: HINDI

CLASS: – I Sec:- _____

Roll no.:- _____

DATE :- 02.03.2020

M.O. :- _____

F. M. :- 40

NAME:- _____

I. सही(✓) उत्तर चुनो : [0.5 x 4 = 2]

1. किसकी टाँग टूट गई?

चिड़िया की खिलौने की चिड़े की

2. छुक-छुक छुक-छुक

चलती रेल थकती रेल रुकती रेल

3. जब सच में शेर आ गया तब क्या हुआ?

गाँव वालों ने उसे भगा दिया

दीनू ने उसे भगा दिया

कोई भी दीनू की मदद के लिए नहीं आया

4. टिन्नी एक क्या थी?

चिड़िया बतख मुरगी

II. सही वचन चुनकर सही (✓) का चिह्न लगाओ : [0.5 x 4 = 2]

1. अपना – (अपने/आपने) 2. टोपी – (टोपीयाँ /टोपियाँ)

3. चिड़िया– (चीड़ीयाँ/चिड़ियाँ) 4. आँख – (आखें /आँखें)

III. इन शब्दों के अनेक नाम लिखें – [0.5 x 4 = 2]

1. चाँद –,

2. कमल –,

IV. अधूरे वाक्यों को मिलान करें :

[0.5 x 4 = 2]

क) चिड़ा डरते-डरते

1. थकती रेल।

ख) देखो कभी न

2. झूले पर चढ़ा।

ग) वे लाठियाँ लेकर

3. निकाले और घर ले गई।

घ) टिन्नी ने दाने

4. दौड़े आए।

V. इन शब्दों को सही क्रम में लिखकर वाक्य बनाओ :-

[1 x 2 = 2]

1. नाव में नदी रही है चल

उत्तर -

2. कूद है बंदर पेड़ पर रहा

उत्तर -

VI. चुनकर शब्दों के अंक लिखें:-

9३, ६, ४, १, ५,

[0.5 x 4 = 2]

1. पाँच -

2. छह -

3. चार -

4. तेरह -

VII. इन शब्दों के लिंग बदलें :

[0.5 x 4 = 2]

1. औरत -

2. भाई -

3. बैल -

4. लड़की -

VIII. वाक्य बनाओ :-

[1 x 5 = 5]

1. भूख -

2. बीमार -

3. आवाज़ -

4. झूठ -

5. सरदी -

IX. कविता पूरा करो:

[0.5 x 4 = 2]

..... या बरसात,
..... यह दिन रात।

X. प्रश्नों का उत्तर एक शब्द में दें।

[0.5 x 4 = 2]

1. चूँ-चूँ चूहा और गिट्टू तोता क्या थे ?
2. किसकी टाँग टूट गई ?
3. दीनू क्या चराने गाँव के बाहर जाता था?
4. रेलगाड़ी कैसे चलती है?

XI. किसने किससे कहा :

[0.5 x 4 = 2]

1. मैं तो बीमार हूँ।
..... ने से
2. यह लड़का रोज़ झूठ बोलता है।
..... ने में

XII. प्रश्नों के उत्तर लिखें:

[1.5 x 4 = 6]

1. चिड़िया ने क्या कहा ?
उत्तर-
2. 'रेलगाड़ी' कविता में किन - किन ऋतुओं की बात आई है?
उत्तर-
3. पहली बार दीनू की आवाज़ सुनकर किसानों ने क्या किया ?
उत्तर-

4. चूँ –चूँ और गिट्टू को खाना क्यों नहीं मिला ?

उत्तर-

XIII. 'तोता' अथवा 'होली' पर चार वाक्य लिखें:

[1 x 4 = 4]

.....

.....

.....

.....

.....

.....

.....

.....

.....

.....

XIV. दिए गए गद्यांश को पढ़कर प्रश्नों के उत्तर दें।

एक जंगल था, उसमें हाथियों का एक झुंड रहता था। एक बार बहुत दिनों तक वर्षा नहीं हुई, तो उस जंगल में पानी की कमी हो गई। नदी नाले सूख गए। हाथियों ने परेशान होकर जंगल के चारों ओर खोज की तो बहुत दूर स्वच्छ पानी का एक तालाब मिल गया।

क) दो बहुवचन शब्द गद्यांश से चुनकर लिखें :-

[0.5 x 2 = 1]

1. 2.

ख) दो अंक वाले शब्द चुनकर लिखें :-

[0.5 x 2 = 1]

1. 2.

ग) विलोम शब्द लिखें :-

[0.5 x 2 = 1]

1. दूर X

2. बहुत X

घ) इन शब्दों के अनेक नाम लिखें।

[0.5 x 4 = 2]

1. स्वच्छ - 2. जंगल -

3. पानी - 4. वर्षा -



DELHI PUBLIC SCHOOL

SAIL Township, Ranchi

SECOND SEMESTER (SESSION-2019-20)

SUBJECT: Maths

CLASS: – I Sec:- _____

Roll no.:- _____

DATE :- 04.03.2020

M.O. :- _____

F. M. :- 40

NAME:- _____

1. Choose the correct option:

[1 x 10 = 10]

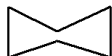
i) Hema had 46 stickers. She gets 33 new stickers. How many stickers does she have now?

- a) 74 b) 78 c) 79 d) 71

ii) There are 6 chairs in a shop. But 2 of them are broken and have only 3 legs each. How many total legs do all the 6 chairs have in all ?

- a) 11 b) 24 c) 28 d) 22

iii) How many lines are used to make the given image?



- a) 8 b) 3 c) 4 d) 6

iv) The shape of a dice is _____.

- a) rectangle b) cube c) cuboid d) cone

v) Sam buys a pencil for ₹ 5, a box for ₹ 10, an eraser for ₹ 8 and a colour box for ₹ 30. Find the total money he spends on buying all the items.

- a) 54 b) 56 c) 53 d) 48

vi) Complete the sequence.

16, 32, _____, 64

- a) 58 b) 55 c) 48 d) 52


vii) $9 \times \underline{\hspace{2cm}} = 81$

a) $5 \square$

b) $6 \square$

c) $9 \square$

d) $7 \square$



viii)

There are 4 fans. Each fan has 3 blades. $\underline{\hspace{2cm}} \times \underline{\hspace{2cm}} = \underline{\hspace{2cm}}$ blades in all. (Choose the correct order)

a) $3, 4, 12 \square$

b) $12, 3, 4 \square$

c) $4, 3, 12 \square$

d) $12, 4, 3 \square$

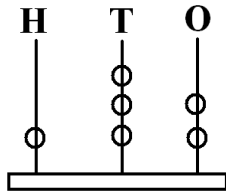
ix) $184 = \underline{\hspace{2cm}}$ hundred + $\underline{\hspace{2cm}}$ tens + $\underline{\hspace{2cm}}$ ones

a) $1 \text{ hundred} + 80 \text{ tens} + 4 \text{ ones} \square$

b) $1 \text{ hundred} + 80 \text{ tens} + 40 \text{ ones} \square$

c) $1 \text{ hundred} + 8 \text{ tens} + 4 \text{ ones} \square$

d) $1 \text{ hundred} + 4 \text{ tens} + 8 \text{ ones} \square$



x)

a) $148 \square$

b) $143 \square$

c) $132 \square$

d) $130 \square$

2. Fill in the blanks:

[0.5 x 10 = 5]

a) $48 + 22 = \square$ tens.

b) $32 - 16 = \square$ tens + \square ones.

c) The long hand of the clock shows the $\underline{\hspace{2cm}}$ hand.

d) A leap year has $\underline{\hspace{2cm}}$ months.

e) $\underline{\hspace{2cm}}$ comes just before May.

f) $\underline{\hspace{2cm}}$ comes just after Thursday.

g) Rupee 1 = $\underline{\hspace{2cm}}$ paise.

h) The shape of a ball is $\underline{\hspace{2cm}}$.

i) The numeral for the number name four hundred fifty nine is $\underline{\hspace{2cm}}$.

j) Ten more than 69 is $\underline{\hspace{2cm}}$.

3. Read the calendar and answer the question.

[0.5 x 4 = 2]


February 2020

Sunday	Monday	Tuesday	Wednesday	Thursday	Friday	Saturday
						1
2	3	4	5* Sam's Birthday	6	7	8
9	10	11	12	13	14	15* My result
16	17	18	19	20	21	22
23	24	25	26	27	28	29


- a) Next month will have _____ days.
- b) There are _____ Fridays this February.
- c) The day just after my result is _____.
- d) The next Wednesday after Sam's birthday is on _____ February.

4. Draw the hands to show the time.

[0.5 x 4 = 2]



6:00 (6 o'clock)



4:00 (4 o'clock)

5. Add:

[1 x 2 = 2]

$$\begin{array}{r} 2 \quad 7 \\ + 1 \quad 8 \\ \hline \end{array}$$

$$\begin{array}{r} 6 \quad 9 \\ + 1 \quad 7 \\ \hline \end{array}$$

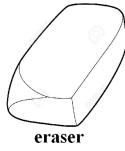
6. Subtract.

[1 x 2 = 2]

$$\begin{array}{r} 3 \quad 4 \\ - 1 \quad 9 \\ \hline \end{array}$$

$$\begin{array}{r} 8 \quad 0 \\ - 4 \quad 8 \\ \hline \end{array}$$

16. Money Sums.



64 rupees

46 rupees

3 rupees

28 rupees

I. How much do they cost together ?

a) Ice-cream and Jam

[1]

b) How much will you get by subtracting cost of an ice-cream from the cost of a car. [1]

c) If you have Rs. 74. Then the two items that you can purchase are _____
and _____.

[1]

17. Jai had 35 balloons. His friends took away 24 balloons. How many balloons are left now.

[0.5 x 3 = 1.5]

	T	O



DELHI PUBLIC SCHOOL

SAIL Township, Ranchi

SECOND SEMESTER (SESSION-2019-20)

SUBJECT: General Knowledge

DATE :- 17.02.2020

CLASS: – I Sec:- _____

M.O. :- _____

Roll no.:- _____

F. M. :- 25

NAME:- _____

I. Tick the correct options :-


[0.5 x 5 = 2.5]

1. A panda likes to eat?
a) apples b) bananas c) bamboo
2. Who is the master of **Po** in the film Kung Fu Panda?
a) Mr. Ping b) Shifu c) Oogway
3. To which state does Sandesh, a popular sweet belong?
a) West Bengal b) Kerala c) Jammu
4. On Independence day, where does our Prime Minister hoist the national flag?
a) Raj Bhawan b) Red Fort c) India Gate
5. What are camels also called?
a) ships of the desert b) wonders of the desert c) rats of the desert

II. Identify these famous faces and match it with the given names:


[0.5 x 4 = 2]

1.



a) Mother Teresa

2.




b) A.P.J. Abdul Kalam

3.



c) Amitabh Bachchan

4.



d) Rabindranath Tagore

III. Fill in the blanks using the help box :

[0.5 x 6 = 3]

Mahatma Gandhi, mixer grinder, century, Dhyan Chand, geyser, spices

1. A hundred years make a _____.
2. _____ led the struggle for freedom from the British rule in India. He is also called the father of the nation.
3. Indian hockey player _____ is considered one of the greatest players of all time.
4. _____ helps in making chutney and shakes.
5. Kerala is the leading producer of _____ in India.
6. _____ provides us hot water.

IV. Identify the pictures and answer using the help box:

[0.5 x 5 =2.5]

violin, plateau, drums, desert, guitar

1. You are standing on a raised flat land. You are on a _____.
2. To play me, pluck my strings, my lovely music will make you sing. I am a _____.
3. You are at a place which is very hot and dry and you can hardly see any plants around. You are in a _____.
4. When you draw a bow across my strings the sweetest melody for you I bring. I Am a _____.
5. Doom, doom, doom as you bang. I come alive and make you dance. I am a _____.

V. Match the signs with what they say:

[0.5 x 5 = 2.5]



a) Parking



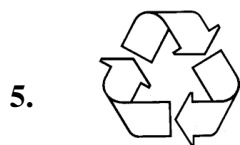
b) Hospital



c) No Parking



d) Recycle



e) Wheelchair

VI. Answer the questions using the help box :

[0.5 x 6 = 3]

pattern, chef, 31st December, hands, khadi, 1st January

5) On which part of the body will you find knuckles ? - _____

6) What is a professional cook called? - _____

7) What kind of cloth is mostly used to make the national flag ? - _____

8) On which date do we celebrate New Year's Eve? - _____

9) On which date do we celebrate New Year's Day? - _____

10) What is a design that is repeated and is used to decorate something called? -

VII. Read the clues and fill in the blanks:

[1 x 5 = 5]

5) Sydney Opera House is situated here –

A _____ S T R _____ L _____ A

6) This colour of the Indian Flag stands for courage and sacrifice -

S _____ _____ F _____ O N

7) Petronas Tower is situated here -

M _____ L A _____ S _____ A

8) Buckingham Palace is situated here –

E _____ G L _____ N D

9) This is the fastest animal in the world –

C _____ E E _____ A _____

VIII. Write True or False :

[0.5 x 4 = 2]

1) Pratibha Patil was the first woman President of India.

2) The Ostrich is the smallest bird in the world.

3) Turtles shed their shells every year.

4) The fear of crossing the road is called aerophobia.

IX. Tick the correct options :

[0.5 x 5 = 2.5]

1) Who was India's first female teacher?

a) Mother Teresa

b) Indira Gandhi

c) Savitribai Phule

2) Bharatnatyam is a dance form from which state of India?

a) Maharastra

b) Assam

c) Tamil Nadu

3) Which is the tallest statue in India ?

a) Statue of Fraternity

b) Statue of Liberty

c) Statue of Unity

4) How will you relate your maternal grandfather with yourself?

a) your father's father

b) your mother's father

c) your mother's grandfather

5) Who is the new Chief Minister of Jharkhand?

a) Narendra Modi

b) Hemant Soren

c) Raghubar Das



DELHI PUBLIC SCHOOL

SAIL Township, Ranchi

SECOND SEMESTER (SESSION-2019-20)

SUBJECT: Computer

DATE :- 19.02.2020

CLASS: - I **Sec:-** _____

M.O. :- _____

Roll no.:- _____

F. M. :- 20

NAME:- _____

Q1. Choose the correct option:- **[0.5 X 4 = 2]**

- a) How many buttons are there in a mouse?
 - i) 1
 - ii) 4
 - iii) 5
 - iv) 2
- b) What is the shape of a pendrive ?
 - i) Semi circle
 - ii) Square
 - iii) Rectangle
 - iv) Triangle
- c) Which key is used to type text in capital letter ?
 - i) Enter Key
 - ii) Capslock Key
 - iii) Arrow Key
 - iv) Spacebar key
- d) How many alphabet keys are there in a keyboard?
 - i) 20
 - ii) 24
 - iii) 25
 - iv) 26

Q2. Fill in the blanks:- **[0.5 X 5 = 2.5]**

Spacebar key, input, enter, DVD, eraser

- a) A _____ looks similar to a CD.
- b) To move to a new line in a paragraph press the _____ key.
- c) The _____ tool is used to erase any part of a drawing.
- d) _____ is the longest key on the keyboard .
- e) Mouse is an _____ device.

Q3. Match the following related with mouse :- **[0.5 X 4 = 2]**

- | | |
|--|---|
| a) To move an object from one location to another. | i) click <input type="checkbox"/> |
| b) Pressing the left mouse button twice , very quickly and releasing it. | ii) scroll wheel <input type="checkbox"/> |
| c) To move page up and down. | iii) drag <input type="checkbox"/> |
| d) Pressing the left mouse button once with the index finger and releasing it. | iv) double click <input type="checkbox"/> |

Q4. Write the full form of these :- **[1 X 2 = 2]**


- a) CD - _____
- b) DVD - _____

Q5. Write True or False for the following :- **[0.5 X 5 = 2.5]**

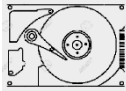
- a) Keep your index finger on the left button of the mouse. _____
- b) You can carry your pendrive with yourself. _____
- c) We cannot increase the size of the eraser. _____
- d) A pendrive has less space than a hard disk. _____
- e) There are six arrow keys present on the keyboard. _____


Q6. Fill in the missing letters :-

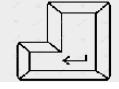
[0.5 X 5 = 2.5]

a)  → T _ _ T T O _ L

b)  → P _ _ C I _ T _ _ L

c)  H _ R _ D _ S K

d)  → F _ L _ C _ _ O R T O _ L

e)  E _ _ E R K _ Y

Q7. Jumbled Words :-

[0.5 X 5 = 2.5]

a) KCLIC - _____

b) SORUCR - _____

c) NIPOERT - _____

d) YEBARKOD - _____

e) EDLETE - _____

Q8. Answer the following questions in one word :-

[1 x 2 = 2]

a) Which storage device is used in cameras and mobile phones ?

Ans- _____

b) Which key is used to move the pointer in four different directions?

Ans - _____

Q9. Draw and colour any one storage device. [CD / PENDRIVE]

[1 X 2 = 2]