



DELHI PUBLIC SCHOOL

SAIL Township, Ranchi

FIRST SEMESTER EXAMINATION (SESSION-2024-25)

CLASS: – III

DATE :- 13.09.2024

SUBJECT:- Hindi

Time: 2½ Hours

M.M. :- 80

व्याकरण (खण्ड – क)

1. गद्यांश पढ़कर प्रश्नों के उत्तर दीजिए :-

(5)

भारत हमारा देश है। यहाँ अलग-अलग धर्मों के लोग मिल-जुलकर रहते हैं। यहाँ कई त्योहार भी सभी साथ मिलकर मनाते हैं। भारत की राजधानी नई दिल्ली है। यह सन् 1947 में स्वतंत्र हुआ था। भारत के उत्तर में हिमालय है और दक्षिण में हिन्द महासागर है। हमारा देश हमारा गौरव है।

प्रश्न:-

(क) हमारे देश का क्या नाम है?

(ख) भारत की राजधानी कहाँ है?

(ग) भारत कब स्वतंत्र हुआ था?

(घ) भारत के दक्षिण में क्या है?

(ङ) हमारा गौरव क्या है?

(खण्ड – ख)

2. निर्देश के अनुसार कार्य करें :-

(3X 5 = 15)

(क) दिए गए शब्दों के लिंग बदलें :-

(i) लेखक (ii) छात्र (iii) देवता

(ख) दिए गए शब्दों के वचन बदलें :-

(i) रात (ii) कविता (iii) पुस्तक

(ग) दिए गए शब्दों के दो-दो पर्यायवाची शब्द लिखें :-

(i) कमल (ii) आँख (iii) घर

(घ) दिए गए शब्दों के विलोम शब्द लिखें :-

(i) आशा (ii) उदय (iii) आस्तिक

(ङ) दिए गए संयुक्त व्यंजनों से दो-दो शब्द बनाकर लिखें :-

(i) क्ष (ii) त्र (iii) ज्ञ

3. रिक्त स्थानों की पूर्ति करें :-

(1X10 = 10)

(क) अपने मन के भावों एवं विचारों के आदान-प्रदान के साधन को कहते हैं।

(ख) कविता लिखना भाषा का रूप है।

(ग) हिन्दी हमारी है।

(घ) जिन वर्णों का उच्चारण स्वर वर्णों की सहायता से होता है, उन्हें वर्ण कहते हैं।

(ङ) भाववाचक संज्ञा को केवल किया जा सकता है।

(च) संयुक्त व्यंजनों की संख्या है।

(छ) स्वर की कोई मात्रा नहीं होती।

(ज) लिंग प्रकार के होते हैं।

(झ) भाषा के शुद्ध रूप का ज्ञान करवाने वाले शास्त्र को कहते हैं।

(ञ) संज्ञा के भेद होते हैं।

साहित्य (खण्ड – ग)

4. दिए गए प्रश्नों के उत्तर एक शब्द में लिखें:-

(1X10 = 10)

(क) भेड़िए को नदी में धक्का किसने दिया ?

(ख) बकरी और मेमने ने नदी के तट पर पहुँचकर क्या पिया ?

(ग) कछुआ स्वभाव से कैसा था ?

(घ) नदी-तालाब का पानी क्यों सूखने लगा था ?

P.T.O.

- (ड) पहली बार लड़के को रुपया किसने दिया ?
 (च) पिता ने लड़के को कितने रुपए कमाकर लाने के लिए कहा ?
 (छ) हिमालय को किसका घर कहा जाता है ?
 (ज) लड़का कैसा था ?
 (झ) बकरी और मेमना कहाँ चर रहे थे ?
 (ञ) नदियों का पानी कैसा होता है ?

5. दिए गए शब्दों के अर्थ लिखें:-

(1X6 = 6)

- (क) गौरव (ख) निश्चय (ग) विपत्ति
 (घ) बोझा (ङ) शीतल (च) हानि

6. पाठ के आधार पर लिखें, किसने – किससे कहा?

(1X6 = 6)

- (क) "मामा, झूठ तो मत बोलो ।"
 (ख) " चलो, पानी पीकर आते हैं।"
 (ग) " मैं तो उड़ नहीं सकता फिर कैसे तुम्हारे साथ चलूँगा ?"
 (घ) "मित्र! तुम तो जानते ही हो कि हम पानी के बिना नहीं रह सकते।"
 (ङ) "भैया, क्या बात है ? क्यों रो रहे हो ?"
 (च) "जा बेटा, इसे कुँ में डाल दे।"

7. कविता की पंक्तियाँ पूरी करें:-

(0.5X12 = 6)

सभी1..... से2..... है
3..... को जाकर4..... ,
 किस5..... में है6..... से
7..... जाने का8.....
9..... ,10..... से भी पहले
11..... है12..... ।

8. दिए गए प्रश्नों के उत्तर एक वाक्य में लिखें :-

(1X4 = 4)

- (क) हिमालय क्या सपना देख रहा है ?
 (ख) कछुए ने किस बात के लिए वचन दिया था ?
 (ग) भेड़िया नदी किनारे क्यों गया ?
 (घ) पिताजी को किस बात की चिंता रहती थी ?

9. दिए गए प्रश्नों के दीर्घ उत्तर लिखें :-

(2X2 = 4)

- (क) बकरी ने मेमने को क्या सीख दी ?
 (ख) कछुआ नीचे कैसे गिर गया ?

10. दिए गए शब्दों से वाक्य बनाएँ :-

(1X2 = 2)

- (क) परिश्रम (ख) स्वागत

11. मूल्यपरक प्रश्न:-

(2)

प्रश्न- आपके मित्र को कक्षा में कूड़ा-कचड़ा फैलाने की बुरी आदत है। आप उसे अपने आस-पास सफाई रखने के लिए कैसे समझाएँगे?

(खण्ड – घ)

12. किसी एक विषय पर पत्र लिखें:-

(5)

अपने मामा की शादी में जाने के लिए दो दिनों के अवकाश हेतु प्रधानाचार्य महोदय को आवेदन पत्र लिखें ।
 अथवा

अपने मित्र को नए घर के गृहप्रवेश में आमंत्रित करते हुए निमंत्रण पत्र लिखें ।

13. किसी एक विषय पर अनुच्छेद लिखें:- (लगभग 80 शब्दों में)

(5)

- (क) मेरा विद्यालय (ख) पेड़ : हमारे मित्र (ग) मेरा प्रिय खिलौना



DELHI PUBLIC SCHOOL

SAIL Township, Ranchi

FIRST SEMESTER EXAMINATION (SESSION-2024-25)

CLASS: – III

DATE :- 09.09.2024

SUBJECT:- Social Science

Time: 2½ Hours

M.M. :- 80

-
- 1. Define:** [1 x 8 = 8]
- a) angarakha b) parliament c) culture d) fertile
e) welfare f) purify g) compass h) heavenly bodies
- 2. Answer in detail:** [3 x 8 = 24]
- a) What is a constellation? Write the names of any two constellations.
b) What is a map? How is it more useful than a globe?
c) Write three ways to control land pollution.
d) Why is our country divided into states?
e) Why is the southern part of India called a peninsula?
f) Write three rules that we must follow with regard to our national flag.
g) What is the Rock garden famous for?
h) Why do people wear different types of clothes?
- 3. Answer in short:** [2 x 9 = 18]
- a) Why is the sun important to us?
b) Why does life exist on Earth?
c) Write two ways by which air gets polluted.
d) Write the name of any four neighbouring countries of India.
e) What kind of climate will you find in the mountains and in the plains?
f) How will you show respect to our national anthem?
g) Write the names of any four places of tourist interest in Delhi.
h) What is our national flag called? Why is it called so?
i) What do women in India wear?
- 4. Name them:** [1 x 6 = 6]
- a) The governor of Jharkhand - _____
b) The continent in which we live - _____
c) If possible, use the product again - _____
d) National song of India - _____
e) Chandigarh was designed by - _____
f) The city of Nawabs - _____

P.T.O.

5.

Fill in the blanks:

[1 x 6 = 6]
- a) The Dal lake is popular for its _____ rides.

b) In summer, people wear _____ clothes.

c) There are _____ lions in our national emblem.

d) The largest desert in the world is the _____.

e) _____ is the largest state in India.

f) The main source of water is_____.
6.

State whether the statement is True or False:

[0.5 x 10 = 5]
- a) The moon is a satellite of the Earth.

b) Earth has five continents and seven oceans.

c) Plants need air to live.

d) There are nine union territories in India.

e) The southern plateau is called the Deccan plateau.

f) Saffron stands for truth and peace.

g) The Lotus Temple is in Delhi.

h) Young girls in north India wear pattu pavadai.

i) Chhath is the main festival of Patna.

j) Arabian sea lies to the east of India.
7.

Match the column A with the correct Answer from Column B:

[1 x 6 = 6]
- Column A

a) Assam

b) Samadhi of Mahatma Gandhi

c) Jana-gana-mana

d) states

e) Shah Jahan

f) He landed on the Moon

Column B

i) Raj Ghat

ii) 28

iii) Red Fort

iv) Neil Armstrong

v) Mekhela Chador

vi) National anthem
8.

Complete the series:

[1 x 5 = 5]
- a) Andaman & Nicobar : Island : : Thar : _____

b) National Animal : Royal Bengal Tiger : : National Bird : _____

c) Qutub Minar : Delhi : : Zakir Hussain Rose Garden: _____

d) Tamil Nadu : Veshti : : Kerala : _____

e) Smallest ocean : Arctic : : Largest ocean : _____
9.

Draw and label any one national symbol of India:

[2]



DELHI PUBLIC SCHOOL

SAIL Township, Ranchi

FIRST SEMESTER EXAMINATION (SESSION-2024-25)

CLASS: – III

DATE :- 19.09.2024

SUBJECT:- Science

Time: 2½ Hours

M.M. :- 80

1. Define : [2 x 4 = 8]

- a) Cud b) Subway c) Wading birds d) Germination

2. Answer the following questions in brief : [2 x 4 = 8]

- a) Write any **two** functions of stomach.
b) What is the use of webbed feet in birds?
c) What first aid should be given to a person who fell down and got hurt? Give **two** points.
d) Write **two** functions of seeds.

3. Answer the following questions in detail : [3 x 5 = 15]

- a) Write **three** functions of the skeletal system.
b) What features of a bird help it to fly?
c) What is a food chain? Explain with the help of an example.
d) Write any **three** safety rules to be followed on the road.
e) What do you mean by photosynthesis?

4. Give reasons : [2 x 2 = 4]

- a) We should walk with straight body and open shoulder.
b) Emu is a flightless bird.

5. Differentiate between : (any two points) [2 x 2 = 4]

- a) Flight feathers and Down feathers
b) Natural fibres and Man-made fibres

6. Answer in one sentence : [1 x 5 = 5]

- a) Why do preying birds have sharp and curved claws?
b) What are fangs?
c) Why should we fix wire netting on window frames and doors?
d) What are scavengers?
e) What do you mean by exhaled air?

7. Fill in the blanks : [1 x 5 = 5]

- a) A _____ hears by detecting movements in the ground.
b) Due to the _____ shape of body, birds can cut through air easily while flying.
c) Fishes swim in water using their _____.
d) Silkworms eat the leaves of _____ plant.
e) We should not wear _____ clothes while lighting firecrackers.

8. Name them : [1 x 5 = 5]

- a) Thin tubes inside the body which carry blood to different body parts - _____
b) The sharp and curved claws of an eagle - _____
c) To keep biting something repeatedly or chew it hard - _____
d) Very fine threads used to make clothes - _____
e) Nostrils present on the top of a dolphin's head - _____

P.T.O.

9. Complete the series : [1 x 5 = 5]

- a) Scratching bird : hen : : _____ : crow
- b) _____ : nervous system : : lungs : respiratory system
- c) Prey : deer : : _____ : tiger
- d) Leaf blade : _____ : : main vein : midrib
- e) Bungalow : permanent house : : _____ : temporary house

10. Rewrite the sentences by changing the underlined words to make correct statements : [1 x 5 = 5]

- a) A house built with mud, straw and sticks is called pucca house.
- b) Jute is a man-made fibre.
- c) A wheat plant has tap root.
- d) Urine comes out from our body through the urinary bladder.
- e) An organ is made up of different organ systems.

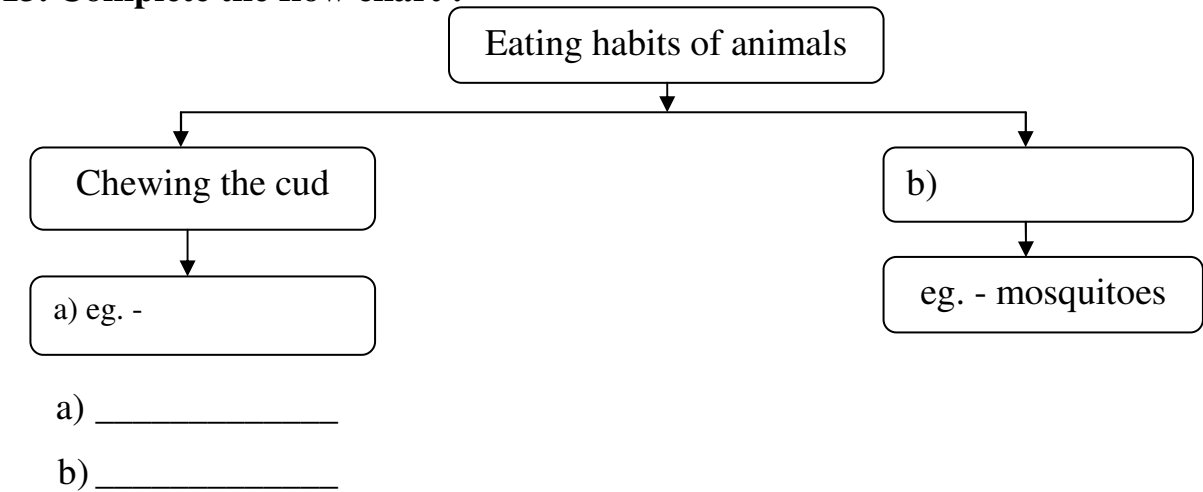
11. Write ‘True’ or ‘False’ : [0.5 x 6 = 3]

- a) All birds make nests and live in it.
- b) Bamboo fibre is also used to make clothes.
- c) The beak of a duck has strainers to trap worms and insects from water inside their mouth.
- d) Plants do not feel changes around them.
- e) Spinach plants store food in their leaves.
- f) Vulture is an example of decomposer.

12. Match the columns : [0.5 x 6 = 3]

Column - A	Column - B
1) giraffe	a) silk thread
2) bandage	b) circular mouth
3) cocoon	c) nose-leaf
4) leech	d) catches flying insects
5) swallow	e) first-aid box
6) bats	f) herbivore

13. Complete the flow chart : [1 x 2 = 2]



14. Give one example of each : [1 x 2 = 2]

- a) A climbing bird - _____
- b) A flower that we eat - _____

15. Draw and label : [3 x 2 = 6]

- a) Excretory system
- b) Two edible stems



DELHI PUBLIC SCHOOL

SAIL Township, Ranchi

FIRST SEMESTER EXAMINATION (SESSION-2024-25)

CLASS: – III

DATE :- 17.09.2024

SUBJECT:- English

Time: 2½ Hours

M.M. :- 80

Section- A (Reading-10 marks)

1. Read the passage carefully and answer the following questions: (5)

(Para 1) - Penguins are special birds that live in cold places. They have black and white feathers, and walk in a funny way. Although they are birds, penguins cannot fly. However, they are very good swimmers. They can swim faster than 25 miles per hour and can stay underwater for up to 20 minutes at a time. They love to eat fish and other sea animals.

(Para 2) - Penguins have short legs, but they can run fairly quickly. To travel over ice and snow, they sometimes slide on their bellies. Their bodies are covered nearly all over with short feathers which keep water out and trap warm air against the skin. A thick layer of fat protects these birds from the cold.

a) Where do penguins live? (Para 1)

b) What protects penguins from the cold? (Para 2)

c) What do penguins love to eat? (Para 1)

d) Fill in the blanks:

i) Although they are birds, penguins cannot _____. (Para 1)

ii) Penguins have _____ legs, but they can run fairly quickly. (Para 2)

e) Select and write a word from the passage which means the same as 'not ordinary': ____
(Para 1)

2. Read the poem given below carefully and answer the following questions: (5)

(Stanza 1) - *I thought I saw a monster,
underneath my bed.
His tongue was yellow,
and his eyes were red.*

(Stanza 2) - *I thought I saw a monster,
underneath my chair.
His face was purple,
and he had pink hair.*

(Stanza 3) - *I thought I saw a monster,
and that he saw me.
But don't tell my mother,
she will be scared, you see.*

a) What did the poet see under his chair? (Stanza 2)

b) What was the colour of the monster's eyes that the child saw under his bed?

(Stanza 1)

c) Fill in the blank:

i) But don't tell my _____, she will be scared, you see. (Stanza 3)

d) Pick and write a pair of rhyming words from the poem.

e) Write the opposite of 'underneath'.

Section- B (Writing-10 marks)

3. Paragraph writing:

(5)

Write a paragraph on any one topic in not more than 75 words.

a) My Daily Routine

OR

b) A Day at the Beach

4. Letter Writing (Informal):

(5)

a) You are Aniket/ Anisha, residing at A-225, Mayur Vihar, Delhi. Write a letter to your cousin inviting him/her over to your city during the summer vacation.

OR

b) You are Aniket/ Anisha, residing at A-225, Mayur Vihar, Delhi. Write a letter to your friend telling him/her about the new school you joined when you moved to a new city.

Section- C (Grammar -30 marks)

5. Do as directed:

(1x10=10)

a) Arrange these words and rewrite them to form a meaningful sentence:

i) in rain peacock the dances the

b) Pick out the common nouns in the given sentence:

i) The boy cried for a toy.

c) Fill in the blank with a proper noun:

i) _____ is a big country.

d) Fill in the blanks using either the singular or the plural form of the nouns given in the brackets:

i) There are many _____ (tree) near my _____ (house).

e) Fill in the blanks with is, am, are, was or were:

i) I _____ not well yesterday.

ii) My friends _____ going to watch a movie today.

f) Identify the gender of the underlined nouns:

i) My landlord is a nice person.

ii) The goose laid a beautiful egg.

g) Fill in the blanks with a, an or the:

i) I found _____ seashell in the sand.

ii) Please give me _____ eraser.

6. Pick out and write the adjectives in the following sentences:

(1x5=5)

a) The old man was walking with a wooden stick.

b) Your new dress is lovely.

c) The red roses have a sweet smell.

d) Rabbits are small, furry animals.

e) The tiny, green bird flew away.

7. Fill in the blanks with the correct form of adjectives given in the brackets: (1x5=5)

a) Jerry is a _____ boy. (tall)

b) Akash is _____ than his brother. (handsome)

c) She is the _____ singer in the group. (good)

d) It is very _____ inside the room. (dark)

e) This road is the _____ in our city. (long)



DELHI PUBLIC SCHOOL

SAIL Township, Ranchi

FIRST SEMESTER EXAMINATION (SESSION-2024-25)

CLASS: – III

DATE :- 11.09.2024

SUBJECT:- Maths

Time: 2½ Hours

M.M. :- 80

I. Fill in the blanks:

[1 x 12 = 12]

- 1) In the fraction $\frac{3}{5}$, _____ is called the denominator.
- 2) When a number is divided by _____, the result is the number itself.
- 3) The result of multiplication is called _____.
- 4) $15 \times 9 =$ _____.
- 5) A _____ has no vertex and no edge.
- 6) One more than 3199 is _____.
- 7) $(298 + 2165) + 1148 = 298 + (\text{_____} + 1148)$.
- 8) Symbols V, L and _____ are never repeated in Roman numerals.
- 9) The successor of the largest 3 digit number is _____.
- 10) The number just before a given number is called its _____.
- 11) $0 \div 10 =$ _____.
- 12) $3862 - 100 =$ _____.

II. State whether each of the following statements is 'True' or 'False':

[1 x 8 = 8]

- 1) 3476 is an even number. _____
- 2) In Roman Numerals a symbol is repeated maximum up to three times. _____
- 3) The place value of 0 in 5042 is 100. _____
- 4) The result of subtraction is called sum. _____
- 5) A line segment has a fixed length. _____
- 6) $496 \times 100 = 496000$. _____
- 7) In $\frac{4}{15}$, 15 is the numerator. _____
- 8) A cylinder has three curved surfaces only. _____

III. Answer in short:

[1 x 5 = 5]

- 1) The numbers that can be put into pair(s). _____
- 2) The number to be subtracted. _____
- 3) I have 8 vertices and all square faces. _____
- 4) It means part of a whole or part of a collection. _____
- 5) The number which is being divided. _____

IV. Match the column:

[1 x 5 = 5]

Column – A

Column – B

- | | |
|------------------------|-----------|
| 1) $\frac{1}{8}$ of 24 | i) 600 |
| 2) $781 \div 1$ | ii) 94 |
| 3) 300×2 | iii) 9528 |
| 4) XCIV | iv) 3 |
| 5) $6214 + 3314$ | v) 781 |

P.T.O.

V. Do as directed: (Show the working)**[2 x 8 = 16]**

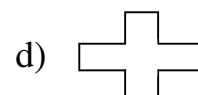
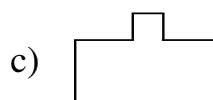
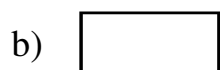
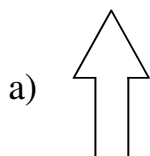
- 1) Write the :
 - a) successor of 2510.
 - b) predecessor of the largest 2-digit number.
- 2) Arrange in ascending order.
7460, 9871, 4553, 8610.
- 3) Round off the following numbers to the nearest 100.
a) 6478 b) 8312
- 4) Arrange in columns and add : $1620 + 3430 + 200$.
- 5) Find the product : 35×27
- 6) Divide and write the quotient and remainder : $732 \div 3$
- 7) How much is 4326 less than 8214?
- 8) Form the greatest and the smallest 3-digit number using the digits 7, 3 and 5.

VI. Solve (Show the working) :**[3 x 6 = 18]**

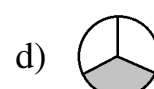
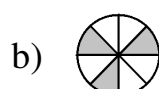
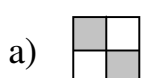
- 1) A factory produces 3730 black boxes and 2353 red boxes. What is the total number of boxes produced in the factory?
- 2) Rahul had 2486 chocolates. He gave 1293 chocolates to his friend. How many chocolates are left with him?
- 3) The cost of one bag is ₹510. What is the cost of 8 such bags?
- 4) There are 968 candies in 8 packets. How many candies will be there in one such packet?
- 5) Rohan bought 8 ice-creams, out of which 5 were of orange flavour. What fraction of the ice-creams was of orange flavour?
- 6) Simplify : $6472 + 1125 - 5341$.

VII. Solve (Show the working) :**[4 x 4 = 16]**

- 1) a) Find the product using lattice multiplication : 234×6
b) Find the quotient by repeated subtraction : $24 \div 6$
- 2) Draw the line(s) of symmetry in each of the given pictures :



- 3) Write the fraction of the shaded part in each of the following figures.



- 4) Shivam had ₹ 8256 with him. He bought a bag for ₹ 2150 and a stand for ₹ 3241. How much amount is left with him?



DELHI PUBLIC SCHOOL

SAIL Township, Ranchi

FIRST SEMESTER EXAMINATION (SESSION-2024-25)

SUBJECT: General Knowledge

DATE :- 04.09.2024

CLASS: – III Sec:- _____

Time: 1 Hour

M.O. :- _____

Roll no.:- _____

F. M. :- 50

NAME:- _____

I. Fill in the blanks by choosing the correct words from the box: (1x10=10)

mint, Jammu and Kashmir, Yen, feather, Sun, Bengaluru, Kapil Dev, erosion, larynx, orbit

- a) Rakhi wears a long woollen kurta called 'phiran' She belongs to _____ .
- b) As light as a _____ (Birds have it.).
- c) The water cycle is driven by the _____.
- d) The currency of Japan is _____.
- e) It is a soft herb and has a cooling flavour _____.
- f) _____ was the first Indian cricket captain who led India to win the Cricket World Cup in the year 1983.
- g) Bangalore is now called _____.
- h) All the planets move in a fixed path called _____ .
- i) _____ is the movement of solid particles of land by wind, water, ice or gravity.
- j) _____ is another name for our voice box.

II. Answer the following questions: (1x5=5)

- a) On what layer of the Earth are landforms found ? _____
- b) Who improved the steam engine in 1769? _____
- c) Which city is called 'City of Seven Hills'? _____
- d) Which is the longest river in the world? _____
- e) Who invented telephone? _____

III. Write 'True' or 'False': (1x10=10)

- a) Koneru Humpy started playing chess at a young age of 5 years. _____
- b) Gases have a fixed shape. _____
- c) The Moon orbits the Earth once every 24 days. _____
- d) To write in capital letters on a computer you use the capslock key. _____
- e) Neil Armstrong was the first European to reach India by sea route. _____
- f) Humans are carnivores. _____
- g) Coriander leaves are bitter in taste. _____

P.T.O.

- h) First form of thermometer was invented by Galileo Galilee. _____
- i) The largest organ in the human body is the skin that covers our body. _____
- j) Omnivores are animals that eat both plants and meat. _____

IV. Unscramble the words to name the following : (1x5=5)

- a) It is the fastest animal on Earth. [HETEAHC] _____
- b) This fish is big in size and has whiskers like a cat. [ATC HFSI] _____
- c) It is the tallest artificial structure in the world. It is in Dubai. [RBUJ FLKAHAI] _____
- d) They have a fixed shape. [OSDLI] _____
- e) It is the heaviest snake. [ACONADAN] _____

V. Match the column: (1x10=10)

- | | | |
|-----------------------------------|------------------|----------------------|
| a) Russia | i) fish | <input type="text"/> |
| b) breathe through gills | ii) Ruble | <input type="text"/> |
| c) smallest bird | iii) I.D. | <input type="text"/> |
| d) Madame Tussauds Wax Museum | iv) magma | <input type="text"/> |
| e) horizontal page orientation | v) 1024 bytes | <input type="text"/> |
| f) Identification | vi) Humming Bird | <input type="text"/> |
| g) molten rock inside Earth | vii) London | <input type="text"/> |
| h) natural satellite of the Earth | viii) Varanasi | <input type="text"/> |
| i) Banaras | ix) landscape | <input type="text"/> |
| j) one kilobyte | x) moon | <input type="text"/> |

VI. Current Affairs: (1x5=5)

- a) Who won the double bronze medal in shooting in Paris Olympics 2024 from India? _____
- b) Who is the current governor of Jharkhand? _____
- c) India and Israel have launched a new Water Technology Centre at which institute? _____
- d) Which wrestler was disqualified from finals of Paris Olympics due to overweight issue? _____
- e) Which country won the T-20 Women’s Asia Cup 2024 title? _____

VII. Identify the following pictures: (1x5=5)

- a) Identify the cricketer.
- b) Identify the football player.
- c) Identify the story.








- d) Identify the personality.
- e) Identify the animal.







DELHI PUBLIC SCHOOL

SAIL Township, Ranchi

FIRST SEMESTER EXAMINATION (SESSION-2024-25)

SUBJECT: Computer

DATE :- 02.09.2024

CLASS: – III Sec:- _____

Time: 1 Hour

M.O. :- _____

Roll no.:- _____

F. M. :- 30

NAME:- _____

Q1) Choose the most suitable alternative:-

[0.5 x 4 = 2]

- a) In Linux, Documents is known as _____ .
i) Home ☐ ii) Directory ☐ iii) This PC ☐ iv) Taskbar ☐
- b) I am a part of mouse use to move contents up and down.
i) Right click ☐ ii) Left click ☐ iii) Scroll wheel ☐ iv) Mouse pad ☐
- c) I am used in combination with number keys to type special characters.
i) Shift Key ☐ ii) Caps Lock key ☐
iii) Alphabet Keys ☐ iv) Function Keys ☐
- d) Which key helps to cancel the previous task?
i) Delete ☐ ii) Control ☐ iii) Number ☐ iv) Escape ☐

Q2) Write the answer in one word :-

[1 x 4 = 4]

- a) To execute instructions - _____
- b) To press mouse button once - _____
- c) To type in capital letters - _____
- d) To leave a gap between two words or letters - _____

Q3) Fill in the blanks: -

[1 x 5 = 5]

- a) Computer has a very large _____ space.
- b) _____ devices are used to give instruction to the computer.
- c) _____ is a word processor which allows a user to create text documents.
- d) Computer gives _____ result.
- e) _____ is an output device which looks like a television screen.

Q4) Write T for True and F for False :-

[0.5 x 4 = 2]

- a) A computer can't act as a safe locker of data. _____
- b) There is one 'Enter Key' in a standard keyboard. _____
- c) Press the keys of the keyboard gently. _____
- d) Cover the computer properly with dust cover when not in use. _____

Q5) Number the steps in proper sequence to save a file :-

[0.5 x 4 = 2]

- a) Type the file name.
- b) Click on the 'Save' button.
- c) Click on the 'File' menu.
-

d) Click on ‘Save/Save As’ option
P.T.O.

Q6) Write short notes on: - **[2 x 3 = 6]**

a) Barcode Reader -

b) Recycle Bin -

c) Accuracy -

Q7) Match the following: - **[0.5 x 4 = 2]**

- | | | |
|------------------|---------------------|----------|
| a) This PC | i) 12 | [] |
| b) Monitor | ii) Input Device | [] |
| c) Function keys | iii) Home | [] |
| d) Keyboard | iv) Displays output | [] |

Q8) Answer the following questions: -

a) Mention any two rules that you should follow while using the computer lab. **[2]**

b) Explain any two functions of mouse. **[2]**

c) What is the use of printer? **[2]**

d) Mention any two tasks for which you use computer at home. **[1]**
