



DELHI PUBLIC SCHOOL

SAIL Township, Ranchi

FIRST SEMESTER EXAMINATION (SESSION-2024-25)

SUBJECT: ENGLISH

DATE :- 10.09.2024

CLASS: – II **Sec:-** _____

Time: 2 Hours

M.O. :- _____

Roll no.:- _____

F. M. :- 60

NAME:- _____

I. Read the given passage and answer the questions that follow:

(1x4=4)

The hillside is quiet and beautiful. One can hear the sound of the birds chirping, the river flowing and the wind blowing. The mountains are brown in colour. But some mountains have white snow on the top.

The bright yellow sun rises from between the mountains. The river flows down the mountain and is deep blue. The water also has many fish in them. These fish are both big and small. Most of the fish are red and green in colour.

There are many houses on both sides of the river. Several people live in these houses. These people walk along the river and enjoy Mother Nature.

1. What can you hear on the hillside?

2. Why most of the mountains are brown in colour?

3. Write the opposite of the word '**dull**' from the passage.

4. Pick out a noun and an adjective from the above passage.

II. Answer the following questions:

(2x4=8)

1. Why does Monty’s mother scold him ?

2. Why did Jumbo cry for help ?

3. Why did the elephant blow his trunk everyday?

4. What surprise did Grandma have for the children ?

III. Make sentences with the following words:

(1x4=4)

1. helpful - _____

2. adore - _____

3. secret - _____

4. delicious - _____

IV. Who said to whom? (1x4=4)

1. “What a greedy boy you are!”

_____ , _____

2. “Let me help you to fix the roof of your house.”

_____ , _____

V. Fill in the blanks with appropriate words: (1x4=4)

- 1. The sound made by an elephant is called a _____.
- 2. Grandma squeezed the lemons in a _____.
- 3. Monty visited a total of _____ stores, before going to Uncle Sheep’s shop.
- 4. Jumbo held the rope with his _____.

VI. Fill in the blanks: (1x4=4)

- 1. To show comparison between two things, places, persons or animals we use ‘er’ form of the _____ word.
- 2. We use ‘a’ before words that begin with a _____ sound.
- 3. A _____ repairs cars and scooters.
- 4. Choose the correct option from the help box and join them with the words given below to form meaningful words.

top, room , fall, about

i) round - _____ ii) tree - _____

VII. Write the opposite gender of the following words:

(1x4=4)

- | | | | | | |
|----------|---|-------|----------|---|-------|
| 1. tiger | - | _____ | 3. son | - | _____ |
| 2. groom | - | _____ | 4. horse | - | _____ |

VIII. Underline the nouns in the following sentences:

(0.5 x 8=4)

1. Have you read this book on dinosaurs?
2. Tanu can run faster than her sister.
3. The doctor asked me to wear spectacles.
4. The Victoria Memorial is in Kolkata.

IX. Choose the correct words to complete these sentences:

(0.5 x 8 = 4)

1. Please help _____ (I/me) complete my homework as _____ (We/I) am confused.
2. She invited _____ (we/us) to her house. _____ (They/We) had a nice time there.
3. Ravi and Dev were tired. I gave _____ (they/them) some water, so they thanked _____ (us/me.)
4. Riya and Parul were eating mangoes. The girls enjoyed eating _____ (them/us) as _____ (she/they) found them delicious.

X. Fill in the blanks with suitable articles (a/an/the) :

(0.5x8=4)

1. I enjoyed _____ film we watched yesterday.
2. Swimming is _____ exciting sport.
3. There is _____ lizard on the wall.
4. The clown at _____ circus was wearing _____ colourful cap.
5. There is _____ policeman at _____ door.
6. I lost _____ ring you gave me.

XI. Write the correct spellings of the given words :

(0.5x4=2)

1. skueezing - _____
2. poring - _____
3. tukked - _____
4. leamoned - _____

XII. Fill in the blanks with suitable adjectives given in the help box:

(1x4=4)

intelligent, strong, fresh, colourful

1. The cheerful girls are making _____ posters.
2. We should always eat _____ fruits.
3. Sam is a _____ boy. He can lift heavy boxes.
4. Monty is an _____ boy. He can solve very difficult sums.

XIII. Write a paragraph on any one of the given topics:

(5)

1. Discipline
2. Time is Precious
3. My Favourite Festival

XIV. Write a letter to your friend inviting him/her to your birthday party. (5)

This image shows a single sheet of white paper with horizontal ruling lines. The lines are evenly spaced and run across the width of the page. There are no margins, text, or other markings on the paper.



DELHI PUBLIC SCHOOL

SAIL Township, Ranchi

FIRST SEMESTER EXAMINATION (SESSION-2024-25)

SUBJECT: EVS

DATE :- .09.2024

CLASS: – II Sec:- _____

Time: 2 Hours

M.O. :- _____

Roll no.:- _____

F. M. :- 60

NAME:- _____

I. Fill in the blanks: (1x 6 = 6)

1. There are more than _____ muscles in our body.
2. Egg is an example of _____ food.
3. Food gives us _____ to work and play.
4. People build houses with _____ roofs in places with heavy snowfall.
5. All the bones in the body together form the _____.
6. Electric plugs and switches can give us an electric _____.

II. Name the following: (1x 8 = 8)

1. It is the place where bones join together. _____
2. The food we eat at a particular time of the day. _____
3. It tells us when we have to stop and when we can go. _____
4. Dome-shaped houses built with snow and ice. _____
5. It is the position of our body when we stand, sit or walk. _____
6. It protects our heart and lungs. _____
7. These houses are found in Kashmir and Kerala. _____
8. A material used to make kutcha houses. _____

III. Circle the odd one out : (0.5 x 6 = 3)

- | | | | | |
|----|----------|---------|------------|----------|
| 1. | sugar | oil | fish | bread |
| 2. | skin | ears | heart | eyes |
| 3. | burger | spices | pizza | chips |
| 4. | knife | book | matchstick | scissors |
| 5. | gumboots | shorts | raincoat | umbrella |
| 6. | cycling | running | sleeping | swimming |

IV. Uncsramble the letters to find the correct words:

(1 x 3 = 3)

1. NUOTGE - _____
2. OTPAOFHT - _____
3. STBEARKAF - _____

V. Match the following:

(0.5 x 8 = 4)

1. junk food	a. caravan	<input type="text"/>
2. cycling	b. tents	<input type="text"/>
3. house on wheels	c. heavy rainfall	<input type="text"/>
4. energy-giving food	d. movement	<input type="text"/>
5. stranger	e. exercise	<input type="text"/>
6. cloth and poles	f. soft drinks	<input type="text"/>
7. muscles	g. unknown person	<input type="text"/>
8. stilt houses	h. sugar	<input type="text"/>

VI. Define the following terms and give TWO examples in each case:

(2 x 3 = 6)

1. Protective foods - _____

2. Sense organs - _____

3. Temporary houses - _____

VII. Give reasons:

(2 x 2 = 4)

1. We wear cotton and light - coloured clothes in the summer season.

2. Babies are given only milk as food.

VIII. Observe the picture given below and answer the questions that follow: (1+2+1=4)



1. What type of house is it?

2. Name two materials used to build this type of house.

3. Where are such houses found?

IX. State whether the following statements are true or false: (0.5 x 4 = 2)

- 1. The bones in our body cannot move alone. _____
- 2. Eating too much or too less can make us healthy. _____
- 3. We should be careful with strangers. _____
- 4. We should keep our back bent while standing. _____

X. Answer the following questions: (2 x 5 = 10)

1. Why is it important to maintain a good posture?

2. List two safety rules that we should follow on the road.

3. Why do we wear clothes?

4. How does water help us?

5. Why should we avoid eating junk food?

XI. Draw, colour and label the following :

(2.5x4=10)

1) a kutcha house	2) a food item that we get from animals
3) an energy giving food	4) an item used in the rainy season



DELHI PUBLIC SCHOOL

SAIL Township, Ranchi

FIRST SEMESTER EXAMINATION (SESSION-2024-25)

SUBJECT: Hindi

DATE :- .09.2024

CLASS: – II Sec:- _____

Time: 2 Hours

M.O. :- _____

Roll no.:- _____

F. M. :- 60

NAME:- _____

1. दिए गए प्रश्नों के उत्तर लिखें – [2 x 4 = 8]

1) सब्जियाँ हमें किससे दूर रखती हैं ?

उत्तर –

.....

.....

2) वल्लभ के पैर में चोट कैसे लगी ?

उत्तर –

.....

.....

3) बुढ़िया ने थककर क्या किया ?

उत्तर –

.....

.....

4) वसंत ऋतु के आने पर क्या-क्या होता है ?

उत्तर –

.....

.....

2. दिए गए शब्दों से वाक्य बनाएँ – [1 x 5 = 5]

1) मटका –

.....

2) पर्यावरण –

.....

- 3) पकौड़ी –.....

 4) गुणकारी –.....

 5) प्रथम –.....

3. मंजूषा में दिए गए शब्दों से स्त्रीलिंग व पुल्लिंग चुनकर लिखें – [0.5 x 8 = 4]

दादी	चाची	हथिनी	राजा	बकरा	शेर	सेठ	चुहिया
------	------	-------	------	------	-----	-----	--------

पुल्लिंग		स्त्रीलिंग
1)	,
2)	,
3)	,
4)	,

4. सोचो और लिखो –
- 1) हमारे देश के प्रथम गृहमंत्री का नाम लिखें। [1]
 –.....
- 2) नाम वाले शब्दों की जगह पर प्रयोग किए जाने वाले शब्द को क्या कहते हैं? एक उदाहरण दें। [1]
 –.....
- 3) पॉलिथीन की जगह पर कागज़ या कपड़े के थैले का प्रयोग करना क्यों उचित समझा जाता है ? [2]
 –.....

5. रिक्त स्थान भरिये –

[1 x 5 = 5]

- 1) किसी व्यंजन अक्षर के नीचे लगाए जाने वाले बिंदु को कहते हैं।
- 2) जब दो समान व्यंजनों को मिलाकर बोला और लिखा जाता है, तब उसे
..... कहते हैं।
- 3) यहाँ इठलाती है।
- 4) नन्हीं पिकी जाने के लिए तैयार हो रही थी।
- 5) हमें बीमारियों से दूर रखती हैं।

6. किसने, किससे कहा : –

[1 x 4 = 4]

- 1) "बेटा, मुझे तुम पर गर्व है।"
- किसने , किससे कहा
- 2) "इस तरह तो मेरे, कपड़े, जूते गंदे हो जाएँगे।"
- किसने , किससे कहा

7. दिए गए विषयों में से चुनकर किसी एक विषय पर अनुच्छेद लिखें –

[1 x 5 = 5]

- 1) मेरा देश
- 2) मेरा प्रिय खेल
- 3) अनुशासन

.....

.....

.....

.....

.....

.....

.....

.....

.....

.....

.....

.....

.....

.....

.....

8. दिए गए अपठित गद्यांश को पढ़कर नीचे दिए गए प्रश्नों के उत्तर दें – [1 x 5 = 5]

हमारे सुंदर एवं हरियाली से भरे शहर का नाम राँची है। यहाँ पर बहुत से झरने एवं मन को सुंदर लगने वाली जगहें हैं। राँची शहर हमारे राज्य की राजधानी है। हमारे शहर में रथ-यात्रा, टूसू, सरहुल, करमा, छठ पूजा एवं क्रिसमस आदि त्योहार बहुत उत्साह से मनाये जाते हैं। राँची सर्दी के मौसम में अत्यंत सुहावनी लगती है।

1) हमारे राज्य का क्या नाम है ?

उत्तर –.....

.....

2) राँची किस मौसम में अत्यंत सुहावनी लगती है ?

उत्तर –.....

.....

3) दिए गए वाक्य को पूरा करें :—

यहाँ पर बहुत से झरने

4) गद्यांश से ढूँढ़कर 'गरमी' का विलोम शब्द लिखिए ।

उत्तर —.....

5) दिए गए गद्यांश में कितने त्योहारों के बारे में बात की गई है ?

उत्तर —

.....

9. दिए गए वाक्यों में सही वर्तनी चुनकर लगाएँ : —

[1 x 4 = 4]

- 1) अपनी में इसके लिए लोगों को जागरूक करेंगे।
(कॉलोनी / कालनी / कलोनी)
- 2) दिया बिल्ली को ही घर। (सौप / सौँप / सोप)
- 3) गाते हैं गाना। (भौरे / भोरे / भौरें)
- 4) मुझे तो खाना बिल्कुल पसंद नहीं।
(सब्जिया / सब्ज़ियाँ / सब्जीयाँ)

10. खाली स्थान भरें : —

[1 x 3 = 3]

अ:	ज्ञ,	त्र
----	------	-----

- 1)से कोई शब्द शुरू नहीं होता ।
- 2) क्ष, , त्र और श्र संयुक्त व्यंजन है।
- 3) वह प..... लिख रहा है।

11. दिए गए शब्दों को एक से अनेक में बदलिये : —

[1 x 4 = 4]

1) मछली —.....

2) खिलौना —.....

3) तारा —.....

4) तितली —.....

12. दिए गए वर्णों को जोड़कर शब्द बनाइये —

[1 x 3 = 3]

1) म् + इ + ट् + ट् + ई —.....

2) फ् + ऊ + ल् + अ —.....

3) ख् + अ + र् + अ + ग् + ओ + श् + अ —.....

13. दिए गए संयुक्त व्यंजनों से बनने वाले दो-दो शब्द लिखिये : —

[0.5 x 6 = 3]

1) त्त —..... ,

2) ट्ट —..... ,

3) ल्ल —..... ,

14. दिए गए रिक्त स्थान भरिये : —

[1 x 3 = 3]

1) वर्णों के मेल से बनते हैं।

2) शब्दों के सही मेल से बनते हैं।

3) वाक्य के अंत में का चिह्न लगाते हैं।



DELHI PUBLIC SCHOOL

SAIL Township, Ranchi

FIRST SEMESTER EXAMINATION (SESSION-2024-25)

SUBJECT: Maths

DATE :- 12.09.2024

CLASS: – II Sec:- _____

Time: 2 Hours

M.O. :- _____

Roll no.:- _____

F. M. :- 60

NAME:- _____

1. Write the number names of the following numerals: [1x 6 = 6]

a) 469 - _____

b) 520 - _____

c) 515 - _____

d) 471 - _____

e) 699 - _____

f) 608 - _____

2. Solve the following: [1x8 = 8]

$$\begin{array}{r} \text{H T O} \\ \text{a) } 6 \ 0 \ 3 \\ + 1 \ 5 \ 4 \\ \hline \\ \hline \end{array}$$

$$\begin{array}{r} \text{T O} \\ \text{b) } 3 \ 7 \\ + 3 \ 6 \\ + 1 \ 2 \\ \hline \\ \hline \end{array}$$

$$\begin{array}{r} \text{H T O} \\ \text{c) } 3 \ 4 \ 6 \\ + 7 \ 4 \\ \hline \\ \hline \end{array}$$

$$\begin{array}{r} \text{H T O} \\ \text{d) } 2 \ 7 \ 0 \\ + 5 \ 4 \ 2 \\ \hline \\ \hline \end{array}$$

$$\begin{array}{r} \text{H T O} \\ \text{e) } 6 \ 7 \ 3 \\ - 2 \ 3 \ 8 \\ \hline \\ \hline \end{array}$$

$$\begin{array}{r} \text{H T O} \\ \text{f) } 4 \ 0 \ 0 \\ - 9 \ 5 \\ \hline \\ \hline \end{array}$$

$$\begin{array}{r} \text{H T O} \\ \text{g) } 5 \ 0 \ 8 \\ - 2 \ 9 \ 2 \\ \hline \\ \hline \end{array}$$

$$\begin{array}{r} \text{H T O} \\ \text{h) } 7 \ 1 \ 3 \\ - 4 \ 5 \\ \hline \\ \hline \end{array}$$

3. Do as directed :

[1x 5 = 5]

- a) 6 hundreds 6 ones + 2 hundreds 3 ones = _____
- b) 12 less than 515 is _____
- c) Which is greater : 403 – 257 or 430 – 213 ? = _____
- d) I am a number between 5 x 8 and 6 x 7. Who am I? _____
- e) I am the eighth number in the sequence of table 8. Who am I? _____

4. Fill in the placeholders :

[0.5x 8= 4]

- a) $8 \times 5 =$ _____
- e) $10 \times 10 =$ _____
- b) $4 \times$ _____ $= 32$
- f) $3 \times 9 =$ _____
- c) $5 \times 0 =$ _____
- g) $6 \times$ _____ $= 48$
- d) $9 \times$ _____ $= 45$
- h) $7 \times 9 =$ _____

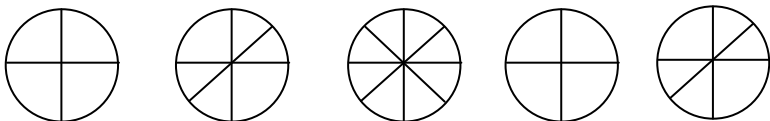
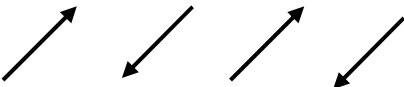
5. Write the multiplication fact for the following :

[1x 2 = 2]

- a) $8 + 8 + 8 + 8 + 8 + 8 + 8 + 8 + 8 + 8 =$ _____ $=$
- b) $5 + 5 + 5 + 5 =$ _____ $=$

6. Draw the next two patterns:

[1x 2 = 2]

- a)  _____
- b)  _____

7. Multiply the following:

[1x 6 = 6]

a) 4 6
x 7

b) 9 0 7
x 3

c) 8 5
x 6

d) 1 4 8
x 5

e) 3 4 2
x 4

e) 9 0
x 8

8. Fill in the blanks:

[1x4 =4]

- a) The result of multiplication is called _____.
- b) The number from which the smaller number is subtracted is called _____.
- c) _____ are formed by repeating a certain object or set of objects over and over again.
- d) Any number multiplied by _____ gives the same number.

9. Write numerals for the given number names:

[1x 3 = 3]

- a) Five hundred and sixty two - _____
- b) Six hundred and nine - _____
- c) Four hundred ninety nine - _____

10. Think and solve:

[4]

1. Raj and Seema were playing cards. Each \square is equal to 10 points and each \triangle is equal to 1 point.

Raj got $\square \square \square \square \triangle \triangle \triangle \triangle$

Seema got $\square \square \triangle \triangle$

Therefore, _____ is the winner.

2. 6 pair of shoes = _____ shoes.

3. A milkman sells 30 litres of milk in the morning and 20 litres of milk in the evening. How many litres of milk does he sell in a week?

Ans.

11. Match the following:

[1x 6 = 6]

a) $200 + 10 + 5$	(i) 2 tens	<input type="text"/>
b) 5 tens – 3 tens	(ii) multiplication fact	<input type="text"/>
c) $___ \times 7 = 7 \times 2$	(iii) 215	<input type="text"/>
d) 0, 3, 6, 9, $___$	(iv) $500 + 30 + 0$	<input type="text"/>
e) $450 + 80$	(v) 2	<input type="text"/>
f) $4 \times 2 = 8$	(vi) 12	<input type="text"/>

12. Solve with statement:

[2.5x4 = 10]

a) Riya reads 198 pages of a book on Sunday in 60 minutes and 296 pages on Monday. How many pages did she read in all?

Ans.

- b) Roma had ₹ 600 in her purse. She gave ₹499 to her friend. How much money is she left with?

Ans.

- c) Your class is having a pizza party. You buy 15 pizzas. Each pizza has 4 slices. How many slices are there altogether?

Ans.

d) A packet has 128 pencils. How many pencils will be there in 5 such packets?

Ans.

Space for Rough Work



DELHI PUBLIC SCHOOL

SAIL Township, Ranchi

FIRST SEMESTER EXAMINATION (SESSION-2024-25)

SUBJECT: General Knowledge

DATE :- 02.09.2024

CLASS: – II Sec:- _____

Time: 1 Hour

M.O. :- _____

Roll no.:- _____

F. M. :- 25

NAME:- _____

I. Give one word answer for the following questions:

(1 x 6 = 6)

1. Who is called the 'Iron Man of India' ?

2. Write the name of our national song and also mention its writer.

3. Which city receives the highest rainfall in India? _____

4. Which country recently landed a spacecraft on the moon? _____

5. Who is the first Indian to win a medal in the Olympics 2024? Write the name of the sport and mention the medal too.

6. What is the name of the mascot of the Paris Olympics 2024?

II. Name them :

(1 x 6 = 6)

1. The longest highway in India that connects Varanasi to Kanyakumari :

2. The largest ocean in the world :

3. The planet with the largest ring around it :

4. The place for testing blood sample:

5. The holy book of the Buddhists:

6. The first Indian to win an individual gold medal at the Olympic games :

III. Fill in the blanks with the help of the clues given in the help box : (1x 4 = 4)

<i>Dr. Verghese Kurien,</i>	<i>Arunachal Pradesh,</i>	<i>Bengaluru,</i>	<i>Mr. Santosh Gangwar</i>
-----------------------------	---------------------------	-------------------	----------------------------

- 1. _____ is known as the ‘ Land of rising sun’.
- 2. _____ is the current governor of Jharkhand.
- 3. _____ is known as the ‘Milk Man of India’.
- 4. _____ is known as the ‘Garden City’ of India.


IV. Complete the following sentences with correct answers: (1 x 4 = 4)

- 1. _____ and the Gateway of India can be seen in Mumbai.
- 2. _____ is the blinking line that lets you know where you are on the screen.
- 3. _____ describes the battle story between the Kauravas and the Pandavas.
- 4. A _____ treats sick animals.

V. Write ‘T’ for true and ‘F’ for false : (0.5 x 6 = 3)

- 1. Gurugranth Sahib is the holy book of the Hindus. _____
- 2. Charles Babbage is called the ‘Father of the Nation’. _____
- 3. Silverfish can damage wooden furniture. _____
- 4. Serena Williams is an American tennis player. _____
- 5. Beijing is the capital of China. _____
- 6. P.V. Sindhu won the silver medal for India at the 2016 Olympics. _____

VI. Identify the images and write their names : (1 x 2 = 2)







DELHI PUBLIC SCHOOL

SAIL Township, Ranchi

FIRST SEMESTER EXAMINATION (SESSION-2024-25)

SUBJECT: Computer

DATE :- 04.09.2024

CLASS: – II Sec:- _____

Time: 1 Hour

M.O. :- _____

Roll no.:- _____

F. M. :- 20

NAME:- _____

Q1) Choose the correct option: -

[0.5 x 4 = 2]

a) How many Enter keys are present on the desktop keyboard?

i) 4 ☐

ii) 1 ☐

iii) 3 ☐

iv) 2 ☐

b) Which device helps us to type letters and numbers?

i) Keyboard ☐

ii) Monitor ☐

iii) UPS ☐

iv) Speaker ☐

c) _____ is a humanoid robot that acts like a human being.

i) Softy ☐

ii) Sophia ☐

iii) Nano ☐

iv) Dinky ☐

d) CD and Pen drive are the examples of _____ devices.

i) Processing ☐

ii) Input ☐

iii) Output ☐

iv) Storage ☐

Q2) Answer in one word: -

[1 x 4= 4]

a) I can erase the characters present on the left side of the cursor. _____

b) I can store movies and videos. _____

c) I can help you enjoy music without disturbing others. _____

d) I can help you type letters in uppercase when ON. _____

Q3) Fill in the blanks: -

[0.5 x 4 = 2]

a) _____ is an output device that produces sound in loud volume.

b) Hard disk is fixed inside the _____ cabinet.

c) _____ keys helps to move the cursor up, down, left or right.

d) A computer never gets _____.

Q4) Write any one use of AI based devices in the following areas: -

[1 x 2 = 2]

a) Farming - _____.

b) Hospital - _____.

P.T.O.

Q5) Write the full form of these:-

[1 x 2= 2]

- a) SSD - _____.
- b) DVD -_____.

Q6) Write ‘T’ for True and ‘F’ for False: -

[0.5 x 4 = 2]

- a) AI does not make machine smarter. []
- b) A human being can make mistakes. []
- c) Spacebar key and Backspace key have the same function. []
- d) Few robots act like human beings. []

Q7) Answer the following questions: -

[2 x 2 = 4]

- a) What is a computer?


- b) Write any two differences between a Computer and a Human being.

Computer	Human being

Q8) Colour and label the figures given below :-

[1 x 2 = 2]

a)



b)

