



# DELHI PUBLIC SCHOOL

SAIL Township, Ranchi

SECOND SEMESTER EXAMINATION (SESSION-2022-23)

SUBJECT: ENGLISH

DATE :- 21.02.2023

CLASS: – PREP Sec:- \_\_\_\_\_

Time: 2 Hours

M.O. :- \_\_\_\_\_


Roll no.:- \_\_\_\_\_


F. M. :- 40


NAME:- \_\_\_\_\_


## 1. Name them :


(1x8=8)


1.  - \_\_\_\_\_


2.  - \_\_\_\_\_


3.  - \_\_\_\_\_

4.  - \_\_\_\_\_

5.  - \_\_\_\_\_

6.  - \_\_\_\_\_

7.  - \_\_\_\_\_

8.  - \_\_\_\_\_

## 2. Fill in the missing letters :

(0.5x8=4)

1. B \_\_\_ O T H \_\_\_ R

2. B R E \_\_\_ K F A \_\_\_ T

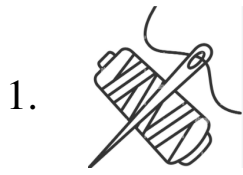
3. O R A \_\_\_ G E

4. D \_\_\_ N N \_\_\_ R

5. S I \_\_\_ T E R

3. Match the following :

(0.5x10=5)



wheat



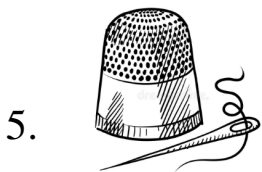
whistle




thread




lock




chick



swing



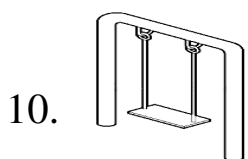
thimble



goose



clock



tick

**4. Write two words each for the given sounds:**

**(1x8=8)**

1. ck - \_\_\_\_\_ , \_\_\_\_\_

2. dge - \_\_\_\_\_ , \_\_\_\_\_

3. wh - \_\_\_\_\_ , \_\_\_\_\_

4. tle - \_\_\_\_\_ , \_\_\_\_\_

**5. Choose and write :**

**(1x3=3)**

1. A \_\_\_\_\_ of chalk (piece/pinch)


2. A \_\_\_\_\_ of grass (grain/blade)

3. A \_\_\_\_\_ of bread (slice/glass)

**6. Picture Composition**

**(1x3 = 3)**

**Choose and write:**



five

classroom

sitting

1. This is a picture of a \_\_\_\_\_.

2. There are \_\_\_\_\_ children in the classroom.

3. The children are \_\_\_\_\_ on the chair.

**7. Name them :**

**(1x2 = 2)**

1. a colour - \_\_\_\_\_

2. an action word - \_\_\_\_\_

**8. Write five lines on the topic 'My School'.**

**(1x5=5)**

1. \_\_\_\_\_

2. \_\_\_\_\_

3. \_\_\_\_\_

4. \_\_\_\_\_

5. \_\_\_\_\_

**9. Riddle Time :**

**(1x2=2)**

1. What is the colour of night? You can only guess it, when you turn off the light.

\_\_\_\_\_

2. I have a long neck and long legs. I eat leaves of trees. I am yellow and brown in colour . I am a \_\_\_\_\_.



# DELHI PUBLIC SCHOOL

SAIL Township, Ranchi

SECOND SEMESTER EXAMINATION (SESSION-2022-23)

**SUBJECT:** EVS

**DATE :-** 25.02.2023

**CLASS:** – PREP **Sec:-** \_\_\_\_\_

**Time:** 2 Hours

**M.O. :-** \_\_\_\_\_

**Roll no.:-** \_\_\_\_\_

**F. M. :-** 40

**NAME:-** \_\_\_\_\_

**1. Name them :** (1x6=6)

1. a body part - \_\_\_\_\_

2. a junk food - \_\_\_\_\_

3. a sense organ - \_\_\_\_\_

4. an animal product - \_\_\_\_\_

5. a house on wheels - \_\_\_\_\_

6. a baby cat - \_\_\_\_\_

**2. Unscramble :** (1x5=5)

1. GERBUR - \_\_\_\_\_

2. ALOWBUNG - \_\_\_\_\_

3. NCHLU - \_\_\_\_\_

4. PATHFOOT - \_\_\_\_\_

5. TUREVUL - \_\_\_\_\_

**3. Fill in the missing letters :** (0.5x10=5)

1. C \_\_\_ I C K \_\_\_ N

2. F L E \_\_\_ H

3. P I G E \_\_\_ N

4. H O \_\_\_ E Y

5. P \_\_\_ L S E S

6. E A \_\_\_ L E

7. M U \_\_\_ F L E R

8. M O U \_\_\_ H

9. C L E \_\_\_ N

**4. Choose and write:**

**(1x4=4)**

1. A \_\_\_\_\_ eats plants. (cow/ tiger)

2. Moving air is called \_\_\_\_\_. (wind/water)

3. We have \_\_\_\_\_ sense organs. (two/five)

4. We sleep in the \_\_\_\_\_. (bathroom/bedroom)

**5. Write 'T' for true or ' F' for false:**

**(1x4=4)**

1. We should wear dirty clothes. \_\_\_\_\_


2. We should play with sharp objects. \_\_\_\_\_


3. We wear woollen clothes in winter. \_\_\_\_\_


4. Food gives us energy. \_\_\_\_\_


**6. Name them:**

**(1x4=4)**

1.  - \_\_\_\_\_

2.  - \_\_\_\_\_

3.  - \_\_\_\_\_


4.  - \_\_\_\_\_

7. Match the following :


(0.5x12 =6)



gloves



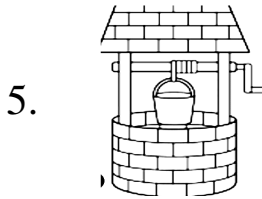
lion



raincoat



bathing




wool



well



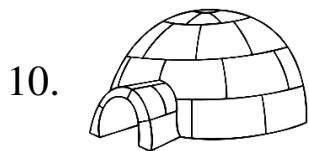
noodles



tongue



traffic light



eyes



igloo



fish

**8. Riddle Time :**

**(1x2=2)**

1. I am a sense organ and my name rhymes with the word rose. Who am I ?

\_\_\_\_\_


2. I have a bushy tail. My home is a hole in a tree and I love to eat nuts.

I am a \_\_\_\_\_ .


**9. Draw, name and colour:**

**(2x2=4)**

1. a healthy food



2. a type of house







# DELHI PUBLIC SCHOOL

SAIL Township, Ranchi

SECOND SEMESTER EXAMINATION (SESSION-2022-23)

SUBJECT: Hindi

DATE:- 23.02.2023

CLASS: – PREP Sec:- \_\_\_\_\_

Time: 2 Hours

M.O. :- \_\_\_\_\_

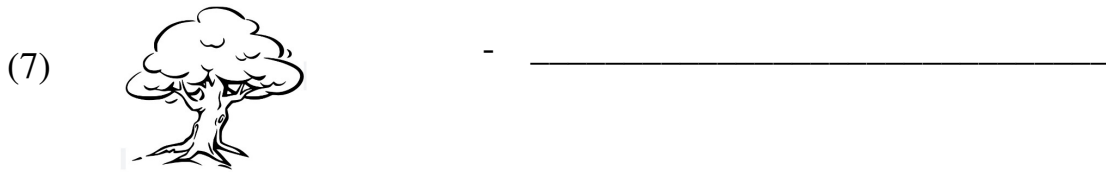
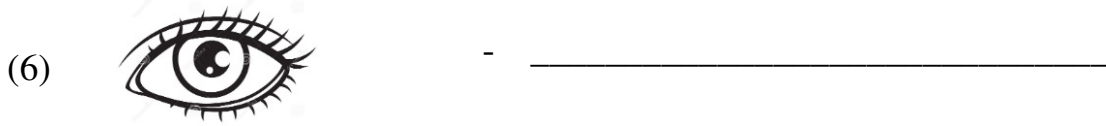
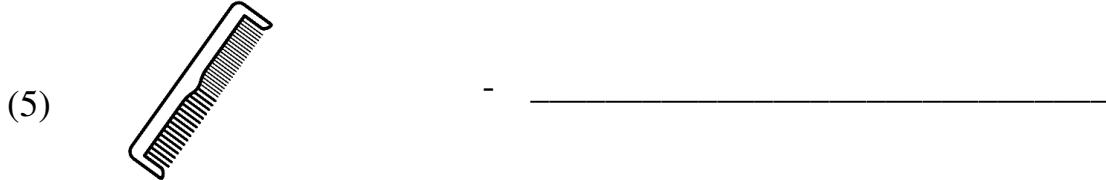
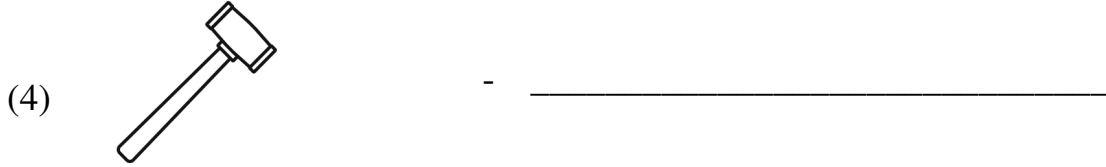
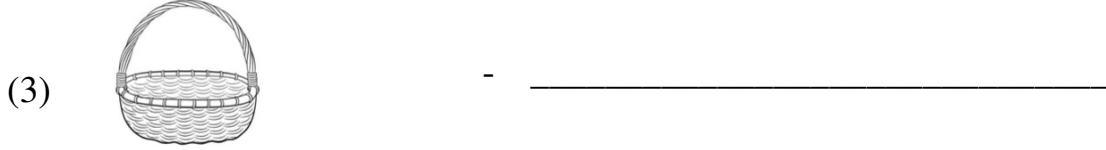
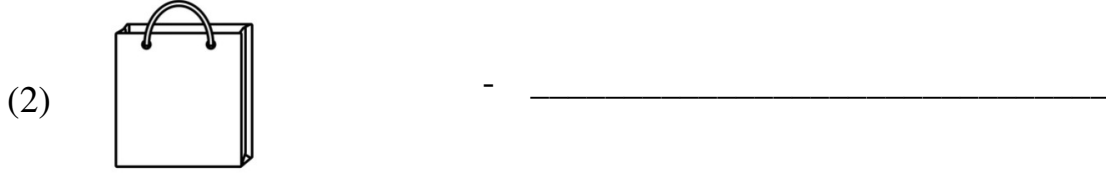
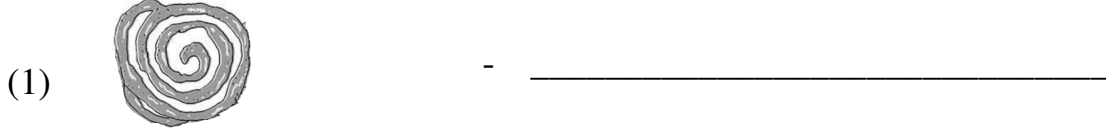
Roll no.:- \_\_\_\_\_

F. M. :- 40

NAME:- \_\_\_\_\_

## 1. चित्र देखकर नाम लिखो :

[1x7=7]



## 2. एक जैसे शब्द लिखो :

[0.5x6=3]

(1) चौका - \_\_\_\_\_

(2) बेर - \_\_\_\_\_

(3) चोर - \_\_\_\_\_

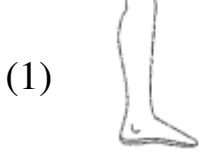
(4) पैर - \_\_\_\_\_

(5) झंडा - \_\_\_\_\_

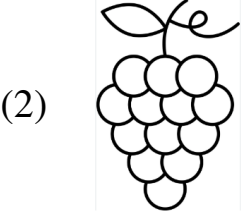
(6) केला - \_\_\_\_\_

3. सही मेल करो :

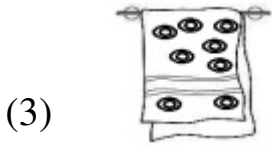
[1x6=6]



अंगूर



पैर




मोर



तौलिया



घोड़ा



ठेला

4. समूह से अलग शब्द पर गोला लगाओ :

[0.5x4=2]

(1) बेर      भेड़      सेब      बैल

(2) गोल      पौधा      शोर      ढोलक

(3) साँप      शंख      हंस      पंख

(4) कोयल      डकैत      खपरैल      बैठ

5. वर्णों को सही क्रम में लगाकर शब्द बनाओ :

[1x3=3]


(1) रे क ला - \_\_\_\_\_

(2) ना लौ खि - \_\_\_\_\_

(3) रो ट अ ख - \_\_\_\_\_

6. चित्र देखकर खाली स्थान भरो :

[1x2=2]

(1) यह  ..... बहुत सुन्दर है।

(2) चिड़िया  ..... बनाती है।

7. सही मात्रा चुनकर शब्द पूरा करो :

[0.5x4=2]

(1) ख र ग \_ श (ी / ई)

(2) लू गूर (ू / ऊ)

(3) प क \_ डी (े / ई)

(4) रू ल गा डी (े / ई)

8. दिए गए मात्राओं से दो - दो शब्द लिखो :

[1x4=4]

1) ऐ (ई) - \_\_\_\_\_ , \_\_\_\_\_

2) आँ (ऊ) - \_\_\_\_\_ , \_\_\_\_\_

9. ओ (ी) की मात्रा से दो पक्षियों के नाम लिखो :

[1x2=2]

(1) \_\_\_\_\_ (2) \_\_\_\_\_

10. अं ( ँ ) की मात्रा से दो पशुओं के नाम लिखो :

[1x2=2]

(1) \_\_\_\_\_ (2) \_\_\_\_\_

11. दिए गए विषय पर पाँच शब्द लिखो :

[1x5=5]

‘कमल’


(1) \_\_\_\_\_

(2) \_\_\_\_\_

(3) \_\_\_\_\_


(4) \_\_\_\_\_

(5) \_\_\_\_\_



12. किन्हीं दो चित्रों को पहचानकर उनके नाम लिखो :

[1x2=2]



1. \_\_\_\_\_

2. \_\_\_\_\_



# DELHI PUBLIC SCHOOL

SAIL Township, Ranchi

SECOND SEMESTER EXAMINATION (SESSION-2022-23)

**SUBJECT:** Mathematics

**DATE :-** 28.02.2023

**CLASS:** – PREP **Sec:-** \_\_\_\_\_

**Time:** 2 Hours

**M.O. :-** \_\_\_\_\_

**Roll no.:-** \_\_\_\_\_

**F. M. :-** 40

**NAME:-** \_\_\_\_\_

## 1. Write number names of the following:

[1 x 8 = 8]

a. 67 - \_\_\_\_\_

b. 45 - \_\_\_\_\_

c. 100 - \_\_\_\_\_

d. 78 - \_\_\_\_\_

e. 0 - \_\_\_\_\_

f. 83 - \_\_\_\_\_

g. 32 - \_\_\_\_\_

h. 19 - \_\_\_\_\_

## 2. What comes after?

[0.5 x 6 = 3]

a. 29 \_\_\_\_\_

b. 80 \_\_\_\_\_

c. 66 \_\_\_\_\_

d. 37 \_\_\_\_\_

e. 99 \_\_\_\_\_

f. 54 \_\_\_\_\_

## 3. Fill in the missing letters:

[0.5 x 10 = 5]

a. M \_\_ N DAY

b. JA \_\_ UAR \_\_

c. T \_\_ES \_\_AY

d. FE \_\_RU\_\_RY

e. TH \_\_RSDAY

f. DE \_\_EM \_\_ER

**4. What comes in between?**

[0.5 x 4 = 2]

a. 19 \_\_\_\_ 21

b. 62 \_\_\_\_ 64

c. 55 \_\_\_\_ 57

d. 94 \_\_\_\_ 96

**5. Match the following:**

[0.5 x 6 = 3]

a.	<b>6 + 2</b>	<b>2</b>
b.	<b>9 - 4</b>	<b>8</b>
c.	<b>2 + 0</b>	<b>5</b>
d.	<b>8 - 5</b>	<b>4</b>
e.	<b>4 + 2</b>	<b>3</b>
f.	<b>7 - 3</b>	<b>6</b>

**6. Solve:**

[0.5 x 6 = 3]

a) 
$$\begin{array}{r} 18 \\ - 5 \\ \hline \end{array}$$

b) 
$$\begin{array}{r} 15 \\ + 3 \\ \hline \end{array}$$

c) 
$$\begin{array}{r} 16 \\ - 6 \\ \hline \end{array}$$

e) 
$$\begin{array}{r} 11 \\ + 4 \\ \hline \end{array}$$

f) 
$$\begin{array}{r} 14 \\ - 2 \\ \hline \end{array}$$

g) 
$$\begin{array}{r} 12 \\ + 1 \\ \hline \end{array}$$

**7. What comes before?**

[0.5 x 6 = 3]

a. \_\_\_\_ 70

b. \_\_\_\_ 44

c. \_\_\_\_ 17

d. \_\_\_\_ 31

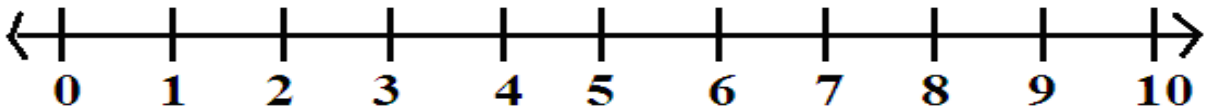
e. \_\_\_\_ 68

f. \_\_\_\_ 95

**8. Subtract using number line:**

[2x1 = 2]

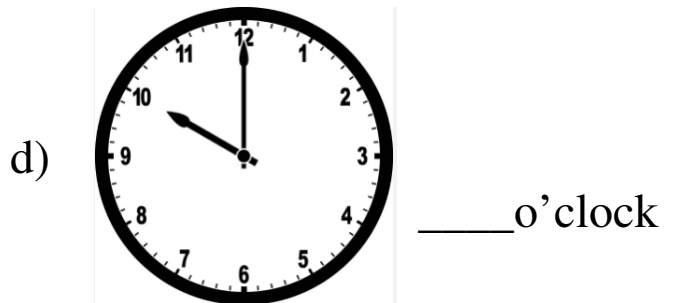
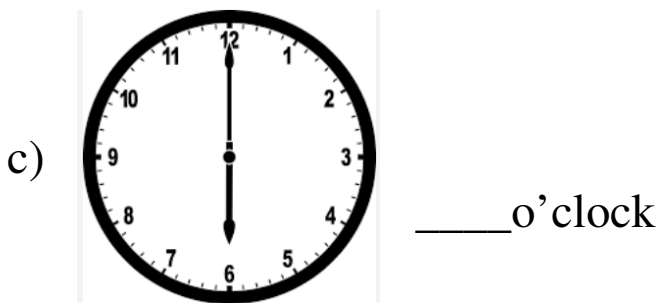

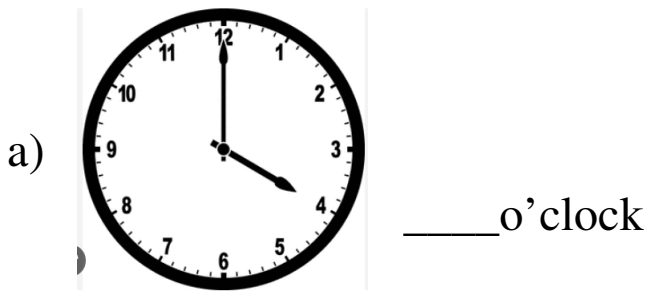
a) Show  $5 - 2$



Ans.:-  $5 - 2 =$

**9. Write the time shown:**

[0.5 x 4 = 2]



**10. Fill in the blanks:**

[0.5 x 6 = 3]

a. There are \_\_\_\_ days in a week.

b. 5 tens and 7 ones = \_\_\_\_

c. 0 less than 3 = \_\_\_\_\_

d. There are \_\_\_\_\_ months in a year.

e. 2 more than 6 = \_\_\_\_\_

f. \_\_\_\_\_ comes before Saturday .

**11. Solve :**

[1x 2 = 2]

1. There were 7 birds on a tree.

3 birds flew away.

There are \_\_\_\_\_ birds left on the tree.

2. There are 2 apples in a basket.

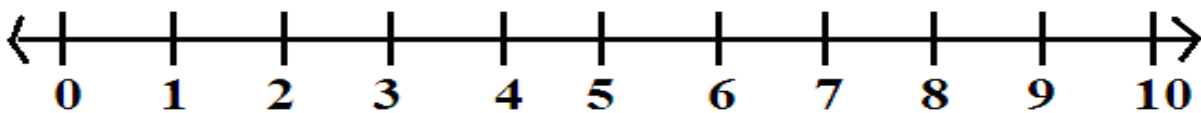
Ravi puts 5 more apples in it.

Now there are \_\_\_\_\_ apples in all.

**12. Add using number line :**

[2x1 = 2]


a) Show  $4 + 3$



Ans.:-  $4 + 3 =$

**13. Look at the picture and answer the following :**

[1x2 = 2]



**If the elephant is at the first position, then :**

a) What is the position of the lion? \_\_\_\_\_

b) Which animal is at the third position? \_\_\_\_\_





# DELHI PUBLIC SCHOOL

SAIL Township, Ranchi

**SECOND SEMESTER ( SESSION-2022-23)**

**SUBJECT:** General Knowledge

**DATE :-** 17.02.2023

**CLASS:** – PREP **Sec:-** \_\_\_\_\_

**M.O. :-** \_\_\_\_\_

**Roll no.:-** \_\_\_\_\_

**F. M. :- 10**

**NAME:-** \_\_\_\_\_

**1. Name them:** (1x8=8)

1. The first president of India.
2. The largest flower in the world.
3. The state animal of Jharkhand.
4. A national festival of India.
5. Hardest substance on the earth.
6. A female badminton player from India.
7. The largest sense organ in our body.
8. The capital of India.

**2. When do we celebrate:** (1x2=2)

1. Republic Day
2. Christmas



# DELHI PUBLIC SCHOOL

SAIL Township, Ranchi

SECOND SEMESTER (SESSION-2022-23)

SUBJECT: General Knowledge

DATE :- 17.02.2023

CLASS: – PREP Sec:- \_\_\_\_\_

M.O. :- \_\_\_\_\_

Roll no.:- \_\_\_\_\_


F. M. :- 15

NAME:- \_\_\_\_\_

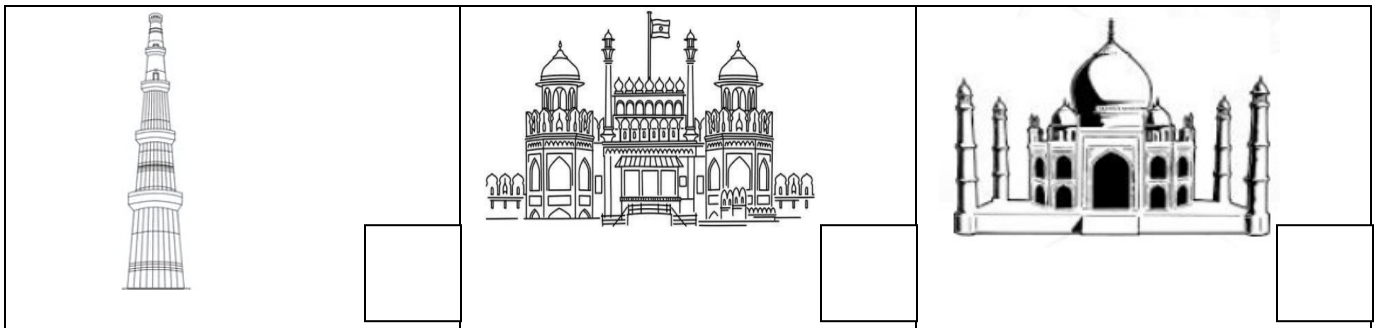
1. Tick (✓) the correct picture:

[ 2 x 5 = 10 ]

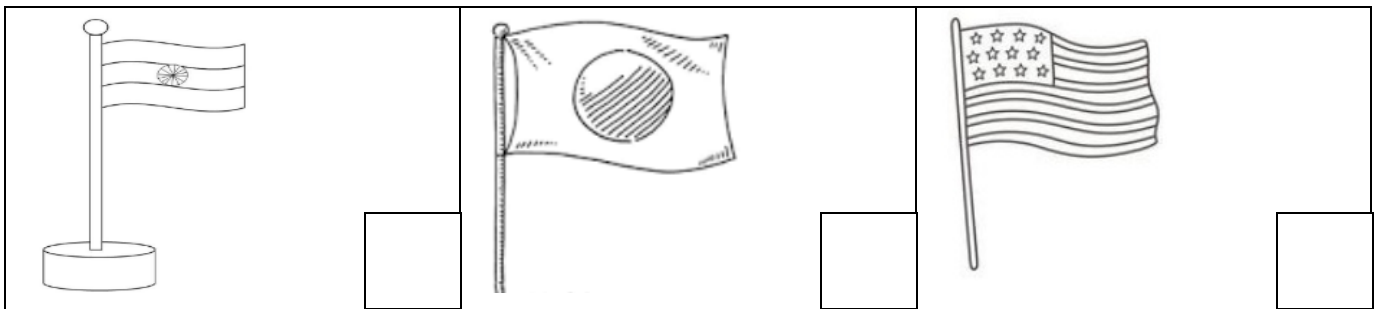
1. THE FATHER OF OUR NATION:




2. TAJ MAHAL:




3. OUR NATIONAL FLAG:



4. MOTHER TERESA:








5. THE PRIME MINISTER OF INDIA:



P.T.O.

2. Match the following:

[ 1 x 5 = 5 ]

1.		<b>HOLI</b>
2.		<b>EID</b>
3.		<b>DIWALI</b>
4.		<b>CHRISTMAS</b>
5.		<b>DUSSEHRA</b>