



DELHI PUBLIC SCHOOL

SAIL Township, Ranchi

SECOND SEMESTER EXAMINATION (SESSION-2022-23)

CLASS: – III

DATE :- 01.03.2023

SUBJECT:- Hindi

Time: 2½ Hours

M.M. :- 80

व्याकरण (खण्ड - क)

1. गद्यांश पढ़कर प्रश्नों के उत्तर दीजिए:-

(5)

पेड़ - पौधे बहुत उपयोगी होते हैं। हम जो साँस लेते हैं, वह भी इन्हीं की देन है। ये कार्बन डाई - ऑक्साइड लेकर बदले में हमें प्राणवायु ऑक्सीजन देते हैं। ये न हों तो धरती पर जीवन नहीं रहेगा। ये ही हमें लकड़ी , फल , फूल , औषधि, छाया आदि देते हैं। पेड़ - पौधों से हमारी धरती हरी - भरी रहती है। ये ही बादलों को अपनी ओर खींचकर बारिश करवाते हैं , जिससे खेतों में हरी - भरी फसलें लहलहाती हैं। इन्हीं पेड़-पौधों के कारण धरती पर चारों ओर हरियाली छाई रहती है, जो प्रकृति की सुन्दरता को बढ़ाता है।

प्रश्न :-

निम्नलिखित प्रश्नों के उत्तर दीजिए -

- (क) हम जो साँस लेते हैं, वह किसकी देन है?
(ख) पेड़ - पौधे कार्बन - डाई - ऑक्साइड लेकर बदले में क्या देते हैं?
(ग) पेड़ - पौधे हमें क्या- क्या देते हैं?
(घ) पेड़ - पौधे बारिश कैसे करवाते हैं?
(ङ) विलोम लिखें – (क) धरती (ख) जीवन

खण्ड - ख

2. निर्देश के अनुसार कार्य करें:-

(3×5=15)

i) वचन बदलें :-

- (क) कुरसी (ख) नदी (ग) लड़का

ii) विराम चिह्न लगाएँ :-

- (क) राजीव तुम कहाँ रहते हो
(ख) शाबाश जीते रहो
(ग) नीतू रोहन रानी और राजू ने प्रतियोगिता जीती।

iii) अनेक शब्दों के लिए एक शब्द लिखें :---

- (क) मीठा बोलने वाला
(ख) जो जल में रहता है
(ग) सप्ताह में एक बार होने वाला

iv) अशुद्ध शब्दों को शुद्ध करें: -

- (क) राष्ट्र (ख) अनेकों (ग) पड़ाई

v) मुहावरों के अर्थ लिखें :-

- (क) आसमान सिर पर उठाना
(ख) अँगूठा दिखाना
(ग) खरी - खोटी सुनाना

3. रिक्त स्थानों की पूर्ति करें :-

(1× 10 = 10)

- (क) 'यह' का बहुवचन _____ होता है।
(ख) संज्ञा के स्थान पर प्रयोग होने वाले शब्द को _____ कहते हैं।
(ग) _____ पढ़ रहे हैं। (सर्वनाम भरें)
(घ) जिन शब्दों की विशेषता बताई जाती है, उन्हें _____ कहते हैं।
(ङ) मैं _____ आम खा रहा हूँ। (विशेषण भरें)
(च) मेरे पास _____ कलम है। (विशेषण भरें)
(छ) कार्य का करना ही _____ कहलाता है।
(ज) फूल का खिलना _____ होने वाली क्रिया है।
(झ) वाक्य के पूर्ण होने पर _____ चिह्न का प्रयोग किया जाता है।
(ञ) वचन के _____ भेद हैं।

4. एक शब्द में प्रश्नों के उत्तर लिखें:-

(1×10=10)

- (क) श्वेत कमल किसका आसन है ?
 (ख) सुभाषचंद्र बोस का जन्म कब हुआ था ?
 (ग) रामदास कौन था ?
 (घ) धूप किसकी लहरों पर नाची ?
 (ङ) हेडमास्टर जी किस प्रकार के इन्सान थे ?
 (च) भारत का राष्ट्रीय पुष्प कौन सा है ?
 (छ) चतुर्भुज किसे कहा गया है ?
 (ज) धूप कब मन को भाती है ?
 (झ) सुभाषचंद्र बोस ने किस दल की स्थापना की थी?
 (ञ) किसके बीतने पर उजाला होता है?

5. दिए गए शब्दों के अर्थ लिखें:-

(1×6=6)

- (क) निर्वाह (ख) कल्याण (ग) चेतना (घ) सतरंगी (ङ) आभा (च) प्रण

6. किसने - किससे कहा? लिखें:-

(1×6=6)

- (क) "तुम मुझे खून दो, मैं तुम्हें आजादी दूँगा।"
 (ख) "चोरी करना पाप है।"
 (ग) "आज तो दोनों बच्चे भी भूखे ही सो गए हैं।"
 (घ) "मैं चोरी करने के लिए आया था।"
 (ङ) "यह लो सौ रुपए। इसे मेरी तरफ से उधार समझो।"
 (च) "मेरा धन्यवाद करने की जरूरत नहीं है।"

7. कविता की पंक्तियाँ पूरी करें:-

(1×6=6)

पंछी के _____ पर _____
 फूलों पर _____ धूप,
 _____ के _____ - कोने में
 नई _____ लाई धूप।

8. दीर्घ उत्तरीय प्रश्नों के उत्तर लिखें:-

(2×3=6)

- (क) 'आत्मा की आवाज़' पाठ से आपको क्या शिक्षा मिलती है?
 (ख) धूप किस - किस की सहेली बनी? उसने बरखा के संग क्या किया?
 (ग) नेताजी ने पठान का वेश क्यों बनाया? वे किन देशों में पहुँचे?

9. सही वाक्य पर (✓) का तथा गलत वाक्य पर (×) का निशान लगाएँ:-

(1×4=4)

- (क) धूप होने पर धरती पर नई चेतना आ जाती है।
 (ख) तालाब के जल में कमल भीग जाता है।
 (ग) सुभाष चंद्र बोस ने इंग्लैंड से आई. सी. एस. की परीक्षा पास की।
 (घ) हेडमास्टर बहुत घमंडी थे।

10. मूल्यपरक प्रश्न:-

(2)

पालतू पशुओं से हमें क्या लाभ है? (दो वाक्य में उत्तर लिखिए)

सूचना :-

11. किसी एक विषय पर पत्र लिखें:-

(5)

हिंदी की कॉपी खो जाने से संबंधित सूचना लिखें।
 या

भाषण प्रतियोगिता में भाग लेने हेतु सूचना लिखें।

12. किसी एक विषय पर अनुच्छेद लिखें:-

(5)

- (i) मेरा बगीचा (ii) राष्ट्रीय पुष्प (iii) मेरी प्रिय अध्यापिका



DELHI PUBLIC SCHOOL

SAIL Township, Ranchi

SECOND SEMESTER EXAMINATION (SESSION-2022-23)

CLASS: – III

DATE :- 24.02.2023

SUBJECT:- Social Science

Time: 2½ Hours

M.M. :- 80

1. **Define:** [1 x 8 = 8]
- a) sandstone b) village c) museum d) carving
e) rangoli f) safety g) porcelain h) sea breeze
2. **Answer in detail:** [3 x 8 = 24]
- a) Who founded Jaipur? Why is it known as the pink city?
b) Write the main functions of the Gram Panchayat.
c) Write the names of three waterfalls near Ranchi.
d) Write the names of three industries of Bengaluru.
e) How is Republic Day celebrated in the capital of India?
f) Write three road safety rules.
g) What are pyramids? Which is the largest pyramid in the world?
h) How did Ashoka help his people?
3. **Answer in short:** [2 x 9 = 18]
- a) Which city is situated on the banks of two lakes? Write the names of the lakes.
b) Who elects the members of Gram Panchayat?
c) When and where is the Hornbill festival celebrated?
d) Write the names of two tourist places of Visakhapatnam.
e) How do people celebrate Holi?
f) How do we choose a particular vehicle to travel?
g) Why do we celebrate national festivals?
h) Who were the first to grow tea? Write any two of their other inventions.
i) Why did Ashoka decide never to fight any wars?
4. **Name them:** [1 x 8 = 8]
- a) Raas garba is performed during this festival _____
b) The war cemetery of Nagaland is in _____
c) Thiruvananthapuram is the capital of _____
d) A Gram Panchayat is also called a _____
e) A scene created on a big stage on wheels _____
f) Camels have cushion- like pads on their _____
g) Ashoka followed the teachings of Lord _____
h) Ziggurats were buildings built for gods in _____

P.T.O.

5. **Match the following:** [1 x 6 = 6]
- | | |
|-----------------------------|--------------------|
| a) Rhinoceroses | i) City of Temples |
| b) Bengaluru | ii) Mawlynnong |
| c) Gurupurab | iii) China |
| d) The Great Wall | iv) Langar |
| e) Cleanest village in Asia | v) Assam |
| f) Odisha | vi) Garden City |

6. **State whether the statement is True or False:** [1 x 6 = 6]
- The first printing was done by the Chinese.
 - Bihu is celebrated three times in a year.
 - The Pradhan is the head of the Parliament.
 - Vizag is a port city.
 - The Vidyasagar setu is built on River Ganga.
 - Hawa Mahal is also known as the Palace of Winds.

7. **Fill in the blanks:** [1 x 6 = 6]
- The _____ Fort is built of red sandstone and white marble.
 - The message of Ashoka is carved on rocks and _____.
 - Use an overbridge or a _____ to go to the other side of the road.
 - Navroze is a spring festival celebrated on _____ March.(Date)
 - Chennai was earlier called _____.
 - Houses built of mud and straw are _____ houses.

8. **Unscramble and write the names of Indian cities:** [0.5 x 4 = 2]
- B A D H D Y E R A
 - L T A O K A K
 - H A W U G A T I
 - M O H K I A

9. **Draw and label any two traffic signs.** [2 x 1 = 2]



DELHI PUBLIC SCHOOL

SAIL Township, Ranchi

SECOND SEMESTER EXAMINATION (SESSION-2022-23)

CLASS: – III

DATE :- 06.03.2023

SUBJECT:- Science

Time: 2½ Hours

M.M. :- 80

1. Define : [2 x 4 = 8]

- a) Axis b) Humus c) Constellation d) Season

2. Answer the following questions in brief : [2 x 4 = 8]

- a) What is deforestation?
- b) What does air contain?
- c) Why is the Earth called the 'Blue Planet'?
- d) How does a block of ice change into water?

3. Answer the following questions in detail: [3 x 5 = 15]

- a) Explain any three effects of force.
- b) List three uses of soil.
- c) What are the phases of the moon?
- d) Explain how a shadow is formed.
- e) Identify the pictures and write one feature of each.



4. Give reasons: [2 x2 = 4]

- a) We will find it difficult to walk on a wet surface.
- b) A perfume sprayed on one end of a room makes the whole room smell good.

5. Differentiate between: [2 x2 = 4]

- a) Clayey soil and Sandy soil.
- b) Evaporation and Condensation.

6. Answer in one sentence : [1 x 5 = 5]

- a) What are craters?
- b) What is storm?
- c) What is atmosphere?
- d) What is geology?
- e) What are the 3R's which help to keep the Earth clean?

7. Name them: [1 x 6 = 6]

- a) A force that slows down the movement of an object - _____
- b) A planet having no natural satellite - _____
- c) The shape of the Earth - _____
- d) The soil rich in nutrients - _____
- e) A plant which grows in sandy soil - _____
- f) The country that gets the first sunlight - _____

8. Fill in the blanks: [1 x 6 = 6]

- a) Protection of soil from erosion is called _____.
- b) _____ gas is important for the growth of plants.
- c) Shadow of an object is the shortest at _____.
- d) If there is _____ friction, objects would slide.
- e) _____ changes its form on heating or cooling.
- f) One complete revolution of the Earth makes one _____.

P.T.O.

9. **Complete the series:** [1 x 5 = 5]
- a) largest planet : Jupiter : : _____ : Mars
- b) hot weather : cold drinks : : cold weather : _____
- c) strong wind : gale : : gentle wind: _____
- d) _____ : Sun : : non-luminous : tree
- e) _____ : honking horn : : pleasant sound: chirping of birds

10. **Match the following:** [0.5 x 6 = 3]
- (Copy down Column A and write the correct answer from Column B in front of it.)

Column – A

- a) rocks and metals
- b) flowers bloom
- c) shedding of leaves
- d) astronaut
- e) Ursa Major
- f) ice and gases

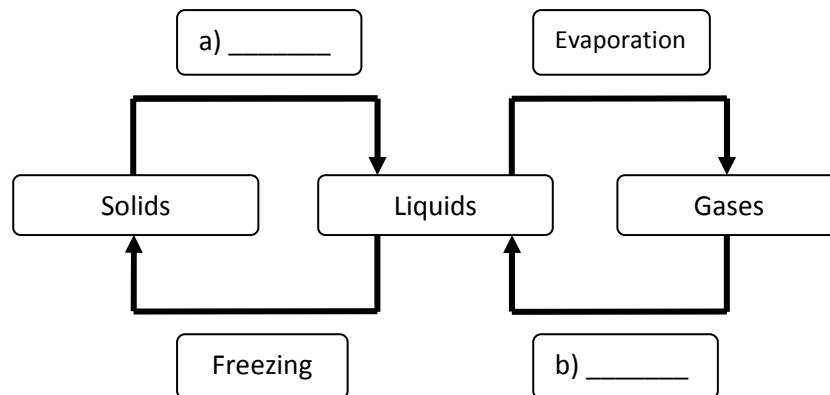
Column – B

- * Great Bear
- * Uranus
- * Venus
- * spring
- * autumn
- * Neil Armstrong

11. **State whether the following statements are True or False:** [0.5 x 6 = 3]
- a) Light helps us to see objects.
- b) Soil is formed by the breaking down of rocks.
- c) Weather is same in all parts of the world.
- d) The rotation of the Earth takes 24 hours.
- e) The planet closest to the Sun is Mars.
- f) Ferdinand Magellan proved that the Earth is flat in shape.

12. **Rewrite the sentences by changing the underlined words:** [1 x 5 = 5]
- a) The moon takes 24 days to go around the Earth once.
- b) Stars can be seen through microscope.
- c) The water present in the soil is called humus.
- d) The Earth rotates from west to south.
- e) The layer just below the top soil is called bedrock.

13. **Complete the flow chart:** [1 x 2 = 2]



- a) _____
- b) _____

14. **Draw and label:** [3 + 2 + 1 = 6]
- a) One example of each: i) solid ii) liquid iii) gas.
- b) Any two artificial sources of light.
- c) Any one constellation.



DELHI PUBLIC SCHOOL

SAIL Township, Ranchi

SECOND SEMESTER EXAMINATION (SESSION: 2022-23)

CLASS: – III

DATE :- 03.03.2023

SUBJECT:- English

Time: 2½ Hours

M.M. :- 80

Section – A (Reading – 10 marks)

1. Read this passage carefully and answer the questions that follow:

[Para-1] – Lotus is our national flower. It also has a special or sacred place in the world religions like Hinduism and Buddhism. It is a ‘Symbol of Purity’ and many a times gods are shown seated on Lotus thrones. Now scientists have discovered that the lotus plant is truly spotless. It does not allow any dirt to remain on its surface.

[Para-2] – Lotus leaves are round and large and it is almost impossible to get them wet. Aquatic leaves secrete or give out wax crystals. These crystals help prevent the leaves from getting flooded with the water around the leaves. They also help the leaves retain the required amount of moisture. The leaves are able to do this because wax repels water.

a) What does lotus symbolize? [Para-1] (1)

b) Complete the sentences:

i) Lotus leaves don't get wet because they secrete or give out _____. [Para-2] (1)

ii) Lotus is our _____ flower. [Para-1] (1)

iii) Lotus has a special place in the world religions like _____ and _____. [Para-1] (2)

2. Read the poem carefully and answer the questions that follow:

How beautiful is the rain!
After the dust and heat,
In the board and fiery street,
In the narrow lane,
How beautiful is the rain!
How it clatters along the roofs,
Like the tramp of hoofs!
How it struggles and gushes out
From the throat of the overflowing spout!
Across the window pane
It pours and pours
And swift and wide,
With a muddy tide,
Like a river down the gutter roars
The rain, the welcome rain!

a) When does the rain look beautiful? (1)

b) Fill in the blanks:- (3)

i) The rain clatters along the _____.

ii) Across the window pane the rain _____ and _____.

c) Mention a pair of rhyming words from the poem. (1)

Section – B (Writing – 10 marks)

3. Notice writing: (5)

a) You are Adwit/Anwita of Class III E from Delhi Public School, Ranchi. You have lost your school blazer in the basket ball ground of the school. Write a notice for the same.

OR

b) You are Adwit/Anwita of Class III B from Delhi Public School, Ranchi. You have found a story book in your school garden. Write a notice for the same.

4. Paragraph writing : (Write any one. Word limit: 70-75 words)

(5)

- a) Morning Assembly **OR** b) My Birthday Celebration

Section – C (Grammar – 30 marks)

5. Do as directed:

(1x5=5)

- a) I _____ everyday at 5:00 p.m. (**study** – use *Simple Present Tense*)
b) Jiya _____ in the park. (**play**– use *Present Continuous Tense*)
c) Papa _____ a new car on mom’s birthday. (**buy** – use *Simple Past Tense*)
d) We _____ to Darjeeling this summer vacation. (**go** – use *Simple Future Tense*)
e) Mishika _____ for my birthday party. (**come** - use *Present Continuous Tense*)

6. Fill in the blanks with has, have or had :

(1x5=5)

- a) I _____ many toys at home.
b) Cellphones nowadays _____ many new features.
c) Our school _____ three large playgrounds.
d) The wall _____ a huge crack before it got repaired.
e) A square _____ four sides.

7. Pick out the conjunctions in the given sentences:

(1x5=5)

- a) I am tall but my sister is short.
b) Go away or be quiet.
c) Mohit and Manas are my best friends.
d) Sonia is happy because she won the game.
e) You can write with a pencil or a pen.

8. Identify the adverbs and write how, where and when:

(1x5=5)

- a) We looked for him everywhere.
b) I get up early in the morning.
c) She came late to the school today.
d) They played the music loudly.
e) The child writes neatly.

9. Choose the appropriate prepositions to fill in the blanks:

(1x5=5)

- a) We go _____ school by bus. (to/of)
b) The big tree is _____ the house. (over/behind)
c) The cat jumped _____ the chair. (of/off)
d) Look _____ the blackboard. (on/at)
e) This movie was made _____ 1989. (on/in)

10. Complete the sentences using can, cannot, should or should not:

(1x5=5)

- a) _____ I use your phone for a while?
b) A leopard _____ change its spots.
c) _____ I have some water please?
d) We _____ always reach the airport an hour before the check-in time.
e) We _____ waste time in unnecessary chatting and complaining.

Section – D (Literature – 30 marks)

11. Answer the following questions:

(2x6=12)

- a) How would Aunt Ruby taunt the Parakeet?
b) How is the sea described in the poem ‘ Winter’ ?
c) What did Androcles tell Benedictus? What did Benedictus warn Androcles about?
d) Which musician has been described as a musical prodigy in the lesson ‘Beethoven’?
e) Whom do you think Beethoven inherited his musical talents from?
f) Why was the lion roaring in pain?

12. Answer the following questions with reference to context:

(2x5=10)

a) Clouded with snow...

- (Winter)

i) What does 'clouded with snow' mean?

ii) Apart from the speaker, who else is witnessing the cold wind?

b) But goldfish don't talk!

- (The Parrot Who Wouldn't Talk)

i) Who said these words and to whom?

ii) Who wanted to get a goldfish?

c) 'Sure, said the king, 'that foolish thing

Will strive no more to climb,

When it toils so hard to reach and cling,

And tumbles every time.'

- (King Bruce and the Spider)

i) Who is the 'foolish thing' here ?

ii) Why does the king call it 'foolish' ?

d) The rayless sun, day's journey done.

- (Winter)

i) When is the sun rayless?

ii) What happens once the day's journey is done?

e) Nobody escapes from me.

- (Androcles and the Lion)

i) Who said these words and to whom?

ii) Why did the speaker say these words?

13. Write the meanings : (in reference to the lessons in the book)

(1x5=5)

a) defied b) behold c) ebbing d) tumultuous e) verily

14. Fill in the blanks

(1x3=3)

a) Bruce was the king of _____ .

b) Aunt Ruby's tantrums were _____ .

c) The poet of the poem 'Winter' is _____ .



DELHI PUBLIC SCHOOL

SAIL Township, Ranchi

SECOND SEMESTER EXAMINATION (SESSION-2022-23)

CLASS: – III

DATE :- 27.02.2023

SUBJECT:- Mathematics

Time: 2½ Hours

M.M. :- 80

Section – A

I) Fill in the blanks:-

[1x12 =12]

- _____ 20 p coins make ₹ 20.
- $\frac{1}{8}$ of 24 = _____.
- There are _____ days in a fortnight.
- There are _____ quarters in a whole.
- ₹ 0.06 = _____paise.
- Two line segments intersect at a _____.
- There are _____ months in a year which have 31 days each.
- The minute hand takes _____ minutes to move from 5 to 8.
- _____ mL + 200 mL = 1 L
- 3675g – 2kg 550g = _____g.
- All the sides of a square are _____.
- 9 km 489 m = _____m.

II) State whether each of the following statement is 'true' or 'false'.

[1x8 = 8]

- The hour hand moves faster than the minute hand.
- 1m = 100cm
- The standard unit of capacity is litre.
- 28 kg 460g + 45 kg 385g + 980g =72 kg 875g.
- To convert rupees into paise, we multiply the amount in rupees by 100.
- A cuboid has 8 faces.
- February of each leap year has 29 days.
- There are 94 days in 12 weeks.

III) Write one word answer for the following:

[1x5 = 5]

- The quantity of matter in an object _____.
- A solid which has 6 identical faces _____.
- A point where two adjacent sides of a plane figure meet _____.
- A straight path with two end points _____.
- The quantity of liquid that a container or vessel can hold. _____.

IV) Match the column :-

[1x5 = 5]

- | | |
|--------------|---------------------------|
| i) Cylinder | a) no definite length |
| ii) Sphere | b) the type of money used |
| iii) Cone | c) no vertex and no edge |
| iv) Currency | d) 1 plane face |
| v) Line | e) 2 circular edges |

V) Do as directed: (Show the working)

[2x8 = 16]

- Convert the following amounts into rupees and paise.
 - 20473 p
 - 47809 p
- Find the difference between ₹ 480.35 and ₹ 209.70 .
- Convert the given lengths into metres and centimetres.
 - 39748 cm
 - 5874 cm
- Compare :
 - 7L 500 mL 7050mL
 - 50405g 50 kg 405g
- At a railway station, a coolie carried a suitcase weighing 26 kg 756g and a bag weighing 19 kg 554 g. Find the total weight carried by the coolie.
- Subtract 29L 358 mL from 43L 605 mL

P.T.O.

g) Arrange in columns and add:

100 kg and 56 kg 125g

h) Reena purchased 25 L 250 mL of milk. She used 7 L 830 mL during the day. What quantity of milk is she left with?

VI) Solve : (Show the working)

[3x6 = 18]


- a) i) Write the fractional number for the fraction $\frac{7}{12}$.
 ii) How many 20-paise coins will make ₹ 14.40 ?


b) i) Add :-

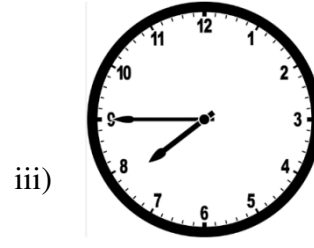
$$\begin{array}{r} ₹\ 537.85 \\ + ₹\ 68.29 \\ \hline \end{array}$$

ii) By how much does ₹51.60 exceed ₹28.85?

c) Look at the clock and write the correct time in numerals as well as in words.



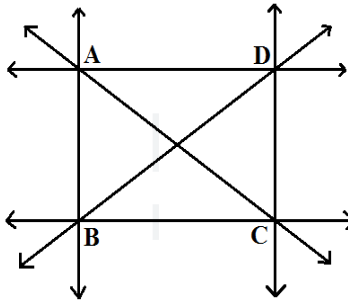




- d) i) Which year will it be after three years from the present year?
 ii) If the day after tomorrow is Sunday, what was the day yesterday?
 iii) How many days are there in 7 weeks 4 days?

e) In the given figure,

- i) Name the horizontal lines.
 ii) Name the vertical lines.
 iii) Name the oblique lines.

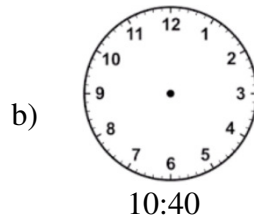
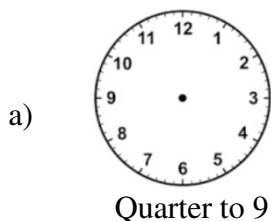


- f) i) Construct a line segment PQ of length 6 cm.
 ii) Identify the shape of a pickle jar.
 iii) Name a solid which have 8 vertices, 6 plane faces and 12 edges.

VII) Solve : (Show the working)

[4x4 = 16]

- a) i) The cost of an umbrella is ₹165.25. Find the cost of 12 such umbrellas.
 ii) Richard is 97cm tall. His father is 1m 56 cm tall. How much taller than the son is the father?
- b) i) Convert 9 kg 460g into grams.
 ii) David purchased a piece of cloth measuring 16 metres. Out of this cloth, he gave 2m 35 cm for his shirt, 4m 65cm for his pants and 2m 45 cm for his coat to the tailor. How much cloth is left with him?
- c) Which of the following are leap years? Give reason –
 2008, 1997, 2000, 1983, 1600, 1975, 1996, 1965
- d) i) Draw the hands of the clock showing the given time.



- ii) A jug of capacity 2 litres can be half filled by pouring 5 full mugs of water into it. How much water does the mug hold when it is full?



DELHI PUBLIC SCHOOL

SAIL Township, Ranchi

SECOND SEMESTER (SESSION-2022-23)

SUBJECT: General Knowledge

DATE :- 17.02.2023

CLASS: – III Sec:- _____

Time: 1 Hour

M.O. :- _____

Roll no.:- _____

F. M. :- 50

NAME:- _____

I. Choose the correct word given in the box to fill in the blanks: [1 x 10 = 10]

*Kimono, Bread, Queen's Necklace, Bat, Cycling,
Spanish, J.R.D. Tata, Reduce, Butterfly, Mysore Dasara*

- a) _____ is the another name for Marine Drive.
- b) This is the only flying mammal on Earth. _____
- c) Roti, Chapati, Naan and Paratha are all forms of this dish _____.
- d) 'Tour de France Trophy' is given for this game. _____.
- e) The Japanese dress is called the _____.
- f) _____ was the first Indian Pilot.
- g) Sabrina lives in Spain, she speaks _____.
- h) _____ means to use less of something and not waste it.
- i) _____ use their feet to taste the nectar of flowers.
- j) _____ is a ten day festival of Karnataka, marked by a grand procession of decorated elephants.

II. Answer the following questions: [1 x 10 = 10]

- a) Which is the highest mountain peak of India?
Ans.- _____
- b) 'Music' is named after which ancient Greek Goddess?
Ans.- _____
- c) Which is an action comedy film about 'Po' who wants to be a Kung Fu Master?
Ans.- _____
- d) As per area, which is the largest state in India?
Ans.- _____
- e) Which is the longest poisonous snake in the world?
Ans.- _____
- f) Which city is named after Mahatma Gandhi? (Capital)
Ans.- _____
- g) What do the five rings on the Olympic flag stand for?
Ans.- _____
- h) Which city was earlier known as Pataliputra?
Ans.- _____
- i) Which is the classical dance of North India?
Ans.- _____

P.T.O.

III. Match the columns:

[1 x 10 = 10]

Column – A

Column – B

- a) Chhatrapati Shivaji International Airport
- b) Thomas cup
- c) Yen
- d) Ramoji Film Studios
- e) Simba, a young lion
- f) Mother Teresa
- g) Egypt
- h) Snakes
- i) Metallic bells
- j) Assam

- *Badminton
- *Japan
- *Mumbai
- *The lion king
- *Hyderabad
- *Rongali Bihu
- * Noble Prize (1979)
- * ghungroos
- * Danish
- * vibrations

<input type="checkbox"/>
<input type="checkbox"/>
<input type="checkbox"/>
<input type="checkbox"/>
<input type="checkbox"/>
<input type="checkbox"/>
<input type="checkbox"/>
<input type="checkbox"/>
<input type="checkbox"/>
<input type="checkbox"/>
<input type="checkbox"/>

IV. Write 'True' or 'False':

[1 x 10 = 10]

- a) A vaccine is a medicine that helps you to fight disease causing germs.
- b) Indian Ocean lies on the western side of India.
- c) Osaka Aquarium is one the largest public aquarium of the world.
- d) Panda carries its young ones in a pouch.
- e) Rasam and Paniyaram are famous dishes of Chennai.
- f) Chariot festival is celebrated in Puri, Odisha.
- g) Chandigarh serves as the capital city of both Punjab and U.P.
- h) Kathakali dance is performed by boys and men.
- i) Pankaj Advani is a famous Indian snooker player.
- j) Bhopal city is almost in the centre of India.

V. Name them:

[1 x 5 = 5]

- a) The only Indian city in which the old rail vehicle called 'tram' is used
- b) A wild camel with two humps in which it stores fat.
- c) The Indian President's Residence is called
- d) Which city is called as the 'Commercial Capital of India'?
- e) A large group of musicians play together on various instruments

VI. Current Affairs:

[1 x 5 = 5]

- a) Which state is the host of the 5th edition of Khelo India Youth Games in 2023?
- b) Which country won FIFA World Cup 2022?
- c) Which country won ICC Men's T20 World Cup 2022?
- d) Who is the current Prime Minister of United Kingdom?
- e) Which city is going to host India's first ever Formula E World Championship?



DELHI PUBLIC SCHOOL

SAIL Township, Ranchi

SECOND SEMESTER EXAMINATION (SESSION-2022-23)

SUBJECT: Computer

DATE :- 20.02.2023

CLASS: – III Sec:- _____

Time: 1 Hour

M.O. :- _____

Roll no.:- _____

F. M. :- 30

NAME:- _____

Q1) Choose the most suitable alternative: -

[0.5X6=3]

- a) The grass effect is present in the _____ tool.
i) Paint ii) Stamp iii) Line iv) Magic
- b) To undo the last drawing action which tool we have to use?
i) Undo ii) Redo iii) New iv) Save
- c) The upper window in LOGO is used to _____.
i) Write the command ii) Execute the commands
iii) Display graphics iv) Display the commands
- d) The result of the mathematical calculations in LOGO will be display in the _____ box.
i) Input ii) Button iii) Command-recall list box iv) Both (i) and (ii)
- e) 'Tux Paint' can be downloaded from the _____ website.
i) www.tuxpaint.org ii) www.tux_paint.org
iii) www.tuxpaint.in iv) www.paint.org
- f) LOGO operators are used to perform _____ calculations.
i) Logical ii) Mathematical iii) Functional iv) None of these

Q2) Fill in the blanks: -

[0.5X6=3]

- a) Text can be erased from the screen by using the _____ primitive.
- b) LOGO stands for _____.
- c) A set of shapes is displayed in the _____ box.
- d) _____ primitive is used to close the LOGO screen.
- e) _____ command is used for addition in MSW LOGO.
- f) The _____ primitive is used to call the turtle to its starting location.

Q3) Write True or False: -

[0.5X5=2.5]

- a) HT and CS primitive do the same work.
- b) Stamp tool is a set of special tools.
- c) Shapes tool contains a set of different shapes.
- d) Toolbar lies on the right side of the 'Tux Paint' screen.
- e) Minimize button is used to shrink the active screen into a small button.

Q4) Write down the name of the tools that are used in Tux Paint: -

[1x5=5]

- a) To draw line of different thickness and style. _____
- b) To draw different filled or unfilled shapes. _____
- c) To type any text. _____
- d) To quit the Tux Paint. _____
- e) To insert an image or sticker. _____

Q5) Write the logo primitives for the following :-

[1X4=4]

- a) To turn the turtle towards the right by 180 turns. _____
- b) To move the turtle 80 steps ahead. _____
- c) To move the turtle 35 steps back. _____
- d) To turn the turtle towards the left by 75 turns. _____

Q6) Write short notes on: -

[2X2=4]

a) Home

b) Magic tool

Q7) Answer the following questions: -

[2X3=6]

a) What is LOGO?

b) Write any two differences between HT and ST primitive.

c) What do you mean by drawing canvas in 'Tux Paint'?

Q8) Label the parts of 'Tux Paint' : -

[0.5X5=2.5]

