



DELHI PUBLIC SCHOOL

SAIL Township, Ranchi

FIRST SEMESTER EXAMINATION (SESSION-2022-23)

CLASS: – III

DATE :- 12.09.2022

SUBJECT:- Hindi

Time: 2½ Hours

M.M. :- 80

व्याकरण (खण्ड - क)

1. गद्यांश पढ़कर प्रश्नों के उत्तर दीजिए:-

(5)

पेड़ हमारे जीवन के मुख्य अंग हैं। यह हमारे जीवन दाता हैं। पेड़ों से हमें साँस लेने के लिए ऑक्सीजन मिलती है। यह वर्षा लाने में भी सहायक होते हैं। पेड़ों की पत्तियों से तथा फूल, फल, छाल आदि से दवाइयाँ बनती हैं। इनकी लकड़ी से कागज और फर्नीचर बनाए जाते हैं। पेड़ों पर पक्षियों का बसेरा होता है। पेड़ों को ही वह अपना घर मानते हैं। पेड़ों से ही धरती पर चारों तरफ हरियाली फैली रहती है। हमें पेड़ों को नष्ट नहीं करना चाहिए। इन्हें बचाने के लिए सभी लोगों को अधिक से अधिक पेड़ लगाना चाहिए। ताकि हमारा वातावरण स्वच्छ और सुंदर बन सके।

प्रश्न:-

- पेड़ों से हमें साँस लेने के लिए क्या मिलता है?
- दवाइयाँ किससे बनती हैं?
- पेड़ों पर किसका बसेरा होता है?
- पेड़ों से धरती पर क्या फैली रहती है?
- पेड़ बचाने के लिए हमें क्या करना चाहिए?

खण्ड - ख

2. निर्देश के अनुसार कार्य करें:-

(3×5=15)

- अनुनासिक चिन्ह का प्रयोग करके सही शब्द बनाएँ:-
(क) चाद (ख) आख (ग) पाच
- नीचे दिए गए शब्दों के लिंग बदलकर लिखिए:-
(क) कबूतर (ख) सेठानी (ग) मोर
- दिए गए शब्दों के दो-दो पर्यायवाची शब्द लिखें:-
(क) फूल (ख) मित्र (ग) धरती
- दिए गए शब्दों के विलोम शब्द लिखें:-
(क) चतुर (ख) आदि (ग) दुर्बल
- अशुद्ध शब्दों को शुद्ध रूप में लिखें:-
(क) चिरिया (ख) ग्रहकार्य (ग) परनाम

3. रिक्त स्थानों की पूर्ति करें :-

(1×10=10)

- विचारों के आदान-प्रदान का साधन _____ कहलाता है।
- पशु-पक्षियों की भाषा को _____ कहा जाता है।
- वह छोटी इकाई जिसके टुकड़े नहीं किए जा सकते _____ कहलाती है।
- अनुस्वार का उच्चारण _____ से होता है।
- सभी नाम वाले शब्द _____ कहलाते हैं।
- पूरी जाति की पहचान करवाने वाले शब्द _____ संज्ञा कहलाते हैं।
- भाववाचक संज्ञा को केवल _____ किया जा सकता है।
- लिंग के मुख्य _____ भेद हैं।
- नदियों, भाषाओं, तिथियों, पुस्तकों व लिपियों के नाम सदा _____ होते हैं।
- समान अर्थ देने वाले शब्द _____ शब्द कहलाते हैं।

साहित्य (खण्ड - ग)

4. एक शब्द में प्रश्नों के उत्तर लिखें:-

(1×10=10)

- कवि बच्चों को किसे आँख दिखाने को कह रहा है?
- हमें पीछे क्या नहीं हटाना चाहिए?

P.T.O.

- (iii) सत्य और धर्म की सदा क्या होती है?
 (iv) रावण के पुत्र का नाम क्या था?
 (v) दशहरे के एक दिन पहले बड़े मैदान में क्या लगता है?
 (vi) राजा का शत्रु किससे जाकर मिला?
 (vii) वन जाने के मार्ग में राजा को कौन मिला?
 (viii) राजा की बात सुनकर किसका सिर शर्मिदा से झुक गया?
 (ix) पेड़ को जीवनदान किसने दिया?
 (x) शिकारी ने किस पर तीर चलाया?

5. दिए गए शब्दों के अर्थ लिखें:-

(1×6=6)

- (i) उत्साह (ii) सत्य (iii) मार्ग
 (iv) सेवक (v) करुणा (vi) ठूँठ

6. किसने - किससे कहा? लिखें:-

(1×6=6)

- (i) "बिना परिणाम सोचे कोई भी कार्य नहीं करना चाहिए।"
 (ii) "साधु के ये वचन पत्थर पर खुदवाकर राजभवन में लगवा देना।"
 (iii) "यदि झूठ बोलने का यत्न किया तो तुरंत फाँसी पर लटका दिए जाओगे।"
 (iv) "तुम इतना कष्ट क्यों भोग रहे हो?"
 (v) "क्या यह उचित होगा कि विपत्ति के समय मैं इसका साथ छोड़ दूँ?"
 (vi) "तुम्हारा यह प्रेम देखकर मैं बहुत प्रसन्न हूँ। तुम कोई वर माँगो।"

7. कविता की पंक्तियाँ पूरी करें:-

(1×6=6)

दुश्मन से _____ मत सीखो,
 वचन से _____ मत सीखो।
 _____ का पथ मत छोड़ो,
 _____ झूठ को मिलकर तोड़ो।
 तुम भारत की _____ हो,
 जन-जन से दूर _____ हो।

8. दीर्घ उत्तरीय प्रश्नों के उत्तर लिखें:-

(2×3=6)

- (i) दशहरे का त्योहार क्यों मनाया जाता है?
 (ii) 'हित की बात' पाठ से हमें क्या शिक्षा मिलती है?
 (iii) इंद्रदेव का हृदय करुणा से क्यों भर गया?

9. सही कथन पर (✓) का तथा गलत कथन पर (×) का निशान लगाएँ:-

(1×4=4)

- (i) रामलीलाएँ दीपावली पर्व पर होती हैं।
 (ii) हित की बात बताने के बदले साधु ने राजा से हजार स्वर्ण मुद्राएँ माँगी।
 (iii) एक विषयुक्त बाण पेड़ के तने पर जा लगा।
 (iv) पेड़ सूख जाने पर तोता उस पेड़ को छोड़कर चला गया।

10. मूल्यपरक प्रश्न:-

(2)

प्रश्न- यदि आपको कुछ समय के लिए राजा बना दिया जाए तो आप अपने राज्य के लोगों के लिए क्या-क्या काम करेंगे?
 दो वाक्यों में उत्तर लिखिए।

(खण्ड - घ)

11. किसी एक विषय पर पत्र लिखें:-

(5)

विद्यालय न आने का कारण बताते हुए प्रधानाचार्य महोदय को अवकाश हेतु प्रार्थना पत्र लिखें।

अथवा

गृह प्रवेश के अवसर पर मित्र को निमंत्रण पत्र लिखें।

12. किसी एक विषय पर अनुच्छेद लिखें:-

(5)

- (i) प्रिय त्योहार
 (ii) रंग-बिरंगी तितलियाँ
 (iii) मेरी प्रिय शिक्षिका



DELHI PUBLIC SCHOOL

SAIL Township, Ranchi

FIRST SEMESTER EXAMINATION (SESSION-2022-23)

CLASS: – III

DATE :- 07.09.2022

SUBJECT:- Social Science

Time: 2½ Hours

M.M. :- 80

1. **Define:** [1 x 8 = 8]
- a) monument b) currency c) fertile d) parliament
e) government f) pollute g) solar energy h) atmosphere
2. **Answer in detail:** [3 x 8 = 24]
- a) Write three rules that we must follow with regard to our national flag.
b) Write two sentences on the climate of Srinagar. Name two tourists places of Srinagar.
c) What are the differences between a plain and a plateau?
d) Why is the sun important to us?
e) What is a map? How is it more useful than a globe?
f) Write three ways to control land pollution.
g) What is the Rock Garden famous for?
h) How will you show respect to our national anthem?
3. **Answer in short:** [2 x 9 = 18]
- a) Write the name of any two places of tourist interest in Delhi.
b) Which symbols have been used a lot in our art and culture?
c) Why are there few trees in deserts?
d) What are the two types of government in our country?
e) How can we control noise pollution?
f) Why does life exist on Earth?
g) What is a star?
h) Why is the southern part of India called a peninsula?
i) Mention two responsibilities you must undertake to keep your country clean.
4. **Name them:** [1 x 8 = 8]
- a) Women in Assam wear _____.
b) Third largest constellation _____.
c) The smallest state of India _____.
d) Food Basket of India _____.
e) World's largest desert _____.
f) Patna was earlier known as _____
g) The President of India lives in _____
h) He hoists the national flag at Red Fort _____

P.T.O.

5. **Match the following:** [1 x 6 = 6]
- | | |
|-------------------|--------------------|
| a) Red Fort | i) Largest Ocean |
| b) Sirius | ii) Shah Jahan |
| c) Pacific Ocean | iii) Mount Everest |
| d) Highest Peak | iv) Lucknow |
| e) Chicken Kurtas | v) Edwin Lutyens |
| f) India Gate | vi) Star |

6. **State whether the statement is True or False:** [1 x 6 = 6]
- a) People drink kahwa in Kashmir.
 - b) Phanek is worn by women in Rajasthan.
 - c) Shark is the national aquatic animal of India.
 - d) A large part of Rajasthan is a desert.
 - e) The Arabian Sea lies to the east of India.
 - f) Earth has more land than water.

7. **Fill in the blanks:** [1 x 6 = 6]
- a) Jammu & Kashmir people wear a long woollen kurta called _____.
 - b) The closest neighbour of the Earth is the _____.
 - c) Scotland boys and men wear a skirt-like garment called _____.
 - d) India is surrounded by three _____.
 - e) The Ashoka Chakra is _____ in colour.
 - f) Chandigarh was designed by _____.

8. **Write the capital of the following states:** [1 x 4 = 4]
- a) Madhya Pradesh
 - b) Karnataka
 - c) West Bengal
 - d) Uttar Pradesh



DELHI PUBLIC SCHOOL

SAIL Township, Ranchi

FIRST SEMESTER EXAMINATION (SESSION-2022-23)

CLASS: – III

DATE :- 09.09.2022

SUBJECT:- Science

Time: 2½ Hours

M.M. :- 80

1. **Define :** [2 x 4 = 8]
a) stomata b) scavengers c) talons d) first aid
2. **Answer the following questions in brief :** [2 x 4 = 8]
a) Write two functions of skeletal system.
b) What is the use of webbed feet in birds?
c) Write two uses of the trunk of an elephant.
d) What is midrib?
3. **Answer the following questions in detail:** [3 x 5 = 15]
a) Write the functions of :
(i) ears (ii) eyes (iii) skin
b) What is cud? Name two cud chewing animals?
c) Write three features of birds that help them to fly.
d) Write a note on nervous system.
e) Write three safety rules to be followed in the classroom.
4. **Give reasons:** [2 x 2 = 4]
a) We should walk with straight body and open shoulder.
b) Squirrels have a pair of long front teeth.
5. **Differentiate between:** [2 x 2 = 4]
a) Flight feathers and down feathers
b) Root system and shoot system
6. **Answer in one sentence :** [1 x 5 = 5]
a) Name two organs which are made up of muscles only.
b) What are perching birds?
c) Why are plants called as producers?
d) Which type of tongue do frogs and lizards have to catch their prey?
e) What three things does a seed need to grow into a seedling?
7. **Fill in the blanks:** [1 x 6 = 6]
a) _____ make their nests with pebbles and stones.
b) The non-living things built by humans are called _____.
c) The part of the leaf that connects it to the branch is called _____.
d) Leeches have a circular mouth with _____ jaws which helps in sticking onto the skin of the prey.
e) _____ are the building blocks of a living body.
f) Accidents can occur if we are not _____.
8. **Name them:** [1 x 6 = 6]
a) Staying away from harm or injury - _____
b) Thin tubes inside the body through which blood flows to different body parts - _____
c) A bird that makes a tunnel shaped nest on the bank of a river or a pond. - _____
d) An organism that swallows the soil to eat the remains of dead plants and animals present in it. - _____
e) A bunch of small, thin roots that grow from the base of the stem. - _____
f) The process in which living things produce young ones of its own kind - _____

P.T.O.

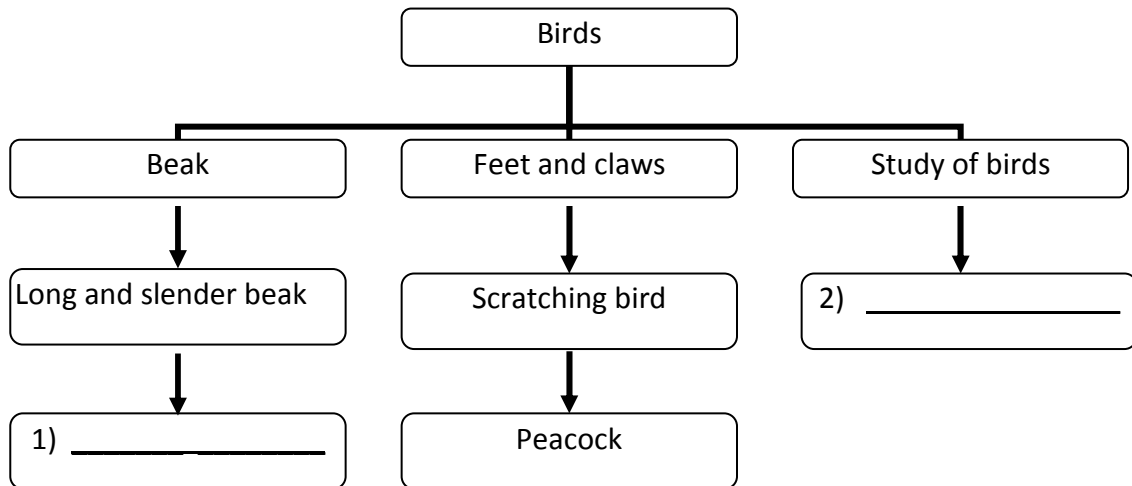
9. **Complete the series:** [1 x 5 = 5]
- a) sunlight : natural thing :: aeroplane : _____
- b) wheat : cereal :: pepper : _____
- c) fungi : _____ :: tiger : carnivore
- d) woodpecker : _____ :: swan : aquatic bird
- e) food pipe : digestive system :: heart : _____

10. **Rewrite the sentences by changing the underlined words to make correct statements:** [1 x 5 = 5]
- a) The brain remove wastes from the blood and form urine.
- b) Do not wear cotton clothes while lighting firecrackers as they tend to catch fire easily.
- c) A vulture has short and broad beak.
- d) Lizards suck nectar into their mouth from flowers using a long thin tube.
- e) Lily plant curl up when we touch them.

11. **Write 'True' or 'False':** [0.5 x 6 = 3]
- a) Sweat is given out by human beings as a waste product.
- b) The flat and broad part of a leaf is called side veins.
- c) A seed stores food for the baby plant.
- d) Pigeons have chisel shaped beak.
- e) The circulatory system receives information from the brain and pass it to other parts of the body.
- f) We must use blades for sharpening pencils.

12. **Match the column:** [0.5 x 6 = 3]
- | | |
|--|--|
| <p>Column – A</p> <p>a) cockroach</p> <p>b) lungs</p> <p>c) herons</p> <p>d) dog</p> <p>e) lentils</p> <p>f) fish</p> | <p>Column – B</p> <p>* respiratory system</p> <p>* lap up water</p> <p>* pulses</p> <p>* gills</p> <p>* antennae</p> <p>* wading bird</p> |
|--|--|

13. **Complete the flow chart:** [1 x 2 = 2]



- 1) _____
- 2) _____

14. **Draw and label:** [3 x 2 = 6]
- a) A toe of a webbed feet.
- b) Three things you see in first aid box.



DELHI PUBLIC SCHOOL

SAIL Township, Ranchi

FIRST SEMESTER EXAMINATION (SESSION-2022-23)

CLASS: – III

DATE :- 14.09.2022

SUBJECT:- English

Time: 2½ Hours

M.M. :- 80

Section – A (Reading – 10 marks)

1. Read the passage carefully and answer the questions that follow:

[5]

The smile is the best tonic for our mind and body. It takes thirteen muscles to smile, but forty-three to be angry. So, it is easier to smile and difficult to be angry. To be cheerful, we have to create positive thoughts. On the other hand, if we constantly think about negative things, we feel unhappy. So, the best way to avoid a negative idea is to replace it with a positive one. When we are relaxed in bed, we should practice putting some cheerful thoughts into our mind.

- What is the best tonic for our mind and body?
- What should we do to be cheerful?
- What is the best way to avoid a negative idea?
- What should we practice when we are relaxed in bed?
- Fill in the blank.**

If we constantly think about negative things, we feel _____.

2. Read the poem given below and answer the questions that follow:

[5]

I Wonder

- By Jeannie Kirby

(Stanza – 1) I wonder why the grass is green,
And why the wind is never seen?
Who taught the birds to build a nest
And told the trees to take a rest?

(Stanza – 2) Or, when the moon is not quite round,
Where can the missing bit be found?
Who lights the stars when they blow out,
And makes the lightning flash about?

(Stanza – 3) Who paints the rainbow in the sky,
And hangs the fluffy clouds so high?
Why is it now, do you suppose,
That dad won't tell me, if he knows?

a) Fill in the blanks:

- The grass is _____ in colour. (Stanza – 1)
 - The birds are building a _____. (Stanza – 1)
- b) Write 2 pairs of rhyming words from the poem.
- c) Write the opposite of : missing - _____

Section – B (Writing – 10 marks)

3. **Paragraph writing:**

[5]

Write a paragraph on any one topic in not more than (80 words).

- a) My Favourite Subject OR b) Rainy Season

4. **Letter Writing (Informal):**

[5]

a) You are Amit/Reena, residing at 45, Civil Lines, New Delhi. Write a letter to your friend explaining him/her about your hobbies.

OR

b) You are Amit/Reena, residing at 45, Civil Lines, New Delhi. Write a letter to your uncle thanking him for the bicycle sent as a birthday gift.

Section – C (Grammar – 30 marks)

5. Do as directed:

[1 x 8 = 8]

- sails / on / The / ship / the / sea (*Arrange these words to form a meaningful sentence.*)
- The doctor gave me some medicine. (*State the nouns in the given sentence.*)
- I have a box of sweets. (*Pick out the common nouns.*)
- The _____ is in Agra. (*Fill in the blank with a proper noun.*)
- Write the plural of :** giraffe
- I am wearing a pair of black shoes. (*Pick out the verbs from the given sentence.*)
- Fill in the blanks with is, am, are, was or were :**
 - Raghu _____ in Class II last year.
 - I _____ watching T.V. now.

P.T.O.

6. Choose the correct adjectives from the box and fill in the blanks:

[5]

cunning, ripe, sharp, curly, new

- The _____ mangoes were sweet and juicy.
- The fox is a _____ animal.
- Hema has long, black and _____ hair.
- The knife is _____ and _____.

7. Complete the sentences with suitable degrees of comparison:

[5]

- This book is _____ than that one. (thick)
- This is the _____ room in the house. (big)
- A wooden box is _____ than an iron box. (light)
- Lucknow is a _____ city. (beautiful)
- The whale is the _____ mammal on the earth. (large)

8. Fill in the blanks with suitable pronouns given in the brackets.

[5]

- These pens belong to her. These pens are _____. (hers/we)
- Charu is a good girl. _____ always helps others. (She/It)
- My father visited Shimla. _____ brought some sweaters from there. (Ours/He)
- Payal and Gunjan are good friends. _____ study in the same school. (We/They)
- My father had a nice watch. He gave _____ to me. (me/it)

9. Fill in the blanks with a, an or the as required.

[5]

- There is _____ bird on the tree.
- He is _____ tallest boy amongst all.
- _____ dog ran after me. _____ dog was my pet.
- _____ empty bowl is on the shelf.

10. Write the opposite gender of:

[2]

- master - _____
- daughter-in-law - _____

Section – D (Literature – 30 marks)

11. Answer these questions :

[2 x 6 = 12]

- What did Mowgli enjoy doing the most? [*Mowgli Grows up*]
- How can we add a little sunshine to the world ? [*Another Chance*]
- Why did Tenali gift his neighbours a small vessel each? [*Magic Vessels*]
- What are the things that words can do? [*Words*]
- Why did Patrick never do his homework? [*Who Did Patrick's Homework?*]
- What promise did the elf make to Patrick and on what condition? [*Who Did Patrick's Homework?*]

12. Answer the following questions with reference to the context:

[2 x 4 = 8]

- “Save me! Don't give me back to that cat.” [*Who Did Patrick's Homework?*]
 - Who said these words and to whom?
 - What had the cat been doing?
- “Let's fix a date soon after the harvest.” [*Magic Vessels*]
 - Who said this and to whom?
 - What date was to be fixed?
- A chance to blot out our mistakes [*Another Chance*]
 - What is needed to blot out mistakes?
 - What does the speaker mean by 'blot out'?
- “That was foolishness” [*Mowgli Grows up*]
 - Who said these words and to whom?
 - What was the 'foolishness' the speaker talks about?

13. Give the meanings of the following words: (in reference to the book)

[1 x 5 = 5]

- bleary
- thrill
- absurd
- uproar
- feebler

14. Make sentences with the following words:

[1 x 3 = 3]

- jungle
- desire
- neighbours

15. Fill in the blanks:

[1 x 2 = 2]

- Name the poet of the poem 'Words' _____.
- Tenali Raman, his wife and two daughters lived in a sleepy little village in _____.



DELHI PUBLIC SCHOOL

SAIL Township, Ranchi

FIRST SEMESTER EXAMINATION (SESSION-2022-23)

CLASS: – III

DATE :- 16.09.2022

SUBJECT:- Maths

Time: 2½ Hours

M.M. :- 80

Section – A

I. Fill in the blanks:

[1 x 12 = 12]

- The smallest two digit number is _____.
- The successor of a number is 1 _____ than the number.
- The Roman Numeral for 50 is _____.
- _____ + 6137 = 6137
- $8420 - 0 =$ _____.
- $0 \times 263 =$ _____.
- There are _____ months in 9 years.
- If a number is divided by itself, the answer is _____.
- $0 \div 9 =$ _____.
- $900 - 10 \text{ ones} =$ _____.
- The place value of 0 in 2602 is _____.
- $10 \times 5 = 5 \times$ _____.

II. Write 'True' or 'False':

[1 x 8 = 8]

- $V + IV = XI$
- The face value of 8 in 3802 is 800.
- $72 - 16 = 16 + 72$
- The sum of any three odd numbers is an even number.
- The remainder is always smaller than the divisor.
- The product of any number and 0 is zero.
- When a number is subtracted from itself, the difference obtained is '0'.
- There are 5 sevens in 35.

III. Write one word answer for the following:

[1 x 5 = 5]

- Collection of facts and figures. _____
- In a division sum, the number to be divided. _____
- In a multiplication sum, the number by which we multiply. _____
- In a problem on subtraction, the result obtained on subtraction. _____
- A figure which can be divided into two exactly identical parts. _____

IV. Match the column:

[1 x 5 = 5]

- | <u>Column – A</u> | <u>Column – B</u> |
|-------------------|-------------------|
| a) $3120 + 2130$ | i) 2000 |
| b) $8020 \div 4$ | ii) 95 |
| c) $7005 - 5005$ | iii) 5250 |
| d) 19×5 | iv) 17 |
| e) $21 + 6 - 10$ | v) 2005 |

V. Do as directed: (Show the working)

[2 x 8 = 16]

- Draw the line of symmetry for each of the following:-
(i) A (ii) H (iii) 3 (iv) V
- Divide and write the quotient: $144 \div 6$
- Multiply : 78×45
- Arrange in descending order :
4526, 5319, 2718, 3536
- Find the difference between 3953 and 8000.
- Add: 5867 and 3658
- Write four 3 digit numbers formed by using the digits 8 , 0 , 9 .
- Write the place value of each digit in 9803.

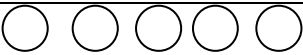





P.T.O.

VI. Solve (Show the working) :**[3 x 6 = 18]**

- 1) Find the difference between the largest 4 digit even number and the smallest 4 digit odd number.
- 2) (i) A school library had 4575 books. The school bought 688 more books. How many books does the library have now?
(ii) How much is 8012 greater than 2634?
- 3) Subtract the difference of 3672 and 1893 from 4235.
- 4) A box contains 42 chocolates. How many chocolates are there in 54 such boxes?
- 5) A pen costs ₹ 8. How many such pens can you get for ₹ 768?
- 6) Simplify : $8300 + 1032 - 5431 - 2357$

VII. Solve (Show the working) :**[4 x 4 = 16]**

- 1) The population of a village is 8410. If there are 1973 women and 1450 children, how many men are there in the village?
- 2) 108 exercise books were divided equally among 10 boys. How many will each get and how many exercise books remain?
- 3) (i) Complete the pattern:
6401 , 6301 , 6201 , _____ , _____
(ii) Write in figure:
Nine thousand ninety seven
(iii) How many 2-digit numbers are there?
(iv) $XXIX + IX =$ _____ (Write in Roman Numeral)
- 4) Below is given a pictograph showing the number of students of a class liking different food items.

Pizza	
Dosa	
Burger	
Pasta	
Sandwich	
Chips	

One  represents 5 students.

Study the given pictograph and answer the following questions.

- (i) How many students like pizza?
- (ii) Which food item is least popular?
- (iii) Which is the most favourite food item?
- (iv) How many students are there in the class?



DELHI PUBLIC SCHOOL

SAIL Township, Ranchi

FIRST SEMESTER (SESSION-2022-23)

SUBJECT: General Knowledge

DATE :- 29.08.2022

CLASS: – III Sec:- _____

Time: 1 Hour

M.O. :- _____

Roll no.:- _____

F. M. :- 50

NAME:- _____

I. Choose the correct words given in the box to fill in the blanks: [1 x 10 = 10]

Amphibians, biography, Nelson Mandela, crater, landscape, Stonehenge, anacondas, Alexander Graham Bell, Pinocchio, Uttar Pradesh

- _____ is most famous for his invention of the telephone.
- _____ are the heaviest snakes.
- _____ was popularly called 'Madiba'.
- _____ can live on land and in water.
- The state of Uttarakhand was earlier a part of _____.
- The big holes present on the surface of the Moon. _____
- A wooden puppet whose nose grows longer with every lie. _____.
- Horizontal page orientation is known as _____.
- Huge stone structures in Wiltshire, England: _____
- The story of a person's life written by another person: _____

II. With the help of clues identify what/who am I? [1 x 5 = 5]

- I am the largest living primate : _____
- I am the only natural satellite of the Earth : _____
- I am the first Indian woman to receive the International Grand Master title in chess : _____
- I am the currency of the Russian Federation : _____
- I explored Asia and was the first European to meet Kublai Khan : _____

III. Answer the following questions: [1 x 5 = 5]

- What do you call animals that give birth to young ones?
Ans.- _____
- Which form of matter has a fixed shape and does not flow?
Ans.- _____
- Who improved the steam engine in 1769?
Ans.- _____
- Who is the author of the Harry Potter series?
Ans.- _____
- What is the full form of ATM?
Ans.- _____

P.T.O.

IV. Match the columns:**[1 x 12 = 12]**Column – AColumn – B

- | | | |
|------------------------------------|-------------------------|--------------------------|
| a) Steffi Graf | *Jammu & Kashmir | <input type="checkbox"/> |
| b) Madras | *Chetan Bhagat | <input type="checkbox"/> |
| c) Land of Midnight Sun | *Sewing Machine | <input type="checkbox"/> |
| d) Yen | *Bill Gates | <input type="checkbox"/> |
| e) Phiran | *Norway | <input type="checkbox"/> |
| f) Human beings | *Lawn Tennis | <input type="checkbox"/> |
| g) Indian author | *Chennai | <input type="checkbox"/> |
| h) Elias Howe | *Papaya | <input type="checkbox"/> |
| i) Co-founder of Microsoft company | *Omnivores | <input type="checkbox"/> |
| j) Dengue fever | *Japan | <input type="checkbox"/> |
| k) Pt. Ravi Shankar | * Painter | <input type="checkbox"/> |
| l) M. F. Husain | * Sitarist and Composer | <input type="checkbox"/> |

V. Write ‘True’ or ‘False’:**[1 x 10 = 10]**

- a) Barbecue is an old form of farming. _____
- b) The smallest dog in the world is the greyhound. _____
- c) Baichung Bhutia played football for India. _____
- d) The Wright brothers invented the Model-T car. _____
- e) Gases are light and transparent. _____
- f) One kilobyte is equal to 1014 bytes. _____
- g) Birds have thin, hollow bones to lighten their weight and make it easier for them to fly. _____
- h) Revolution is the movement of the Earth around the Sun. _____
- i) The Nile is the shortest river in the world. _____
- j) The words ‘to’ , ‘too’ and ‘two’ are homophones. _____

VI. Current Affairs:**[1 x 5 = 5]**

- a) Who is the President of India? _____
- b) How many gold medals were won by India in Commonwealth Games 2022? _____
- c) Who is the Chief Minister of West Bengal? _____
- d) Who is the winner of IPL 2022? _____
- e) Who is India’s first Woman Rafale pilot ? _____

VII. Choose the correct option:**[1 x 3 = 3]**

- 1) When water vapour cools into a liquid, it is called
- a) Condensation b) Sublimation c) Evaporation
- 2) A story in which animals speak like humans and it ends with a lesson or moral.
- a) Comic book b) Atlas c) Fable
- 3) ‘Mekhla-Chadar’ is related to this state.
- a) Assam b) Punjab c) Sikkim



DELHI PUBLIC SCHOOL

SAIL Township, Ranchi

FIRST SEMESTER EXAMINATION (SESSION-2022-23)

SUBJECT: Computer

DATE :- 31.08.2022

CLASS: – III Sec:- _____

Time: 1 Hour

M.O. :- _____

Roll no.:- _____

F. M. :- 30

NAME:- _____

Q1) Choose the most suitable alternative:-

[0.5X4=2]

a) In which place do computer help in fee collection at the fee counter?

- i) In bank
- ii) In railway station
- iii) In school

b) Which key is the longest key on the keyboard?

- i) Arrow keys
- ii) Spacebar key
- iii) Capslock key

c) Computer is a _____ device.

- i) Multidimensional
- ii) Multitasking
- iii) Multinamed

d) How many buttons are there in a mouse?

- i) 5
- ii) 4
- iii) 2

Q2) Write True or False:-

[0.5X5=2.5]

- a) Hammer the keys of the keyboard.
- b) Escape key is used to execute an application.
- c) In offices, computers helps in generating and printing of bills.
- d) Mouse is a pointing device.
- e) Cover the computer properly when not in use.

Q3) Match the following:-

[0.5X5=2.5]

- a) Escape () to draw pictures
- b) Recycle bin () Personalize
- c) Mouse () Home
- d) This PC () Trash
- e) Wallpaper () to cancel the previous task

Q4) Fill in the blanks:-

[1X5=5]

- a) Computer has a very large _____ space.
- b) Computer works in three stages Input, _____ and Output.
- c) Printer is an _____ device.
- d) Arrow keys are also known as _____.
- e) In _____, computers are used for booking tickets.

Q5) Write short notes:-

[2X3=6]

- a) Barcode Reader - _____

- b) Taskbar – _____

- c) Documents – _____

Q6) Name them:-

[1X4=4]

- a) To execute instruction in computer. _____
- b) To type in capital letters. _____
- c) To open shortcut or context menu. _____
- d) To press the left mouse button twice. _____

Q7) Answer the following questions:-

[2X4=8]

- a) What is wallpaper?

- b) Explain any two functions of mouse.

- c) Mention any two rules that you should follow while entering in the computer lab.

- d) List any two applications of computer in school.

