

# Class- V Subject- English ( Paper-1)

Date - 13-09-2021

Full Marks- 20

**\* Required**

1. Email \*

---

2. Name \*

---

3. Section \*

*Check all that apply.* A B C D E F G H

4. Roll No. \*

---

State the kind of adjectives used in the following sentences:

5. 1. \*

1 point

Dad has a Chinese pen.

Mark only one oval.

- a) Adjective of Quality
- b) Adjective of Number
- c) Adjective of Quantity
- d) Demonstrative Adjective

6. 2. \*

1 point

I don't like that dress.

Mark only one oval.

- a) Adjective of Quality
- b) Adjective of Number
- c) Adjective of Quantity
- d) Demonstrative Adjective

7. 3. \*

1 point

# I ate some mangoes.

Mark only one oval.

- a) Adjective of Quality
- b) Adjective of Number
- c) Adjective of Quantity
- d) Demonstrative Adjective

Choose the correct pronoun for each sentence:

8. 4. We scored as many goals as \_\_\_\_\_. \*

1 point

Mark only one oval.

- a) they
- b) them
- c) theirs
- d) him

9. 5. Here is \_\_\_\_\_ book, you can take it. \*

1 point

Mark only one oval.

- a) your
- b) she
- c) them
- d) hers

10. 6. Raghav's mom asked \_\_\_ to clean the room. \*

1 point

*Mark only one oval.*

- a) their
- b) I
- c) him
- d) none of these

Choose the correct articles for the following sentences:

11. 7. They have formed \_\_\_\_\_ union. \*

1 point

*Mark only one oval.*

- a) a
- b) an
- c) the
- d) none of these

12. 8. \_\_\_\_\_ earth revolves around the sun. \*

1 point

*Mark only one oval.*

- a) A
- b) An
- c) The
- d) None of these

13. 9. \_\_\_\_ Sugar is bad for your health. \*

1 point

*Mark only one oval.*

- a) A
- b) An
- c) The
- d) None of these

14. 10. He comes once in \_\_\_\_ year. \*

1 point

*Mark only one oval.*

- a) a
- b) an
- c) the
- d) none of these

Choose the correct form of the verb for the following sentences:

15. 11. The news \_\_\_\_ true. \*

1 point

*Mark only one oval.*

- a) are
- b) is
- c) has
- d) have

16. 12. Each of these substances \_\_\_\_ found in India. \*

1 point

*Mark only one oval.*

a) have

b) has

c) is

d) are

17. 13. Gold and silver \_\_\_\_ precious metal. \*

1 point

*Mark only one oval.*

a) are

b) is

c) am

d) none of these

18. 14. Everyone \_\_\_\_ present in the meeting. \*

1 point

*Mark only one oval.*

a) are

b) is

c) am

d) none of these

Identify subject in the following sentences:

19. 15. The boy stood on the desk. \*

1 point

*Mark only one oval.*

- a) stood
- b) on
- c) desk
- d) the boy

20. 16. All roads lead to Rome. \*

1 point

*Mark only one oval.*

- a) all roads
- b) all
- c) Rome
- d) lead

21. 17. A barking sound the shepherd hears. \*

1 point

*Mark only one oval.*

- a) a barking
- b) sound
- c) the shepherd
- d) hears

Identify the kind of the following sentences:

22. 18. Be quiet. \*

1 point

*Mark only one oval.*

- a) Assertive
- b) Imperative
- c) Interrogative
- d) Exclamatory

23. 19. How cold is the night! \*

1 point

*Mark only one oval.*

- a) Assertive
- b) Imperative
- c) Interrogative
- d) Exclamatory

State the part of speech of: 'worked' in the given sentence.

24. 20. He worked the sum quickly. \*

1 point

*Mark only one oval.*

- a) verb
- b) adverb
- c) adjective
- d) noun

---

This content is neither created nor endorsed by Google.

Google Forms





# Class- V Subject- English ( Paper-2)

Date - 13-09-2021

Full Marks- 60

**\* Required**

1. Email \*

---

2. Name \*

---

3. Section \*

*Check all that apply.* A B C D E F G H

4. Roll No. \*

---

## **SECTION- A (Reading)**

**Q1. Read the following passage and answer the questions that follow: (5 Marks)**

There was a time when all house work was done by the women or girls of the household. Few husbands ever dreamt of washing-up, preparing breakfast or tending the baby. Such duties were no concern of theirs and a normal school boy assumed that if help was needed in the home, his sisters would be called on to give it. The whole family supported the view that the male child could not or should not clean, mend, wash, cook or make beds.

Things are very different today. Doctors or barristers find nothing shameful in putting on an apron to help in the kitchen or nursery and even boast of being good at washing clothes and personal linen.

The school boy is more often now than formally expected to help his mother. One reason for the change is the shortage of domestic servants. Girls could once be found to do the hard work in middle or upper class homes for very moderate wages. Such girls nowadays work in factories. They earn more money than most householders can afford to pay. Thus the wife now does the household work herself with the aid of labour saving machines and she expects some help from her family.

- a. Who usually did all the household work in the past?
- b. Mention some household work that women used to do in their house.
- c. How did the whole family view the male child?
- d. Mention one reason that has brought this change today?
- e. Find a word from the passage that means the same as 'talk proudly'.(paragraph – 2)

**Q2. Read the poem given below and answer the questions that follow: (5 marks)**

*O say, what is that thing called light,  
Which I can never enjoy?  
What is the blessing of the sight?  
O tell your poor blind boy!  
You talk of wondrous things you see,  
You say the sun shines bright;  
I feel him warm, but how can he  
Then make it day or night?  
My day or night myself I make  
Whenever I sleep or play;  
And could I ever keep awake  
With me it were always day  
With heavy sighs I often hear  
You mourn my hapless woe;  
But sure with patience I may bear  
A loss I never can know  
Then let not what I cannot have  
My cheer of mind destroy;  
whilst things I sing, I am a king  
Although a poor blind boy.*

- a) What can the blind boy never enjoy?
- b) What can the blind boy feel but cannot see it?
- c) Who makes or decides day and night for the blind boy?
- d) Write the antonym for : patience
- e) Give a pair of rhyming words from the poem.

### **SECTION- B (Writing)**

**Q3) Your father has sent a beautiful gift on your birthday from London. Write a letter to him expressing your feeling of love and admiration for him. You are Sushmita/Sudeep, living at D-7, Amar Colony, Lajpatnagar, New Delhi. (5 Marks)**

**Or**

**You are Sudeep/Sushmita living in a hostel at D-7, Amar Colony, Lajpatnagar, New Delhi. Write a letter to your mother informing her about your performance in the recently held tests.**

**Q4) Write a paragraph in 80-100 words on one of the given topics: (5 Marks)**

**The Night before the Examination**

**Or**

**A Memorable Day of My Life**

### SECTION- C (Grammar)

**Q5. Do as directed:**

**(10 Marks)**

- a) What is the collective noun of : ants?
- b) What is the abstract noun of the adjective 'wise'?
- c) Identify common noun and proper noun in the given sentence: Mr. Ashok is our neighbour.
- d) Write C for countable noun or U for uncountable noun for :  
grass -
- e) State the plural of : piano
- f) What is the singular of : scissors?
- g) Write the opposite gender of : wizard.
- h) What is the masculine gender of : goose?
- i) Fill in the blanks with the correct degree of adjectives:  
\_\_\_\_\_ less \_\_\_\_\_
- j) Identify the verb and its object in the given sentence:  
He hit the ball hard.

### **SECTION –D: (Literature)**

**Q6. Answer the following questions: (2 x 5 = 10 Marks)**

- a) Where did the fox find the grapes? **(Sour Grapes)**
- b) How did the Bandar- Log steal Mowgli away?  
**(Mowgli and the Bandar – Log)**
- c) Why did the narrator decide to lie still? **(Gulliver in Lilliput)**
- d) Why was Uncle Ken put in charge of the narrator? What did his mother fear? **(At Sea with Uncle Ken)**
- e) When the speaker says ‘those stars will be shining forever’, what does he mean? **(Don’t Be Afraid of the Dark)**

**Q7. Answer the following questions with reference to the context: (2 x 5 = 10 Marks)**

- a) *We won't spend much time in this dump.*  
**(At Sea with Uncle Ken)**
  - (i) Who said these words and to whom?
  - (ii) What dump is being referred to here?
- b) *When I awoke, it was just daylight.* **(Gulliver in Lilliput)**
  - (i) Who said this line?
  - (ii) What strange thing has happened to him when he awoke?



c) *People walk upon their heads. (Topsy –Turvy Land)*

- (i) What do people generally walk on?
- (ii) Is walking an important exercise? Explain.

d) *In whose name, brother? ( Mowgli and the Bandar- Log)*

- (i) Who said these words to whom?
- (ii) Where was he when these words were said?

e) *The sun may be harsh, but moon light never...*

***(Don't be Afraid of the Dark)***

- (i) How can the sunshine be harsh?
- (ii) What are the qualities of moonlight?

**Q8. Answer the following questions in one or two words:**

**(1 x 4 = 4 Marks)**

- a) Where were Uncle Ken and the narrator going?
- b) Who is the poet of the poem 'Don't be Afraid of the Dark'?
- c) What was the height of the people of Lilliput?
- d) Did Mowgli enjoy the wild rush?

**Q9. Write the meaning of the following words: (1 X 6= 6 Marks)**

- a) snatch
- b) howled
- c) orator
- d) potion
- e) cease
- f) engrossed

5. \*

Files submitted:

---

This content is neither created nor endorsed by Google.

Google Forms

# Class- V Subject- Hindi ( Paper-1)

Date - 06-09-2021

Full Marks- 20

---

\* Required

1. Email \*

---

2. Name \*

---

3. Section \*

*Check all that apply.*

A

B

C

D

E

F

G

H

4. Roll No. \*

---

निर्देश : नीचे दिए गए प्रश्नों के लिए सही विकल्प का चयन करें :- (1×20=20)

5. 1. भारत ने किसका ज्ञान देकर सोए हुए विश्व को जगाया है? \*

1 point

*Mark only one oval.*

- I) वेदों का  
 II) रामायण का  
 III) महाभारत का  
 IV) गीता का

6. 2. बौने ब्राह्मण ने राजा बलि से दान में क्या माँगा? \*

1 point

*Mark only one oval.*

- I) पूरी धरती  
 II) तीन कदम धरती  
 III) पाँच कदम धरती  
 IV) पूरा आसमान

7. 3. डॉ. सुदर्शन का जन्म स्थल कहाँ है? \*

1 point

*Mark only one oval.*

- I) पठानकोट  
 II) सियालकोट  
 III) पालकोट  
 IV) रायकोट

8. 4. मीनार की छत से कितने गोले एक साथ नीचे गिराए गए? \*

1 point

*Mark only one oval.*

- I) तीन
- II) एक
- III) सात
- IV) दो

9. 5. लक्ष्मीदास बहुमूल्य कंगन राजा को क्यों देना चाहता था? \*

1 point

*Mark only one oval.*

- I) सम्मान पाने के लिए
- II) प्रसिद्धि पाने के लिए
- III) इनाम पाने के लिए
- IV) महल में काम पाने के लिए

10. 6. सिंहों के पैरों के नीचे क्या है? \*

1 point

*Mark only one oval.*

- I) चक्राकार
- II) गोलाकार
- III) आयताकार
- IV) त्रिकोण आकार

11. 7. 'गति' का सही अर्थ क्या होगा? \*

1 point

*Mark only one oval.*

- I) प्रवाह  
 II) आविष्कार  
 III) रफ़्तार  
 IV) समाचार

12. 8. कौन - सी भाषा भाषाओं की महारानी कहलाती है? \*

1 point

*Mark only one oval.*

- I) चीनी भाषा  
 II) हिंदी भाषा  
 III) उर्दू भाषा  
 IV) अंग्रेजी भाषा

13. 9. हिंदी वर्णमाला में कितने अयोगवाह चिह्न हैं? \*

1 point

*Mark only one oval.*

- I) दो  
 II) तीन  
 III) एक  
 IV) चार

14. 10. वर्णों का व्यवस्थित समूह क्या कहलाता है? \*

1 point

*Mark only one oval.*

- I) व्याकरण  
 II) शब्द  
 III) वर्णमाला  
 IV) वाक्य

15. 11. संस्कृत भाषा से थोड़ा परिवर्तित होकर हिंदी भाषा में कौन - सा शब्द प्रयुक्त होता है? \*

1 point

*Mark only one oval.*

- I) तत्सम  
 II) तद्भव  
 III) देशज  
 IV) विदेशी

16. 12. शब्दों को कितने आधार पर बाँटा गया है? \*

1 point

*Mark only one oval.*

- I) तीन  
 II) दो  
 III) पाँच  
 IV) चार

17. 13. जातिवाचक संज्ञा के अंतर्गत कौन-से दो भेद आते हैं? \*

1 point

*Mark only one oval.*

- I) व्यक्तिवाचक और द्रव्यवाचक
- II) गुणवाचक और समूहवाचक
- III) द्रव्यवाचक और समूहवाचक
- IV) व्यक्तिवाचक और गुणवाचक

18. 14. समूहवाचक संज्ञा का सही उदाहरण क्या होगा ? \*

1 point

*Mark only one oval.*

- I) बुढ़ापा, सुंदरता
- II) ताजमहल, हिमालय
- III) सोना, पेट्रोल
- IV) बाल, मेला

19. 15. नित्य स्त्रीलिंग शब्द है \_\_\_\_ । \*

1 point

*Mark only one oval.*

- I) गिलहरी
- II) लड़की
- III) रानी
- IV) मोरनी



20. 16. 'मैं' का बहुवचन रूप क्या होगा? \*

1 point

*Mark only one oval.*

- I) आप  
 II) मैंने  
 III) हम  
 IV) हमारे

21. 17. सर्वनाम के कितने भेद होते हैं? \*

1 point

*Mark only one oval.*

- I) पाँच  
 II) छः  
 III) चार  
 IV) सात

22. 18. निजवाचक सर्वनाम शब्दों का प्रयोग कर्ता किसके लिए करता है? \*

1 point

*Mark only one oval.*

- I) सबके लिए  
 II) दूसरे व्यक्ति के लिए  
 III) हमारे लिए  
 IV) अपने आप के लिए

23. 19. हिंदी साहित्य के प्रसिद्ध लेखक के नाम का चयन करें। \*

1 point

*Mark only one oval.*

- I) मुंशी प्रेमचंद  
 II) मुंशी ध्यानचंद  
 III) मुंशी रामचंद्र  
 IV) मुंशी जानचंद

24. 20. शुद्ध वर्तनी का चयन कीजिए। \*

1 point

*Mark only one oval.*

- I) किरपा  
 II) क्रिपा  
 III) कृपा  
 IV) क्रपा

---

This content is neither created nor endorsed by Google.

Google Forms

# Class- V Subject- Hindi ( Paper-2)

Date - 06-09-2021

Full Marks- 60

---

\* Required

1. Email \*

---

2. Name \*

---

3. Section \*

*Check all that apply.*

A

B

C

D

E

F

G

H

4. Roll No. \*

---

निर्देश :- दिए गए निर्देशों के अनुसार कार्य करें:-

1. एक शब्द में प्रश्नों के उत्तर लिखें:- (1×10=10)

- I) भारत के वीर किससे खेला करते हैं ?
- II) ओणम के त्योहार पर रंगोलियाँ किन चीजों से बनाई जाती हैं?
- III) किसका मन बादल को पाने के लिए अधीर हो उठा?
- IV) गैलीलियो किस विश्वविद्यालय के प्राध्यापक बन गए?
- V) रैदास वास्तव में कौन थे?
- VI) जापानी लोग भारत देश को किस नाम से पुकारते हैं?
- VII) सारनाथ कहाँ स्थित है?
- VIII) ओणम के समय केरल का मौसम कैसा होता है?
- IX) सिहों के समूह को कहाँ से लिया गया है?
- X) रैदास किसका सच्चा भक्त था?

2. रिक्त स्थानों की पूर्ति करें:- (1×6=6)

I) सड़क के सभी नियम \_\_\_\_\_ भाषा पर आधारित होते हैं।

II) स्वतंत्र रूप से उच्चारण किया जाने वाला वर्ण \_\_\_\_\_ कहलाता है।

III) 'मक्खी' शब्द नित्य \_\_\_\_\_ शब्द है।

IV) वे शब्द जो अन्य देशों की भाषाओं से लिए गए हैं, \_\_\_\_\_ शब्द कहलाते हैं।

V) गुण, विशेषता, स्थिति व दशा का बोध कराने वाले शब्द \_\_\_\_\_ संज्ञा कहलाते हैं।

VI) आदरार्थक बहुवचन का प्रयोग किसी को \_\_\_\_\_ देने के लिए किया जाता है।

3. दिए गए शब्दों के दो-दो पर्यायवाची शब्द लिखें:- (1×2=2)

(I) आँख (II) अनुपम

4. जातिवाचक संज्ञा से भाववाचक संज्ञा बनाएँ: (1×2=2)

(I) मित्र (II) लड़का

## 5. अपठित गद्यांश

(5)

परिश्रम वह गुण है, जिससे मनुष्य सफलता की ऊँचाइयों पर अपने - आप चढ़ता चला जाता है। यह परिश्रम की कसौटी पर कसा गया सत्य है। चींटी हमें अनुशासन और परिश्रम का पाठ पढ़ाती है। अतः इसकी कर्मठता को समझ पाना बहुत कठिन है। परिश्रम के कारण ही मनुष्य एवरेस्ट की चोटी पर चढ़ पाया, अंतरिक्ष की यात्रा कर पाया। परिश्रम का रास्ता फूलों का नहीं बल्कि काँटो भरा माना गया है। दृढ़ संकल्प के बिना इस राह पर चलना असंभव होता है। निरंतर परिश्रम ही सफलता का सही मार्ग है। महान विजेता नेपोलियन ने दृढ़ निश्चय और परिश्रम से ही पूरी दुनिया पर शासन किया। अतः सतत परिश्रम कर साधारण व्यक्ति भी असाधारण सफलता को प्राप्त कर अपने सुनहरे भविष्य की नींव तैयार करता है।

उपर्युक्त गद्यांश को पढ़कर उत्तर लिखें:-

- I) कौन - सा गुण मनुष्य को ऊँचाइयों पर चढ़ाता है?
- II) चींटी हमें कौन-सा पाठ पढ़ाती है?
- III) परिश्रम का रास्ता कैसा माना गया है?
- IV) साधारण व्यक्ति असाधारण सफलता प्राप्त कर क्या करता है?
- V) विलोम शब्द लिखें:-
  - (क) सफलता (ख) गुण

6. एक वाक्य में प्रश्नों के उत्तर लिखें:- ( वाक्य में उत्तर लिखना अनिवार्य है।)।

(1×8=8)

- I) कौन-सा देश सबको सहारा देता है?
- II) हमारा भारत देश कैसा है?
- III) ओणम भारत के किस राज्य का त्योहार है?
- IV) राजा बलि पृथ्वी छोड़कर कहाँ चले गए?
- V) भारत का राष्ट्रीय जल पशु किसे माना गया है?
- VI) भारत के उत्तर दिशा में किसकी श्रृंखला है?
- VII) गैलीलियो का जन्म किस शहर में हुआ था?
- VIII) हार की जीत कहानी के लेखक का नाम क्या है?

7. दीर्घ उत्तरीय प्रश्नों के उत्तर लिखें:-

(2×2=4)

- I) खड्गसिंह बाबा भारती के पास क्यों गया था?
- II) गैलीलियो ने ग्रहों का अध्ययन कैसे किया?

8. किसने - किससे कहा? लिखें:-

(1×5=5)

I) "उसकी चाल तुम्हारा मन मोह लेगी।"

II) "अब कोई गरीबों की मदद करने से मुँह नहीं मोड़ेगा।"

III) "ऐसा घोड़ा तो मेरे पास होना चाहिए था।"

IV) "गरीब रैदास इस कीमती कंगन का क्या करेगा?"

V) "कृपया मेरी ओर से यह सुपारी गंगा मैया को भेंट दे देना।"

9. निश्चयवाचक व अनिश्चयवाचक सर्वनाम में उदाहरण सहित अंतर स्पष्ट करें।

(3)

10. नीचे दिए गए शब्दों से वाक्य बनाएँ:-

(1×3=3)

(I) प्रसिद्ध (II) स्वभाव (III) राष्ट्रीय

11. मूल्यपरक प्रश्न:-

(2)

बारिश के दिनों में चारों तरफ पानी और गंदगी फैली होती है। जिसका बुरा असर हमारे स्वास्थ्य पर पड़ता है। इस स्थिति में हमें स्वस्थ रहने के लिए क्या उपाय करना चाहिए? दो वाक्य में उत्तर लिखें।



12. किसी एक विषय पर पत्र लिखें:- (5)

समय का महत्व बताते हुए छोटे भाई को पत्र लिखें।

अथवा

कक्षा में होने वाली चोरी से अवगत कराते हुए प्रधानाचार्य महोदय को पत्र लिखें।

13. किसी एक विषय पर 150 शब्दों में अनुच्छेद लिखें:- (5)

I) लाल बहादुर शास्त्री

II) शिष्टाचार

III) प्रातः कालीन सैर

5. \*

Files submitted:

---

This content is neither created nor endorsed by Google.

Google Forms

# Class- V Subject- Maths ( Paper-1)

Date - 15-09-2021

Full Marks- 20

\* Required

1. Email \*

---

2. Name \*

---

3. Section \*

*Check all that apply.*

A

B

C

D

E

F

G

H

4. Roll No. \*

---

Choose the correct option.

5. 1. The place value and face value of a digit are always equal at the. \*

1 point

*Mark only one oval.*

- a) Ones place
- b) Tens place
- c) Hundreds place
- d) never

6. 2.  $XXX + XVI + VII = \underline{\hspace{2cm}} ? *$

1 point

*Mark only one oval.*

- a) 52
- b) 53
- c) 51
- d) 50

7. 3.  $60 - 48 \div 6 \times 4 + 8 = \underline{\hspace{2cm}} ? *$

1 point

*Mark only one oval.*

- a) 36
- b) 40
- c) 45
- d) 32

8. 4. Which of the following number is not divisible by 3? \*

1 point

*Mark only one oval.*

a) 78421

b) 16701

c) 3162

d) 3333

9. 5. Which fraction is greater than  $\frac{1}{2}$ ? \*

1 point

*Mark only one oval.*

a)  $\frac{1}{4}$

b)  $\frac{2}{7}$

c)  $\frac{3}{8}$

d)  $\frac{3}{4}$

10. 6. \*

1 point

$$\frac{1}{3} + \frac{1}{6} = \underline{\hspace{2cm}}$$

a)  $\frac{2}{9}$

b)  $\frac{1}{18}$

c)  $\frac{1}{2}$

d) 1

Mark only one oval.

 a) b) c) d)

11. 7. \*

1 point

What is the reciprocal of  $6\frac{1}{2}$  ?

a)  $1\frac{2}{3}$

b)  $\frac{2}{7}$

c)  $\frac{2}{13}$

d) 1

Mark only one oval.

 a) b) c) d)

12. 8. \*

1 point

What is the decimal for  $\frac{326}{10}$  ?

Mark only one oval.

- a) 32.6
- b) 3.26
- c) 0.326
- d) 0.0326

13. 9. The number 6.37 correct to the nearest one. \*

1 point

Mark only one oval.

- a) 0.63
- b) 6.30
- c) 63.0
- d) 6.00

14. 10. Convert 1 mm into m \*

1 point

Mark only one oval.

- a) 0.001m
- b) 0.01m
- c) 0.1 m
- d) 10m

15. 11. How many seconds are there in a year? \*

1 point

*Mark only one oval.*

- a) 365X60X60
- b) 365X24X60
- c) 365X24X360
- d) 365X24X3600

16. 12. 8:15 PM in 24 hours clock is \_\_\_\_\_. \*

1 point

*Mark only one oval.*

- a) 1815 hours
- b) 2015 hours
- c) 0815 hours
- d) 0815 PM

17. 13. 6 KM = \_\_\_\_\_cm. \*

1 point

*Mark only one oval.*

- a) 6000
- b) 60000
- c) 600000
- d) 6000000



18. 14. Round off 5351 to the nearest hundred. \*

1 point

*Mark only one oval.*

a) 5300

b) 5200

c) 5400

d) 5100

19. 15.  $8.76 + 9.58 = \underline{\hspace{2cm}}$  \*

1 point

*Mark only one oval.*

a) 19.34

b) 17.34

c) 18.34

d) 1.834

20. 16. \*

1 point

$$5 \div \frac{1}{5} = \underline{\hspace{2cm}}$$

a) 25

b)  $\frac{5}{5}$ 

c) 5

d) 1

*Mark only one oval.*

 a) b) c) d)

21. 17. Express 437 in Roman numerals. \*

1 point

*Mark only one oval.*

 a) CDXXVIII b) DCXXVIII c) CDXXXVII d) CDXXVIII

22. 18. The place value of 6 in the numeral 62,521,437 is \_\_\_\_\_ \*

1 point

*Mark only one oval.*

- a) Sixty million
- b) Six million
- c) Sixty Lakh
- d) Six hundred thousand

23. 19. \*

1 point

A recipe needs  $\frac{2}{5}$  cup of milk and  $\frac{1}{3}$  cup of cream. How much more milk than cream is required?

- a)  $\frac{1}{15}$  cup
- b) 15 cups
- c)  $\frac{1}{5}$  cup
- d) none of these

*Mark only one oval.*

- a)
- b)
- c)
- d)

24.  $20.3 \times 0.3 \times 0.03 \times 30 = \underline{\hspace{2cm}}$  \*

1 point

*Mark only one oval.*

- a) 0.81
- b) 0.081
- c) 0.0081
- d) 8.1

---

This content is neither created nor endorsed by Google.

Google Forms

# Class- V Subject- Maths ( Paper-2)

Date - 15-09-2021

Full Marks- 60

---

\* Required

1. Email \*

---

2. Name \*

---

3. Section \*

*Check all that apply.*

A

B

C

D

E

F

G

H

4. Roll No. \*

---

**I. Fill in the blanks.****(1X10=10)**

1. 1 crore = \_\_\_\_\_ millions.
2. \_\_\_\_\_ is neither prime nor composite.
3. The place of 5 in 8.35 is \_\_\_\_\_.
4. 1 mg = \_\_\_\_\_ g.
5.  $\frac{35}{65}$  expressed in lowest terms is \_\_\_\_\_.
6.  $406 \times (107 + 873) = (406 \times 107) + (406 \times \underline{\hspace{2cm}})$ .
7. Mixed numeral for the fraction  $\frac{39}{7}$  is \_\_\_\_\_.
8. Multiplicative inverse of  $\frac{1}{7}$  is \_\_\_\_\_.
9.  $\frac{2}{3}$  of a year = \_\_\_\_\_ months.
10. 7200 seconds = \_\_\_\_\_ hours.

**II. State True or False.****(1X5=5)**

1.  $\frac{6}{6}$  is a proper fraction. \_\_\_\_\_
2. Dividend is always greater than the divisor. \_\_\_\_\_
3. 9.42 and 2.49 are like decimals. \_\_\_\_\_
4. 4 rounded off to the nearest ten is 0. \_\_\_\_\_
5. To convert Kg into dag, we multiply by 10. \_\_\_\_\_

**III. Answer in one word. (1X5=5)**

1. Prime numbers which differ by 2 are called \_\_\_\_\_.
2. Which property of multiplication says that the product of two numbers does not change when the order of the numbers is changed ? \_\_\_\_\_.
3. Fractions with different denominators are called \_\_\_\_\_.
4. In BODMAS 'B' stands for \_\_\_\_\_.
5. The eighth place in Indian number system is called \_\_\_\_\_.

**IV. Do as directed. (2X6=12)**

1. Subtract 35 KL 267L from 50 KL.
2. Divide 30.6 by 9.
3. Find the HCF of 52 and 78.
4. Convert 5 years 125 days into days.
5. Write the number name of 569,302,150.
6. Write the prime factorisation of 150 using factor tree.

**V. Solve.****(3X4=12)**

1. The sum of two numbers is 95509080. If one of the number is 5824562, find the other.
2. Arrange in ascending order.  
2.69, 1.9, 2.6, 2.09, 3.06, 5.538
3. Find  $16\frac{2}{3} \div 2\frac{2}{9}$ .
4. The population of an Indian state is 38593948. Write the population.
  - a. To the nearest crore.
  - b. To the nearest thousand.
  - c. To the nearest lakhs.

**VI. Solve.****(4X4=16)**

1. Three wires of lengths 36 m, 72 m and 63 m are to be cut into small pieces of equal lengths. What will be the maximum length of each piece?
2. Simplify.  
 $40 - [12 + \{16 - (12 \div 3)\}]$
3. The cost of 144 quintals of wheat is ₹ 3845952. Find the cost of one quintal of wheat.
4. Subtract the sum of  $5\frac{1}{2}$  and  $6\frac{3}{8}$  from the sum of  $7\frac{3}{4}$  and  $6\frac{1}{2}$ .

5. \*

Files submitted:



# Google Forms

# Class- V Subject- G. Science ( Paper-1)

Date - 08-09-2021

Full Marks- 20

**\* Required**

1. Email \*

---

2. Name \*

---

3. Section \*

*Check all that apply.* A B C D E F G H

4. Roll No. \*

---

Choose the correct option.

5. 1. Which of the following is the longest bone of the human body? \*

1 point

*Mark only one oval.*

- a) humerus
- b) spine
- c) sternum
- d) none of these

6. 2. Sensory nerves carry impulses from: \*

1 point

*Mark only one oval.*

- a) sense organs to brain
- b) spinal cord to brain
- c) brain to sense organs
- d) all of these

7. 3. \_\_\_\_\_ is the way to protect the crop from weeds and pests by spraying chemicals on them. \*

1 point

*Mark only one oval.*

- a) storing
- b) crop protection
- c) watering
- d) both a and c

8. 4. Which animal breathes through its moist skin? \*

1 point

*Mark only one oval.*

- a) yak
- b) rat
- c) earth worm
- d) cockroach

9. 5. What should we not do in case of fracture? \*

1 point

*Mark only one oval.*

- a) rest the part
- b) try to move that part
- c) consult a doctor
- d) none of these

10. 6. Balance of the body is controlled by: \*

1 point

*Mark only one oval.*

- a) the cerebrum
- b) the cerebellum
- c) the medulla
- d) the spinal cord

11. 7. Pea and wheat are examples of \_\_\_\_\_ crops: \*

1 point

*Mark only one oval.*

- a) kharif
- b) rabi
- c) both a and b
- d) none of these

12. 8. The seeds of madar are dispersed by: \*

1 point

*Mark only one oval.*

- a) water
- b) animals
- c) explosion
- d) wind

13. 9. Fire can be put out by: \*

1 point

*Mark only one oval.*

- a) cutting off the supply of air
- b) cooling the burning substance
- c) using the fire extinguisher
- d) all of these

14. 10. The process in which a part of the stem containing a bud is cut and planted in the soil: \*

1 point

*Mark only one oval.*

- a) grafting
- b) layering
- c) stem cutting
- d) none of these

15. 11. Which of the following statements is true? \*

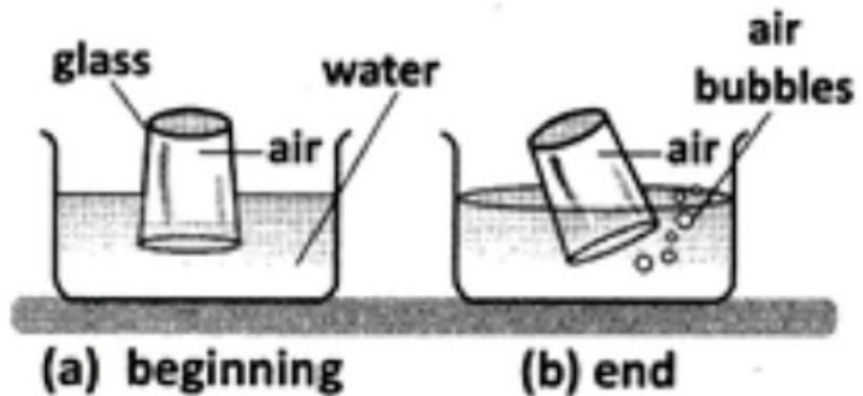
1 point

- (i) chlorinated water is made by distillation
- (ii) chlorination makes the water safe for drinking
- (iii) water must be boiled for at least 10 minutes to remove germs.
- (iv) alum is used to increase the rate of sedimentation

*Mark only one oval.*

- a) (i),(ii) and (iii)
- b) (ii),(iii) and (iv)
- c) (iii) and (iv)
- d) (i),(ii) and (iv)

16. 12. An experiment was carried out by a group of students and their results are shown in the given figure: \*



**Choose the correct statement related to their result:**

*Mark only one oval.*

- a) the air present in the water formed bubbles.
- b) air inside the glass escaped out in the form of bubbles.
- c) air in the trough escaped as air bubbles.
- d) air in the surroundings formed air bubbles.

17. 13. Which of the following is the purpose of migration in animals? \*

1 point

*Mark only one oval.*

- a) to search food
- b) to escape from harsh weather
- c) to reproduce
- d) all of these

18. 14. A child looks weak and fatigued all the times. The doctor suggests a blood test. What is the doctor trying to figure out? \* 1 point

*Mark only one oval.*

- a) He wants to know the child's haemoglobin level
- b) He wants to know how anaemic the child is and what is the cause of this anaemia.
- c) both a and b
- d) none of these

19. 15. A person is suffering from inability to see in poor light or at night. He should include more of \_\_\_\_\_ in his diet. \* 1 point

*Mark only one oval.*

- a) red capsicum
- b) rice
- c) oil
- d) none of these

20. 16. The scar on the surface of a seed marking its point of attachment to the seed stalk: \* 1 point

*Mark only one oval.*

- a) hilum
- b) seed coat
- c) plumule
- d) cotyledon



21. 17. Which type of joint allows the nodding of our head? \*

1 point

*Mark only one oval.*

- a) pivot
- b) hinge
- c) ball and socket
- d) gliding

22. 18. Air exerts pressure can be shown by which of the following examples? \*

1 point

*Mark only one oval.*

- a) adding chlorine to water
- b) blowing a balloon
- c) separating sand from water by sedimentation
- d) none of these

23. 19. Which animal shows jet propulsion? \*


1 point

*Mark only one oval.*

- a) turtle
- b) cuttle fish
- c) zebra
- d) none of these

24. 20. In what ways are these animals similar? \*

1 point



- (i) They have flippers to help them move in water.
- (ii) They are amphibians.
- (iii) They have lungs to breathe in oxygen.

Mark only one oval.

- a) only (i) and (iii)
- b) only (ii) and (iii)
- c) only (i) and (ii)
- d) (i),(ii) and (iii)

---

This content is neither created nor endorsed by Google.

Google Forms

# Class- V Subject- G. Science ( Paper-2)

Date - 08-09-2021

Full Marks- 60

\* Required

1. Email \*

---

2. Name \*

---

3. Section \*

*Check all that apply.*

A

B

C

D

E

F

G

H

4. Roll No. \*

---

**1. Define****[2X3=6]**

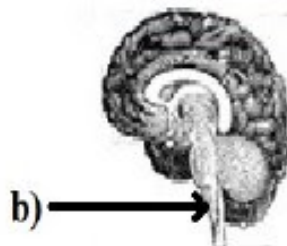
- i. Cerebellum      ii. Distillation      iii. Nutrients

**2. Answer these questions briefly -****[2X4=8]**

- i. Write any two adaptations of aquatic animals.  
ii. What is germination ?  
iii. How does the ozone layer protect the Earth ?  
iv. Write any two applications of filtration in daily life.

**3. Answer these questions in detail -****[3X3=9]**

- i. Name and explain the different types of nerves.  
ii. Write any three safety rules to be followed to prevent fire accidents.  
iii. Name and state one function of each of the following parts labelled as - (a), (b) and (c) in the given figures:-



**4. Give Reason -****[2X2=4]**

- i. We at once remove our hand on touching a hot pan.
- ii. A person whose clothes catch fire should not run around.

**5. Differentiate between the following terms -****[2X2=4]**

- i. Communicable and non-communicable diseases.
- ii. Rabi and kharif crops.

**6. Answer in a sentence -****[1X5=5]**

- i. What is sternum ?
- ii. What is moulting ?
- iii. What are pests ?
- iv. What is hygiene ?
- v. State a first aid to give relief from bee sting.

**7. Draw and label a diagram showing the process of filtration: -****[4]**

**8. Name the following: (1X4=4)**

- a) Unwanted plants growing among the crops:  
\_\_\_\_\_
- b) The largest habitat of the world: \_\_\_\_\_
- c) The disease caused due to the deficiency of Iodine :  
\_\_\_\_\_
- d) A tough, elastic tissue which mostly makes up the skeleton of a baby: \_\_\_\_\_

**9. Fill in the blanks: (1X3=3)**

- a) The transparent dome-shaped part which covers the front portion of the eye is called \_\_\_\_\_.
- b) A solution of \_\_\_\_\_ in water provides relief from burning sensation.
- c) The layer in which space shuttles fly is called \_\_\_\_\_.

**10. Rewrite the complete sentence after changing the underlined word: (1X4=4)**

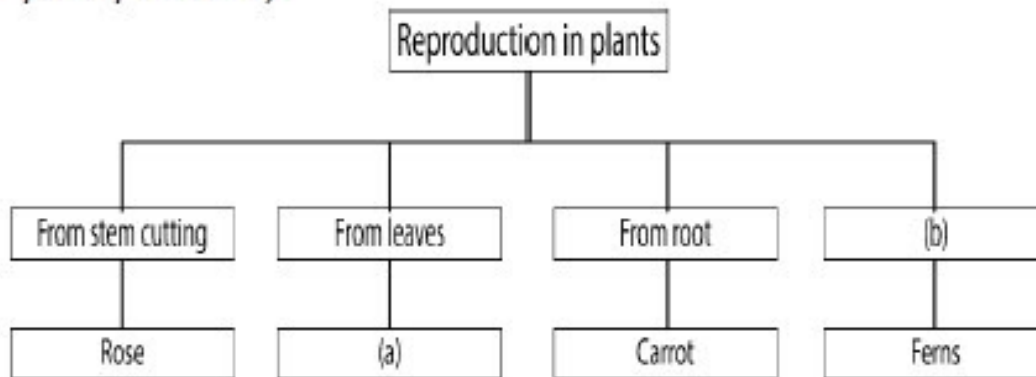
- a) Oxygen is the most abundant gas in the atmosphere.
- b) Iron deficiency causes kwashiorkor.
- c) Muscles are attached to the bones with the help of tough cords called ligament.
- d) A fracture is an injury caused due to sudden twisting of joints that causes swelling and pain.

**11. Complete the series: (1X4=4)**

- a) plants : stomata :: prawn : \_\_\_\_\_  
 b) wrist : \_\_\_\_\_ :: shoulder : ball and socket joint  
 c) vitamin-D : rickets :: vitamin-C : \_\_\_\_\_  
 d) money plant : stem cutting :: apple : \_\_\_\_\_

**12. Given below is a flowchart related to the reproduction in plants: (1X2=2)**

Study the same and label the guidelines – (a) and (b)  
 (Do not copy the flowchart, write only the answers in the space provided)



(a) \_\_\_\_\_

(b) \_\_\_\_\_

**13. Who am I?: (1X3=3)**

- a) I am the gas which is needed for burning:  
 \_\_\_\_\_  
 b) I am a pigment that gives red colour to the human blood:  
 \_\_\_\_\_  
 c) I am the opening at the centre of iris, through which light enters the eye:  
 \_\_\_\_\_

5. \*

Files submitted:

This content is neither created nor endorsed by Google.

Google Forms



# Class- V Subject- S. Science ( Paper-1)

Date - 10-09-2021

Full Marks- 20

\* Required

1. Email \*

---

2. Name \*

---

3. Section \*

*Check all that apply.*

A

B

C

D

E

F

G

H

4. Roll No. \*

---

Choose the correct option.

5. 1.Present Secretary General of UN, Antonio Guterres belongs to this country- 1 point

\*

*Mark only one oval.*

- a. Austria
- b. Norway
- c. Sweden
- d. Portugal

6. 2. The legislature of the world's largest country is known as- \* 1 point

*Mark only one oval.*

- a. DIET
- b. Federal Assembly
- c. National Congress
- d. Parliament

7. 3.The wettest place in India is- \* 1 point

*Mark only one oval.*

- a. Jaisalmer
- b. Shillong
- c. Mawsynram
- d. Mawlynnong

8. 4.Under which organ do most UN specialised agencies work- \*

1 point

*Mark only one oval.*

- a. Security Council
- b.Trusteeship Council
- c. Economic and Social Council
- d.International Court of Justice

9. 5.This language is not included in the official languages of the UN. \*

1 point

*Mark only one oval.*

- a. French
- b. German
- c. Spanish
- d. Arabic

10. 6.He is the present chief Justice of India. \*

1 point

*Mark only one oval.*

- a. Sharad Arvind Bobde
- b.N.V Ramana
- c. Om Birla
- d. M.Venkaiah Naidu

11. 7. This is an example of intermediate directions. \*

1 point

*Mark only one oval.*

- a. north
- b. south
- c. east
- d. south-west

12. 8. This country is not among the member of the Security Council. \*

1 point

*Mark only one oval.*

- a. Russia
- b. USA
- c. United Kingdom
- d. Germany

13. 9. The number of elected members in Rajya Sabha \*

1 point

*Mark only one oval.*

- a. 248
- b. 250
- c. 232
- d. 238

14. 10. Due to the mainland being covered with ice, settlements in Greenland are found in the – \*

1 point

*Mark only one oval.*

- a. forest areas
- b. river banks
- c. coastal areas
- d. none of these

15. 11. The part of the Earth to the south of the Equator is called- \*

1 point

*Mark only one oval.*

- a. Southern Hemisphere
- b. Western Hemisphere
- c. Northern Hemisphere
- d. Eastern Hemisphere

16. 12. The orbit of the Earth is- \*

1 point

*Mark only one oval.*

- a. circular
- b. round
- c. spheroid
- d. oval

17. 13.The degree of Tropic of Cancer is – \*

1 point

*Mark only one oval.*

a. 23 1/2° N

b. 23 1/2° S

c. 66 1/2° S

d. 66 1/2° N

18. 14. The judges of the Supreme Court are appointed by the- \*

1 point

*Mark only one oval.*

a. President

b. Speaker

c. Prime Minister

d. Governor

19. 15.Time taken by the Earth to complete one revolution- \*

1 point

*Mark only one oval.*

a. 364 days

b. 365 days and 6 hrs

c. 366 days

d. 364 days and 6 hrs

20. 16.To go from one place to another on land, the Inuits use a – \*

1 point

*Mark only one oval.*

- a. umiak
- b. motor boat
- c. sledge
- d. kayaks

21. 17. The first person who published a collection of maps was- \*

1 point

*Mark only one oval.*

- a. Nicolaus Copernicus
- b. Ferdinand Magellan
- c. Gerardus Mercator
- d. Georg Glockendon

22. 18. First woman President of India- \*

1 point

*Mark only one oval.*

- a. Sumitra Mahajan
- b. Sarojini Naidu
- c. Indira Gandhi
- d. Pratibha Patil

23. 19.The Sun's rays fall directly on the areas near the – \*

1 point

*Mark only one oval.*

- a. Equator
- b. Arctic Circle
- c. Antarctic Circle
- d. North Pole

24. 20. Tropic of Cancer doesn't passes through this state- \*

1 point

*Mark only one oval.*

- a. Chhattisgarh
- b. Jharkhand
- c. Tripura
- d. Karnataka

---

This content is neither created nor endorsed by Google.

Google Forms



# Class- V Subject- S. Science ( Paper-2)

Date - 10-09-2021

Full Marks- 60

**\* Required**

1. Email \*

---

2. Name \*

---

3. Section \*

*Check all that apply.* A B C D E F G H

4. Roll No. \*

---

**A. FIB****[1x5=5]**

1. One of the earliest surviving globes is the \_\_\_\_\_ .
2. The \_\_\_\_\_ is the highest judicial body in our country.
3. The members of the Lok Sabha, the Rajya Sabha and the state legislative assembly elect the \_\_\_\_\_.
4. The Secretary- General is the head of the \_\_\_\_\_ in the United Nations.
5. The general assembly meets every year in \_\_\_\_\_ (month) to discuss issues on peace and security.

**B. Name them:****[1x5=5]**

1. A political map shows: \_\_\_\_\_
2. A passenger ship which had hit an iceberg in 1912 : \_\_\_\_\_
3. Movement of the Earth on its axis: \_\_\_\_\_
4. Father of Indian Constitution: \_\_\_\_\_
5. The Strait which separates Greenland from Iceland : \_\_\_\_\_

---

**C. Write the full form of the given abbreviations****[1X6=6]**

1. UNICEF:
2. FAO:
3. ILO:
4. WHO:
5. MLA:
6. CJI:

**D. Define****[1x8=8]**

1. Compass
2. Pole
3. Symbols
4. Altitude
5. Harpoon
6. Political Party
7. Human right
8. Veto power

**E. Answer in brief:****[2x5=10]**

1. Write any two objectives of UN.
2. Write two differences between Lok Sabha and Rajya Sabha.
3. How can we locate a place on the globe?
4. Why do places near the Equator receive more heat than places near the poles?
5. How are days and nights caused?

**F. Answers in detail (in points): [3×4=12]**

1. How do winds influence the climate of a place?
2. How is the Central Government formed?
3. Write the achievements of the UN.
4. Write five sentences on the climate of Greenland.

**G. Answer in a sentence. [1×10=10]**

1. Where are the headquarters of the United Nations?
2. Name a country through which the Arctic Circle pass ?
3. Which line is taken as the starting line for all other meridians?
4. What is a globe?
5. What does the word Meridian mean?
6. How many days are there in a leap year?
7. What does disarmament mean?
8. Which ministry in India takes care of the education policies ?
9. Name any two official languages of the UN.
10. Which agency of UN protects historical and cultural sites all over the world?

**H. Diagram: Draw and label the heat zones and show the important latitudes also. [4]**

5. \*

Files submitted:

# Google Forms

# Class- V Subject- French ( Paper-1)

Date - 18-09-2021

Full Marks- 10

---

\* Required

1. Email \*

---

2. Name \*

---

3. Section \*

*Check all that apply.*

A

B

C

D

E

F

G

H

4. Roll No. \*

---

Choose the correct option.

5. 1. Ce sont \_\_\_\_\_ stylos. \*

1 point

*Mark only one oval.*

- a) Une
- b) Un
- c) None
- d) Des

6. 2. Il est \_\_\_\_\_ garçon. \*

1 point

*Mark only one oval.*

- a) Une
- b) Des
- c) Un
- d) None

7. 3. Tu \_\_\_\_\_ des stylos. \*

1 point

*Mark only one oval.*

- a) As
- b) Avons
- c) Avez
- d) Ont

8. 4. Il \_\_\_\_\_ une gomme. \*

1 point

*Mark only one oval.*

- a) Ont
- b) A
- c) Avons
- d) As

9. 5. Nous \_\_\_\_\_ des cahiers.. \*

1 point

*Mark only one oval.*

- a) Avons
- b) Avez
- c) Ont
- d) A

10. 6. La fille est \_\_\_\_\_ \*

1 point

*Mark only one oval.*

- a) Grand
- b) Grands
- c) Grande
- d) Grandes



11. 7. Comment ça va ? \*

1 point

*Mark only one oval.*

- a) Ça va bien
- b) Je m'appelle rohan
- c) Je suis indien.
- d) J'ai dix ans

12. 8. What do we call " Thank you " in french. \*

1 point

*Mark only one oval.*

- a) Messi
- b) Merci
- c) Au revoir
- d) À demain

13. 9. What do we call " Good evening " in french. \*

1 point

*Mark only one oval.*

- a) Bon matin
- b) Bonne nuit
- c) Bon soir
- d) Bon après midi

14. 10. Retrouvez le mot : “ obn amitn” \*

1 point

*Mark only one oval.*

- a) Bon matin
  - b) Bonjour
  - c) Au revoir
  - d) None
- 

This content is neither created nor endorsed by Google.

Google Forms

# Class- V Subject- French ( Paper-2)

Date - 18-09-2021

Full Marks- 30

---

\* Required

1. Email \*

---

2. Name \*

---

3. Section \*

*Check all that apply.*

A

B

C

D

E

F

G

H

4. Roll No. \*

---

**1. Répondez aux questions : ( 3 )**

- a) Comment ça va?
- b) Quelle est la capitale de France ?
- c) Combien de couleurs le drapeau français ?
- d) En quel jour nous célébrons notre fête nationale ?
- e) Quelle est votre fruit favori ?
- f) Quelle est votre légume favori ?

**2. Écrivez les noms des accents utilisés avec les mots: ( 4 )**

- a) Thé –
- b) Père –
- c) Éléphant –
- d) Çava –
- e) Noël –
- f) Gâteau –
- g) Règle –
- h) Héroïne-

**3. Écrivez les nombres français ( 20 – 30 ). ( 5 )****4. Écrivez cinq fruits et cinq légumes en français. ( 5 )**

**5. Mettez au féminin. ( 2½ )**

- a) Il est intelligent.
- b) Ils sont gros.
- c) Il est grand.
- d) Il est joli.
- e) Ils sont petits.

**6. Donnez le contraire. ( 2½ )**

- a) Bon-
- b) Grand –
- c) Belle –
- d) Bon –
- e) Un homme –

**7. Présentez – vous en 5 lignes ( 5 )****8. Écrivez conjugaison le verbe “ Avoir “. ( 3 )**

- 1) Je \_\_\_\_\_
- 2) Tu \_\_\_\_\_
- 3) Il /Elle \_\_\_\_\_
- 4) Nous \_\_\_\_\_
- 5) Vous \_\_\_\_\_
- 6) Ils/ Elles \_\_\_\_\_

5. \*

Files submitted:

This content is neither created nor endorsed by Google.

Google Forms

# Class- V Subject- German ( Paper-1)

Date - 18-09-2021

Full Marks- 10

---

\* Required

1. Email \*

---

2. Name \*

---

3. Section \*

*Check all that apply.*

A

B

C

D

E

F

G

H

4. Roll No. \*

---

Fill the blanks with correct form of Verb: {1x10 =10}

5. 1. Wie \_\_\_\_\_ du? \*

1 point

*Mark only one oval.*

- a. heißt
- b. heiÙe
- c. heißen
- d. heißet

6. 2. Ich \_\_\_\_\_ Martin. \*

1 point

*Mark only one oval.*

- a. heißt
- b. heiÙe
- c. heißen
- d. heißet

7. 3. Er \_\_\_\_\_ Stefan. \*

1 point

*Mark only one oval.*

- a. heißen
- b. heiÙe
- c. heißt
- d. heißst



8. 4. Ich \_\_\_\_\_ Deutsch. \*

1 point

*Mark only one oval.*

a.lernen

b.lernst

c.lerne

d.lernt

9. 5. Was \_\_\_\_\_ du? \*

1 point

*Mark only one oval.*

a. lernen

b.lernt

c.lerne

d.lernst

10. 6. Ich \_\_\_\_\_ Schokolade. \*

1 point

*Mark only one oval.*

a.möchtest

b. möchte

c. möchten

d. möchten

11. 7. Was \_\_\_\_\_ du? \*

1 point

*Mark only one oval.*

- a. möchtest
- b. möchte
- c. möchtet
- d. möchten

12. 8. \_\_\_\_\_ Sie Shokolade? \*

1 point

*Mark only one oval.*

- a. hast
- b. hat
- c. habe
- d. haben

13. 9. \_\_\_\_\_ Sie in Ranchi? \*

1 point

*Mark only one oval.*

- a. wohne
- b. wohnen
- c. wohnst
- d. wohnt

14. 10. Ja, Ich \_\_\_\_\_ in Ranchi. \*

1 point

*Mark only one oval.*

- a. wohnt
- b. wohnst
- c. wohnen
- d. wohne

---

This content is neither created nor endorsed by Google.

Google Forms

# Class- V Subject- German ( Paper-2)

Date - 18-09-2021

Full Marks- 30

---

\* Required

1. Email \*

---

2. Name \*

---

3. Section \*

*Check all that apply.*

A

B

C

D

E

F

G

H

4. Roll No. \*

---

- 1. Schreib sich vorstellen:(self introduction) ( 5 )**
- 2. Schreib in Englisch:(Write in English) ( 0.5x10 =5 )**
- Wie heißt du?
  - Ist das dein Fußball?
  - Ich lerne Deutsch an der DPS Ranchi.
  - Die Schokolade ist weg.
  - Meines Hobbys sind tanzen, singen, malen und Fernsehen.
  - Ich bin Tina. Wer bist du?
  - Ich bin ein Schüller.
  - Wie alt ist Max?
  - Gibst du mir noch deine Telefonnummer.
  - Das ist mein Supermarkt.
- 
- 3. Schreib in Deutsch: (Write in German) ( 1x5 =5 )**
- I live in Ranchi.
  - I speak English and Hindi.
  - I am 10 years old.
  - Where do you live?
  - I am a student.
- 4. Schreib Ordinal zählen von elf bis dreißig: ( 5 )**  
(Write ordinal numbers from 11 to 20)
- 5. Schreib 10 TiereNamen ( 5 )**  
(Write 10 animals name)
- 6. Schreib 10 Körperteilen ( 5 )**  
(Write 10 parts of body)

5. \*

Files submitted:

---

This content is neither created nor endorsed by Google.

Google Forms

# Class- V Subject- Japanese ( Paper-1)

Date - 18-09-2021

Full Marks- 10

---

\* Required

1. Email \*

---

2. Name \*

---

3. Section \*

*Check all that apply.*

A

B

C

D

E

F

G

H

4. Roll No. \*

---

Q1. Read the following questions and choose the correct answer from the given choices.

5. 1. What is the meaning of “Irasshaimase”? \*

1 point

*Mark only one oval.*

- 1) Hello for the first time.
- 2) Sorry.
- 3) Welcome to our shop.
- 4) Good afternoon.

6. 2. What is “9 o'clock” in Japanese? \*

1 point

*Mark only one oval.*

- 1) yo ji
- 2) ku ji
- 3) san ji
- 4) go ji

7. 3. Choose the correct translation of “Boku wa aoi kutsushita ga hoshii desu”. \*

1 point

*Mark only one oval.*

- 1) My name is blue.
- 2) I like the colour red.
- 3) I want red socks.
- 4) I want blue socks.



8. 4. Choose the correct translation of “Where are you going?”. \*

1 point

*Mark only one oval.*

- 1) Doko ni iku no desu ka.
- 2) Doko desu ka.
- 3) Dare to iku no desu ka.
- 4) Nani wo kau no desu ka.

9. 5. How do we say “English language” in Japanese? \*

1 point

*Mark only one oval.*

- 1) nihongo
- 2) eigo
- 3) English
- 4) doitsugo

6. Choose the correct particle to complete the sentence.

10. “Watashi .....uta.....utaimasu.” \*

1 point

*Mark only one oval.*

- 1) wa and wa
- 2) ga and wa
- 3) wa and wo
- 4) no and wo

11. 7. Choose the group of vegetables in Japanese \*

1 point

*Mark only one oval.*

- 1) ringo, tamanegi, tomato
- 2) keeki, ringo, sakana
- 3) ninjin, banana, pan
- 4) tamanegi, ninjin, jagaimo

12. 8. What is the meaning of “matte kudasai” \*

1 point

*Mark only one oval.*

- 1) Let's go to the mall.
- 2) I don't know.
- 3) Please wait .
- 4) Show please.

13. 9. Write the meaning of “kaimasu” and “kaimasen”? \*

1 point

*Mark only one oval.*

- 1) “to buy” and “not to buy”
- 2) “not to buy” and “to buy”
- 3) “to come” and “not to come”
- 4) “not to come” and “to come”

14. 10. How do we say “eight (8)” in Japanese? \*

1 point

*Mark only one oval.*

1) shichi

2) roku

3) hachi

4) yon

---

This content is neither created nor endorsed by Google.

Google Forms

# Class- V Subject- Japanese ( Paper-2)

Date - 18-09-2021

Full Marks- 30

---

\* Required

1. Email \*

---

2. Name \*

---

3. Section \*

*Check all that apply.*

A

B

C

D

E

F

G

H

4. Roll No. \*

---

Q1. Write the meaning of the following words in English. (5 marks)

1. Ohayou gozaimasu.
2. sakana
3. jagaimo
4. kesa
5. mame
6. suiei
7. onaji
8. kuchi
9. asagohan
10. aoi

Q2. Write the meaning of the following words in Japanese (Romaji). (5 marks)

1. nurse
2. selling counter
3. answer
4. mall
5. bank employee
6. black tea
7. system engineer
8. big
9. rice
10. fried fish

Q3. Fill in the blanks by using appropriate particles from the given options. (5 marks)

(wa, ga, ni, mo, to, wo, no, e)

1. Watashi \_\_\_\_\_ koohee \_\_\_\_\_ nomi masu.
2. Watashi \_\_\_\_\_ imouto \_\_\_\_\_ shougakusei desu.

3. Karai karee \_\_\_\_\_ suki desu \_\_\_\_\_, amari tabe masen.
4. Kaimono \_\_\_\_\_ shi \_\_\_\_\_ suupaa \_\_\_\_\_ iki mashita.
5. Anata \_\_\_\_\_ hon \_\_\_\_\_ doko desu ka.
6. Shourai \_\_\_\_\_ yume \_\_\_\_\_ nan desu ka.
7. Anata wa nanji \_\_\_\_\_ hirugohan \_\_\_\_\_ tabe masu ka.
8. Watashi \_\_\_\_\_ isha \_\_\_\_\_ naritai desu.
9. Taberu maeni te \_\_\_\_\_ arai masu.
10. Jagaimo \_\_\_\_\_ ninjin \_\_\_\_\_ tamanegi \_\_\_\_\_ kai masu.

Q4. Translate the following sentences from English to Japanese (Romaji).  
(3 marks)

1. I like Japanese.
2. When will the cafe open?
3. I learn swimming.

Q5. Translate the following sentences from Japanese (Romaji) to English.  
(2 marks)

1. Watashi wa sannin kazoku desu.
2. Watashi no ane wa ginkouin desu.

---

Q6. Answer the following questions in Japanese (Romaji) by using the given hint in the bracket. (3 marks)

1. Anata wa nomimono dewa nani ga ichiban suki desu ka. (mango juice)
2. Anata no gakkou no namae wa nan desu ka. (DPS)
3. Anata wa hirugohan ni nani wo tabe mashita ka. (cooked rice and curry)

Q7. Write your "self-introduction" in Japanese (Romaji) using some sentences with ~ga suki and ~ga kirai. It must have a minimum of 5 sentences.

(3 marks)

Q8. Read the following paragraph and answer the questions below in Japanese (Romaji).

(4 marks)

Watashi no namae wa An desu. Watashi wa mainichi 7 ji ni oki masu. Gakkou wa 8 ji ni hajimari masu. Watashi wa otouto to isshoni gakkou e iki masu. Otouto no namae wa Hari desu. Hari wa hon wo yomu koto ga suki desu. Watashi wa tegami wo kaku koto ga suki desu. Hari wa keeki ga suki desu ga, watashi wa keeki ga suki dewa arimasen. Watashi wa kukkii ga suki desu. Kinou, mooru e iki mashita. Keeki to kukkii wo kai mashita.

1. Otouto no namae wa nan desu ka.
2. Gakkou wa nanji kara hajimari masu ka.
3. An wa nani ga kirai desu ka.
4. Kinou An wa nani wo kai mashita ka.

5. \*

Files submitted:

This content is neither created nor endorsed by Google.

Google Forms



# Class- V Subject- Sanskrit ( Paper-1)

Date - 18-09-2021

Full Marks- 10

---

\* Required

1. Email \*

---

2. Name \*

---

3. Section \*

*Check all that apply.*

A

B

C

D

E

F

G

H

4. Roll No. \*

---

दिए गए विकल्पों में से सही उत्तर चुनें -

1. .... बालकः ।

(i) सा      (ii) सः      (iii) तौ      (iv) ते

5. \*

1 point

*Mark only one oval.*

(i)

(ii)

(iii)

(iv)

2. एषः ..... पठति ।

(i) छात्रः      (ii) छात्रा      (iii) बालिका      (iv) लता

6. \*

1 point

Mark only one oval.

 (i) (ii) (iii) (iv)

3. सा बालिका ..... ।

(i) खेलन्ति (ii) खेलतः (iii) खेलति (iv) खेलती

7. \*

1 point

Mark only one oval.

 (i) (ii) (iii) (iv)

4. त्वम् ..... ।

(i) नमसि      (ii) नमति      (iii) नमथः      (iv) नमामि

8. \*

1 point

Mark only one oval.

- (i)  
 (ii)  
 (iii)  
 (iv)

5. अहम् ..... ।

(i) गच्छति      (ii) गच्छामि      (iii) गच्छसि      (iv) गच्छन्ति

9. \*

1 point

Mark only one oval.

 (i) (ii) (iii) (iv)

6. ते बालकाः ..... ।

(i) लिखतः (ii) लिखसि (iii) लिखन्ति (iv) लिखामि

10. \*

1 point

Mark only one oval.

 (i) (ii) (iii) (iv)

7. बालकेन, बालकाभ्याम् , .....

(i) बालकाः (ii) बालकेभ्यः (iii) बालकान् (iv) बालकैः

11. \*

1 point

Mark only one oval.

(i)

(ii)

(iii)

(iv)

---

8. .... , फलाभ्याम्, फलेभ्यः

(i) फलाय (ii) फलम् (iii) फलेन (iv) फलानि

12. \*

1 point

Mark only one oval.

 (i) (ii) (iii) (iv)

9. पठामि, ..... , पठामः ।

(i) पठथः      (ii) पठावः      (iii) पठतः      (iv) पठथ

13. \*

1 point

Mark only one oval.

 (i) (ii) (iii) (iv)

10. अगच्छत्, अगच्छताम्, .....

(i) अगच्छम् (ii) अगच्छः (iii) अगच्छन् (iv) अगच्छत

14. \*

1 point

*Mark only one oval.*

(i)

(ii)

(iii)

(iv)

---

This content is neither created nor endorsed by Google.

Google Forms



# Class- V Subject- Sanskrit ( Paper-2)

Date - 18-09-2021

Full Marks- 30

---

\* Required

1. Email \*

---

2. Name \*

---

3. Section \*

*Check all that apply.*

- A  
 B  
 C  
 D  
 E  
 F  
 G  
 H

4. Roll No. \*

---

1) हिन्दी भाषा में अनुवाद करें –

[1 x 3 = 3]

क) एषः बालकः।  
बालकः खेलति।

ख) किम् छात्राः लिखन्ति ?  
आम्, ते लिखन्ति।

ग) त्वम् किम् पठसि ?  
अहम् संस्कृतम् पठामि।

2) मंजूषा से उचित सर्वनाम चुनकर रिक्त स्थान भरें – [0.5 x 4 = 2]

( मंजूषा – एषः , एषा )

क) ..... मालाकारः। ख) ..... कलिका।

ग) ..... स्यूतः। घ) ..... बालिका।

3) बहुवचन में वाक्य बदलें –

[1 x 2 = 2]

क) सः खेलति। .....

ख) सा वदति। .....

4) मंजूषा से उचित पद चुनकर वाक्य पूरा कीजिए – [0.5 x 4 = 2 ]

( मंजूषा – छात्रः , अध्यापिका , वृक्षः , छात्रा )

क) एषः ..... पठति। ख) सा ..... नमति।

ग) एषा ..... पाठयति। घ) सः ..... फलति।

5) उदाहरण के अनुसार वाक्य बनाइए – [1 x 4 = 4 ]

उदाहरण–सः पठति। तौ पठतः। ते पठन्ति।

सः हसति। .....। .....।

सः नमति। .....। .....।

6) रेखांकित पद को शुद्ध कीजिए – [0.5 x 4 = 2 ]

क) सः लिखामि। ख) अहम् पठति।

ग) किम् त्वम् लिखति ? घ) सः फलम् खादसि।

7) उदाहरण के अनुसार क्रियापद लिखिए – [0.5 x 2 = 1 ]

उदाहरण– सः पठति । ( पठ् )

क) सा ..... । ( वद् )

ख) अहम् ..... । ( खाद् )

8) पदों का वर्ण विन्यास/वर्ण विच्छेद करें – [1 x 3 = 3 ]

क) हिमालयः = ..... ख) सरिता =.....

ग) कमलम् =.....

9) वर्ण संयोजन करके उचित पद लिखिए – [0.5 x 4 = 2]

क) प् + इ + त् + आ =.....

ख) अ + न् + अ + ल् + अः =.....

ग) न् + अ + द् + ई =.....

घ) क् + अ + क् + ष् + आ =.....

10) शब्दरूप लिखें –

[ 1 x 3 = 3 ]

क) बालक – द्वितीया

ख) लता – तृतीया

ग) फलम् – चतुर्थी

11) धातुरूप लिखें –

[ 3 x 2 = 6 ]

क) लिख् – लङ् लकार (Past)

ख) गम् – लृट् लकार (Future)

5. \*

Files submitted:

---

This content is neither created nor endorsed by Google.

Google Forms

# Class- V Subject- Spanish ( Paper-1)

Date - 18-09-2021

Full Marks- 10

---

\* Required

1. Email \*

---

2. Name \*

---

3. Section \*

*Check all that apply.*

A

B

C

D

E

F

G

H

4. Roll No. \*

---

Choose the correct option.

5. 1. We say 'good morning' in Spanish: \*

1 point

*Mark only one oval.*

- a) Buen
- b) Buenos días
- c) Buenas noches
- d) Buenas tardes

6. 2. The correct word for "thank you" in Spanish: \*

1 point

*Mark only one oval.*

- a) Gracias
- b) Muy bien
- c) hasta luego
- d) de nada

7. 3. Find the correct name of the capital of Spain : \*

1 point

*Mark only one oval.*

- a) Barcelona
- b) Santiago
- c) Bilbao
- d) Madrid

8. 4. Famous Spanish painter from Spain below: \*

1 point

*Mark only one oval.*

- a) M F Hussain
- b) Pablo Picasso
- c) Juan
- d) Octavio

9. 5. The famous dance form of Spain: \*

1 point

*Mark only one oval.*

- a) Bharatnatyam
- b) Kathak
- c) Flamenco
- d) Tango

10. 6. A girl will say "I am indian" in Spanish: \*

1 point

*Mark only one oval.*

- a) Soy indio
- b) soy india
- c) soy española
- d) soy japonés



11. 7. Maria ..... la chica \*

1 point

*Mark only one oval.*

- a) Eres
- b) son
- c) es
- d) somos

12. 8. We call “man and woman” in Spanish: \*

1 point

*Mark only one oval.*

- a) Chico y chica
- b) madre y padre
- c) hombre y mujer
- d) hombres

13. 9. .... unos amigos \*

1 point

*Mark only one oval.*

- a) Son
- b) es
- c) soy
- d) eres

14. 10. ¿Quién es? (Postman) \*

1 point

*Mark only one oval.*

- a) Soy el cartero
- b) eres maestro
- c) sois médicos
- d) amigo

---

This content is neither created nor endorsed by Google.

Google Forms

# Class- V Subject- Spanish ( Paper-2)

Date - 18-09-2021

Full Marks- 30

---

\* Required

1. Email \*

---

2. Name \*

---

3. Section \*

*Check all that apply.*

A

B

C

D

E

F

G

H

4. Roll No. \*

---

**Completa con el verbo Ser :  
(Complete with the verb Ser)**

**[1x9=9)**

1. (Yo) ..... Carlos.
2. (Él) ..... japonés.
3. (Julia) ..... española.
4. Los hombres ..... profesores.
5. (Tú) ..... inglés.
6. (Ella) ..... española.
7. (Nosotros) ..... indios.
8. Juan y Carlos ..... españoles.
9. Vosotras..... mejicanas.

**Escribe en plural :**

**[1x2=2]**

10. El libro -
11. La vaca -

**Completa con un, una, unos, unas : [1x4=4]  
(Complete with un, una, unos, unas)**

12. .... bolso
13. .... silla
14. .... hombres
15. .... Zapatillas

**Answer the following questions in Spanish**

16. ¿Cómo te llamas? [1]
17. ¿Cuántos años tienes? [1]
18. ¿Cómo estás? [1]
19. ¿De dónde eres? [1]
20. Qué es eso? (Bottles) [1]
21. ¿Cuántos chicos hay?  
Nueve + seis = [1]
22. Escribe números 1 – 20 en español [5]

**Completa con el, la, los, las :  
(Complete with el, la, los, las)**

23. .... chico. [1]
24. .... cuadernos [1]
25. .... chica. [1]
26. .... zapatillas [1]

Lightshot  
Screenshot

5. \*

Files submitted:

---

This content is neither created nor endorsed by Google.

Google Forms

# Class- V Subject- Computer ( Paper-1)

Date - 04-09-2021

Full Marks- 25

---

\* Required

1. Email \*

---

2. Name \*

---

3. Section \*

*Check all that apply.*

A

B

C

D

E

F

G

H

4. Roll No. \*

---

Choose the correct option.

5. Q 1) Arrange the storage units with their capacity from small to large. \* 1 point

*Mark only one oval.*

- a) KB, MB, GB, TB
- b) TB, KB, MB, GB
- c) GB, KB, MB, TB
- d) MB, KB, TB, GB

6. Q 2) The language in which instructions are written to develop a software is known as \_\_\_\_\_. \* 1 point

*Mark only one oval.*

- a) Operating system
- b) Software
- c) Computer language
- d) Hardware

7. Q 3) Which option is not present in Custom Animation? \* 1 point

*Mark only one oval.*

- a) Entrance
- b) Exit
- c) Emphasis
- d) Rehearse timing



8. Q 4) Compiler and Interpreter are an example of \_\_\_\_\_.\*

1 point

*Mark only one oval.*

- a) Language processor
- b) Operation support system
- c) Operating system
- d) Data processor

9. Q 5) \_\_\_\_\_are the printed copies of the contents.\*

1 point

*Mark only one oval.*

- a) Slides
- b) Normal view
- c) Handouts
- d) Soft copy

10. Q 6) What is the storage capacity of BRD? \*

1 point

*Mark only one oval.*

- a) 600 MB
- b) 25 GB/ 50 GB
- c) 4.7 GB
- d) 100 MB

11. Q 7) Linux operating System can be downloaded from the website \_\_\_\_\_.\* 1 point

*Mark only one oval.*

- a) [www.bosslinux.in](http://www.bosslinux.in)
- b) [www.linuxboss.in](http://www.linuxboss.in)
- c) [www.oenoffice.org](http://www.oenoffice.org)
- d) [www.bosslinux.org](http://www.bosslinux.org)

12. Q 8) The information stored in \_\_\_\_\_ memory is lost when the power goes off.\* 1 point

*Mark only one oval.*

- a) ROM
- b) Storage device
- c) RAM
- d) Clipboard

13. Q 9) The procedure of loading an operating system into computer's memory is termed as \_\_\_\_\_.\* 1 point

*Mark only one oval.*

- a) Clipboard
- b) Formatting
- c) Process
- d) Booting

14. Q 10) A flash drive is popularly known as \_\_\_\_\_. \*

1 point

*Mark only one oval.*

- a) Hard disk
- b) Pen drive
- c) RAM
- d) ROM

15. Q 11) \_\_\_\_\_ software controls the internal operation of a computer. \*

1 point

*Mark only one oval.*

- a) Primary memory
- b) Language processor
- c) Utility
- d) System

16. Q 12) \_\_\_\_\_ key is the shortcut key to run slide show in presentation. \*

1 point

*Mark only one oval.*

- a) F2
- b) F5
- c) F11
- d) Shift + F2

17. Q 13) Which utility software is used to scan corrupted and damaged files or bad sectors in the Hard disk? \* 1 point

*Mark only one oval.*

- a) Disk cleaner utility
- b) Backup utility
- c) Disk scanner utility
- d) Disk filter utility

18. Q 14) 1 Megabyte is equal to \_\_\_\_\_. \* 1 point

*Mark only one oval.*

- a) 1024 TB
- b) 1024 KB
- c) 1024 GB
- d) 1024 PB

19. Q 15) The official mascot of Linux Operating System is \_\_\_\_\_. \* 1 point

*Mark only one oval.*

- a) Tux-duck
- b) Donald duck
- c) Tux- the penguin
- d) Penguin parrot

20. Q 16) \_\_\_\_\_ view displays all the slides of a presentation in small sizes together in the window screen. \* 1 point

*Mark only one oval.*

- a) Slide sorter view
- b) Notes view
- c) Slide show
- d) Normal view

21. Q 17) Linux is an operating system developed by \_\_\_\_\_. \* 1 point

*Mark only one oval.*

- a) Charles Babbage
- b) Linus Torvalds
- c) Bill gates
- d) John Napier

22. Q 18) \_\_\_\_\_ is the extension of a file in open office Impress. \* 1 point

*Mark only one oval.*

- a) .docx
- b) .odt
- c) .pptx
- d) .odp

23. Q 19) A group of 8 bits is called a \_\_\_\_\_.\*

1 point

*Mark only one oval.*

- a) Byte
- b) Bits
- c) Nibble
- d) MIPS

24. Q 20) \_\_\_\_\_ is a collection of software used for monitoring ,controlling ,analyzing and managing a computer network.\*

1 point

*Mark only one oval.*

- a) Linux
- b) Operation support system
- c) Operation support software
- d) BOSS

25. Q 21) \_\_\_\_\_ are the pre-defined formats or designs that has pre-defined background ,colours, layout etc.\*

1 point

*Mark only one oval.*

- a) Slide background
- b) Slide transition
- c) Background
- d) Templates

26. Q 22) Main memory is also known as \_\_\_\_\_.\*

1 point

*Mark only one oval.*

- a) Secondary memory
- b) Primary memory
- c) RAM
- d) ROM

27. Q 23) Which is not an example of presentation package? \*

1 point

*Mark only one oval.*

- a) Fedora
- b) Microsoft power point
- c) Flash
- d) Open office Impress

28. Q 24) What are the four colours present in the icon of MS- windows operating system? \*

1 point

*Mark only one oval.*

- a) Pink, green , yellow, white
- b) White, red, brown, black
- c) Red, green, Blue, yellow
- d) Gray, white, yellow, pink

29. Q 25) Any file or folder which is deleted in windows operating system get transferred to the \_\_\_\_\_.\*

1 point

*Mark only one oval.*

- a) Recycle bin
- b) Trash
- c) Documents
- d) Taskbar

---

This content is neither created nor endorsed by Google.

Google Forms



# Class- V Subject- Computer ( Paper-2)

Date - 04-09-2021

Full Marks- 25

---

\* Required

1. Email \*

---

2. Name \*

---

3. Section \*

*Check all that apply.*

A

B

C

D

E

F

G

H

4. Roll No. \*

---

**Q 1) Fill in the blanks:-** **[0.5 X 5 = 2.5]**

- a) Data is a collection of \_\_\_\_\_.
- b) \_\_\_\_\_ plays an important role in creating interesting and lively presentation.
- c) \_\_\_\_\_ refers to the look or display of the desktop screen.
- d) \_\_\_\_\_ used to make duplicate copy of all the information stored in a computer.
- e) \_\_\_\_\_ are the individual 'pages' of a presentation.

**Q 2) Match the following:** **[0.5 X 5 =2.5]**

- |                              |                            |
|------------------------------|----------------------------|
| (a) Utility software         | (i) Impress                |
| (b) Memory card              | (ii) Non- volatile memory  |
| (c) Secondary storage device | (iii) Disk cleaner utility |
| (d) Font Work                | (iv) Rectangle             |
| (e) Pendrive                 | (v) Digital camera         |

**Q 3) Expand these abbreviations:** [1 X 4 = 4]

- (a) CDAC
- (b) RAM
- (c) BOSS
- (d) TB

**Q 4) Write short notes on:-** [2 X 2 = 4]

- (a) Handout
- (b) Disk Backup utility

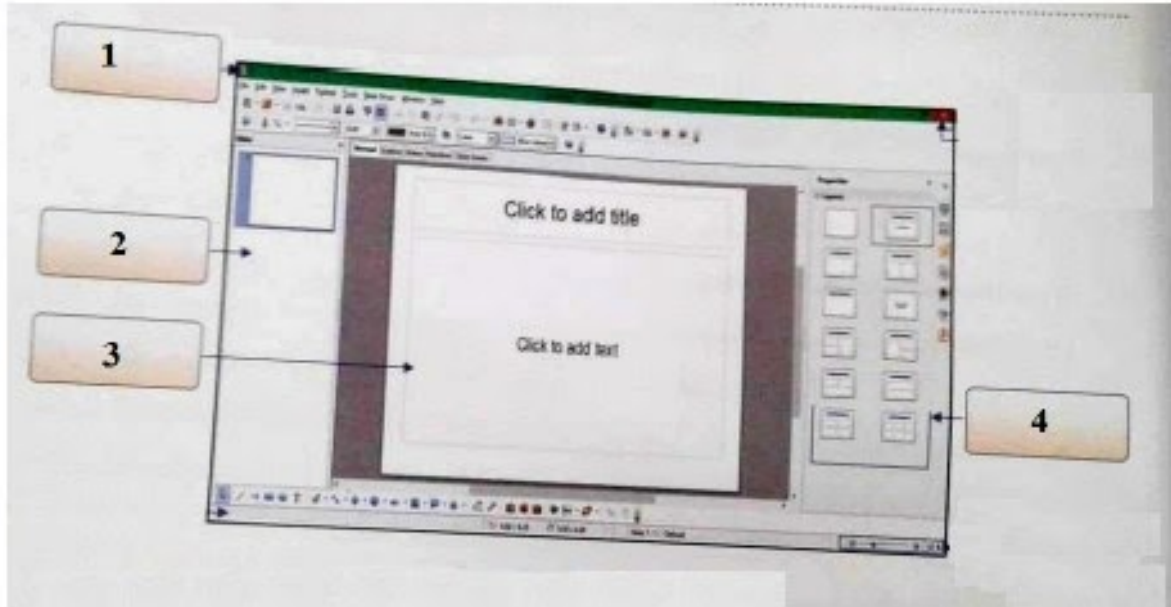
**Q 5) Differentiate the following:-** [2 X 2 = 4]

- (a) Primary memory & Secondary memory
- (b) Customized software & Application software

**Q 6) Answer the following questions:-** [2 X 3 = 6]

- (a) What is Custom Animation?
- (b) What is presentation? Write any two features of presentation package.
- (c) What is an Operating System? List any two functions of an Operating system.

**Q 7) Label the parts of Open Office Impress according to the given number. [ 2]**



5. \*

Files submitted:

---

This content is neither created nor endorsed by Google.

Google Forms

# Class- V Subject- General Knowledge

Date - 20-09-2021

Full Marks- 50

---

\* Required

1. Email \*

---

2. Name \*

---

3. Section \*

*Check all that apply.*

A

B

C

D

E

F

G

H

4. Roll No. \*

---

Choose the correct option.

5. 1.This is the hottest planet in our solar system. \*

1 point

*Mark only one oval.*

- a) Jupiter
- b) Venus
- c) Uranus
- d) Mercury

6. 2. The scientific name for a shooting star is : \*

1 point

*Mark only one oval.*

- a) Comet
- b) Meteors
- c) Craters
- d) none of these

7. 3. These birds, also called 'bottlenose' or 'sea parrot', are distinguished by their large, brightly coloured, triangular beaks. \*

1 point

*Mark only one oval.*

- a) Albatross
- b) Kookaburra
- c) Puffins
- d) Macaw

8. 4. These birds are found in American tropical rainforests. Their oversized, colourful bills can be as long as one-third of their total length. \* 1 point

*Mark only one oval.*

- a) Rhea  
 b) Pelican  
 c) Stork  
 d) Toucan

9. 5. Which animal is reared for its milk, hide, and also as a pack animal in Tibet? \* 1 point

*Mark only one oval.*

- a) Yak  
 b) Tapir  
 c) Raccoon  
 d) none of these

10. 6. Acrobatic animal found in Southeast Asia, with a human-like build and no tail\_\_\_\_\_. \* 1 point

*Mark only one oval.*

- a) Jaguar  
 b) Gibbon  
 c) Grizzly bear  
 d) Mink

11. 7. The largest member of the deer family, found in the Northern Hemisphere\_\_\_\_\_. \*

1 point

*Mark only one oval.*

- a) Elk
- b) Raccoon
- c) Sambar
- d) None of these

12. 8. When was the national flag, in its present form, adopted? \*

1 point

*Mark only one oval.*

- a) 20 July 1947
- b) 15 August 1947
- c) 26 January 1947
- d) 22 July 1947

13. 9. What is the ratio of the width of the national flag to its length? \*

1 point

*Mark only one oval.*

- a) 1:2
- b) 2:3
- c) 3:2
- d) none of these



14. 10. This is the opening through which light can enter your eye: \*

1 point

*Mark only one oval.*

- a) Cornea
- b) Retina
- c) Pupil
- d) Iris

15. 11. These cells carry oxygen through your body. \*

1 point

*Mark only one oval.*

- a) White blood Cells
- b) Red blood cells
- c) both a and b
- d) none of these

16. 12. This is the largest internal organ in our body. \*

1 point

*Mark only one oval.*

- a) Skin
- b) Liver
- c) Kidney
- d) Large Intestine

17. 13. 'Diet' is the parliament of which country? \*

1 point

*Mark only one oval.*

- a) Japan
- b) China
- c) Bangladesh
- d) Indonesia

18. 14. What is the name of the parliament building of Russia? \*

1 point

*Mark only one oval.*

- a) Knessest
- b) Congress of Deputies
- c) Federal Assembly
- d) Folketing

19. 15. 'House of Commons & House of Lords' is the parliament of which country? \*

1 point

*Mark only one oval.*

- a) Germany
- b) Australia
- c) Ireland
- d) Britain

20. 16. Who is the founder of Bachpan Bachao Andolan? \*

1 point

*Mark only one oval.*

- a) Kailash Satyarthi
- b) Shikha Patra
- c) Anjali Chandrashekhar
- d) Varsha Verghese

21. 17. He gave up his career to devote his life to take care of leprosy patients. Later he founded an ashram dedicated to the treatment and rehabilitation of these patients . \_\_\_\_\_ \*

1 point

*Mark only one oval.*

- a) Mother Teresa
- b) Raja Ram Mohan Roy
- c) Baba Amte
- d) None of these

22. 18. He was the principal contributor and practitioner of the ancient system of Indian medicine, called Ayurveda, and wrote a book on it. \_\_\_\_\_ \*

1 point

*Mark only one oval.*

- a) Charak
- b) Sushruta
- c) Aryabhata
- d) None of these

23. 19. He was an Indian astronomer of the 6th century. He defined zero as the result of subtracting a number from itself. \_\_\_\_\_ \*

1 point

*Mark only one oval.*

- a) Aryabhata  
 b) Varahamihira  
 c) Brahmagupta  
 d) Bhaskara

24. 20. Which animal makes the longest migration? \*

1 point

*Mark only one oval.*

- a) Toucan  
 b) Arctic Tern  
 c) Red Pandas  
 d) Sea turtles

25. 21. On which continent will you find the rare black spider monkey? \*

1 point

*Mark only one oval.*

- a) North America  
 b) South America  
 c) Australia  
 d) Africa

26. 22. Which species of tiger is the largest of all? \*

1 point

*Mark only one oval.*

- a) Indian
- b) Siberian
- c) Bengal Tiger
- d) Indo-Chinese

27. 23. 'Orlando Furioso' is an Italian epic about the war between Christians and Pagans. Name the author of this epic. \*

1 point

*Mark only one oval.*

- a) Ariosto
- b) Ovid
- c) Edmund Spenser
- d) John Keats

28. 24. 'Paradise Lost' is considered to be one of the greatest poems in the English language. Name the author. \*

1 point

*Mark only one oval.*

- a) Dante Alighieri
- b) Hesiod
- c) William Cowper
- d) John Milton

29. 25. Name the ancient Greek epic which is the story of Achilles, of his anger and determination, and how he slew the Trojan hero Hector. \* 1 point

*Mark only one oval.*

- a) Divine Comedy
- b) The Iliad
- c) Odyssey
- d) Hommer

30. 26. In which city of India will you find the famous Marina Beach? \* 1 point

*Mark only one oval.*

- a) Kolkata
- b) Mumbai
- c) Goa
- d) Chennai

31. 27. What is the full form of GPS-the satellite-based navigation and location system. \* 1 point

*Mark only one oval.*

- a) Global Processing System
- b) Global Positioning System
- c) Global Positioning Signal
- d) Global Power System

32. 28. With which sport is the Durand Cup associated? \*

1 point

*Mark only one oval.*

- a) Football
- b) Cricket
- c) Hockey
- d) Badminton

33. 29. Who is the author of the book 'A Tale of Two Cities'? \*

1 point

*Mark only one oval.*

- a) Jhumpa Lahari
- b) Chetan Bhagat
- c) Charles Dickens
- d) Ruskin Bond

34. 30. Name the airline whose logo is given below? \*

1 point



*Mark only one oval.*

- a) Thai Airways
- b) Luftansha
- c) Emirates
- d) Air Newzealand

35. 31. This international airport in Serbia is named after the pioneer of AC electrical supply System. Name that person. \*

1 point

*Mark only one oval.*

- a) Nikola Tesla
- b) Thomas Edison
- c) Michael Faraday
- d) none of these



36. 32. Suvarnabhumi Airport belongs to which country? \*

1 point

*Mark only one oval.*

- a) India
- b) Thailand
- c) Indonesia
- d) Bangladesh

37. 33. Tanjore painting originated in which state of India? \*

1 point

*Mark only one oval.*

- a) Madhya Pradesh
- b) Uttar Pradesh
- c) Tamil Nadu
- d) Telangana

38. 34. What is a traditional Tibetan Buddhist painting called? \*

1 point

*Mark only one oval.*

- a) Thangka
- b) Chikankari
- c) Kari Kamandari
- d) none of these

39. 35. Name the famous form of embroidery from Punjab, which literally means 'floral craft'. \* 1 point

*Mark only one oval.*

- a) Zardozi  
 b) Kantha  
 c) Chikankari  
 d) Phulkari

40. 36. Which river originates in Lake Manasarovar and ends in Arabian Sea? \* 1 point

*Mark only one oval.*

- a) Indus  
 b) Ganges  
 c) Yamuna  
 d) Godavari

41. 37. The river Krishna originates in Western Ghat (Maharashtra) and it ends in\_\_\_\_\_. \* 1 point

*Mark only one oval.*

- a) Arabian Sea  
 b) Gulf of Khambhat  
 c) Bay of Bengal  
 d) Merges with Ganga

42. 38. Of the four systems of medicine -Ayurveda, Allopathy, Unani, and Siddha, 1 point  
which system does not entirely depend on the medicinal properties of  
plants? \*

*Mark only one oval.*

- a) Ayurveda  
 b) Allopathy  
 c) Unani  
 d) Siddha

43. 39. Bhringraj is used to treat which of the following diseases? \* 1 point

*Mark only one oval.*

- a) Cough and cold  
 b) Scurvy  
 c) Toothache  
 d) Hair loss

44. 40. Below is the logo of a clothing company. Identify the company. \*

1 point



Mark only one oval.

- a) Armani
- b) Prada
- c) Lacoste
- d) Fendi

45. 41. What country did Michael Phelps swim for? \*

1 point

Mark only one oval.

- a) Russia
- b) United States
- c) China
- d) Australia

46. 42. Which of these energy resources is renewable? \*

1 point

*Mark only one oval.*

- a) petroleum
- b) diesel
- c) CNG
- d) hydroelectric

47. 43. Which among the following is not a greenhouse gas? \*

1 point

*Mark only one oval.*

- a) carbon dioxide
- b) water vapour
- c) ozone
- d) nitrogen

48. 44. This source of renewable energy does not depend on weather. \*

1 point

*Mark only one oval.*

- a) geothermal
- b) hydro power
- c) solar energy
- d) wind energy

49. 45. Which city hosted the 2018 Commonwealth Games? \*

1 point

*Mark only one oval.*

- a) Delhi
- b) Glasgow
- c) Gold Coast
- d) London

50. 46. Vinesh Phogat is associated with which sport? \*

1 point

*Mark only one oval.*

- a) boxing
- b) wrestling
- c) shooting
- d) javelin throw

51. 47. Where was Mahavira, the founder of Jainism, born? \*

1 point

*Mark only one oval.*

- a) Vaishali
- b) Sarnath
- c) Bodha Gaya
- d) Lumbini

52. 48. Name the world's largest religious structure. \*

1 point

*Mark only one oval.*

- a) Akshardham Temple
- b) Borobudur
- c) Karnak (Great Hypostyle Hall)
- d) Angkor Wat Temple

53. 49. Which is the most visited Hindu temple in India? \*

1 point

*Mark only one oval.*

- a) Golden Temple, Amritsar
- b) Tirupathi Balaji, Tirumala
- c) Maa Vaishno Devi Temple, Katra
- d) Jagannath Temple, Puri

54. 50. Neeraj Chopra is associated with which sport? \*

1 point

*Mark only one oval.*

- a) table tennis
- b) boxing
- c) wrestling
- d) javelin throw

---

This content is neither created nor endorsed by Google.

Google Forms