

Class- IV Subject- English (Paper-1)

Date - 08-09-2021

Full Marks- 25

*** Required**

1. Email *

2. Name *

3. Section *

Check all that apply. A B C D E F G H I

4. Roll No. *

Unscramble the words to select the correct sentence.

5. 1) must you truth speak always the *

1 point

Mark only one oval.

- a) Speak the truth always you must.
- b) Truth always you speak the must.
- c) You must always speak the truth.
- d) Always speak the truth you must.

6. 2) were the crossing children school the road *

1 point

Mark only one oval.

- a) The children were school crossing the road.
- b) The school children were crossing the road.
- c) School children were the crossing the road.
- d) Road the children were crossing school the.

7. 3) soldiers the enemies the attacked *

1 point

Mark only one oval.

- a. The soldiers attacked the enemies.
- b. Attacked the enemies the soldiers.
- c. Enemies the attacked soldiers the.
- d. The attacked soldiers the enemies.

Identify the kind of sentences.

8. 4) Be careful. *

1 point

Mark only one oval.

- a. Exclamatory sentence
- b. Declarative sentence
- c. Interrogative sentence
- d. Imperative sentence

9. 5) Who is your best friend? *

1 point

Mark only one oval.

- a. Interrogative sentence
- b. Exclamatory sentence
- c. Declarative sentence
- d. Imperative sentence

10. 6) Hyderabad is famous for its pearls. *

1 point

Mark only one oval.

- a. Interrogative sentence
- b. Imperative sentence
- c. Declarative sentence
- d. Exclamatory sentence

Identify the subjects in the following sentences.

11. 7) I shot an arrow in the air. *

1 point

Mark only one oval.

- a. shot an arrow
- b. in the air
- c. I shot an arrow
- d. I

12. 8) The poor little girl sat in a corner. *

1 point

Mark only one oval.

- a. the poor
- b. the poor little girl
- c. sat in a corner
- d. in a corner

State the predicate in the sentence.

13. 9) The children are playing in the field. *

1 point

Mark only one oval.

- a. the field
- b. are playing
- c. the children
- d. are playing in the field

Pick out the adjectives in the following sentences.

14. 10) I saw a little kitten on the road. *

1 point

Mark only one oval.

- a. little
- b. saw
- c. on the road
- d. kitten

15. 11) I want that red bag kept over there. *

1 point

Mark only one oval.

- a) want
- b) bag
- c) over
- d) red

16. 12) The teacher asked me a difficult question. *

1 point

Mark only one oval.

- a) teacher
- b) difficult
- c) question
- d) asked

17. 13) I had two eggs for breakfast. *

1 point

Mark only one oval.

- a) I
- b) eggs
- c) two
- d) breakfast

Fill in the blanks with the correct forms of adjectives given in the brackets.

18. 14) Udit is the ____ boy in the class. (naughty) *

1 point

Mark only one oval.

- a) naughty
- b) naughtiest
- c) more naughty
- d) naughtier

19. 15) Maya is a ____ child. (quiet) *

1 point

Mark only one oval.

- a) quietest
- b) quietier
- c) quiet
- d) more quiet

20. 16) This book is ____ than mine.(interesting) *

1 point

Mark only one oval.

- a) most interesting
- b) more interesting
- c) interesting
- d) interestingest

21. 17) Which is the ____ country in the world? (hot) *

1 point

Mark only one oval.

- a) hot
- b) hottest
- c) hotter
- d) more hot

Choose the correct articles to complete these sentences .

22. 18) Los Angeles has ____ ideal climate. *

1 point

Mark only one oval.

- a) no articles required
- b) an
- c) the
- d) a

23. 19) _____ lion is the king of animals. *

1 point

Mark only one oval.

- a) The
- b) A
- c) An
- d) no articles required

24. 20) The cow is _____ useful animal. *

1 point

Mark only one oval.

- a) an
- b) the
- c) no articles required
- d) a

25. 21) _____ Ganges is a sacred river. *

1 point

Mark only one oval.

- a) A
- b) An
- c) The
- d) no articles required

Fill in the blanks with suitable pronouns.

26. 22) The movie was a flop because ____ was boring. *

1 point

Mark only one oval.

- a) he
 b) him
 c) it
 d) she

27. 23) The book belongs to us. The book is _____. *

1 point

Mark only one oval.

- a) his
 b) ours
 c) theirs
 d) them

28. 24) The robbers were caught because they had left ____ finger prints behind. *

1 point

Mark only one oval.

- a) them
 b) they
 c) their
 d) theirs

29. 25) What are ___ eating now? *

1 point

Mark only one oval.

a) them

b) she

c) you

d) her

This content is neither created nor endorsed by Google.

Google Forms

Class- IV Subject- English (Paper-2)

Date - 08-09-2021

Full Marks- 55

* Required

1. Email *

2. Name *

3. Section *

Check all that apply.

A

B

C

D

E

F

G

H

I

4. Roll No. *

SECTION-A (Reading)

1. Read the passage carefully and answer the questions that follow: **(5 Marks)**

One of the greatest inventors of all times, Thomas Alva Edison was born in 1847 in a small town in Ohio, USA. His teachers thought he was a slow learner, so his mother taught him herself, inspiring his interest in Science. In 1869, after moving to New York he improved a machine called the 'ticker'. It was used for relaying information about the stock market.

Edison invented many things that changed the world. Electric lighting, sound recording, and an early form of moving pictures were among these. Perhaps Edison's most important invention was the electric light bulb. It took him thousands of experiments before he succeeded. Edison worked extremely hard and would spend days, months or even years experimenting in order to make something work. He often slept on his worktable, so that he could start work again first thing in the morning.

- a) Mention at least two inventions of Edison? (2)
- b) Who was Thomas Alva Edison? (1)
- c) Fill in the blanks:- (1)
- i) He was born in _____.
- d) Write the antonym of 'succeeded'. (1)

2) Read the poem carefully. (5 Marks)

Adventures with Books

**Stanza -1 Books are ships that sail the seas
To lands of snow or jungle trees.
And I'm the captain bold and free
Who will decide which place we'll see.
Come, let us sail the magic ship.**

**Stanza – 2 Books are trains in many lands,
Crossing hills or desert sands.
And I'm the engineer who guides
The train on its exciting rides.
Come, let us ride the magic train.**

**Stanza – 3 Books are zoos that make a home
For birds and beasts not free to roam.
And I'm the keeper of the zoo,
I choose the things to show to you.
Come, let us visit a zoo.**

**Stanza – 4 Books are gardens, fairies, elves,
Cowboys, and people like ourselves.
And I can find with one good look
Just what I want inside a book.
Come, let us read! For reading's fun!**

By Velda Blumhagen

Answer the following questions.

a) Write two pairs of rhyming words from the poem. (2)

b) Complete the sentence. (1)

The speaker is the _____ of the ship in which he will travel.

c) Write the antonym of 'exciting'. (1)

d) Write True or False. (1)

The speaker loves reading books.

SECTION – B (Writing)

3) Paragraph Writing (5 Marks)

Write a paragraph on any one topic in about (100-120) words.

a) My Country India

Or

b) My Favourite Season

4) Letter Writing (Informal) (5 Marks)

a. You are Seema/Rohit, residing at A-31, Lawrence Road, Delhi - 110007. Write a letter to your friend congratulating him/her on his/her success in the annual examination.

Or

b. You are Seema/Rohit, residing at A-31, Lawrence Road, Delhi - 110007. Write a letter to your friend describing him/her about your visit to a book fair.

SECTION - C (Grammar) (10 Marks)

5) Do as directed.

a) The children went for a picnic. (**Underline the nouns**)

b) **Fill in the blanks with the correct collective nouns.**

i) A _____ of bees was stinging the pedestrians.

ii) A _____ of singers sang the welcome song.

c) The garden is beautiful. (**Identify the common noun**)

d) Write the plural of :

i) valley

ii) volcano

e) Change the gender of the following nouns.

i) monk

ii) duke

f) State whether these nouns are Countable or Uncountable .

i) person

ii) butter

SECTION – D (Literature)

- 6) Answer the following questions : (2×6=12)**
- a) How did the children react in the poem ‘**Daddy Fell into the Pond**’ ?
- b) What did the king do unknowingly?
(Not Our Problem)
- c) Which two axes did the woodman refuse and why?
(The Woodman and Mercury)
- d) Explain how Aunt Izzie showed her excitement.
(Cousin Helen’s Visit)
- e) The child talks about school. What does he say?
(The Little Big Man)
- f) Which place did Somilaka reach and how much did he earn?
(The Unlucky Weaver)

7) Reference to context. (2×2=4)

a) So this is Katy? Why, what a splendid tall Katy it is!

- i) Who said these words and to whom?
- ii) When were these words said?

b) I am not a success here, I will go elsewhere.

- i) Who said these words and to whom?
- ii) Why did the speaker say these words?

8) Write the meaning of the following words.

(in reference to the lessons) (1×6=6)

- i. sovereigns
- ii. silver
- iii. intention
- iv. duped
- v. sire
- vi. daft

9) **Fill in the blanks:-**

(1×3=3)

- i) **Katy was disappointed because Cousin Helen was not like _____ in Mrs Sherwood's story.**
- ii) **The poet of the poem 'The Little Big Man' is _____.**
- iii) **Somilaka was an expert at making fine _____.**

5. *

Files submitted:

This content is neither created nor endorsed by Google.

Google Forms

Class- IV Subject- Hindi (Paper-1)

Date - 13-09-2021

Full Marks- 25

*** Required**

1. Email *

2. Name *

3. Section *

Check all that apply. A B C D E F G H I

4. Roll No. *

दिए गये प्रश्नों के सही विकल्प चुनें :-

5. 1) धैर्य न छोडने की बात किसने कही ? *

1 point

Mark only one oval.

- a) तारों ने
- b) पृथ्वी ने
- c) आकाश ने
- d) नदी ने

6. 2) नाक के बारे में किसका भाषण रोचक था ? *

1 point

Mark only one oval.

- a) शिक्षक का
- b) शिक्षिका का
- c) डॉक्टर का
- d) प्रधानाचार्य का

7. 3) माता जी ने क्या खरीदा ? *

1 point

Mark only one oval.

- a) चादर
- b) साड़ी
- c) ओढनी
- d) पजामा

8. 4) मेले में लोगों ने किसकी सवारी की ? *

1 point

Mark only one oval.

- a) हाथी की
- b) ऊँट की
- c) घोड़े की
- d) पालकी की

9. 5) चाँद किसकी रोशनी से चमकता है ? *

1 point

Mark only one oval.

- a) तारों की
- b) पृथ्वी की
- c) स्वयं की
- d) सूरज की

10. 6) पृथ्वी किसके चारों ओर घूमती है ? *

1 point

Mark only one oval.

- a) चाँद के
- b) मंगल ग्रह के
- c) बृहस्पति ग्रह के
- d) सूरज के

11. 7) विद्यालय में कौन सा दिवस मनाया गया था ? *

1 point

Mark only one oval.

- a) स्वास्थ्य दिवस
 b) शिक्षक दिवस
 c) गणतन्त्र दिवस
 d) स्वतन्त्रता दिवस

12. 8) छात्रों ने विद्यालय में प्रस्तुत किया - *

1 point

Mark only one oval.

- a) नाटक
 b) गीत
 c) नृत्य
 d) कविता

13. 9) महाराजा रणजीत सिंह का जन्म हुआ - *

1 point

Mark only one oval.

- a) 1880 में
 b) 1780 में
 c) 1790 में
 d) 1870 में

14. 10) महाराजा रणजीत सिंह के पिता का नाम था - *

1 point

Mark only one oval.

- a) महाराणा सिंह
 b) महान सिंह
 c) महा सिंह
 d) मान सिंह

15. 11) ज़मींदार ने अपनी परेशानी किसे बताई ? *

1 point

Mark only one oval.

- a) भाई को
 b) बहन को
 c) मित्र को
 d) पिता को

16. 12) गौशाला का नौकर दूध किसे दे रहा था ? *

1 point

Mark only one oval.

- a) पड़ोसी को
 b) माँ को
 c) पत्नी को
 d) किसी गरीब को

17. 13) रणजीत सिंह के माथे पर क्या लगा ? *

1 point

Mark only one oval.

- a) फल
 b) पत्थर
 c) तीर
 d) भाला

18. 14) मराठी भाषा की लिपि है - *

1 point

Mark only one oval.

- a) रोमन
 b) देवनागरी
 c) फारसी
 d) गुरुमुखी

19. 15) हिन्दी दिवस किस दिन मनाया जाता है ? *

1 point

Mark only one oval.

- a) 5 सितंबर
 b) 14 सितंबर
 c) 15 सितंबर
 d) 10 दिसंबर

20. 16) आन्ध्र-प्रदेश में कौन सी भाषा बोली जाती है ? *

1 point

Mark only one oval.

- a) तेलुगू
 b) कन्नड़
 c) तमिल
 d) मलयालम

21. 17) आगत स्वर किस भाषा की ध्वनि है ? *

1 point

Mark only one oval.

- a) अंग्रेज़ी
 b) जर्मन
 c) फ्रेंच
 d) स्पेनिश

22. 18) संयुक्त व्यंजन होते हैं --- *

1 point

Mark only one oval.

- a) पाँच
 b) दो
 c) तीन
 d) चार

23. 19) महसूस किया जा सकता है ---- *

1 point

Mark only one oval.

- a) जातिवाचक संज्ञा
 b) व्यक्तिवाचक संज्ञा
 c) द्रव्यवाचक संज्ञा
 d) भाववाचक संज्ञा

24. 20) 'फूल' शब्द है - *

1 point

Mark only one oval.

- a) भाववाचक संज्ञा
 b) जातिवाचक संज्ञा
 c) समूहवाचक संज्ञा
 d) व्यक्तिवाचक संज्ञा

25. 21) 'यशस्वी' शब्द का सही स्त्रीलिंग शब्द है - *

1 point

Mark only one oval.

- a) यशस्विता
 b) यश्विनी
 c) यशस्विनी
 d) यशश्री

26. 22) सदा पुल्लिंग शब्द है -- *

1 point

Mark only one oval.

- a) गंगा
 b) हिमालय
 c) हिन्दी भाषा
 d) रोमन लिपि

27. 23) 'कटु' शब्द का सही विलोम शब्द है - *

1 point

Mark only one oval.

- a) कोमल
 b) कुरूप
 c) मधुर
 d) कठोर

28. 24) 'जय' शब्द का उचित विलोम शब्द है - *

1 point

Mark only one oval.

- a) विजय
 b) प्राजय
 c) अजय
 d) पराजय

29. 25) जातिवाचक संज्ञा के कितने उपभेद होते हैं - *

1 point

Mark only one oval.

a) चार

b) तीन

c) छह

d) दो

This content is neither created nor endorsed by Google.

Google Forms

Class- IV Subject- Hindi (Paper-2)

Date - 13-09-2021

Full Marks- 55

*** Required**

1. Email *

2. Name *

3. Section *

Check all that apply. A B C D E F G H I

4. Roll No. *

1) एक शब्द में उत्तर लिखें -

(1x5=5)

- i) रणजीत सिंह की माता का नाम क्या था ?
- ii) ज़मींदार के मित्र का नाम क्या था ?
- iii) शुक्ल पक्ष के अंत में कौन सी तिथि आती है ?
- iv) कहाँ का मेला चल रहा था ?
- v) प्रदर्शनी में सबसे अच्छे मॉडल और चार्ट बनाने वाले बच्चों को क्या दिया गया ?

2) उचित शब्दों से रिक्त स्थानों को भरें -

(1x5=5)

- i) 'प्रकृति का संदेश' कविता के कवि का नाम _____ है ।
- ii) ऊँट _____ का जानवर है ।
- iii) जिस दिन चाँद दिखाई नहीं पड़ता, उस तिथि को _____ कहते हैं ।
- iv) 'स्वास्थ्य दिवस' _____ की डायरी से लिखी गई है ।
- v) सब _____ के जागने से पहले मानसरोवर का हंस पृथ्वी पर आता है ।

- 3) निर्देशानुसार प्रश्नों के उत्तर लिखें- (2x5=10)
- i) दिए गए शब्दों को शुद्ध रूप में लिखें -
- a) राष्ट्र --
 - b) आर्शीवाद -
- ii) नीचे दिए गए शब्दों के विलोम शब्द लिखें-
- a) मानव --
 - b) उन्नति --
- iii) दिए गए शब्दों के लिंग बदलें -
- a) मादा कोयल -
 - b) वृद्ध -
- iv) नीचे दिए गए शब्दों के अर्थ लिखिए -
- a) पोशाक -
 - b) रोचक -
- v) दिए गए अनेक शब्दों के लिए एक शब्द लिखिए -
- a) जो सब कुछ जानता हो --
 - b) जहाँ पहुँचना कठिन हो --

4) निम्न गद्यांश को ध्यान से पढ़कर दिए गए प्रश्नों के उत्तर लिखिए - (5)

समय अत्यधिक मूल्यवान है । यह किसी की प्रतीक्षा नहीं करता । समय हमारे साथ नहीं चलता बल्कि हमें समय के साथ चलना पड़ता है । जीवन में वही व्यक्ति सफलता प्राप्त करता है जो समय का सदुपयोग करता है । साहसी, सतर्क व परिश्रमी व्यक्ति ही समय रहते अपने कार्य समाप्त कर पाते हैं । इसके विपरीत आलसी व्यक्ति समय की कद्र करना नहीं जानते और असफल होने पर पश्चाताप करते हैं लेकिन बीता समय उनके लिए कभी लौटकर नहीं आता । तभी तो समय की तुलना सागर की लहरों से की गई है क्योंकि सागर में जल की लहरें भी एक ही बार बनती हैं और फिर अपना अस्तित्व खो देती हैं ।

प्रश्न i) कौन किसी की प्रतीक्षा नहीं करता ?

प्रश्न ii) कौन से व्यक्ति कार्य समय पर समाप्त करते हैं ?

प्रश्न iii) समय की तुलना किससे की गई है ?

प्रश्न iv) असफल होने पर कौन पश्चाताप करता है ?

प्रश्न v) 'सफलता' व 'परिश्रमी' शब्द का विलोम लिखिए ।

5) दिए गए प्रश्नों के उत्तर एक वाक्य में लिखिए - (1x5=5)

- i) ऊँट की लंबी टाँगें और चपटे पैर उसके किस काम आते हैं ?
- ii) दीपावली का त्योहार किस तिथि को मनाया जाता है ?
- iii) दाँतों को साफ कैसे रखना चाहिए ?
- iv) किन-किन शब्दों से भाववाचक संज्ञाएँ बनती हैं ?
- v) 'स्वयं', 'खुद', 'अपने-आप' ये शब्द किस सर्वनाम भेद की पहचान हैं ?

6) दिए गए प्रश्नों के दीर्घ उत्तर लिखें - (2x2=4)

- i) रणजीत सिंह ने पत्थर मारने वाली औरत को सज़ा क्यों नहीं दी ?
- ii) मानसरोवर के हंस की बात सुनने के बाद ज़मींदार का जीवन कैसा बन गया ?

7) रिक्त स्थान भरकर कविता पूरी करें - (3)

नभ कहता है फैलो इतना

_____ ॥

समझ रहे हो क्या कहती है

_____ ।

भर लो भर लो अपने मन में

_____ ॥

8) निश्चयवाचक सर्वनाम और अनिश्चयवाचक सर्वनाम में उदाहरण सहित अंतर स्पष्ट करें । (3)

9) वाक्यों को पढ़कर किसने किससे कहा लिखिए - (1x3=3)

i) " बाहर तो नहीं जा सकते चलो रविवार को मेला देखने चलते हैं । "

ii) " तुम बड़े राजा बनो । "

iii) " यह चाँद छोटा-बड़ा कैसे होता है ? "

- 10) मूल्यपरक प्रश्न - उत्तर दो वाक्यों में लिखिए - (2)
वर्तमान परिस्थिति को ध्यान में रखते हुए घर से बाहर निकलते समय हमें किन मुख्य बातों का ध्यान रखना चाहिए ?
- 11) किसी एक विषय पर पत्र लिखें - (5)
i) बुआ की शादी के लिए तीन दिनों के अवकाश हेतु प्रधानाचार्य को पत्र लिखें ।
या
ii) संगीत प्रतियोगिता जीतने की सूचना देते हुए नाना जी को पत्र लिखें ।
- 12) किसी एक विषय पर अनुच्छेद लिखें - (5)
i) प्रिय ऋतु
या
ii) प्रिय त्योहार

5. *

Files submitted:

This content is neither created nor endorsed by Google.

Google Forms

Class- IV Subject- Maths (Paper-1)

Date - 10-09-2021

Full Marks- 25

* Required

1. Email *

2. Name *

3. Section *

Check all that apply.

A

B

C

D

E

F

G

H

I

4. Roll No. *

(I) Choose the correct answer: (1x25=25)

5. (1) In Roman numerals, there are only _____ basic symbols. *

1 point

Mark only one oval.

- a. 5
- b. 6
- c. 7
- d. 8

6. (2) $\frac{6}{6}$ is a _____ fraction. *

1 point

Mark only one oval.

- a. Proper
- b. Improper
- c. Mixed
- d. Unit

7. (3) The number 14510 rounded off to the nearest thousand is _____. *

1 point

Mark only one oval.

- a. 14000
- b. 16000
- c. 15000
- d. 14500

8. (4) The number which is 11 more than 7989 = _____.*

1 point

Mark only one oval.

- a. 5000
- b. 6000
- c. 7000
- d. 8000

9. (5) The number which is divisible by 3 but not by 9 is *

1 point

Mark only one oval.

- a. 45
- b. 57
- c. 99
- d. 126

10. (6) The sum of largest two digit prime number and smallest two digit prime number is *

1 point

Mark only one oval.

- a. 109
- b. 208
- c. 108
- d. 111

11. (7) Every number is a multiple of _____ and _____. *

1 point

Mark only one oval.

- a. 0,1
- b. 0, itself
- c. 1, itself
- d. none of these

12. (8) Alia's father was 57 years old in 2014. He was born in _____. *

1 point

Mark only one oval.

- a. 1955
- b. 1956
- c. 1957
- d. 1958

13. (9) $12 \times 12 + 11 =$ _____. *

1 point

Mark only one oval.

- a. 145
- b. 155
- c. 165
- d. 175

14. (10) $\frac{1}{5} + \frac{2}{5} = \underline{\hspace{2cm}}$. *

1 point

Mark only one oval. a. $\frac{5}{8}$ b. 1 c. $\frac{3}{5}$ d. $\frac{8}{8}$

15. (11) A 5-digit number begins with _____ place. *

1 point

Mark only one oval. a. lakhs b. ten lakhs c. thousands d. ten thousands

16. (12) The place value of 9 in the numeral 90,521,367 is *

1 point

Mark only one oval. a. 9 million b. 90 million c. 90 lakh d. 9 lakh

17. (13) The difference between two numbers is 4937. If the greater number is 30451, what is the smaller number? * 1 point

Mark only one oval.

- a. 25514
- b. 25515
- c. 25516
- d. 25517

18. (14) The place value and face value of a digit are always equal at the * 1 point

Mark only one oval.

- a. ones place
- b. tens place
- c. hundreds place
- d. thousands place

19. (15) LCM of 7 and 14 = _____. * 1 point

Mark only one oval.

- a. 89
- b. 98
- c. 14
- d. 21

20. (16) The difference of smallest composite number and smallest prime number is *

1 point

Mark only one oval.

- a. 6
- b. 7
- c. 2
- d. None of these

21. (17) HCF of 36 and 42 is *

1 point

Mark only one oval.

- a. 7
- b. 8
- c. 9
- d. 6

22. (18) The sum of the greatest five digit number and greatest four digit number is *

1 point

Mark only one oval.

- a. 100989
- b. 190989
- c. 109998
- d. 109999

23. (19) The Roman numeral for 95 = _____.*

1 point

Mark only one oval.

a. XCV

b. C

c. XC

d. XXV

24. (20) 80 hundreds + 60 tens = _____.*

1 point

Mark only one oval.

a. 8570

b. 8600

c. 8700

d. 8070

25. (21) The product of all odd numbers between 2 and 8 is *

1 point

Mark only one oval.

a. 115

b. 110

c. 105

d. 150

26. (22) The sum of the place value and face value of 3 in 2239 is *

1 point

Mark only one oval.

- a. 6
- b. 9
- c. 30
- d. 33

27. (23) 8, 13, 18, 23, _____, _____. *

1 point

Mark only one oval.

- a. 28, 33
- b. 33, 28
- c. 25, 35
- d. 35, 25

28. (24) The fraction equivalent to $\frac{1}{3}$ is *

1 point

Mark only one oval.

- a. $\frac{2}{4}$
- b. $\frac{3}{6}$
- c. $\frac{4}{9}$
- d. $\frac{6}{18}$

29. (25) LCM of 3, 5, 6 is *

1 point

Mark only one oval.

a. 90

b. 60

c. 30

d. 20

This content is neither created nor endorsed by Google.

Google Forms

Class- IV Subject- Maths (Paper-2)

Date - 10-09-2021

Full Marks- 55

*** Required**

1. Email *

2. Name *

3. Section *

Check all that apply. A B C D E F G H I

4. Roll No. *

Section - A**(I) Fill in the blanks: (1x10=10)**(1) $XIX + XXX =$ _____ (Write in Roman Numeral)

(2) The place value of 8 in 4,84,695 is _____

(3) 1 lakh – 100 hundreds = _____

(4) Largest 6 digit number + 1 = _____

(5) Multiplicand x Multiplier = _____

(6) $6789 \times 0 =$ _____

(7) LCM of 2 and 5 = _____

(8) HCF of 9 and 7 = _____

(9) The smallest odd prime number is _____

(10) 1, 4, 9, 16, _____, _____

(II) State whether each statement is true or false: (1x5=5)

- (1) The sum of a number and 1 is the number itself.
- (2) The remainder is always smaller than the divisor.
- (3) The smallest odd composite number is 3.
- (4) $\frac{8}{8}$ is a proper fraction.
- (5) The face value of 8 in 89.30 is 80.

(III) Answer in one word: (1x5=5)

- (1) Fraction with 1 as numerator.
- (2) The smallest of the common multiples of two or more numbers
- (3) In a division sum, the number to be divided.
- (4) The only even prime number.
- (5) A number 1 more than a given number.

Section – B
(Show working in each case)

(IV) Do as directed: (2x6=12)

- (1) A man saves ₹150 per month. How much will he save in 3 years?
- (2) $LXXX \div VIII$. Write the answer in Roman numerals.
- (3) By how much is 90125 more than 58478?
- (4) Find the HCF of 16 and 24.
- (5) Write all prime numbers between 20 and 40.
- (6) Arrange the following numbers in ascending order:
245683, 254836, 2685240, 25863

(V) Solve:

(3x5=15)

- (1) The product of two numbers is 9156. If one number is 84, find the other number.
- (2) 349 sheets are required to print a book. How many sheets will be required to print 2856 books?
- (3) The population of a city is 432105. If the number of males is 298786, find the number of females in the city.
- (4) The sum of three numbers is 352.259. If two of them are 17.25 and 169.05, find the third number.
- (5) How many hours are there in 27 days?

(VI) Solve the following questions:**(4x2=8)**

(1) Represent the given information through a pictograph.

Number of students playing different games in the school:

Football	Cricket	Badminton	Volleyball	Basketball
40	60	35	50	45

(2) (a) Write all the even multiples of 3 between 10 and 30.

(b) Show that 14 is a factor of 1246.

5. *

Files submitted:

This content is neither created nor endorsed by Google.

Google Forms

Class- IV Subject- G. Science (Paper-1)

Date - 15-09-2021

Full Marks- 25

* Required

1. Email *

2. Name *

3. Section *

Check all that apply.

A

B

C

D

E

F

G

H

I

4. Roll No. *

I) Choose the correct option from the following: [1X25=25]

5. 1) Lack of protein in the diet causes a disease called _____ . *

1 point

Mark only one oval.

- a) Obesity
- b) Kwashiorkor
- c) Diabetes
- d) Heart diseases

6. 2) Which one of these is not an example of underwater plant? *

1 point

Mark only one oval.

- a) Hydrilla
- b) Vallisneria
- c) Duckweed
- d) Pondweed

7. 3) Rahul did a study on two animals P and Q. At the end of his study he prepared the following table about his observations. Identify the animals P and Q. *

Observations	Animal P	Animal Q
There are four main stages in the life cycle	✓	×
It has six legs	✓	✓
Its larva is called nymph	×	✓

- Animal P**
 a) Butterfly
 b) Butterfly
 c) Hen
 d) Fish

- Animal Q**
 Frog
 Grasshopper
 Frog
 Grasshopper

Mark only one oval.

- a)
 b)
 c)
 d)

8. 4) Which one of the following is not a part of the circulatory system? * 1 point

Mark only one oval.

- a) Heart
 b) Blood
 c) Blood vessels
 d) Liver

9. 5) The flat green part of a leaf is known as _____.*

1 point

Mark only one oval.

- a) Petiole
- b) Midrib
- c) Veins
- d) Lamina

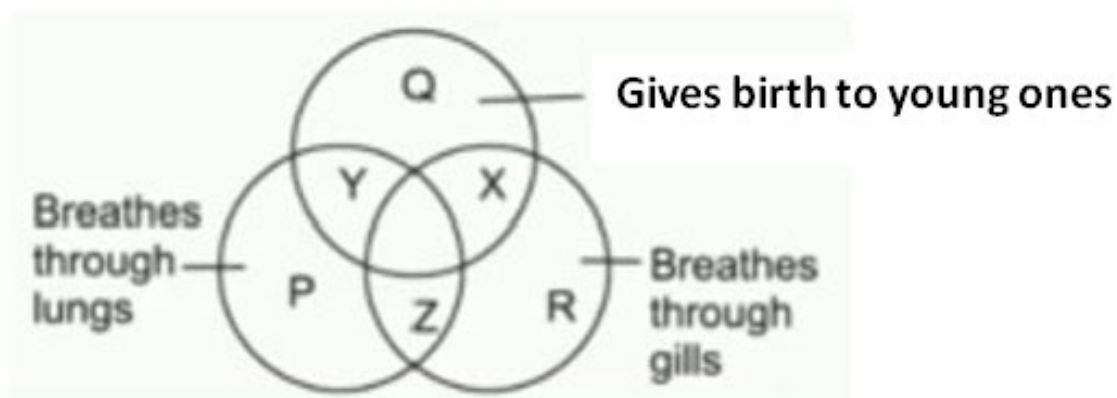
10. 6) A child prefers cheese, chocolates, cream biscuits, fried food etc and refuses to eat any fruits or vegetables. His diet *

1 point

Mark only one oval.

- a) is rich in fats
- b) lacks vitamins and minerals
- c) has led to increase in weight
- d) all of these

11. 7) Study the given Venn diagram carefully. Which letter represents a whale? * 1 point



Mark only one oval.

- a) Y
- b) X
- c) Z
- d) R

12. 8) Mansi covered a leaf of a potted plant with black paper and kept the plant under sunlight for a few days and then tested it for the presence of starch. The colour of the leaf does not turn blue-black. What does this indicate? * 1 point

Mark only one oval.

- a) The black cover absorbed all the starch present in the leaf.
- b) Starch is evaporated from the leaves.
- c) Plants store food in the form of glucose.
- d) Leaves prepare food only in the presence of sunlight.

13. 9) Which of the following statements is correct? *

1 point

Mark only one oval.

- a) Some sources of carbohydrates are oil, butter and ghee.
- b) Vitamins help the body to repair worn- out cells and tissues.
- c) Growing children need more proteins than adults.
- d) None of these

14. 10) Which one of the following is a type of cactus? *

1 point

Mark only one oval.

- a) Saguaro
- b) Redwood
- c) Maple
- d) Mahogany

15. 11) Read the statements carefully and choose the correct option. *

1 point

Statement A: There are only two types of blood vessels in the human body.

Statement B: Arteries carry blood from heart to different parts of a body.

Mark only one oval.

- a) Only statement A is true
- b) Only statement B is true
- c) Both A and B are true
- d) Both A and B are false

16. 12) Which of the following is a correct match? *

1 point

Mark only one oval.

- a) Aerial animal – Frog
- b) Arboreal animal – Koala bear
- c) Terrestrial Animal - Bat
- d) Aquatic animal - salamander

17. 13) Which of the following is an example of a non-green plant? *

1 point

Mark only one oval.

- a) Banyan
- b) Avicennia
- c) Cedar
- d) Coralroot

18. 14) Which of the animals given below reproduces by laying eggs? *

1 point

I. Snakes	II. Cats
III. Birds	IV. Fish

Mark only one oval.

- a) Only I and III
- b) Only I and IV
- c) Only II and IV
- d) Only I, III and IV

19. 15) The process of keeping eggs warm, often done by parent birds by sitting on them until they hatch into young ones is called _____. *

Mark only one oval.

- a) Adaptation
- b) Incubation
- c) Metamorphosis
- d) Moulting

20. 16) Observe the figure given below : *

1 point



Stick insect

The given animal protects itself from its enemies by using

Mark only one oval.

- a) thick fur
- b) camouflage
- c) blubber
- d) hard shell

21. 17)The method of preserving mangoes in a concentrated solution of salt and oil is known as *

1 point

Mark only one oval.

- a) Jellying
 b) Refrigerating
 c) Canning
 d) Pickling

22. 18)The trees that shed their leaves in autumn which grow back again during spring are called _____ . *

1 point

Mark only one oval.

- a) Deciduous trees
 b) Evergreen trees
 c) Xerophytes
 d) Insectivorous plants

23. 19)Mammals are also known as *

1 point

Mark only one oval.

- a) Reptiles
 b) Oviparous animals
 c) Viviparous animals
 d) Both b and c

24. 20)The gas essential for the process of photosynthesis to take place * 1 point

Mark only one oval.

- a) Carbon dioxide
- b) Oxygen
- c) Nitrogen
- d) Helium

25. 21)A balanced diet varies from person to person. It depends on * 1 point

Mark only one oval.

- a) age of the person only
- b) occupation of the person only
- c) Both a and b
- d) None of these

26. 22) Water is an important part of our diet as it * 1 point

Mark only one oval.

- a) helps in getting rid of waste
- b)helps in maintaining the body temperature
- c) helps all the body systems to work properly
- d) all of these

27. 23)The number of times the heart beats in a minute is called _____. * 1 point

Mark only one oval.

- a)Blood circulation
- b) Pulse
- c) Both a and b
- d) None of these

28. 24) Select the right match * 1 point

Column I	Column II
p) fish	i) green leafy vegetables
q)iron	ii) Animal protein
r) potato	iii) starch

Mark only one oval.

- a) p- i , q- ii,r- iii
- b) p-iii, q-i , r-ii
- c) p-ii , q- iii, r-i
- d) p-ii, q- i , r-iii

29. 25)Which of the following plants generally have leaves without stomata? * 1 point

Mark only one oval.

- a) Underwater plants
- b)Fixed plants
- c) Evergreen plants
- d) Emergent plants

This content is neither created nor endorsed by Google.

Google Forms

Class- IV Subject- G. Science (Paper-2)

Date - 15-09-2021

Full Marks- 55

*** Required**

1. Email *

2. Name *

3. Section *

Check all that apply. A B C D E F G H I

4. Roll No. *

I. Define :- (2x3=6)

1. Moulting
2. Chlorophyll
3. Posture

II. Answer the following in one sentence :- (1x5=5)

1. Why do some animals undergo hibernation?
2. Name any two wastes released by the human excretory system in the form of urine.
3. Why do underwater plants have thin, narrow and ribbon-like leaves?
4. What is the role of veins in leaves?
5. What is metamorphosis?

III. Answer these questions briefly :- (2x3=6)

1. What is a food chain? Give an example of a complete food chain.
2. Write one adaptation for each type of the following terrestrial plants.
 - a) Plants on mountains and hills
 - b) Plants in deserts

3. Reena who studies in Class-4 has very weak bones and unhealthy teeth. She goes to the doctor who said that she is suffering from a disease due to lack of a mineral.

- (a) Name the mineral which makes our bones and teeth strong.
- (b) Mention two food items which are rich sources of this mineral.

IV. Give reason :- (2x2=4)

- 1. Carbohydrates are the main energy source for our body even though fats give twice as much energy.
- 2. Polar bears have white fur on their body and blubber under their skin.

V. Differentiate between the following terms :- (2x2=4)

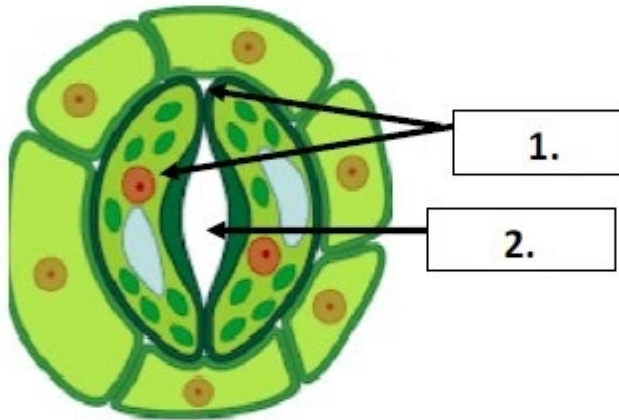
- 1. Extinct animals and Endangered animals
- 2. Aquatic mammals and Terrestrial mammals

VI. Answer these questions in detail :- (3x2=6)

- 1. Explain any three adaptations of camels which help them to survive in deserts .
- 2. Mention the functions for each of the following -
 - a) Roughage in our body
 - b) Capillaries
 - c) Kidneys(Write any one function for each)

VII. a) Draw and label a diagram to show the structure of an egg :- (3)
(Label at least any four parts)

b) Identify the parts labelled as (1) and (2) in the given diagram:- (1)



1. _____

2. _____

VIII. Name the following:- (1x3=3)

1. The larval form of a housefly _____
2. The part of the human excretory system that stores urine temporarily _____
3. A cluster of eggs laid by frogs which appear as jelly-like substance _____

IX. Rewrite the sentences by changing the underlined words to make correct statements :- (1x2=2)

1. The long sleep of animals during summer months is called hibernation.
2. Water lily is an insectivorous plant that has two lobes with hair-like spikes on their edges.

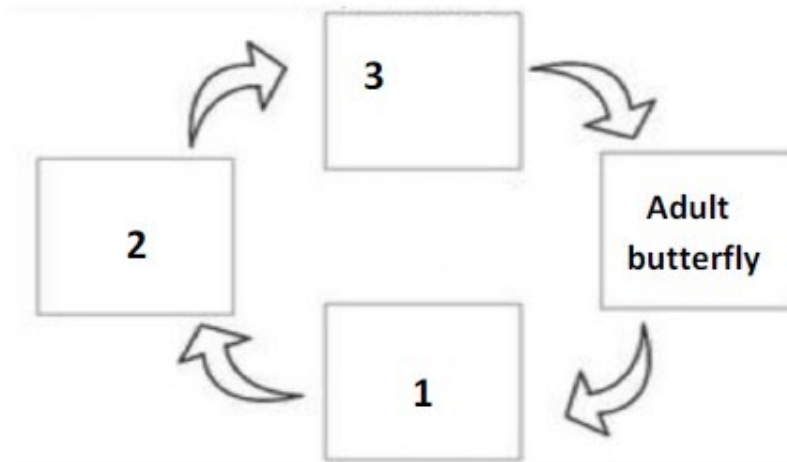
X. Arrange the following terms in proper sequence related to what is given within brackets :- (1x2=2)

1. ureters, kidney, urethra, urinary bladder
(Human excretory system)
2. adult frog, tadpole, young frog, egg
(life cycle of a frog)

XI. Complete the series:- (1x3=3)

1. Lotus : Fixed plant :: _____ : Emergent plant
2. Lice : Ectoparasite :: _____ : Endoparasite
3. Cactus : _____ :: Rhizophora : Mangrove

XII. Given below is a flowchart related to the life cycle of a butterfly. Study the same and label the guidelines (1), (2) and (3) :- (1x3=3)
(Do not copy the flowchart, write only the answers)



1. _____ 2. _____ 3. _____

XIII. Give one example for each of the following :- (1x2=2)

1. A parasitic plant
2. A mammal that reproduces by laying eggs

XIV. Identify the following from the given description :- (1x3=3)

1. The chemical used to test the presence of starch in a leaf _____
2. A natural substance present in plant products which human beings cannot digest _____
3. The gas released during the process of photosynthesis _____

XV. Fill in the blanks :- (1x2=2)

1. The part of the leaf which attaches it to the stem or branch is called _____ .
2. _____ are blood vessels that carry blood from different parts of the body to the heart.

5. *

Files submitted:

This content is neither created nor endorsed by Google.

Google Forms

Class- IV Subject- S. Science (Paper-1)

Date - 06-09-2021

Full Marks- 25

* Required

1. Email *

2. Name *

3. Section *

Check all that apply.

A

B

C

D

E

F

G

H

I

4. Roll No. *

Choose the correct option.

5. 1. This place is not a tourist place of Jammu and Kashmir *

1 point

Mark only one oval.

- (a) Amarnath
- (b) Srinagar
- (c) Gulmarg
- (d) Ladakh

6. 2. This state is not a north eastern state: *

1 point

Mark only one oval.

- (a) Meghalaya
- (b) Sikkim
- (c) Assam
- (d) Andhra Pradesh

7. 3. There are ____ Union Territories. *

1 point

Mark only one oval.

- (a) 6
- (b) 7
- (c) 8
- (d) 9

8. 4. This soil is used for making bricks: *

1 point

Mark only one oval.

- (a) black soil
- (b) mountain soil
- (c) laterite soil
- (d) alluvial soil

9. 5. River Brahmaputra, enters in India through this state: *

1 point

Mark only one oval.

- (a) Jammu & Kashmir
- (b) Arunachal Pradesh
- (c) Assam
- (d) Sikkim

10. 6. People of this state belongs to the Garo,Khasi and Jaintia tribes: *

1 point

Mark only one oval.

- (a) Tripura
- (b) Meghalaya
- (c) Manipur
- (d) Mizoram

11. 7. This is not a tributary of river Ganges: *

1 point

Mark only one oval.

- (a) Kaveri
- (b) Yamuna
- (c) Son
- (d) Gandak

12. 8. Mohiniattam is a classical dance form of this state *

1 point

Mark only one oval.

- (a) Kerala
- (b) Karnataka
- (c) Tamil Nadu
- (d) Tripura

13. 9. Fort Aguada is in which state: *

1 point

Mark only one oval.

- (a) Maharashtra
- (b) Goa
- (c) Odisha
- (d) none of these

14. 10. Water from _____ river has been brought to the Indira Gandhi Canal: * 1 point

Mark only one oval.

- (a) Ravi
 (b) Sutlej
 (c) Chenab
 (d) Indus

15. 11. Sand dunes are also found on this planet: * 1 point

Mark only one oval.

- (a) Mercury
 (b) Venus
 (c) Mars
 (d) Jupiter

16. 12. Which of these festival is celebrated in Rajasthan: * 1 point

Mark only one oval.

- (a) Chapchar Kut
 (b) Strawberry festival
 (c) Gangaur
 (d) None of these

17. 13. Eastern and western coastal plains meet at : *

1 point

Mark only one oval.

- (a) Aravalli hills
- (b) Rajmahal Hills
- (c) Kanniyakumari
- (d) Nilgiri Hills

18. 14. Indore, Gwalior and Jabalpur are the industrial cities of this state: *

1 point

Mark only one oval.

- (a) Madhya Pradesh
- (b) Chhattisgarh
- (c) Uttar Pradesh
- (d) Rajasthan

19. 15. Andaman and Nicobar are separated by _____: *

1 point

Mark only one oval.

- (a) 9 degree Channel
- (b) 10 degree Channel
- (c) 11 degree Channel
- (d) 20 degree Channel

20. 16. Our state Jharkhand, lies in this region. *

1 point

Mark only one oval.

- (a) Malwa plateau
- (b) Deccan plateau
- (c) Chota Nagpur Plateau
- (d) none of these

21. 17. This island is in Arabian Sea: *

1 point

Mark only one oval.

- (a) Daman
- (b) Andaman
- (c) Diu
- (d) Saila

22. 18. This river divides the Southern plateau into 2 parts: *

1 point

Mark only one oval.

- (a) Narmada
- (b) Ganga
- (c) Godavari
- (d) Mahanadi

23. 19.This state is famous for its sandalwood handicraft. *

1 point

Mark only one oval.

- (a) Telangana
- (b) Andhra Pradesh
- (c) Maharashtra
- (d) Karnataka

24. 20. This state is the main producer of wheat and sugarcane: *

1 point

Mark only one oval.

- (a) Punjab
- (b) Rajasthan
- (c) Uttar Pradesh
- (d) Maharashtra

25. 21. This crop is not included in Horticulture: *

1 point

Mark only one oval.

- (a) Apple
- (b) Paddy
- (c) Rose
- (d) Marigold

26. 22. Inland fishing is not popular in this state: *

1 point

Mark only one oval.

- (a) Maharashtra
- (b) Chhattisgarh
- (c) Assam
- (d) Himachal Pradesh

27. 23. Moong, masoor, arhar and gram are examples of: *

1 point

Mark only one oval.

- (a) Rice
- (b) Wheat
- (c) Millets
- (d) Pulses

28. 24. This kind of soil is rich in humus . *

1 point

Mark only one oval.

- (a) laterite soil
- (b) black soil
- (c) desert soil
- (d) mountain soil

29. 25.This soil is formed when minerals are washed away from the soil due to very heavy rainfall: * 1 point

Mark only one oval.

- (a) alluvial
- (b) laterite
- (c) red soil
- (d) desert

This content is neither created nor endorsed by Google.

Google Forms

Class- IV Subject- S. Science (Paper-2)

Date - 06-09-2021

Full Marks- 55

* Required

1. Email *

2. Name *

3. Section *

Check all that apply.

A

B

C

D

E

F

G

H

I

4. Roll No. *

A. Name the following: (1×6=6)

- (1) This state is carved out of Uttar Pradesh:
- (2) The Governor(9th) of Jharkhand:
- (3) World's largest delta:
- (4) Black soil is formed from:
- (5) Jaggery is made from:
- (6) This Indian athlete from Haryana won the gold medal in Tokyo 2020 Olympics:

B. Fill in the blanks: (1×6=6)

- (1) The boundary between India and Pakistan is called _____.
- (2) _____, was the first woman to climb Mt. Everest.
- (3) _____ (dance) is an important part of the Chapchar Kut festival.
- (4) River Brahmaputra is called _____ in Tibet.
- (5) Jaisalmer Fort is also known as _____ Fort.
- (6) Mussoorie, Dehradun and Haridwar are the famous tourist places of _____ (state).

C. Write true for the correct statements and false for the wrong statements. (1×5=5)

- (1) Jog Falls is in Karnataka.
- (2) Karnataka is famous for Bidri work.
- (3) In Andaman and Nicobar most people speak Bangla.
- (4) Great Indian Desert is located to the South of Aravalli hills.
- (5) There are nine classical dances of India.

D. Guess the state ? (1×5=5)

- (1) Vivekanand Rock Memorial is in this state.
- (2) I am the newest state.
- (3) India's largest monastery is here.
- (4) Here Kumbh Mela is held every 12 years.
- (5) Yakshagana is a popular dance drama of this state.

E. Define the following:. (1×8=8)

- (1) lagoon (2) Kangri (3) Oasis (4) Alluvial soil
(5) Humus (6) Pesticide (7) Plateau (8) Raw material

F. Answer in detail:**(3×5=15)**

- (1) What has led to an increase in agricultural production since independence?
- (2) How can we prevent soil erosion?
- (3) Why is mining an important activity in Jharkhand?
- (4) Into how many parts is the Western Coastal Plain divided? Write their names.
- (5) How do the rivers of the northern plains make the land fertile?

G. Answer in short:**(2×5=10)**

- (1) Write the names of four monuments that you would like to visit in Delhi.
- (2) Which are the three parallel ranges of Himalaya? Name the highest peak of India.
- (3) Write the names of the neighbouring states (four) of Jharkhand.
- (4) Why does the capital of Jammu and Kashmir shift from Srinagar to Jammu in winter?
- (5) Which hill ranges surround the Central Highlands?

5. *

Files submitted:

Google Forms

Class- IV Subject- Computer (Paper-1)

Date - 04-09-2021

Full Marks- 25

* Required

1. Email *

2. Name *

3. Section *

Check all that apply.

A

B

C

D

E

F

G

H

I

4. Roll No. *

Choose the correct option.

5. Q1) The information in printed form on the paper or sheet is termed as _____ . * 1 point

_____ . *

Mark only one oval.

- a) Soft copy
- b) Hard copy
- c) Results
- d) Scanned image

6. Q2) In _____ 'Blaise Pascal' invented calculating machine called Pascaline. * 1 point

Mark only one oval.

- a) 1947 AD
- b) 1642 AD
- c) 1617 AD
- d) 1833-34

7. Q3) What is the shortcut key to open My Computer or This PC? * 1 point

Mark only one oval.

- a) Alt+Tab
- b) Alt + F4
- c) Windows key + E
- d) F1

8. Q4) _____ is a temporary storage area that stores the contents which has been cut or copied for future use. * 1 point

Mark only one oval.

- a) Clipboard
- b) Soft copy
- c) Text
- d) Memory card

9. Q5) Writer is a word processor under open office package developed by _____ . * 1 point

Mark only one oval.

- a) Microsoft
- b) Sun Microsystem
- c) Lenevo
- d) Touchpad

10. Q6) Choose the correct website name from which we can download openoffice. * 1 point

Mark only one oval.

- a) www.openoffice.com
- b) www.openoffice.org
- c) www.tuxpaint.org
- d) www.tuxpaint.com

11. Q7) _____ option helps to retrieve previously made contents that existed before doing changes in the document. * 1 point

Mark only one oval.

- a) Find and Replace
- b) Redo
- c) Undo
- d) Deleting Text

12. Q8) Which device is believed to be the first calculator of the world? * 1 point

Mark only one oval.

- a) Abacus
- b) Napier Bones
- c) Difference Engine
- d) Pascaline Adding machine

13. Q9) _____ is the first wireless mouse which was developed by Logitech. * 1 point

Mark only one oval.

- a) John Napier
- b) Cordless Mouse Man
- c) Lady Ada Lovelace
- d) Charles Babbage

14. Q10) _____ is known as the World's first programmer. *

1 point

Mark only one oval.

- a) John Napier
- b) Cordless Mouse Man
- c) Lady Ada Lovelace
- d) Charles Babbage

15. Q11) Extension always start with ____ sign. *

1 point

Mark only one oval.

- a) @
- b) .
- c) ,
- d) +

16. Q12) Usually while typing the text, misspelt word is underline with _____ wavy line and grammatically mistake are underlined with _____ wavy line. *

1 point

Mark only one oval.

- a) Blue, yellow
- b) Red, green
- c) Orange, pink
- d) Black, white

17. Q13) Typed letters, character, numbers or special characters are known as _____ . * 1 point

_____ . *

Mark only one oval.

- a) Document
- b) Text
- c) Soft copy
- d) Page preview

18. Q14) Choose the correct example of word processor. * 1 point

Mark only one oval.

- a) Open office draw
- b) Notepad
- c) Open office impress
- d) Open office writer

19. Q15) Changing the font style, increasing/decreasing font size, making the text bold etc. is known as _____ the document. * 1 point

Mark only one oval.

- a) Formatting
- b) Inserting
- c) Editing
- d) Deleting

20. Q16) _____ are used to scan products barcode for fetching the price & product details. * 1 point

Mark only one oval.

- a) Scanner
 b) Printer
 c) Barcode reader
 d) Punch card

21. Q17) To change the wallpaper, screensaver of the desktop screen select the _____ option. * 1 point

Mark only one oval.

- a) New
 b) Personalize
 c) Sort by
 d) View

22. Q18) _____ option displays the print layout of the document . * 1 point

Mark only one oval.

- a) Page Preview
 b) Save
 c) Open
 d) Print

23. Q19) Choose the correct full form of GUI *

1 point

Mark only one oval.

- a) Garden user interface
- b) Graphical user interface
- c) Graphs user interested
- d) Graphs user interface

24. Q20) _____ is an extension of a file in open office writer. *

1 point

Mark only one oval.

- a) .docx
- b) .pptx
- c) .odt
- d) .odb

25. Q21) A _____ is a thin strip like bar that lies at the bottom of the screen. *

1 point

Mark only one oval.

- a) Icons
- b) Taskbar
- c) Desktop
- d) Quick launch bar

26. Q22) In windows 8.1 , quick launch bar is renamed & popularly known as _____ . * 1 point

_____ . *

Mark only one oval.

- a) System tray
- b) Pin
- c) Toolbar
- d) My computer

27. Q23) Any file or folder which is deleted in windows get transferred to the _____ . * 1 point

_____ . *

Mark only one oval.

- a) Trash
- b) Recycle Bin
- c) Documents
- d) Taskbar

28. Q24) _____ means to erase the unwanted portion of text . * 1 point

Mark only one oval.

- a) Deletion
- b) Copying
- c) Moving
- d) Inserting

29. Q25) Insertion point is also known as _____ . *

1 point

Mark only one oval.

- a) Cursor
- b) Arrow
- c) Mouse pointer
- d) Point

This content is neither created nor endorsed by Google.

Google Forms

Class- IV Subject- Computer (Paper-2)

Date - 04-09-2021

Full Marks- 25

* Required

1. Email *

2. Name *

3. Section *

Check all that apply.

A

B

C

D

E

F

G

H

I

4. Roll No. *

Q1) Fill in the blanks : **[0.5X5=2.5]**

- a) _____ feature in word processor is used to correct the misspelt words automatically .
- b) _____ is known as father of computer.
- c) Text kept in a file in an organized way is also called _____ .
- d) _____ is also known as system tray.
- e) Each Icon represents a _____ .

Q2) Write the shortcut keys combination required to accomplish the following task : **[0.5X5 = 2.5]**

- a) To get general help in reference to active screen.
- b) To switch between the opened application
- c) To make the text bold
- d) To exit from word processor
- e) To select the entire document

Q3) Match the following : **[0.5X4=2]**

- | | |
|------------------------|--------------------------|
| a) Network connection | (i) Joseph J. Jacquard |
| b) Punched card | (ii) ENIAC |
| c) Quick Launch Bar | (iii) System Tray |
| d) Electronic computer | (iv) Pin |

Q4) Mention two uses of computers at the following : [2X2= 4]

- a) Hospital
- b) School

Q5) Differentiate between : [2X2=4]

- a) Undo and Redo
- b) Joystick and printer

Q6) Write full form of these : [1X4=4]

- a) VDU
- b) MIPS
- c) TFT
- d) LED

Q7) Answer the following questions : [2X3=6]

- a) What do you understand by the term Word processing package ? Write any two examples of Word processor.
- b) What is Desktop Screen ?
- c) Write any two limitations of the Computer System ?

5. *

Files submitted:

This content is neither created nor endorsed by Google.

Google Forms

Class- IV Subject- General Knowledge

Date - 20-09-2021

Full Marks- 50

* Required

1. Email *

2. Name *

3. Section *

Check all that apply.

A

B

C

D

E

F

G

H

I

4. Roll No. *

Choose the correct option.

5. 1. Countries located on or near the southern and eastern shores of Mediterranean Sea are part of... * 1 point

Mark only one oval.

- a. Latin America
- b. The Caribbean
- c. Middle East
- d. South East Asia

6. 2. What is Japan known as : * 1 point

Mark only one oval.

- a. The land of Windmills
- b. The land of the rainbow
- c. Land of the Rising Sun
- d. Land of Thunderbolt

7. 3. What is the sobriquet of Cuba? * 1 point

Mark only one oval.

- a. The Gift of the Nile
- b. The Sugar Bowl of the World
- c. The City of Seven Hills
- d. The Sugarcane Bowl of the World.

8. 4. Which of the following type of mammals lay eggs instead of giving birth? * 1 point

Mark only one oval.

- a) Marsupials
 b) Monotremes
 c) Ungulates
 d) Birds

9. 5. It is the largest freshwater lake in the world by surface area. It lies between the United States and Canada. * 1 point

Mark only one oval.

- a) Lake Victoria
 b) Lake Superior
 c) Kolleru Lake
 d) Dal Lake

10. 6. This huge monument in Java is a popular Buddhist pilgrimage site. * 1 point

Mark only one oval.

- a) Angkor Wat
 b) Shikoku
 c) Borobudur
 d) Bodhgaya

11. 7. These are mountain ranges that run parallel to the Bay of Bengal and the Arabian Sea coasts. * 1 point

Mark only one oval.

- a) Himalayan mountains
- b) Eastern and Western Ghats
- c) The Andes mountains
- d) Southern and northern Ghats

12. 8. Which two countries of the world are connected by the Khyber Pass? * 1 point

Mark only one oval.

- a) Pakistan and Afghanistan
- b) Pakistan and China
- c) Pakistan and India
- d) Srilanka and China

13. 9. Who became the first Indian to cross the English Channel? * 1 point

Mark only one oval.

- a) Bhanu Athaiya
- b) Mihir Sen
- c) Arati Saha
- d) Michael Phelps

14. 10. Who was the first American woman space traveller? *

1 point

Mark only one oval.

- a) Sally Ride
- b) Yuri Gagarin
- c) Valentina Tereshkova
- d) Sunita Williams

15. 11. Who built Chittorgarh Fort, India? *

1 point

Mark only one oval.

- a) Akabar
- b) Shah Jahan
- c) Maurya rulers
- d) Dravidian

16. 12. International Women's Day is celebrated on: *

1 point

Mark only one oval.

- a) 12 March
- b) 8 March
- c) 21 March
- d) 18 March

17. 13. Who was posthumously awarded the Bharat Ratna in 1991. He was the youngest prime minister of India. * 1 point

Mark only one oval.

- a) Jawaharlal Nehru
 b) Rajiv Gandhi
 c) LalBahadurShastri
 d) Narendra Modi

18. 14. Which movement was led by Amrita Devi, a member of the Bishnoi community, and her daughter who sacrificed their lives to protect against the felling of trees? * 1 point

Mark only one oval.

- a) Save silent Valley Movement
 b) Chipko Movement
 c) Jungle Bachao Andholan
 d) Narmada Bachao Andolan

19. 15. Which lake is known as 'Jaisamand Lake'. This is the second largest artificial lake in Asia? * 1 point

Mark only one oval.

- a) Loktak Lake
 b) Dhebar Lake
 c) Kolleru Lake
 d) Lake Superior

20. 16. Which country is also known as 'The Land of White Elephants'? * 1 point

Mark only one oval.

- a) Finland
 b) Ireland
 c) Thailand
 d) Bangladesh

21. 17. Which carnivorous plant's leaves are covered with a hair like shiny substance, which produces sticky juice? This sticky juice entraps insects, and they are soon digested. * 1 point

Mark only one oval.

- a) Pitcher plant
 b) Cobra plant
 c) Sundew
 d) Venus Flytrap

22. 18. Mexico, Central America, South America, and the West Indies are in the region of ... * 1 point

Mark only one oval.

- a) Latin America
 b) The Caribbean
 c) Middle East
 d) The Mediterranean

23. 19. Which country is known as the 'Land of Cakes'? *

1 point

Mark only one oval.

- a) China
- b) Scotland
- c) Ireland
- d) England

24. 20. In which Indian state is Pushkar Lake located? *

1 point

Mark only one oval.

- a) Gujarat
- b) Rajasthan
- c) Uttar Pradesh
- d) Madhyapradesh

25. 21. She dedicated her life to extensive research on the behaviour of chimpanzees of Gombe Stream National Park in Tanzania. *

1 point

Mark only one oval.

- a) Dr. Jane Goodall
- b) Kinkri Devi
- c) Medha Patkar
- d) Menaka Gandhi

26. 22. The first artificial satellite to go around the earth was the Russian Satellite Sputnik 1. It was launched in *

1 point

Mark only one oval.

- a) November 1957
- b) October 1957
- c) December 1972
- d) October 1967

27. 23. Who was the first woman to become the prime minister of a country? *

1 point

Mark only one oval.

- a) Indira Gandhi
- b) Sirimavo Bandaranaike
- c) Angela Merkel
- d) Kamala Harris

28. 24. A winter service vehicle is used to remove ... *

1 point

Mark only one oval.

- a) mud in pond
- b) dust on the road
- c) ice and snow
- d) water from the road

29. 25. Which female archer from Jharkhand represented India in Tokyo Olympics 2021 * 1 point

Mark only one oval.

- a) Sunita Sharma
 b) Dipika Kumari
 c) Harpreet Kaur
 d) Jhulan Goswami

30. 26. Which country won bronze medal for men's hockey in the Tokyo Olympics 2021. * 1 point

Mark only one oval.

- a) China
 b) Japan
 c) India
 d) Srilanka

31. 27. Who has won Gold medal for men's javelin throw in the Tokyo Olympics 2021. * 1 point

Mark only one oval.

- a) Bajrang Puniya
 b) Ravi Dahiya
 c) Neeraj Chopra
 d) Pargat Singh

32. 28. Which 2 vaccines for Covid 19, India has manufactured? *

1 point

Mark only one oval.

- a) Penicillin, Amoxicillin
- b) Sputnik, Moderna
- c) Covaxin, Covishield
- d) Coronil, Coviden

33. 29. This is the largest ocean on earth. *

1 point

Mark only one oval.

- a) Pacific
- b) Atlantic
- c) Antarctic
- d) Bay of Bengal

34. 30. This continent is famous for the Great Barrier Reef. *

1 point

Mark only one oval.

- a) North America
- b) Africa
- c) Australia
- d) Latin America

35. 31. Which sea is bordered by five countries. This is the largest inland water body on earth. * 1 point

Mark only one oval.

- a) Indian Ocean
 b) Southern Ocean
 c) Caspian Sea
 d) Black Sea

36. 32. This tower in Italy has 294 steps inside it : * 1 point

Mark only one oval.

- a) Leaning Tower of Pisa
 b) Elfin Tower
 c) Qutubminar
 d) World Trade Center

37. 33. What's the name of the smallest nation state in the world? * 1 point

Mark only one oval.

- a) Pink City Jaipur
 b) Washington DC
 c) Vatican City
 d) Wales

38. 34. Name the longest mountain range on land in the world. *

1 point

Mark only one oval.

- a) The Alps
- b) The Andes
- c) The Pyrenees
- d) The Himalayas

39. 35. Who was the first Asian to win a Nobel Prize? *

1 point

Mark only one oval.

- a) Rabindranath Tagore
- b) C. V. Raman
- c) Amartya Sen
- d) Vikram Sarabhai

40. 36. Which was the first animal to go into space? *

1 point

Mark only one oval.

- a) Cat
- b) Dog
- c) Fox
- d) Tiger

41. 37. In which city is the Louvre Museum located? *

1 point

Mark only one oval.

- a) New York
- b) Paris
- c) Rome
- d) Berlin

42. 38. Who began the construction of the great wall of China? *

1 point

Mark only one oval.

- a) Qin Er Shi
- b) Shihuangdi
- c) Zhao Gao
- d) Shi Jin Ping

43. 39. He played a major role in framing the Indian Constitution and is also known as 'Babasaheb' *

1 point

Mark only one oval.

- a) Mahatma Gandhi
- b) B. R. Ambedkar
- c) Bal Gangadhar Tilak
- d) Jawaharlal Nehru

44. 40. Who founded the Green Belt Movement? *

1 point

Mark only one oval.

- a) Malala Yousafzi
- b) Wangari Maathai
- c) Medha Patkar
- d) Bill Gates

45. 41. This works as the world's leading conservation organization which protects the ecosystems and habitats on earth. *

1 point

Mark only one oval.

- a) UNEP
- b) WWF
- c) PeTA
- d) WWE

46. 42. The largest brackish saltwater lagoon in Asia? *

1 point

Mark only one oval.

- a) Chilka Lake
- b) Loktak Lake
- c) Wular Lake
- d) Dal Lake

47. 43. Sobriquet of Bhutan is *

1 point

Mark only one oval.

- a) Land of Lightning
- b) Land of Thunderbolt
- c) Land of Windmills
- d) Land of Cloud

48. 44. They fold together and enclose the insects. A red sap digests the body. * 1 point

Mark only one oval.

- a) Venus Flytrap
- b) Cobra Plant
- c) Pitcher Plant
- d) Sundew

49. 45. The region made up of Norway, Sweden and Denmark is called - *

1 point

Mark only one oval.

- a) The Caribbean
- b) Scandinavia
- c) South East Asia
- d) Europe

50. 46. Becoming dormant or inactive, a 'long sleep' due to harshness of winter is called - * 1 point

Mark only one oval.

- a) Hibernation
 b) Transpiration
 c) Aestivation
 d) Transformation

51. 47. What is the currency of Malaysia? * 1 point

Mark only one oval.

- a) Rubal
 b) Ringgit
 c) Rupees
 d) Euro

52. 48. He was the last person to walk on the moon. He was an American astronaut. * 1 point

Mark only one oval.

- a) Eugene Cernan
 b) Rakesh Sharma
 c) Neil Armstrong
 d) Yuri Gagarin

53. 49. He is in charge of raising the money for the film and managing it. *

1 point

Mark only one oval.

- a) Editor
- b) Director
- c) Producer
- d) Choreographer

54. 50. How do bees and mosquitoes create a loud buzzing noise? *

1 point

Mark only one oval.

- a) beating of wings
- b) humming loudly
- c) rubbing of legs
- d) Flying

This content is neither created nor endorsed by Google.

Google Forms