



DELHI PUBLIC SCHOOL

SAIL Township, Ranchi

Second Online Semester

(Session-2020-21)

Class – Prep

Subject-English

FM.- 40

1. Write two words each for the given sounds: (1×10=10)

1. ck - _____ , _____

2. ng - _____ , _____

3. cr - _____ , _____

4. sh - _____ , _____

5. tle- _____ , _____

2. Name them: (1× 7=7)

1.



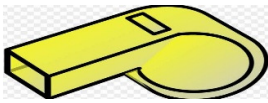
- _____

2.



- _____

3.



- _____

4.



- _____

5.



- _____

6.



- _____

7.



- _____

3. Name them:

(1×6=6)

1. two action words- _____ , _____

2. two colours - _____ , _____

3. two meals - _____ , _____

4. Fill in the missing letters:

(0.5x8=4)

1. W_ISK
2. EV_NING
3. TH_EF
4. S_RONG
5. B_NCH
6. HU_H
7. BRI_GE
8. SI_TER

5. Write five lines on the topic 'My School'.

(1x5=5)

6. Choose and write:

(0.5x6=3)

1. a _____ of grass. (blade/ piece)
2. a _____ of soup. (bar / bowl)
3. a _____ of salt. (piece / pinch)
4. a _____ of string.(blade / piece)
5. a _____ of sand. (bowl / grain)
6. a _____ of water. (blade/ glass)

7. Picture Composition:

Choose and write:

(1×5=5)



ground, park, girls, three, playing

1. This is a picture of a _____.
2. There are ____ boys in the park.
3. There are two ____ in the park.
4. The children are _____.
5. There are two balls on the _____.



DELHI PUBLIC SCHOOL

SAIL Township, Ranchi

Second Online Semester

(Session-2020-21)

Class – Prep

Subject-Hindi

FM.- 40

1. चित्र देखकर नाम लिखो:-

(1×8=8)

क.



ख.



ग.



घ.



ङ.



च.



छ.



ज.



2. एक जैसे शब्द लिखो :-

(0.5×10=5)

क. तारे - _____ , _____

ख. पैर- _____ , _____

ग. गोल - _____ , _____

च. यंत्र- _____ , _____

छ. वहाँ - _____ , _____

3. सही मात्रा चुनकर शब्द पूरे करो :-

(0.5×6=3)

क. स प रा (े/ै) ख. ह थ ली (ै/े)

ग. त रा क (ै/ौ) घ. द - ल त (ो/ौ)

ड. घ न घ-र (ो/े) च. च - द ह (ौ/ो)

4. अं(ं) की मात्रा से दो फलों के नाम लिखो:- (1×2=2)

क. _____ ख. _____

5. नीचे दिए गए मात्राओं से एक-एक शब्द लिखो:-. (1×4=4)

क. ऐ (ै)- _____

ख. औ (ौ)- _____

ग. ओ (ो)- _____

घ. ए (े)- _____

6. ए (े) की मात्रा से दो फलों के नाम लिखो :- (1×2=2)

क. ----- ख.-----

7. वर्णों को सही क्रम में लगाकर शब्द बनाओ:-. (0.5×6=3)

क. लि तौ या ख. र ख गो श

ग. मो स सा घ. नि सै क

ड. ले ज बी च. त बो ल

8. खाली स्थान में सही शब्द चुनकर भरें:- (1×4=4)

क. राजीव रोज----- उठता है।(प्रात, प्रातः, प्रता)

ख. शैलेश----- जानता है। (तरैना, तेरना, तैरना)

ग.----- के नाखून बहुत तेज हैं। (पजो, पांजो, पंजों)

घ. मेरे घर के आंगन में एक----- है। (कुआँ , कुँआ , कँआ)

9. 'तिरंगा' विषय पर चार शब्द लिखो:- (1×4=4)

10. अँ (ँ) की मात्रा से शरीर के दो अंगों के नाम लिखो :-

(1×2=2)

क. ----- ख. -----

11. चित्र पहचान कर खाली स्थान भरो:-

(0.5×6=3)

क.



----- में फल रख दो।

ख.



----- रात में निकलता है ।

ग.



----- पेड़ पर बैठा है।

घ.



----- में एक तोता है।

ङ.



मेरे पास ----- सेब है।

च.



यह एक ----- है।



DELHI PUBLIC SCHOOL

SAIL Township, Ranchi

Second Online Semester

(Session-2020-21)

Class – Prep

Subject-Maths

FM.- 40

Q 1. Write number names of the following : (1X7=7)

a) 40 - _____

b) 19 - _____

c) 100- _____

d) 75- _____

e) 92 - _____

f) 88- _____

g) 37- _____

Q 2. Add : (0.5X6=3)

a) $4+5=$

d) $6+1=$

b) $3+2=$

e) $4+0=$

c) $5+3 =$

f) $2+4=$

Q 3. What comes after ? (0.5X4=2)

a) 35 _____

c) 79 _____

b) 99 _____

d) 47 _____

Q 4. Put the correct sign (>,< or =) : (0.5X 4=2)

a) $56 \square 36$

c) $90 \square 90$

b) $14 \square 27$

d) $68 \square 48$

Q 5. Arrange in descending order : (1X2=2)

a) $\boxed{22, 45, 16, 78, 35}$

Ans - _____

b) $\boxed{61, 66, 60, 63, 62}$

Ans- _____

Q 6. What comes before? (0.5x 4=2)

a) _____ 80

c) _____ 19

b) _____ 71

d) _____ 37

Q 7. Subtract : (0.5x6=3)

a) $\begin{array}{r} 6 \\ -5 \\ \hline \end{array}$

b) $\begin{array}{r} 8 \\ -8 \\ \hline \end{array}$

c) $\begin{array}{r} 9 \\ -3 \\ \hline \end{array}$

d) $\begin{array}{r} 7 \\ -2 \\ \hline \end{array}$

e) $\begin{array}{r} 4 \\ -1 \\ \hline \end{array}$

f) $\begin{array}{r} 5 \\ -3 \\ \hline \end{array}$

Q 8. Fill in the missing letters :

(0.5x10=5)

a) JAN__ARY

e) A__GUS__

b) FR__DAY

f) T__URSDAY

c) NO__EMBE__

g) JUL__

d) TU__SDAY

h) DE__EMBER

Q 9. Arrange in ascending order :

(1x2=2)

a)

Ans- _____

b)

Ans - _____

Q 10. Solve :

(1 x2=2)

a) I have 9 balls . I gave 2 balls to my friend. How many balls are left ?


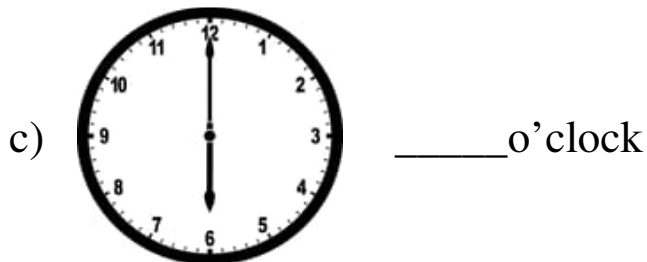


Ans- _____

b) There are 5 girls and 3 boys in a bus . How many children are there in all ?

Ans - _____

Q 11. Write the time :

(0.5 x4=2)



Q 12. Fill in the blanks :

(1 x6=6)

a) There are ___ days in a week .

b) 2 less than 7 is _____.


c) The ordinal number name for 2nd is _____.

d) 1 more than 9 is _____.

e) The day that comes after Friday is _____.

f) The number in between 46 and 48 is _____.

Q 13. Look at the picture given below and answer : (1x2=2)



If monkey is the first animal then ,

a) Which animal is at the 4th position ? _____

b) Which animal is at the 7th position ? _____



DELHI PUBLIC SCHOOL

SAIL Township, Ranchi

Second Online Semester

(Session-2020-21)

Class – Prep

Subject-EVS

FM.- 40

1. Name them:

(1×7=7)

1. a winter cloth - _____
2. a type of room - _____
3. a body part - _____
4. a source of water - _____
5. a hot ball of fire - _____
6. a healthy food - _____
7. a junk food - _____

2. Unscramble the letters:

(1×7=7)

1. NEYOH - _____
2. TREWA - _____
3. NKLETIW - _____
4. ASEET - _____
5. UNLCH - _____
6. FLERMFU - _____
7. ARETH - _____

3. Fill in the missing letters:

(0.5×12=6)

1. M__AT
2. BRE__THE
3. TO__EL
4. SP__ING
5. CAR__VAN
6. STO__ACH
7. CO__B
8. C__EST
9. WHE__T
10. BUN__ALOW
11. FRO__K
12. TO__CH

4. Choose and write:

(1×8=8)

1. We cook in the _____. (bedroom / kitchen)
2. We cannot see _____. (air / water)
3. Sheep gives us _____. (wool / egg)
4. We taste with our _____. (eyes / tongue)
5. We wear _____ clothes in summer. (cotton / woollen)
6. We need food to grow _____. (healthy / unhealthy)
7. The moon shines at _____. (day / night)
8. We live on the _____. (earth / moon)

5. Write 'T' for true or ' F' for false: (1×5=5)

1. It is safe to play on the road. ____
2. Cow gives us milk. _____
3. We have six sense organs. _____
4. Brush your teeth daily. ____
5. We meet our guests in the bedroom. _____

6. Name them: (1×3=3)

1.



- _____

2.



- _____

3.



- _____

7. Draw, name and colour:

(2×2=4)

1. a sense organ

2. a summer cloth