

# Class- IV Subject- English ( Paper-1)

Date - 24-02-2021

Full Marks- 25

\* Required

1. Email address \*

---

2. Name \*

---

3. Section \*

*Check all that apply.*

- A
- B
- C
- D
- E
- F
- G
- H

4. Roll No. \*

---

Fill in the blanks with is/am/are/was/were/has/have:-

5. 1) It \_\_ Diwali yesterday. \*

1 point

*Mark only one oval.*

a) was

b) is

c) are

d) were

6. 2) I \_\_ studying now. \*

1 point

*Mark only one oval.*

a) are

b) am

c) was

d) is

7. 3) They \_\_ a beautiful garden in their house. \*

1 point

*Mark only one oval.*

a) were

b) are

c) has

d) have

8. 4) Last year my friends \_\_ in this college. \*

1 point

*Mark only one oval.*

- a) are
- b) was
- c) were
- d) is

Choose the Present Tense or the Present Continuous Tense forms of the verbs to fill in the blanks:-

9. 5) My brother usually \_\_\_\_\_ football in the same club as me. \*

1 point

*Mark only one oval.*

- a) is playing
- b) played
- c) play
- d) plays

10. 6) Today they \_\_\_\_\_ a new shopping mall downtown. \*

1 point

*Mark only one oval.*

- a) are opening
- b) is opening
- c) opened
- d) opens

11. 7) It often \_\_\_\_\_ a lot in La Spezia in winter. \*

1 point

*Mark only one oval.*

- a) rain
- b) is raining
- c) rains
- d) None of these

12. 8) Many doctors \_\_\_\_\_ the Covid patients now. \*

1 point

*Mark only one oval.*

- a) are treating
- b) treats
- c) treat
- d) treated

Choose the Past Tense or the Future Tense forms of the verbs to fill in the blanks:-

13. 9) Yesterday I \_\_\_\_\_ in the pool. \*

1 point

*Mark only one oval.*

- a) swims
- b) swim
- c) swam
- d) swimming

14. 10) Our Second Semester \_\_\_\_\_ from next Monday . \*

1 point

*Mark only one oval.*

- a) began
- b) begin
- c) begun
- d) will begin

15. 11) I \_\_\_\_\_ a dream last night. \*

1 point

*Mark only one oval.*

- a) have
- b) has
- c) had
- d) will have

16. 12) My parents \_\_\_\_\_ America next year. \*

1 point

*Mark only one oval.*

- a) will visit
- b) visited
- c) visit
- d) visits

Identify the kind of underlined Adverb :-

17. 13) \*

1 point

Rohit neatly wrote a shopping list.

Mark only one oval.

- a) Adverb of Manner
- b) Adverb of Place
- c) Adverb of Time
- d) Adverb of Frequency

18. 14) \*

1 point

The directors meet weekly to review the progress.

Mark only one oval.

- a) Adverb of Place
- b) Adverb of Manner
- c) Adverb of Time
- d) Adverb of Frequency

19. 15) \*

1 point

My plane leaves tomorrow.

Mark only one oval.

- a) Adverb of Manner
- b) Adverb of Time
- c) Adverb of Place
- d) Adverb of Frequency

20. 16) \*

1 point

**When the child cried, the mother took her outside.**

*Mark only one oval.*

- a) Adverb of Place
- b) Adverb of Manner
- c) Adverb of Frequency
- d) Adverb of Time

21. 17) \*

1 point

**I left her home in the afternoon.**

*Mark only one oval.*

- a) Adverb of Time
- b) Adverb of Manner
- c) Adverb of Place
- d) Adverb of Frequency

Fill in the blanks with the correct Prepositions :-

22. 18) Nafeesa is afraid \_\_\_\_spiders. \*

1 point

*Mark only one oval.*

- a) from
- b) in
- c) about
- d) of

23. 19) She suffers \_\_\_ a heart disease. \*

1 point

*Mark only one oval.*

- a) from
- b) on
- c) in
- d) above

24. 20) The teacher set some homework \_\_\_\_ the end of the lesson. \*

1 point

*Mark only one oval.*

- a) over
- b) in
- c) of
- d) at

25. 21) He is interested \_\_\_\_ history. \*

1 point

*Mark only one oval.*

- a) in
- b) at
- c) from
- d) under

Fill in the blanks by choosing the most appropriate Conjunctions :-



26. 22) He is poor \_\_\_ happy. \*

1 point

*Mark only one oval.*

a) and

b) but

c) so

d) if

27. 23) I know \_\_\_ he is an intelligent boy. \*

1 point

*Mark only one oval.*

a) this

b) when

c) that

d) and

28. 24) You cannot succeed \_\_\_\_\_ you work sincerely. \*

1 point

*Mark only one oval.*

a) because

b) that

c) unless

d) and

29. 25) I trust him \_\_\_\_ he speaks the truth. \*

1 point

*Mark only one oval.*

- a) though
  - b) until
  - c) or
  - d) because
- 

This content is neither created nor endorsed by Google.

Google Forms

# Class- IV Subject- English ( Paper-2)

Date - 24-02-2021

Full Marks- 55

\* Required

1. Email address \*

---

2. Name \*

---

3. Section \*

*Check all that apply.*

A

B

C

D

E

F

G

H

4. Roll No. \*

---

### **SECTION - A (Reading)**

#### **1) Read this passage carefully and answer the given questions:-**

There are four major domains of the Earth- Lithosphere, Atmosphere, Hydrosphere and Biosphere. The solid portion of the earth is called Lithosphere. The large land masses are known as continents. All continents lie in Lithosphere. There are seven continents. Asia is the largest continent and Australia is the smallest continent. Australia is called an island continent. The part of the earth which is covered with water is called Hydrosphere. The Pacific Ocean, The Atlantic Ocean, The Indian Ocean, The Southern Ocean and The Arctic Ocean lie in the Hydrosphere. The Pacific Ocean is the largest ocean. The earth is surrounded by a layer of gases called the Atmosphere. There are five layers in the Atmosphere. The Biosphere is the narrow zone of contact between the land, water and air.

- i) How many domains of the earth are there? (1)
- ii) What is Lithosphere? (1)
- iii) Which continent is called island continent? (1)
- iv) **Fill in the blanks:-** (1×2=2)
- a) \_\_\_\_\_ is the largest ocean of the world.
- b) The earth is surrounded by a layer of gases called the \_\_\_\_\_.

2) Read the poem carefully and answer the questions :- (1×5 = 5)

**My Dear Soldiers**

Oh! Defenders of borders  
You are great sons of my land  
When we are all asleep  
You still hold on to your deed.  
Windy season or snowy days  
Or scorching sun's sweltering rays  
You are there guarding all the time awake  
Treading the lonely expanses as Yogis.  
Climbing the heights or striding the valleys  
Defending the deserts and guarding the marshes  
Surveillance in seas and by securing the air  
Prime of your youth given to the nation!!  
Wind chimes of my land vibrate your feat  
We pray for you brave men!!  
May the Lord bless you all!!

**– Dr. APJ Abdul Kalam**

- i) The poem is dedicated to..... (**complete the sentence**)
- ii) What do they sacrifice for the nation? (**Mention any one point.**)
- iii) 'scorching' in the poem means.....
- iv) Write the antonym of : **brave-**
- v) Write a pair of rhyming word from the poem.

**SECTION - B (Writing)**

**3) Write a paragraph on any one topic :-** (5)

i) Importance of Reading Newspaper

Or

ii) My Favourite Subject

**4) Letter Writing ( Informal)** (5)

i) You are Ayush/ Ayushi, residing at A/52 Vasundhara Elegance, Ranchi. Write a letter to your friend describing about the Online Project Model Exhibition organised in your school.

**OR**

ii) You are Ayush/ Ayushi, residing at A/52 Vasundhara Elegance, Ranchi. Write a letter to your friend inviting him/her to spend the summer vacation with you.

**SECTION - C ( Grammar)****5) State the Verbs in the given sentences:-** (1x5=5)

- i) Rahul has four pet dogs and a huge aquarium in his house.
- ii) My parents will visit Paris next year.
- iii) The squirrel lives in a hole in the tree.
- iv) We are planning for a picnic next Sunday.
- v) He is an intelligent student.

**SECTION - D (Literature)****6) Answer the following questions:-** (2x5=10)

- i) What has the child become as he crawls along with his gun? What game is he playing? [**The Land of Story Books**]
- ii) One young man made a wrong assumption. What did he do in his foolishness? [**The Green Wood Gatherer**]
- iii) What are the things the robot is supposed to do? [**Our New Robot**]
- iv) The girl who entered the compartment was given specific instructions. What were they? [**The Eyes Have It**]
- v) What food was packed for Heidi? Where would she get the milk from? [**Heidi and Peter**]

**7) Answer these questions with reference to the context:-**  
**(2×5=10)**

**a) “Dinah ‘ll miss me very much tonight, I should think!”**  
**[Alice in the Rabbit Hole]**

- i. Who said these words and to whom?
- ii. Who was Dinah and who did she belong to?

**b) “Do you want to go with them on to the mountain?”**  
**[Heidi and Peter]**

- i. Who said these words and to whom?
- ii. Who is referred to as ‘them’?

**c) “Aunts are usually formidable people.” [The Eyes Have It]**

- i. Who said these words to whom?
- ii. Why were these words said?

**d) “Wake up! Wake up.” [The Green Wood Gatherer]**

- i. Who said these words and to whom?
- ii. Where were these words said?

**e) “How brave they'll all think me at home!”**  
**[Alice in the Rabbit Hole]**

- i. Who said these words and to whom ??
- ii. Why would they think her 'brave' ?



**8) Write the meaning of these words:-**

**(1×5=5)**

- i) remarkable
- ii) clefts
- iii) distress
- iv) essentials
- v) expensive

**9) Fill in the blanks:-**

**(1×5=5)**

- i) Heidi started joyfully for the \_\_\_\_\_.
- ii) Alice made a mistake of leaving the \_\_\_\_\_ on the table.
- iii) The girl prefers to visit Mussoorie in the month of \_\_\_\_\_.
- iv) Mom and dad do all the housework instead of the \_\_\_\_\_.
- v) 500 young men went into the forest to gather \_\_\_\_\_.

5. \*

Files submitted:

---

This content is neither created nor endorsed by Google.

Google Forms

# Class- IV Subject- Hindi ( Paper-1)

Date - 26-02-2021

Full Marks- 25

\* Required

1. Email address \*

---

2. Name \*

---

3. Section \*

*Check all that apply.*

- A  
 B  
 C  
 D  
 E  
 F  
 G  
 H

4. Roll No. \*

---

1. नीचे दिए गए प्रश्नों के उत्तर के लिए सही विकल्प चुनें ---- (1x15=15)

5. i. क्रिया के कितने भेद होते हैं ? \*

1 point

Mark only one oval.

- क) छः  
 ख) दो  
 ग) चार  
 घ) पाँच

6. ii. 'आँसू' शब्द है - \*

1 point

Mark only one oval.

- क) एकवचन  
 ख) सदा बहुवचन  
 ग) बहुवचन  
 घ) सदा एकवचन

7. iii. निम्न में से कौन-सी अपने आप होने वाली क्रिया है ? ---- \*

1 point

Mark only one oval.

- क) सूरज का उगना  
 ख) दौड़ना  
 ग) खाना  
 घ) बैठना

8. iv. 'धीरे - धीरे' में कौन-सा चिह्न है ? \*

1 point

Mark only one oval.

- क) प्रश्नवाचक  
 ख) अल्प विराम  
 ग) पूर्ण विराम  
 घ) योजक चिह्न

9. v. शब्द कहलाता है- \*

1 point

Mark only one oval.

- क) वर्णों का सार्थक समूह  
 ख) शब्दों का समूह  
 ग) व्यंजनों का सार्थक समूह  
 घ) अक्षर

10. vi. 'घड़ों पानी पड़ना' मुहावरा का अर्थ है- \*

1 point

Mark only one oval.

- क) गुस्सा होना  
 ख) शर्मिंदा होना  
 ग) जी ललचाना  
 घ) बढ़ा डालना

11. vii. वाह\_\_\_\_ तुमने तो कमाल कर दिया | खाली स्थान में उचित चिह्न का प्रयोग करे | \* 1 point

Mark only one oval.

- क) ,  
 ख) ?  
 ग) !  
 घ) -

12. viii. 'वसुधा' का पर्यायवाची शब्द है - \* 1 point

Mark only one oval.

- क) अनल  
 ख) अंबर  
 ग) धरती  
 घ) रजनी

13. ix. नीचे दिए गए शब्दों में से शुद्ध शब्द चुने- \* 1 point

Mark only one oval.

- क) निष्ठा  
 ख) दिवार  
 ग) गुरु  
 घ) दीवाली

14. x. विशेषण के भेद होते हैं - \*

1 point

*Mark only one oval.*

क) चार

ख) दो

ग) तीन

घ) आठ

15. xi. हरी रावत कौन था ? \*

1 point

*Mark only one oval.*

क) किसान

ख) व्यापारी

ग) नाविक

घ) वैज्ञानिक

16. xii. जयपुर शहर को महाराजा सवाई जयसिंह द्वितीय ने कब बसाया था ? \*

1 point

*Mark only one oval.*

क) 1727

ख) 1572

ग) 1757

घ) 1490

17. xiii. माता भालू हर समय किस चिंता में लगी रहती है? \*

1 point

Mark only one oval.

- क) खाने की
- ख) सोने की
- ग) पिता से बच्चों को बचाने की
- घ) पानी की

18. xiv. निम्न में से कौन- सा त्योहार फाल्गुन महीने में मनाया जाता है? \*

1 point

Mark only one oval.

- क) होली
- ख) दुर्गा पूजा
- ग) दीवाली
- घ) वैशाखी

19. xv. राँची शहर किस नदी के किनारे स्थित है? \*

1 point

Mark only one oval.

- क) गंगा
- ख) यमुना
- ग) स्वर्णरेखा
- घ) गोमती

2. सही शब्द चुनकर खाली स्थान भरें- (1X10=10)

20. i) जो शब्द संज्ञा अथवा सर्वनाम की विशेषता बताते हैं , वे \_\_\_\_\_ कहलाते हैं । \*

1 point

Mark only one oval.

- क) विशेषण
- ख) प्रविशेषण
- ग) क्रिया
- घ) विशेष्य

21. ii) 'रोटी' शब्द का बहुवचन है \_\_\_\_\_ । \*

1 point

Mark only one oval.

- क) रोटिँ
- ख) रोटियाँ
- ग) रोटीयाँ
- घ) रोटी

22. iii) बूढ़ा आदमी घूम रहा है- इसमें 'बूढ़ा' शब्द \_\_\_\_\_ विशेषण हैं । \*

1 point

Mark only one oval.

- क) परिमाणवाचक
- ख) संख्यावाचक
- ग) गुणवाचक
- घ) सार्वनामिक



23. iv) \_\_\_\_\_ फसल कटने पर मनाया जाने वाला त्योहार है | \*

1 point

*Mark only one oval.*

- क) सरस्वती पूजा  
 ख) बैसाखी  
 ग) रामनवमी  
 घ) दशहरा

24. v) 'राम' और 'रावण' \_\_\_\_\_ के पात्र हैं। \*

1 point

*Mark only one oval.*

- क) महाभारत  
 ख) रामायण  
 ग) गीता  
 घ) गुरु ग्रंथ साहिब

25. vi) हमें हमेशा \_\_\_\_\_ बोली बोलनी चाहिए | \*

1 point

*Mark only one oval.*

- क) मीठी  
 ख) कड़वी  
 ग) तेज़  
 घ) खट्टी

26. vii) न्यूटन ने पवन चक्की को \_\_\_\_\_ से चलाया | \*

1 point

*Mark only one oval.*

- क) हवा  
 ख) चूहे  
 ग) रस्सी  
 घ) हाथ

27. viii) मुबारक महल को महाराजा \_\_\_\_\_ ने बनवाया था | \*

1 point

*Mark only one oval.*

- क) जयसिंह  
 ख) मुबारक सिंह  
 ग) माधोसिंह  
 घ) रामसिंह

28. ix) इंद्रधनुष \_\_\_\_\_ रंगों से मिलकर बनता है | \*

1 point

*Mark only one oval.*

- क) तीन  
 ख) एक  
 ग) पाँच  
 घ) सात

29. x) जयपुर को \_\_\_\_\_ शहर भी कहते हैं | \*

1 point

*Mark only one oval.*

क) गुलाबी

ख) लाल

ग) हरा

घ) हरा

---

This content is neither created nor endorsed by Google.

Google Forms

# Class- IV Subject- Hindi ( Paper-2)

Date - 26-02-2021

Full Marks- 55

\* Required

1. Email address \*

---

2. Name \*

---

3. Section \*

*Check all that apply.*

A

B

C

D

E

F

G

H

4. Roll No. \*

---

1. दिए गए प्रश्नों के उत्तर एक शब्द में लिखिए --- (1x5=5)

- क) सूरज की रोशनी कितने रंगों से बनती है ?
- ख) जयपुर शहर पूर्व और उत्तर में किससे घिरा है ?
- ग) विश्व की सबसे बड़ी तोप का क्या नाम है?
- घ) क्या क्रिया शब्द के बिना वाक्य का निर्माण हो सकता है?
- ङ) स्वरों का प्रयोग शब्दों में किस प्रकार किया जाता है ?

2. उचित शब्दों से रिक्त स्थानों की पूर्ति करें--- (1x5=5)

- क) सिपाही अंग्रेजों के \_\_\_\_\_ थे ।
- ख) आजकल बैंक का सारा काम घर बैठे \_\_\_\_\_ से हो जाता है ।
- ग) बंदर और चिम्पांज़ी \_\_\_\_\_ से डरते हैं ।
- घ) विवेक को \_\_\_\_\_ पर साइकिल मिलने वाली थी ।
- ङ) वचन प्राणी या वस्तु की \_\_\_\_\_ का बोध कराता है ।

3. निर्देशानुसार प्रश्नों के उत्तर लिखें -

(2x5=10)

क) नीचे दिये गए वाक्यों में क्रिया के भेदों को पहचान कर लिखें -

- i) माली पौधों को पानी दे रहा है ।
- ii) मछलियाँ तैर रही हैं

ख) दिए गए अशुद्ध शब्दों को शुद्ध करें ---

- i) ग्रहस्थ-
- ii) कवयत्री ----

ग) नीचे दिए गए शब्दों के दो-दो पर्यायवाची शब्द लिखें---

- i) आकाश--
- ii) बादल --

घ) नीचे लिखे मुहावरे का अर्थ लिखें-

- i) काम तमाम करना -
- ii) नौ दो ग्यारह होना -

ङ) दिए गए शब्दों के अर्थ लिखें -

- i) दिलचस्प-
- ii) सिद्धांत-

4. निम्नलिखित अपठित गद्यांश को ध्यानपूर्वक पढ़कर नीचे दिए गए प्रश्नों के उत्तर लिखिए- (1x5=5)

चलना मनुष्य का स्वभाव है, पानी भी चलता है, हवा भी चलती है, समय भी चलता है और मनुष्य भी चलता है। प्राचीन समय में एक स्थान से दूसरे स्थान पर पहुँचने के लिए मनुष्य मीलों पैदल चलकर यात्रा करता था। कई बार यात्रा इतनी लंबी हो जाती थी कि वर्षों लग जाते थे। मार्ग में यात्री बीमार होकर मर भी जाते थे। फिर पालकियों का प्रयोग किया जाने लगा। इन्हें चार लोग उठाते थे, मगर रास्ते में चलते-चलते थके लोगों की जगह लेने के लिए आठ या बारह लोग साथ में चलते थे। पालकियों का प्रयोग स्त्रियों के लिए किया जाता था। पहिए के आविष्कार ने मनुष्य का जीवन ही बदल दिया। इसके आविष्कार से सर्वप्रथम बैलगाड़ी द्वारा यात्रा सुगम व सस्ती होने लगी। धीरे-धीरे इसी पहिये से मशीन से चलने वाली गाड़ियाँ सड़कों पर दौड़ने लगीं।

- i) प्राचीन समय में मनुष्य कैसे यात्रा करता था?
- ii) पालकियों का प्रयोग किसके लिए किया जाता था?
- iii) पालकी कितने लोग उठाते थे?
- iv) 'प्राचीन' का विलोम शब्द लिखें।
- v) 'हवा' का पर्यायवाची शब्द लिखिए।

5) दिए गए प्रश्नों के उत्तर एक वाक्य में लिखिए ---- (1x4=4)

- क) मीठा बोलने से क्या-क्या लाभ हैं ?
- ख) चेक का क्या उपयोग होता है ?
- ग) जलमहल कहाँ बना हुआ है?
- घ) बाजी रावत कौन था?

6) दिए गए प्रश्नों के दीर्घ उत्तर लिखें -- (2x3=6)

- क) बाजी रावत ने सैनिकों को अपनी नाव पर क्यों नहीं बैठने दिया ?
- ख) पेड़ से फल टूटता है तो वह नीचे क्यों गिरता है ?
- ग) बैंक में किस-किस तरह की मशीनें काम करती हैं ?

7) किसी एक दोहे का अर्थ लिखिए--- (3)

बड़ा भया तो का भया,जैसे पेड़ खजूर ।  
पंथी को छाया नहीं,फल लागे अति दूर ॥  
या

रहिमन देखि बड़ेन को ,लघु न दीजिए डारि ।  
जहाँ काम आवै सुई,कहा करै तरवारि ॥



- 8) वाक्यों को पढ़कर लिखिए, किसने-किससे कहा ---- (1x2=2)
- क) मैं हूँ ना! देख लूँगा ।  
ख) कल तुम भी पिताजी के साथ चले जाना ।
- 9) गुणवाचक विशेषण और संख्यावाचक विशेषण में उदाहरण सहित अंतर स्पष्ट करें । (3)
- 10) मूल्यपरक प्रश्न (उत्तर दो वाक्यों में लिखिए)- (2)
- पेड़ों की सुरक्षा के लिए हम क्या कर सकते हैं?
- 11) किसी एक विषय पर पत्र लिखें --- (5)
- क) फुटबॉल प्रतियोगिता जीतने की सूचना देते हुए दादाजी को पत्र लिखें ।  
या  
ख) चाचा की शादी के लिए चार दिनों के अवकाश हेतु प्रधानाचार्य को पत्र लिखें ।
- 12) किसी एक विषय पर अनुच्छेद लिखें - (5)
- क) संतुलित आहार  
या  
ख) भारत के वीर जवान  
या  
ग) होली का त्योहार

5. \*

Files submitted:

This content is neither created nor endorsed by Google.

Google Forms

# Class- IV Subject- Maths ( Paper-1)

Date - 01-03-2021

Full Marks- 25

\* Required

1. Email address \*

---

2. Name \*

---

3. Section \*

*Check all that apply.*

- A
- B
- C
- D
- E
- F
- G
- H

4. Roll No. \*

---

Choose the correct option.

5. 1. How many 100 rupee notes make a sum of ₹ 10 lakhs? \*

1 point

*Mark only one oval.*

- a) 10
- b) 1000
- c) 10000
- d) 100

6. 2. The annual salary of Mr Ravi is ₹ 136,380.What is his monthly salary? \*

1 point

*Mark only one oval.*

- a) ₹ 11365
- b) ₹ 11465
- c) ₹ 11465
- d) ₹ 14365

7. 3. How many milligrams are there in 1 gram? \*

1 point

*Mark only one oval.*

- a) 10
- b) 100
- c) 1000
- d) 10000

8. 4. What is the sum of 8 cm 2 mm and 2 cm 8 mm ? \*

1 point

*Mark only one oval.*

- a) 10 cm 2mm
- b) 10 cm 8 mm
- c) 10 cm
- d) 11 cm

9. 5. The cost of 1 dozen banana is ₹ 108 . What is the price of 10 bananas? \*

1 point

*Mark only one oval.*

- a) ₹ 85
- b) ₹ 90
- c) ₹ 9
- d) ₹ 900

10. 6. Which of the following is not an example of Ray ? \*

1 point

*Mark only one oval.*

- a) Light emitted by a candle
- b) Light from the Sun
- c) Arrow shot from a bow
- d ) Railway tracks

11. 7. The point at which two adjacent sides of a polygon meet is called a \_\_\_\_\_.\* 1 point

*Mark only one oval.*

- a ) vertex  
 b) angles  
 c) edges  
 d) diagonals

12. 8. The perimeter of a square is 144 m .Then the side of the square is .....\* 1 point

*Mark only one oval.*

- a) 34m  
 b) 36m  
 c) 38 m  
 d) 44m

13. 9. If a hexagon of perimeter 24 cm had equal side lengths ,then the length of its side is .....\* 1 point

*Mark only one oval.*

- a) 3 cm  
 b) 4 cm  
 c) 6 cm  
 d) 8 cm

14. 10. Which of the following solid shapes has the maximum number of edges? 1 point

\*

*Mark only one oval.*

- a) square pyramid
- b) cylinder
- c) triangular pyramid
- d) cuboid

15. 11. Which of the following have 4 lines of symmetry ? \* 1 point

*Mark only one oval.*

- a) rectangle
- b) square
- c) A
- d) Y

16. 12. The interval between 7:15 PM and 10:10 PM is \* 1 point

*Mark only one oval.*

- a) 2 hours
- b) 2 hours 55 minutes
- c) 3 hours
- d) 3 hours 55 minutes

17. 13. 2120 hours denotes- \*

1 point

*Mark only one oval.*

- a) 9:20 PM
- b) 9:20 AM
- c) 11:20 AM
- d) 11:20 PM

18. 14. Which of the following is a leap year ? \*

1 point

*Mark only one oval.*

- a) 1600
- b) 1700
- c) 1800
- d) 1100

19. 15. How many days are there from 21st December to 17th January ? \*

1 point

*Mark only one oval.*

- a) 29 days
- b) 27 days
- c) 28 days
- d) 32 days



20. 16. 8 fans cost ₹ 13480 . what is the cost of 13 fans ? . \*

1 point

*Mark only one oval.*

a) ₹ 21905

b) ₹ 20905

c) ₹ 21900

d) ₹ 22905

21. 17. How many 250 grams sugar packets are required to make 3 kg ? \*

1 point

*Mark only one oval.*

a) 4

b) 8

c) 12

d) 10

22. 18. The number of 25 paise coins in ₹ 50 is \*

1 point

*Mark only one oval.*

a) 200

b) 250

c) 400

d) 100

23. 19. How many seconds are there in 1 hour ? \*

1 point

*Mark only one oval.*

- a) 60
- b) 3600
- c) 360
- d) 6000

24. 20. 2 hours 20 minutes = ..... minutes \*

1 point

*Mark only one oval.*

- a) 120 minutes
- b) 100 minutes
- c) 200 minutes
- d) 140 minutes

25. 21. How many weeks make a fortnight? \*

1 point

*Mark only one oval.*

- a) 3
- b) 2
- c) 14
- d) 4

26. 22 . perimeter of rectangle= \*

1 point

*Mark only one oval.*

- a) 2 x length x breadth
- b) 2 x ( length + breadth )
- c) 2 x length + 2 x breadth
- d) Both b and c

27. 23. 8 mm = .....cm \*

1 point

*Mark only one oval.*

- a) 8cm
- b) 0.8 cm
- c) 0.08 cm
- d) 80 cm

28. 24 . 87 paise = ..... rupees \*

1 point

*Mark only one oval.*

- a) ₹ 87
- b) ₹ 0.87
- c) ₹ 870
- d) ₹ 8.7

29. 25 'H' has ..... lines of symmetry. \*

1 point

*Mark only one oval.*

a) 2

b) 1

c) 3

d) 0

---

This content is neither created nor endorsed by Google.

Google Forms

# Class- IV Subject- Maths ( Paper-2)

Date - 01-03-2021

Full Marks- 55

\* Required

1. Email address \*

---

2. Name \*

---

3. Section \*

*Check all that apply.*

- A
- B
- C
- D
- E
- F
- G
- H

4. Roll No. \*

---

**I. Fill in the blanks:- (1X5=5)**

1. .... is the smallest polygon.
2. A .....has no length, breadth or thickness.
3. In a rectangle, the pairs of .....sides are equal.
4. Diameter is the longest ..... of a circle.
5. 9 hours have ..... Minutes.

**II. State True or False. (1x5=5)**

1. Every square is a rectangle. ....
2. A circle has only one diameter. ....
3. A cylinder has two circular edges. ....
4. Time between 12 midnight and 12 noon is denoted by AM.....
5. Alphabet B has two lines of symmetry. ....

**III. Answer in short. (1x5=5)**

1. The sum of all sides of a rectilinear figure is called its. ....
2. If the base of a pyramid is a triangle, it is called a  
.....
3. Length of the boundary of a circle is known as .....
4. A simple closed figure formed of three or more line segments is known as .....
5. Quintal is a unit of measuring .....


**IV. Match the column****(1 x 5 = 5)**column A

- 1) flat face
- 2) part of a circle
- 3) 12 edges
- 4) half of a circle
- 5) 2 edges

column B

- a) semi circle
- b) cylinder
- c) arc
- d) cuboid
- e) cone

**V. Do as directed:-****(2x6=12)**

1. Convert
  - a) 2328 hours into 12 hour clock time.
  - b) 1:25 AM into 24 hour clock time
2. Draw the line of symmetry for the given figure
  - a) 
  - b) R
3. Write the total number of edges and vertices in a square pyramid.
4. The side of a square is 24 meters. Find the length of the fence around it.
5. Subtract 16 kg 487 g from 21 kg 460 g
6. Multiply ₹ 90.76 x 15

**VI. Solve:-****(3x5=15)**

1. If Sona gets ₹ 320.25 as pocket money each week, how much money does she get daily?
2. Add 5 hours 42 minutes 54 seconds and 2 hours 36 minutes 28 seconds.
3. The perimeter of a rectangular field is 164 meters. If its length is 50 m .Find its breadth.
4. If 13 buses can carry 715 passengers, how many passengers can be carried in 30 buses ?
5. Amit travels 8 km 60 m by bus, 3 km 850 m by auto to reach his school from his home. How far is his school from his home?

**VII. Solve:-****(4x2=8)**

1. Garima's winter vacations were from 5<sup>th</sup> December, 2011 to 12<sup>th</sup> February 2012, for how many days her school was closed ?
2. The length and breadth of a rectangular garden are 165 meters and 65 meters respectively. Find the length of the wire needed to fence all around the garden seven times.

5. \*

Files submitted:

---

This content is neither created nor endorsed by Google.

Google Forms



# Class- IV Subject- Social Science ( Paper-1)

Date - 03-03-2021

Full Marks- 25

\* Required

1. Email address \*

---

2. Name \*

---

3. Section \*

*Check all that apply.*

A

B

C

D

E

F

G

H

4. Roll No. \*

---

Choose the correct option.

5. 1. Maruti Suzuki manufactures - \*

1 point

*Mark only one oval.*

- a. Figo
- b. Duster
- c. Swift
- d. Eon

6. 2. He was a famous Hindu poet during the time of Akbar - \*

1 point

*Mark only one oval.*

- a. Kabirdas
- b. Tulsidas
- c. Ravidas
- d. Surdas

7. 3. Sundari tree grows in this type of forest- \*

1 point

*Mark only one oval.*

- a. Tidal
- b. Evergreen
- c. Coniferous
- d. Deciduous

8. 4. Who was the Finance Minister in the court of Akbar? \*

1 point

*Mark only one oval.*

- a. Abul Fazl
- b. Raja Birbal
- c. Raja Todarmal
- d. Raja Mansingh

9. 5. In Andhra Pradesh, this place is famous for Jute mills- \*

1 point

*Mark only one oval.*

- a. Guntur
- b. Rishra
- c. Visakhapatnam
- d. Hyderabad

10. 6. This historical monument is known as white marble Mughal architecture. \*

1 point

*Mark only one oval.*

- a. Tajmahal
- b. Bibi Ka Maqbara
- c. Safdarjung Tomb
- d. Kashmiri Gate

11. 7. Chittaranjan in West Bengal is known for this industry- \*

1 point

*Mark only one oval.*

- a. Aircraft
- b. Shipbuilding
- c. Railway Equipment
- d. Electronic Goods

12. 8. This forest has tall trees with pointed and needle shaped leaves \*

1 point

*Mark only one oval.*

- a. Evergreen forest
- b. Thorn forest
- c. Deciduous forest
- d. Mountain forest

13. 9. An oil refinery in Uttar Pradesh \*

1 point

*Mark only one oval.*

- a. Mathura
- b. Digboi
- c. Haldia
- d. Barauni

14. 10. This metal is used to make aeroplanes \*

1 point

*Mark only one oval.*

- a. manganese
- b. silver
- c. aluminium
- d. copper

15. 11. Number of languages recognized by the constitution of India- \*

1 point

*Mark only one oval.*

- a. 19
- b. 20
- c. 21
- d. 22

16. 12. Akbar defeated Maharana Pratap at the battle of- \*

1 point

*Mark only one oval.*

- a. Panipat
- b. Haldighati
- c. Plassey
- d. Kurukshetra

17. 13. Christopher Columbus was a/an \_\_\_\_\_ explorer \*

1 point

*Mark only one oval.*

- a. Portuguese
- b. Spanish
- c. Italian
- d. British

18. 14. A Coal mining centre at Chhattisgarh- \*

1 point

*Mark only one oval.*

- a. Barauni
- b. Korba
- c. Dhanbad
- d. Raniganj

19. 15. Ferdinand Magellan sailed around the world in \_\_\_\_\_ century. \*

1 point

*Mark only one oval.*

- a. 16th
- b. 17th
- c. 18th
- d. 19th

20. 16. The cave paintings at Bhimbetka are in - \*

1 point

*Mark only one oval.*

- a. Tamilnadu
- b. Uttar Pradesh
- c. Madhya Pradesh
- d. Rajasthan

21. 17. Sonal Mansingh is a - \*

1 point

*Mark only one oval.*

- a. painter
- b. dancer
- c. singer
- d. sculptor

22. 18. The Directive Principles listed in Indian constitution were adopted from the constitution of \*

1 point

*Mark only one oval.*

- a. USA
- b. UK
- c. France
- d. Ireland

23. 19. Our Constitution Day is celebrated on \*

1 point

*Mark only one oval.*

- a. 15th August
- b. 26th November
- c. 26th January
- d. 15th September

24. 20. Right against exploitation does not allow children below \_\_\_\_ years of age to be employed \*

1 point

*Mark only one oval.*

- a. 12 years
- b. 14 years
- c. 16 years
- d. 18 years

25. 21. The minimum age to vote in a municipal election is \*

1 point

*Mark only one oval.*

- a. 18 years
- b. 19 years
- c. 20 years
- d. 21 years



26. 22. What did Christopher Columbus discover? \*

1 point

*Mark only one oval.*

- a. Australia
- b. Antarctica
- c. Africa
- d. America

27. 23. The Stupa at Sanchi was built by \*

1 point

*Mark only one oval.*

- a. Emperor Ashoka
- b. Chandragupt Maurya
- c. Harshvardhan
- d. Kanishka

28. 24. Sanjay Gandhi National Park is in \*

1 point

*Mark only one oval.*

- a. Tamil Nadu
- b. Maharashtra
- c. West Bengal
- d. Madhya Pradesh

29. 25. The oldest Municipal corporation in India is at \*

1 point

*Mark only one oval.*

- a. Ranchi
  - b. Mumbai
  - c. Chennai
  - d. Delhi
- 

This content is neither created nor endorsed by Google.

Google Forms

# Class- IV Subject- Social Science ( Paper-2)

Date - 03-03-2021

Full Marks- 55

\* Required

1. Email address \*

---

2. Name \*

---

3. Section \*

*Check all that apply.*

A

B

C

D

E

F

G

H

4. Roll No. \*

---

**1. Name the following:-****(1 x 6 = 6)**

- a) The first metal found by man - \_\_\_\_\_.
- b) The government governs the country according to this rulebook- \_\_\_\_\_.
- c) Galileo Galilei was a famous - \_\_\_\_\_.
- d) Planting trees on deforested land - \_\_\_\_\_.
- e) One of the most common mineral found on the earth - \_\_\_\_\_.
- f) Story of a person's life written by someone other than that person- \_\_\_\_\_.

**2. Fill in the blanks:-****(1 x 6 = 6)**

- a) Snow leopards are found in the \_\_\_\_\_ national park.
- b) Pandavani of \_\_\_\_\_ is a folk music.
- c) \_\_\_\_\_ is the metal extracted from bauxite.
- d) Monuments in Goa were built by \_\_\_\_\_.
- e) \_\_\_\_\_ was the religious path suggested by Akbar.
- f) \_\_\_\_\_ is known as the First Citizen of India.

**3. Write True for the correct statements and False for the wrong statements.** (1 x 4 = 4)

- a) Akbar ruled from 1560 to 1602.
- b) Ferdinand Magellan named the Pacific Ocean.
- c) Telugu is the official language of India.
- d) Tulip festival is celebrated in Nagaland.

**4. Rearrange the letters to get the names of natural sources of energy.** (1×4=4)

- 1. LOSRA-
- 2. LTREMPEOU-
- 3. DOWO-
- 4. ATREW-

**5. Define the following:-****(1 x 9 = 9)**

- a) Oil refinery
- b) Endangered
- c) Tax
- d) Civic amenities
- e) Citizen
- f) Special Festivals
- g) Explorer
- h) Navigator
- i) Fossil Fuels

**6. Answer in Details:-****(3 x 6 = 18)**

- a) What is the difference between minerals and ores?
- b) How are forests important to us?
- c) What is an Industry? What things do you need to set up an Industry?
- d) What are cave paintings? What do the paintings at Ajanta caves show?
- e) Write any three Fundamental Duties mentioned in our constitution.
- f) Write five functions performed by local self governing bodies.

**7. Answer in short:-****(2 x 4 = 8)**

- a) Write the names of two monuments built by the British.
- b) What led the European to find a sea route to the east?
- c) What is Fatehpur sikri? Where was it built?
- d) Where do the local bodies get money from?

5. \*

Files submitted:

---

This content is neither created nor endorsed by Google.

Google Forms

# Class- IV Subject- General Science ( Paper-1)

Date - 22-02-2021

Full Marks- 25

\* Required

1. Email address \*

---

2. Name \*

---

3. Section \*

*Check all that apply.*

A

B

C

D

E

F

G

H

4. Roll No. \*

---

I) Choose the correct option from the following : [1X25=25]



5. 1) Water is known as the universal solvent because \*

1 point

*Mark only one oval.*

- a) It has many uses
- b) It has no fixed shape
- c) It can dissolve many substances
- d) It can exist in all three states of matter

6. 2) Which one of these is a non- renewable source of energy? \*

1 point

*Mark only one oval.*

- a) hydro energy
- b) coal
- c) sun
- d) wind energy

7. 3) Which of the following options belong to the same type of simple machine as that of the tool given in the picture below ? \*

1 point



*Mark only one oval.*

- a) see-saw
- b) doorknob
- c) hospital ramp
- d) pulley

8. 4) The imaginary line passing through the North Pole, South Pole and the centre of the Earth is called \*

*Mark only one oval.*

- a) Equator
- b) Tropic of Cancer
- c) Orbit
- d) Axis of the Earth

9. 5) The fastest spinning planet of our solar system :- \*

*Mark only one oval.*

- a) Jupiter
- b) Saturn
- c) Earth
- d) Mercury

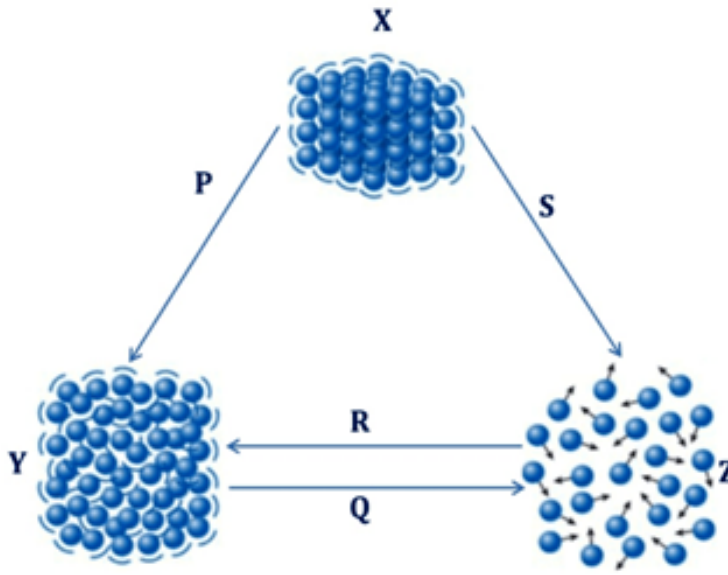
10. 6) Pick the odd one out \*

*Mark only one oval.*

- a) hail
- b) sleet
- c) breeze
- d) rain

11. 7) Study the given diagram carefully and select the correct option: \*

1 point



Mark only one oval.

- a) X- Liquid ,Y- Solid ,P- Melting
- b) X- Solid,Z- Gas,Q- Evaporation
- c) Y- Liquid,Z- Solid, R- Evaporation
- d) X- Gas,Y- Liquid,R- Freezing

12. 8) In the large intestine mostly \_\_\_\_\_ is absorbed. \*

1 point

Mark only one oval.

- a) fats
- b) proteins
- c) blood
- d) water

13. 9) Which one of these options is defined as the capacity to do work ? \* 1 point

*Mark only one oval.*

- a) force
- b) energy
- c) both force and energy
- d) none of these

14. 10) Which one of the following soils is the best for plant growth ? \* 1 point

*Mark only one oval.*

- a) clay
- b) sandy soil
- c) loam
- d) gravel

15. 11) Which of the following statements is incorrect regarding the properties of a gas ? \* 1 point

*Mark only one oval.*

- a) It has mass
- b) It can flow in all directions
- c) the space between its particles is less than in liquids
- d) It occupies space

16. 12) Days and nights are caused due to \*

1 point

*Mark only one oval.*

- a) the movement of the Moon around the Earth
- b) the movement of the Earth around the Sun
- c) the rotation of the Earth on its axis
- d) all of these

17. 13) The approximate percentage of nitrogen in the air is \*

1 point

*Mark only one oval.*

- a) 21%
- b) 1%
- c) 82%
- d) 78%

18. 14) The material that dissolves in a liquid is a \*

1 point

*Mark only one oval.*

- a) Solute
- b) Solvent
- c) Residue
- d) Solution

19. 15) Pick the odd one out \*

1 point

*Mark only one oval.*

- a) chicken pox
- b) mumps
- c) malaria
- d) dengue

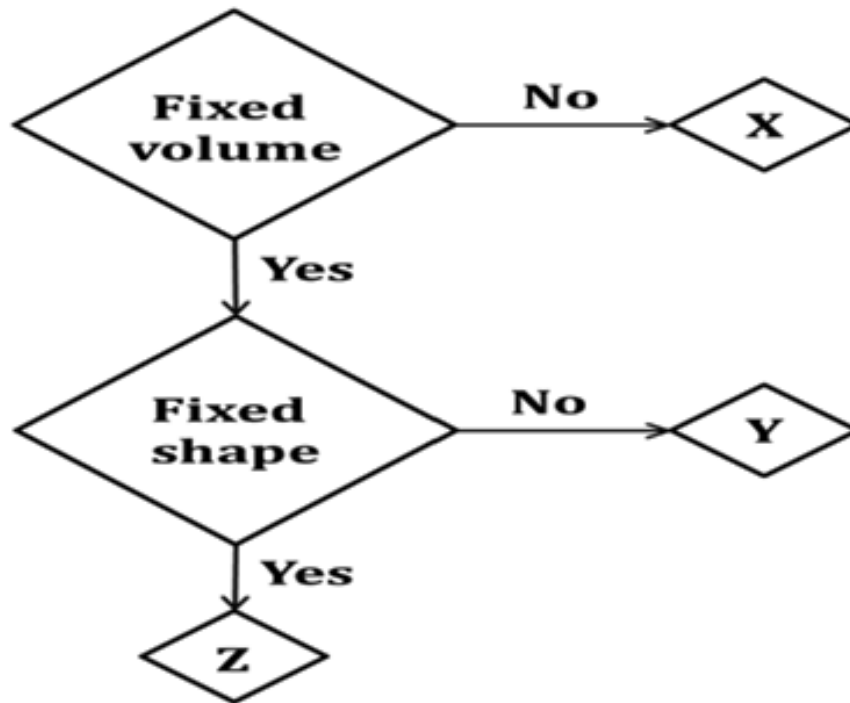
20. 16) In which of the following organs of the digestive system no digestion takes place? \*

1 point

*Mark only one oval.*

- a) stomach
- b) mouth
- c) small intestine
- d) food pipe

21. 17) Study the given flowchart which is based on the states of matter. Which of the following options is correct regarding this? \*



Mark only one oval.

- a) X- Water vapour , Y-Juice , Z-Ice
- b) X- Ice , Y-Juice , Z-Water vapour
- c) X- Water vapour , Y-Ice , Z-Juice
- d) X- Juice , Y-Water vapour , Z-Ice

22. 18) Deforestation causes \*

1 point

Mark only one oval.

- a) Soil erosion
- b) Floods
- c) Loss of top soil
- d) All of these

23. 19) \_\_\_\_\_ is the process that helps to dry up wet clothes. \*

1 point

*Mark only one oval.*

- a) Solidification
- b) Evaporation
- c) Freezing
- d) Condensation

24. 20) Which one of these simple machines is generally used to load new cars on a truck ? \*

1 point

*Mark only one oval.*

- a) Lever
- b) Screw
- c) Wedge
- d) Inclined plane

25. 21) \_\_\_\_\_ is known as the red planet. \*

1 point

*Mark only one oval.*

- a) Mercury
- b) Mars
- c) Venus
- d) Uranus



26. 22) The huge ball of hot gases that give out heat and light continuously is called a \*

1 point

*Mark only one oval.*

- a) Satellite
- b) Dwarf planet
- c) Planet
- d) Star

27. 23) When a stone is thrown upwards into the air, it comes down after some time because of \*

1 point

*Mark only one oval.*

- a) Muscular force
- b) Gravitational force
- c) Electrical force
- d) Solar energy

28. 24) Which of the following is a correct match of the everyday object and the simple machine involved in its functioning? \*

1 point

*Mark only one oval.*

- a) Staircase - Pulley
- b) Sugar tongs - Wheel and Axle
- c) Nutcracker - Lever
- d) Axe - Screw

29. 25) The last molar on each side in each jaw is called the \_\_\_\_\_ . \*

1 point

*Mark only one oval.*

- a) milk teeth
- b) deciduous teeth
- c) temporary teeth
- d) wisdom tooth

---

This content is neither created nor endorsed by Google.

Google Forms

# Class- IV Subject- G. Science ( Paper-2)

Date - 22-02-2021

Full Marks- 55

\* Required

1. Email address \*

---

2. Name \*

---

3. Section \*

*Check all that apply.*

- A
- B
- C
- D
- E
- F
- G
- H

4. Roll No. \*

---

**I. Name the following:- (1x3=3)**

1. The dark brown organic material present in soil formed due to decay of dead plants and animals
2. The process of condensation of atmospheric water vapour on the Earth's surface
3. The layer of the tooth which has blood vessels and nerves inside it

**II. Rewrite the sentences by changing the underlined words to make correct statements :- (1x2=2)**

1. Solar energy is the heat energy obtained from the hot interior of the Earth.
2. The liver produces a fluid called saliva which breaks up the fat in the food we eat.

**III. Arrange the following terms in proper sequence related to what is given within brackets beginning with the word that is underlined:-**

1. large intestine , stomach , food pipe , mouth , small intestine  
(digestion of food)
- 

2. bedrock , topsoil, subsoil (soil profile)
- 

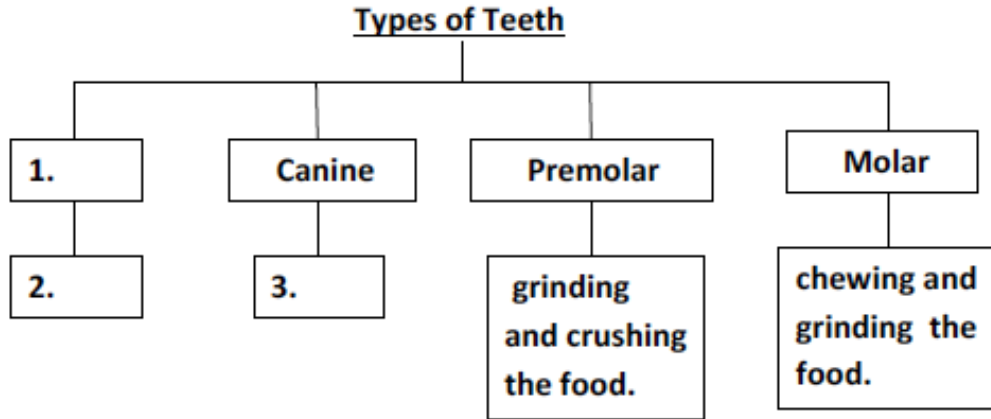
**IV. Complete the series:- (1x3=3)**

1. Typhoid : Bacteria :: Candidiasis: \_\_\_\_\_
2. Steering wheel : Wheel and axle :: Slide in a park : \_\_\_\_\_
3. Canines : \_\_\_\_\_ :: Premolars : 8

**V. Given below is a flowchart related to types of teeth.**

**Study the same and label the guidelines (1), (2) and (3):- (1x3=3)**

**(Do not copy the flowchart, write only the answers in the space provided)**



1. \_\_\_\_\_

2. \_\_\_\_\_

3. \_\_\_\_\_

**VI. Give one example for each of the following :-**

**(1x2=2)**

1. A dwarf planet : \_\_\_\_\_

2. A component of soil : \_\_\_\_\_

**VII. Identify the following from the given description :-**

**(1x2=2)**

1. The organ that produces acid and digestive juices to digest food : \_\_\_\_\_

2. The process by which a liquid is carefully poured out leaving behind the sediments, into another container: \_\_\_\_\_

**VIII. Fill in the blanks :-** (1x3=3)

1. \_\_\_\_\_ is the visible part of the tooth above the gums.
2. The process of natural breakdown of rocks into smaller particles by the action of wind, rain, heat of sun is known as \_\_\_\_\_ .
3. In the absence of \_\_\_\_\_ , an object in motion will continue to be in motion forever.

**IX. Define :-** (2x3=6)

1. Machine
2. Soil
3. Satellite

**X. Answer the following in one sentence :-** (1x5=5)

1. What do you understand by humidity ?
2. Name the two factors that cause seasons on the Earth.
3. Why light and sound are not considered as matter ?
4. Under what condition do we consider work to be done ?
5. Why the water level does not increase on adding a spoonful of sugar to a glass of water ?

**XI. Answer these questions briefly :-** (2x3=6)

1. Mention two functions of the stomach in the digestive system.
2. Write two advantages of friction.
3. A woman tries to draw water from a well using a wheel with a groove in it and a rope.
  - (a) What kind of simple machine is mentioned above ?
  - (b) Give any other use of this kind of simple machine.

**XII. Give reason :-****(2x2=4)**

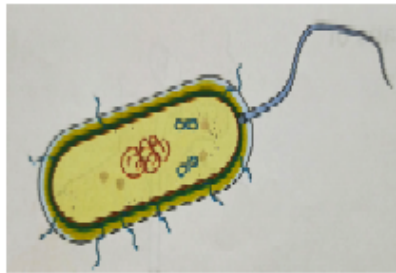
1. If boiled rice is chewed very well it begins to taste sweet.
2. It is difficult to walk on a wet floor as compared to a dry floor.

**XIII. Differentiate between the following terms :-****(2x2=4)**

1. Clayey soil and sandy soil
2. Sea breeze and land breeze

**XIV. Answer these questions in detail :-****(3x2=6)**

1. Write any three ways by which we can prevent soil erosion.
2. Describe any three factors that affect the rate of evaporation.

**XV. a) Draw and label a diagram showing the process of filtration:-****(3)****b) Identify the kind of microorganism shown below :-****(1)**

5. \*

Files submitted:

---

This content is neither created nor endorsed by Google.

Google Forms

# Class- IV Subject- Computer ( Paper-1)

Date - 20-02-2021

Full Marks- 25

\* Required

1. Email address \*

---

2. Name \*

---

3. Section \*

*Check all that apply.*

- A
- B
- C
- D
- E
- F
- G
- H

4. Roll No. \*

---

Choose the correct option.



5. Q1) In MSWLOGO which option is used to select the background color of the graphics area? \* 1 point

*Mark only one oval.*

- a) Screen color
- b) Flood color
- c) Pen color
- d) Label font

6. Q2) Which function is used to calculate the square root of any positive integer ? \* 1 point

*Mark only one oval.*

- a) Round
- b) Sqrt
- c) Abs
- d) Int

7. Q3) Which logo command is used to divide the first number by the second number and can get the remainder as the result or output? \* 1 point

*Mark only one oval.*

- a) Sum
- b) Product
- c) Difference
- d) Remainder

8. Q4) What is the meaning of Net Surfing? \*

1 point

*Mark only one oval.*

- a) Displaying information
- b) Downloading
- c) Moving one page to another on internet
- d) None of these

9. Q5) Logo primitives are written in the \_\_\_\_\_ . \*

1 point

*Mark only one oval.*

- a) Input box
- b) Text area
- c) Listener screen
- d) Graphics area

10. Q6) \_\_\_\_\_ is the shortcut key to paste the content. \*

1 point

*Mark only one oval.*

- a) Ctrl + V
- b) Ctrl + C
- c) Ctrl + I
- d) Ctrl + X

11. Q7) To delete a file or folder, we should: \*

1 point

*Mark only one oval.*

- a) Rename it
- b) Drag it to recycle window
- c) Move it another window
- d) Copy it

12. Q8) In MSWLOGO graphics screen is also known as \_\_\_\_\_ . \*

1 point

*Mark only one oval.*

- a) Edall
- b) Drawing screen
- c) Main screen
- d) Listener screen

13. Q9) Always \_\_\_\_\_ the internet connection when it is not needed. \*

1 point

*Mark only one oval.*

- a) disconnect
- b) share
- c) lock
- d) connect

14. Q10) Which bar is not present in LOGO screen? \*

1 point

*Mark only one oval.*

- a) Formula
- b) Title
- c) Menu
- d) Both a and b

15. Q11) By using of \_\_\_\_\_ option the file or folder goes to temporary memory . \*

1 point

*Mark only one oval.*

- a) Copy
- b) Delete
- c) Paste
- d) None of these

16. Q12)In MSW logo \_\_\_\_\_ primitive is used to set the pen to normal mode & cancel the erase mode . \*

1 point

*Mark only one oval.*

- a) PENDOWN
- b) PENNORMAL
- c) BK
- d) PENUP

17. Q13) URL stands for \_\_\_\_\_ . \*

1 point

*Mark only one oval.*

- a) Uniform Reserve Location
- b) Universal Reserve Locator
- c) Unique Resource System
- d) Uniform Resource Locator

18. Q14) \_\_\_\_\_ is an act of illegal alteration, copying, deletion of contents , file , folders, etc . \*

1 point

*Mark only one oval.*

- a) Tampering
- b) Sub- folder
- c) Hacking
- d) Folder

19. Q15) \_\_\_\_\_ is the collection of web pages. \*

1 point

*Mark only one oval.*

- a) Websites
- b) Web address
- c) Web browser
- d) Search engine

20. Q16) \_\_\_\_\_ is an example of search engine. \*

1 point

*Mark only one oval.*

- a) Bing
- b) Yahoo
- c) Google
- d) All of these

21. Q17) \_\_\_\_\_ is used to change the position of an object from left to right , upside down and vice – versa. \*

1 point

*Mark only one oval.*

- a) Flipping
- b) Dragging
- c) Rotating
- d) None of these

22. Q18) Draw is a software that can be downloaded from the website \_\_\_\_\_ . \*

1 point

*Mark only one oval.*

- a) [www.softronix.com](http://www.softronix.com)
- b) [www.microsoftoffice.com](http://www.microsoftoffice.com)
- c) [www.openoffice.org](http://www.openoffice.org)
- d) [www.openoffice.com](http://www.openoffice.com)

Q19) Find the correct output in MSWLogo ?

23. SHOW count "Priyanka Gupta" \*

1 point

*Mark only one oval.*

- a) 8
- b) 14
- c) 7
- d) 13

24. Q20) In the screen of Draw and design which area displays the miniature view of the drawn picture? \*

1 point

*Mark only one oval.*

- a) Page pane
- b) End
- c) Workplace
- d) Print preview

25. Q21) To draw an oval or circle one needs to click on \_\_\_\_\_ tool. \*

1 point

*Mark only one oval.*

- a) Shapes
- b) Curve
- c) Ellipse
- d) Circle

26. Q22) \_\_\_\_\_ command is used for multiplication in logo . \* 1 point

*Mark only one oval.*

- a) Product  
 b) Multiply  
 c) Remainder  
 d) Quotient

27. Q23) When we \_\_\_\_\_ the file or folder the duplicate file/folder is created. \* 1 point

*Mark only one oval.*

- a) Only copy  
 b) Cut-paste  
 c) Only paste  
 d) Copy – paste

28. Q24) Pen size option is present in the \_\_\_\_\_ menu of logo ? \* 1 point

*Mark only one oval.*

- a) Help  
 b) Zoom  
 c) Set  
 d) None of these



29. Q25) Websites can be opened with the help of \_\_\_\_\_ . \*

1 point

*Mark only one oval.*

- a) Web page
- b) Search Engine
- c) Google
- d) Web Browser

---

This content is neither created nor endorsed by Google.

Google Forms

# Class- IV Subject- Computer ( Paper-2)

Date - 20-02-2021

Full Marks- 25

\* Required

1. Email address \*

---

2. Name \*

---

3. Section \*

*Check all that apply.*

- A
- B
- C
- D
- E
- F
- G
- H

4. Roll No. \*

---

**Q1) Write the output for the following question : - [1X4 = 4]**

- a) SHOW SQRT 144
- b) SHOW INT 49.765
- c) SHOW ROUND 49.78
- d) SHOW ABS – 20

**Q2) Write any two examples for the following :- [ 2X2 = 4]**

- a) Search Engine
- b) Anti Virus

**Q3) Fill in the blanks :- [ 1X5 = 5]**

- a) To draw an oval or circle one needs to click on \_\_\_\_\_ tool.
- b) \_\_\_\_\_ button is used to open editor window in MSWLOGO.
- c) You can subtract two numbers by using the \_\_\_\_\_ command.
- d) The pointed top of the turtle is known as \_\_\_\_\_ or \_\_\_\_\_ of the turtle.

**Q4) Answer the following questions:- [2X4 = 8]**

- a) Write any two responsibilities for a good digital citizen.
- b) Write any two differences between PU and PD command.
- c) Write four steps to create a new folder.
- d) Define web browser with example.

**Q5) Write Logo (with REPEAT) command for the following figures:- [2X2 = 4]**

- a) Pentagon
- b) Rectangle

5. \*

Files submitted:

---

This content is neither created nor endorsed by Google.

Google Forms

# Class- IV Subject- General Knowledge

Date - 15-02-2021

Full Marks- 50

\* Required

1. Email address \*

---

2. Name \*

---

3. Section \*

*Check all that apply.*

- A
- B
- C
- D
- E
- F
- G
- H

4. Roll No. \*

---

I. Choose the correct answers from the options given below- [1× 50 = 50]

5. 1. This is the new year's day of the Parsis. \* 1 point

*Mark only one oval.*

- a) St Patrick's Day  
 b) Navroz  
 c) Easter  
 d) Hanukkah

6. 2. Setsubun, or the Bean-Throwing Festival, is celebrated in. \* 1 point

*Mark only one oval.*

- a) United states  
 b) China  
 c) Japan  
 d) Mexico

7. 3. This harvest festival, celebrated in the state of Kerala in India, honours the ancient King Mahabali. \* 1 point

*Mark only one oval.*

- a) Onam  
 b) Pongal  
 c) Hampi Utsav  
 d) Ugadi

8. 4. In which state of India you will find Lake Pichola? \*

1 point

*Mark only one oval.*

- a) Maharashtra
- b) Gujarat
- c) Rajasthan
- d) Uttarakhand

9. 5. When was 1st International Yoga Day celebrated? \*

1 point

*Mark only one oval.*

- a) 21 June 2015
- b) 21 June 2016
- c) 21 November 2015
- d) 21 November 2016

10. 6. In which country do people speak Sinhalese? \*

1 point

*Mark only one oval.*

- a) Nepal
- b) Sri Lanka
- c) Bhutan
- d) Myanmar

11. 7. The Sultan Azlan Shah Cup is related to which sport? \*

1 point

*Mark only one oval.*

- a) Tennis
- b) Football
- c) Hockey
- d) Cricket

12. 8. Which country has won FIFA World Cup 5 times. \*

1 point

*Mark only one oval.*

- a) France
- b) Brazil
- c) Russia
- d) England

13. 9. Which team won the highest number of medals at the 2018 Commonwealth Games in Gold Coast? \*

1 point

*Mark only one oval.*

- a) Australia
- b) China
- c) India
- d) England



14. 10. Who along with Bill Gates, is the co-founder of Microsoft? \*

1 point

*Mark only one oval.*

- a) Sergey Brin
- b) Larry Page
- c) Paul Allen
- d) Melinda Gates

15. 11. Which year did Tata Motors launch the world's cheapest car, Nano? \*

1 point

*Mark only one oval.*

- a) 2009
- b) 2008
- c) 2010
- d) 2007

16. 12. ... is the founder of Biocon, one of India's leading biotechnology companies. \*

1 point

*Mark only one oval.*

- a) Narayan Murthy
- b) Sabeer Bhatia
- c) Indra Nooyi
- d) Kiran Mazumdar-Shaw

17. 13. This ringed planet is also known as the 'jewel of the solar system' \* 1 point

*Mark only one oval.*

- a) Jupiter  
 b) Mercury  
 c) Venus  
 d) Saturn

18. 14. It is the windiest planet in our solar system. \* 1 point

*Mark only one oval.*

- a) Neptune  
 b) Uranus  
 c) Earth  
 d) Saturn

19. 15. This planet is closest to Earth. \* 1 point

*Mark only one oval.*

- a) Mercury  
 b) Venus  
 c) Mars  
 d) Jupiter

20. 16. Blue Poppy is the national flower of... \*

1 point

*Mark only one oval.*

- a) Pakistan
- b) Finland
- c) Australia
- d) Bhutan

21. 17. The 'Valley of Flowers' national park is located in... \*

1 point

*Mark only one oval.*

- a) Uttarakhand
- b) Jammu & Kashmir
- c) Himachal Pradesh
- d) Uttar Pradesh

22. 18. It is the national flower of France. \*

1 point

*Mark only one oval.*

- a) lotus
- b) iris
- c) tulips
- d) pink rose

23. 19. This oldest known living tree is in Sweden. \*

1 point

*Mark only one oval.*

- a) General Sherman
- b) Norway Spruce
- c) Banyan
- d) Baobab

24. 20. ....gets its name because of the movements of its leaves that 'mimic' animal sensitivity. \*

1 point

*Mark only one oval.*

- a) Palm
- b) Neem
- c) Eucalyptus
- d) Mimosa

25. 21. People grow .....trees mainly for their fluid, called latex. \*

1 point

*Mark only one oval.*

- a) peepal tree
- b) cork tree
- c) rubber tree
- d) sal tree

26. 22. Who is the author of the famous book 'The Boy in the Striped Pyjamas'? \* 1 point

*Mark only one oval.*

- a) John Boyne  
 b) Ruskin Bond  
 c) Jhumpa Lahari  
 d) JK Rowling

27. 23. It is a book about the author's childhood adventures. It is written by Gerald Durrell. \* 1 point

*Mark only one oval.*

- a) The Adventures of Huckleberry Finn  
 b) My Family and other Animals  
 c) A Journey to the Centre of the Earth  
 d) Daddy-Long-Legs

28. 24. The book 'Charlie and the Chocolate Factory' was published in- \* 1 point

*Mark only one oval.*

- a) 1884  
 b) 1956  
 c) 1964  
 d) 1864

29. 25. People with pyrophobia are afraid of- \*

1 point

*Mark only one oval.*

- a) Fire
- b) Python
- c) Water
- d) Volcano

30. 26. What is claustrophobia? \*

1 point

*Mark only one oval.*

- a) Fear of speed
- b) Fear of death
- c) Fear of heights
- d) Fear of closed spaces

31. 27. Which of the following describes the fear of being on an aeroplane? \*

1 point

*Mark only one oval.*

- a) Nyctophobia
- b) Photophobia
- c) Aviophobia
- d) Acrophobia

32. 28. Who was the first women prime minister of India? \*

1 point

*Mark only one oval.*

- a) Sonia Gandhi
- b) Indira Gandhi
- c) Pratibha Patil
- d) Mamata Banerjee

33. 29. With which state of India is the folk dance bihu associated? \*

1 point

*Mark only one oval.*

- a) Assam
- b) Bihar
- c) Punjab
- d) Himachal Pradesh

34. 30. What is the capital of Saudi Arabia? \*

1 point

*Mark only one oval.*

- a) Diriyah
- b) Gatgat
- c) Tabuk
- d) Riyadh

35. 31. On the banks of which river is the port of London situated? \*

1 point

*Mark only one oval.*

- a) River Lea
- b) River Effra
- c) River Thames
- d) River Ching

36. 32. Which of the following ports is situated on the bank of Hudson River? \*

1 point

*Mark only one oval.*

- a) New York City
- b) Casablanca
- c) Singapore
- d) Shanghai

37. 33. Which port in the Netherlands is the largest port in Europe? It is connected to the North Sea by canal. \*

1 point

*Mark only one oval.*

- a) Istanbul port
- b) Rotterdam port
- c) Port of Jebel Ali
- d) Port of Hamburg



38. 34. Which city is known as the 'Silicon Valley of India'? \*

1 point

*Mark only one oval.*

- a) Bengaluru
- b) Pune
- c) Gurgaon
- d) Hyderabad

39. 35. In which Indian city was the first metro rail operated? \*

1 point

*Mark only one oval.*

- a) Mumbai
- b) Delhi
- c) Kolkata
- d) Chennai

40. 36. In which state is the Bhabha Atomic Research Centre located? \*

1 point

*Mark only one oval.*

- a) Maharashtra
- b) Tamil Nadu
- c) West Bengal
- d) Gujarat

41. 37. What do we call a person who sends mean messages online ? \*

1 point

*Mark only one oval.*

- a) hacker
- b) snooker
- c) spammers
- d) cyberbully

42. 38. What is email? \*

1 point

*Mark only one oval.*

- a) A short message uploaded on Twitter
- b) A medium of exchanging digital message over a network
- c) Both a) and b)
- d) None of the above

43. 39. What does Wi-Fi stand for? \*

1 point

*Mark only one oval.*

- a) Wireless Functioning
- b) Wireless Function
- c) Wireless Fidelity
- d) None of the above

44. 40. What is the new name of city Madras? \*

1 point

*Mark only one oval.*

- a) Chennai
- b) Mumbai
- c) Kanpur
- d) Kochi

45. 41. Which company designed the first fully electric sports car? \*

1 point

*Mark only one oval.*

- a) Ford
- b) Tata Motors
- c) Tesla Motors
- d) BMW

46. 42. What is the Full form of GPS? \*

1 point

*Mark only one oval.*

- a) Globe Projecting System
- b) Global Processing System
- c) Global Parsing System
- d) Global Positioning System

47. 43. The Automated Teller Machine, or ATM was invented by..... \*

1 point

*Mark only one oval.*

- a) Louis Braille
- b) Lewis E Waterman
- c) John Shepherd
- d) George Eastman

48. 44. Who invented the telescope? \*

1 point

*Mark only one oval.*

- a) Nikola Tesla
- b) Galileo
- c) Einstein
- d) Newton

49. 45. Select the correct pair of old and new name of a place given below. \*

1 point

*Mark only one oval.*

- a) Persia : Ethiopia
- b) Ceylon :Thailand
- c) Peking : Beijing
- d) Burma : Sri Lanka

50. 46. Shri Bhupesh Baghel is the Chief Minister of which of the following states? \*

1 point

*Mark only one oval.*

- a) Haryana
- b) Odisha
- c) Chhattisgarh
- d) Jharkhand

51. 47. ....has become the first 'Har Ghar Jal' State in India \*

1 point

*Mark only one oval.*

- a) Sikkim
- b) Tripura
- c) Goa
- d) Kerala

52. 48. PM Narendra Modi on October 3, 2020 inaugurated Atal Tunnel which is located in the state/ UT of - \*

1 point

*Mark only one oval.*

- a) Jammu & Kashmir
- b) Ladakh
- c) Himachal Pradesh
- d) Sikkim

53. 49. Who among the following actresses has been selected for the Padma Shri award 2020? \* 1 point

*Mark only one oval.*

- a) Deepika Padukone
- b) Kangana Ranaut
- c) Alia Bhatt
- d) Katrina Kaif

54. 50. Who has sworn-in as first female US Vice President? \* 1 point

*Mark only one oval.*

- a) Kamala Harris
- b) Janet Reno
- c) Sarah Palin
- d) Hillary Rodham Clinton

---

This content is neither created nor endorsed by Google.

Google Forms