

Class- II Subject- English (Paper-1)

Date - 23-02-2021

Full Marks- 40

* Required

1. Email address *

2. Name *

3. Section *

Check all that apply.

- A
- B
- C
- D
- E
- F
- G
- H

4. Roll No. *

I. Choose the correct answers for the following

5. 1.A ___ eats worms. *

1 point

Mark only one oval.

- a. bear
- b. frog
- c. cow
- d. None of these

6. 2. I and my friend ___ in Varanasi. *

1 point

Mark only one oval.

- a. was
- b. is
- c. have
- d. were

7. 3. My mother always sits on her favourite ____ chair. *

1 point

Mark only one oval.

- a. arm
- b. hair
- c. ankle
- d. None of these

8. 4. Uncle bought a _____ painting from the auction. *

1 point

Mark only one oval.

- a. is
- b. over
- c. beautiful
- d. None of these

9. 5. The participants have been waiting for ____.*

1 point

Mark only one oval.

- a. our
- b. hours
- c. hers
- d. None of these

10. 6. ____ have you been for so long? *

1 point

Mark only one oval.

- a. What
- b. Whose
- c. When
- d. Where

11. 7. The soup is ____.*

1 point

Mark only one oval.

- a. hot
- b. large
- c. big
- d. None of these

12. 8. I went to Agra _____ Jaipur last December.*

1 point

Mark only one oval.

- a. or
- b. of
- c. and
- d. None of these

II. Choose the correct synonyms for these words (9-10)

13. 9. screamed- _____? *

1 point

Mark only one oval.

- a. beamed
- b. shout
- c. sleep
- d. None of these

14. 10. burglar- _____? *

1 point

Mark only one oval.

- a. friend
- b. foe
- c. police
- d. thief

III. Choose the correct verbs for each of the following (11-14)

15. 11. They have special period on Mondays, when they _____ for karate class. *

1 point

Mark only one oval.

- a. go
- b. do
- c. has
- d. None of these

16. 12. Ratan _____ most of the time reading books. *

1 point

Mark only one oval.

- a. sing
- b. help
- c. spends
- d. None of these

17. 13. I _____ to visit my grandparents every Sunday. *

1 point

Mark only one oval.

- a. does
- b. go
- c. goes
- d. None of these

18. 14. Madan _____ fruits for breakfast. *

1 point

Mark only one oval.

- a. bakes
- b. cut
- c. sings
- d. eats

IV. Choose the correct simple past verbs for each (15-18)

19. 15. They _____ the match by fifteen runs. *

1 point

Mark only one oval.

- a. won
- b. win
- c. wins
- d. None of these

20. 16. I _____ some berries from his garden. *

1 point

Mark only one oval.

- a. eat
- b. pick
- c. plucked
- d. None of these

21. 17. My brother and Rita _____ to eat ice-cream. *

1 point

Mark only one oval.

- a. gave
- b. wanted
- c. run
- d. None of these

22. 18. Sohan _____ up on the stage and _____ his speech. *

1 point

Mark only one oval.

- a. stood, eat
- b. stand, delivered
- c. stood, deliver
- d. stood, delivered

V. Fill in the blanks with correct present continuous form of verbs (19-22)

23. 19. Sahil and his friends ____ water in the pool. *

1 point

Mark only one oval.

- a. are splashing
- b. are splash
- c. is splashing
- d. None of these

24. 20. Granny ____ on the couch. *

1 point

Mark only one oval.

- a. is sleep
- b. was sleeping
- c. is sleeping
- d. None of these

25. 21. Mother _____ delicious dinner for us. *

1 point

Mark only one oval.

- a. is cook
- b. is cooking
- c. has cook
- d. None of these

26. 22. Father _____ mother to clean the house. *

1 point

Mark only one oval.

- a. are helping
- b. is help
- c. are help
- d. is helping

VI. Fill in the blanks with appropriate prepositions (23-26)

27. 23. My dog jumped _____ the fence and ran out. *

1 point

Mark only one oval.

- a. over
- b. on
- c. in
- d. None of these

28. 24. What is _____ the parcel? *

1 point

Mark only one oval.

- a. into
- b. over
- c. inside
- d. None of these

29. 25. Sonu found his dad's watch _____ the bed. *

1 point

Mark only one oval.

- a. over
- b. under
- c. outside
- d. None of these

30. 26. The man is standing _____ the shade of the tree. *

1 point

Mark only one oval.

- a. on
- b. in
- c. into
- d. None of these

VI. Complete the given sentences with correct conjunction (27-30)

31. 27. Kanta is tall _____ her brother is short. *

1 point

Mark only one oval.

- a. but
- b. and
- c. or
- d. None of these

32. 28. Father asked me if I wanted to visit a zoo _____ a park. *

1 point

Mark only one oval.

- a. and
- b. but
- c. or
- d. None of these

33. 29. I like to play chess _____ carrom. *

1 point

Mark only one oval.

- a. or
- b. and
- c. but
- d. None of these

34. 30. Ajay scored a goal _____ his team lost. *

1 point

Mark only one oval.

- a. of
- b. or
- c. and
- d. but

VII. Choose the correct question for the following statements

35. 31. This is a book about Sri Lanka. *

1 point

Mark only one oval.

- a. Which is this book?
- b. Where is the book?
- c. Whose is this book?
- d. None of these

36. 32. The cup is on the table. *

1 point

Mark only one oval.

- a. What are on the table?
- b. Which is on the table?
- c. Where is the cup?
- d. Who is on the table?

VIII. Choose the correct spellings (33-35)

37. 33. *

1 point

Mark only one oval.

- a. nieghbourhood
- b. neighbourhood
- c. neighbourhood
- d. nighbourhood

38. 34. *

1 point

Mark only one oval.

- a. kompetition
- b. coompetition
- c. cmpetition
- d. competition

39. 35. *

1 point

Mark only one oval.

- a. ditch
- b. dich
- c. deech
- d. diitch

IX. Answer the following questions very carefully

40. 36. What is the name of the poet of 'The Brown Thrush'? *

1 point

Mark only one oval.

- a. Luzie Larcom
- b. Lisa Larcom
- c. Lucy Larcom
- d. Leslie Larcom

41. 37. What is the poet's name of 'Cradle Song'? *

1 point

Mark only one oval.

- a. Alfred Tennison
- b. Alfred Tennyson
- c. Alferd Tennyson
- d. Alfred Tenyson

IX. Arrange these words to make meaningful sentences

42. 38. Jackal/fooled/the/animals/other/declared/the /himself/and/king *

1 point

Mark only one oval.

- a. The jackal fooled animals and declared himself the king.
- b. The jackal fooled other animals declared himself the king.
- c. The jackal fool himself and declared other animals the king.
- d. The jackal fooled other animals and declared himself the king.

43. 39.woke/he/up/found/paintbrush/he/when/magic/his /desk / on *

1 point

Mark only one oval.

- a. When he woke up, he found magic paintbrush on his desk.
- b. He when woke up found magic paintbrush he on his desk.
- c. When he woke up on his desk found magic paintbrush he.
- d. None of the above is correct.

44. 40. What among these things Santa did not get as presents? *

1 point

Mark only one oval.

- a. pies
- b. cookies
- c. shoes
- d. mittens

This content is neither created nor endorsed by Google.

Google Forms



DELHI PUBLIC SCHOOL

SAIL Township, Ranchi

Second Online Semester

(Session-2020-21)

Class – II Subject-English (Subjective) F.M.- 40

***Don't copy down any question and write only answers in your answersheet with correct question number.**

I. Answer the following questions:-

[2x6=12]

1. What request does the birdie make to her mother?

2. What did the village dogs do?

3. How can we make 'the mighty ages'?

4. What strange thing happened to Ma Liang one day?

5. What sorrow is the bird talking about?

6. What had touched Santa's heart?

II. Write the meanings

[1x6=6]

1. lodge- _____

4. mighty ages- _____

2. meddle- _____

5. elapsed- _____

3. grateful- _____

6. terrified- _____

III. Make sentences

[1x5=5]

1. wings- _____

2. eternity- _____

3. magic- _____

4. fondly- _____

5. hid- _____

IV. State whether 'True' or 'False'

[0.5x4=2]

- 1. Santa invited the children to his home for Christmas. _____**
- 2. Ma Liang was a greedy man. _____**
- 3. Chandarava used to distribute the food. _____**
- 4. Santa gave each of the children a warm holiday hug. _____**

V. Read the given passage and answer the questions that follow :-

Friends Forever

Once upon a time, there lived a mouse and a frog, who were best friends. Every morning, the frog would hop out of the pond to meet the mouse who lived inside the hole of the tree. But one day, the frog realized that he was making too much an effort to visit his friend while the mouse never came to meet him in the pond. This made him angry and he decided to forcefully take him to his house in the pond. He tied a string and hopped back to his house in the pond. The mouse who was dragged the whole time started to drown and struggled to breathe as soon as the frog jumped into the water for a swim. The frog untied his dear friend and quickly took him to the shore. Seeing the mouse with his eyes barely open made the frog very sad. He regretted for his behaviour and cried his heart out.

i Answer the following questions-

(1x2=2)

a. What did the frog do every morning?

Ans-_____

b. What did the frog realize one day?

Ans-_____

ii. Choose the synonyms from the passage given above (0.5x2=1)

a. bind- _____

b. pulled- _____

iii. Choose the antonyms from the passage given above (0.5x2=1)

a. freely- _____

b. worst- _____

iv. Complete the following statements:- (0.5x2=1)

a. The frog untied his dear friend _____.

b. He regretted for his behaviour _____.

VI. Write a letter to your friend sharing your experience of virtual classes. [1x5=5]

VII. Write five lines on any 'one' of the following topics [1x5=5]

a. My favourite sport

b. Punctuality

c. Winter Season

Class- II Subject- Hindi (Paper-1)

Date - 25-02-2021

Full Marks- 40

* Required

1. Email address *

2. Name *

3. Section *

Check all that apply.

- A
- B
- C
- D
- E
- F
- G
- H

4. Roll No. *

दिए गए प्रश्नों के उत्तर दें

5. 1. 'गीला' शब्द का विलोम है। *

1 point

Mark only one oval.

1. गरमी
2. सूखा
3. ठंडा
4. इनमें से कोई नहीं

6. 2. प्रतिदिन सुबहसूरज उगता है एवं ----- को चन्द्रमा उदय होता है। *

1 point

Mark only one oval.

1. चन्द्रमा
2. हवा
3. धूप
4. रात

7. 3. दिए गए शब्द 'गरमी' का विलोम शब्द होगा। *

1 point

Mark only one oval.

1. बसंत
2. बरसात
3. सर्दी
4. इनमें से कोई नहीं

8. 4. जो काम नहीं करता है। *

1 point

Mark only one oval.

1. आलसी
2. अनपढ़
3. अयोग्य
4. इनमें से कोई नहीं

9. 5. जिसके पास बहुत पैसे हैं। *

1 point

Mark only one oval.

- 1. धार्मिक
- 2. आलसी
- 3. अनपढ़
- 4. धनवान

10. 6. वो शब्द जिनमें पहला व्यंजन स्वर रहित और दूसरा स्वर सहित होता है वो कहलाते हैं। *

1 point

Mark only one oval.

- 1. द्वित्व व्यंजन
- 2. अयोगवाह
- 3. संयुक्त व्यंजन
- 4. संयुक्ताक्षर

11. 7. हिंदी भाषा में स्वर हैं *

1 point

Mark only one oval.

1. ग्यारह
2. बारह
3. तेरह
4. इनमें से कोई नहीं

12. 8. दिए गए शब्द 'आगे' का विलोम शब्द होगा। *

1 point

Mark only one oval.

1. ऊपर
2. पीछे
3. पहले
4. प्रथम

13. 9. जो बस चलाता हो । *

1 point

Mark only one oval.

1. चौकीदार
2. चर्मकार
3. चिकित्सक
4. बस चालक

10. दिए गए रिक्त स्थान की पूर्ति करें।

14. घीया , तोरी _____ सब्जियों की शान *

1 point

Mark only one oval.

1. टिंडा
2. टिंडा
3. टेढ़ी
4. टूटी

15. 11. दिसम्बर मास में मनाया जाने वाला त्योहार है। *

1 point

Mark only one oval.

1. होली
2. दीवाली
3. दशहरा
4. क्रिसमस

16. 12. एक दिन-रात होता है। *

1 point

Mark only one oval.

1. चौबीस घंटों का
2. चौतीस घंटों का
3. चवालीस घंटों का
4. इनमें से कोई नहीं

17. 13. रविवार को _____ भी कहते हैं। *

1 point

Mark only one oval.

- 1. वीरवार
- 2. गुरुवार
- 3. इतवार
- 4. बृहस्पतिवार

18. 14. हिन्दी की गिनती में उन्नीस का अर्थ है *

1 point

Mark only one oval.

- 1. अंक १९
- 2. अंक २९
- 3. अंक ३९
- 4. इनमें से कोई नहीं

19. 15. निम्न शब्द का अंक है *

1 point

‘ पंद्रह फूल’

Mark only one oval.

1. १२
2. १५
3. १३
4. १४

20. 16. मंगलवार और बृहस्पतिवार के मध्य _____ आता है । *

1 point

Mark only one oval.

1. बुधवार
2. गुरुवार
3. शुक्रवार
4. शनिवार

21. 17. शिक्षक दिवस मनाया जाता है। *

1 point

Mark only one oval.

1. सितंबर माह में
2. अक्टूबर माह में
3. नवम्बर माह में
4. अगस्त माह में

22. 18. अप्रैल माह में मनाया जाने वाला त्यौहार है। *

1 point

Mark only one oval.

1. मकर संक्रांति
2. पोंगल
3. बिहू
4. बैसाखी

23. 19. गार्ड क्या करता है ? *

1 point

Mark only one oval.

1. सबके टिकट देखता है।
2. हरी झंडी दिखाता है।
3. रेल को चलाता है।
4. इनमें से कोई नहीं

24. 20. पहचानो तो कौन हूँ मैं ? *

1 point

काला - काला रंग है मेरा,
धीमी मेरी चाल
इक-इक दाने में ले चलती,
घर है मेरा मालामाल।

Mark only one oval.

1. तितली
2. चींटी
3. चुहिया
4. इनमें से कोई नहीं

25. 21. आपके विद्यालय का स्थापना दिवस मनाया जाता है प्रतिवर्ष - *

1 point

Mark only one oval.

- 1. सत्रह जुलाई को
- 2. सत्ताइस जुलाई को
- 3. सैंतीस जुलाई को
- 4. इनमें से कोई नहीं

26. 22. रक्षाबंधन का त्योहार मनाया जाता है। *

1 point

Mark only one oval.

- 1. जुलाई माह में
- 2. अगस्त माह में
- 3. सितम्बर माह में
- 4. अक्टूबर माह में

27. 23. एक सप्ताह में होते हैं *

1 point

Mark only one oval.

- 1. तीन दिन
- 2. छह दिन
- 3. सात दिन
- 4. पंद्रह दिन

28. 24. बीमार का इलाज करने वाला *

1 point

Mark only one oval.

- 1. चिकित्सा
- 2. चिकित्सालय
- 3. चिकित्सक
- 4. इनमें से कोई नहीं

29. 25. अमीर शब्द का विलोम है - *

1 point

Mark only one oval.

- 1. अनपढ़
- 2. आलसी
- 3. गरीब
- 4. अनजान

30. 26. 'पाठ 16 चिट्ठी कैसे जाती है ?' में रमन के चाचाजी किस शहर में रहते हैं। *

1 point

Mark only one oval.

- 1. दिल्ली में
- 2. राँची में
- 3. मुम्बई में
- 4. चेन्नई में

31. 27. दादाजी ने बाहर लाकर क्या रखा ? *

1 point

Mark only one oval.

1. पानी
2. दूध
3. दीया
4. पटाखा

32. 28. “ तुम कहाँ चले गए थे ?” किसने कहा *

1 point

Mark only one oval.

1. गौरा की माँ ने
2. भोलू ने
3. बकरियों के बच्चों ने
4. भोलू की माँ ने

33. 29. कछुआ शर्म के कारण कहाँ जाकर छिप गया ? *

1 point

Mark only one oval.

1. घर में
2. नदी में
3. तालाब में
4. वन में

34. 30. किसने कहा ? “ मैं यह गुठली ज़मीन में बो दूँगा । “ *

1 point

Mark only one oval.

1. रामैया ने
2. दादीजी ने
3. रामचंद्रन ने
4. शेखचिल्ली ने

35. 31. चिड्डी में क्या चिपकाया जाता है ? *

1 point

Mark only one oval.

1. कागज
2. टिकट
3. प्लास्टिक
4. इनमें से कोई नहीं

32. किसने कहा, किससे कहा -

36. हमारे घर में ढेर सारे आम लगते । *

1 point

Mark only one oval.

1. दादीजी ने रामचंद्रन और रमैया से
2. एक आदमी ने शेखचिल्ली से
3. रामचंद्रन ने दादीजी से
4. दादीजी ने रामचंद्रन से

37. 33. गौरा कौन था ? *

1 point

Mark only one oval.

- 1. भेड़ का बच्चा
- 2. मुरगी का बच्चा
- 3. भालू का बच्चा
- 4. बकरी का बच्चा

38. 34. सब चिट्ठियाँ पहले _____ जाती है। *

1 point

Mark only one oval.

- 1. डाकघर में
- 2. शहर में
- 3. डाकिया के पास
- 4. इनमें से कोई नहीं

39. 35. आपकी पाठ्य पुस्तक नवरंग सरल हिन्दी पाठमाला 2 में से पाठ १३ का नाम है *

1 point

Mark only one oval.

- 1. गौरा
- 2. चिट्ठी कैसे जाती है ?
- 3. दीवाली का त्योहार
- 4. कौन जीता ?

40. 36. रामचंद्रन के पिताजी क्या लाए ? *

1 point

Mark only one oval.

- 1. सेब
- 2. संतरा
- 3. आम
- 4. केले

41. 37. कोयल पक्षी किस राज्य की राजकीय पक्षी है ? *

1 point

Mark only one oval.

1. बिहार
2. झारखण्ड
3. उत्तर प्रदेश
4. इनमें से कोई नहीं

42. 38. मैं शाम को खेलने _____ *

1 point

Mark only one oval.

1. आएगा
2. आएगी
3. आऊँगा
4. आएंगी

43. 39. कपड़ा धोने वाला कहलाता है - *

1 point

Mark only one oval.

1. धोबी
2. मोची
3. गरीब
4. दर्जी

44. 40. हमारे राज्य का स्थापना दिवस मनाया जाता है *

1 point

Mark only one oval.

1. 15 दिसंबर को
2. 15 नवम्बर को
3. 15 अक्टूबर को
4. 15 अगस्त को

This content is neither created nor endorsed by Google.

Google Forms



DELHI PUBLIC SCHOOL

SAIL Township, Ranchi

Second Online Semester

(Session-2020-21)

Class – II

Subject-Hindi (Subjective)

FM.- 40

1. दिए गए शब्दों से वाक्य बनाओ –

[1 x 3 = 3]

क) तुरंत –

ख) डाकिया –

ग) गार्ड –

2. नीचे दो-दो पक्षियों के नाम मिल गए हैं। पहचानो और लिखो –

[1 x 3 = 3]

क) मुशुर्गातुरमुर्ग –

ख) बसागुरलास –

ग) कोबायज़ल –

3. दिए गए शब्दों में से सही शब्द चुनकर कविता को पूरी कीजिए :- [0.5 x 6 = 3]

इक आती, इक जाती तितली

बगीचे की शान तितली । (बढ़ाती / घटाती)

फूलों पर मंडराती तितली

इधर- है जाती तितली (यहाँ / उधर)

किसी के न आती तितली । (हाथ / मुँह)

फूल-फूल का रस (घोलकर / पीकर)

जीवन है पाती तितली,

पंख हैं इसके इतने (मज़बूत / नाजुक)

छूने पर तितली । (हँसती / कुम्हलाती)

4. दिए गए प्रश्नों के उत्तर लिखिए -

[2 x 6 = 12]

क) दादाजी पानी की बाल्टी क्यों लाए ?

उत्तर -

.....

ख) गोरा कहाँ चला गया था ?

उत्तर -

.....

ग) स्टेशन पर क्या बेचने वाले घूम रहे थे ?

उत्तर -

.....

घ) सिर पर घड़ा रखकर शेखचिल्ली क्या सोचने लगा ?

उत्तर –.....

.....

ङ) चिट्ठी चेन्नई तक कैसे पहुँचेगी ?

उत्तर –.....

.....

च) पहली बार खरगोश क्यों हार गया ?

उत्तर –.....

.....

5. दिए गए किसी एक विषय पर पाँच पंक्तियाँ लिखो।

[1 x 5 = 5]

क) अनुशासन

ख) मेरा देश

ग) रेलवे स्टेशन

.....

.....

.....

.....

.....

6. दिए गए शब्दों के अर्थ लिखो :-

[1 x 6 = 6]

क) शहर -.....

ख) मुलायम -.....

ग) लगातार -.....

घ) बुद्धू -.....

ङ) छिलका -.....

ट) पटाखे -.....

7. नीचे दिए गए अपठित गद्यांश को पढ़कर दिए गए प्रश्नों के उत्तर दें।

[5]

नववर्ष हमेशा ही हमारे जीवन में उल्लास एवं आनंद का कारण होता है। यह नववर्ष अर्थात् 2021 हमारे लिए बहुत ही महत्वपूर्ण है और इसका कारण है कोरोना वैक्सीन की उपलब्धि। इसलिए हम सबको एक साथ जुटकर वैक्सीन लेने की प्रक्रिया को जानना चाहिए एवं सबको इसके लिए प्रोत्साहित करना चाहिए। अंधेरे से उजाले की ओर बढ़ने का समय आ गया है। हमें सतत प्रयास करके इस बीमारी को रोकना है।

क) दिए गए वाक्य को पूरा करें - (2)

नववर्ष हमेशा ही हमारे

उत्तर -

ख) वर्ष 2021 हमारे लिए क्यों महत्वपूर्ण है ? (1.5)

उत्तर —.....

ग) बच्चों क्या वैक्सीन सबके लिए जरूरी है ? (1.5)

उत्तर —.....

8. रिक्त स्थानों को भरें — [1 x 3 = 3]

क) खरगोश भागकर में छिप गया ।

ख) माँ तो मुझे समझती है ।

ग) रेलगाड़ी ने बजाई और चल पड़ी ।

Class- II Subject- Maths (Paper-1)

Date - 27-02-2021

Full Marks- 40

* Required

1. Email address *

2. Name *

3. Section *

Check all that apply.

- A
- B
- C
- D
- E
- F
- G
- H

4. Roll No. *

Choose the correct option.

5. 1. Division is the inverse of: *

1 point

Mark only one oval.

- a. Addition
- b. Subtraction
- c. Multiplication
- d. None of the above

6. 2. Two 50 rupees notes make _____ rupee : *

1 point

Mark only one oval.

- a. 100 rupees
- b. 100 paise
- c. 200 rupees
- d. 50 paise

7. 3. If today is Thursday, what day was it yesterday : *

1 point

Mark only one oval.

- a. Friday
- b. Tuesday
- c. Wednesday
- d. Monday

8. 4. The symbol ' \div ' stands for _____ : *

1 point

Mark only one oval.

- a. Multiplication
- b. Division
- c. Addition
- d. Subtraction

9. 5. How many 5 paise coins are there in a rupee ? *

1 point

Mark only one oval.

a. 10

b. 15

c. 20

d. 25

10. 6. At half past an hour , the minute hand is at : *

1 point

Mark only one oval.

a. 3

b. 9

c. 6

d. 12

11. 7. The two hands of the clock are together at : *

1 point

Mark only one oval.

a. 12:00

b. 6:00

c. 12:30

d. 6:30

12. 8. There are 24 hrs in a day, how many hours are there in a week : *

1 point

Mark only one oval.

a. 148

b. 154

c. 162

d. 168

13. 9. Republic day falls in the month of _____ : *

1 point

Mark only one oval.

a. January

b. August

c. March

d. June

14. 10. How many months in a year have 31 days : *

1 point

Mark only one oval.

a. 4

b. 12

c. 7

d. 9

15. 11. There are _____ small divisions on the dial of a clock : *

1 point

Mark only one oval.

a. 10

b. 20

c. 40

d. 60

16. 12. Which day comes between Friday and Sunday ? *

1 point

Mark only one oval.

a. Saturday

b. Thursday

c. Monday

d. Tuesday

17. 13. If it will be Wednesday tomorrow, what day is it today ? *

1 point

Mark only one oval.

a. Thursday

b. Tuesday

c. Monday

d. Saturday

18. 14. How many months lie between March and September : *

1 point

Mark only one oval.

a. 5

b. 7

c. 2

d. 8

19. 15. _____ is the record of all the dates and days of a year : *

1 point

Mark only one oval.

- a. Clock
- b. Calendar
- c. Magazine
- d. Newspaper

20. 16. A cuboid has _____ vertices, _____ edges and _____ faces : *

1 point

Mark only one oval.

- a. 6,8 and 12
- b. 8, 6 and 12
- c. 12, 6 and 8
- d. 8, 12 and 6

21. 17. A cylinder has _____ faces? *

1 point

Mark only one oval.

a. 3

b. 2

c. 1

d. 4

22. 18. Each corner of a plane figure is called it's : *

1 point

Mark only one oval.

a. Side

b. Vertex

c. Face

d. Edge

23. 19. The _____ sides of a rectangle are equal : *

1 point

Mark only one oval.

- a. Four
- b. Two
- c. Opposite
- d. All of the above

24. 20. _____ means part of a whole : *

1 point

Mark only one oval.

- a. Division
- b. Fraction
- c. Multiplication
- d. Subtraction

25. 21. Substances like oil, water, milk etc. are called ? *

1 point

Mark only one oval.

- a. Gas
- b. Solid
- c. Liquid
- d. None of the above

26. 22. Capacity of a big oil tin is measured in : *

1 point

Mark only one oval.

- a. ml
- b. Kg
- c. g
- d. L

27. 23. A _____ has no end points : *

1 point

Mark only one oval.

a. Point

b. Scale

c. Line

d. Circle

28. 24. The unit used to measure length of a pen is? *

1 point

Mark only one oval.

a. Metre

b. Kilometre

c. Litre

d. Centimetre

29. 25. _____ weights of 200g makes 1 Kg : *

1 point

Mark only one oval.

a. 2

b. 5

c. 10

d. 7

30. 26. _____ quarters make a whole : *

1 point

Mark only one oval.

a. 2

b. 3

c. 5

d. 4

31. 27. _____ is the only month which has less than 30 days : *

1 point

Mark only one oval.

- a. April
- b. October
- c. May
- d. February

32. 28. For a 20 rupee note we can exchange _____ 5 rupee note : *

1 point

Mark only one oval.

- a. 4
- b. 5
- c. 10
- d. 2

33. 29. How many 10 paise coins make a rupee? *

1 point

Mark only one oval.

a. 10

b. 5

c. 20

d. 15

34. 30. 1m = _____ cm : *

1 point

Mark only one oval.

a. 100

b. 1000

c. 200

d. None of the above

35. 31. The _____ of a container is the quantity of liquid it can hold : *

1 point

Mark only one oval.

- a. Weight
- b. Length
- c. Capacity
- d. Breadth

36. 32. A fine dot represents a _____ : *

1 point

Mark only one oval.

- a. Line
- b. Triangle
- c. Cube
- d. Point

37. 33. 45 toffees are equally divided among 9 girls . How many toffees does each girl get : *

1 point

Mark only one oval.

a. 5

b. 9

c. 10

d. 4

38. 34. The straight lines forming a plain figure are called its: *

1 point

Mark only one oval.

a. Faces

b. Sides

c. Edges

d. Vertices

39. 35. I have one vertex, one plane face, one curved face and one edge. Who am I ? *

1 point

Mark only one oval.

- a. Cube
- b. Cylinder
- c. Cone
- d. Sphere

40. 36. If 1 litre of milk costs 30 rupees , the cost of 6 litres of milk is : *

1 point

Mark only one oval.

- a. 180 rupees
- b. 200 rupees
- c. 250 rupees
- d. 261 rupees

41. 37. Hand span, Finger- width, Pace etc. are used to measure : *

1 point

Mark only one oval.

- a. Weight
- b. Capacity
- c. Length
- d. None of the above

42. 38. The property of an object , which tells us how heavy it is, is called _____ : *

1 point

Mark only one oval.

- a. Weight
- b. Length
- c. Capacity
- d. Height

43. 39. 1 rupee = _____ paise : *

1 point

Mark only one oval.

- a. 50
- b. 50
- c. 100
- d. 200

44. 40. The tenth month of the year is : *

1 point

Mark only one oval.

- a. October
- b. September
- c. November
- d. December

This content is neither created nor endorsed by Google.

Google Forms



DELHI PUBLIC SCHOOL

SAIL Township, Ranchi

Second Online Semester

(Session-2020-21)

Class – II

Subject-Maths (Subjective)

FM.- 40

I. Add:

(1 x 5 = 5)

a. 7 6 Rs

+ 2 9 Rs

b. 6 1 p

+ 3 7 p

c. 4 3 2 m

+ 1 4 8 m

Kg g

d. 7 625

+ 6 280

e. 1 9 7 L

+ 2 0 6 L

II. Subtract:

(1 x 5 = 5)

a. 2 1 7 Rs

- 4 2 Rs

b. 7 0 p

- 5 1 p

c. 1 2 9 g

- 8 7 g

d. 4 2 8 L

- 2 4 8 L

e. 4 8 m 5 6 cm

- 1 7 m 2 5 cm

III. Divide using multiplication tables :

(0.5 x 6=3)

A. $16 \div 2 =$ _____

B. $24 \div 3 =$ _____

C. $63 \div 9 =$ _____

D. $56 \div 7 =$ _____

E. $32 \div 8 =$ _____

F. $36 \div 4 =$ _____

IV. Write the Number Names for the following numerals :

(1 X 4=4)

A. 918 - _____

B. 749 - _____

C. 864 - _____

D. 999 - _____

V. Multiply:

(1 x 4=4)

A. $15 \times \underline{\quad} = 105$

B. $14 \times 8 =$ _____

C. $13 \times 7 =$ _____

D. $12 \times \underline{\quad} = 108$

VI. Give two examples for each solid shape:

(0.5 x 6=3)

A. Cuboid : a. _____ b. _____

B. Cylinder : a. _____ b. _____

C. Sphere : a. _____ b. _____

VII. Look at the clocks and write the correct time shown by it:

(1 x 2=2)

A.

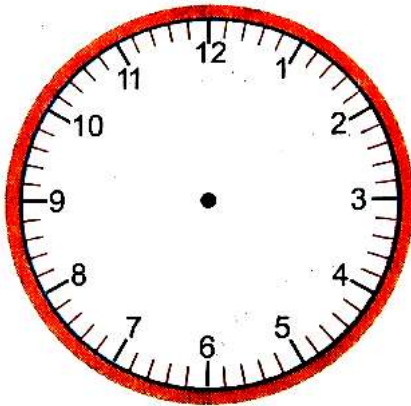


B.



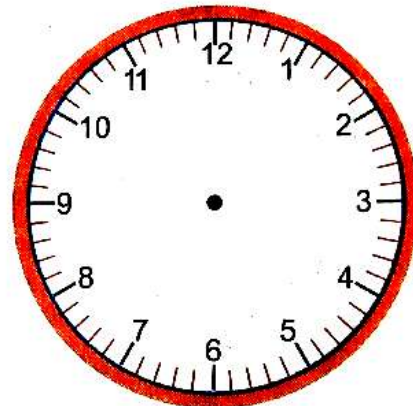
VIII. Draw the hands of each of the following clocks to show the given time. (1X2=2)

A.



A. 30 past 10

B.

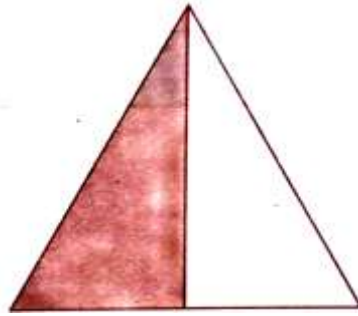


B. 1:45

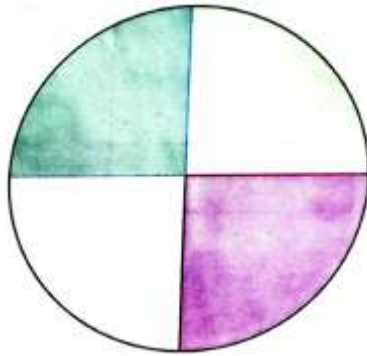
IX. Write the fraction of the shaded part :

(1 x 2=2)

a. _____



b. _____



X. Solve :

(5 X 2 =10)

A. Sania had 60 rupees. She bought an inkpot for 25 rupees. How much money is left with her?

B. A petrol tank of a car had 33 L 400 ml of petrol. It consumed 17 L 325 ml in a trip. How much petrol was left in the tank after trip?

Class- II Subject- EVS (Paper-1)

Date - 02-03-2021

Full Marks- 40

*** Required**

1. Email address *

2. Name *

3. Section *

Check all that apply.

- A
- B
- C
- D
- E
- F
- G
- H

4. Roll No. *

Choose the most appropriate option/ answer.

5. 1. Diagram of a particular area is called.... *

1 point

Mark only one oval.

- a. map
- b. direction
- c. time
- d. lunch

6. 2. The year with 29 days in February is called year. *

1 point

Mark only one oval.

- a. Week
- b. Month
- c. Leap
- d. Complete

7. 3. There are weeks in a year. *

1 point

Mark only one oval.

a. 51

b. 52

c. 53

d. 24

8. 4. The plants with short life and die after bearing flowers are called..... *

1 point

Mark only one oval.

a. Herbs

b. Shrubs

c. Tree

d. Climber

9. 5. are called kitchen of plants. *

1 point

Mark only one oval.

- a. Root
- b. Leaves
- c. Stem
- d. Flowers

10. 6. Shrubs are also called as *

1 point

Mark only one oval.

- a. Hebs
- b. Tree
- c. Climber
- d. Bushes

11. 7. grows into a new plant. *

1 point

Mark only one oval.

a. Flower

b. Water

c. Seed

d. Soil

12. 8 has seeds inside it. *

1 point

Mark only one oval.

a. Flower

b. Fruit

c. Leave

d. Stem

13. 9. Thick, brown, strong stem is called..... *

1 point

Mark only one oval.

- a. Root
- b. Trunk
- c. Leaves
- d. Seed

14. 10. A flower that doesn't produce fruit.... *

1 point

Mark only one oval.

- a. Marigold
- b. Mango
- c. Grapes
- d. Pumpkin

15. 11. We make this with dry leaves. *

1 point

Mark only one oval.

- a. Compost
- b. Dinner
- c. Cloved
- d. Paper

16. 12. Bamboo pulp is used to make.... *

1 point

Mark only one oval.

- a. Clothes
- b. Ink
- c. Flower
- d. Paper

17. 13. adds colour, taste and aroma to the food. *

1 point

Mark only one oval.

a. Spices

b. Neem

c. Nuts

d. Oil

18. 14. The gas needed to burn the things is *

1 point

Mark only one oval.

a. Oxygen

b. Carbon dioxide

c. Water

d. Sand

19. 15. Ginger is an example of *

1 point

Mark only one oval.

- a. Root
- b. Stem
- c. Flower
- d. Seed

20. 16. Carrot is of a plant. *

1 point

Mark only one oval.

- a. Flower
- b. Stem
- c. Root
- d. Fruit

21. 17. Birds build nest to *

1 point

Mark only one oval.

- a. Fly
- b. Cook
- c. Lay eggs
- d. None of these

22. 18. The bird that stitches leaves together to make its nest is... *

1 point

Mark only one oval.

- a. Hummingbirds
- b. Tailorbird
- c. Crow
- d. Sparrow

23. 19. Animals who eat only plant or plant products are called..... *

1 point

Mark only one oval.

- a. Herbivores
- b. Carnivores
- c. Omnivores
- d. Scavenger

24. 20. Animals who eat only the flesh of other animals are called..... *

1 point

Mark only one oval.

- a. Herbivores
- b. Carnivores
- c. Scavenger
- d. Omnivores

25. 21. Biggest water animal is..... *

1 point

Mark only one oval.

- a. Elephant
- b. Giraffe
- c. Blue whale
- d. Polar bear

26. 22. Wild animals live in *

1 point

Mark only one oval.

- a. Shed
- b. Forest
- c. Stables
- d. Cage

27. 23. Rabbits live in.... *

1 point

Mark only one oval.

a. Burrow

b. Den

c. Cave

d. Kennel

28. 24. A can swallow the animal bigger than it. *

1 point

Mark only one oval.

a. Rabbit

b. Deer

c. Mosquito

d. Python

29. 25. Resin is taken from the juice of tree which is used in paints. *

1 point

Mark only one oval.

- a. Mango
- b. Deodar
- c. Sheesham
- d. Pine

30. 26. The first animal to be tamed by man was ... *

1 point

Mark only one oval.

- a. Cat
- b. Dog
- c. Cow
- d. Hen

31. 27. We get egg from *

1 point

Mark only one oval.

- a. Camel
- b. Donkey
- c. Geese
- d. Lion

32. 28. We get wax from ... *

1 point

Mark only one oval.

- a. Milk
- b. Skin
- c. Flower
- d. Beehive

33. 29. The hair grown on the body of animals are called.... *

1 point

Mark only one oval.

- a. Fur
- b. Leather
- c. Silk
- d. Butter

34. 30. We get leather from the of dead animals. *

1 point

Mark only one oval.

- a. Teeth
- b. Hooves
- c. Horn
- d. Skin

35. 31. Dung of animals is used as ... *

1 point

Mark only one oval.

- a. Horn
- b. Hooves
- c. Manure
- d. Cheese

36. 32. An example of beast of burden is *

1 point

Mark only one oval.

- a. Rabbit
- b. Horse
- c. Egg
- d. Lion

37. 33. is called ship of desert. *

1 point

Mark only one oval.

- a. Cow
- b. Horse
- c. Sheep
- d. Camel

38. 34. The animals kept at home to play with them are called ... animals. *

1 point

Mark only one oval.

- a. Pet
- b. Wild
- c. Domestic
- d. Shark

39. 35. When we face the direction of sunrise, the direction at our left hand side is *

1 point

Mark only one oval.

a. East

b. West

c. North

d. South

40. 36. Same type of weather continues for many days, we call that *

1 point

Mark only one oval.

a. Winter

b. Summer

c. Weather

d. Season

41. 37. Hot wind that blows in summer is called.... *

1 point

Mark only one oval.

- a. Loo
- b. Wind
- c. Breeze
- d. Storm

42. 38..... season is also called as Basant in hindi. *

1 point

Mark only one oval.

- a. Autumn
- b. Spring
- c. Winter
- d. Monsoon

43. 39. Dry leaves fall from trees in ----- season *

1 point

Mark only one oval.

- a. Winter
- b. Summer
- c. Spring
- d. Autumn

44. 40. Longest night in India is on *

1 point

Mark only one oval.

- a. 21st june
- b. 5th june
- c. 21st December
- d. 22 December

This content is neither created nor endorsed by Google.

Google Forms



DELHI PUBLIC SCHOOL

SAIL Township, Ranchi

Second Online Semester

(Session-2020-21)

Class – II

Subject-EVS (Subjective)

FM.- 40

I. Unscramble to make a meaningful word:

[1 X 4 = 4]

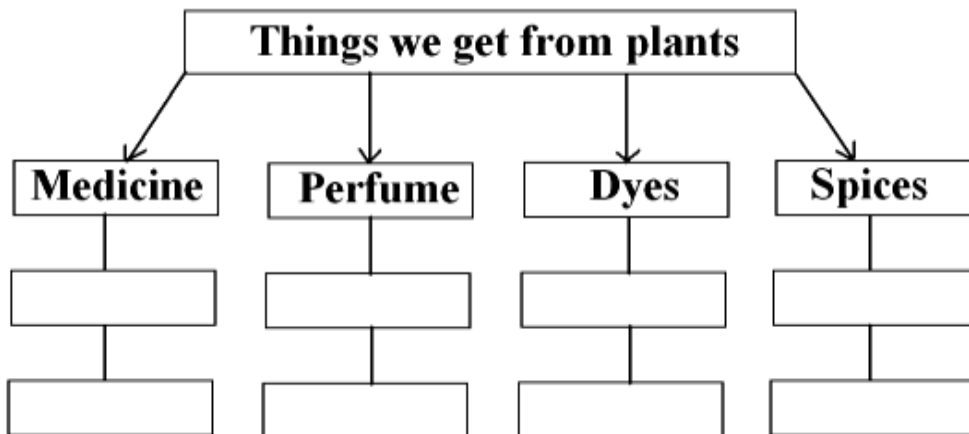
a. DRCOSIETIN

b. OUTHS

c. THEWEAR

d. LANTSEAL

II. Complete the given flowchart by writing the example. [0.5 x 8 = 4]



III. Define and give an example of each:

[2.5 x 4 = 10]

- a. Scavengers b. Photosynthesis c. Domestic animals d. Climber

IV. Answer the questions:

[2 x 6 = 12]

- a. How do animals help us in growing crops?
b. What are wild animals?
c. Why do we call plants our green friends?
d. How does a map help us?
e. Which things cause change in weather?
f. What do plants need to make their own food?

V. Draw, Colour and label the following diagrams:

[2.5 x 4 = 10]

- a. A season
b. A creeper
c. A plant that gives us fibre
d. An omnivore

Class- II Subject- Computer

Date : 20.02.2021

Marks : 25

* Required

1. Email address *

2. Name *

3. Section *

Check all that apply.

- A
- B
- C
- D
- E
- F
- G
- H

4. Roll No. *

Choose the correct option.

5. 1) Keep your _____ on the left button of the mouse . * 1 point

Mark only one oval.

- a. Middle finger
 b. Index finger
 c. Small finger
 d. Right finger

6. 2) _____ is the blank area on which pictures or figures are drawn in paint. 1 point
*

Mark only one oval.

- a. White area
 b. Drawing area
 c. Paint area
 d. Red area

7. 3) _____ is used to restore the paint screen. * 1 point

Mark only one oval.

- a. Maximize button
 b. Close button
 c. Minimize button
 d. Save button

8. 4) _____ tool is like a big container of colors in paint. *

1 point

Mark only one oval.

- a. Brush tool
- b. Paint tool
- c. Fill with color tool
- d. Shape tool

9. 5) _____ is the arrow sign moves on the screen while moving the mouse. * 1 point

Mark only one oval.

- a. Cursor
- b. + sign
- c. Pointer
- d. - sign

10. 6) _____ is the shortcut key to increase the size of the eraser in paint. * 1 point

Mark only one oval.

- a. Ctrl +
- b. Ctrl =
- c. Ctrl -
- d. Ctrl @

11. 7) _____ tool is used for writing the text on the drawing board. * 1 point

Mark only one oval.

- a. Paint tool
- b. Brush tool
- c. Color tool
- d. Text tool

12. 8) _____ is an example of text editor. * 1 point

Mark only one oval.

- a. Paint
- b. Notepad
- c. Games
- d. Tux paint

13. 9) _____ similar to school bag. * 1 point

Mark only one oval.

- a. File
- b. Cursor
- c. Folder
- d. Pointer

14. 10) _____ is the correct jumbled word " S U R C O R". *

1 point

Mark only one oval.

- a. CURSOR
- b. CORSUR
- c. CERSOR
- d. CURSER

15. 11) _____ is a hand-held pointing device that helps to select any object on the screen. *

1 point

Mark only one oval.

- a) CPU
- b) Mouse
- c) Keyboard
- d) Both B & C

16. 12) _____ helps to open shortcut or context menu. *

1 point

Mark only one oval.

- a) Click
- b) Double click
- c) Drag
- d) Right click

17. 13) _____ is a program which helps us to draw pictures of different sizes , shapes and colors in a computer. * 1 point

Mark only one oval.

- a) Draw
- b) Paint
- c) Drawing board
- d) None of these

18. 14) In which of the following places, a computer is used? * 1 point

Mark only one oval.

- a) Hotel
- b) Hospital
- c) Railway Station
- d) All of these

19. 15) _____ is a piece of useful information stored in a computer. * 1 point

Mark only one oval.

- a) Folder
- b) File
- c) Alphabet
- d) None of these

20. 16) The blinking vertical line which looks like 'I' in the working screen area is known as _____ . * 1 point

Mark only one oval.

- a) Pointer
 b) Arrow
 c) Cursor
 d) Line

21. 17) _____ tool is used for drawing shapes of different thickness and styles. * 1 point

Mark only one oval.

- a) Line
 b) Brushes
 c) Pencil
 d) Text

22. 18) _____ means to select or to move an object from one location to another. * 1 point

Mark only one oval.

- a) Drag
 b) Click
 c) Double click
 d) Right click

23. 19) Who is known as the father of computer ? *

1 point

Mark only one oval.

- a) Allen turing
- b) Semcir Gray
- c) Thomas E. Kurtz
- d) Charles Babbage

24. 20) Which tool helps us to zoom a picture ? *

1 point

Mark only one oval.

- a) Free-form
- b) Brush
- c) Magnifier
- d) Color picker tool

25. 21) Which tool helps us for spray colors in pictures ? *

1 point

Mark only one oval.

- a) Crayons
- b) Air brush
- c) Calligraphy brush 2
- d) Oil pastels

26. 22) You can find save option on _____ menu . *

1 point

Mark only one oval.

- a) Format
- b) View
- c) File
- d) Edit

27. 23) We can save a file for _____ . *

1 point

Mark only one oval.

- a) Present use
- b) Past use
- c) Future use
- d) None of these

28. 24) If you want to open a file or folder _____ click on it . *

1 point

Mark only one oval.

- a) Drag
- b) Double click
- c) Right click
- d) Both b and c

29. 25) A computer mouse was invented by _____ . *

1 point

Mark only one oval.

- a) Douglas Engelbert
 - b) Charles Babbage
 - c) Joseph j Jaquard
 - d) Napier Bones
-

This content is neither created nor endorsed by Google.

Google Forms

Class- II Subject- General Knowledge

Date - 15-02-2021

Full Marks- 25

* Required

1. Email address *

2. Name *

3. Section *

Check all that apply.

- A
- B
- C
- D
- E
- F
- G
- H

4. Roll No. *

Choose the correct option.

5. 1. Water day is celebrated on which day? *

1 point

Mark only one oval.

- a) 22nd March
- b) 12th June
- c) 3rd February
- d) 9th October

6. 2. Cloves are the _____ of the plant used to cure toothache *

1 point

Mark only one oval.

- a) Leaves
- b) Roots
- c) Buds
- d) Flowers

7. 3. The first home Microwave Oven was sold to public in which year? *

1 point

Mark only one oval.

- a) 1964
- b) 2002
- c) 1973
- d) 1955

8. 4. How many goose feathers are attached to a piece of Badminton cork? * 1 point

Mark only one oval.

- a) 20
 b) 32
 c) 16
 d) 15

9. 5. The Human body has ____ number of bones? * 1 point

Mark only one oval.

- a) 250
 b) 670
 c) 365
 d) 206

10. 6. Which sport does Manchester United play? * 1 point

Mark only one oval.

- a) Tennis
 b) Football
 c) Hockey
 d) Badminton

11. 7. Which is the World's longest river? *

1 point

Mark only one oval.

- a) Ganges
- b) Amazon
- c) Nile
- d) Thames

12. 8. Find the correct match of inventions with their inventors? *

1 point

Mark only one oval.

- a) J. L. Baird – Telephone
- b) Alexander G Bell – Television
- c) Thomas A Edison – Electric Bulb
- d) Wright brothers – Car

13. 9. Which of the following species of animal has not become extinct yet? *

1 point

Mark only one oval.

- a) Dodo
- b) Bengal Tiger
- c) Dinosaur
- d) Mammoth

14. 10. How many years are there in a Silver Jubilee? *

1 point

Mark only one oval.

- a) 25
- b) 100
- c) 50
- d) 12

15. 11. Name the river that flows by Paris? *

1 point

Mark only one oval.

- a) Yamuna
- b) Godavari
- c) Seine
- d) Nile

16. 12. The Heart and lungs are protected by a bony cage called _____? *

1 point

Mark only one oval.

- a) Joint
- b) Ribcage
- c) Muscle
- d) Skeleton

17. 13. In which city is the Wimbledon tournament held every year? *

1 point

Mark only one oval.

- a) London
- b) Washington
- c) Paris
- d) Vienna

18. 14. Whom does a Veterinary doctor treat? *

1 point

Mark only one oval.

- a) Young children
- b) Animals
- c) Old people
- d) Adult human beings

19. 15. What is the capital of Kenya? *

1 point

Mark only one oval.

- a) Lima
- b) Ottawa
- c) Nairobi
- d) Wellington

20. 16. Dham is the name of the traditional meal served on special occasions in which state? * 1 point

Mark only one oval.

- a) Himachal Pradesh
 b) Maharashtra
 c) Tamilnadu
 d) West Bengal

21. 17. In the honour of which legendary Hockey player do we celebrate National Sports Day in India on 29th august every year? * 1 point

Mark only one oval.

- a) Sandeep Singh
 b) Sunil Gavaskar
 c) PankajAdvani
 d) Major Dhyanchand

22. 18. Which is the highest honour for sportspersons in India? * 1 point

Mark only one oval.

- a) Dronacharya Award
 b) Rajiv Gandhi KhelRatna award
 c) Arjuna award
 d) Dhyanchand award

23. 19. Which freedom fighter from our state Jharkhand is famous by the name “Dharti Aba”? * 1 point

Mark only one oval.

- a) Birsa Munda
 b) Jaipal Singh Munda
 c) Sidhu Murmu
 d) Kanhu Murmu

24. 20. Who was elected as President of USA recently? * 1 point

Mark only one oval.

- a) Joe Biden
 b) Barack Obama
 c) Kamala Harris
 d) George Bush

25. 21. The current pandemic Covid-19 is caused by a ____? * 1 point

Mark only one oval.

- a) Bacteria
 b) Fungi
 c) Virus
 d) Protozoa

26. 22. _____ was an American author who was the first deaf-blind person to get a college degree? * 1 point

Mark only one oval.

- a) Sudha Chandran
 b) Helen Keller
 c) Dr Stephen Hawking
 d) Ludwig Van Beethoven

27. 23. Which of the following is an incorrect match of Indian dance forms with the states they belong to? * 1 point

Mark only one oval.

- a) Mohiniattam – Karnataka
 b) Kathakali – Kerala
 c) Bharatnatyam – Tamil Nadu
 d) Kuchipudi – Andhra Pradesh

28. 24. Find out the incorrect match about the human body: * 1 point

Mark only one oval.

- a) Longest bone – Femur
 b) Smallest muscle is present in our – Ears
 c) Muscles of the Heart are called as – Skeletal muscles
 d) Strongest muscles of our body are present in – The Jaw

29. 25. Which is the hottest planet in our Solar system? *

1 point

Mark only one oval.

a) Mercury

b) Venus

c) Pluto

d) Saturn

This content is neither created nor endorsed by Google.

Google Forms