



# DELHI PUBLIC SCHOOL

SAIL Township, Ranchi

SECOND SEMESTER (SESSION-2019-20)

**SUBJECT:** ENGLISH

**DATE :-** 24.02.2020

**CLASS:** – I **Sec:-** \_\_\_\_\_

**M.O. :-** \_\_\_\_\_

**Roll no.:-** \_\_\_\_\_

**F. M. :-** 40

**NAME:-** \_\_\_\_\_

**I. Write the sound made by each animal using help box:** [0.5 x 2 = 1 ]

1. A horse \_\_\_\_\_.

*chatters, neighs,*

2. An elephant \_\_\_\_\_.

*trumpets, moos.*

**II. Choose and write the babies of animals.** [0.5 x 2 = 1 ]

1. The baby kangaroo is called \_\_\_\_\_.

- a) piglet            b) lamb            c) chick            d) joey

2. The baby horse is called \_\_\_\_\_.

- a) foal            b) kid            c) calf            d) kitten

**III. Rewrite the sentences using capital letters and full stops:-** [ 1 x 2 = 2 ]

a) bought / I / dress / a / for / party / new / the

\_\_\_\_\_

b) reading / mystery / to / enjoy / I / books / like

\_\_\_\_\_

**IV. Write the collective nouns using help box:** [0.5 x 2 = 1 ]

1. camels \_\_\_\_\_.

*troop, caravan,*

2. monkeys \_\_\_\_\_.

*army, pride.*

**V. Complete the word pairs with the help box:** [0.5 x 2 = 1 ]

1. singers and \_\_\_\_\_.

*needle, paper,*

2. shoes and \_\_\_\_\_.

*socks, musicians.*

**VI. Fill in the blanks with in or on.**

[0.5 x 2 = 1]

1. The book is \_\_\_\_\_ the table.
2. I saw many wild animals \_\_\_\_\_ the jungle.

**VII. Make sentences.**

[ 1 x 5 = 5 ]

- a) castles - \_\_\_\_\_
- b) pity - \_\_\_\_\_
- c) chirping - \_\_\_\_\_
- d) different - \_\_\_\_\_
- e) power - \_\_\_\_\_

**VIII. Match the words with their meaning.**

[ 0.5 x 4 = 2 ]

- |             |                           |                          |
|-------------|---------------------------|--------------------------|
| a) extinct  | 1. valuable               | <input type="checkbox"/> |
| b) massive  | 2. no longer in existence | <input type="checkbox"/> |
| c) precious | 3. very cold              | <input type="checkbox"/> |
| d) icy      | 4. large                  | <input type="checkbox"/> |

**IX. Underline the describing words in these sentences :**

[ 0.5 x 2 = 1 ]

1. My parents bought a silver car.
2. My father is tall.

**X. Join the two sentences using and :**

[ 1 x 2 = 2 ]

1. The sisters dance well. The sisters sing well.
- \_\_\_\_\_

2. I love to swim. I love to play basket ball.
- \_\_\_\_\_

**XI. Answer in one sentence :**

[ 1 x 3 = 3 ]

- Q1. What leads inside in the poem "On My Blackboard" ?

Ans.- \_\_\_\_\_

\_\_\_\_\_

Q2. Where did the three Billy goats live?

Ans.- \_\_\_\_\_

Q3. What is the speaker building on the floor?

Ans.- \_\_\_\_\_

**XII. Write five lines on any one : Sports Day / My School Garden**

**[ 1 x 5 = 5 ]**

\_\_\_\_\_

\_\_\_\_\_

\_\_\_\_\_

\_\_\_\_\_

\_\_\_\_\_

\_\_\_\_\_

\_\_\_\_\_

\_\_\_\_\_

\_\_\_\_\_

\_\_\_\_\_

**XIII. Think and write the answer:**

**[ 2 x 3 = 6 ]**

Q1. Why is time so precious?

Ans.- \_\_\_\_\_

Q2. Why were the ants happy in winter?

Ans.- \_\_\_\_\_

Q3. Why did the last duckling look different from its brothers and sisters?

Ans.- \_\_\_\_\_

**XIV. Solve the riddles to find the name of these animals :**

[ 1 x 2 = 2 ]

a) Animal with antlers \_\_\_\_\_.

b) Animal with quills \_\_\_\_\_.

**XV. Write the opposite for the words given below:**

[ 0.5 x 4 = 2 ]

a) bottom X \_\_\_\_\_ b) sharp X \_\_\_\_\_

c) absent X \_\_\_\_\_ d) clean X \_\_\_\_\_

**XVI. Read the passage carefully and answer the questions.**

[ 0.5 x 10 = 5 ]

Raj is Ravi's best friend. He is getting ready to go to Ravi's birthday party in the evening. Raj's cousin, Ria has also come to visit Raj. So he asked Ria to come along with him for the birthday party. Raj bought a toy car as a birthday gift for Ravi. He wants to wrap it in blue colour paper. He knows that blue is Ravi's favourite colour. But he can't find any blue paper. Raj is sad. Ria gave her blue scarf to wrap the gift. Raj is delighted. Raj says bye to his mother and goes to the party with Ria.



**I. Answer in one word.**

a. Write two describing words from the passage.

1) \_\_\_\_\_ 2) \_\_\_\_\_

b. Where is Raj going in the evening?

\_\_\_\_\_

c. What gift Raj has for Ravi?

\_\_\_\_\_

d. Which is Ravi's favourite colour?

\_\_\_\_\_

II. Write the opposite gender of :

father X \_\_\_\_\_

III. Write the opposite of :

a. best X \_\_\_\_\_ b. bought X \_\_\_\_\_

IV. Write the meaning of :

a. delighted: \_\_\_\_\_ b. wrap : \_\_\_\_\_



# DELHI PUBLIC SCHOOL

SAIL Township, Ranchi

SECOND SEMESTER (SESSION-2019- 20)

**SUBJECT:** EVS

**CLASS:** – I **Sec:-** \_\_\_\_\_

**Roll no.:-** \_\_\_\_\_

**DATE :-** 27.02.2020

**M.O. :-** \_\_\_\_\_

**F. M. :-** 40

**NAME:-** \_\_\_\_\_

**I. Name them:** [0.5 x 10 = 5 ]

1. The holy book of the Sikhs.

→ \_\_\_\_\_

2. Which animal pulls the sledge of Santa Claus?

→ \_\_\_\_\_

3. A harvest festival.

→ \_\_\_\_\_

4. An insect with eight legs.

→ \_\_\_\_\_

5. National Song of India.

→ \_\_\_\_\_

6. One insect

→ \_\_\_\_\_

7. Two wild animals

→ \_\_\_\_\_

8. They twinkle in the sky at night.

→ \_\_\_\_\_

9. When the shape of the moon is like a ball.

→ \_\_\_\_\_

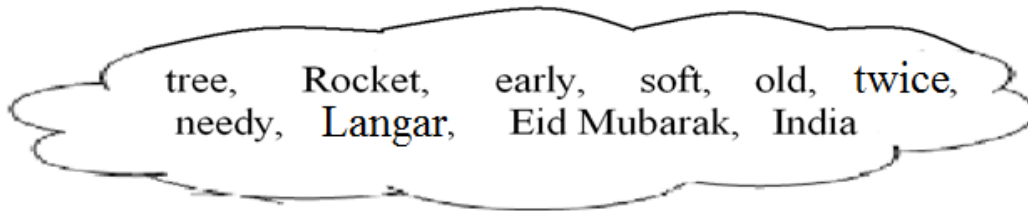
**II. Match the following :**

[0.5 x 6 = 3]

- |                      |                              |                          |
|----------------------|------------------------------|--------------------------|
| 1. Christmas         | a) sheep                     | <input type="checkbox"/> |
| 2. India became free | b) ostrich                   | <input type="checkbox"/> |
| 3. Sewain            | c) blue whale                | <input type="checkbox"/> |
| 4. largest animal    | d) Eid                       | <input type="checkbox"/> |
| 5. flightless bird   | e) Independence Day          | <input type="checkbox"/> |
| 6. wool              | f) 25 <sup>th</sup> December | <input type="checkbox"/> |

**III. Fill in the blanks using the help box.**

[0.5 x 10 = 5]



1. \_\_\_\_\_ is a free meal served in a Gurudwara.
2. People wish each other \_\_\_\_\_ on Eid.
3. \_\_\_\_\_ became a Republic on 26th January 1950.
4. Help the \_\_\_\_\_ and \_\_\_\_\_ people.
5. Brush your teeth \_\_\_\_\_ a day.
6. Get up \_\_\_\_\_ in the morning.
7. Plants that have \_\_\_\_\_ stems are called herbs.
8. A monkey lives on a \_\_\_\_\_.
9. \_\_\_\_\_ can take the spaceship to the moon.

**IV. Unscramble the following words.**

[0.5 x 6 = 3]

1. E F I S L A V S T - \_\_\_\_\_
2. U E Q O M S - \_\_\_\_\_
3. L P A E S E - \_\_\_\_\_
4. R O S R Y - \_\_\_\_\_
5. O F R E T S - \_\_\_\_\_
6. I N A R O B W - \_\_\_\_\_

**V. Write 'True' or 'False' .**

[0.5 x 8 = 4]

1. We should not tease animals. → \_\_\_\_\_
2. We should always quarrel with others. → \_\_\_\_\_
3. We should wake up early in the morning. → \_\_\_\_\_
4. Mint is a shrub. → \_\_\_\_\_
5. Lord Jesus returned home on Diwali. → \_\_\_\_\_
6. 'Shrubs' are also called 'bushes'. → \_\_\_\_\_
7. Animals make their own food. → \_\_\_\_\_
8. Rabbit is a wild animal. → \_\_\_\_\_

**VI. Define:**

[ 1 x 3 = 3 ]

1. trees - \_\_\_\_\_  
\_\_\_\_\_
2. creepers - \_\_\_\_\_  
\_\_\_\_\_
3. herbs - \_\_\_\_\_  
\_\_\_\_\_

**VII. Write the examples of these in the given boxes.**

[ 0.5 x 4 = 2 ]

Religious festival	National festival
1. _____	1. _____
2. _____	2. _____

**VIII. Circle the correct answer:**

[ 0.5 x 4 = 2 ]

1. Children's Day is celebrated on **14<sup>th</sup> November** / **2<sup>nd</sup> October** in India.
2. Rabbit and fish are **wild** / **pet** animals.
3. A **crow** / **cockroach** has six legs.
4. A **zebra** / **housefly** lives in a forest.

**IX. Answer these questions:**

Q1. Write two good manners and habits.

[ 2 ]

Ans. \_\_\_\_\_  
\_\_\_\_\_  
\_\_\_\_\_

Q2. How do plants make their food?

[ 2 ]

Ans. \_\_\_\_\_  
\_\_\_\_\_  
\_\_\_\_\_

Q3. Why do stars appear small?

[ 1 ]

Ans. \_\_\_\_\_  
\_\_\_\_\_  
\_\_\_\_\_



Q4. How will you stop people from cutting down the trees and why ? [1.5]

Ans. \_\_\_\_\_  
\_\_\_\_\_  
\_\_\_\_\_

Q5. Name two stray animals and how will you take care of them ? [1.5]

Ans. \_\_\_\_\_  
\_\_\_\_\_  
\_\_\_\_\_

**X. Name these:** [ 0.5 x 4 = 2 ]

- a) Plant with medicinal properties, found in homes and often worshipped → \_\_\_\_\_
- b) National tree of India → \_\_\_\_\_
- c) Plant which gives oil for cooking → \_\_\_\_\_
- d) I come out in season of rain. I live both on land and water. I am found near ponds.  
Who am I ? → \_\_\_\_\_.

**XI. Draw, colour and label any four parts of a plant.** [ 0.5 + 0.5 + 2 = 3 ]



# DELHI PUBLIC SCHOOL

SAIL Township, Ranchi

SECOND SEMESTER (SESSION-2019- 20)

**SUBJECT:** HINDI

**CLASS:** – I **Sec:-** \_\_\_\_\_

**Roll no.:-** \_\_\_\_\_

**DATE :-** 02.03.2020

**M.O. :-** \_\_\_\_\_

**F. M. :-** 40

**NAME:-** \_\_\_\_\_

**I. सही(✓) उत्तर चुनो :** [ 0.5 x 4 = 2 ]

1. किसकी टाँग टूट गई?

चिड़िया की  खिलौने की  चिड़े की

2. छुक-छुक छुक-छुक

चलती रेल  थकती रेल  रूकती रेल

3. जब सच में शेर आ गया तब क्या हुआ?

गाँव वालों ने उसे भगा दिया

दीनू ने उसे भगा दिया

कोई भी दीनू की मदद के लिए नहीं आया

4. टिन्नी एक क्या थी?

चिड़िया  बतख  मुरगी

**II. सही वचन चुनकर सही (✓) का चिह्न लगाओ :** [ 0.5 x 4 = 2 ]

1. अपना – ( अपने/आपने )      2. टोपी – ( टोपीयाँ /टोपियाँ )

3. चिड़िया– ( चीड़ीयाँ/चिड़ियाँ )      4. आँख – ( आखें /आँखें )

**III. इन शब्दों के अनेक नाम लिखें –** [ 0.5 x 4 = 2 ]

1. चाँद – .....

2. कमल – .....

IV. अधूरे वाक्यों को मिलान करें :

[ 0.5 x 4 = 2 ]

क) चिड़ा डरते-डरते

1. थकती रेल।

ख) देखो कभी न

2. झूले पर चढ़ा।

ग) वे लाठियाँ लेकर

3. निकाले और घर ले गई।

घ) टिन्नी ने दाने

4. दौड़े आए।

V. इन शब्दों को सही क्रम में लिखकर वाक्य बनाओ :-

[ 1 x 2 = 2 ]

1. नाव में नदी रही है चल

उत्तर - .....

2. कूद है बंदर पेड़ पर रहा

उत्तर - .....

VI. चुनकर शब्दों के अंक लिखें:-

9३, ६, ४, १, ५,

[ 0.5 x 4 = 2 ]

1. पाँच - .....

2. छह - .....

3. चार - .....

4. तेरह - .....

VII. इन शब्दों के लिंग बदलें :

[ 0.5 x 4 = 2 ]

1. औरत - .....

2. भाई - .....

3. बैल - .....

4. लड़की - .....

VIII. वाक्य बनाओ :-

[ 1 x 5 = 5 ]

1. भूख - .....

2. बीमार - .....

3. आवाज़ - .....

4. झूठ - .....

5. सरदी - .....

**IX. कविता पूरा करो:**

[ 0.5 x 4 = 2 ]

..... या बरसात,  
..... यह दिन रात।

**X. प्रश्नों का उत्तर एक शब्द में दें।**

[ 0.5 x 4 = 2 ]

1. चूँ-चूँ चूहा और गिहू तोता क्या थे ? .....
2. किसकी टाँग टूट गई ? .....
3. दीनू क्या चराने गाँव के बाहर जाता था? .....
4. रेलगाड़ी कैसे चलती है? .....

**XI. किसने किससे कहा :**

[ 0.5 x 4 = 2 ]

1. मैं तो बीमार हूँ।  
..... ने ..... से
2. यह लड़का रोज़ झूठ बोलता है।  
..... ने ..... में

**XII. प्रश्नों के उत्तर लिखें:**

[ 1.5 x 4 = 6 ]

1. चिड़िया ने क्या कहा ?

उत्तर— .....

2. 'रेलगाड़ी' कविता में किन – किन ऋतुओं की बात आई है?

उत्तर— .....

3. पहली बार दीनू की आवाज़ सुनकर किसानों ने क्या किया ?

उत्तर— .....

4. चूँ –चूँ और गिटू को खाना क्यों नहीं मिला ?

उत्तर- .....

**XIII. 'तोता' अथवा 'होली' पर चार वाक्य लिखें:**

**[ 1 x 4 = 4 ]**

.....

.....

.....

.....

.....

.....

.....

.....

.....

**XIV. दिए गए गद्यांश को पढ़कर प्रश्नों के उत्तर दें।**

एक जंगल था, उसमें हाथियों का एक झुंड रहता था। एक बार बहुत दिनों तक वर्षा नहीं हुई, तो उस जंगल में पानी की कमी हो गई। नदी नाले सूख गए। हाथियों ने परेशान होकर जंगल के चारों ओर खोज की तो बहुत दूर स्वच्छ पानी का एक तालाब मिल गया।

क) दो बहुवचन शब्द गद्यांश से चुनकर लिखें :-

**[ 0.5 x 2 = 1 ]**

1. .... 2. ....

ख) दो अंक वाले शब्द चुनकर लिखें :-

**[ 0.5 x 2 = 1 ]**

1. .... 2. ....

ग) विलोम शब्द लिखें :-

**[ 0.5 x 2 = 1 ]**

1. दूर X .....

2. बहुत X .....

घ) इन शब्दों के अनेक नाम लिखें।

**[ 0.5 x 4 = 2 ]**

1. स्वच्छ - ..... 2. जंगल - .....

3. पानी - ..... 4. वर्षा - .....



# DELHI PUBLIC SCHOOL

SAIL Township, Ranchi

SECOND SEMESTER (SESSION-2019- 20)

**SUBJECT:** Maths

**DATE :-** 04.03.2020

**CLASS:** – I **Sec:-** \_\_\_\_\_

**M.O. :-** \_\_\_\_\_

**Roll no.:-** \_\_\_\_\_

**F. M. :-** 40

**NAME:-** \_\_\_\_\_

**1. Choose the correct option:**

[ 1 x 10 = 10]

i) Hema had 46 stickers. She gets 33 new stickers. How many stickers does she have now?

- a) 74                       b) 78                       c) 79                       d) 71

ii) There are 6 chairs in a shop. But 2 of them are broken and have only 3 legs each. How many total legs do all the 6 chairs have in all ?

- a) 11                       b) 24                       c) 28                       d) 22

iii) How many lines are used to make the given image?



- a) 8                       b) 3                       c) 4                       d) 6

iv) The shape of a dice is \_\_\_\_\_.

- a) rectangle                       b) cube                       c) cuboid                       d) cone

v) Sam buys a pencil for ₹ 5, a box for ₹ 10, an eraser for ₹ 8 and a colour box for ₹ 30. Find the total money he spends on buying all the items.

- a) 54                       b) 56                       c) 53                       d) 48

vi) Complete the sequence.

16, 32, \_\_\_\_\_, 64

- a) 58                       b) 55                       c) 48                       d) 52


vii)  $9 \times \underline{\hspace{2cm}} = 81$

a)  $5 \square$

b)  $6 \square$

c)  $9 \square$

d)  $7 \square$



viii)

There are 4 fans. Each fan has 3 blades.  $\underline{\hspace{2cm}} \times \underline{\hspace{2cm}} = \underline{\hspace{2cm}}$  blades in all. (Choose the correct order)

a) 3, 4, 12

b) 12, 3, 4

c) 4, 3, 12

d) 12, 4, 3

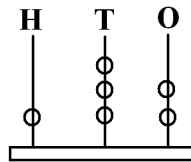
ix)  $184 = \underline{\hspace{2cm}}$  hundred +  $\underline{\hspace{2cm}}$  tens +  $\underline{\hspace{2cm}}$  ones

a) 1 hundred + 80 tens + 4 ones

b) 1 hundred + 80 tens + 40 ones

c) 1 hundred + 8 tens + 4 ones

d) 1 hundred + 4 tens + 8 ones



x)

a) 148

b) 143

c) 132

d) 130

**2. Fill in the blanks:**

[0.5 x 10 = 5]

a)  $48 + 22 = \square$  tens.

b)  $32 - 16 = \square$  tens +  $\square$  ones.

c) The long hand of the clock shows the  $\underline{\hspace{2cm}}$  hand.

d) A leap year has  $\underline{\hspace{2cm}}$  months.

e)  $\underline{\hspace{2cm}}$  comes just before May.

f)  $\underline{\hspace{2cm}}$  comes just after Thursday.

g) Rupee 1 =  $\underline{\hspace{2cm}}$  paise.

h) The shape of a ball is  $\underline{\hspace{2cm}}$ .

i) The numeral for the number name four hundred fifty nine is  $\underline{\hspace{2cm}}$ .

j) Ten more than 69 is  $\underline{\hspace{2cm}}$ .

3. Read the calendar and answer the question.

[0.5 x 4 = 2]


## February 2020

Sunday	Monday	Tuesday	Wednesday	Thursday	Friday	Saturday
						<b>1</b>
<b>2</b>	<b>3</b>	<b>4</b>	<b>5*</b> Sam's Birthday	<b>6</b>	<b>7</b>	<b>8</b>
<b>9</b>	<b>10</b>	<b>11</b>	<b>12</b>	<b>13</b>	<b>14</b>	<b>15*</b> My result
<b>16</b>	<b>17</b>	<b>18</b>	<b>19</b>	<b>20</b>	<b>21</b>	<b>22</b>
<b>23</b>	<b>24</b>	<b>25</b>	<b>26</b>	<b>27</b>	<b>28</b>	<b>29</b>


- a) Next month will have \_\_\_\_\_ days.
- b) There are \_\_\_\_\_ Fridays this February.
- c) The day just after my result is \_\_\_\_\_.
- d) The next Wednesday after Sam's birthday is on \_\_\_\_\_ February.

4. Draw the hands to show the time.

[0.5 x 4 = 2]



**6:00 ( 6 o'clock)**



**4:00 ( 4 o'clock)**

5. Add:

[ 1 x 2 = 2 ]

$$\begin{array}{r} 2 \quad 7 \\ + 1 \quad 8 \\ \hline \end{array}$$

$$\begin{array}{r} 6 \quad 9 \\ + 1 \quad 7 \\ \hline \end{array}$$

6. Subtract.

[ 1 x 2 = 2 ]

$$\begin{array}{r} 3 \quad 4 \\ - 1 \quad 9 \\ \hline \end{array}$$

$$\begin{array}{r} 8 \quad 0 \\ - 4 \quad 8 \\ \hline \end{array}$$





**16. Money Sums.**



**64 rupees**

**46 rupees**

**3 rupees**

**28 rupees**

I. How much do they cost together ?

a) Ice-cream and Jam

[ 1 ]

b) How much will you get by subtracting cost of an ice-cream from the cost of a car. [ 1 ]

c) If you have Rs. 74. Then the two items that you can purchase are \_\_\_\_\_  
and \_\_\_\_\_.

[ 1 ]

**17. Jai had 35 balloons. His friends took away 24 balloons. How many balloons are left now.**

[ 0.5 x 3 = 1.5 ]

	T	O



# DELHI PUBLIC SCHOOL

SAIL Township, Ranchi

SECOND SEMESTER (SESSION-2019-20)

**SUBJECT:** General Knowledge

**DATE :-** 17.02.2020

**CLASS: – I Sec:-** \_\_\_\_\_

**M.O. :-** \_\_\_\_\_

**Roll no.:-** \_\_\_\_\_

**F. M. :- 25**

**NAME:-** \_\_\_\_\_

**I. Tick the correct options :-**

[ 0.5 x 5 = 2.5 ]

1. A panda likes to eat?

- a) apples      b) bananas      c) bamboo

2. Who is the master of **Po** in the film Kung Fu Panda?

- a) Mr. Ping      b) Shifu      c) Oogway

3. To which state does Sandesh, a popular sweet belong?

- a) West Bengal      b) Kerala      c) Jammu

4. On Independence day, where does our Prime Minister hoist the national flag?

- a) Raj Bhawan      b) Red Fort      c) India Gate

5. What are camels also called?

- a) ships of the desert      b) wonders of the desert      c) rats of the desert

**II. Identify these famous faces and match it with the given names:**

[0.5 x 4 = 2 ]

1.



a) Mother Teresa

2.




b) A.P.J. Abdul Kalam

3.



c) Amitabh Bachchan

4.



d) Rabindranath Tagore

**III. Fill in the blanks using the help box :**

[0.5 x 6 = 3 ]

*Mahatma Gandhi, mixer grinder, century, Dhyan Chand, geyser, spices*

1. A hundred years make a \_\_\_\_\_.
2. \_\_\_\_\_ led the struggle for freedom from the British rule in India. He is also called the father of the nation.
3. Indian hockey player \_\_\_\_\_ is considered one of the greatest players of all time.
4. \_\_\_\_\_ helps in making chutney and shakes.
5. Kerala is the leading producer of \_\_\_\_\_ in India.
6. \_\_\_\_\_ provides us hot water.

**IV. Identify the pictures and answer using the help box:**

[ 0.5 x 5 =2. 5 ]

*violin, plateau, drums, desert, guitar*

1. You are standing on a raised flat land. You are on a \_\_\_\_\_.
2. To play me, pluck my strings, my lovely music will make you sing. I am a \_\_\_\_\_.
3. You are at a place which is very hot and dry and you can hardly see any plants around. You are in a \_\_\_\_\_.
4. When you draw a bow across my strings the sweetest melody for you I bring. I Am a \_\_\_\_\_.
5. Doom, doom, doom as you bang. I come alive and make you dance. I am a \_\_\_\_\_.

V. Match the signs with what they say:

[0.5 x 5 = 2.5 ]



a) Parking



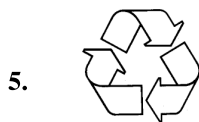
b) Hospital



c) No Parking



d) Recycle



e) Wheelchair

VI. Answer the questions using the help box :

[0.5 x 6 = 3 ]

*pattern, chef, 31st December, hands, khadi, 1st January*

5) On which part of the body will you find knuckles ? - \_\_\_\_\_

6) What is a professional cook called? - \_\_\_\_\_

7) What kind of cloth is mostly used to make the national flag ? - \_\_\_\_\_

8) On which date do we celebrate New Year's Eve? - \_\_\_\_\_

9) On which date do we celebrate New Year's Day? - \_\_\_\_\_

10) What is a design that is repeated and is used to decorate something called? -

\_\_\_\_\_

**VII. Read the clues and fill in the blanks:**

[ 1 x 5 = 5 ]

5) Sydney Opera House is situated here –

A \_\_\_\_\_ S T R \_\_\_\_\_ L \_\_\_\_\_ A

6) This colour of the Indian Flag stands for courage and sacrifice -

S \_\_\_\_\_ \_\_\_\_\_ F \_\_\_\_\_ O N

7) Petronas Tower is situated here -

M \_\_\_\_\_ L A \_\_\_\_\_ S \_\_\_\_\_ A

8) Buckingham Palace is situated here –

E \_\_\_\_\_ G L \_\_\_\_\_ N D

9) This is the fastest animal in the world –

C \_\_\_\_\_ E E \_\_\_\_\_ A \_\_\_\_\_

**VIII. Write True or False :**

[0.5 x 4 = 2 ]

1) Pratibha Patil was the first woman President of India.

2) The Ostrich is the smallest bird in the world.

3) Turtles shed their shells every year.

4) The fear of crossing the road is called aerophobia.

**IX. Tick the correct options :**

[0.5 x 5 = 2.5 ]

1) Who was India's first female teacher?

a) Mother Teresa

b) Indira Gandhi

c) Savitribai Phule

2) Bharatnatyam is a dance form from which state of India?

a) Maharastra

b) Assam

c) Tamil Nadu

3) Which is the tallest statue in India ?

a) Statue of Fraternity

b) Statue of Liberty

c) Statue of Unity

4) How will you relate your maternal grandfather with yourself?

a) your father's father

b) your mother's father

c) your mother's grandfather

5) Who is the new Chief Minister of Jharkhand?

a) Narendra Modi

b) Hemant Soren

c) Raghubar Das



# DELHI PUBLIC SCHOOL

SAIL Township, Ranchi

**SECOND SEMESTER (SESSION-2019-20)**

**SUBJECT:** Computer

**DATE :-** 19.02.2020

**CLASS: - I      Sec:-** \_\_\_\_\_

**M.O. :-** \_\_\_\_\_

**Roll no.:-** \_\_\_\_\_

**F. M. :-** 20

**NAME:-** \_\_\_\_\_

**Q1. Choose the correct option:-** **[0.5 X 4 = 2]**

- a) How many buttons are there in a mouse?  
i) 1       ii) 4       iii) 5       iv) 2
- b) What is the shape of a pendrive ?  
i) Semi circle       ii) Square       iii) Rectangle       iv) Triangle
- c) Which key is used to type text in capital letter ?  
i) Enter Key       ii) Capslock Key       iii) Arrow Key       iv) Spacebar key
- d) How many alphabet keys are there in a keyboard?  
i) 20       ii) 24       iii) 25       iv) 26

**Q2. Fill in the blanks:-** **[0.5 X 5 = 2.5]**

*Spacebar key, input, enter, DVD, eraser*

- a) A \_\_\_\_\_ looks similar to a CD.
- b) To move to a new line in a paragraph press the \_\_\_\_\_ key.
- c) The \_\_\_\_\_ tool is used to erase any part of a drawing.
- d) \_\_\_\_\_ is the longest key on the keyboard .
- e) Mouse is an \_\_\_\_\_ device.

**Q3. Match the following related with mouse :-** **[0.5 X 4 = 2]**

- |  |                  |                          |
|--|------------------|--------------------------|
| a) To move an object from one location to another.                             | i) click         | <input type="checkbox"/> |
| b) Pressing the left mouse button twice , very quickly and releasing it.       | ii) scroll wheel | <input type="checkbox"/> |
| c) To move page up and down.   | iii) drag        | <input type="checkbox"/> |
| d) Pressing the left mouse button once with the index finger and releasing it. | iv) double click | <input type="checkbox"/> |

**Q4. Write the full form of these :-** **[1 X 2 = 2]**

- a) CD - \_\_\_\_\_
- b) DVD - \_\_\_\_\_

**Q5. Write True or False for the following :-** **[0.5 X 5 = 2.5]**

- a) Keep your index finger on the left button of the mouse. \_\_\_\_\_
- b) You can carry your pendrive with yourself. \_\_\_\_\_
- c) We cannot increase the size of the eraser. \_\_\_\_\_
- d) A pendrive has less space than a hard disk. \_\_\_\_\_
- e) There are six arrow keys present on the keyboard. \_\_\_\_\_

