



# DELHI PUBLIC SCHOOL

SAIL Township, Ranchi

SECOND SEMESTER (SESSION-2017-18)

**SUBJECT:** ENGLISH

**DATE :-** 07.03.2018

**CLASS:** – PREP      **Sec:-** \_\_\_\_\_

**M.O. :-** \_\_\_\_\_

**Roll no.:-** \_\_\_\_\_





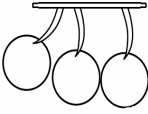
**F. M. :-** 40

**NAME:-** \_\_\_\_\_

**I. Write two words each for the given sounds:** [0.5 x 10=5]

- a) sh – \_\_\_\_\_
- b) ch – \_\_\_\_\_
- c) ng – \_\_\_\_\_
- d) ut – \_\_\_\_\_
- e) et – \_\_\_\_\_

**II. Name them:** [1 x 5 = 5]

- a)  – \_\_\_\_\_
- b)  – \_\_\_\_\_
- c)  – \_\_\_\_\_
- d)  – \_\_\_\_\_
- e)  – \_\_\_\_\_

**III. Choose and write:** [1 x 5 = 5]

- a) Cars are means of \_\_\_\_\_ transport. ( land / water)
- b) Lion is a \_\_\_\_\_ animal. ( wild / pet )
- c) \_\_\_\_\_ is a water sport. ( swimming / dancing)
- d) Whale is a \_\_\_\_\_ animal. ( land / water)
- e) Aeroplanes are means of \_\_\_\_\_ transport. ( water / air)

**IV. Fill in the missing letters:** [0.5 x 14 =7]

- a) W H \_\_\_\_\_ L E
- b) D \_\_\_\_\_ L P H I \_\_\_\_\_
- c) R O \_\_\_\_\_ I N \_\_\_\_\_
- d) S \_\_\_\_\_ R F \_\_\_\_\_ N G
- e) S \_\_\_\_\_ I M M I \_\_\_\_\_ G
- f) F I \_\_\_\_\_ H I N \_\_\_\_\_
- g) O C \_\_\_\_\_ O P U \_\_\_\_\_
- h) S T A \_\_\_\_\_ F I S H

**P.T.O.**

**V. Write two means of :**

[1 x 4 = 4]

a) Water transport – \_\_\_\_\_

b) Land transport – \_\_\_\_\_

**VI. Riddle time:**

[1 x 2 = 2]

a) You need me when you write something wrong. Tell me who am I? - \_\_\_\_\_

b) The word that you must say when someone gives you something. - \_\_\_\_\_

**VII. Name them:**

[0.5 x 4 = 2]

a) Two pet animals – \_\_\_\_\_

b) Two wild animals – \_\_\_\_\_

**VIII. Write five lines about 'My School'.**

[1 x 5 = 5]

1. \_\_\_\_\_

2. \_\_\_\_\_

3. \_\_\_\_\_

4. \_\_\_\_\_

5. \_\_\_\_\_

**IX. Picture Composition:**

[1 x 5 = 5]



*sun, birds, park,  
ball, mango*

a) This is a picture of a \_\_\_\_\_.

b) The \_\_\_\_\_ is shining brightly.

c) \_\_\_\_\_ are flying in the sky.

d) There are many \_\_\_\_\_ trees in the park.

e) A boy is playing with a \_\_\_\_\_.



# DELHI PUBLIC SCHOOL

SAIL Township, Ranchi

SECOND SEMESTER (SESSION-2017-18)

**SUBJECT:** Hindi

**CLASS:** – PREP

**Sec:-** \_\_\_\_\_

**DATE :-** 05.03.2018

**M.O. :-** \_\_\_\_\_


**Roll no.:-** \_\_\_\_\_


**F. M. :-** 40


**NAME:-** \_\_\_\_\_

1. चित्र देखकर नाम लिखें –

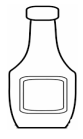
[ 1 x 6 = 6 ]


क)  – \_\_\_\_\_

घ)  – \_\_\_\_\_

ख)  – \_\_\_\_\_

ङ)  – \_\_\_\_\_

ग)  – \_\_\_\_\_

च)  – \_\_\_\_\_

2. समूह से अलग शब्द पर गोला लगाएँ –

[0.5 x 8 = 4 ]

- |           |       |        |        |
|-----------|-------|--------|--------|
| क) मेवा,  | रेखा, | कठोर,  | सेना   |
| ख) बैर,   | लौट,  | थैला,  | मैदा   |
| ग) ओर,    | रोक,  | मंगल,  | मोर    |
| घ) चौड़ा, | सौदा, | मौका,  | गाँव   |
| ङ) नमः,   | छाँव, | कहाँ,  | आँगन   |
| च) पंख,   | खेल,  | चंदन,  | अंदर   |
| छ) रौनक,  | फौज,  | मैदान, | चौक    |
| ज) चंपक,  | कंगन, | टाँग   | सुंदर, |

3. एक जैसे शब्द लिखें –

[ 1 x 6 = 6 ]

क) पैसा – \_\_\_\_\_

ख) वहाँ – \_\_\_\_\_

ग) अंग – \_\_\_\_\_

4. सही मात्रा चुनकर शब्द पूरा करें –

[0.5 x 8 = 4 ]

क) न.....कर ( ौ / े )

ङ) स...त रा ( े / ु )

ख) दा त ( े / ु )

च) ट.....क री ( ु / े )

ग) ता र ( ु / ु )

छ) ब...द र ( ु / ु )

घ) प्रात..... ( : / ु )

ज) सा प ( ु / ु )

P.T.O.

5. दी गई मात्राओं से दो-दो शब्द बनाएँ -

[1 x 6 = 6]

- क) ॐ \_\_\_\_\_
- ख) ॐ \_\_\_\_\_
- ग) ॐ \_\_\_\_\_

6. अं ( ं ) की मात्रा से दो फलों के नाम लिखें -

[1 x 2 = 2]

- क) \_\_\_\_\_ ख) \_\_\_\_\_

7. खाली स्थानों में सही शब्द चुनकर भरें -

[1 x 5 = 5]

- क) पेड़ पर \_\_\_\_\_ रहती है। ( मैना, मैना, मेना )
- ख) मोर को मत \_\_\_\_\_। ( पकड़ो, पकड़ा, पकोड़ा )
- ग) \_\_\_\_\_ में एक तोता है। ( पिंजरे, पंजरे, पिंजर )
- घ) नौकर \_\_\_\_\_ पर बैठा है। ( चौके, चौका, चौकी )
- ङ) चंचल अपने \_\_\_\_\_ गया। ( गाँव, गँव, गाँवा )

8. ओ ( े ) की मात्रा से दो पक्षियों के नाम लिखें -

[1 x 2 = 2]

- क) \_\_\_\_\_ ख) \_\_\_\_\_

9. मेल करें -

[0.5 x 8 = 4]



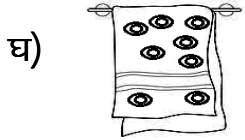
पैसा



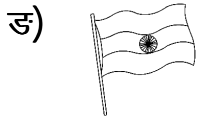
शेर



तौलिया



ढोलक



आँख



तिरंगा



चौदह



बंदूक

10. बूझो तो जानें -

[1 x 1 = 1]

सुबह-सुबह ही आता हूँ दुनिया की खबर सुनाता हूँ। कौन हूँ मैं ? .....



# DELHI PUBLIC SCHOOL

SAIL Township, Ranchi

SECOND SEMESTER (SESSION-2017-18)

**SUBJECT:** Mathematics

**DATE :-** 09.03.2018

**CLASS:** – PREP      **Sec:-** \_\_\_\_\_

**M.O. :-** \_\_\_\_\_

**Roll no.:-** \_\_\_\_\_

**F. M. :-** 40

**NAME:-** \_\_\_\_\_

**I. Match the following:** [0.5 x 4 = 2]

a) triangle



b) cube



c) circle

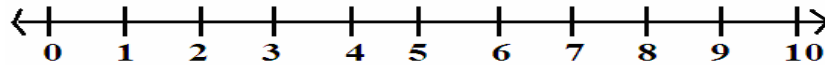


d) square



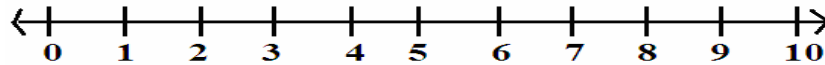
**II. Subtract using number line:** [ 2 x 3 = 6 ]

a) Show  $6 - 4$



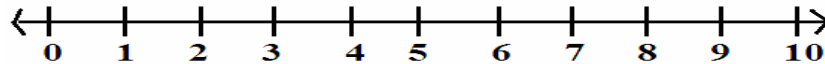
Ans.  $6 - 4 =$  \_\_\_\_\_

b) Show  $5 - 2$



Ans.  $5 - 2 =$  \_\_\_\_\_

c) Show  $7 - 2$



Ans.  $7 - 2 =$  \_\_\_\_\_

**III. Write number names for the following:** [ 1 x 6 = 6 ]

a) 55 - \_\_\_\_\_

b) 28 - \_\_\_\_\_

c) 0 - \_\_\_\_\_

d) 100 - \_\_\_\_\_

e) 45 - \_\_\_\_\_

f) 79 - \_\_\_\_\_

P.T.O.

**IV. Fill in the blanks:**

[1 x 6 = 6]

a)  $50 + 30 =$  \_\_\_\_\_

d)  $70 + 20 =$  \_\_\_\_\_

b)  $80 + 10 =$  \_\_\_\_\_

e)  $10 + 60 =$  \_\_\_\_\_

c)  $10 + 10 =$  \_\_\_\_\_

f)  $40 + 30 =$  \_\_\_\_\_

**V. Which number comes in between:**

[0.5 x 8 = 4]

a) 8 \_\_\_\_\_ 10

e) 87 \_\_\_\_\_ 89

b) 91 \_\_\_\_\_ 93

f) 78 \_\_\_\_\_ 80

c) 45 \_\_\_\_\_ 47

g) 41 \_\_\_\_\_ 43

d) 13 \_\_\_\_\_ 15

h) 37 \_\_\_\_\_ 39

**VI. Subtract:**

[1 x 4 = 4]

$$\begin{array}{r} 7 \\ -2 \\ \hline \end{array}$$

$$\begin{array}{r} 29 \\ -15 \\ \hline \end{array}$$

$$\begin{array}{r} 46 \\ -24 \\ \hline \end{array}$$

$$\begin{array}{r} 15 \\ -12 \\ \hline \end{array}$$

**VII. Write the numbers for the following:**

[1 x 6 = 6]

a) seventy four - \_\_\_\_\_

d) forty one - \_\_\_\_\_

b) twenty seven - \_\_\_\_\_

e) sixty five - \_\_\_\_\_

c) ninety - \_\_\_\_\_

f) thirty nine - \_\_\_\_\_

**VIII. Addition of tens:**

[0.5 x 4 = 2]

a) 5 tens + 4 tens = \_\_\_\_\_ tens

b) 3 tens + 3 tens = \_\_\_\_\_ tens

c) 6 tens + 2 tens = \_\_\_\_\_ tens

d) 2 tens + 1 tens = \_\_\_\_\_ tens

**IX. Fill in the missing letters:**

[0.5 x 4 = 2]

a) E I \_\_\_\_\_ H T \_\_\_\_\_

c) H U \_\_\_\_\_ D R \_\_\_\_\_ D

b) S I X \_\_\_\_\_ Y S \_\_\_\_\_ V E N

d) N I N \_\_\_\_\_ T Y F \_\_\_\_\_ U R

**X. Draw, and label any one shape of your choice:**

[2 x 1 = 2]



# DELHI PUBLIC SCHOOL

SAIL Township, Ranchi

SECOND SEMESTER (SESSION-2017-18)

**SUBJECT:** Environmental Science

**DATE :-** 27.02.2018

**CLASS:** – PREP      **Sec:-** \_\_\_\_\_

**M.O. :-** \_\_\_\_\_

**Roll no.:-** \_\_\_\_\_

**F. M. :-** 40

**NAME:-** \_\_\_\_\_

**1. Choose and write:** **[1 x 10 = 10]**

- a) \_\_\_\_\_ loves to eat flesh. ( cow / lion)
- b) Water is used for \_\_\_\_\_. (cooking / flying)
- c) \_\_\_\_\_ helps us to smell. ( eye / nose)
- d) Brush your \_\_\_\_\_ daily. ( teeth / hands )
- e) Always walk on the \_\_\_\_\_. ( road / footpath )
- f) Food gives us \_\_\_\_\_. ( energy / strong)
- g) We cook food in the \_\_\_\_\_. (bathroom / kitchen)
- h) We wear \_\_\_\_\_ clothes in summer. ( cotton / woollen)
- i) The \_\_\_\_\_ is a ball of fire. ( earth / sun )
- j) A house made up of snow is called an \_\_\_\_\_. ( igloo / hut )

**2. Name them:** **[ 2 x 4 = 8 ]**

- a) Two summer clothes:  
 \_\_\_\_\_, \_\_\_\_\_
- b) Two food items that we get from plants:  
 \_\_\_\_\_, \_\_\_\_\_
- c) Two animals that eat plants:  
 \_\_\_\_\_, \_\_\_\_\_
- d) Two things we use to keep our body clean:  
 \_\_\_\_\_, \_\_\_\_\_

**3. Fill in the missing letters:** **[0.5 x 8 = 4]**

- a) M \_\_\_\_\_ L K
- b) S A \_\_\_\_\_ E T Y
- c) W \_\_\_\_\_ T E R
- d) T E N \_\_\_\_\_
- e) L U \_\_\_\_\_ C H
- f) G \_\_\_\_\_ O V E S
- g) F I \_\_\_\_\_ E
- h) C \_\_\_\_\_ O W

**P.T.O.**

**4. Match the following :**

[1 x 6 = 6]

- |                |              |
|----------------|--------------|
| a) skin        | morning      |
| b) breakfast   | feel         |
| c) giraffe     | twinkle      |
| d) stars       | plants       |
| e) umbrella    | eat food     |
| f) dining room | rainy season |

**5. Write (T) for True and (F) for False:**

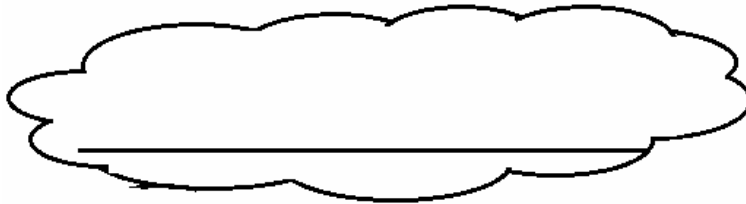
[1 x 6 = 6]

- a) Tiger eats flesh. \_\_\_\_\_
- b) We should waste water. \_\_\_\_\_
- c) Tongue help us to taste. \_\_\_\_\_
- d) We should play with sharp objects. \_\_\_\_\_
- e) We sleep in a bedroom. \_\_\_\_\_
- f) It is safe to play on the road. \_\_\_\_\_

**6. Riddle time :**

[1 x 2 = 2]

- a) I am the blue planet and life is possible on me. Who am I ?



- b) I am a room with T.V. and sofa set where you meet your guests. Who am I ?



**7. Draw, name and colour :**

[ 2 x 2 = 4]

- a) A traffic light

- b) One type of house



