



# DELHI PUBLIC SCHOOL

SAIL Township, Ranchi

SECOND SEMESTER (SESSION-2017-18)

SUBJECT: ENGLISH

DATE :- 07.03.2018

CLASS: - I    Sec:- \_\_\_\_\_

M.O. :- \_\_\_\_\_

Roll no.:- \_\_\_\_\_

F. M. :- 40

NAME:- \_\_\_\_\_

## SECTION – A ( READING)

1. Sara has to go to school. She is very happy. She will be going to class two now. Sara looks for her uniform in the cupboard. She takes it out. She tries on.

A. Choose the best option to complete these sentences:

[1 x 2 = 2]

a) Sara has to go to \_\_\_\_\_

i) the market

ii) school

iii) a picnic

b) Sara will go to class \_\_\_\_\_

i) one

ii) two

iii) three

B. Write the opposite of :

[0.5x 4 = 2 ]

a) happy x \_\_\_\_\_

c) out x \_\_\_\_\_

b) go x \_\_\_\_\_

d) take x \_\_\_\_\_

## SECTION – B ( WRITING AND GRAMMAR)

2. Look at the picture and complete the sentences by circling the correct words: [0.5x6 = 3]



In the evening, Suraj went to the *park / school* near his house. It had a small lotus *pond / sea*.

Suraj sat near the pond with a glum *hand / face*. Something moved in the damp *grass / tree*. It

was a plump green *frog / lotus* staring at Suraj with its big eyes. Suraj picked up the frog gently

and ran *home / school*.

3. Fill in the blanks with suitable describing words from the box:

[1 x 2 = 2]

big, old, hot, long

a) Giraffes have \_\_\_\_\_ neck.

b) An elephant is a \_\_\_\_\_ animal.

4. Fill in the blanks with *a, an* or *the*:

[0.5 x 4 = 2]

- a) Here is \_\_\_\_\_ cookie for you. \_\_\_\_\_ cookie is sweet.  
b) I had \_\_\_\_\_ egg and \_\_\_\_\_ cup of milk for breakfast.

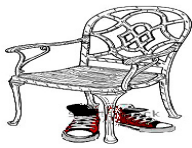
5. Circle the correct option for each sentence:

[0.5 x 6 = 3]

- a) Taran ( bake / bakes) nice cookies.  
b) I ( is / are / am) not good at playing chess.  
c) That man ( is / are / am ) a friend of my father.  
d) All rooms ( have / has) beds in them.  
e) The birds are ( chirp / chirping).  
f) Rita ( has / have) a red dollhouse.


6. Look at the pictures and fill in the blanks with *in, on, near* or *under*:

[0.5 x 3 =1.5]

- a)  The shoes are \_\_\_\_\_ the chair.

- b) The swans are \_\_\_\_\_ the pond.



- c)  The vase is \_\_\_\_\_ the table.

**SECTION – C ( COURSE BOOK)**

7. Answer the questions:

[1.5 x 7 =10.5]

- a) Why each sense is important to us?

Ans.- \_\_\_\_\_  
\_\_\_\_\_  
\_\_\_\_\_

b) Frog uses a clever trick to wake Toad up. What is the trick?

Ans.- \_\_\_\_\_  
\_\_\_\_\_  
\_\_\_\_\_

c) Which places in outer space is the boy going to visit?

Ans.- \_\_\_\_\_  
\_\_\_\_\_  
\_\_\_\_\_

d) Who all go to see Lisandra dance?

Ans.- \_\_\_\_\_  
\_\_\_\_\_  
\_\_\_\_\_

e) Who was scraped from the flour box?

Ans.- \_\_\_\_\_  
\_\_\_\_\_  
\_\_\_\_\_

f) What is snow like when winter is going?

Ans.- \_\_\_\_\_  
\_\_\_\_\_  
\_\_\_\_\_

g) What game did the children play after the clouds went away?

Ans.- \_\_\_\_\_  
\_\_\_\_\_  
\_\_\_\_\_

**8. Make Sentences:**

**[ 1 x 5 = 5 ]**

a) season- \_\_\_\_\_  
\_\_\_\_\_

b) round - \_\_\_\_\_

\_\_\_\_\_

c) excited- \_\_\_\_\_

\_\_\_\_\_

d) trip - \_\_\_\_\_

\_\_\_\_\_

e) knocked - \_\_\_\_\_

\_\_\_\_\_

**9. Write the meanings of :**

**[0.5x 4 = 2]**

a) lonely - \_\_\_\_\_

b) aware - \_\_\_\_\_

c) gobbled- \_\_\_\_\_

d) fluttery- \_\_\_\_\_

**10. Who said to whom:**

**[ 1 x 2 = 2]**

a) "Do bake us a bun, dear !"

\_\_\_\_\_

b) "Run! It's going to rain cats and dogs!"

\_\_\_\_\_

**11. Write five lines on "National Bird" OR "My school Garden"**

**[ 1 x 5 = 5 ]**

\_\_\_\_\_

\_\_\_\_\_

\_\_\_\_\_

\_\_\_\_\_

\_\_\_\_\_

\_\_\_\_\_

\_\_\_\_\_

\_\_\_\_\_



# DELHI PUBLIC SCHOOL

SAIL Township, Ranchi

SECOND SEMESTER (SESSION-2017-18)

**SUBJECT:** ENVIRONMENTAL SCIENCE

**DATE :-** 27.02.2018

**CLASS: - I    Sec:-** \_\_\_\_\_

**M.O. :-** \_\_\_\_\_

**Roll no.:-** \_\_\_\_\_

**F. M. :- 40**

**NAME:-** \_\_\_\_\_

**1. Choose the correct option and fill in the blanks:** [0.5 x 5 = 2.5]

- a) Moving air is called \_\_\_\_\_. ( wind / snow)
- b) \_\_\_\_\_ are bushy in look. ( Shrubs / Trees)
- c) Birds have \_\_\_\_\_ legs. ( four / two)
- d) A \_\_\_\_\_ rings the bell. ( cobbler / peon)
- e) We get milk from \_\_\_\_\_. ( cow / hen)

**2. Name these:** [0.5 x11 = 5.5]

- a) Who uses this :
  - i) Sewing machine:- \_\_\_\_\_
  - ii) Stethoscope:- \_\_\_\_\_
- b) Two national festivals:
  - i) \_\_\_\_\_
  - ii) \_\_\_\_\_
- c) Two means of air transport:
  - i) \_\_\_\_\_
  - ii) \_\_\_\_\_
- d) Two things we use in a rainy day:
  - i) \_\_\_\_\_
  - ii) \_\_\_\_\_
- e) Two birds:
  - i) \_\_\_\_\_
  - ii) \_\_\_\_\_
- f) Fruit with one seed : \_\_\_\_\_

**3. Define these:** [ 1 x 3 = 3 ]

- a) Climbers:- \_\_\_\_\_  
\_\_\_\_\_
- b) Herbs:- \_\_\_\_\_  
\_\_\_\_\_
- c) Trees:- \_\_\_\_\_  
\_\_\_\_\_

4. Classify these animals into following groups:


[0.5 x 6 = 3 ]

Goat, Octopus, Turtle, Crocodile, Fish, Lion


Water Animal	Animals living on both land and water	Land Animal
1.	1.	1.
2.	2.	2.

5. Match the columns:

[0.5 x 5 = 2.5]



i) Crescent Moon



ii) Gibbous Moon



iii) Half Moon



iv) Full Moon



v) New Moon

6. List two things we get from plants:

[0.5 x 2 = 1 ]

i) \_\_\_\_\_ ii) \_\_\_\_\_

7. List two things we get from animals:


[0.5 x 2 = 1 ]

i) \_\_\_\_\_ ii) \_\_\_\_\_

8. Read the clues and guess the name of the helpers shown.

[0.5 x 5 = 2.5]

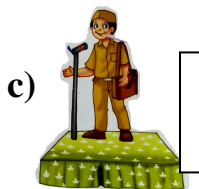

Write the names in the given space:



I treat ill.  
I am a \_\_\_\_\_

b)

I teach children.  
I am a \_\_\_\_\_



I bring letters for you.  
I am a \_\_\_\_\_

d)

I am your home. You call me your mother.  
I am the \_\_\_\_\_



e)



We are plenty in number.  
We twinkle at night.  
We are the \_\_\_\_\_

**9. Choose the correct option and fill in the blanks:**

[0.5 x 5 = 2.5]

- a) A \_\_\_\_\_ sweeps the road. ( sweeper / cobbler )
- b) Pumpkin is a \_\_\_\_\_. ( climber / creeper)
- c) \_\_\_\_\_ is hot ball of fire. ( Moon / Sun )
- d) Honey bee is a \_\_\_\_\_ insect. ( harmful/ useful)
- e) Tiger is a \_\_\_\_\_ animal. ( domestic / wild)

**10. Answer these questions:**

[ 2 x 7 = 14]

- a) How can we take care of “Mother Earth”?

Ans.- \_\_\_\_\_  
\_\_\_\_\_  
\_\_\_\_\_

- b) What are wild animals?

Ans.- \_\_\_\_\_  
\_\_\_\_\_  
\_\_\_\_\_

- c) What does a seed need to grow?

Ans.- \_\_\_\_\_  
\_\_\_\_\_  
\_\_\_\_\_

- d) What type of clothes do we wear on a hot day?

Ans.- \_\_\_\_\_  
\_\_\_\_\_  
\_\_\_\_\_

e) What does an aeroplane need to land on and to take off ?

Ans.- \_\_\_\_\_  
\_\_\_\_\_  
\_\_\_\_\_

f) How do we refresh ourselves?

Ans.- i) \_\_\_\_\_  
ii) \_\_\_\_\_

g) Name two helpers around us.

Ans.- i) \_\_\_\_\_  
ii) \_\_\_\_\_

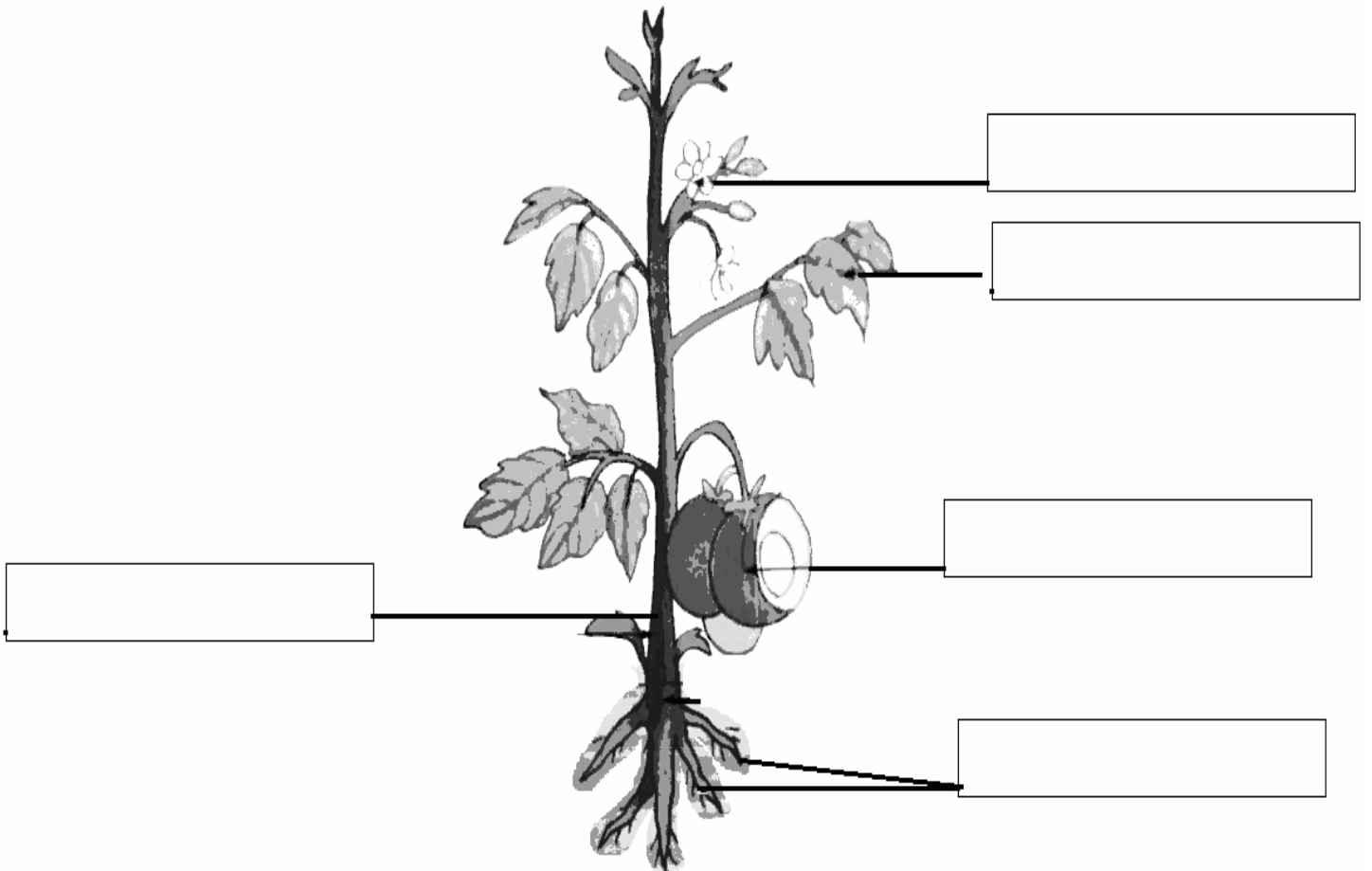
h) Name two water transport.

Ans.- i) \_\_\_\_\_  
ii) \_\_\_\_\_

**11. Label and colour:**

[0.5 x 5 = 2.5]

**Parts of a plant**







# DELHI PUBLIC SCHOOL

SAIL Township, Ranchi

SECOND SEMESTER (SESSION-2017-18)

**SUBJECT:** Hindi

**CLASS:** - I **Sec:-** \_\_\_\_\_

**Roll no.:-** \_\_\_\_\_

**NAME:-** \_\_\_\_\_

**DATE :-** 05.03.2018

**M.O. :-** \_\_\_\_\_

**F. M. :-** 40

1. सही शब्द चुनकर खाली स्थान को भरें –

[ 0.5 x 6 = 3 ]

क) ..... अपना घोंसला नहीं बनाता। ( चिड़िया / कौआ )

ख) पानी की ..... से फलवाला पूरी तरह भीग गया। ( बौछार / तालाब )

ग) मेरे घर का दरवाजा ..... की ओर है। ( पूरब / दक्षिण )

घ) ..... में लो इनकी डोर, इन्हें घुमाओ चारो ओर। ( पैर / मुट्ठी )

ङ) चिड़ियाघर में उन्होंने तरह-तरह के ..... देखे। ( जानवर / खिलौने )

च) फूल-फूल पर, झूल-झूलकर ..... गाते हैं गाना। ( भौरे / चींटी )

2. शब्दों को उनके अर्थ से मिलाएँ –

[ 0.5 x 4 = 2 ]

क) ओझल

राह देखना

ख) स्वर

पानी का बरसना

ग) इंतजार करना

गायब होना

घ) रिमझिम

आवाज़

3. शब्दों को सही क्रम में लिखकर वाक्य बनाएँ –

[ 1 x 2 = 2 ]

क) है नाचता मोर वन में – .....

ख) यश पढ़ है किताब रहा – .....

4. एक शब्द में उत्तर दें –

[ 1 x 3 = 3 ]

क) गुब्बारों को ढेर लेकर कौन आया ?

उत्तर – .....

ख) बादल कैसा जल बरसाएँगे ?

उत्तर – .....

ग) कोयल का स्वर कैसा है ?

उत्तर – .....

5. शब्द एक नाम अनेक –

[ 1 x 2 = 2 ]

क) बाग – .....

ख) पानी – .....

6. सही शब्द चुनकर लिंग बदलें –

[ 0.5 x 4 = 2 ]

क) आदमी – .....

ख) दादा – .....

ग) बैल – .....

घ) शेर – .....

रानी,	औरत
दादी,	नानी,
शेरनी,	गाय

7. सही शब्द चुनकर वचन बदलें –

[ 0.5 x 4 = 2 ]

क) आँख – .....

ख) लड़की – .....

ग) टोपी – .....

घ) केला – .....

चूहे,	केले
चिड़ियाँ,	लड़कियाँ,
टोपियाँ,	आँखें

8. किसने कहा –

[ 1 x 2 = 2 ]

क) आज रविवार है, आज हम घूमने चलेंगे।

– .....

ख) 'पिताजी' समुद्र के किनारे चलिए।

– .....

9. सही उत्तर पर (✓) का चिह्न लगाएँ –

[ 0.5 x 6 = 3 ]

क) घोंसले में चिड़िया क्या देती है ?

बच्चे

अण्डे

दाना

ख) गुब्बारे किससे बंधे हैं ?

डोर से

पत्थर से

अगुली से

ग) फल की दुकान में क्या नहीं थे –

सेब

आम

केले

घ) रेलगाड़ी में कितने डिब्बे थे ?

पाँच

सात

दस

ड) तुषार और शीला क्या लेकर घर लौटे ?

मछलियाँ

सीपियाँ

घोंघे

च) हवा में फूलों की क्या रहती है ?

महक

चाह

चहक

10. प्रश्न / उत्तर :

[ 1.5 x 4 = 6 ]

क) क्या पक्षियों को पिंजरे में रखना अच्छी बात है ?

उत्तर—.....

ख) गोविंद ने फलवाले के ऊपर पानी की बौछार क्यों की ?

उत्तर—.....

ग) रेलगाड़ी किस पर आई ?

उत्तर—.....

घ) तुषार और शीला कहाँ घूमने गए ?

उत्तर—.....

11. 'चिड़ियाघर' / 'राष्ट्रीय पशु' पर पाँच वाक्य लिखें -

[ 1 x 5 = 5 ]

.....

.....

.....

.....

.....

.....

.....

.....

.....

12. चित्र को देखते हुए कहानी पूरी करें –

[ 0.5 x 8 = 4 ]

सही शब्द चुनकर खाली स्थान भरें



भाग, मुँह, मधुर, छीनना, भूखी, लोमड़ी, कौआ, रोटी

एक ..... मुँह में ..... लेकर पेड़ पर बैठा था। उसी समय वहाँ  
एक ..... आई। वह बहुत ..... थी। वह कौए से रोटी  
..... चाहती थी। उसने कहा कौए भैया तुम बहुत ..... गाते हो,  
एक गाना तो सुनाओ। गाना गाने के लिए जैसे ही कौए ने अपना ..... खोला तो रोटी  
गिर गया। लोमड़ी रोटी उठाकर ..... गया।

13. वाक्य बनाएँ –

[ 1 x 4 = 4 ]

क) घोंसला—.....

ख) चित्र –.....

ग) वसन्त –.....

घ) धरती –.....



# DELHI PUBLIC SCHOOL

SAIL Township, Ranchi

SECOND SEMESTER (SESSION-2017-18)

**SUBJECT:** Mathematics

**DATE :-** 09.03.2018

**CLASS: - I Sec:-** \_\_\_\_\_

**M.O. :-** \_\_\_\_\_

**Roll no.:-** \_\_\_\_\_

**F. M. :- 40**

**NAME:-** \_\_\_\_\_

**1. Tick (✓) the correct answer:**

[0.5 x 8 = 4]

i) The short form of  $20 + 9$

a) 39

b) 20

c) 29

d) 92

ii) This tree has



a) 3 triangles, 1 rectangle

b) 3 circles, 1 rectangle

c) 2 triangles, 2 rectangles

d) 1 triangle, 0 rectangle

iii) \_\_\_\_\_ is the sixth month of the year.

a) March

b) April

c) May

d) June

iv)  $7 \times 7 =$  \_\_\_\_\_

a) 69

b) 56

c) 0

d) 49

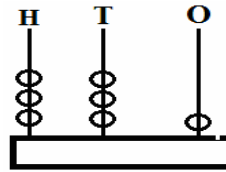
v) The number shown on the abacus -

a) 232

b) 331

d) 436

d) 321



vi) 6 tens and 3 ones is equal to -

a) 53

b) 63

c) 36

d) 73

vii) How many circles are there in the given picture?

a) 7

b) 4

c) 5

d) 2



viii) How many paise make together 2 rupees ?

a) 50 paise

b) 100 paise

c) 500 paise

d) 200 paise

**2. Fill in the blanks:**

[0.5 x 4=2]

i)  $3 \times 8 =$  \_\_\_\_\_

ii)  $2 \times 7 =$  \_\_\_\_\_

iii)  $4 \times 5 =$  \_\_\_\_\_


iv)  $8 \times 2 =$  \_\_\_\_\_

**3. Write the name of following shapes:**

[1 x 3 = 3]

i)  - \_\_\_\_\_

ii)  - \_\_\_\_\_

iii)  - \_\_\_\_\_

**4. Fill in :**

[0.5 x 6 = 3]

a) Number of leaves

4 + 4 = \_\_\_\_\_

2 fours are \_\_\_\_\_

2 x \_\_\_\_\_ = \_\_\_\_\_



b) 3 plants. Each has 5 flowers –

3 x \_\_\_\_\_ = \_\_\_\_\_ flowers in all.



**5. Subtraction with borrowing :**

[ 2 x 2 = 4 ]

a) 

T	O
5	0
- 3	5

b) 

T	O
7	2
- 2	6

**6. Find the total value of coins in each coins:**

[ 1 x 2 = 2 ]

a) 

10Rs.	5Rs.	2Rs.	=		Rupees
-------	------	------	---	--	--------

b) 

10Rs.	10Rs.	5Rs.	2Rs.	2Rs.	=		Rupees
-------	-------	------	------	------	---	--	--------

**7. Story sums:**

[ 2 x 2 = 4 ]

i) Neena has 16 balloons and Reena has 13 balloons. How many balloons do they have in all?

Ans.- \_\_\_\_\_  
 \_\_\_\_\_  
 \_\_\_\_\_  
 \_\_\_\_\_

ii) There are 27 parrots on a tree. 3 of them flew away. How many parrots were left on the tree?

Ans.- \_\_\_\_\_  
 \_\_\_\_\_  
 \_\_\_\_\_  
 \_\_\_\_\_

**8. Continue the pattern:**

[0.5 x 6 = 3]

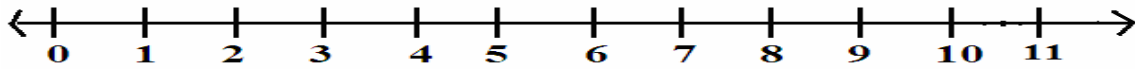
i) 190, 192, 194,

ii) 45, 44, 43,

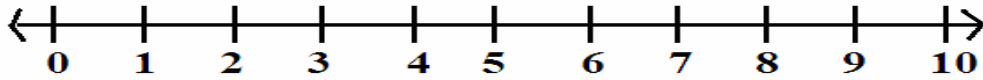
**9. Addition of 3 numbers in a number line:**

[2 x 2 = 4]

a)  $2 + 3 + 5 =$  \_\_\_\_\_



b)  $4 + 2 + 2 =$  \_\_\_\_\_



**10. Read the price tag and fill in –**

[1 x 4 = 4]



Rs. 10



Rs. 20



Rs. 15

a) What is the price of a ball?

Ans.- \_\_\_\_\_  
\_\_\_\_\_

b) What is the total cost of a kite and a toffee ?

Ans.- \_\_\_\_\_  
\_\_\_\_\_

c) Which is the costliest thing?

Ans.- \_\_\_\_\_  
\_\_\_\_\_

**11. Solve the following sums:**

[2 x 2 = 4]

a) Add 45 and 53

b) Subtract 21 from 55

**12. Fill in the blanks:**

[0.5 x 6 = 3]

a) The numeral for the number name sixty seven is \_\_\_\_\_.

b) Two more than 38 is \_\_\_\_\_ tens.

c)  $78$  \_\_\_\_\_  $87$  ( put  $>$  ,  $<$  or  $=$  )

d)  $90 \text{ p.} - 20 \text{ p.} =$  \_\_\_\_\_ p.

e) The number which comes just before 60 is \_\_\_\_\_.

f) Six more than 70 is \_\_\_\_\_.